

Reasoning Ability

Directions (Q. Nos. 1-10) : Study the following English alphabet and answer the questions that follow :

ABCDEFGHIJKLMNOPQRSTUVWXYZ

1. If counting from the left, the order of the first half is reversed, then which letter will be the second to the left of the fourteenth letter from your right?

(a) O (b) C
(c) P (d) D
(e) B

2. Four of the following five are alike in respect to their position in the English alphabet and hence form a group. Which one does not belong to that group?

(a) CHL (b) LXA
(c) RLX (d) SVZ
(e) LOR

3. Which of the following will be tenth to the right of the tenth letter from your left?

(a) U (b) F
(c) T (d) C
(e) None of these

4. In a certain code, 'E' is written as '\$', 'F' is written as '@', 'H' as '<', 'T' as 'Q', 'R' as '!', 'S' as '#', 'Y' as '%'. How is 'FISHERY' written in that code?

(a) = @ < * \$ % (b) = @ # < \$ * %
(c) = @ # \$ < * % (d) = @ # < \$ %
(e) None of these

5. In a certain code language, 'MUSCOVITE' is written as 'KSQEQXGRC'. How will 'PENTHOUSE' be written in that code language?

(a) NCLVJQSOD (b) NCLVIQSQC
(c) NCLVJQRQC (d) NCLVJQSQC
(e) None of these

6. If '+' means '-', '-' means '+', 'x' means '÷' and '÷' means 'x', then what will be the value of $10 + 5 + 2 \times 22 - 11 = ?$

(a) 20 (b) 2
(c) $18\frac{1}{2}$ (d) 4
(e) None of these

7. If 'P + Q' means 'P is the mother of Q', 'P - Q' means 'P is the brother of Q', 'P × Q' means 'P is the father of Q' and 'P × Q' means 'P is the sister of Q', then which of the following represents 'A is the uncle of B'?

(a) B - N + M × A (b) A + S × N - B
(c) A - M + N × B (d) B - S + A
(e) None of these

8. Introducing Suneeta, Ajay said, 'She is the wife of my mother's only son'. How is Suneeta related to Ajay?

(a) Wife (b) Sister
(c) Sister-in-law (d) Data inadequate
(e) None of these

9. After walking 6 km. Saroj turned to her right and walked 2 km. Then she turned to her left and walked 10 km. Finally she headed towards South. In which direction did Saroj start her journey?

(a) East (b) South
(c) North (d) South-East
(e) None of these

10. In a row, Siya is twelfth from the left and Ramu is 19th from the right end. On interchanging their places, Siya becomes 21st from the left end. How many students are there in row?

(a) 52 (b) 40
(c) 39 (d) Data inadequate
(e) None of these

Directions (Q. Nos. 11-15) : The following questions consist of two words that have a certain relationship with each other, followed by five pairs of words. Select the pair that has the same relationship as the original pair of words.

11. Escape : Abscond
(a) Endless : Eternal (b) Flee : Surrender
(c) Exult : Jubilant (d) Escalate : Weaken
(e) Confront : Submit
12. Host : Hospitable
(a) Artist : Imitative (b) Guest : Rude
(c) Humanitarian : Altruistic
(d) Idealist : Cynical
(e) Pollyanna : Pessimistic

13. Editor : Magazine
- Director : Film
 - Novel : Writer
 - Psychiatrist : Neurotic
 - Librarian : Library
 - Poem : Poet
14. Pain : Misery
- Despair : poverty
 - Despair : loneliness
 - Ignorance : confusion
 - Superstition :
 - Ignore : greet

15. ABD : EJL
- GFH : IPR
 - IPR : URT
 - IPR : OTY
 - IPR : ORT
 - GHI : PRT
16. How many cubes have only green colour ?
- 16
 - 12
 - 4
 - 8
 - None of these

17. How many cubes have three colours red, green and white ?
- 2
 - 4
 - 8
 - 12
 - None of these

18. How many cubes have only two colours red and black ?
- 4
 - 12
 - 6
 - 2
 - None of these

19. How many cubes have only black colour ?
- 12
 - 8
 - 4
 - 16
 - None of these

Directions (Q. Nos. 20-22) : In each of the following letters series, the letters are missing which are given in that order as one of the alternatives. Choose the correct alternatives.

20. a**db**_ac_da_c**dd**cb_**dbc**_cbda
- bcba
 - cbba
 - ccbba
 - bbcad
 - None of these
21. a_**bd**_da_**dbc**_b_**dc**
- aabb
 - bbcca
 - caabb
 - ccbba
 - None of these
22. _aba_cabc_**bcba**_bab_a
- abdca
 - bcadc
 - abcd
 - cbda
 - None of these

Directions (Q. Nos. 23-30) : Arrange the following questions in their ascending order.

23. 1. Yarn
- Saree
 - Cotton
 - Cloth
- 2, 4, 5, 1, 3
 - 2, 4, 3, 5, 1
 - 2, 4, 1, 5, 3
 - 2, 4, 5, 3, 1
 - None of these
24. 1. Hecto
- Centi
 - Deca
 - Kilo
 - Deci
- 1, 3, 4, 5, 2
 - 1, 5, 3, 4, 2
 - 2, 5, 3, 1, 4
 - 5, 2, 1, 4, 3
 - None of these
25. 1. Table
- Tree
 - Wood
 - Seed
 - Plant
- 1, 2, 3, 4, 5
 - 1, 3, 2, 4, 5
 - 4, 5, 2, 3, 1
 - 4, 5, 3, 2, 1
 - None of these
26. 1. Rainbow
- Rain
 - Sun
 - Happy
 - Child
- 2, 1, 4, 3, 5
 - 2, 3, 1, 5, 4
 - 4, 2, 3, 5, 1
 - 2, 4, 5, 3, 1
 - None of these
27. 1. Foetus
- Child
 - Baby
 - Adult
 - Youth
- 1, 2, 4, 3, 5
 - 1, 3, 2, 5, 4
 - 2, 3, 5, 4, 1
 - 5, 4, 2, 3, 1
 - None of these
28. 1. Nation
- Village
 - City
 - District
 - State
- 2, 3, 4, 5, 1
 - 2, 3, 4, 1, 5
 - 1, 3, 5, 4, 2
 - 1, 2, 3, 4, 5
 - None of these
29. 1. Sea
- Rivulet
 - Ocean
 - River
 - Glacier
- 5, 2, 1, 3, 4
 - 5, 2, 4, 1, 3
 - 5, 4, 2, 3, 1
 - 5, 4, 3, 2, 1
 - None of these
30. 1. Family
- Community
 - Member
 - Locality
 - Country
- 3, 1, 2, 4, 5
 - 3, 1, 2, 5, 4
 - 3, 1, 4, 2, 5
 - 3, 1, 4, 5, 2
 - None of these

31. Radio : Listener :: Film : ?

- (a) Producer (b) Actor
(c) Viewer (d) Director
(e) None of these

32. Mountain : Hill :: Tree : ?

- (a) Ground (b) Leaf
(c) Forest (d) Shrub
(e) None of these


33. Leather : Cobbler :: Wood : ?

- (a) Furniture (b) Cottage
(c) Carpenter (d) Mason
(e) None of these

Directions (Q. Nos. 34-40) : Each of the questions below contains five 'Problem Figures' and five 'Answer Figures'. The five problem figures on the left side constitute a series. You have to determine which of the 'Answer Figures' would come as the sixth problem figure, if the series continues. The number of that 'Answer Figure' is your answer.

34. Problem Figures


Answer Figures



- (a) (b) (c) (d) (e)

35. Problem Figures

Answer Figures



- (a) (b) (c) (d) (e)

36. Problem Figures

Answer Figures



- (a) (b) (c) (d) (e)

37. Problem Figures


Answer Figures



- (a) (b) (c) (d) (e)

38. Problem Figures

Answer Figures



- (a) (b) (c) (d) (e)

39. Problem Figures


Answer Figures



- (a) (b) (c) (d) (e)

40. Problem Figures

Answer Figures



- (a) (b) (c) (d) (e)

English Language

Directions (41 - 55) : Read the following passage carefully and answer the questions given below it. Certain words are printed in bold to help you locate them while answering some of the questions.

For many years, the continent of Africa remained unexplored and hence unknown. The main reason was the inaccessibility to its interior region due to dense forests, wild life savage tribals, deserts and barren solid hills. Many people tried to explore the land but could not survive the dangers. David Livingstone is among those brave few who not only explored part of Africa but also lived among the tribals bringing them near to social milieu. While others explored with the idea of expanding their respective empires, Livingstone did so to explore its vast and mysterious hinterland, rivers and lakes. He was primarily a religious man and a medical practitioner who tried to help mankind with it.

Livingstone was born in Scotland and was educated to become a doctor and priest. His exploration started at the beginning of the year 1852. He explored an unknown river in Western Luanda. However, he was reduced to a skeleton during four years of travelling. By this time, he had become famous and when he returned to England for convalescing, entire London, along with Queen Victoria turned to welcome him. After a few days, he returned to Africa.

He discovered the origin to the River Nile in 1866. He again suffered many discomforts. He became too sick and could not even walk, he lost contact with rest of the world that grew anxious to know his whereabouts. Ultimately, it was Stanley, the American journalist, who found him after him after many efforts, but Livingstone had died in a tribal village 1873. His body was brought to London and buried in Westminster with full honour.

41. Livingstone deserves credit for which of the following?

- (a) For expanding his empire
(b) For enjoying the wild life of the continent
(c) for exploring part of Africa and living among the tribals
(d) For quenching his thirst for living in the company of nature
(e) None of these

42. What was the impact of four year travelling on Livingstone?

- (a) He could enjoy a social life among tribals society
- (b) He derived satisfaction with the exploration of an unknown river
- (c) He derived satisfaction as he became very famous
- (d) It badly affected his health
- (e) None of these

43. Which of the following shows that Livingstone had become very famous?

- (a) Queen Victoria along with the people of London had come to welcome him
- (b) Queen Victoria arranged for the medical expenses
- (c) The tribals were grateful to him for bringing them in the social mainstream
- (d) He was assigned the lack of a priest although he was a medical professional
- (e) None of these

44. Why were people not aware of the existence of Africa?

- (a) It was inaccessible due to oceanic reefs
- (b) Its territory was covered with dense forests
- (c) People outside the continent were chased away by nature tribals
- (d) Explorers were afraid of the risks involved
- (e) None of these

45. Livingstone can best be described by which of the following?

- (a) A person with an-8rge for exploration of unknown parts of the world
- (b) A person with religious mindset
- (c) A social reformer
- (d) A warmhearted medical practitioner
- (e) A famous priest popular among the British

46. Which of the following was/were explored by Livingstone?

- (A) A river in Western Luanda
- (B) Scotland
- (C) The origin of river Nile
- (a) (A) and (B) only
- (b) (B) and © only
- (c) (A) and © only
- (d) (A) only
- (e) (B) only

47. The American journalist Stanley can be credited for which of the following?

- (A) Performing the last rites of Livingstone's dead body.

(B) Relentless efforts for finding out the whereabouts of Livingstone.

(C) The anxiety to explore undiscovered parts of the world.

- (a) (A) and (B) only
- (b) (B) and (C) only
- (c) (A) and (C) only
- (d) (B) only
- (e) (C) only

48. Livingstone became too sick to walk and, as a result

- (A) people in the world lost contact with him
- (B) his whereabouts were not known
- (C) American journalist, Stanley could not locate him despite many efforts.

- (a) (A) only
- (b) (B) only
- (c) (C) only
- (d) (A) and (C) only
- (e) None of these

49. In what way Livingstone's exploration efforts were different from those of others?

- (a) Livingstone's exploration was restricted only to unknown rivers whereas others explored dense forests
- (b) Others explored with selfish motives; Livingstone explored to know the mysterious parts of the world
- (c) Others explored new parts of the world for wealth, but Livingstone did so for religious purposes
- (d) Being a medical practitioner, he tried to explore medicines; others did for tribal population
- (e) None of these

Directions (50 – 52) : Choose the word which is most nearly the SAME in meaning to the word printed in bold as used in the passage.

50. REST

- (a) remainder
- (b) relax
- (c) respite
- (d) break
- (e) most

51. EXPLORATION

- (a) execution
- (b) cultivation
- (c) foundation
- (d) revolved
- (e) arrived

52. TURNED

- (a) rotated
- (b) twisted
- (c) spinned
- (d) revolved
- (e) arrived

Directions (53 – 55) : Choose the word which is most OPPOSITE in meaning to the word printed in bold as used in the passage.

53. DENSE

- (a) crowded (b) dark
(c) sparse (d) transparent
(e) opaque

54. BARREN

- (a) uncultivated (b) fertile
(c) forest (d) unlevelled
(e) marshy

55. VAST

- (a) miniature (b) magnified
(c) enormous (d) gigantic
(e) small

Directions (56 – 65) : Read each sentence to find out whether there is any grammatical error in it. The error, if any, will be in one part of the sentence. The number of that part is the answer. If there is no error, the answer is (e) i.e. 'No Error'. (Ignore the errors of punctuation, if any).

56. The interrogation made by (a)/ him hardly yield (b)/ any concrete conclusion (c)/ about the crime. (d)/ No error (e)
57. What you had started (a)/ the work, you should (b)/ ensure that you (c)/ but it could not be proved. (d)/ No error (e)
58. When you had started (a)/ the work, you should (b)/ ensure that you (c)/ on water effortlessly. (d)/ No error (e)
59. If you have good (a)/ control over breathing (b)/ you can float (c)/ on water effortlessly. (d)/ No error (e)
60. The way to the fort (a)/ was too difficult that (b)/ we could not reach (c)/ the farthest point. (d)/ No error (e)
61. When we heard the name (a)/ of our leader uttered (b)/ respectfully by the foreigners (c)/ we felt pride of him. (d)/ No error (e)
62. It goes to his credit (a)/ that he was a clean man (b)/ in politics as well as (c)/ we felt pride of him. (d)/ No error (e)
63. His strictly discipline (a)/ has made him (b)/ very unpopular among (c)/ all the employees. (d)/ No error (e)
64. Jamshedji knew that (a)/ an industrial revolution could (b)/ only brought in the country (c)/ by setting up iron and steel industry. (d)/ No error (e)
65. He being the oldest son (a)/ has requested us (b) to look after the problem (c)/ faced by his father. (d)/ No error (e)

Directions (66 – 70) : Pick out the most effective word from the given words to fill in the blank to make the sentence meaningfully complete.

56. There is no need of any proof because everything is very _____.

- (a) obvious (b) uncertain
(c) definite (d) regular
(e) essential

67. Onions grow in _____ in this part and hence they are always very cheap here.

- (a) demand (b) abundance
(c) peak (d) excessive
(e) dearth

68. Normally he is very _____ in his behaviour, but on that occasion he behaved very aggressively.

- (a) rude (b) obedient
(c) docile (d) intolerant
(e) immature

69. If you _____ in advance, you will get some concession.

- (a) buy (b) work
(c) submit (d) pay
(e) decide

70. I have in my album photographs of some of my very close friends _____ I can never forget.

- (a) that (b) who
(c) whom (d) which
(e) those

Directions (71 – 75) : In each question below four words which are numbered (a), (b), (c) and (d) have been printed, of which, one may be wrongly spelt. The number of that word is the answer. If all the four words are correctly spelt, mark (e) i.e. "All correct" as the answer.

71. (a) Discloser (b) Indifference
(c) Cooperative (d) Irreversible
(e) All Correct
72. (a) Repeatation (b) Conservative
(c) Acceptability (d) Innovative
(e) All correct
73. (a) Vigilant (b) Jubilee
(c) Receptive (d) Possessive
(e) All correct
74. (a) Decisive (b) Destructive
(c) Accommodation (d) Pioneer
(e) All correct
75. (a) compromising (b) Enthuciasm
(c) Dislocation (d) Immigration
(e) All correct

Directions (75 – 80) : Rearrange the following sentences (A), (B), (C), (D), (E) and (F) in the proper sequence to form a meaningful paragraph; then answer the questions given below them.

- (A) They are not bothered to break rules of the society laws and even relations.
- (B) But one thing is certain. They will one day realize that this importance needs to be shifted.
- (C) People are generally ready to go to any extent to possess these materialistic aspects.
- (D) All this shift will certainly be in favour of good and socially desirable values.
- (E) This is all because of the undue importance attached to these aspects.
- (F) Money, comfort, luxuries have dominated all other considerations these days.
76. Which of the following should be the **FOURTH** sentence after rearrangement?
- (a) F (b) E
(c) D (d) C
(e) B
77. Which of the following should be the **SIXTH (LAST)** sentence after rearrangement?
- (a) F (b) E
(c) D (d) C
(e) B
78. Which of the following should be the **FIFTH** sentence after rearrangement?
- (a) F (b) E
(c) D (d) C
(e) B
79. Which of the following should be the **FIRST** sentence after rearrangement?
- (a) F (b) E
(c) D (d) C
(e) B
80. Which of the following should be the **SECOND** sentence after rearrangement?
- (a) F (b) E
(c) D (d) C
(e) B

Quantitative Aptitude

81. What least number must be added to 1056 to get a number exactly divisible by 23?
- (a) 21 (b) 3
(c) 2 (d) 5
(e) None of these
82. What is the total number of prime numbers less than 100?
- (a) 11 (b) 25
(c) 23 (d) 19
(e) None of these
83. Which of the followings is a true statement?
- (a) The difference of two natural numbers is always a natural number
(b) The difference of two integers is always an integer
(c) The quotient of two rational numbers is always rational
(d) All of these
(e) None of these
84. Which one of the following is the square of a natural number:
- (a) 136162 (b) 126738
(c) 410883 (d) 385641
(e) All of these
85. When a certain number is multiplied by 13, the product consists entirely of five, the smallest such number is:
- (a) 41625 (b) 42515
(c) 42735 (d) 42135
(e) All of these
86. If $A = \{1, 2, 3, 4\}$ and $B = \{5, 6, 7\}$, Then $A \cap B$ is:
- (a) $\{1, 2, 3\}$ (b) $\{5, 6, 7\}$
(c) $\{4\}$ (d) $\{2, 3\}$
(e) All of these
87. Which of the following is a true statement?
- (a) $(A \cup B)^x = (A^x \cup B^x)$
(b) $(A \cup B)^x = A^x \cap B^x$
(c) $(A \cup B)^x = A^x \cap B$
(d) $(A \cup B)^x = A^x \cap B^x$
88. If $A \subseteq B$, then $\bar{A} - B$ is equal to:
- (a) A (b) B
(c) \bar{F} (d) $B - A$
(e) None of these
89. $\frac{9.5 \times 0.0085 \times 18.9}{0.0017 \times 19 \times 2.1} = ?$
- (a) 0.15 (b) 0.5
(c) 15 (d) 250
(e) None of these
90. If $\sqrt{3} = 1.732$, then the value of $\sqrt[3]{3}$ is:
- (a) 0.174 (b) 0.314
(c) 0.577 (d) 0.754
(e) None of these
91. Match the following—Square root
- A. 12321 1. 81

- B. 2025 2. 55
 C. 3025 3. 45
 D. 6561 4. 111

The correct matching is:

- (a) 1421 (b) 4321
 (c) 4312 (d) 3412
 (e) None of these
92. The smallest perfect square number which is divisible by 15, 18 and 25 is :
 (a) 625 (b) 900
 (c) 450 (d) 225
 (e) None of these
93. The value of $\sqrt{\frac{32}{8}} + \sqrt{\frac{48}{12}}$ is:
 (a) $\sqrt{2}$ (b) 2
 (c) 4 (d) 8
 (e) None of these
94. A bought a radio for ₹ 500 and sold it to B at 5% gain. After some time B sold it to C at 5% loss. What is cost price of the radio for C?
 (a) ₹ 498.75 (b) ₹ 375.60
 (c) ₹ 370.25 (d) ₹ 480.60
 (e) None of these
95. A television is sold at 20% gain. If it is sold at 20% loss then selling price is less ₹ 120. What is the cost price of the televisions?
 (a) ₹ 600 (b) ₹ 220
 (c) ₹ 300 (d) ₹ 380
 (e) None of these
96. A shopkeeper offers 10% discount on price list and still makes a profit of 25%. What is the cost price of an article whose list price is ₹ 80?
 (a) ₹ 57.60 (b) ₹ 60.40
 (c) ₹ 72.50 (d) ₹ 75.60
 (e) None of these
97. If C.P. of 5 mangoes is equal to S.P. of 4 mangoes, then what will be gain %?
 (a) 21% (b) 15%
 (c) 25% (d) 10%
 (e) None of these
98. If 11 pencils are bought for ₹ 10 and 10 pencils are sold for ₹ 11 then what is the gain %?
 (a) 18% (b) 16%
 (c) 21% (d) 10%
 (e) None of these
99. In a question of Division, Divisor is 9, quotient is 114 and Remainder is 5, then what will be the divided?

- (a) 931 (b) 1031
 (c) 1131 (d) 1233
 (e) None of these
100. A number which is both even and prime is:
 (a) 1 (b) 3
 (c) 5 (d) 2
 (e) None of these
101. In the following which is the greatest number?
 (a) $(4)^2$ (b) $[(2+2)^2]$
 (c) $(2 \times 2 \times 2)^2$ (d) $(2+2+2)^2$
 (e) None of these
102. What is fourth proportional of 7, 8 and 14?
 (a) 16 (b) 18
 (c) 25 (d) 36
 (e) None of these
103. If $A = B$ and $B = C$ then what is $A : B : C$?
 (a) 5 : 2 : 15 (b) 5 : 15 : 2
 (c) 2 : 5 : 15 (d) 15 : 2 : 5
 (e) None of these
104. What is the ratio between 50 cm and 4 m?
 (a) 1 : 8 (b) 2 : 7
 (c) 1 : 9 (d) 3 : 8
 (e) None of these
105. What should be added to 8, 21, 13 and 31 so that the sum is in proportion?
 (a) 4 (b) 8
 (c) 5 (d) 7
 (e) None of these
106. Meenu can read 8 pages of a novel in 30 minutes. If the novel contains 80 pages then what time she will take to read it completely?
 (a) 8 days (b) 11 days
 (c) 14 days (d) 5 days
 (e) None of these
107. Kamlesh, Lazwati and Yashoda can do a work in 8, 12, and 24 days separately. In how many days three together can do the work?
 (a) 4 days (b) days
 (c) 3 days (d) days
 (e) None of these
108. A and B together can do a work in 28 days. They finished the work with the help of C in 21 days. In how many days C alone can do the work?
 (a) 83 days (b) 84 days
 (c) 90 days (d) 45 days
 (e) None of these
109. 35% of 300 + 15% of 200 - 96

- (a) 37 (b) 38
 (c) 39 (d) 40
 (e) None of these
110. $4 \times 32 \text{ of } 70\% + 3 = ?$
 (a) 32 (b) 45
 (c) 44 (d) 43
 (e) None of these
111. $100 \times 0.2 + 0.01 \times 1,000 + 110 = ?$
 (a) 144 (b) 140
 (c) 141 (d) 159
 (e) None of these
112. $\frac{6}{11} + \frac{7}{8} + \frac{77}{40} = ?$
 (a) 1 (b) 4
 (c) 7 (d) 6
 (e) None of these
113. $18 \text{ of } \frac{3}{81} + \frac{1}{3} = ?$
 (a) 1 (b) 5
 (c) 1 (d) 4
 (e) None of these
114. The ratio of two numbers is 11 : 15. If their H.C.F. is 13 then what will be the numbers respectively?
 (a) 143, 195 (b) 195, 143
 (c) 110, 150 (d) 121, 165
 (e) None of these
115. What is L.C.M. of 70, 20 and 14?
 (a) 120 (b) 140
 (c) 280 (d) 70
 (e) None of these
116. What is the smallest positive number, which when divided by 3, 4 and 5 will have a remainder of 2?
 (a) 22 (b) 42
 (c) 62 (d) 122
 (e) None of these
117. The largest number that divides 245 and 1029, leaving remainder 5 in each case is
 (a) 16 (b) 18
 (c) 17 (d) 15
 (e) None of these
118. A person has three iron bars whose lengths are 10, 15 and 20 metres respectively. He wants to cut the longest possible pieces, all of the same length from each of the three bars. What is the length of each piece if he is to cut without any wastage?
 (a) 3 metre (b) 30 metre
 (c) 15 metre (d) 5 metre
 (e) None of these
119. Two containers contain 60 and 165 litres of milk, respectively. Find the maximum capacity of a container which can measure the milk in each container an exact number of times.
 (a) 5 (b) 15
 (c) 3 (d) 10
 (e) None of these
120. Find the least number which when divided by 8, 9, 12 and 15, leaves the remainder 1.
 (a) 359 (b) 181
 (c) 179 (d) 361
 (e) None of these

General Awareness

121. Which one was used first by human being?
 (a) Iron (b) Silver
 (c) Copper (d) Tin
 (e) None of these
122. 'Gaytri Mantra' is related to -
 (a) Rigveda (b) Yaturveda
 (c) Samveda (d) (a) and (b) both
 (e) None of these
123. Who was the founder of Patliputra Nagar?
 (a) Bimbisar (b) Ajatshatru
 (c) Udayan (d) Dhannand
 (e) None of these
124. Which language was used by Mahatma Buddha in his preach ro serman?
 (a) Dravid (b) Sanskrit
 (c) Pali (d) All of these
 (e) None of these
125. Where was the capital of kanishque?
 (a) Kannauj (b) Srinagar
 (c) Purushpur (d) Pataliputra
 (e) None of these
126. Who was the prime minister of Chandra Gupta?
 (a) Magsthnij (b) Tushasp
 (c) Vishnu Gupta (d) Kanishque
 (e) None of these

127. Earth is the part of galaxy -
 (a) Hisha miner (b) Milki be
 (c) Drekoi (d) Sculpture
 (e) None of these
128. Which one of the following biggest brackish water lake in the world?
 (a) Eri (b) Caspian
 (c) Mishigan (d) Victoria
 (e) None of these
129. Which one of the following is the biggest oasis of the world?
 (a) Rocky (b) Karakoram
 (c) Endiess (d) Himalaya
 (e) None of these
130. Which is called ceiling of the world?
 (a) K-2 (b) Mount Everest
 (c) Pamirs Plateau (d) (a) and (b) both
 (e) None of these
131. constitutions of public Accounts Committee first suggested by the Webbley Commission Lok Sabha has 15 members and from Rajya Sabha
 (a) 10 members (b) 7 members
 (c) 5 members (d) 3 Members
 (e) None of these
132. Constitutional Amendment Act has provided for constitutions status for the panchayati Raj one third reservation for woman a separate list of subjects and a separate ministry in the centre.
 (a) 63rd (b) 53rd
 (c) 73rd (d) 83rd
 (e) None of these
133. Article of the Indian constitution states that the state shall not discriminate against any citizen on grounds only of veligion, cast, sex, place of birth or any of them.
 (a) 16 (b) 14
 (c) 15 (d) 12
 (e) None of these
134. In the national commission to review the working of the constitution was setup to look into updations the constitutions of India.
 (a) 2001 (b) 2003
 (c) 2004 (d) 2006
 (e) None of these
135. The constitution provides for a parliamentary form of government which is federal in sturcture with contain unitary feature. The constitutional head of the Executive of the union is
 (a) Prime minister (b) Governor
 (c) President (d) Chief Minister
 (e) None of these
136. The railways on 22 January, 2013 decided to undertake a cleanliness drive at about 100 important statics across the country and equip maximum number of coaches with
 (a) bio-toilets (b) help counter
 (c) cleanins machine (d) (a) and (b) both
 (e) None of these
137. Which state in, March 2013, demanded a Rs. 500 crore special passage from the Centre for providing relief to calamity affected formers in the state?
 (a) Madhya Preadesh
 (b) Rajasthan
 (c) Gujarat
 (d) Odisha
 (e) None of these
138. The chief of the Air Staff N.A.K. Browne Inaugrated the medium luft Helicopter complex on 1 Jan. 2013 at Phalodi near
 (a) Pune (b) Purulia
 (c) Mangalore (d) Jodhpur
 (e) None of these
139. The concept of the directives principles of state policy was borrowed by our constitution from the constitution of -
 (a) America (b) Russia
 (c) Ireland (d) China
 (e) None of these
140. Fundamental Rights are not give to
 (a) Citizens (b) Migrant
 (c) allegrns (d) (a) and (b) both
 (e) None of these
141. Which Indian state has the largest cosastline?
 (a) Uttar Pradesh (b) Punjab
 (c) Haryana (d) Andhra Pradesh
 (e) None of these
142. Who among the following won the Femian Miss India 2013, Contest in March 2013?
 (a) Sobhita Dhalipala
 (b) Zoya Afroz
 (c) Anukriti
 (d) Navneet Kaur Dhileon
 (e) None of these

143. Which is the lowest layer of the atmosphere?
(a) Troposphere (b) Stratosphere
(c) Mesosphere (d) Exosphere
(e) None of these
144. The instrument used to see the distant objects on the earth is -
(a) Terrestrial telescope
(b) Micro Telescope
(c) Mini Telescope
(d) (a) and (b) both
(e) None of these
145. As per the recently released Govt. data, which among the following states has the highest percentage households availing of banking services?
(a) West Bengal (b) Himachal Pradesh
(c) Gujarat (d) Karnataka
(e) None of these
146. In which state was India's first viability gap funded 99 km power transmission line project, inaugurated on 4th March 2013?
(a) Jharkhand (b) Haryana
(c) Odisha (d) Andhra Pradesh
(e) None of these
147. Deep fried food material are carcinogenic because they are rich in -
(a) Proteins (b) Carbohydrate
(c) Fats (d) Vitamins
(e) None of these
148. Which of the following is/are subsidiaries of Tata Motors (India) which was in news in March 2013?
(a) Jaguar Land Rover
(b) Hispano Motors
(c) Dacwo commercial vehicles company
(d) All the above
(e) None of these
149. The present Indian Monetary system is based on -
(a) Minimum Reserve System
(b) Maximum Reserve System
(c) (a) and (b) both
(d) All the above
(e) None of these
150. Gross domestic products is defined as the value of all -
(a) Final goods and service produced in an economy in a year
(b) Processed production of an economy in a year
(c) Average goods and services economy in a year
(d) All of above
(e) None of these
151. An exceptional demand curve is one that moves -
(a) upward to the right
(b) downward to the right
(c) straight ward to right
(d) (a) and (b) both
(e) none of these
152. India's longest car maker Maruti Suzuki India Ltd. in Jan. 2013 increase of the price of its vehicles by up to -
(a) Rs. 50000 (b) Rs. 40000
(c) Rs. 20000 (d) Rs. 30000
(e) None of these
153. Which airline in January 2013 cut ticket price by more than half for travel between Feb. and April in a move that forced its rivals to follow suit?
(a) Indigo (b) Air India
(c) Spice Jet (d) Sahara India
(e) None of these
154. The world bank in January 2013 has debarred the Indian arm of global transport radio service provides -
(a) RCIWIK (b) APINC
(c) ARINC (d) TRINC
(e) None of these
155. The advance taxes in the third quarter of fiscal 2012-13 grew by to Rs. 78266 crore.
(a) 6.44% (b) 8.44%
(c) 9.44% (d) 10.44%
(e) None of these
156. Cricketer who has been got a equal record of great player Sunil Gavaskar.
(a) Virat Kohli
(b) M.S. Dhoni
(c) Sachin Tendulkar
(d) Virendra Sehwag

157. 4 Feb. 2013 International Cricket Council ranking for test was released in —
 (a) Iran (b) Russia
 (c) England (d) Dubai
 (e) China
158. Who is the Tennis winner 17 Feb. 2013 (Brazil Open 2013)?
 (a) MC Grath (b) David Crow
 (c) Rafael Nadal (d) Mahesh Bhupathi
 (e) None of these
159. Who is the new world number one woman's Tennis player?
 (a) Sania Mirja (b) Serena Williams
 (c) Venus Williams (d) Martina Hingis
 (e) None of these
160. Services beat which team in the final of the 67th Santosh Trophy football tournament played at Jawaharlal Nehru Stadium in Kochi in March 2013?
 (a) Karnataka (b) Kerala
 (c) Indian Railways
 (d) Maharashtra
 (e) None of these

Computer Knowledge & Marketing Aptitude

161. Cross-selling covers—
 (a) Identifying customer needs
 (b) Matching the Products to customer needs
 (c) Convincing the customers of Product benefits
 (d) Responding to questions and objections of customers
 (e) All of these
162. A Prospect means—
 (a) Any customer who walks into the Bank
 (b) An employee of the Bank
 (c) A customer who is likely to be interested in Bank's Product or service
 (d) A Depositor of the Bank
 (e) A Borrower of the Bank
163. A Lead means—
 (a) A Prospect who is more likely to avail of the Bank's Product
 (b) A Political Leader
 (c) A Religious Leader
 (d) A Bank Chairman
 (e) None of these
164. Innovation means—
 (a) Compensation
 (b) Inspiration
 (c) Additional perquisites
 (d) Implementing new ideas or new methods
 (e) None of these
165. A Call means—
 (a) Calling on friends
 (b) Calling on Bank employees
 (c) Calling on Prospective customers
 (d) To make telephone calls
 (e) Calling on relatives
166. The Traditional Marketing style involves—
 (a) Telemarketing
 (b) Digital Marketing
 (c) Indirect Marketing
 (d) Direct Marketing
 (e) All of these
167. Modern methods of Marketing include—
 (a) Publicity on the net
 (b) Advertisement on the net
 (c) Soliciting business through e-mails
 (d) Telemarketing
 (e) All of these
168. A true marketing mindset requires—
 (a) Command and order mindset
 (b) Control mindset
 (c) Active mindset
 (d) Passive mindset
 (e) None of these
169. Which of the following sentences is True ?
 (a) Marketing is not required in a Buyers' Market
 (b) Marketing is not required in a Sellers' Market
 (c) Marketing is not required due to globalization
 (d) Marketing is not required due to competition
 (e) Marketing is not required due to liberalization
170. For effective marketing, the salesmen should have which of these qualities—
 (a) Creativity
 (b) Team spirit
 (c) Motivation
 (d) Effective communication skills
 (e) All of these

171. **Market information means—**
- Knowledge of shops and bazaars
 - Knowledge of shopping malls
 - Knowledge of customer profile and product mix
 - Knowledge of various languages
 - None of these
172. **Market Research is needed for—**
- Deciding the market area
 - Deciding the right product to be sold
 - Making proper marketing decisions
 - Deciding right time to sell
 - All of these
173. **Which of the following statements is True ?**
- Marketing makes the Company to go into loss due to higher expenses
 - Marketing is not required in profit-making companies
 - Marketing sharpens the minds of the employees
 - Marketing is a time-bound seasonal function
 - Marketing is a waste of time
174. **Marketing Plan helps in—**
- Better lead generation
 - Better systems
 - Better results
 - Improved Balance Sheet
 - Better customer service
175. **If Marketing is done effectively, which of the following is not required—**
- Advertisement
 - Publicity
 - Market Research
 - Market Segmentation
 - None of these
176. **Motivation means—**
- Inspiring employees to perform better
 - Better Communication Skills
 - Sales coaching
 - Market Research
 - Noise of these
177. **In a Selling Process in today's world—**
- Only standard products are sold
 - No customization required
 - The Seller need not have product knowledge
 - The Seller should aim at customer satisfaction
 - Only quantum of sales matters
178. **Find the True statement—**
- Marketing is a waste of the employees' time
 - Marketing is not required in India due to its vast population
 - Marketing involves additional work
 - Marketing involves team work
 - Marketing is not required today due to IT advancement
179. **A Target Market is—**
- Entire country
 - Entire city
 - Entire globe
 - That which consists of customers who need the identified product
 - All of these
180. **Sales forecasting involves—**
- Sales Planning
 - Sales pricing
 - Distribution Channels
 - Consumer tastes
 - All of these
181. **Network of computers that connects the people all over the world is called:**
- Web
 - Internet
 - LAN
 - WAN
 - None of these
182. **CD is a data storage of the type**
- Optical
 - electrical
 - Mechanical
 - Magnetic
 - None of these
183. **CD- ROM drive is used to:**
- Install software
 - Play CD
 - Play music
 - play games
 - None of these
184. **Eradication of error from the computer program or system is called:**
- Compile
 - Interpret
 - Debug
 - DSS
 - None of these
185. **Information that comes from an external source and fed into computer software is called—**
- Input
 - Output
 - Throughput
 - Reports
 - None of these

186. With a CD you can—
(a) Read
(b) Write
(c) Neither Read nor Write
(d) Both Read and Write
(e) None of these
187. Errors in a computer program are referred to as—
(a) Bugs
(b) Mistakes
(c) Item overlooked
(d) Blunders
(e) None of these
188. Which of the following are computers that can be carried around easily?
(a) Laptops
(b) Supercomputers
(c) PCs
(d) Minicomputers
(e) None of these
189. What menu is selected to change font and style?
(a) Tools
(b) File
(c) Format
(d) Edit
(e) None of these
190. Where is the disk put in a computer?
(a) In the hard drive
(b) In the disk drive
(c) Into the CPU
(d) In the modem
(e) None of these
191. A computer's hard disk is—
(a) An arithmetic and logical unit
(b) Computer software
(c) Operating system
(d) Computer hardware
(e) None of these
192. A compiler is used to translate a program written in—
(a) A low level language
(b) A high level language
(c) Assembly language
(d) Machine language
(e) None of these
193. In programming, you use the following keys—
(a) Arrow keys
(b) Function keys
(c) Alpha keys
(d) Page up and Page Down keys
(e) None of these
194. Which keys enable the input of numbers quickly?
(a) Function keys
(b) The numeric keypad
(c) Ctrl, shift and alt
(d) Arrow keys
(e) None of these
195. Files are organized by storing them in—
(a) Tables
(b) Databases
(c) Folders
(d) Graphs
(e) None of these
196. The secret code that restricts entry to some programs—
(a) Entry-code
(b) Passport
(c) Password
(d) Access-code
(e) None of these
197. Advertisements are not required in—
(a) Public Sector banks
(b) Private Sector banks
(c) Government concerns
(d) Profit making companies
(e) None of these
198. The most common method of entering text and numerical data into a computer system is through the use of a—
(a) Plotter
(b) Scanner
(c) Printer
(d) Keyboard
(e) None of these
199. Computer programs are also known as—
(a) Operating systems
(b) Documents
(c) Peripherals
(d) Applications
(e) None of these
200. A collection of unprocessed items is
(a) Information
(b) Data
(c) Memory
(d) Reports
(e) None of these