



# SRI CHAITANYA EDUCATIONAL INSTITUTIONS, A.P

CENTRAL OFFICE MADHAPUR-HYDERABAD

## AIEEE MODEL QUESTION PAPER-1

### ***INSTRUCTIONS TO THE CANDIDATES***

- 1) Out of four alternatives for each question, only one circle for the correct answer is to be darkened completely with blue/black ball point pen only. Use of pencil is strictly prohibited. If any candidate use the pencil for darkening the answer sheet, his/her answer sheet will be rejected.
- 2) Rough work: The candidate will not do any rough work on the answer sheet. All rough work is to be done in the test booklet itself.
- 3) Changing an answer is NOT ALLOWED: The candidate must fully satisfy themselves about the accuracy of the answer before darkening the appropriate circle as no change in answer once marked is allowed. Use of eraser or white/correction fluid on answer sheet is not permissible as the answer sheet is machine gradable and it may lead to wrong evaluation.

If more than one circle is darkened or if the response is marked in any other manner it shall be treated as wrong way of marking.

- 4) The examinee is permitted to carry the text booklet.

Physics: Question numbers 1 to 20 consist of 3 marks each. Negative (-1). Question numbers 21 to 28 consist of 4.5 marks each. Negative (-1.5). Question numbers 29 to 34 consist of 6 marks each and negative (-2).

Chemistry: Questions 35 to 54 consist of 3 marks each. Negative (-1). Question numbers 55 to 62 consist of 4.5 marks each. Negative (-1.5). Question numbers 63 to 68 consist of 6 marks each and negative (-2).

Mathematics: Questions 69 to 88 consist of 3 marks each. Negative (-1). Question numbers 89 to 96 consist of 4.5 marks each. Negative (-1.5). Question numbers 97 to 102 consist of 6 marks each and negative (-2).

## PHYSICS

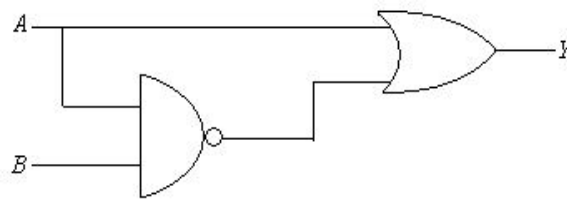
01. When the incident wave lengths are  $\lambda$  and  $\lambda/2$ , the kinetic energies of the emitted photo electrons are  $E$  and  $2E$ . The work function of the metal is

- 1)  $\frac{E}{4}$                       2)  $\frac{E}{2}$                       3)  $\frac{E}{3}$                       4) zero

02. In a sample of radioactive material, what fraction of initial **number** of active nuclei will remain undisintegrated after half of half-life of sample.

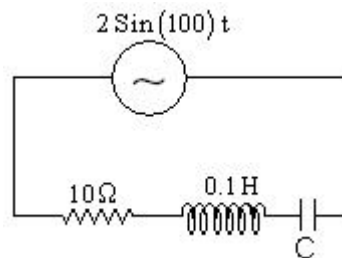
- 1)  $\frac{1}{4}$                       2)  $\frac{1}{2\sqrt{2}}$                       3)  $\frac{1}{\sqrt{2}}$                       4)  $\sqrt{2}-1$

03. The out put of the combination of the gates shown in the figure is



- 1)  $A + \overline{A.B}$                       2)  $A.B + \overline{A.B}$                       3)  $(A + B) \cdot (\overline{A.B})$                       4)  $(A + B) \cdot (\overline{A + B})$

04. The power factor of the circuit is  $1/\sqrt{2}$ . The capacitance of the circuit is equal to



- 1)  $400 \mu F$                       2)  $300 \mu F$                       3)  $500 \mu F$                       4)  $200 \mu F$

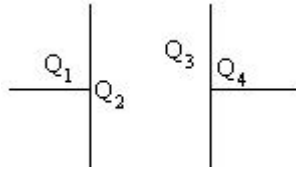
05. A copper wire having resistance  $0.01 \Omega$  in each meter is used to wind a 400 turn solenoid of radius 1 cm and length 20 cm. The emf of the battery which when connected across the solenoid will cause a magnetic field of  $10^{-2} \text{ T}$  near the centre of the solenoid is

- 1) 1v                      2) 2v                      3) 3v                      4) 4v

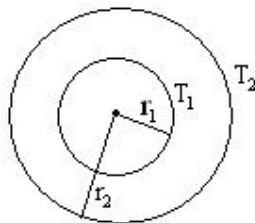
06. The power of achromatic convergent lens of two **lenses** is  $+2D$ . The power of convex lens is  $+5D$ . The ratio of dispersive power of convex and concave lense will be

- 1) 5 : 3                      2) 3 : 5                      3) 2 : 5                      4) 5 : 2

07. In an isolated parallel plate capacitor of capacitance  $C$ , the four surfaces have charges  $Q_1$ ,  $Q_2$ ,  $Q_3$  and  $Q_4$  as shown. The potential difference between the plates is



- 1)  $\frac{Q_1 + Q_2 + Q_3 + Q_4}{2C}$     2)  $\frac{Q_2 + Q_3}{2C}$     3)  $\frac{Q_2 - Q_3}{2C}$     4)  $\frac{Q_1 + Q_4}{2C}$
08. In an experiment to measure the internal resistance of a cell it is found that the balance point is 3m, when the cell is shunted with  $10 \Omega$ . When shunt resistance is changed to  $R \Omega$ , Balancing length is 2m. If internal resistance of cell is  $2 \Omega$ , the value of  $R$  is
- 1)  $5 \Omega$     2)  $10 \Omega$     3)  $15 \Omega$     4)  $2.5 \Omega$
09. Initial momentum of a body is 2.01 kgm/sec and final momentum is 4.1259 kgm/sec. The change in momentum is ( in kgm/sec ).
- 1) 2.116    2) 2.117    3) 2.12    4) 2.1
10. A carnot engine whose low temperature reservoir is at  $7^\circ\text{C}$  has an efficiency of 50%. It is desired to increase the efficiency to 70%. By how many degrees should the temperature of high temperature reservoir be increased.
- 1) 840 k    2) 280 k    3) 560 k    4) 380 k
11. The figure shows a system of two concentric sphere of radii  $r_1$  and  $r_2$  and kept at temperatures  $T_1$  and  $T_2$  respectively. The radial rate of flow of heat in a substance between the **concentric** spheres is proportional to

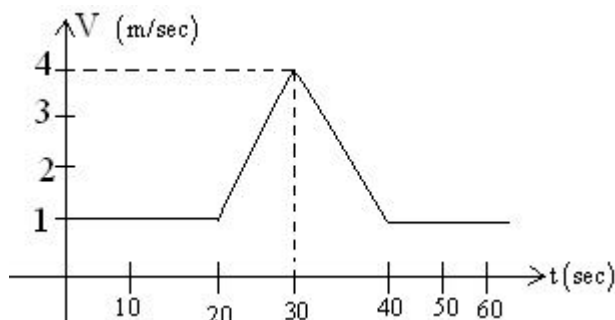


- 1)  $\frac{r_1 r_2}{r_2 - r_1}$     2)  $(r_2 - r_1)$     3)  $\frac{r_2 - r_1}{r_1 r_2}$     4)  $\ln\left(\frac{r_2}{r_1}\right)$
12. The temperature of a gas is  $-68^\circ\text{C}$ . To what temperature should it be heated so that ,  
(a) The average translational KE of molecules be double, (b). The root mean square velocity of the molecules be doubled.
- 1)  $237^\circ\text{C}, 547^\circ\text{C}$     2)  $137^\circ\text{C}, 547^\circ\text{C}$     3)  $140^\circ\text{C}, 240^\circ\text{C}$     4)  $210^\circ\text{C}, 220^\circ\text{C}$
13. A body is projected up with a velocity equal to  $\frac{3}{4}$  th of the **escape** velocity from the surface of the earth. The height it reaches is
- 1)  $\frac{10R}{9}$     2)  $\frac{9R}{7}$     3)  $\frac{9R}{8}$     4)  $\frac{10R}{3}$

14. A lorry and a car of mass ratio 4 : 1 are moving with KE in the ratio 3 : 2 on a horizontal road. Now brakes are applied and **breaking** forces produced are in the ratio 1 : 2, then the ratio of stopping timings of lorry and car is

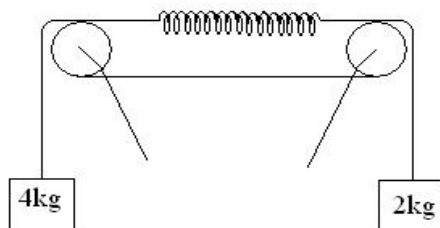
- 1) 1 : 1                      2) 1 : 3                      3)  $2\sqrt{6} : 1$                       4)  $6\sqrt{2} : 1$

15. Velocity time graph for a moving object shown in the figure. Total displacement of object during time interval when there is non-zero acceleration and retardation is



- 1) 60 m                      2) 50 m                      3) 30 m                      4) 40 m

16. The reading in the spring balance is



- 1) 2.6 kgwt                      2) 2 kgwt                      3) 6 kgwt                      4) 4.3 kgwt

17. Two soap bubbles of radii  $R_1$  and  $R_2$  are in atmosphere of pressure  $P_0$  at constant temperature. Ratio of masses of air inside them is

- 1)  $\frac{\left(P_0 + \frac{4T}{R_1^2}\right) R_1^3}{\left(P_0 + \frac{4T}{R_2^2}\right) R_2^3}$                       2)  $\frac{\left(P_0 + \frac{4T}{R_1}\right) R_1^3}{\left(P_0 + \frac{4T}{R_2}\right) R_2^3}$                       3)  $\frac{\left(P_0 + \frac{4T}{R_1}\right)}{\left(P_0 + \frac{4T}{R_2}\right)}$                       4)  $\frac{R_1^3}{R_2^3}$

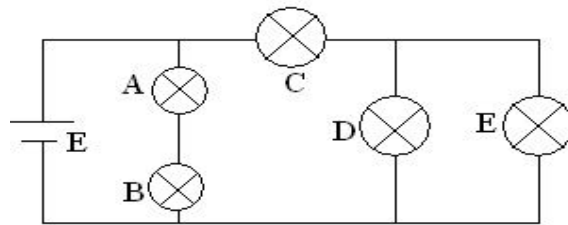
18. Two capillary tubes of same length but different radii  $r_1$  and  $r_2$  are fitted in parallel to the bottom of a vessel. The pressure head is  $P$ . What should be the radius of a single tube that can replace the two tubes so that the rate of flow is same as before.

- 1)  $r_1^4 + r_2^4$                       2)  $(r_1^2 + r_2^2)^{1/4}$                       3)  $(r_1^4 + r_2^4)^{1/4}$                       4)  $r_1 + r_2$

19. A person is listening to two trains one **approaching** him while the other moving away from him. The speed of both the trains is 5 m/sec. If both trains give off whistle of their natural frequency of 280 Hz, then the observer hear ----- no. of beats (  $V_{\text{sound}} = 350 \text{ m/sec}$  )

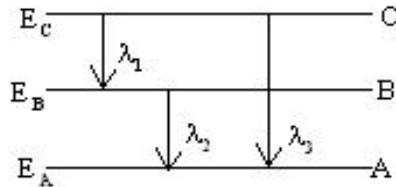
- 1) 6                      2) 7                      3) 5                      4) 8

20. The circuit below is made up using identical bulbs. The bulb of maximum brightness of the following will be



- 1) A                                      2) C                                      3) D                                      4) E

21. Energy levels A, B, C of an atom are shown below if  $E_A < E_B < E_C$ , then correct statement of the following is

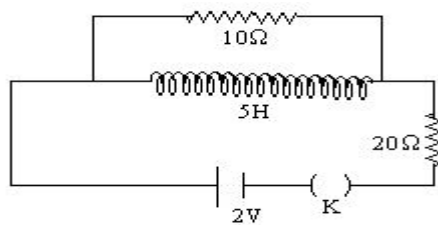


- 1)  $\lambda_3 = \lambda_1 + \lambda_2$                       2)  $\lambda_3 = \frac{\lambda_1 \lambda_2}{\lambda_2 + \lambda_1}$                       3)  $\lambda_1 + \lambda_2 + \lambda_3 = 0$                       4)  $\lambda_3^2 = \lambda_2^2 + \lambda_1^2$

22. The binding energy per nucleon for deuteron  ${}_1\text{H}^2$  and  ${}_2\text{He}^4$  are 1.1 Mev and 7 Mev respectively. The energy released when two deuterons fuse to form a helium nucleus is

- 1) 1.1 Mev                                      2) 7 Mev                                      3) 23.6 Mev                                      4) 6 Mev

23. Two resistances of  $10\ \Omega$  and  $20\ \Omega$  and an ideal inductor of inductance 5H are connected to a 2V battery, through a key K, as shown in figure. The key inserted at  $t = 0$  what is final value of current in the  $10\ \Omega$  resistor ?



- 1)  $\frac{2}{3}\ \text{A}$                                       2)  $\frac{1}{3}\ \text{A}$                                       3)  $\frac{1}{6}\ \text{A}$                                       4) zero

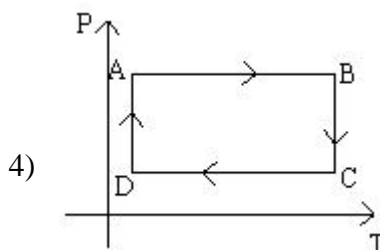
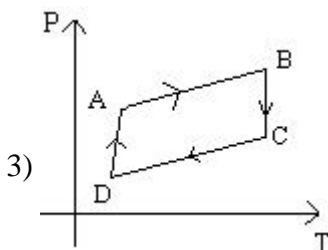
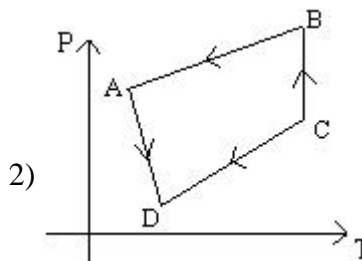
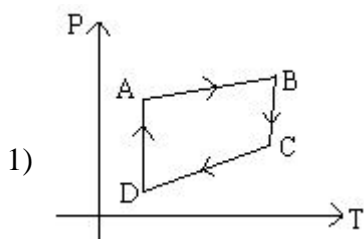
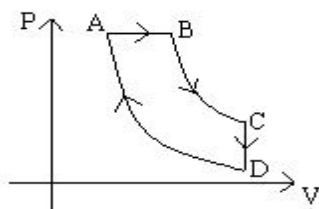
24. In a series LCR circuit the frequency of a 10V AC source is adjusted in such a fashion that the reactance of the inductor measures  $15\ \Omega$  and that of the capacitor  $11\ \Omega$ . If  $R = 3\ \Omega$ , the potential difference across the series combination of L and C will be -----

- 1) 8 V                                      2) 10 V                                      3) 22 V                                      4) 52 V

25. A ray of light is incident at  $60^\circ$  on prism of refracting angle  $30^\circ$  the emerging ray is at an angle of  $30^\circ$  with the incident ray. The value of refractive index of prism is

- 1)  $\frac{\sqrt{3}}{4}$                                       2)  $\frac{\sqrt{3}}{2}$                                       3)  $\sqrt{3}$                                       4)  $2\sqrt{3}$

26. A cyclic process ABCD is shown below in the given P-V diagram. In the following answers the one that represents the same process as in P-V diagram



27. 3 equal resistors connected in series across a source of emf together dissipate 10 watt of power. If they are all connected in parallel to the same source of emf, the power dissipated is -----

- 1) 30 w                      2)  $\frac{10}{3}$  w                      3) 10 w                      4) 90 w

28. One end of a long metallic wire of length L is tied to the ceiling. The other end is tied to massless spring of spring constant k. A mass ( m ) hangs freely from the free end of the spring. The area of cross-section and Young`s modulus of the wire are A and Y. If mass is slightly pulled down and released, it will oscillate with time period T is -----

- 1)  $2\pi\sqrt{\frac{m}{k}}$                       2)  $2\pi\sqrt{\frac{m(YA + KL)}{YAK}}$                       3)  $2\pi\sqrt{\frac{mYA}{KL}}$                       4)  $2\pi\sqrt{\frac{mL}{YA}}$

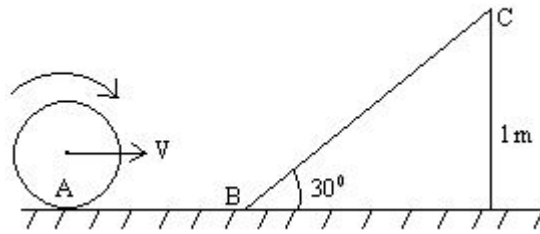
**Passage-I:**

A beam of light containing of two wavelengths  $6500\text{\AA}$  and  $5200\text{\AA}$ , is used to obtain interference fringes in young`s double slit experiment. The distance between the slits is 2 mm and the distance between the plane of slits and the screen is 120 cm .

29. Find the distance of third bright fringe on the screen from the central maximum for wavelength  $6500\text{\AA}$ .  
 1)  $1.17 \times 10^{-3}$  m                      2)  $1.56 \times 10^{-3}$  m                      3)  $1.17 \times 10^{-4}$  m                      4)  $1.56 \times 10^{-4}$  m
30. What is the least distance from the central maximum where the bright fringes due to both wavelengths coincide.  
 1)  $1.17 \times 10^{-3}$  m                      2)  $1.56 \times 10^{-3}$  m                      3)  $1.17 \times 10^{-4}$  m                      4)  $1.56 \times 10^{-4}$  m

**Passage-II :**

A small sphere of mass 1 kg is rolling without slipping with linear speed  $v = \sqrt{\frac{200}{7}}$  m/sec. It leaves the inclined plane at point C.



31. Its linear speed at point C

- 1)  $\sqrt{\frac{100}{7}}$  m/sec      2)  $\sqrt{\frac{50}{7}}$  m/sec      3)  $\sqrt{\frac{100}{35}}$  m/sec      4)  $\sqrt{\frac{200}{35}}$  m/sec

32. The ratio of rotational and translational kinetic energy of sphere when it strikes the ground after leaving from point C.

- 1)  $\frac{2}{5}$       2)  $\frac{2}{3}$       3)  $\frac{1}{6}$       4)  $\frac{1}{2}$

33. **Assertion :** The work done by the tension in the string of a simple pendulum in one complete oscillation is zero

**Reason :** No work is done by the tension in the string since tension is always at right angles to the motion of the bob.





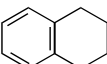
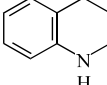
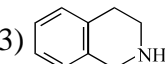
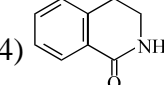
- 1) Both 'A' and 'R' are true and 'R' is correct explanation of 'A'  
2) Both 'A' and 'R' are true and 'R' is not the correct explanation of 'A'.  
3) 'A' is true and 'R' is false      4) 'A' is false and 'R' is true

34. **Assertion :** A wooden cube of side 'a' floats in a non-viscous liquid of density ' $\rho$ '. When it is slightly pressed and released it executes SHM.

**Reason :** The net force responsible for SHM is the resultant of buoyancy force and true weight of the body.

- 1) Both 'A' and 'R' are true and 'R' is correct explanation of 'A'  
2) Both 'A' and 'R' are true and 'R' is not correct explanation of 'A'  
3) 'A' is true and 'R' is false      4) 'A' is false and 'R' is true

## CHEMISTRY

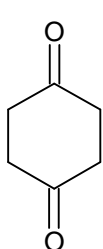
35. An electron in an atom jumps in such a way that its kinetic energy changes from  $x$  to  $\frac{x}{4}$ . The change in potential energy will be:
- 1)  $+\frac{3}{2}x$                       2)  $-\frac{3}{8}x$                       3)  $+\frac{3}{4}x$                       4)  $-\frac{3}{4}x$
36. The ionization potential for the electron in the ground state of the hydrogen atom is  $13.6 \text{ eV atom}^{-1}$ . What would be the ionization potential for the electron in the first excited state of  $\text{Li}^{2+}$ ?
- 1)  $3.4 \text{ eV}$                       2)  $10.2 \text{ eV}$                       3)  $30.6 \text{ eV}$                       4)  $6.8 \text{ eV}$
37. 2 mole of zinc is dissolved in HCl at  $25^\circ\text{C}$ . The work done in open vessel in:
- 1)  $-2.477 \text{ kJ}$                       2)  $-4.955 \text{ kJ}$                       3)  $0.0489 \text{ kJ}$                       4) None
38.  $\Delta S$  for freezing of  $10 \text{ g}$  of  $\text{H}_2\text{O}(l)$  (enthalpy of fusion is  $80 \text{ cal/g}$ ) at  $0^\circ\text{C}$  and  $1 \text{ atm}$  is:
- 1)  $12.25 \text{ J/K}$                       2)  $-0.244 \text{ J/K}$                       3)  $-2.93 \text{ J/K}$                       4)  $-12.25 \text{ J/K}$
39. For an elementary reaction  $2\text{A}+\text{B} \rightarrow \text{A}_2\text{B}$  if the volume of vessel is quickly reduced to half of its original volume then rate of reaction will
- 1) unchange                      2) increase for four times                      3) increase eight times                      4) decrease eight time
40. The decomposition of azo methane, at certain temperature according to the equation  $(\text{CH}_3)_2\text{N}_2 \rightarrow \text{C}_2\text{H}_6+\text{N}_2$  is a first order reaction. After 40 minutes from the start, the total pressure developed is found to be  $350 \text{ mm Hg}$  in place of initial pressure  $200 \text{ mm Hg}$  of azo methane. The value of rate constant  $k$  is;
- 1)  $2.88 \times 10^{-4} \text{ sec}^{-1}$                       2)  $1.25 \times 10^{-4} \text{ sec}^{-1}$                       3)  $5.77 \times 10^{-4} \text{ sec}^{-1}$                       4) None of these
41. What is  $[\text{NH}_4^+]$  in a solution that contain  $0.02 \text{ M NH}_3$  ( $K_b = 1.8 \times 10^{-5}$ ) and  $0.01 \text{ M KOH}$ ?
- 1)  $9 \times 10^{-6}$                       2)  $1.8 \times 10^{-5}$                       3)  $3.6 \times 10^{-5}$                       4) None of these
42. Which of the following pair the EAN of central metal atom is not same?
- 1)  $[\text{Fe}(\text{CN})_6]^{3-}$  and  $[\text{Fe}(\text{NH}_3)_6]^{3+}$                       2)  $[\text{Cr}(\text{NH}_3)_6]^{3+}$  and  $[\text{Cr}(\text{CN})_6]^{3-}$
- 3)  $[\text{FeF}_6]^{3-}$  and  $[\text{Fe}(\text{CN})_6]^{3-}$                       4)  $[\text{Ni}(\text{CO})_4]$  and  $[\text{Ni}(\text{CN})_4]^{2-}$
43. Froth floatation process for the concentration of sulphide ores is an illustration of the practical application of:
- 1) adsorption                      2) absorption                      3) sedimentation                      4) coagulation
44. Which of the following compounds liberate(s) oxygen on heating?
- 1)  $\text{Li}_2\text{CO}_3$                       2)  $\text{LiOH}$                       3)  $\text{LiNO}_3$                       4)  $\text{NaOH}$
45. Which of the following is a cyclic ether possessing the characteristics of aromatic compounds?
- 1)                       2)                       3)                       4) 
46. Which one of the following compounds undergoes bromination of its aromatic ring (electrophilic aromatic substitution) at the fastest rate?
- 1)                       2)                       3)                       4) 



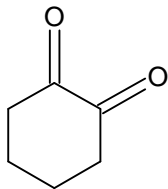
47. IUPAC name of  $\text{CH}_3-\text{CH}_2-\underset{\text{H}}{\text{N}}-\text{CHO}$  is

- 1) N-ethyl aminoethanol                      2) N-formyl aminoethane  
3) N-ethyl methanamide                     4) ethanamine

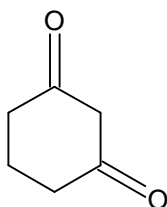
48. Which of the following will give more enol contents?



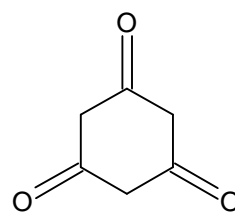
(I)



(II)



(III)



(IV)

- 1) I    2) II    3) III    4) IV

49. In the given reaction  $\text{C}_6\text{H}_5-\text{C}\equiv\text{C}-\text{CH}_3 \xrightarrow{\text{Na}/\text{NH}_3(l)} [\text{X}] \dots \dots [\text{X}]$  will be

- 1) 1-phenylpropane              2) 1-phenylpropene              3) trans-1-phenylpropene              4) cis-1-phenylpropene

50. Which pair of species will have similar geometry

- 1)  $\text{SO}_3 \cdot \text{SO}_3^{2-}$                       2)  $\text{SO}_3 \cdot \text{SO}_4^{2-}$                       3)  $\text{SO}_3 \cdot \text{CO}_3^{2-}$                       4)  $\text{SO}_4^{2-} \cdot \text{CO}_3^{2-}$

51. Which of the following order regarding bond order is correct?

- 1)  $\text{O}_2^- < \text{O}_2 < \text{O}_2^+$               2)  $\text{O}_2^- > \text{O}_2 > \text{O}_2^+$               3)  $\text{O}_2^- > \text{O}_2 < \text{O}_2^+$               4)  $\text{O}_2^- < \text{O}_2 > \text{O}_2^+$

52. The second ionisation potentials of the following elements are in the order

- 1)  $\text{F} > \text{O} > \text{N} > \text{C}$                       2)  $\text{C} > \text{N} > \text{O} > \text{F}$                       3)  $\text{O} > \text{F} > \text{N} > \text{C}$                       4)  $\text{O} > \text{N} > \text{F} > \text{C}$

53. Which of the following is an outer orbital complex?

- 1)  $[\text{Fe}(\text{CN})_6]^{4-}$                       2)  $[\text{Mn}(\text{CN})_6]^{4-}$                       3)  $[\text{Co}(\text{NH}_3)_6]^{3+}$                       4)  $[\text{Ni}(\text{NH}_3)_6]^{2+}$

54.  $\text{H}_2\text{S}$  gas when passed through a solution of cations containing HCl precipitates the cations of second group of qualitative analysis but not those belonging to the fourth group. It is because

- 1) presence of HCl decreases the sulphide ion concentration  
2) solubility product of group II sulphides is more than that of group IV sulphides  
3) presence of HCl increases the sulphide ions concentration  
4) sulphides of group IV cations are unstable in HCl.

55. The density of a pure substance 'A' whose atoms pack in cubic close pack arrangement is 1 g/cc. If B atoms can occupy tetrahedral void and if all the tetrahedral voids are occupied by 'B' atom. What is the density of resulting solid in g/cc. [Atomic mass (A)=30 g/mol and atomic mass (B)=50 g/mol]

- 1) 3.33                                      2) 4.33                                      3) 2.33                                      4) 5.33

56. How many gm of solid KOH must be added to 100 mL of a buffer solution?

Which is 0.1 M each with respect to acid HA and salt KA to make the pH of solution 6.0.

[Given:  $pK_a(\text{HA}) = 5$ ]

- 1) 0.458                                      2) 0.327                                      3) 5.19                                      4) None of these

57. The correct sequence of polarity of the following molecule

a) Benzene                      b) Inorganic Benzene                      c)  $\text{PCl}_3\text{F}_2$                       d)  $\text{PCl}_2\text{F}_3$

a      b      c      d    a      b      c      d

1) P      NP      NP      P2) NP      NP      NP      P

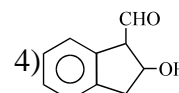
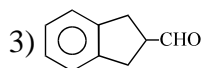
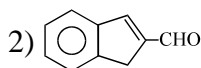
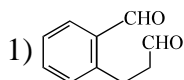
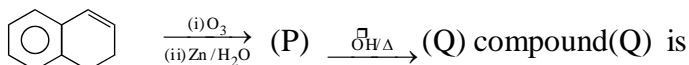
3) NP      P      NP      P4) NP      P      P      NP

(Where, P=polar, NP=non-polar)

58. Consider the following complex:  $[\text{Co}(\text{NH}_3)_5\text{CO}_3]\text{ClO}_4$  The coordination number, oxidation number, number of d-electrons and number of unpaired d-electrons on the metal are respectively:

1) 6,2,7,3                      2) 7,2,7,1                      3) 5,3,6,4                      4) 6,3,6,0

59. Consider the following



60. Which of the following order are correct ?

(I) Acidity order : o-nitrobenzoic acid > p-nitrobenzoic acid > m-nitrobenzoic acid

(II) Basicity order :  $\text{NH}_2$ —> EtO—> OH—> RCOO—> Cl—

(III) Heat of hydrogenation: cis-2-butene > trans-2-butene

(IV) Ease of decarboxylation :  $=\text{C}_6\text{H}_5\text{COCO}_2\text{H} =$

1) I & II

2) I & III

3) I & IV

4) I , II & III

61. Organic compound (A)  $\xrightarrow[\text{rearrangement}]{\text{PCl}_5}$  B  $\xrightarrow[\Delta]{\text{H}_2\text{O}/\text{H}^+}$   $\text{CH}_3\text{CH}_2\text{NH}_2 + \text{CH}_3\text{COOH}$

The compound A is:

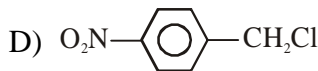
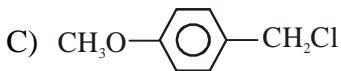
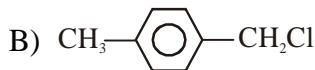
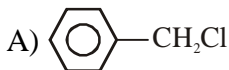
1) Syn-ethylmethyl ketoxime

2) Anti-Ethyl methyl ketoxime

3) N-Methyl propionamide

4) N-Ethyl acetamide

62. Consider the following chlorides



The order of reactivity of A, B, C and D towards hydrolysis by  $\text{S}_{\text{N}}1$  mechanism is

1)  $\text{A} < \text{B} < \text{C} < \text{D}$

2)  $\text{D} < \text{C} < \text{B} < \text{A}$

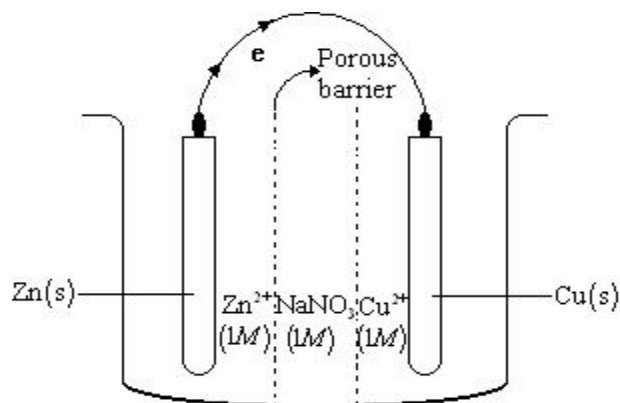
3)  $\text{D} < \text{A} < \text{B} < \text{C}$

4)  $\text{C} < \text{B} < \text{A} < \text{D}$

**Passage-I:**

A Galvanic cell consist of three compartments as shown in figure. The first compartment contain  $ZnSO_4(1M)$  and III compartment contain  $CuSO_4(1M)$ . The mid compartment contain  $NaNO_3(1M)$ . Each. compartment contain 1 L solution:

$$E_{Zn^{2+}/Zn}^o = -0.76; E_{Cu^{2+}/Cu}^o = +0.34$$

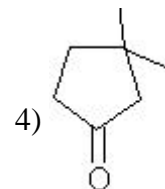
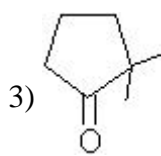
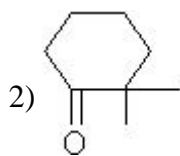
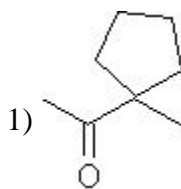
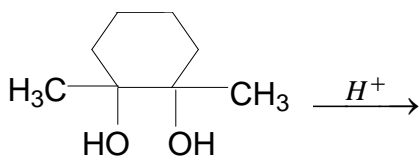


63. The concentration of  $Zn^{2+}$  in first compartment after passage of 0.1 F charge will be:  
 1) 1 M                                      2) 1.05 M                                      3) 1.025 M                                      4) 0.5 M
64. The concentration of  $NO_3^-$  in mid compartment after passage of 0.1 F of charge will be:  
 1) 0.95 M                                      2) 0.90 M                                      3) 0.975 M                                      4) 1.05 M
65. The concentration of  $SO_4^{2-}$  ion in III compartment will be:  
 1) 1.05 M                                      2) 1.025 M                                      3) 0.95 M                                      4) 0.975 M

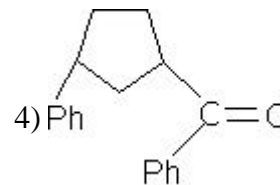
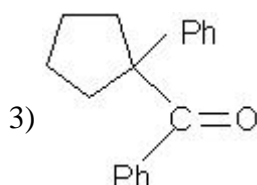
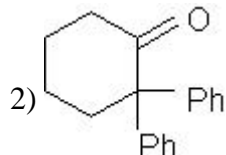
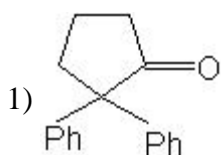
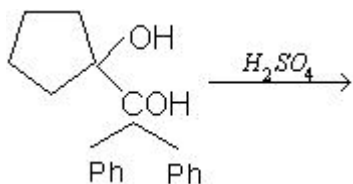
**Passage-II:**

The pinacol rearrangement is formally a dehydration. The reaction is acid catalysed, and the first step is protonation of one of the hydroxyl oxygens. Loss of water gives a tertiary carbocation, as expected for any tertiary alcohol. Migration of Methyl group places the positive charge on the carbon atom bearing the second  $-OH$  group, where oxygen's non-bonding electrons help to stabilize the charge through resonance. This extra stability is the driving force for the rearrangement. Deprotonation of the resonance stabilized cation gives the product, pinacolone.

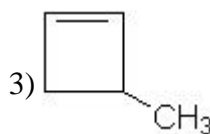
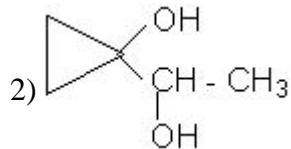
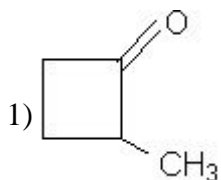
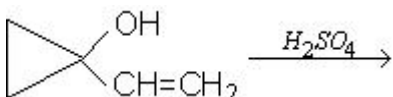
66. Which of the following is a major product of the reaction :



67. Predict the major product of the reaction:



68. The major product of the following reaction would be:



4) All

## MATHEMATICS

69. If  $f: \mathbb{R} \rightarrow \mathbb{R}$  is real valued function given by  $f(x) = |x^2 - 4|x| + 12|$ , then  $f(x) = a$ . Which of the following is not true

1) has two distinct real roots if  $a > 12$

2) has four distinct real roots if  $12 > a > 8$

3) can have at most 8 real roots

4) have sum of real roots to be zero, if  $a < 4$

70. The number of 4 digit numbers that can be formed with non-zero digit in which no two consecutive digits are same is\_\_

1)  $3^2 \times 2^9$

2)  $3^2 \times 2^6$

3)  $3^3 \times 2^4 \times 7$

4)  $3^2 \times 2 \times 7$

71. The area of the region of the argand plane described by the  $z$  satisfying,  $\frac{\pi}{6} \leq \text{Arg}z \leq \frac{2\pi}{3}$  and  $3 \leq |z| \leq 5$  is

1)  $4\pi$

2)  $3\pi$

3)  $\frac{\pi}{4}$

4)  $\frac{\pi}{2}$

72. A normal to the parabola  $y^2 = 4ax$  with slope  $m$  touches the rectangular hyperbola  $x^2 - y^2 = a^2$  if

1)  $m^6 + 4m^4 - 3m^2 + 1 = 0$

2)  $m^6 - 4m^4 + 3m^2 - 1 = 0$

3)  $m^6 + 4m^4 + 3m^2 + 1 = 0$

4)  $m^6 - 4m^4 - 3m^2 + 1 = 0$

73. Let  $A$  and  $B$  be two sets. If  $A \cap X = B \cap X = \phi$  and  $A \cup X = B \cup X$  for some set  $x$  then

1)  $A=B$

2)  $A \subset B$

3)  $B \subset A$

4) none

74. If  $\frac{a+bx}{a-bx} = \frac{b+cx}{b-cx} = \frac{c+dx}{c-dx}$  ( $x \neq 0$ ), then a,b,c and d are in  
 1) AP                                      2) GP                                      3) HP                                      4) none
75. Let N denote the set of all natural numbers and R be the relation on  $N \times N$  defined by  $(a,b) R (c,d)$  if  $ad(b+c)=bc(a+d)$ , then R is  
 1) Symmetric only                      2) Reflexive only                      3) Transitive only                      4) An equivalence relation
76. The equation  $\cos^8 x + b \cos^4 x + 1 = 0$  will have a solution if 'b' belongs to  
 1)  $(-\infty, 2)$                               2)  $[2, \infty)$                               3)  $(-\infty, -2]$                               4)  $(-2, 2)$
77. Let  $f(n) = 2 \cos nx \forall n \in N$ , then  $f(1)f(n+1) - f(n)$  is equal to  
 1)  $f(n+3)$                               2)  $f(n+2)$                               3)  $f(n+1)f(2)$                               4)  $f(n+2)f(2)$
78. If vectors  $\vec{a}$  and  $\vec{b}$  are two adjacent sides of a parallelogram then the vector representing the altitude of the parallelogram which is perpendicular to  $\vec{a}$  is  
 1)  $\vec{b} + \frac{\vec{b} \times \vec{a}}{|\vec{a}|^2}$                               2)  $\frac{\vec{a} \cdot \vec{b}}{|\vec{b}|^2} \vec{b}$                               3)  $\vec{b} - \frac{\vec{b} \cdot \vec{a}}{|\vec{a}|^2} \vec{a}$                               4)  $\frac{\vec{a} \times (\vec{b} \times \vec{a})}{|\vec{a}|^2}$
79. The value of 'a' so that the volume of the parallelepiped formed by the vectors  $i + aj + k$ ,  $j + ak$  and  $ai + k$  is minimum is  
 1)  $\sqrt{3}$                                       2)  $\frac{1}{\sqrt{3}}$                                       3) 3                                      4) 0
80. The points on y-axis whose perpendicular distance from the line  $4x-3y-12=0$  is 3 are  
 1) (0,1), (0,-9)                              2) (0,1), (0,9)                              3) (1,0), (-9,0)                              4) none
81. Statement 1: The sum of coefficients in the expansion of  $(3^{-x/4} + 3^{5x/4})^n$  is  $2^n$   
 Statement 2: The sum of coefficient in the expansion of  $(x + y)^n$  is  $2^n$  when we put  $x=y=1$   
 1) Both the statements are true and statement 2 is the correct explanation of statement 1  
 2) Both the statements are true and statement 2 is the not correct explanation of statement 1  
 3) Statement 1 is true, statement 2 is false  
 4) Statement 1 is false, statement 2 is true
82. If  $f(x) = \max \left\{ \sin x, \cos x, \frac{1}{2} \right\}$ , then the number of critical points in the  $(0, 2\pi)$   
 1) 1                                      2) 2                                      3) 3                                      4) 4
83. Consider the sequence 1,2,2,4,4,4,4,8,8,8,8,8,8,8,8,.....then 2011th term will be  
 1)  $2^9$                                       2)  $2^{11}$                                       3)  $2^{10}$                                       4)  $20^{12}$
84. The shortest distance from the plane  $12x + 4y + 3z = 327$  to the sphere  
 $x^2 + y^2 + z^2 + 4x - 2y - 6z = 155$  is  
 1) 39                                      2) 26                                      3)  $11\frac{4}{13}$                                       4) 13

85. The area bounded by circle  $x^2 + y^2 = 4$ , curve  $y = \left[ \sin^2 \frac{x}{4} + \cos \frac{x}{4} \right]$ , where  $[ \ ]$  denotes the greatest integer function less or equal to  $x$  and the  $x$ -axis is
- 1)  $\frac{\pi}{3} + \sqrt{3}$  sq.units      2)  $\frac{2\pi}{3} + \sqrt{3}$  sq.units      3)  $\frac{\pi}{4} + \sqrt{3}$  sq.units      4) none
86. The value of  $\sum_{r=1}^{\infty} \cot^{-1} \left( r^2 + \frac{3}{4} \right)$  equal to
- 1)  $\tan^{-1}(2)$       2)  $\tan^{-1} \left( \frac{1}{2} \right)$       3)  $\frac{\pi}{4}$       4)  $\tan^{-1} \sqrt{2}$
87. The sum  $\int_{-3}^{-7} \tan(x^2 - 6) dx + \int_{-6}^{-2} \tan(x^2 + 18x + 75) dx$
- 1) 0      2) 1      3) 2      4) none
88.  $\lim_{\theta \rightarrow 0} \left\{ \left[ \frac{2011 \sin \theta}{\theta} \right] + \left[ \frac{2010 \tan \theta}{\theta} \right] \right\}$ , where  $[x]$  denotes G.I.F  $\leq x$ , is equal to \_\_\_
- 1) 4020      2) 4021      3) 4019      4) 2010
89. If  $t_1$  and  $t_2$  are roots of the equation  $t^2 + \lambda t + 1 = 0$ , where  $\lambda$  is an arbitrary constant, then the line joining the points  $(at_1^2, 2at_1)$  and  $(at_2^2, 2at_2)$  always passes through a fixed point whose coordinates are
- 1)  $(a, 0)$       2)  $(0, 0)$       3)  $(-a, 0)$       4)  $(a, a)$
90. The mean and variance of 7 observations are 8 and 16 respectively. If five of them are 2,4,10,12,14 then the remaining two observations are
- 1) 6,8      2) 6,9      3) 8,9      4) 3,6
91. The plane  $lx + my = 0$  is rotated about its line of intersection with the plane  $z=0$  through an angle  $\alpha$ . The equation of the plane in the new position is
- 1)  $lx + my \pm z\sqrt{l^2 + m^2} \tan \alpha = 0$       2)  $lx + my \pm z\sqrt{l^2 - m^2} \tan \alpha = 0$   
3)  $lx + my \pm z\sqrt{l^3 - m^3} \tan \alpha = 0$       4)  $lx + my \pm z\sqrt{l^3 + m^3} \tan \alpha = 0$
92. If  $f(x)$  is continuous such that  $|f(x)| \leq 1 \forall x \in R$  and  $g(x) = \frac{e^{f(x)} - e^{|f(x)|}}{e^{f(x)} + e^{|f(x)|}}$ , then range of  $g(x)$  is
- 1)  $[0, 1]$       2)  $\left[ 0, \frac{e^2 + 1}{e^2 - 1} \right]$       3)  $\left[ 0, \frac{e^2 - 1}{e^2 + 1} \right]$       4)  $\left[ \frac{1 - e^2}{1 + e^2}, 0 \right]$
93. Let A and B be the sets  $\{1,2,3,\dots,10\}$  and  $\{1,2,\dots,20\}$  respectively. A function is selected randomly from A to B the probability that the function is non-decreasing is
- 1)  $\frac{20c_{10}}{(20)^{10}}$       2)  $\frac{29c_{20}}{(20)^{10}}$       3)  $\frac{29c_{19}}{(20)^{10}}$       4) none

94. The value of  $\left[ \sin^{-1}(\sin 5) + \cos^{-1}(\cos 10) + \tan^{-1}(\tan(-6)) + \cot^{-1}(\cot(-10)) \right]$  is ([.] denotes greatest integer function)  
 1) 1                                      2) 2                                      3) 3                                      4) 4
95. The value of  $C_3 + C_7 + C_{11} + \dots$  is ( $C_0, C_1, C_2, \dots$  denotes binomial coefficients)  
 1)  $\frac{1}{2} \left( 2^{n-1} - 2^{n/2} \sin \frac{n\pi}{4} \right)$                                       2)  $\frac{1}{2} \left( 2^{n-1} + 2^{n/2} \sin \frac{n\pi}{4} \right)$   
 3)  $\frac{1}{4} \left( 2^{n+1} - 2^{n/2} \sin \frac{n\pi}{4} \right)$                                       4) none
96. If  $\alpha$  is a root of the equation  $x^2 - 20x + 64 = 0$  and  $\alpha = e^{\left( 1 + |\cos \theta| + \cos^2 \theta + |\cos^2 \theta| + \cos^4 \theta + \dots \right) \log_e 4}$   
 1)  $\frac{\pi}{3}, \frac{2\pi}{3}$  only                                      2)  $\frac{\pi}{3}, \frac{\pi}{2}, \frac{2\pi}{3}$  only                                      3)  $\frac{\pi}{6}, \frac{\pi}{2}, \frac{5\pi}{6}$  only                                      4)  $\frac{\pi}{3}, \frac{\pi}{2}$  only
97. A square ABCD of diagonal is folded along the diagonal AC, so that plane DAC, BAC are right angles. Then shortest distance between DC and AB is  
 1)  $\frac{2a}{\sqrt{3}}$                                       2)  $\frac{2\sqrt{3}a}{\sqrt{5}}$                                       3)  $\frac{\sqrt{3}a}{2}$                                       4)  $\frac{\sqrt{3}a}{5}$
98. A point P moves inside a triangle formed by A(0,0), B(1,  $\sqrt{3}$ ), C(2,0) such that  $\min\{PA, PB, PC\} = 1$ , then the area bounded by the curve traced by P is  
 1)  $3\sqrt{3} - \frac{3\pi}{2}$                                       2)  $\sqrt{3} + \frac{\pi}{2}$                                       3)  $\sqrt{3} - \frac{\pi}{2}$                                       4)  $3\sqrt{3} + \frac{3\pi}{2}$
99. If  $f(x) = x + \int_0^1 (xy^2 + x^2y) f(y) dy$ , then f(x) attains an minimum at  
 1)  $x = 9/8$                                       2)  $x = -9/8$                                       3)  $x = 0$                                       4)  $x = 1$
100. If exactly one root of the equation  $x^2 - (k-1)x + k(k+4) = 0$  lies between the roots of the equation  $x^2 - (k+3)x + k+2 = 0$  then  
 1)  $k \in (-6, -3)$                                       2) (3, 6)                                      3)  $k \in [-3, 1]$                                       4) [1, 6]
101. If  $f(x) = \begin{vmatrix} 4\sin^2 x & 1 & 1 \\ (1-\sin x)^2 & (2+\sin x)^2 & (1-\sin x)^2 \\ (1+\sin x)^2 & (1+\sin x)^2 & \sin^2 x \end{vmatrix}$  then  $\int_{-\pi/2}^{\pi/2} f(x) dx + k\pi = 0$  then k is \_\_\_\_  
 1) 1                                      2) 2                                      3) 3                                      4) 4
102. If  $a > 0, b > 0$  and  $a+b=1$  then the least value of  $\left( a + \frac{1}{a} \right)^2 + \left( b + \frac{1}{b} \right)^2$  is  
 1) 8                                      2) 12                                      3)  $\frac{25}{2}$                                       4)  $\frac{17}{2}$