

TEST : I - GENERAL AWARENESS

- Which country along with Nepal accepted Indian Rupee as a legal tender?
(1) Pakistan (2) Myanmar
(3) Bhutan (4) Sri Lanka
(5) None of these
- Which financial organization has decided to set-up a \$ 2 billion swap facility for SAARC member-nations?
(1) World Bank
(2) State Bank of India
(3) Reserve Bank of India
(4) International monetary fund.
(5) Asian development Bank
- BASEL III norms will come into force :
(1) 1st Feb 2013 (2) 1st March 2013
(3) 1st April 2013 (4) 1st January 2013
(5) None of these
- Which country will host the 2019 cricket world cup ?
(1) New Zealand (2) Australia
(3) India (4) South Africa
(5) England
- Mata Prasad pandey was unanimously elected speaker of the 16th Uttar Pradesh Assembly in April 2012, to which Party he belongs to?
(1) Bahujan Samaj Party
(2) Congress
(3) Bharatiya Janta Party
(4) Samajwadi Party.
(5) None of these
- Who is the Finance Minister of India at present?
(1) Pranab Mukherjee (2) Dr. Manmohan Singh
(3) P. Chidambaram (4) S.M. Krishna
(5) None of these
- Recently, RBI has allowed NBFC's to open their ATM's. These ATM's are called as :
(1) Any Time Money ATM's
(2) All Time Money ATM's
(3) White Level ATM's
(4) Insta Cash ATM's
(5) Supply Money ATM's
- Which airline has been ranked as the "World's Best Airline" for the second consecutive year?
(1) Air India (2) Qatar Airways
(3) Lufthansa (4) Fly Amirites
(5) None of these
- Vijay Kumar is related to which sport?
(1) Wrestling (2) Boxing
(3) Shooting (4) Badminton
(5) Lawn Tennis
- Who is the Director of the Vikram Sarabhai Space Centre (VSSC) at present?
(1) S.P. Rao (2) P.S. Veeraraghavan
(3) L.M. Raghavan (4) S.D. Verma
(5) None of these
- Which is the World's oldest International financial organization?
(1) International Monetary Fund
(2) World Bank
(3) Bank for International settlements
(4) International Finance Corporation
(5) None of these
- Whom did Roger Federer defeated in the finals of the Wimbledon 2012?
(1) Rafael Nadal (2) Andy Murray
(3) Novak Djokovic (4) Andy Roddick
(5) None of these
- Expand the term EEFCT
(1) Exchange Earner's Foreign Currency.
(2) Exchange Earners Floating Currency
(3) Exchange Earner's Flexible Currency.
(4) External Earner's Foreign Currency.
(5) None of these
- On which date did the parliament of India celebrated the 60th anniversary of the first sitting of Parliament?
(1) 26th May (2) 21st May
(3) 13th May (4) 9th May
(5) None of these
- Which sport category made a debut in the London Olympic 2012?

- (1) Women's Hockey (2) Women's Football
(3) Women's Basketball (4) Women's Boxing
(5) Men's Beach Volleyball
16. How much money is being given to people under Indira Gandhi National Old Age Pension Scheme?
(1) ₹ 250 (2) ₹ 300
(3) ₹ 200 (4) ₹ 400
(5) ₹ 600
17. In May 2012, NATO summit was held in :
(1) U.S.A (2) Afghanistan
(3) Britain (4) North Korea
(5) South Korea
18. Who won the Uber Cup played recently?
(1) India (2) Indonesia
(3) China (4) Malaysia
(5) Thailand
19. "Hunar"-a skill development programme was launched in?
(1) January 2011 (2) February 2011
(3) January 2012 (4) February 2012
(5) None of these
20. Yogeshwar Dutt won the bronze medal in Freestyle wrestling in London Olympics 2012, in which category?
(1) 66 kg (2) 56 kg
(3) 60 kg (4) 65 kg
(5) None of these
21. Recently, who became the member of the World Trade Organization?
(1) Russia (2) Canada
(3) Singapore (4) Malaysia
(5) Japan
22. Who has written the book "God of small things"?
(1) Amitav Ghosh (2) V.S. Naipaul
(3) Arundhati Roy (4) Kiran desai
(5) Anita Desai
23. Which of the following country is not a member of Shanghai Cooperation Organization?
(1) Russia (2) Britain
(3) China (4) India
(5) None of these
24. For how many years, the Banks have been directed by the Reserve Bank of India to maintain records relating to suspicious transactions?
(1) 5 years (2) 5 years
(3) 8 years (4) 10 years
(5) 12 years
25. Recently, which Pakistani Interior minister was suspended for dual nationality?
(1) Imran Khan (2) Sherry Rehman
(3) Rehman Malik (4) Ifkkaar Alam
(5) None of these
26. Which Indian actor is set to make hollywood debut with the Lord of the Rings producer Barrie Osborne?
(1) Kamal Hasan (2) Hrithik Roshan
(3) Irfan Khan (4) Anil Kapoor
(5) Superstar Rajnikant
27. Where does Inflation stand as on May 2012?
(1) 8.55% (2) 7.55%
(3) 6.55% (4) 9.55%
(5) None of these
28. Which PSU bank has waived off minimum balance criteria for savings bank account?
(1) Punjab National Bank
(2) Bank of Baroda
(3) Bank of India
(4) State Bank of India
(5) None of these.
29. In budget 2012-13, which new scheme has been announced by Pranab Mukherjee
(1) Rajiv Gandhi Equity Savings Scheme
(2) Gramin Pension Scheme
(3) Rajiv Gandhi Pension Scheme
(4) Gramin Equity Scheme
(5) None of these
30. Who amongst the following gave the concept of PURA?
(1) Manmohan Singh (2) Rajiv Gandhi
(3) APJ Abdul Kalam (4) Sonia Gandhi
(5) None of these
31. Gross Non-Performing Assets (NPAs) as a per cent of total advances at the end of March 2012 were highest in case of:
(1) Scheduled Commercial Banks
(2) Nationalised Banks
(3) Public Sector Banks
(4) Old Private Banks
(5) New Private Banks
32. The Reserve Bank of India asked banks to initiate steps to allot UCIC to all their customers in June 2012. What is the full form of UCIC?
(1) Unique Customer Interaction Code
(2) Uniform Customer Identification Code
(3) Unique Customer Identification Code
(4) Uniform Customer Interaction Code
(5) Universal Customer Identification Code
33. Which rating agency scaled down India's sovereign credit outlook to 'negative', from 'stable' citing

reasons such as corruption and the absence, or of inadequate reforms in June 2012?

- (1) Standard and Poor's (2) Moody's
(3) DBRS (4) Fitch
(5) CRISIL

34. Which bank has set up India's first "Talking ATM" for visually impaired persons in June 2012?

- (1) Bank of India (2) Bank of Baroda
(3) Union Bank of India (4) State Bank of India
(5) Central Bank of India

35. SBI Cards is a joint venture between State Bank of India and _____

- (1) Citibank (2) GE Capital
(3) Templeton (4) Barclays Bank
(5) Stanchart Bank

36. Which Japanese company replaced New York Life in the Indian insurance joint venture Max New York Life Insurance Company Ltd in June 2012?

- (1) Mitsui (2) Sharp
(3) Nomura (4) Mitsubishi
(5) Marubeni

37. What was insurance company Tata AIG Life renamed as in July 2012?

- (1) Tata AAA Life (2) Tata AIA Life
(3) Tata AIB Life (4) Tata AIC Life
(5) Tata AID Life

38. Krishna-Godavari D-6 gas fields are jointly owned by Reliance Industries Ltd (60%), BP Plc (30%) and _____ (10%).

- (1) Niko (2) Cairn
(3) Essar (4) Chevron
(5) Vedanta

39. Which non-Test playing nation appointed Mahendra Singh Dhoni as its Cricket Ambassador in June 2012?

- (1) Nepal (2) Canada
(3) Maldives (4) Singapore
(5) Afghanistan

40. Baron Pierre de Coubertin is known for his contribution to which field?

- (1) Arts (2) Sports
(3) Science (4) Economics
(5) Journalism

TEST : II - GENERAL ENGLISH

Directions (41-50) : Read the following passage carefully and answer the questions given below it. Certain words/phrases are given in bold to help you locate them while answering some of the questions.

An old woman lived in Uttar Kashi at the foothill of the Himalayas. She had a big farm and hence she needed many maid servants to work on it. There being a lot of work on the farm the maid servants were made to rise with the dawn.

The old woman had no alarm clock but she had a cock that crowed at the crack of dawn. No sooner did the old woman hear the cock's crow than she woke up her servants at four O'clock in the morning. This went on day after day. Her maid servants were lary and resented the fact that daily their sleep was disturbed. After a long discussion of their problems they came to the conclusion that the cock was the cause of the problem.

So they decided to kill cock. They felt that once the cock was eliminated the old lady would sleep and nobody to disturb their sleep.

Accordingly one night when the old woman was fast asleep, they caught hold of the cock and killed it. The next day their jubilation knew no bounds, for without the cock to wake her up the old lady slept till well after day break and so did her maid servants.

Realising that something was amiss, the old woman went in search of the cock, but she could not find the

bird anywhere on the farm. She was heart-broken at the loss of her faithful bird. However, undeterred the next morning she resumed her task of awakening her maid servants. Initially she woke them at a reasonable hour out of force of habit. But as the day spent by, she lost count of time and woke the servants as soon as she was awake which was generally between two O'clock to three O'clock in the morning. Some times when her insomnia was bad, she even woke them at twelve O'clock in the night. Alas! the maidservants realised their mistake. At least when the cock was alive they were regularly woken up at four O'clock in the morning. They soon realised that wicked deeds bring their own punishment.

41. What did the maid servants resent?

- (1) Getting up very early in the morning
(2) The old woman's unsympathetic behaviour
(3) The hard work they had to put up on the farm
(4) Uncooperative behaviour of the old woman
(5) None of these

42. Choose the word which is most **OPPOSITE** in the meaning to the word "eliminated" as used in the passage

- (1) astonished (2) encouraged
(3) demoralised (4) pleased
(5) escaped

43. Choose the word which is most nearly the **SAME** in meaning to the word "eliminated" as used in the passage

- (1) removed
- (2) captured
- (3) arrested
- (4) domesticated
- (5) tamed

44. What happened a day after the cock was killed?

- (1) The old woman got up after the day break
- (2) The servants got a break from their work on the farm
- (3) The old woman fired her servants for killing the cock
- (4) The old woman resolved to take revenge on the servants
- (5) None of these

45. Why did the maid servants decide to kill the cock?

- (1) The cock was nuisance for the crop
- (2) The old woman loved the cock more than the servants
- (3) The sound of the cock's crowing was harsh and uncomfortable
- (4) The servants were made to wake up at cock's crowing early in the morning
- (5) None of these

46. Which one of the following was the mistake realized by the maid servants?

- (1) Having accepted to work on the farm
- (2) Not getting up early
- (3) Not killing the cock earlier
- (4) Information the old woman about killing the cock
- (5) None of these

47. Why were the servants made to rise early in the morning?

- (1) Sun rises early in hilly area
- (2) There was a lot of work to be carried out on the farm
- (3) The old woman believed that early rising was good for health
- (4) The servants were eager to get up early to finish the work before sunset
- (5) None of these

48. Which of the following statements is **TRUE** in the context of the passage?

- (1) The old woman lived in plains
- (2) The old woman had an alarm clock to wake her up early in the morning
- (3) The maid servants ultimately repented having killed the cock
- (4) Some of the maid servants, were very unhappy at the killing of the cock
- (5) The maid servants killed the cock while they were working on the farm

49. Choose the word which is most nearly the **SAME** in meaning to the word "resumed" as used in the passage

- (1) managed
- (2) organized
- (3) planned
- (4) started
- (5) questioned

50. Which of the following statements is **NOT TRUE** in the context of the passage?

- (1) The old woman had a big farm
- (2) Sleep of the servants was always disturbed
- (3) The maid servant's condition became worse after the death of the cock
- (4) The old woman sometimes used to wake up the servants after sunrise
- (5) The cock was killed by the servants in the night

Directions (51-60) : In the following passage, there are blanks, each of which has been numbered. These numbers are printed below the passage and against each, five words are suggested, one of which fits the blank appropriately. Find out the appropriate word in each case.

Jamshodji Tata is (51) to be the path-finder of modern industrial builders. He is known as the Grand Father of Indian industry for his acumen and enthusiasm. Nobody else could have (52) of the new industries started by Jamshodji at the time when industrial (53) and revolution was yet to come of India.

Jamshodji father Nasarwanji Tata used to trade in jute with China and Britain. He started (54) from India. Jamshodji started a cloth mill in Nagpur more than hundred years ago. At that time almost all the (55) used to come from Lancashire in England. What Jamshodji (56) was praiseworthy.

Jamshodji (57) very well that an industrial revolution can only be brought in the country by setting up iron and steel industry. (58) he did not live to see the industry he had in mind, he done all (59) work. He had planned the entire steel city now known as Jamshedpur, complete with streets, roads, schools, parks, play grounds, temples, mosques, churches, etc. His (60) was fulfilled by his sons, Sir Dorabji Tata and Sir Rattan Tata Iron & Steel Factory in 1907 just after three years of his death.

- 51. (1) agreed
 - (2) empowered
 - (3) determined
 - (4) considered
 - (5) rewarded
- 52. (1) thought
 - (2) ventured
 - (3) set
 - (4) planned
 - (5) absolved
- 53. (1) acts
 - (2) machinery
 - (3) awakening
 - (4) factories
 - (5) imports

54. (1) industries (2) imports
(3) trade (4) dispatch
(5) export
55. (1) imports (2) cloth
(3) machines (4) industries
(5) goods
56. (1) dreamt (2) agreed
(3) told (4) meant
(5) did
57. (1) Advocated (2) Planned
(3) Thought (4) Knew
(5) Felt

58. (1) Although (2) surprisingly
(3) Luckily (4) Even
(5) because
59. (1) complete (2) trivial
(3) preliminary (4) external
(5) insignificant
60. (1) task (2) dream
(3) industry (4) need
(5) sentiment

Directions (61-65): Which of the phrases (1), (2), (3) and (4) given below each sentence should replace the phrase printed in bold in the sentence to make it grammatically correct? If the sentence is correct as it is given and no correction is required, mark (5) as the answer.

61. Meena loved to shop and **goes out** with her friends whenever she got time.
(1) went outside along (2) went out with
(3) goes for outing to (4) go outing and
(5) No correction required
62. Manoj was **many better** at sports than Anurag.
(1) much good than (2) many good to
(3) much better at (4) much better than
(5) No correction required
63. It was very dark and Trisha was **too scary** to go home alone.
(1) too scaring (2) to scary top
(3) to scare too (4) too scared to
(5) No correction required
64. Many people **not like being** interrupted when they are busy working.
(1) do not like being (2) do not like
(3) not liking when (4) no like being
(5) No correction required
65. The crowd loved her performance and gave her a **stand** station as she left the stage.

- (1) stand ovate (2) stood ovation
(3) stand the ovation (4) standing ovation
(5) No correction required

Directions (66-70): Each question below has two blanks, each blank indicating that something has been omitted. Choose the set of words for each blank which best fits the meaning of the sentence as a whole.

66. Organisations for the victims the inhuman and unjust attitude of the government.
(1) fighting - applauded (2) lobbying - supported
(3) working - condemned (4) stand - opposed
(5) trying-spoke
67. Forest department officials said that when the elephants were made to from their trucks, they went straight to the spot where they had been during the camp.
(1) jump - killed (2) alight - nod
(3) enter - hurt (4) step - played
(5) exit-enjoyed
68. Excise officials seized pouches of whisky a bus travelling Maharashtra.
(1) from - to (2) in - for
(3) for - towards (4) inside - on
(5) through - till
69. The court revenue authorities and PCB officials to teams and visit pharma units.
(1) directed - form
(2) announced - arrange
(3) commanded - display
(4) ruled-make
(5) told-carve
70. A collision between two buses six people dead, the driver of one of the buses.
(1) made - also
(2) left - including
(3) caused - combined
(4) resulted - except
(5) got - surpassing
- Directions (71-75):** Read each sentence to find out whether there is any grammatical error in it. The error, if any, will be in one part of the sentence. The number of that part is the answer. If there is no error, the answer is (5) i.e., 'No Error'. (Ignore the errors of punctuation, if any).
71. That boy possess (1) / three beautiful pens (2) / but he would not (3) / show them to any one. (4) / No error (5)
72. Though I had been (1) / his friend for quite a long time (2) / I refused to help him (3) / because his ill nature. (4) / No error (5)

73. I am grateful to you (1) / and all your friends (2) / for showing sympathy (3) / and kindness with me. (4) / No error (5)
74. He is the man (1) / who I know (2) / has helped my son (3) / in the final examination. (4) / No error (5)
75. The boy who was guilty for (1) / having broken the window glass (2) / came out (3) / with the truth. (4) / No error (5)

Directions (76-80) : In each question below, a sentence with four words printed in bold type is given. These are numbered as (1), (2), (3) and (4). One of these four words printed in bold may be either spelt or inappropriate in the context of the sentence. Find out the word which is wrongly spelt or inappropriate, if any. The number of that word is your answer. If all the words printed in bold are correctly spelt and also

- appropriate in the context of the sentence, mark (5) i.e. 'All correct', as your answer.
76. Quality (1) / is never an accident (2) / and is always that result of intelligent (3) / effort. (4) / All correct (5)
77. Sharad consoled (1) / Vijay and assured (2) / him that his son would return (3) / home by sunset. (4) / All correct (5)
78. One of the monkeys was keeping (1) / a track (2) / of the things (3) / done by the king's men from a distance. (4) / All correct (5)
79. The Swan lived in a pawnee (1) / and had striking (2) / golden (3) / feathers. (4) / All correct (5)
80. The mother and her daughter (1) / were happy selling milk which got them enough (2) / money to lead (3) / a comfortable (4) / life. All correct (5)

TEST : III - QUANTITATIVE APTITUDE

Directions (81-95) : What should come in place of the question mark (?) in the following questions?

81. $241 \times 27 - 1943 = ?$
 (1) 4654 (2) 4622 (3) 4564
 (4) 4546 (5) None of these
82. $181.24 + 812.14 + 218.41 = ?$
 (1) 1121.79 (2) 1112.97 (3) 1212.79
 (4) 1221.97 (5) None of these
83. $13.5 \times 16.4 \times 7.2 = ?$
 (1) 1554.38 (2) 1526.28 (3) 1594.08
 (4) 1582.18 (5) None of these
84. 25% of 424 - 7% of 454 = 37.9
 (1) 26 (2) 19 (3) 21
 (4) 15 (5) None of these
85. $35615 + 4136 - 694 - 7 \times 20$
 (1) 1954.25 (2) 1962.75
 (3) 1945.55 (4) 1925.85
 (5) None of these
86. $7777 + 35 = ?$
 (1) 242.2 (2) 225.2 (3) 228.2
 (4) 222.2 (5) None of these
87. $\sqrt{1764} + 22 = \sqrt{?}$
 (1) 8 (2) 4096
 (3) 64 (4) $\sqrt{64}$
 (5) None of these
88. $12.5 \times 3.2 \times 8.8 = ?$
 (1) 358 (2) 355 (3) 354
 (4) 356 (5) None of these
89. $(16)^3 \times 4^3 + 1024 = (4)^?$
 (1) 3 (2) 4 (3) 5
 (4) 6 (5) None of these
90. $84 + 12 \div 0.8 = ?$
 (1) 7.75 (2) 9.85 (3) 8.75
 (4) 10.15 (5) None of these
91. $22\% \text{ of } 7 + 166.64 \div 340$
 (1) 782 (2) 786 (3) 784
 (4) 792 (5) None of these
92. $5670 \div (28 \times 13.5) = ?$
 (1) 12 (2) 15 (3) 18
 (4) 14 (5) None of these
93. $(26.3 \times 12 \times 20) \div 3 + 125 = ?$
 (1) 2229 (2) 2292
 (3) 2223 (4) 2227
 (5) None of these
94. $7 \times \sqrt{144} = 311 \times 24$
 (1) 622 (2) 624 (3) 633
 (4) 634 (5) None of these
95. 45% of 816 - 23% of 7 = 240.7
 (1) 525 (2) 540 (3) 550
 (4) 560 (5) None of these
96. In how many ways can the letters of the word "GOLDEN" be arranged?
 (1) 120 (2) 720 (3) 360
 (4) 460 (5) None of these
97. A gold bracelet is sold for ₹ 13625 at a loss of 25%. What is the cost price of the bracelet?
 (1) ₹ 15900 (2) ₹ 17900
 (3) ₹ 18000 (4) ₹ 16800
 (5) None of these
98. The ratio of the present age of Mala to that of Sudha is 6:7. The ratio of their ages 8 years hence would be 8:9. What will be the ratio of their ages after 12 years?

- (1) 9.8 (2) 7.8
(3) 11:10 (4) 9:10
(5) None of these
99. In an examination it is required to get 50% of the aggregate marks to pass. A student got 275 marks and is declared failed by 45 marks. What is the maximum aggregate marks a student can get?
(1) 540 (2) 840
(3) 640 (4) 740 (5) 900
100. Find the average of the following set of scores:
224 568 331 722 369 833 139 662
(1) 681 (2) 581 (3) 481
(4) 381 (5) None of these
101. What would be the simple interest obtained on an amount of ₹ 3540 at the rate of ₹ 3540 at the rate of 7.5% p.a. after 5 years?
(1) ₹ 1327.5 (2) ₹ 1428.5
(3) ₹ 1369.5 (4) ₹ 1427.5
(5) None of these
102. What is the least number that should be added to 5200 to make it a perfect square?
(1) 73 (2) 117
(3) 129 (4) 126
(5) None of these
103. The cost of 3 chairs and 10 tables is ₹ 9856. What is the cost of 6 chairs and 20 tables?
(1) ₹ 4046 (2) ₹ 4928
(3) ₹ 4250 (4) ₹ 2940
(5) None of these
104. The average of five consecutive even numbers, p, q, r, s and t is 40. What is the product of ' r ' and ' s '?
(1) 840 (2) 220
(3) 1482 (4) 1680
(5) None of these
105. The difference between 52% of a number and 33% of the same number is 380. What is 78% of that number?
(1) 1440 (2) 1560
(3) 1610 (4) 1660
(5) 1720
106. A canteen requires 12 dozen bananas per day. How many bananas will it require for 7 weeks?
(1) 6048 (2) 7056
(3) 8400 (4) 88
(5) None of these
107. The average of man and his son is 42 years. The ratio of their ages is 2:1. What is the son's age?
(1) 38 yrs (2) 28 yrs (3) 21 yrs
(4) 26 yrs (5) 32 yrs
108. The length of a rectangle, which is 25 cms, is equal to the length of a square and the area of the rectangle is 125 cms. less than the area of the square. What is the breadth of the rectangle?
(1) 15 cms (2) 20 cms.
(3) 14 cms. (4) 12 cms.
(5) None of these


109. A car travels at the speed of 85 km/hr. and reaches its destination in 5 hours. What is distance covered by the car?
(1) 485 kms (2) 325 kms
(3) 450 kms (4) 425 kms
(5) None of these
110. The owner of a furniture shop charges his customers 15% more than the cost price. If a customer paid ₹ 9039/- for a sofa set, then what is the cost price of the sofa set?
(1) ₹ 7680/- (2) ₹ 7860/-
(3) ₹ 7830/- (4) ₹ 7660/-
(5) None of these

Directions (111-115) : What should come in place of the question mark (?) in the following number series?

111. 13 14 17 22 29 ?
(1) 33 (2) 35
(3) 36 (4) 38
(5) 37
112. 6 8 4 12 -4 ?
(1) 28 (2) -26
(3) 24 (4) -22
(5) 32
113. 53 318 1590 6360 19080 ?
(1) 38165 (2) 38170
(3) 38160 (4) 38175
(5) 38106
114. 17 18 22 31 47 ?
(1) 72 (2) 77
(3) 83 (4) 68
(5) 65
115. 222 198 178 162 150 ?
(1) 148 (2) 142
(3) 144 (4) 150
(5) 146

Directions (116-120): Study the Pie-Chart carefully to answer the questions that follow:

Percentage of students enrolled in different Hobby classes in a School
Total number of students = 3600



116. The number students enrolled in those Cooking Classes is what percent of those enrolled in Dancing Classes? (Rounded off to two digits after decimal)
- (1) 101.45 (2) 104.76
 (3) 113.84 (4) 110.28
 (5) None of these
117. What is the total number of students enrolled in Stitching and Drama Classes together?
- (1) 684 (2) 846
 (3) 648 (4) 864
 (5) None of these
118. How many students are enrolled in Painting Classes?
- (1) 550 (2) 480
 (3) 450 (4) 520
 (5) None of these

119. Number of students enrolled in Painting classes are approximately what percent of those enrolled in Singing classes?
- (1) 78 (2) 92
 (3) 83 (4) 66
 (5) 72
120. What is the ratio of number of students enrolled in Singing and Dancing classes together to those enrolled in Drama classes respectively?
- (1) 3 : 1
 (2) 4 : 7
 (3) 7 : 5
 (4) 3 : 5
 (5) None of these

TEST : IV - REASONING ABILITY

Directions (121-125) : In each of the questions below are given four statements followed by four conclusions numbered I, II, III and IV. You have to take the given statements to be true even if they seem to be at variance with commonly known facts. Read all the conclusions and then decide which of the given conclusions logically follows from the given statements disregarding commonly known facts.

121. Statement:

All plants are eagles,
 Some eagles are rabbits
 All rabbits are birds,
 Some birds are animals

Conclusions:

- I. Some animals are plant
 II. Some birds are plant
 III. Some birds are eagles
 IV. All birds are rabbits

- (1) None follows (2) Only II follows
 (3) Only III follows (4) Both II and III follow
 (5) None of these

122. Statement:

Some AC are calculators,
 Some calculators are diaries
 All notebooks are diaries,
 All diaries are computers

Conclusions:

- I. Some notebooks are calculators
 II. Some calculators are computer
 III. All notebooks are computers
 IV. Some diaries are AC

- (1) None follows (2) Only II follows
 (3) Only III follows (4) Both II and III follow
 (5) None of these

123. Statement:

All planets are stars
 All stars are lakes
 All lakes are moons
 Some moons are rocks

Conclusions:

- I. All lakes are planets
 II. All lakes are stars
 III. All moons are stars
 IV. Some rocks are stars
- (1) None follows
 (2) Only I follows
 (3) Only II follows
 (4) Only wither I or II follow
 (5) None of these.

124. Statement:

Some bats are toys
 Some toys are plastics
 Some plastics are mirrors
 No Mirrors is glass

Conclusions:

- I. Some toys are mirrors
 II. Some plastics are glasses
 III. Some bats are mirrors IV.
 No glass is plastic
- (1) Only III follows
 (2) Only either II or IV follows
 (3) Only either I or III follows
 (4) Only III or IV follows
 (5) None of these

125. Statement:

- All graduates are teachers
- Some teachers are judges
- All judges are lawyers
- Some lawyers are doctors

Conclusions:

- I. Some doctors are teachers
 - II. All graduates are judges
 - III. Some doctors are graduates
 - IV. Some lawyers are teachers
- (1) None follows (2) Only I follows
(3) Only II follows
(4) Either III and IV follow
(5) None of these

Directions (126-130) : Study the following information carefully to answer these questions.

P, Q, R, S, T, U, V and W are sitting around a circular table, facing the centre. P sits third to the right of W and third to the left of S, who sits second to the right of T. V sits second to the left of R. T is not the neighbour of Q while U is neither a neighbour of T nor of W.

126. Who sits second to the left of V?

- (1) R (2) P
(3) U (4) T
(5) None of these

127. Who sits between U and P?

- (1) S (2) R
(3) V (4) Q
(5) None of these

128. Starting from P's position, if all the eight are arranged in alphabetical order in clockwise direction, the seating position of how many members (excluding P) would not change?

- (1) None (2) One (3) Two
(4) Three (5) Four

129. Which of the following pairs has only person sitting between them, if the counting is done in the clockwise direction?

- (1) T, V (2) V, Q (3) W, P
(4) R, P (5) None of these

130. Four of the following are alike a certain way based on their positions in the seating arrangement and so form a group. Which is the one that does not belong to that group?

- (1) W, T (2) P, U (3) S, Q
(4) R, P (5) P, Q

Directions (131-135) : In the question given below, certain symbols are used with the following meaning:

P*Q means, P is neither equal to nor smaller than Q

P%Q means, P is not smaller than Q

PSQ means, P is neither greater than nor smaller Q

P#Q means, P is neither greater than nor equal than Q

P@Q means, P is not greater than Q

131. Statement : E#F, O%F, P@E, PSR

Conclusions : I. OSP

II. E#R

III. P#O

- (1) Only I is true (2) Only II is true
(3) Either I or II is true (4) Only III is true
(5) None of these

132. Statement : A*B, B@C, ASD, D#E

Conclusions : I. E*B

II. CSA

III. D#E

- (1) Only I is true
(2) Only I and II are true
(3) Only III is true
(4) None is true
(5) None of these

133. Statement : P#H, H#T, S#T, S@R

Conclusions : I. T*H

II. IST

III. S*H

- (1) All are true
(2) Either I or II and III are true
(3) Only III is true
(4) Only II is true
(5) None of these

134. Statement : S@T, Q#N, T#N, Q*O

Conclusions : I. S#N

II. N%O

III. N*O

- (1) None is true (2) Either I or III are true
(3) Only I is true (4) Only II is true
(5) None of these

135. Statement : H#J, J*K, L#K, K#M

Conclusions : I. K#M

II. L#J

III. H#L

- (1) Only I and III are true (2) Only II is true
(3) Only III is true (4) None is true
(5) None of these

Directions (136-139) : Read the following information and answer the question given below:

A + B means 'A is father of B'

A - B means 'A is wife of B'

A * B means 'A is brother of B'

A # B means 'A is sister of B'

136. If 'D' = E + F - J' then now is E related to J?

- (1) Father-in-law
- (2) Grandfather
- (3) Son-in-law
- (4) Daughter
- (5) None of these

137. If 'J - D + E = F', then which is the following is false?

- (1) J is mother of F
- (2) E is son of J
- (3) D is father of F
- (4) F is son of D
- (5) None of these

138. If 'D = E + F - J' then which of the following is true?

- (1) E is father of J
- (2) D is aunt of F
- (3) J is son of E
- (4) D is maternal uncle of F
- (5) None of these

139. Which of the following shows that D is maternal aunt of J?

- (1) D = E + F + J
- (2) D = E - F + J
- (3) E = D - F + J
- (4) D = E - J + F
- (5) None of these

Directions (140-144) : Study the following arrangement carefully and answer the questions given below:

A B 4 Y @ D F R # J M I N & P W C 5 E 2 J Z * 6 B Q
5 7 H 9 U 1 K

140. If the first 18 elements are written in the reverse order, what will be the sixth element to the left of the eighth element from the right?

- (1) R
- (2) 2
- (3) Y
- (4) @
- (5) None of these

141. Which of the following element is exactly midway between the 23rd element from the left and 19th element from the right end?

- (1) E
- (2) 5
- (3) J
- (4) *
- (5) None of these

142. Find the odd one out-

- (1) B*6
- (2) MN1
- (3) E C 5
- (4) R#J
- (5) 4@Y

143. If every third element from starting is dropped, what will be the 9th element to the left of the 15th element from the left?

- (1) #
- (2) F
- (3) M
- (4) 1
- (5) None of these

144. What will be the 5th element to the left of the 9th element to the right of the 16th element from the right end?

- (1) Z
- (2) 6
- (3) E
- (4) *
- (5) None of these

Directions (145-150) : Study the given information carefully and answer the given questions :

J, K, L, M, N and O are sitting in a straight line facing North, not necessarily in the same order. J is sitting fourth to the left of O and O is not sitting at the extreme end of the line. M is sitting third to the right of N. K is not an immediate neighbour of J.

145. If all the persons are made to sit in an alphabetical order from left to right, the positions of how many will remain unchanged as compared to their original seating position?

- (1) One
- (2) Two
- (3) Three
- (4) More than three
- (5) None

146. What is the position of N with respect to J?

- (1) Second to the left
- (2) Third to the right
- (3) Second to the right
- (4) Immediate right
- (5) Immediate left

147. How many people are sitting between L and O?

- (1) One
- (2) Two
- (3) Three
- (4) More than three
- (5) None

148. Which of the pairs represents the people sitting at the extreme ends of the line?

- (1) JL
- (2) KJ
- (3) ML
- (4) MJ
- (5) None of these

149. Four of the following five are alike in a certain way based on their seating positions in the above arrangement and so form a group. Which one does not belong to the group?

- (1) LJ
- (2) OM
- (3) KN
- (4) OK
- (5) NJ



150. What is the position of K with respect to M?

- (1) Second to the left
- (2) Third to the right
- (3) Second to the right
- (4) Immediate right
- (5) Immediate left



Directions (151-160) : In each of the questions given below one of the following five answer figures on the right should come after the problem figures on the left, if the sequence were continued?

Problem Figures



Answer Figures




(1) (2) (3) (4) (5)



(1) (2) (3) (4) (5)




(1) (2) (3) (4) (5)




(1) (2) (3) (4) (5)





(1) (2) (3) (4) (5)



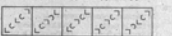
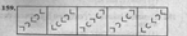
(1) (2) (3) (4) (5)




(1) (2) (3) (4) (5)



(1) (2) (3) (4) (5)



(1) (2) (3) (4) (5)



(1) (2) (3) (4) (5)

161. An operating system
 (1) Administrative (2) Control division
 (3) process division (4) Input division
 (5) None of these
162. Which one is not an operating system
 (1) UNIX (2) MS-DOS (3) XENIX
 (4) Oracle (5) None of these
163. Internal commands are stored in
 (1) ROM (2) RAM
 (3) CD (4) Floppy Disk
 (5) None of these
164. Operating system is
 (1) Hardware (2) Software
 (3) Storage media (4) CPU
 (5) None of these
165. To make a duplicate copy of one or more file the document is
 (1) Copy (2) X copy (3) Copy con
 (4) Edit (5) None of these
166. Disk partitioning can be done by
 (1) F disk command (2) Format command
 (3) partition command (4) Hard disk delete
 (5) None of these
167. RAM stand for
 (1) Random Access Memory
 (2) Random all memory
 (3) Rose all me
 (4) Right Armed Method
 (5) Right Access Memory
168. DBMS stand for
 (1) Direct base management system
 (2) Double base management system
 (3) Data base management system
 (4) Drive base management system
 (5) None of these
169. Which one is not the option of translator
 (1) Assembler (2) UNIX
 (3) Interpreter (4) Compiler
 (5) None of these
170. The virus which themselves attach with the operating system of computer is
 (1) Boot in factor (2) EXE in factor
 (3) System in factor (4) Operation in factor
 (5) None of these
171. Read only memory
 (1) Volatile (2) Non Volatile
 (3) Visible (4) Only 1 and 2
 (5) Only 1 and 3
172. Window is
 (1) CUI (2) GUI
 (3) PUI (4) SUI (5) MUI
173. Market information means—
 (1) knowledge of industries
 (2) knowledge of households
 (3) knowledge of peers
 (4) knowledge of customer's tastes
 (5) All of these
174. The garbage collector for the computer is not as
 (1) Folder (2) Application
 (3) Program (4) Recycle bin
 (5) My document
175. Word 2007 is
 (1) Special application (2) Word processor
 (3) Spread sheet (4) Scanner Document
 (5) None of these.
176. The Zoom can be done up to
 (1) 5 (2) 50 (3) 500
 (4) 5000 (5) None of these
177. How many keys were in keyboard used in early days
 (1) 90 (2) 95
 (3) 80 (4) 85 (5) 84
178. How much data can be stored in one CD
 (1) 100n mb (2) 2.5 mb
 (3) 700 mb (4) 500 mb
 (5) None of these
179. Who is the father of Computer?
 (1) Blaise Pascal (2) Charles Babbage
 (3) Adam Smith (4) Connard Zuse
 (5) None of these
180. What is the full form of FAT
 (1) File Allotment Table (2) File Allocation Table
 (3) File Alloted Table (4) File Occupied Table
 (5) None of these
181. In 'Double-win' strategy
 (1) Customer gets an additional benefit
 (2) Customer gets price rebate.
 (3) Both customers and the sales person come out with sense of satisfaction
 (4) Both (1) and (2)
 (5) None of these
182. Consumer behavior, "Perception is a process through which
 (1) a consumer make ultimate purchasing
 (2) a consumer is satisfied
 (3) a consumer's mind receives, organizes and interprets physical stimuli
 (4) Both (1) and (3)
 (5) None of these

183. Sales forecast implies
- (1) an estimate of the maximum possible sales opportunities present in a particular market segment
 - (2) an estimate of sales, in physical units, in a future period
 - (3) Both (1) and (2)
 - (4) Either (1) or (2)
 - (5) None of these
184. In advertising for is not allowed on T.V.
- (1) Liquor
 - (2) Cigarettes
 - (3) Both (1) and (2)
 - (4) Soda
 - (5) None of these
185. A theory states that no matter how efficiently goods / services are produced, if they cannot be delivered to the customer in the quickest possible time it is vain. This theory is called
- (1) Quickest the best
 - (2) Instant service
 - (3) Service on time
 - (4) Timely effort
 - (5) None of these
186. Entrepreneurs find direct marketing the attractive because of
- (1) Investment is low
 - (2) It doesn't require specialized skills
 - (3) Returns are quick
 - (4) All of the above
 - (5) None of these
187. Demonstration is an exercise to
- (1) attractively pack and display the goods
 - (2) prove the characteristic of the product
 - (3) Both (1) and (2)
 - (4) Either (1) or (2)
 - (5) None of these
188. Which among the following is not an example of Direct marketing ?
- (1) tele-marketing
 - (2) sales on internet
 - (3) mail order sales
 - (4) Retail stores
 - (5) None of these
189. In selling "consumption" is the ultimate goal of the salesman while a marketer
- (1) identify consumer needs
 - (2) develop an appropriate product/service to attain customer satisfaction
 - (3) accomplish organizational goals through integrated marketing approach
 - (4) All of the above
 - (5) None of these
190. Credit cards are used for
- (1) Cash withdrawals
 - (2) Purchase of air tickets
 - (3) Purchase of consumable items from retail outlets
 - (4) All of these
 - (5) None of these
191. Which of the following is not a 'Post testing' Technique of advertisement ?
- (1) Sales test
 - (2) Focus group
 - (3) Enquiry test
 - (4) Attitude test
 - (5) None of these
192. "Casual" research is basically concerned with
- (1) establishing cause and effect relationship
 - (2) arriving at a forecast or prediction of interest
 - (3) measuring and estimating the frequencies with which of things occur
 - (4) All of the above.
 - (5) None of these
193. Market function includes—
- (1) Designing new products
 - (2) Advertisements
 - (3) Publicity
 - (4) After sales service
 - (5) All of these
194. Lead generation can be resorted to by browsing—
- (1) Telephone directories
 - (2) Yellow pages
 - (3) Internet sites
 - (4) List of existing customers
 - (5) All of these
195. In India, which commission can be approached to curb misleading advertisements
- (1) MRTP
 - (2) MTP
 - (3) ISPT
 - (4) QTP
 - (5) ASCI
196. Effective selling skills depend on—
- (1) Effective lead generation
 - (2) Sales Call planning
 - (3) Effective communication skills
 - (4) Territory Allocation
 - (5) All of these
197. What is the full form of LIC ?
- (1) Life Insurance Corporation
 - (2) Life Insurance Commission
 - (3) Life India Corporation
 - (4) All of these
 - (5) None of these
198. The Traditional Marketing style involves
- (1) Telemarketing
 - (2) Digital Marketing
 - (3) Indirect Marketing
 - (4) Direct Marketing
 - (5) All of these
199. A lead means
- (1) A prospect who is more likely to avail of the Bank's product
 - (2) A political leader
 - (3) A religious leader
 - (4) A bank chairman
 - (5) None of these
200. Innovation means
- (1) Compensation
 - (2) Inspiration
 - (3) Additional perquisites
 - (4) Implementing new ideas or new methods
 - (5) None of these