

# BANK TEST PAPER

Time: 2 Hours

Total Marks: 20

## GENERAL AWARENESS

- Who among the following is the Finance Minister of the Central Government?
  - (1) Manmohan Singh
  - (2) P. Chidambaram
  - (3) Sharad Pawar
  - (4) S.M.Krishna
  - (5) None of these
- The Small Industries Development Bank of India (SIDBI) has floated the country's first asset reconstruction company focusing on NPAs of micro, small and medium enterprises, christened India SME Asset Reconstruction Company (ISARC). The term NPA stands for?
  - (1) New Pension Accounts
  - (2) Net Performance Assets
  - (3) Non-Pension Accounts
  - (4) Non-Performing Assets
  - (5) None of these
- The Government exempted Tamiflu 75 mg (Oseltamivir phosphatic) the only drug available for treatment of which of the following diseases from customs duty
  - (1) Malaria
  - (2) Tuberculosis
  - (3) A(H<sup>1</sup>N<sup>1</sup>) influenza
  - (4) AIDS
  - (5) None of these
- Who among the following has been appointed as the new Foreign Secretary?
  - (1) Shanta Sinha
  - (2) Girija Vyas
  - (3) J.S.Sharma
  - (4) Nirupama Rao
  - (5) None of these
- Which of the following States was put under President's rule in March 2009?
  - (1) Bihar
  - (2) Meghalaya
  - (3) Haryana
  - (4) Punjab
  - (5) Jammu & Kashmir
- Prof.D.B.Deodhar Trophy is related to which of the following sports?
  - (1) Cricket
  - (2) Football
  - (3) Tennis
  - (4) Badminton
  - (5) None of these
- Which of the following is the 11,111th branch of SBI?
  - (1) Sonargaon
  - (2) Bongaigaon
  - (3) Meenakshipuram
  - (4) Sonapur
  - (5) None of these
- Ms Michelle Bachelet visited India in March 2009. She is the ----
  - (1) President of Ghana
  - (2) Prime Minister of Ghana
  - (3) Prime Minister of Chile
  - (4) President of Chile
  - (5) None of these
- Standard & Poor is ----
  - (1) name of a bank which was bankrupt in May 2009 in the US
  - (2) name of a rating agency
  - (3) the charitable organisation formed under the aegis of Nelson Mandela
  - (4) a charitable organisation formed recently under the aegis of the United Nations
  - (5) None of these
- The ICC has informed a five-member panel to look into the concerns of the Board of Control for Cricket in India about the 'whereabout' clause in the WADA code. WADA stands for ----
  - (1) Whole Anti-Doping Agent
  - (2) World Anti-Duplicating Agency
  - (3) World Anti-Doping Agency
  - (4) World Anti-Drugs Agency
  - (5) None of these
- The sanctioned strength of Supreme Court judges has increased to ----
  - (1) 26
  - (2) 28
  - (3) 31
  - (4) 33
  - (5) None of these
- Which of the following countries has emerged as India's largest defence supplier recently, overtaking Russia?
  - (1) USA
  - (2) Israel
  - (3) Britain
  - (4) Germany
  - (5) France
- In the general elections to the 15th Lok Sabha a total of 714 million voters – an increase of 43 million over the 2004 elections – elected 543 members. It was held in ---- phases.
  - (1) Three
  - (2) Four
  - (3) Five
  - (4) Six
  - (5) None of these
- The author of 'Dreams From My Father' is ----
  - (1) Nelson Mandela
  - (2) Shashi Taroor
  - (3) Rahul Gandhi
  - (4) Barack Obama
  - (5) None of these
- The Ministry of Petroleum and Natural Gas has chalked out an ambitious plan to bring 200 cities under the supply network for CNG and PNG by 2015. In the Ministry's oil sector 'Vision 2015 – For Consumer Satisfaction and Beyond', it has been decided to spread the CNG and PNG distribution network across the country so that more vehicles could use the green fuel and households were made less dependent on Liquefied Petroleum Gas (LPG). The term CNG and PNG stands for Compressed Natural Gas and ----
  - (1) Petroleum-based Natural Gas
  - (2) Piped Natural Gas
  - (3) Popular Natural Gas
  - (4) Perfect Natural Gas
  - (5) None of these
- In July 2009 hooch tragedy (illicit liquor), locally called 'lathha' caused death of more than 100 people in which of the following places?
  - (1) Allahabad
  - (2) Vadodara
  - (3) Salem
  - (4) Ahmedabad
  - (5) None of these
- Manmohan Singh became the first Indian PM as the guest of honour at the Bastille Day parade in ----
  - (1) Germany
  - (2) France
  - (3) Belgium
  - (4) Brazil
  - (5) Russia
- In the 2009-10 Union Budget, the outlay for Defence was increased from Rs.1,05,600 crore in 2008-09 to ----
  - (1) Rs.1,41,703 crore
  - (2) Rs.1,24,385 crore
  - (3) Rs.1,18,000 crore
  - (4) Rs.1,53,973 crore
  - (5) None of these
- Non-Aligned Movement (NAM) meeting was held in July, 2009 at which of the following places?
  - (1) Havana
  - (2) Johannesburg
  - (3) Pattaya
  - (4) Sharm-el-Sheikh
  - (5) None of these
- Anti-apartheid icon and the former South African President Nelson Mandela (affectionately known as Madiba) has called on people around the world to honour him by doing good deeds on his 91st birthday as his charitable foundation launches the inaugural Mandela Day. The Mandela Day is to be held on which of the following days each year?
  - (1) July 18
  - (2) July 28
  - (3) August 19
  - (4) June 28
  - (5) None of these
- India's Hidayat Ansari and Ilavazhaghi won the men's women titles in the WMI-sponsored 13th SAARC ---- championship held in Mumbai.
  - (1) Carom
  - (2) Table Tennis
  - (3) Chess
  - (4) Boxing
  - (5) Ball Badminton
- In the Union Budget 2009-10, the Fiscal Deficit is expected to be at ----
  - (1) 5.2 %
  - (2) 5.5 %

- (3) 6.2 %                      (4) 6.8 %  
 (5) None of these
23. Who among the following has been elected as the Chairman of the Public Accounts Committee?  
 (1) K.Rahman Khan  
 (2) Arun Jaitley  
 (3) Sushama Swaraj  
 (4) Ajay Maken  
 (5) None of these
24. Indira Gandhi Prize for Peace, Disarmament and Development has been conferred to which of the following persons in July, 2009?  
 (1) Koichiro Matsuura  
 (2) Ban Ki-moon  
 (3) Aung San Suu Kyi  
 (4) Bill Gates  
 (5) None of these
25. Who among the following is the recipient of the 'Best Executive 2008' under the category of Asia's best companies and executives by Asiamoney, Asia's leading financial magazine?  
 (1) Y.V.Reddy  
 (2) Indra Nooyi  
 (3) O.P.Bhatt  
 (4) Kiran Shaw Mazumdar  
 (5) None of these
26. Recently, the RBI has directed banks to install NSMs in all branches in a phased manner to check fake note menace. NSM stands for -----  
 (1) Note Security Mechanism  
 (2) Note Security Measure  
 (3) Note Security Machine  
 (4) Note Sorting Machine  
 (5) None of these
27. India and the 10-nation Association of South East Asian Nations (ASEAN) signed a Free Trade Agreement (FTA) that will break duty barriers in the 1.7 billion consumer market in the region. The accord, India's first with a trade bloc, will cover 11 countries with a combined Gross Domestic Product of over \$2 trillion. The implementation of the FTA would take off from -----  
 (1) January 1, 2010  
 (2) March 31, 2010  
 (3) January 31, 2010  
 (4) April 1, 2010  
 (5) None of these
28. On 26 July, 2009 India launched the nation's first indigenously designed and built nuclear submarine named -----  
 (1) INS Vikrant  
 (2) INS Chanakya  
 (3) INS Virat  
 (4) INS Arihant  
 (5) None of these
29. India's Somdev Devvarman is related to -----  
 (1) Tennis  
 (2) Badminton      (3) Hockey
- (4) Shooting      (5) None of these
30. The prestigious Ramon Magsaysay Award, which is considered Asia's equivalent of the Nobel Prize, is conferred by which of the following countries?  
 (1) Indonesia      (2) Malaysia  
 (3) The Philippines  
 (4) South Korea  
 (5) None of these
31. ----- became the first private company to get protection from the Central Industrial Security Force (CISF) recently.  
 (1) Tata Consultancy Service  
 (2) Mahindra Satyam  
 (3) Bharathi Airtel  
 (4) Infosys Technologies Ltd  
 (5) None of these
32. Which of the following Commissions, which probed the sequence of events that led to the Babri Masjid demolition in Ayodhya on Dec 6, 1992, submitted its report to the Prime Minister in July, 2009?  
 (1) Justice S.C.Mohapatra  
 (2) Justice Nanavati  
 (3) Justice Liberhan  
 (4) Justice P.K.Banerjee  
 (5) None of these
33. Shiv Charan Mathur who died recently was the Governor of -----  
 (1) Goa  
 (2) Arunachal Pradesh  
 (3) Assam  
 (4) Manipur  
 (5) None of these
34. BRIC leaders' summit was held in June 2009 at Yekaterinburg in Russia. Which of the following countries is not a member of BRIC?  
 (1) India                      (2) Russia  
 (3) Bangladesh      (4) China  
 (5) Brazil
35. A statue of Tamil saint and poet, Tiruvalluvar was unveiled in the vicinity of Ulsoor Lake in Bangalore by the Karnataka government and in reciprocal to it a statue of which of the Kannada saint-poet was unveiled at Ayanavaram Park in Chennai by the Tamilnadu government recently?  
 (1) Sarvagna                      (2) Madhava  
 (3) Nimbarka                      (4) Ramanuja  
 (5) None of these
36. Katchatheevu is a wasteland of an island on the international Maritime Boundary Line (IMBL) but recently some political parties in India made it the focus of a surrogate campaign for establishing fishing rights for Indian fishermen. The IMBL was amicably settled through 2 agreements in 1974 and 1976 between India and -----  
 (1) Sri Lanka                      (2) Bangladesh  
 (3) Pakistan                      (4) Myanmar
- (5) Maldives
37. Who among the following was unanimously elected as the first woman Speaker of the Lok Sabha?  
 (1) Meira Nandan  
 (2) Agatha Sangma  
 (3) Meira Kumar  
 (4) Preneet Kaur  
 (5) None of these
38. Goa won the Santhosh Trophy Football championship held in Chennai by defeating -----  
 (1) Bengal                      (2) Kerala  
 (3) Punjab                      (4) Manipur  
 (5) None of these
39. The Union government announced that GST will be implemented with effect from April 1, 2010. The term GST stands for -----  
 (1) Gold and Silver Tax  
 (2) General Security Tax  
 (3) Goods Security Tax  
 (4) Goods and Service Tax  
 (5) None of these
40. As per the National Food Security Act, every family below the poverty line (BPL) in rural as well as urban areas will be entitled, by law, to 25 kg of rice or wheat a month at Rs.--- a kg.  
 (1) 2                                      (2) 2.5  
 (3) 3                                      (4) 4  
 (5) None of these

## ENGLISH LANGUAGE

**Directions (41-55):** Read the following passage very carefully and answer the questions given below it. Certain words are printed in bold to help you to locate them while answering some of the questions.

Banking sector reforms in India were introduced in order to **improve** efficiency in the process of financial intermediation. It was expected that banks would take advantage of the changing operational environment and improve their performance. Towards this end, the Reserve Bank of India initiated a host of measures for the creation of a competitive environment. Deregulation of interest rates on both the deposit and lending sides imparted freedom to Banks to appropriately price their products and services. To compete effectively with non-banking entities, banks were permitted to undertake newer activities like investment banking, securities trading and insurance business. This was facilitated through amendments in the relevant Acts which permitted Public Sector Banks to raise equity from the market up to threshold limit (49 per cent) and also enabling the entry of new private and foreign banks. This changing face of banking led to an erosion of margins on

traditional banking business, promoting banks to search for newer activities to **augment** their fee incomes. At the same time, banks also needed to **devote** focused attention to operational efficiency in order to contain their transaction costs. Simultaneously with the deregulation measures prudential norms were instituted to strengthen the safety and soundness of the banking system.

Recent internal empirical research found that over the period 1992-2003, there has been a discernible improvement in the efficiency of Indian banks. The increasing trend in efficiency has been fairly uniform, irrespective of the ownership pattern. The rate of such improvement has, however, not been sufficiently high. The analysis also reveals that PSBs and private sector banks in India did not differ significantly in terms of their efficiency measures. Foreign banks, on the other hand, recorded higher efficiency as compared with their Indian counterparts.

41. Banks can control their transaction costs by  
 (1) restricting their lending activities  
 (2) undertaking more and more non-banking activities  
 (3) encouraging the customers to bank with other banks  
 (4) devoting more attention to operational efficiency  
 (5) None of these
42. What is the position of Indian banks as far as efficiency is concerned?  
 (1) The Indian banks did not bother about efficiency  
 (2) Compared to foreign counterparts, Indian banks lagged behind in efficiency  
 (3) The position of Indian banks cannot be estimated due to various factors  
 (4) Indian banks accorded high efficiency  
 (5) None of these
43. Which of the following is/are the measure(s) taken by RBI to create a competitive environment in the Banking sector?  
 (A) Banks were given freedom to take up newer activities  
 (B) Entry of new private and foreign banks in the field  
 (C) Amendments in the relevant Acts to enable PSBs to raise equity from the market  
 (1) None (2) A & B only  
 (3) A & C only (4) B & C only  
 (5) All the three
44. Which of the following statements recognising improvement in efficiency is TRUE in the context of the passage?  
 (1) There is no discernible difference

- in efficiency parameters  
 (2) The foreign banks recorded higher efficiency  
 (3) The efficiency of foreign banks is not comparable with Indian banks  
 (4) The rate of such improvement in efficiency was very high  
 (5) None of these
45. Which one of the following can be the most appropriate title to the passage?  
 (1) Indian Banks and Foreign Banks  
 (2) Customer service in banking industry  
 (3) Non-Performing Assets in banking sector  
 (4) Efficiency in Indian banking  
 (5) RBI as a regulatory body
46. Prudential norms were initiated in the banking sector with a view to  
 (1) increase operational efficiency  
 (2) contain the non-performing assets  
 (3) strengthen the soundness of banking system  
 (4) improve the customer service  
 (5) None of these
47. Changing face of banking led to  
 (1) closure of several banks in the country  
 (2) entry of private banks and foreign banks  
 (3) reduction in margins on banking business  
 (4) formation of militant unions in the banks  
 (5) None of these
48. Banking sector reforms in India were introduced for the purpose of  
 (1) giving more and more employment opportunities to the educated unemployed  
 (2) taking care of the down trodden masses  
 (3) increasing efficiency in the banking activities  
 (4) giving better return to the Central Government  
 (5) None of these
49. The recent internal empirical research conducted by the RBI found that  
 (1) there is cut-throat competition in banking industry  
 (2) the rate of return is not commensurate with the operational cost  
 (3) the rate of improvement has not been high  
 (4) nationalised banks and private sector banks did differ in their efficiency measures  
 (5) None of these

**Directions (51-53):** Choose the word which is the most nearly SAME in meaning of the word given in bold as

- used the passage.
50. **Augment**  
 (1) Make (2) Become  
 (3) Enlarge (4) Increase  
 (5) Envelop
51. **Initiated**  
 (1) Led (2) Motivated  
 (3) Implicated (4) Imbided  
 (5) Started
52. **Devote**  
 (1) Activate (2) Apply  
 (3) Apportion (4) Spare  
 (5) Involve
53. **Relevant**  
 (1) Recorded (2) Opposite  
 (3) Appropriate (4) Stringent  
 (5) Similar
54. **Reveal**  
 (1) Show (2) Conceal  
 (3) Secretive (4) Exhibit  
 (5) Prohibit
55. **Improve**  
 (1) Retard (2) Disprove  
 (3) Prove (4) Accelerate  
 (5) Degenerate

**Directions (53-55):** Choose the word which is the most OPPOSITE meaning of the word given in bold used the passage.

**Directions (55-65):** Read each of the following sentences to find out whether there is any error in it. The error, if any, will be in one part of the sentence. The number of that part is the answer. If there is no error, the answer is (5). (Ignore errors of punctuation, if any).

56. Though he is quick (1)/ in analysing problem (2)/ he takes always time (3)/ for finding a solution (4)/ No error (5).

57. Our company can (1)/ no longer afford (2)/ over-manned units as (3) our profit has lower (4)/ No error (5).

58. He failed explaining (1)/ why he could not (2)/ complete the important assignment (3)/ within the given time limit (4)/ No error (5).

59. Had all of them (1)/ gone there with the books (2)/ it could have (3) impressed the delegates (4)/ No error (5).

60. Who helps is (1)/ immaterial so long (2)/ as the help is extended (3)/ with a sincere intention. (4)/ No error (5).

61. He was upset (1)/ because he had (2) never in such a (3)/ peculiar situation before (4)/ No error (5).

62. Small farmers do not get (1)/ the requires support (2)/ from outside (3) the farming sector (4)/ No error (5).

63. We do not know (1)/ whom we should blame (2)/ for all the lapses observed (3)/ in the procedure (4) No error (5).

64. I am obliged with you (1)/ and your entire family (2)/ for showing kindness (3)/ and generosity towards us (4)/ No error (5).

65. He is one of (1)/the best novelists (2)/ that has ever lived. (3)/ Do you agree? (4)/ No error (5).

**Directions (66-70):** In each question below, four words which are numbered (1), (2), (3) and (4) have been printed of which one may be wrongly spelt. The number of that word is the answer. If all the four words are correctly spelt, mark (5) i.e., 'All Correct' as the answer

66. (1) vaccum (2) barricade  
(3) doomsday (4) festival  
(5) All correct

67. (1) fictitious (2) cacophony  
(3) nocturnall  
(4) nomenclature  
(5) All correct

68. (1) pugnacious  
(2) planetarium  
(3) blasphemy  
(4) procrastinate  
(5) All correct

69. (1) ridiculous (2) hilarious  
(3) chassis (4) shallow  
(5) All correct

70. (1) exacerbate (2) rendezvous  
(3) hypocrisy (4) ferocious  
(5) All correct

**Directions (71-80):** In the following passage, there are blanks, each of which has been numbered. These numbers are printed below the passage and against each, five words are suggested, one of which fits the blank appropriately. Find out the appropriate word in each case.

A young student teacher was assigned to instruct sixth class students for one week at an outdoor centre. She ---- (71) and painstakingly planned a variety of experiences ---- (72) to share with them her love of the fields and woods. But the week was a complete --- (73). It rained four of the five days and the children were rowdy and ---- (74). When at last the youngsters were packing to ---- (75) to town, the student teacher came to me in tears. "I wasn't --- (76) before," she said, "but now I know, I can never work with children. I'm just not ---- (77) out for it".

Then, as the children scrambled aboard the bus, one girl ---- (78) behind and, after a moment, said to the student teacher, "I want to thank you for this week and for the things you taught us. You know, I never listened to the wind in the trees before. It's a ---- (79) sound, and I'll never forget it. Here's a poem I wrote for you. I almost didn't give it to you." She handed over a slip of paper to the teacher, then ran to ---- (80) the others.

71. (1) abruptly (2) grudgingly  
(3) nervously  
(4) enthusiastically  
(5) carelessly

72. (1) hoping (2) looking  
(3) noting  
(4) apprehending  
(5) pleading

73. (1) span (2) joy  
(3) miracle (4) period  
(5) disaster

74. (1) unattractive (2) helpful  
(3) uncooperative  
(4) forgetful (5) decent

75. (1) write (2) return  
(3) leave (4) launch  
(5) communicative

76. (1) ready (2) sure  
(3) teaching (4) careful  
(5) optimistic

77. (1) cut (2) worked  
(3) let (4) looking  
(5) dragged

78. (1) hid (2) turned  
(3) followed (4) looked  
(5) lingered

79. (1) silent (2) healthy  
(3) lovely (4) harsh  
(5) noisy

80. (1) teach (2) inform  
(3) convince (4) join  
(5) tell

### QUANTITATIVE APTITUDE

**Directions (81-100):** What will come in place of question mark (?) in the following questions?

81.  $25 \times \sqrt{?} = 400$   
(1) 16 (2) 4  
(3) 156 (4) 246  
(5) None of these

82.  $53202 + 27891 = ? + 36147$   
(1) 44846 (2) 43966  
(3) 44496 (4) 44946  
(5) None of these

83.  $54\% \text{ of } 315 - 56.8 = ?$   
(1) 231.7 (2) 103.5  
(3) 152.3 (4) 113.3  
(5) None of these

84.  $24336 \div 48 = ?$   
(1) 497 (2) 507  
(3) 517 (4) 524  
(5) None of these

85.  $14.2 \times 2.8 \times 3.1 = ?$   
(1) 132.256 (2) 123.246  
(3) 123.256 (4) 132.526  
(5) None of these

86.  $25^{3.5} \times 25^? = 25^9$   
(1) 12.5 (2) 4.5  
(3) 5.5 (4) 6.5  
(5) None of these

87.  $(35)^2 + (17)^2 = (?)^2 + 425$   
(1) 1089 (2) 1098  
(3) 33 (4) 43  
(5) None of these

88.  $1073 + 1196 \div 23 = 379 + ?$   
(1) 874 (2) 796  
(3) 1504 (4) 746  
(5) None of these

89.  $\sqrt{50176} = ?$

(1) 204 (2) 224  
(3) 216 (4) 226  
(5) None of these

90.  $7\frac{2}{3}$  of  $1089 + 126 = 9066 - ?$   
(1) 6409 (2) 591  
(3) 491 (4) 601  
(5) None of these

91.  $4\frac{1}{3} + 7\frac{2}{5} - 5\frac{1}{2} = ?$   
(1)  $6\frac{1}{30}$  (2)  $5\frac{7}{30}$   
(3)  $6\frac{7}{30}$  (4)  $6\frac{7}{20}$   
(5) None of these

92.  $783 + 336 \div 7 \times 8 = ?$   
(1) 789 (2) 1067  
(3) 798 (4) 1167  
(5) None of these

93.  $(5)^3 + (11)^3 + (6)^3 \div (2)^3 = ?$   
(1) 1473 (2) 1503  
(3) 1493 (4) 1583  
(5) None of these

94.  $23 \times 12 + 24$   
 $17 \times 6 - 2$   
(1)  $\frac{3}{2}$  (2) 30  
(3) 3 (4)  $\frac{4}{3}$   
(5) None of these

95. If the product of two successive positive integers is 6162, which is the smaller integer?  
(1) 71 (2) 77  
(3) 78 (4) 79  
(5) None of these

96. What is the compound accrued on an amount of Rs. 15,000/- at the rate of 8 p.c.p.a. at the end of 2 years?  
(1) Rs. 2,400/-  
(2) Rs. 2,466/-  
(3) Rs. 2,496/-  
(4) Rs. 2,516/-  
(5) None of these

97. The owner of an electronics shop charges his customer 14% more than the cost price. If a customer paid Rs. 32,775/- for a laptop, then what was the cost price of the laptop?  
(1) Rs. 25,500/-  
(2) Rs. 27,500/-  
(3) Rs. 28,500/-  
(4) Rs. 28,750/-  
(5) None of these

98. One-eighth of a number is 47. What will be 25% of that number?  
(1) 84 (2) 88  
(3) 94 (4) 62  
(5) None of these

99. A sum of money is divided among Raju, Arun and Baiju in the ratio of 7:9:12 respectively. If the share of Arun is Rs. 22,500/-, then what is the total amount of money of Raju and Baiju together?  
(1) Rs. 45,700/-  
(2) Rs. 47,500/-  
(3) Rs. 52,500/-  
(4) Rs. 49,500/-  
(5) None of these

100. How many different words can be formed with the letters of the word

- TRUST?  
 (1) 720 (2) 120  
 (3) 60 (4) 24  
 (5) None of these
101. The ages of Radha and Shyama are in the ratio of 2:3 respectively. After 4 years the ratio of their ages will be 5:7. What is the present age of Shyama?  
 (1) 20 years (2) 24 years  
 (3) 30 years (4) 36 years  
 (5) None of these
102. 44 per cent of a number is 76 per cent of the second number. What is the respective ratio of the first number to the second number?  
 (1) 5:7 (2) 11:19  
 (3) 19:13  
 (4) Cannot be determined  
 (5) None of these
103. In an examination it is required to get 475 of the aggregate marks to pass. A student gets 38% marks and is declared failed by 114 marks. What are the maximum aggregate marks a student can get?  
 (1) 800 (2) 850  
 (3) 900 (4) 950  
 (5) None of these
104. If the area of a circle is  $2464 \text{ cm}^2$ , what is its perimeter?  
 (1) 126 cm (2) 144 cm  
 (3) 164 cm (4) 176 cm  
 (5) None of these
105. Which number should replace both the question marks (?) in the following equation?  

$$\frac{448}{?} = \frac{?}{28}$$
  
 (1) 56 (2) 64  
 (3) 112 (4) 124  
 (5) None of these
106. The owner of a shop charges his customer 15% more than the cost price for purchasing a shirt. If a customer paid Rs. 1,127/- for a shirt, then what was the cost price of the shirt?  
 (1) 980 (2) 840  
 (3) 1040 (4) 950  
 (5) None of these
107. The cost of 30 pens and 20 pencils is Rs. 360/-. What is the cost of 24 pens and 16 pencils?  
 (1) Rs. 250/- (2) Rs. 278/-  
 (3) Rs. 296/-  
 (4) Cannot be determined  
 (5) None of these
108. The simple interest accrued on an amount of Rs. 15,750 at the end of 8 years is Rs. 13,860/-. What is the rate of interest p.c.p.a.?  
 (1) 6 (2) 8  
 (3) 10 (4) 12  
 (5) None of these
109. If an amount of Rs. 71,008/- is distributed equally amongst 28 children how much amount would each child get?  
 (1) Rs. 2,536/- (2) Rs. 3,106/-  
 (3) Rs. 1,742/- (4) Rs. 2,314/-  
 (5) None of these
110. The difference between 72% of a number and 31% of the same number is 1845. What is 12% of that number?  
 (1) 54 (2) 540  
 (3) 280 (4) 480  
 (5) None of these
111. Difference between the compound interest and simple interest accrued in two years at 4% per annum is Rs. 12/-. What is the principal amount?  
 (1) Rs. 7,000/- (2) Rs. 7,500/-  
 (3) Rs. 8,000/-  
 (4) Cannot be determined  
 (5) None of these
112. If  $(42)^2$  is added to square of a number, the answer so obtained is 5733. What is the number?  
 (1) 3696 (2) 3969  
 (3) 63 (4) 69  
 (5) None of these
113. If the numerator of a fraction is increased by 200% and the denominator is increased by 350%, the resultant fraction thus obtained is  $\frac{2}{7}$ . What was the original fraction?  
 (1)  $\frac{1}{2}$  (2)  $\frac{3}{7}$   
 (3)  $\frac{4}{5}$  (4)  $\frac{5}{7}$   
 (5) None of these
114. Gagan purchased 23 packets of biscuits. Each packet contains 2 dozen biscuits. How many biscuits did Gagan purchase?  
 (1) 542 (2) 452  
 (3) 524 (4) 552  
 (5) None of these
115. Two candidates fought an election. One of them got 68% of the total votes and won by 3024 votes. What is the total number of votes polled?  
 (1) 8400 (2) 8000  
 (3) 7500 (4) 6400  
 (5) None of these
116. A train running at the speed of 90 kmph crosses a signal post in 6 seconds. What is the length of the train?  
 (1) 150 metres (2) 200 metres  
 (3) 250 metres  
 (4) Cannot be determined  
 (5) None of these
117. The sum of two digits of a two digit number is 12 and the difference between the two digits of the same number is 2. What is the two digit number?  
 (1) 75 (2) 64  
 (3) 57  
 (4) Cannot be determined  
 (5) None of these
118. Bindu spends 10% of her monthly salary on rent, 20% on food, 35% on bank loan payment and 15% on miscellaneous expenses. If she spends Rs. 1,950/- on miscellaneous expenses, how much does she spend on rent?  
 (1) Rs. 1,200/- (2) Rs. 1,300/-  
 (3) Rs. 1,350/- (4) Rs. 1,500/-  
 (5) None of these
119. The average of 5 consecutive even numbers is C, D, E, F and G is 62. What is the product of D and G?  
 (1) 3060 (2) 3390  
 (3) 3690 (4) 3960  
 (5) None of these
120. The income of Manoj is 150% of the income of Rajesh and the income of Suhas is 120% of the income of Manoj. If the total income of Manoj, Rajesh and Suhas is Rs. 1,29,000/-, what is the income of Manoj and Rajesh together?  
 (1) Rs. 72,000/- (2) Rs. 72,500/-  
 (3) Rs. 75,000/-  
 (4) Cannot be determined  
 (5) None of these

### REASONING ABILITY

121. How many such pairs of letters are there in the word COMPUTER, each of which has as many letters between them in the word as they have in the English alphabet?  
 (1) One (2) Two  
 (3) Three  
 (4) More than three  
 (5) None of these
122. In a certain code MAJOR is written as PSINB. How is APPLE written in that code?  
 (1) MFQBQ (2) FMOBQ  
 (3) MFOQB (4) MFNBQ  
 (5) None of these
123. In certain code GAME is written as 5918 and PACK is written as 2934, how is CAKE written in that code?  
 (1) 3498 (2) 3849  
 (3) 3948 (4) 8934  
 (5) None of these
124. How many such digits are there in the number 834792 each of which is as far away from the beginning of the number as when the digits are rearranged in ascending order within the number?  
 (1) None (2) One  
 (3) Two (4) Three  
 (5) None of these
125. If 'P' denotes '+', 'Q' denotes '÷', 'R' denotes '-' and 'S' denotes 'x'; then  $356P22R16Q2 = ?$   
 (1) 38 (2) 140  
 (3) 22 (4) 10  
 (5) None of these
126. How many meaningful English words can be made with the letters DMOE using each letter only once in each word?

- (1) One (2) Two  
 (3) Three  
 (4) More than three  
 (5) None of these
127. Four of the following five are alike in a certain way and so form a group. Which is the one that does not belong to the group?  
 (1) Tomato (2) Potato  
 (3) Yam (4) Beetroot  
 (5) Carrot
128. If it is possible to make a meaningful word from the first, the fifth, the seventh and the eighth letters of the word 'DOMINATE', last letter of the word is your answer. If more than one such word can be formed, give 'X' as your answer and if no such word can be formed give 'Y' as your answer.  
 (1) D (2) T  
 (3) X (4) Y  
 (5) None of these
129. Four of the following five are alike in respect to their position in the English alphabet and hence form a group. Which one does not belong to that group?  
 (1) DFC (2) IKH  
 (3) NPM (4) XYW  
 (5) RTQ
130. Santhosh walked 10 metres towards South, took a left turn and walked 10 metres and again took a left turn and walked 20 metres. In which direction he is now with respect to his starting point?  
 (1) North (2) North-West  
 (3) South-West (4) South-East  
 (5) None of these

**Directions (131-135):** In each question of the questions below are given three statements followed by two conclusions numbered I and II. You have to take the given statements to be true even if they seem to be at variance from commonly known facts. Read all the conclusions and then decide which of the given conclusions logically follows from the given statements disregarding commonly known facts.

- Give answer  
 (1) if only Conclusion I follows
- Give answer  
 (2) if only Conclusion II follows
- Give answer  
 (3) if either Conclusion I or II follows
- Give answer  
 (4) if neither Conclusion I nor II follows
- Give answer  
 (5) if both Conclusions I and II follow

131. Statements:  
 All cats are tigers  
 No tiger is jackal  
 Some jackals are deers  
 Conclusions:  
 I. Some deers are tigers

- II. No deer is tiger
132. Statements:  
 Some girls are boys  
 All boys are brothers  
 All brothers are fathers  
 Conclusions:  
 I. Some brothers are girls  
 II. Some fathers are girls

133. Statements:  
 All rivers are seas  
 Some seas are lakes  
 All lakes are ponds  
 Conclusions:  
 I. Some ponds are rivers  
 II. Some seas are ponds

134. Statements:  
 Some boxes are papers  
 Some papers are clips  
 Some clips are hooks  
 Conclusions:  
 I. Some boxes are clips  
 II. Some papers are hooks

135. Statements:  
 Some bees are mosquitoes  
 Some mosquitoes are butterflies  
 All butterflies are bats  
 Conclusions:  
 I. Some mosquitoes are bats  
 II. Some bees are bats
- Directions (136-140):** In each of these questions, a group of digits is given followed by four combinations of letters and symbols numbered (1), (2), (3) and (4). You have to find out which of the combinations correctly represents the group of digits based on the coding system and the conditions given below and mark your answer. If none of the four combinations is correct, your answer is (5) i.e. 'None of these' as your answer.

Digits	3	6	2	7	9	5	4	8	1
Letter/ Symbol Code	P	\$	M	X	@	A	©	#	J

- Conditions:  
 (i) If the first digit is odd and the last digit is even, the codes for the first and last digits are to be swapped  
 (ii) If both the first and the last digits are odd, both are to be coded as '\*'  
 (iii) If both the first and the last digits are even, both are to be coded as '%'

136. 946237  
 (1) @@ \$MPX (2) \*©M\$P\*  
 (3) \*©\$PM\* (4) \*©\$MP\*  
 (5) None of these
137. 483976  
 (1) ©#P@X\$ (2) \$#P@©X  
 (3) \$#P@X© (4) \$#@PX©  
 (5) None of these
138. 245913  
 (1) M©A@JP (2) P©A@JM  
 (3) \*©A@J\* (4) %©A@J%  
 (5) None of these

139. 397458  
 (1) P@X©A# (2) \*P@X©A\*  
 (3) %P@X©A% (4) #@X©AP  
 (5) None of these

140. 652497  
 (1) \$AM©X@ (2) \$A©M@X  
 (3) \$AM©©X (4) XAM©©\$  
 (5) None of these

**Directions (141-145):** In the following questions, the symbols #, £, \$, ¥ and £ are used with different meanings as follows:

- 'P©Q' means 'P is not smaller than Q'  
 'P#Q' means 'P is not greater than Q'  
 'P\$Q' means 'P is neither smaller than nor equal to Q'  
 'P\*Q' means 'P is neither greater than nor equal to Q'  
 'P%Q' means 'P is neither greater than nor smaller than Q'

Now in each of the following questions assuming the given statements to be true, find which of the two conclusions I and II given below them is/are definitely true.

- Give answer (1)  
 if only conclusion I is true
- Give answer (2)  
 if only conclusion II is true
- Give answer (3)  
 if either conclusion I or conclusion II is true
- Give answer (4)  
 if neither conclusion I nor conclusion II is true
- Give answer (5)  
 if both conclusions I and II are true

141. Statements: K%P, P\$S, S#R  
 Conclusions: I. K#R II. P\$R
142. Statements: X\*Y, Y©N, N%V  
 Conclusions: I. X\*N II. V#Y
143. Statements: T©L, L%M, M\$G  
 Conclusions: I. T\$G II. M%T
144. Statements: A\*C, C©W, W%Q  
 Conclusions: I. A©Q II. Q\$A
145. Statements: B\$D, D%U, U©H  
 Conclusions: I. U\*B II. B\$H

**Directions (146-150):** Study the following information carefully and answer the question given below:

Seven friends Baiju, Jagadeesh, Rema, Nagesh, Lathika, Vimala and Bhoopathi are sitting around a circular table and are facing the centre. Vimala is between Jagadeesh and Bhoopathi. Baiju is between Lathika and Nagesh. Jagadeesh is second to the right of Lathika.

146. What is the position of Rema?  
 (1) Between Jagadeesh and Lathika  
 (2) Second to the right of Jagadeesh  
 (3) To the immediate left of Lathika  
 (4) Data inadequate  
 (5) None of these
147. Which of the following pairs has its first member sitting second to the

- right of the second member?  
 (1) Vimala & Nagesh  
 (2) Rema & Vimala  
 (3) Lathika & Nagesh  
 (4) Baiju & Rema  
 (5) None of these
148. Which of the following is false?  
 (1) Nagesh is immediate neighbour of Bhoopathi  
 (2) Rema is immediate neighbour of Lathika  
 (3) Jagadeesh is immediate neighbour of Rema  
 (4) Lathika is immediate neighbour of Nagesh  
 (5) All are true
149. What is the position of Bhoopathi?  
 (1) Second to the right of Baiju  
 (2) Between Baiju and Vimala  
 (3) To the immediate left of Vimala  
 (4) Fourth to the left of Lathika  
 (5) None of these
150. Which one of following is the correct statement?  
 (1) Nagesh is between Rema and Baiju  
 (2) Jagadeesh is between Lathika and Rema  
 (3) Baiju is third to the left of Jagadeesh  
 (4) Nagesh is to the immediate left of Bhoopathi  
 (5) None of these

**Directions (151-155):** Study the following information carefully to answer the questions given below:


6 F @ 9 3 # \* 4 K T G 2 \$ M 15 % R  
 ? 7 Y 8

151. How many such numerals are there in the above arrangement which are immediately followed by a symbol and also immediately preceded by a letter?  
 (1) None (2) Three  
 (3) Two (4) One  
 (5) None of these
152. What will come in place of the question mark (?) in the following series based on the above arrangement? F96 #43 ? M5\$  
 (1) TGK (2) T\$K  
 (3) G\$T (4) T2K  
 (5) None of these
153. How many such symbols are there in the above arrangement which are immediately followed by a letter but not immediately preceded by a letter?  
 (1) One (2) Two  
 (3) Three (4) None  
 (5) None of these
154. Four of the following five are alike in a certain way based on their positions in the above arrangement and so form a group. Which is the one that does NOT belong to the group?  
 (1) 96# (2) 7%8

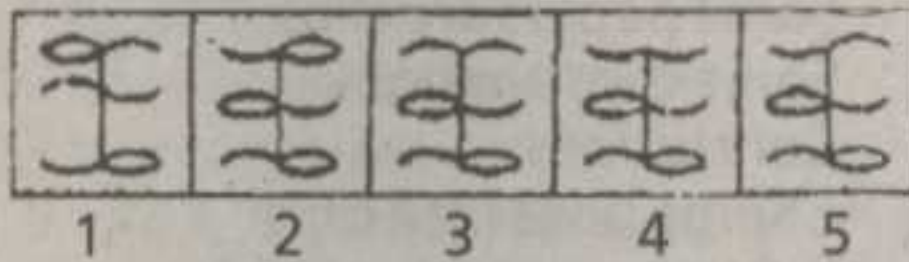
- (3) 52R (4) 2KM  
 (5) 43T
155. #9 : K\* :: \$G : ?  
 (1) 1M (2) 5M  
 (3) 5\$ (4) %1  
 (5) None of these

**Directions (156-160):** In each of the questions given below which one of the five answer figures on the right should come after the problem figures on the left, if the sequence were continued?

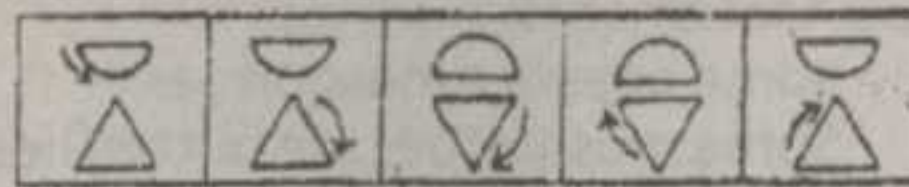
156. PROBLEM FIGURES



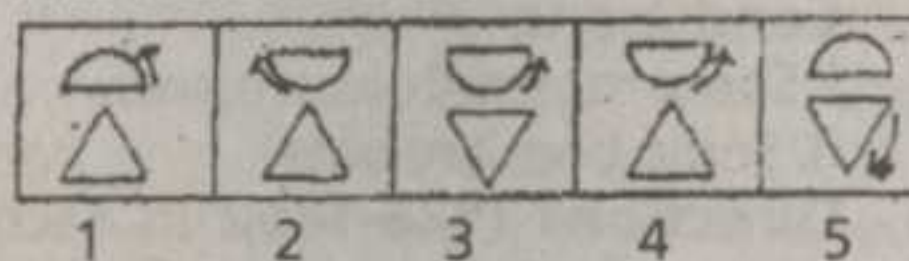
ANSWER FIGURES



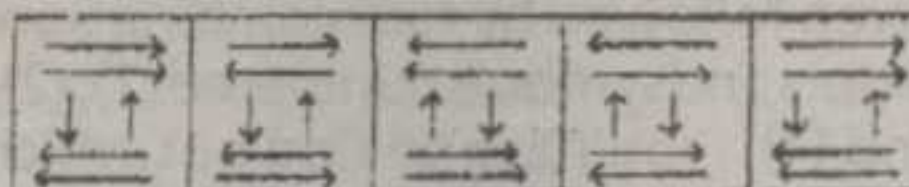
157. PROBLEM FIGURES



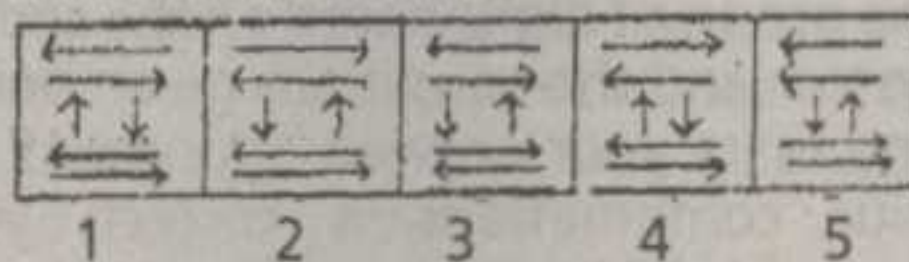
ANSWER FIGURES



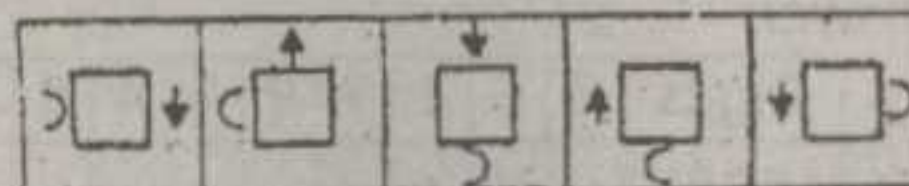
158. PROBLEM FIGURES



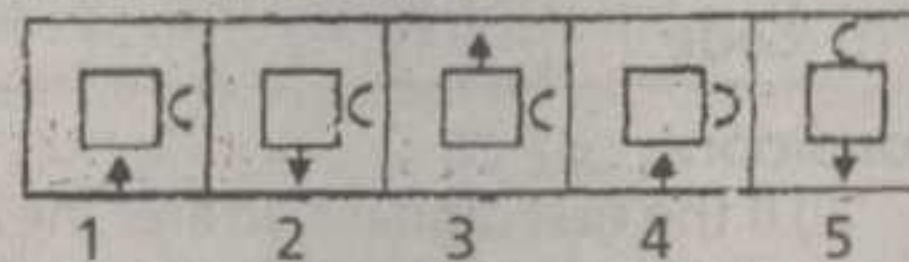
ANSWER FIGURES



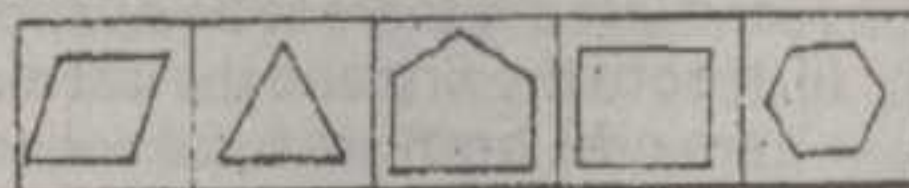
159. PROBLEM FIGURES



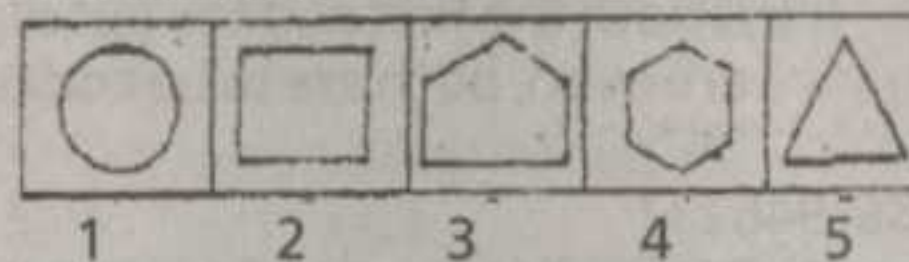
ANSWER FIGURES



160. PROBLEM FIGURES



ANSWER FIGURES



### MARKETING APTITUDE/ COMPUTER KNOWLEDGE

161. Promotion in marketing means ----  
 (1) Selling the product in specific area  
 (2) Promotion from one position to another  
 (3) Get through the internal assessment

- (4) Selling the products through various means  
 (5) None of these
162. Successful marketing means  
 (1) increasing profits  
 (2) increasing the output of the sales persons  
 (3) increasing the sales volume  
 (4) All the above  
 (5) None of these
163. Rural marketing means  
 (1) Selling to rural customers  
 (2) Selling by rural people  
 (3) Selling and buying by rural banks  
 (4) conducting exhibitions  
 (5) None of these
164. SWOT analysis includes:  
 (1) Strengths (2) Weaknesses  
 (3) Opportunities (4) Threats  
 (5) All the above
165. FMCG means:  
 (1) Fast Moving Company Goods  
 (2) Foreign Manufactured Company Goods  
 (3) Fast Moving Consumer Goods  
 (4) Fast Moving Capital Goods  
 (5) None of these
166. Bank Marketing is an unavoidable thing nowadays due to ----  
 (1) Global economic recession  
 (2) Globalisation  
 (3) Acquisition of small banks by larger banks  
 (4) Shortage of staff  
 (5) None of these
167. ATM stands for ----  
 (1) Automatic Time Machine  
 (2) Alternate Teller Machine  
 (3) Automatic Teller Machine  
 (4) Authorised Teller Machine  
 (5) None of these
168. Which of the following is not included in the 4 P's of Marketing Mix?  
 (1) Physical evidence  
 (2) Place (3) Price  
 (4) Product (5) Promotion
169. A lead in marketing is  
 (1) The leader in that particular product  
 (2) The leading manufacturer  
 (3) Target customer  
 (4) Both (1) & (2)  
 (5) None of these
170. The primary purpose of 'Packaging' is:  
 (1) Protection (2) Appeal  
 (3) Performance (4) All the above  
 (5) None of these
171. Customer satisfaction is:  
 (1) Products performance in relation to substitutes  
 (2) Product performance falls short of expectations  
 (3) Product performance to customers' expectations  
 (4) All the above  
 (5) None of these
172. Brand equity is ----

- (1) Favourable attitude of consistent purchase of a particular brand  
 (2) Value of equities of a company  
 (3) Brand equity is equal to asset minus liabilities of a firm  
 (4) Value associated with a brand  
 (5) None of these
173. Which of the following is not required for bank marketing?  
 (1) Communication skills  
 (2) Team spirit  
 (3) Empathy  
 (4) Sympathy  
 (5) Self-motivation
174. Social marketing is ----  
 (1) Customer satisfaction, social welfare and quality life  
 (2) To discharge social responsibilities  
 (3) Develop programmes to meet the customers and social needs  
 (4) Understanding consumer needs and matching the products accordingly  
 (5) All the above
175. Market segmentation is ----  
 (1) Dividing the market into different groups of customers having similar needs or characteristics  
 (2) Grouping of customers according to income, age, religion and sex  
 (3) Process of breaking down the total market for a product or service into distinct sub-group  
 (4) All the above (5) None of these
176. Dumping is a form of:  
 (1) Pricing method  
 (2) Marketing segmentation  
 (3) Price discrimination  
 (4) All the above  
 (5) None of these
177. Which of the following is the brand loyalty build up strategy?  
 (1) Reduce the cost of production  
 (2) Increase the promotion cost  
 (3) Reduce the selling price  
 (4) Increase the profit of the organisation  
 (5) Frequency programmes and club membership
178. What is goal of Advertising?  
 (1) Sales increase  
 (2) Establish brand equity  
 (3) Enter the target market  
 (4) All the above  
 (5) None of these
179. A successful marketing agent views obstacles ----  
 (1) Positively  
 (2) Negatively  
 (3) Frustratingly  
 (4) Discouragingly  
 (5) None of these
180. In growth stage of product life cycle, which of the following is correct?  
 (1) Greater investment is required  
 (2) Sales increases rapidly  
 (3) Less competition  
 (4) Large stock  
 (5) None of these
181. 'Facebook' is  
 (1) the latest version of Microsoft Word to be released in 2010  
 (2) the equivalent of Microsoft Word in Unix  
 (3) a social network using internet  
 (4) a deadly computer virus  
 (5) None of these
182. What menu is selected to insert page numbers in a word format?  
 (1) File  
 (2) Edit  
 (3) Insert  
 (4) Tools  
 (5) None of these
183. Ctrl+V is used for  
 (1) copying (2) pasting  
 (3) printing  
 (4) find and replacing  
 (5) None of these
184. To move to the end of a line of text, press ---- key.  
 (1) end  
 (2) home  
 (3) enter  
 (4) right arrow  
 (5) None of these
185. Which of the following is correct in the case of MICR?  
 (1) Recognise Magnetic ink  
 (2) Recognise any font  
 (3) Recognise human language  
 (4) both (1) & (2)  
 (5) None of these
186. Which of the following is not a function of an Operating system?  
 (1) Controls the operations of CPU  
 (2) Provides a user interface  
 (3) Converts Source-code into object-code  
 (4) Manages the primary memory allocation  
 (5) None of the above
187. LCD monitors are famous for  
 (1) Low power consumption  
 (2) Less space consumption  
 (3) Large space consumption  
 (4) Both (1) & (2)  
 (5) None of these
188. ---- printer is not a good choice for graphical printing  
 (1) Dot-matrix  
 (2) Laser  
 (3) Inkjet  
 (4) Laser-jet  
 (5) All of these
189. Which of the following is false?  
 (1) ROM is non-volatile  
 (2) SRAM need refreshing  
 (3) DRAM is made up of capacitors  
 (4) RAM is volatile  
 (5) None of these
190. One Nibble means ----  
 (1) 8 bits (2) 32 bits  
 (3) 4 bits (4) 16 bits  
 (5) None of these
191. ---- is capable of reading mnemonics  
 (1) Compiler  
 (2) Interpreter  
 (3) Operating system  
 (4) Assembler  
 (5) None of these
192. ---- process is used for getting the details stored in a web-server  
 (1) Installing (2) Copying  
 (3) Downloading (4) Booting  
 (5) None of these
193. In Microsoft Word, the shortcut used for spelling and grammar check is  
 (1) F2 (2) F5  
 (3) F7 (4) F8  
 (5) None of these
194. DBMS stands for  
 (1) Database Manager Software  
 (2) Database Management Software  
 (3) Databalancing Management System  
 (4) Database Management System  
 (5) None of these
195. Which of the following expresses the largest unit for storing data?  
 (1) GB (2) KB  
 (3) TB (4) MB  
 (5) B
196. Multiple paths are available in ---- topology  
 (1) Star (2) Ring  
 (3) Bus  
 (4) Mesh  
 (5) None of these
197. e-mail resides in ----  
 (1) Sender's computer  
 (2) Recipient's computer  
 (3) Server  
 (4) Both (1) & (2)  
 (5) None of these
198. Personal computers can be connected together to form a ----  
 (1) Supercomputer  
 (2) Server  
 (3) Hyperlink  
 (4) Network  
 (5) None of these
199. One byte means:  
 (1) 8 bits  
 (2) 32 bits  
 (3) 4 bits  
 (4) 1024 bits  
 (5) None of these
200. Which part of the computer stores data?  
 (1) Keyboard  
 (2) Monitor  
 (3) Printer  
 (4) Disk drive  
 (5) None of these



ANSWER KEY

1. (5) Pranab Mukharjee
2. (4) Non-Performing Assets
3. (3) A(H1N1) influenza or swine flu
4. (4) Nirupama Rao
5. (2) Meghalaya
6. (1) Cricket
7. (4) Sonapur
8. (4) President of Chile
9. (2) name of a rating agency
10. (3) World Anti-Doping Agency
11. (3) 31
12. (2) Israel
13. (3) Five
14. (4) Barack Obama
15. (2) Piped Natural Gas
16. (4) Ahmedabad
17. (2) France
18. (1) Rs.1,41,703 crore (About 34% hike)
19. (4) Sharm-el-Sheikh (in Egypt)
20. (1) July 18
21. (1) Carom
22. (4) 6.8 %
23. (5) Jaswant Singh
24. (4) Bill Gates
25. (3) O.P.Bhatt
26. (4) Note Sorting Machine
27. (1) January 1, 2010
28. (4) INS Arihant
29. (1) Tennis
30. (3) The Philippines
31. (4) Infosys Technologies Ltd
32. (3) Justice Liberhan
33. (3) Assam
34. (3) Bangladesh
35. (1) Sarvagna
36. (1) Sri Lanka
37. (3) Meira Kumar
38. (1) Bengal
39. (4) Goods and Service Tax
40. (3) 3
41. (4)
42. (2)
43. (5)
44. (2)
45. (5)
46. (3)
47. (3)
48. (3)
49. (3)
50. (4)
51. (5)
52. (2)
53. (3)
54. (2)
55. (1)
56. (3) 'Always' should come before 'takes' (=>'always' is an adverb and should be used before main verb)
57. (4) Replace 'lower' with 'lowered' (=>has/have must be followed by the past participle form)
58. (1) 'Explaining' should be replaced with 'to explain'
59. (5)
60. (4) Replace 'so' with 'as'
61. (3) 'Been' should be used before 'in' (=> the sentence is in the passive voice)
62. (2) Replace 'require' with 'required' (=>passive voice)
63. (5)
64. (1) Replace 'with' with 'to' (=> 'oblige' must be followed by 'to')
65. (3) Replace 'has' with 'have' (=> here the subject is 'best novelists', which is in plural)
66. (1) vacuum
67. (3) nocturnal
68. (5)
69. (2) hilarious
70. (3) hypocrisy
71. (4)
72. (1)
73. (5)
74. (3)
75. (2)
76. (2)
77. (1)
78. (2)
79. (3)
80. (4)
81. (5) None of these (= 256)
82. (4) 44946
83. (4) 113.3
84. (2) 507
85. (3) 123.256
86. (3) 5.5
87. (3) 33
88. (4) 746
89. (2) 224
90. (2) 591
91. (3) 6 7/30
92. (4) 1167
93. (5) 1483
94. (3) 3
95. (3) 78
96. (3) Rs.2,496/-
97. (4) Rs.28,750/-
98. (3) 94
99. (2) Rs.47,500/-
100. (3) 60
101. (2) 24 years
102. (5) None of these (=19:11)
103. (4) 950
104. (4) 176 cm
105. (3) 112
106. (1) 980
107. (5) None of these (= Rs.288/-)
108. (5) None of these (11%)
109. (1) Rs.2,536/-
110. (2) 540
111. (2) Rs.7,500/-
112. (3) 63
113. (2) 3/7
114. (4) 552
115. (1) 8400
116. (1) 150 metres
117. (4) Cannot be determined
118. (2) Rs.1,300/-
119. (4) 3960
120. (3) Rs.75,000/-
121. (4) More than three
122. (5) None of these (MFOBQ)
123. (3) 3948
124. (4) Three
125. (5) None of these (=32)
126. (3) Three (DEMO, MODE, DOME)
127. (3) Yam
128. (3) X (TEND, DENT)
129. (4) XYW
130. (5) None of these (North-East)
131. (3)
132. (5)
133. (2)
134. (4)
135. (1)
136. (4) \*@MP\* (condition ii)
137. (5) None of these (%#P@X%)
138. (1) M@A@JP (condition iii)
139. (4) #@X@AP (condition i)
140. (3) \$AM@X
141. (4) => K=P>S?R  
I. K?R: Not True  
II. P>R: Not true
142. (2) => X<Y?N=V  
I. X<N: Not true  
II. V?Y: True
143. (1) => T?L=M>G  
I. T>G: True  
II. M=T: Not True
144. (3) => A<C?W=Q  
I. A?Q: Not true/True  
II. Q>A: True/Not true  
(=> Here A?Q & Q>A or A<Q are complementary pairs)
145. (5) => B>D=U?H  
I. U<B: True  
II. B>H: True
146. (1) Between Jagadeesh and Lathika
147. (3) Lathika & Nagesh
148. (4) Lathika is immediate neighbour of Nagesh
149. (5) None of these
150. (3) Baiju is third to the left of Jagadeesh
151. (4) One (G 2 \$)
152. (4) T2K
153. (2) Two (2 \$ M, 5 % R)
154. (3) 52R
155. (2) 5M
156. (5)
157. (4)
158. (2)
159. (1)
160. (3)
161. (4)
162. (4)
163. (1)
164. (5)
165. (3)
166. (2)
167. (3)
168. (1)
169. (3)
170. (4)
171. (3)
172. (4)
173. (4)
174. (5)
175. (4)
176. (3)
177. (5)
178. (4)
179. (1)
180. (2)
181. (3) a social network using internet
182. (3) Insert
183. (2) pasting
184. (1) end
185. (1) Recognise Magnetic ink
186. (3) Converts Source-code into object-code
187. (4) Both (1) & (2)
188. (1) Dot-matrix
189. (2) SRAM need refreshing
190. (3) 4 bits
191. (4) Assembler
192. (3) Downloading
193. (3) F7
194. (4) Database Management System
195. (3) TB
196. (4) Mesh
197. (3) Server
198. (4) Network
199. (1) 8 bits
200. (4) Disk drive

വിശദീകരണങ്ങൾക്ക് തൊഴിൽവാർത്ത കാണുക

# BANK TEST PAPER

Time: 2 Hours

Total Marks: 20

## GENERAL AWARENESS

- Who among the following is the Finance Minister of the Central Government?
  - Manmohan Singh
  - P. Chidambaram
  - Sharad Pawar
  - S.M.Krishna
  - None of these
- The Small Industries Development Bank of India (SIDBI) has floated the country's first asset reconstruction company focusing on NPAs of micro, small and medium enterprises, christened India SME Asset Reconstruction Company (ISARC). The term NPA stands for?
  - New Pension Accounts
  - Net Performance Assets
  - Non-Pension Accounts
  - Non-Performing Assets
  - None of these
- The Government exempted Tamiflu 75 mg (Oseltamivir phosphatic) the only drug available for treatment of which of the following diseases from customs duty
  - Malaria
  - Tuberculosis
  - A(H<sup>1</sup>N<sup>1</sup>) influenza
  - AIDS
  - None of these
- Who among the following has been appointed as the new Foreign Secretary?
  - Shanta Sinha
  - Girija Vyas
  - J.S.Sharma
  - Nirupama Rao
  - None of these
- Which of the following States was put under President's rule in March 2009?
  - Bihar
  - Meghalaya
  - Haryana
  - Punjab
  - Jammu & Kashmir
- Prof.D.B.Deodhar Trophy is related to which of the following sports?
  - Cricket
  - Football
  - Tennis
  - Badminton
  - None of these
- Which of the following is the 11,111th branch of SBI?
  - Sonargaon
  - Bongaigaon
  - Meenakshipuram
  - Sonapur
  - None of these
- Ms Michelle Bachelet visited India in March 2009. She is the ----
  - President of Ghana
  - Prime Minister of Ghana
  - Prime Minister of Chile
  - President of Chile
  - None of these
- Standard & Poor is ----
  - name of a bank which was bankrupt in May 2009 in the US
  - name of a rating agency
  - the charitable organisation formed under the aegis of Nelson Mandela
  - a charitable organisation formed recently under the aegis of the United Nations
  - None of these
- The ICC has informed a five-member panel to look into the concerns of the Board of Control for Cricket in India about the 'whereabout' clause in the WADA code. WADA stands for ----
  - Whole Anti-Doping Agent
  - World Anti-Duplicating Agency
  - World Anti-Doping Agency
  - World Anti-Drugs Agency
  - None of these
- The sanctioned strength of Supreme Court judges has increased to ----
  - 26
  - 28
  - 31
  - 33
  - None of these
- Which of the following countries has emerged as India's largest defence supplier recently, overtaking Russia?
  - USA
  - Israel
  - Britain
  - Germany
  - France
- In the general elections to the 15th Lok Sabha a total of 714 million voters – an increase of 43 million over the 2004 elections – elected 543 members. It was held in ---- phases.
  - Three
  - Four
  - Five
  - Six
  - None of these
- The author of 'Dreams From My Father' is ----
  - Nelson Mandela
  - Shashi Taroor
  - Rahul Gandhi
  - Barack Obama
  - None of these
- The Ministry of Petroleum and Natural Gas has chalked out an ambitious plan to bring 200 cities under the supply network for CNG and PNG by 2015. In the Ministry's oil sector 'Vision 2015 – For Consumer Satisfaction and Beyond', it has been decided to spread the CNG and PNG distribution network across the country so that more vehicles could use the green fuel and households were made less dependent on Liquefied Petroleum Gas (LPG). The term CNG and PNG stands for Compressed Natural Gas and ----
  - Petroleum-based Natural Gas
  - Piped Natural Gas
  - Popular Natural Gas
  - Perfect Natural Gas
  - None of these
- In July 2009 hooch tragedy (illicit liquor), locally called 'lathha' caused death of more than 100 people in which of the following places?
  - Allahabad
  - Vadodara
  - Salem
  - Ahmedabad
  - None of these
- Manmohan Singh became the first Indian PM as the guest of honour at the Bastille Day parade in ----
  - Germany
  - France
  - Belgium
  - Brazil
  - Russia
- In the 2009-10 Union Budget, the outlay for Defence was increased from Rs.1,05,600 crore in 2008-09 to ----
  - Rs.1,41,703 crore
  - Rs.1,24,385 crore
  - Rs.1,18,000 crore
  - Rs.1,53,973 crore
  - None of these
- Non-Aligned Movement (NAM) meeting was held in July, 2009 at which of the following places?
  - Havana
  - Johannesburg
  - Pattaya
  - Sharm-el-Sheikh
  - None of these
- Anti-apartheid icon and the former South African President Nelson Mandela (affectionately known as Madiba) has called on people around the world to honour him by doing good deeds on his 91st birthday as his charitable foundation launches the inaugural Mandela Day. The Mandela Day is to be held on which of the following days each year?
  - July 18
  - July 28
  - August 19
  - June 28
  - None of these
- India's Hidayat Ansari and Ilavazhaghi won the men's women titles in the WMI-sponsored 13th SAARC ---- championship held in Mumbai.
  - Carom
  - Table Tennis
  - Chess
  - Boxing
  - Ball Badminton
- In the Union Budget 2009-10, the Fiscal Deficit is expected to be at ----
  - 5.2 %
  - 5.5 %

- (3) 6.2 % (4) 6.8 %  
(5) None of these
23. Who among the following has been elected as the Chairman of the Public Accounts Committee?  
(1) K.Rahman Khan  
(2) Arun Jaitley  
(3) Sushama Swaraj  
(4) Ajay Maken  
(5) None of these
24. Indira Gandhi Prize for Peace, Disarmament and Development has been conferred to which of the following persons in July, 2009?  
(1) Koichiro Matsuura  
(2) Ban Ki-moon  
(3) Aung San Suu Kyi  
(4) Bill Gates  
(5) None of these
25. Who among the following is the recipient of the 'Best Executive 2008' under the category of Asia's best companies and executives by Asiamoney, Asia's leading financial magazine?  
(1) Y.V.Reddy  
(2) Indra Nooyi  
(3) O.P.Bhatt  
(4) Kiran Shaw Mazumdar  
(5) None of these
26. Recently, the RBI has directed banks to install NSMs in all branches in a phased manner to check fake note menace. NSM stands for ----  
(1) Note Security Mechanism  
(2) Note Security Measure  
(3) Note Security Machine  
(4) Note Sorting Machine  
(5) None of these
27. India and the 10-nation Association of South East Asian Nations (ASEAN) signed a Free Trade Agreement (FTA) that will break duty barriers in the 1.7 billion consumer market in the region. The accord, India's first with a trade bloc, will cover 11 countries with a combined Gross Domestic Product of over \$2 trillion. The implementation of the FTA would take off from ----  
(1) January 1, 2010  
(2) March 31, 2010  
(3) January 31, 2010  
(4) April 1, 2010  
(5) None of these
28. On 26 July, 2009 India launched the nation's first indigenously designed and built nuclear submarine named ----  
(1) INS Vikrant  
(2) INS Chanakya  
(3) INS Virat  
(4) INS Arihant  
(5) None of these
29. India's Somdev Devvarman is related to ----  
(1) Tennis  
(2) Badminton (3) Hockey
- (4) Shooting (5) None of these
30. The prestigious Ramon Magsaysay Award, which is considered Asia's equivalent of the Nobel Prize, is conferred by which of the following countries?  
(1) Indonesia (2) Malaysia  
(3) The Philippines  
(4) South Korea  
(5) None of these
31. ---- became the first private company to get protection from the Central Industrial Security Force (CISF) recently.  
(1) Tata Consultancy Service  
(2) Mahindra Satyam  
(3) Bharathi Airtel  
(4) Infosys Technologies Ltd  
(5) None of these
32. Which of the following Commissions, which probed the sequence of events that led to the Babri Masjid demolition in Ayodhya on Dec 6, 1992, submitted its report to the Prime Minister in July, 2009?  
(1) Justice S.C.Mohapatra  
(2) Justice Nanavati  
(3) Justice Liberhan  
(4) Justice P.K.Banerjee  
(5) None of these
33. Shiv Charan Mathur who died recently was the Governor of ----  
(1) Goa  
(2) Arunachal Pradesh  
(3) Assam  
(4) Manipur  
(5) None of these
34. BRIC leaders' summit was held in June 2009 at Yekaterinburg in Russia. Which of the following countries is not a member of BRIC?  
(1) India (2) Russia  
(3) Bangladesh (4) China  
(5) Brazil
35. A statue of Tamil saint and poet, Tiruvalluvar was unveiled in the vicinity of Ulsoor Lake in Bangalore by the Karnataka government and in reciprocal to it a statue of which of the Kannada saint-poet was unveiled at Ayanavaram Park in Chennai by the Tamilnadu government recently?  
(1) Sarvagna (2) Madhava  
(3) Nimbarka (4) Ramanuja  
(5) None of these
36. Katchatheevu is a wasteland of an island on the international Maritime Boundary Line (IMBL) but recently some political parties in India made it the focus of a surrogate campaign for establishing fishing rights for Indian fishermen. The IMBL was amicably settled through 2 agreements in 1974 and 1976 between India and ----  
(1) Sri Lanka (2) Bangladesh  
(3) Pakistan (4) Myanmar
- (5) Maldives
37. Who among the following was unanimously elected as the first woman Speaker of the Lok Sabha?  
(1) Meira Nandan  
(2) Agatha Sangma  
(3) Meira Kumar  
(4) Preneet Kaur  
(5) None of these
38. Goa won the Santhosh Trophy Football championship held in Chennai by defeating ----  
(1) Bengal (2) Kerala  
(3) Punjab (4) Manipur  
(5) None of these
39. The Union government announced that GST will be implemented with effect from April 1, 2010. The term GST stands for ----  
(1) Gold and Silver Tax  
(2) General Security Tax  
(3) Goods Security Tax  
(4) Goods and Service Tax  
(5) None of these
40. As per the National Food Security Act, every family below the poverty line (BPL) in rural as well as urban areas will be entitled, by law, to 25 kg of rice or wheat a month at Rs.--- a kg.  
(1) 2 (2) 2.5  
(3) 3 (4) 4  
(5) None of these

## ENGLISH LANGUAGE

**Directions (41-55):** Read the following passage very carefully and answer the questions given below it. Certain words are printed in bold to help you to locate them while answering some of the questions.

Banking sector reforms in India were introduced in order to **improve** efficiency in the process of financial intermediation. It was expected that banks would take advantage of the changing operational environment and improve their performance. Towards this end, the Reserve Bank of India initiated a host of measures for the creation of a competitive environment. Deregulation of interest rates on both the deposit and lending sides imparted freedom to Banks to appropriately price their products and services. To compete effectively with non-banking entities, banks were permitted to undertake newer activities like investment banking, securities trading and insurance business. This was facilitated through amendments in the relevant Acts which permitted Public Sector Banks to raise equity from the market up to threshold limit (49 per cent) and also enabling the entry of new private and foreign banks. This changing face of banking led to an erosion of margins on

traditional banking business, promoting banks to search for newer activities to **augment** their fee incomes. At the same time, banks also needed to **devote** focused attention to operational efficiency in order to contain their transaction costs. Simultaneously with the deregulation measures prudential norms were instituted to strengthen the safety and soundness of the banking system.

Recent internal empirical research found that over the period 1992-2003, there has been a discernible improvement in the efficiency of Indian banks. The increasing trend in efficiency has been fairly uniform, irrespective of the ownership pattern. The rate of such improvement has, however, not been sufficiently high. The analysis also reveals that PSBs and private sector banks in India did not differ significantly in terms of their efficiency measures. Foreign banks, on the other hand, recorded higher efficiency as compared with their Indian counterparts.

41. Banks can control their transaction costs by  
 (1) restricting their lending activities  
 (2) undertaking more and more non-banking activities  
 (3) encouraging the customers to bank with other banks  
 (4) devoting more attention to operational efficiency  
 (5) None of these
42. What is the position of Indian banks as far as efficiency is concerned?  
 (1) The Indian banks did not bother about efficiency  
 (2) Compared to foreign counterparts, Indian banks lagged behind in efficiency  
 (3) The position of Indian banks cannot be estimated due to various factors  
 (4) Indian banks accorded high efficiency  
 (5) None of these
43. Which of the following is/are the measure(s) taken by RBI to create a competitive environment in the Banking sector?  
 (A) Banks were given freedom to take up newer activities  
 (B) Entry of new private and foreign banks in the field  
 (C) Amendments in the relevant Acts to enable PSBs to raise equity from the market  
 (1) None (2) A & B only  
 (3) A & C only (4) B & C only  
 (5) All the three
44. Which of the following statements recognising improvement in efficiency is TRUE in the context of the passage?  
 (1) There is no discernible difference

- in efficiency parameters  
 (2) The foreign banks recorded higher efficiency  
 (3) The efficiency of foreign banks is not comparable with Indian banks  
 (4) The rate of such improvement in efficiency was very high  
 (5) None of these
45. Which one of the following can be the most appropriate title to the passage?  
 (1) Indian Banks and Foreign Banks  
 (2) Customer service in banking industry  
 (3) Non-Performing Assets in banking sector  
 (4) Efficiency in Indian banking  
 (5) RBI as a regulatory body
46. Prudential norms were initiated in the banking sector with a view to  
 (1) increase operational efficiency  
 (2) contain the non-performing assets  
 (3) strengthen the soundness of banking system  
 (4) improve the customer service  
 (5) None of these
47. Changing face of banking led to  
 (1) closure of several banks in the country  
 (2) entry of private banks and foreign banks  
 (3) reduction in margins on banking business  
 (4) formation of militant unions in the banks  
 (5) None of these
48. Banking sector reforms in India were introduced for the purpose of  
 (1) giving more and more employment opportunities to the educated unemployed  
 (2) taking care of the down trodden masses  
 (3) increasing efficiency in the banking activities  
 (4) giving better return to the Central Government  
 (5) None of these
49. The recent internal empirical research conducted by the RBI found that  
 (1) there is cut-throat competition in banking industry  
 (2) the rate of return is not commensurate with the operational cost  
 (3) the rate of improvement has not been high  
 (4) nationalised banks and private sector banks did differ in their efficiency measures  
 (5) None of these

**Directions (51-53):** Choose the word which is the most nearly SAME in meaning of the word given in bold as

- used the passage.
50. **Augment**  
 (1) Make (2) Become  
 (3) Enlarge (4) Increase  
 (5) Envelop
51. **Initiated**  
 (1) Led (2) Motivated  
 (3) Implicated (4) Imbided  
 (5) Started
52. **Devote**  
 (1) Activate (2) Apply  
 (3) Apportion (4) Spare  
 (5) Involve
53. **Relevant**  
 (1) Recorded (2) Opposite  
 (3) Appropriate (4) Stringent  
 (5) Similar
54. **Reveal**  
 (1) Show (2) Conceal  
 (3) Secretive (4) Exhibit  
 (5) Prohibit
55. **Improve**  
 (1) Retard (2) Disprove  
 (3) Prove (4) Accelerate  
 (5) Degenerate

**Directions (53-55):** Choose the word which is the most OPPOSITE meaning of the word given in bold used the passage.

**Directions (55-65):** Read each of the following sentences to find out whether there is any error in it. The error, if any, will be in one part of the sentence. The number of that part is the answer. If there is no error, the answer is (5). (Ignore errors of punctuation, if any).

56. Though he is quick (1)/ in analysing problem (2)/ he takes always time (3)/ for finding a solution (4)/ No error (5).

57. Our company can (1)/ no longer afford (2)/ over-manned units as (3) our profit has lower (4)/ No error (5).

58. He failed explaining (1)/ why he could not (2)/ complete the important assignment (3)/ within the given time limit (4)/ No error (5).

59. Had all of them (1)/ gone there with the books (2)/ it could have (3) impressed the delegates (4)/ No error (5).

60. Who helps is (1)/ immaterial so long (2)/ as the help is extended (3)/ with a sincere intention. (4)/ No error (5).

61. He was upset (1)/ because he had (2) never in such a (3)/ peculiar situation before (4)/ No error (5).

62. Small farmers do not get (1)/ the requires support (2)/ from outside (3) the farming sector (4)/ No error (5).

63. We do not know (1)/ whom we should blame (2)/ for all the lapses observed (3)/ in the procedure (4) No error (5).

64. I am obliged with you (1)/ and your entire family (2)/ for showing kindness (3)/ and generosity towards us (4)/ No error (5).

65. He is one of (1)/the best novelists (2)/ that has ever lived. (3)/ Do you agree? (4)/ No error (5).

**Directions (66-70):** In each question below, four words which are numbered (1), (2), (3) and (4) have been printed of which one may be wrongly spelt. The number of that word is the answer. If all the four words are correctly spelt, mark (5) i.e., 'All Correct' as the answer

66. (1) vaccum (2) barricade  
(3) doomsday (4) festival  
(5) All correct

67. (1) fictitious (2) cacophony  
(3) nocturnall  
(4) nomenclature  
(5) All correct

68. (1) pugnacious  
(2) planetarium  
(3) blasphemy  
(4) procrastinate  
(5) All correct

69. (1) ridiculous (2) hilarious  
(3) chassis (4) shallow  
(5) All correct

70. (1) exacerbate (2) rendezvous  
(3) hypocrisy (4) ferocious  
(5) All correct

**Directions (71-80):** In the following passage, there are blanks, each of which has been numbered. These numbers are printed below the passage and against each, five words are suggested, one of which fits the blank appropriately. Find out the appropriate word in each case.

A young student teacher was assigned to instruct sixth class students for one week at an outdoor centre. She ---- (71) and painstakingly planned a variety of experiences ---- (72) to share with them her love of the fields and woods. But the week was a complete --- (73). It rained four of the five days and the children were rowdy and ---- (74). When at last the youngsters were packing to ---- (75) to town, the student teacher came to me in tears. "I wasn't --- (76) before," she said, "but now I know, I can never work with children. I'm just not ---- (77) out for it".

Then, as the children scrambled aboard the bus, one girl ---- (78) behind and, after a moment, said to the student teacher, "I want to thank you for this week and for the things you taught us. You know, I never listened to the wind in the trees before. It's a ---- (79) sound, and I'll never forget it. Here's a poem I wrote for you. I almost didn't give it to you." She handed over a slip of paper to the teacher, then ran to ---- (80) the others.

71. (1) abruptly (2) grudgingly  
(3) nervously  
(4) enthusiastically  
(5) carelessly

72. (1) hoping (2) looking  
(3) noting  
(4) apprehending  
(5) pleading

73. (1) span (2) joy  
(3) miracle (4) period  
(5) disaster

74. (1) unattractive (2) helpful  
(3) uncooperative  
(4) forgetful (5) decent

75. (1) write (2) return  
(3) leave (4) launch  
(5) communicative

76. (1) ready (2) sure  
(3) teaching (4) careful  
(5) optimistic

77. (1) cut (2) worked  
(3) let (4) looking  
(5) dragged

78. (1) hid (2) turned  
(3) followed (4) looked  
(5) lingered

79. (1) silent (2) healthy  
(3) lovely (4) harsh  
(5) noisy

80. (1) teach (2) inform  
(3) convince (4) join  
(5) tell

### QUANTITATIVE APTITUDE

**Directions (81-100):** What will come in place of question mark (?) in the following questions?

81.  $25 \times \sqrt{?} = 400$   
(1) 16 (2) 4  
(3) 156 (4) 246  
(5) None of these

82.  $53202 + 27891 = ? + 36147$   
(1) 44846 (2) 43966  
(3) 44496 (4) 44946  
(5) None of these

83.  $54\% \text{ of } 315 - 56.8 = ?$   
(1) 231.7 (2) 103.5  
(3) 152.3 (4) 113.3  
(5) None of these

84.  $24336 \div 48 = ?$   
(1) 497 (2) 507  
(3) 517 (4) 524  
(5) None of these

85.  $14.2 \times 2.8 \times 3.1 = ?$   
(1) 132.256 (2) 123.246  
(3) 123.256 (4) 132.526  
(5) None of these

86.  $25^{3.5} \times 25^? = 25^9$   
(1) 12.5 (2) 4.5  
(3) 5.5 (4) 6.5  
(5) None of these

87.  $(35)^2 + (17)^2 = (?)^2 + 425$   
(1) 1089 (2) 1098  
(3) 33 (4) 43  
(5) None of these

88.  $1073 + 1196 \div 23 = 379 + ?$   
(1) 874 (2) 796  
(3) 1504 (4) 746  
(5) None of these

89.  $\sqrt{50176} = ?$

(1) 204 (2) 224  
(3) 216 (4) 226  
(5) None of these

90.  $7\frac{2}{3}$  of  $1089 + 126 = 9066 - ?$   
(1) 6409 (2) 591  
(3) 491 (4) 601  
(5) None of these

91.  $4\frac{1}{3} + 7\frac{2}{5} - 5\frac{1}{2} = ?$   
(1)  $6\frac{1}{30}$  (2)  $5\frac{7}{30}$   
(3)  $6\frac{7}{30}$  (4)  $6\frac{7}{20}$   
(5) None of these

92.  $783 + 336 \div 7 \times 8 = ?$   
(1) 789 (2) 1067  
(3) 798 (4) 1167  
(5) None of these

93.  $(5)^3 + (11)^3 + (6)^3 \div (2)^3 = ?$   
(1) 1473 (2) 1503  
(3) 1493 (4) 1583  
(5) None of these

94.  $\frac{23 \times 12 + 24}{17 \times 6 - 2}$   
(1)  $\frac{3}{2}$  (2) 30  
(3) 3 (4)  $\frac{4}{3}$   
(5) None of these

95. If the product of two successive positive integers is 6162, which is the smaller integer?  
(1) 71 (2) 77  
(3) 78 (4) 79  
(5) None of these

96. What is the compound accrued on an amount of Rs. 15,000/- at the rate of 8 p.c.p.a. at the end of 2 years?  
(1) Rs. 2,400/-  
(2) Rs. 2,466/-  
(3) Rs. 2,496/-  
(4) Rs. 2,516/-  
(5) None of these

97. The owner of an electronics shop charges his customer 14% more than the cost price. If a customer paid Rs. 32,775/- for a laptop, then what was the cost price of the laptop?  
(1) Rs. 25,500/-  
(2) Rs. 27,500/-  
(3) Rs. 28,500/-  
(4) Rs. 28,750/-  
(5) None of these

98. One-eighth of a number is 47. What will be 25% of that number?  
(1) 84 (2) 88  
(3) 94 (4) 62  
(5) None of these

99. A sum of money is divided among Raju, Arun and Baiju in the ratio of 7:9:12 respectively. If the share of Arun is Rs. 22,500/-, then what is the total amount of money of Raju and Baiju together?  
(1) Rs. 45,700/-  
(2) Rs. 47,500/-  
(3) Rs. 52,500/-  
(4) Rs. 49,500/-  
(5) None of these

100. How many different words can be formed with the letters of the word

- TRUST?
- (1) 720 (2) 120  
(3) 60 (4) 24  
(5) None of these
101. The ages of Radha and Shyama are in the ratio of 2:3 respectively. After 4 years the ratio of their ages will be 5:7. What is the present age of Shyama?  
(1) 20 years (2) 24 years  
(3) 30 years (4) 36 years  
(5) None of these
102. 44 per cent of a number is 76 per cent of the second number. What is the respective ratio of the first number to the second number?  
(1) 5:7 (2) 11:19  
(3) 19:13  
(4) Cannot be determined  
(5) None of these
103. In an examination it is required to get 475 of the aggregate marks to pass. A student gets 38% marks and is declared failed by 114 marks. What are the maximum aggregate marks a student can get?  
(1) 800 (2) 850  
(3) 900 (4) 950  
(5) None of these
104. If the area of a circle is  $2464 \text{ cm}^2$ , what is its perimeter?  
(1) 126 cm (2) 144 cm  
(3) 164 cm (4) 176 cm  
(5) None of these
105. Which number should replace both the question marks (?) in the following equation?  
$$\frac{448}{?} = \frac{?}{28}$$
  
(1) 56 (2) 64  
(3) 112 (4) 124  
(5) None of these
106. The owner of a shop charges his customer 15% more than the cost price for purchasing a shirt. If a customer paid Rs. 1,127/- for a shirt, then what was the cost price of the shirt?  
(1) 980 (2) 840  
(3) 1040 (4) 950  
(5) None of these
107. The cost of 30 pens and 20 pencils is Rs. 360/-. What is the cost of 24 pens and 16 pencils?  
(1) Rs. 250/- (2) Rs. 278/-  
(3) Rs. 296/-  
(4) Cannot be determined  
(5) None of these
108. The simple interest accrued on an amount of Rs. 15,750 at the end of 8 years is Rs. 13,860/-. What is the rate of interest p.c.p.a.?  
(1) 6 (2) 8  
(3) 10 (4) 12  
(5) None of these
109. If an amount of Rs. 71,008/- is distributed equally amongst 28 children how much amount would each child get?  
(1) Rs. 2,536/- (2) Rs. 3,106/-  
(3) Rs. 1,742/- (4) Rs. 2,314/-  
(5) None of these
110. The difference between 72% of a number and 31% of the same number is 1845. What is 12% of that number?  
(1) 54 (2) 540  
(3) 280 (4) 480  
(5) None of these
111. Difference between the compound interest and simple interest accrued in two years at 4 % per annum is Rs. 12/-. What is the principal amount?  
(1) Rs. 7,000/- (2) Rs. 7,500/-  
(3) Rs. 8,000/-  
(4) Cannot be determined  
(5) None of these
112. If  $(42)^2$  is added to square of a number, the answer so obtained is 5733. What is the number?  
(1) 3696 (2) 3969  
(3) 63 (4) 69  
(5) None of these
113. If the numerator of a fraction is increased by 200% and the denominator is increased by 350%, the resultant fraction thus obtained is  $\frac{2}{7}$ . What was the original fraction?  
(1)  $\frac{1}{2}$  (2)  $\frac{3}{7}$   
(3)  $\frac{4}{5}$  (4)  $\frac{5}{7}$   
(5) None of these
114. Gagan purchased 23 packets of biscuits. Each packet contains 2 dozen biscuits. How many biscuits did Gagan purchase?  
(1) 542 (2) 452  
(3) 524 (4) 552  
(5) None of these
115. Two candidates fought an election. One of them got 68% of the total votes and won by 3024 votes. What is the total number of votes polled?  
(1) 8400 (2) 8000  
(3) 7500 (4) 6400  
(5) None of these
116. A train running at the speed of 90 kmph crosses a signal post in 6 seconds. What is the length of the train?  
(1) 150 metres (2) 200 metres  
(3) 250 metres  
(4) Cannot be determined  
(5) None of these
117. The sum of two digits of a two digit number is 12 and the difference between the two digits of the same number is 2. What is the two digit number?  
(1) 75 (2) 64  
(3) 57  
(4) Cannot be determined  
(5) None of these
118. Bindu spends 10% of her monthly salary on rent, 20% on food, 35% on bank loan payment and 15% on miscellaneous expenses. If she spends Rs. 1,950/- on miscellaneous expenses, how much does she spend on rent?  
(1) Rs. 1,200/- (2) Rs. 1,300/-  
(3) Rs. 1,350/- (4) Rs. 1,500/-  
(5) None of these
119. The average of 5 consecutive even numbers is C, D, E, F and G is 62. What is the product of D and G?  
(1) 3060 (2) 3390  
(3) 3690 (4) 3960  
(5) None of these
120. The income of Manoj is 150% of the income of Rajesh and the income of Suhas is 120% of the income of Manoj. If the total income of Manoj, Rajesh and Suhas is Rs. 1,29,000/-, what is the income of Manoj and Rajesh together?  
(1) Rs. 72,000/- (2) Rs. 72,500/-  
(3) Rs. 75,000/-  
(4) Cannot be determined  
(5) None of these

### REASONING ABILITY

121. How many such pairs of letters are there in the word COMPUTER, each of which has as many letters between them in the word as they have in the English alphabet?  
(1) One (2) Two  
(3) Three  
(4) More than three  
(5) None of these
122. In a certain code MAJOR is written as PSINB. How is APPLE written in that code?  
(1) MFQBQ (2) FMOBQ  
(3) MFOQB (4) MFNBQ  
(5) None of these
123. In certain code GAME is written as 5918 and PACK is written as 2934, how is CAKE written in that code?  
(1) 3498 (2) 3849  
(3) 3948 (4) 8934  
(5) None of these
124. How many such digits are there in the number 834792 each of which is as far away from the beginning of the number as when the digits are rearranged in ascending order within the number?  
(1) None (2) One  
(3) Two (4) Three  
(5) None of these
125. If 'P' denotes '+', 'Q' denotes '÷', 'R' denotes '-' and 'S' denotes 'x'; then  $356P22R16Q2 = ?$   
(1) 38 (2) 140  
(3) 22 (4) 10  
(5) None of these
126. How many meaningful English words can be made with the letters DMOE using each letter only once in each word?

- (1) One (2) Two  
 (3) Three  
 (4) More than three  
 (5) None of these
127. Four of the following five are alike in a certain way and so form a group. Which is the one that does not belong to the group?  
 (1) Tomato (2) Potato  
 (3) Yam (4) Beetroot  
 (5) Carrot
128. If it is possible to make a meaningful word from the first, the fifth, the seventh and the eighth letters of the word 'DOMINATE', last letter of the word is your answer. If more than one such word can be formed, give 'X' as your answer and if no such word can be formed give 'Y' as your answer.  
 (1) D (2) T  
 (3) X (4) Y  
 (5) None of these
129. Four of the following five are alike in respect to their position in the English alphabet and hence form a group. Which one does not belong to that group?  
 (1) DFC (2) IKH  
 (3) NPM (4) XYW  
 (5) RTQ
130. Santhosh walked 10 metres towards South, took a left turn and walked 10 metres and again took a left turn and walked 20 metres. In which direction he is now with respect to his starting point?  
 (1) North (2) North-West  
 (3) South-West (4) South-East  
 (5) None of these

**Directions (131-135):** In each question of the questions below are given three statements followed by two conclusions numbered I and II. You have to take the given statements to be true even if they seem to be at variance from commonly known facts. Read all the conclusions and then decide which of the given conclusions logically follows from the given statements disregarding commonly known facts.

- Give answer  
 (1) if only Conclusion I follows
- Give answer  
 (2) if only Conclusion II follows
- Give answer  
 (3) if either Conclusion I or II follows
- Give answer  
 (4) if neither Conclusion I nor II follows
- Give answer  
 (5) if both Conclusions I and II follow

131. Statements:  
 All cats are tigers  
 No tiger is jackal  
 Some jackals are deers  
 Conclusions:  
 I. Some deers are tigers

- II. No deer is tiger
132. Statements:  
 Some girls are boys  
 All boys are brothers  
 All brothers are fathers  
 Conclusions:  
 I. Some brothers are girls  
 II. Some fathers are girls

133. Statements:  
 All rivers are seas  
 Some seas are lakes  
 All lakes are ponds  
 Conclusions:  
 I. Some ponds are rivers  
 II. Some seas are ponds

134. Statements:  
 Some boxes are papers  
 Some papers are clips  
 Some clips are hooks  
 Conclusions:  
 I. Some boxes are clips  
 II. Some papers are hooks

135. Statements:  
 Some bees are mosquitoes  
 Some mosquitoes are butterflies  
 All butterflies are bats  
 Conclusions:  
 I. Some mosquitoes are bats  
 II. Some bees are bats
- Directions (136-140):** In each of these questions, a group of digits is given followed by four combinations of letters and symbols numbered (1), (2), (3) and (4). You have to find out which of the combinations correctly represents the group of digits based on the coding system and the conditions given below and mark your answer. If none of the four combinations is correct, your answer is (5) i.e. 'None of these' as your answer.

Digits	3	6	2	7	9	5	4	8	1
Letter/Symbol Code	P	\$	M	X	@	A	©	#	J

- Conditions:  
 (i) If the first digit is odd and the last digit is even, the codes for the first and last digits are to be swapped  
 (ii) If both the first and the last digits are odd, both are to be coded as '\*'  
 (iii) If both the first and the last digits are even, both are to be coded as '%'

136. 946237  
 (1) @@ \$MPX (2) \*©M\$P\*  
 (3) \*©\$PM\* (4) \*©\$MP\*  
 (5) None of these
137. 483976  
 (1) ©#P@X\$ (2) \$#P@©X  
 (3) \$#P@X© (4) \$#@PX©  
 (5) None of these
138. 245913  
 (1) M©A@JP (2) P©A@JM  
 (3) \*©A@J\* (4) %©A@J%  
 (5) None of these

139. 397458  
 (1) P@X©A# (2) \*P@X©A\*  
 (3) %P@X©A% (4) #@X©AP  
 (5) None of these

140. 652497  
 (1) \$AM©X@ (2) \$A©M@X  
 (3) \$AM©@X (4) XAM©@\$  
 (5) None of these

**Directions (141-145):** In the following questions, the symbols #, £, \$, ¥ and £ are used with different meanings as follows:

- 'P©Q' means 'P is not smaller than Q'  
 'P#Q' means 'P is not greater than Q'  
 'P\$Q' means 'P is neither smaller than nor equal to Q'  
 'P\*Q' means 'P is neither greater than nor equal to Q'  
 'P%Q' means 'P is neither greater than nor smaller than Q'

Now in each of the following questions assuming the given statements to be true, find which of the two conclusions I and II given below them is/are definitely true.

- Give answer (1)  
 if only conclusion I is true
- Give answer (2)  
 if only conclusion II is true
- Give answer (3)  
 if either conclusion I or conclusion II is true
- Give answer (4)  
 if neither conclusion I nor conclusion II is true
- Give answer (5)  
 if both conclusions I and II are true

141. Statements: K%P, P\$S, S#R  
 Conclusions: I. K#R II. P\$R
142. Statements: X\*Y, Y©N, N%V  
 Conclusions: I. X\*N II. V#Y
143. Statements: T©L, L%M, M\$G  
 Conclusions: I. T\$G II. M%T
144. Statements: A\*C, C©W, W%Q  
 Conclusions: I. A©Q II. Q\$A
145. Statements: B\$D, D%U, U©H  
 Conclusions: I. U\*B II. B\$H

**Directions (146-150):** Study the following information carefully and answer the question given below:

Seven friends Baiju, Jagadeesh, Rema, Nagesh, Lathika, Vimala and Bhoopathi are sitting around a circular table and are facing the centre. Vimala is between Jagadeesh and Bhoopathi. Baiju is between Lathika and Nagesh. Jagadeesh is second to the right of Lathika.

146. What is the position of Rema?  
 (1) Between Jagadeesh and Lathika  
 (2) Second to the right of Jagadeesh  
 (3) To the immediate left of Lathika  
 (4) Data inadequate  
 (5) None of these
147. Which of the following pairs has its first member sitting second to the

- right of the second member?  
 (1) Vimala & Nagesh  
 (2) Rema & Vimala  
 (3) Lathika & Nagesh  
 (4) Baiju & Rema  
 (5) None of these
148. Which of the following is false?  
 (1) Nagesh is immediate neighbour of Bhoopathi  
 (2) Rema is immediate neighbour of Lathika  
 (3) Jagadeesh is immediate neighbour of Rema  
 (4) Lathika is immediate neighbour of Nagesh  
 (5) All are true
149. What is the position of Bhoopathi?  
 (1) Second to the right of Baiju  
 (2) Between Baiju and Vimala  
 (3) To the immediate left of Vimala  
 (4) Fourth to the left of Lathika  
 (5) None of these
150. Which one of following is the correct statement?  
 (1) Nagesh is between Rema and Baiju  
 (2) Jagadeesh is between Lathika and Rema  
 (3) Baiju is third to the left of Jagadeesh  
 (4) Nagesh is to the immediate left of Bhoopathi  
 (5) None of these

**Directions (151-155):** Study the following information carefully to answer the questions given below:


6 F @ 9 3 # \* 4 K T G 2 \$ M 15 % R  
 ? 7 Y 8

151. How many such numerals are there in the above arrangement which are immediately followed by a symbol and also immediately preceded by a letter?  
 (1) None (2) Three  
 (3) Two (4) One  
 (5) None of these
152. What will come in place of the question mark (?) in the following series based on the above arrangement? F96 #43 ? M5\$  
 (1) TGK (2) T\$K  
 (3) G\$T (4) T2K  
 (5) None of these
153. How many such symbols are there in the above arrangement which are immediately followed by a letter but not immediately preceded by a letter?  
 (1) One (2) Two  
 (3) Three (4) None  
 (5) None of these
154. Four of the following five are alike in a certain way based on their positions in the above arrangement and so form a group. Which is the one that does NOT belong to the group?  
 (1) 96# (2) 7%8

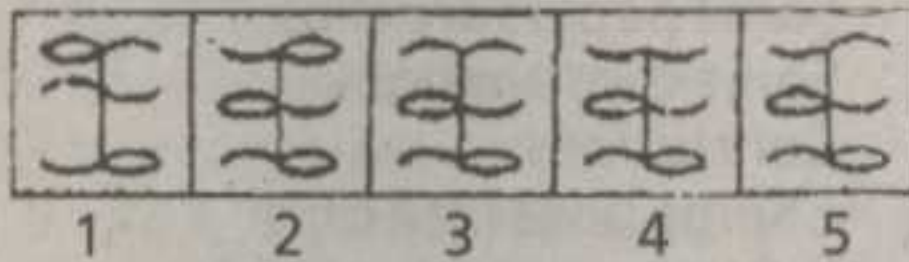
- (3) 52R (4) 2KM  
 (5) 43T
155. #9 : K\* :: \$G : ?  
 (1) 1M (2) 5M  
 (3) 5\$ (4) %1  
 (5) None of these

**Directions (156-160):** In each of the questions given below which one of the five answer figures on the right should come after the problem figures on the left, if the sequence were continued?

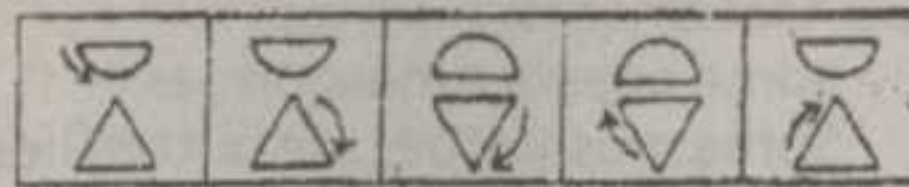
156. PROBLEM FIGURES



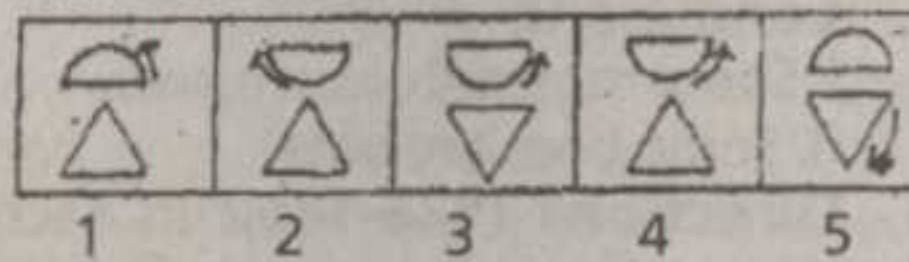
ANSWER FIGURES



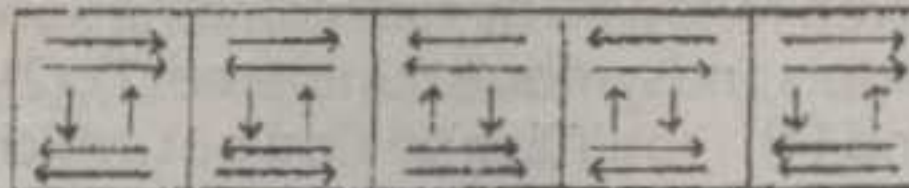
157. PROBLEM FIGURES



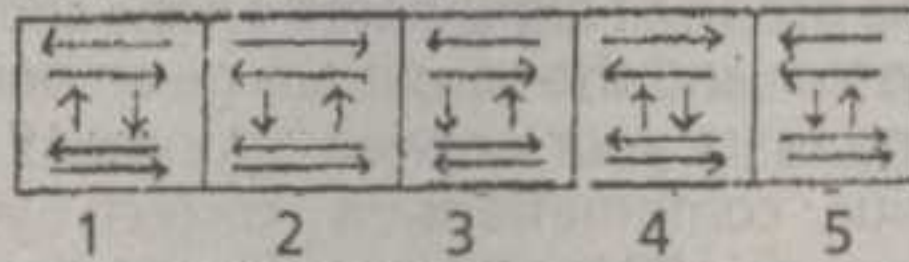
ANSWER FIGURES



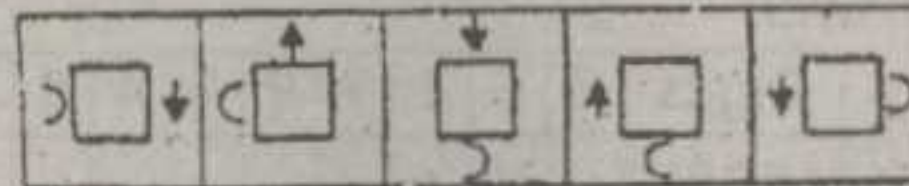
158. PROBLEM FIGURES



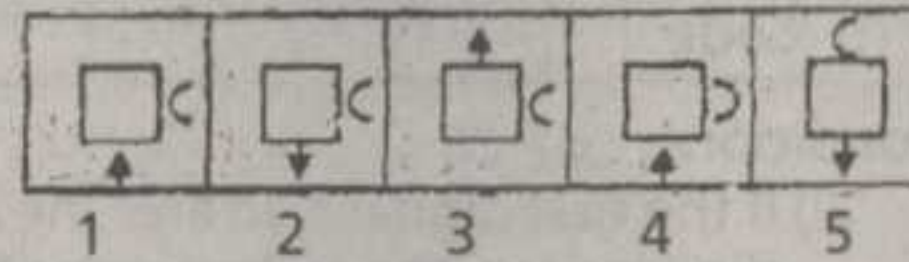
ANSWER FIGURES



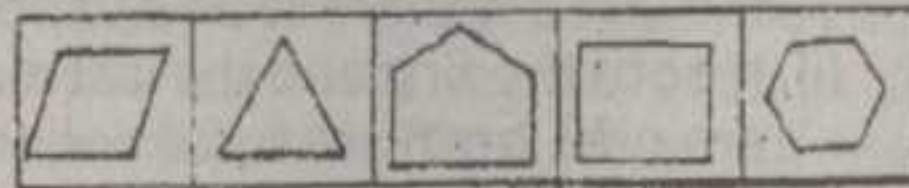
159. PROBLEM FIGURES



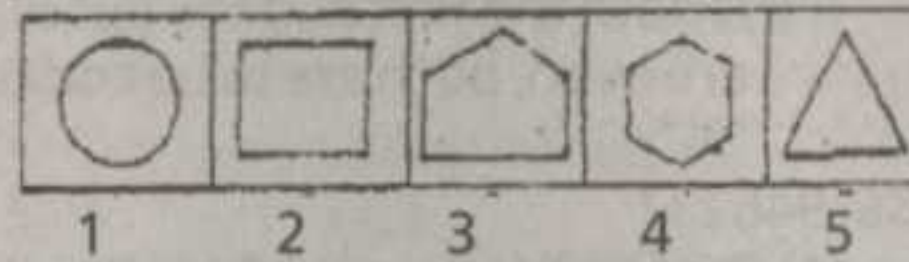
ANSWER FIGURES



160. PROBLEM FIGURES



ANSWER FIGURES



### MARKETING APTITUDE/ COMPUTER KNOWLEDGE

161. Promotion in marketing means ----  
 (1) Selling the product in specific area  
 (2) Promotion from one position to another  
 (3) Get through the internal assessment

- (4) Selling the products through various means  
 (5) None of these
162. Successful marketing means  
 (1) increasing profits  
 (2) increasing the output of the sales persons  
 (3) increasing the sales volume  
 (4) All the above  
 (5) None of these
163. Rural marketing means  
 (1) Selling to rural customers  
 (2) Selling by rural people  
 (3) Selling and buying by rural banks  
 (4) conducting exhibitions  
 (5) None of these
164. SWOT analysis includes:  
 (1) Strengths (2) Weaknesses  
 (3) Opportunities (4) Threats  
 (5) All the above
165. FMCG means:  
 (1) Fast Moving Company Goods  
 (2) Foreign Manufactured Company Goods  
 (3) Fast Moving Consumer Goods  
 (4) Fast Moving Capital Goods  
 (5) None of these
166. Bank Marketing is an unavoidable thing nowadays due to ----  
 (1) Global economic recession  
 (2) Globalisation  
 (3) Acquisition of small banks by larger banks  
 (4) Shortage of staff  
 (5) None of these
167. ATM stands for ----  
 (1) Automatic Time Machine  
 (2) Alternate Teller Machine  
 (3) Automatic Teller Machine  
 (4) Authorised Teller Machine  
 (5) None of these
168. Which of the following is not included in the 4 P's of Marketing Mix?  
 (1) Physical evidence  
 (2) Place (3) Price  
 (4) Product (5) Promotion
169. A lead in marketing is  
 (1) The leader in that particular product  
 (2) The leading manufacturer  
 (3) Target customer  
 (4) Both (1) & (2)  
 (5) None of these
170. The primary purpose of 'Packaging' is:  
 (1) Protection (2) Appeal  
 (3) Performance (4) All the above  
 (5) None of these
171. Customer satisfaction is:  
 (1) Products performance in relation to substitutes  
 (2) Product performance falls short of expectations  
 (3) Product performance to customers' expectations  
 (4) All the above  
 (5) None of these
172. Brand equity is ----



- (1) Favourable attitude of consistent purchase of a particular brand  
 (2) Value of equities of a company  
 (3) Brand equity is equal to asset minus liabilities of a firm  
 (4) Value associated with a brand  
 (5) None of these
173. Which of the following is not required for bank marketing?  
 (1) Communication skills  
 (2) Team spirit  
 (3) Empathy  
 (4) Sympathy  
 (5) Self-motivation
174. Social marketing is ----  
 (1) Customer satisfaction, social welfare and quality life  
 (2) To discharge social responsibilities  
 (3) Develop programmes to meet the customers and social needs  
 (4) Understanding consumer needs and matching the products accordingly  
 (5) All the above
175. Market segmentation is ----  
 (1) Dividing the market into different groups of customers having similar needs or characteristics  
 (2) Grouping of customers according to income, age, religion and sex  
 (3) Process of breaking down the total market for a product or service into distinct sub-group  
 (4) All the above (5) None of these
176. Dumping is a form of:  
 (1) Pricing method  
 (2) Marketing segmentation  
 (3) Price discrimination  
 (4) All the above  
 (5) None of these
177. Which of the following is the brand loyalty build up strategy?  
 (1) Reduce the cost of production  
 (2) Increase the promotion cost  
 (3) Reduce the selling price  
 (4) Increase the profit of the organisation  
 (5) Frequency programmes and club membership
178. What is goal of Advertising?  
 (1) Sales increase  
 (2) Establish brand equity  
 (3) Enter the target market  
 (4) All the above  
 (5) None of these
179. A successful marketing agent views obstacles ----  
 (1) Positively  
 (2) Negatively  
 (3) Frustratingly  
 (4) Discouragingly  
 (5) None of these
180. In growth stage of product life cycle, which of the following is correct?  
 (1) Greater investment is required  
 (2) Sales increases rapidly  
 (3) Less competition  
 (4) Large stock  
 (5) None of these
181. 'Facebook' is  
 (1) the latest version of Microsoft Word to be released in 2010  
 (2) the equivalent of Microsoft Word in Unix  
 (3) a social network using internet  
 (4) a deadly computer virus  
 (5) None of these
182. What menu is selected to insert page numbers in a word format?  
 (1) File  
 (2) Edit  
 (3) Insert  
 (4) Tools  
 (5) None of these
183. Ctrl+V is used for  
 (1) copying (2) pasting  
 (3) printing  
 (4) find and replacing  
 (5) None of these
184. To move to the end of a line of text, press ---- key.  
 (1) end  
 (2) home  
 (3) enter  
 (4) right arrow  
 (5) None of these
185. Which of the following is correct in the case of MICR?  
 (1) Recognise Magnetic ink  
 (2) Recognise any font  
 (3) Recognise human language  
 (4) both (1) & (2)  
 (5) None of these
186. Which of the following is not a function of an Operating system?  
 (1) Controls the operations of CPU  
 (2) Provides a user interface  
 (3) Converts Source-code into object-code  
 (4) Manages the primary memory allocation  
 (5) None of the above
187. LCD monitors are famous for  
 (1) Low power consumption  
 (2) Less space consumption  
 (3) Large space consumption  
 (4) Both (1) & (2)  
 (5) None of these
188. ---- printer is not a good choice for graphical printing  
 (1) Dot-matrix  
 (2) Laser  
 (3) Inkjet  
 (4) Laser-jet  
 (5) All of these
189. Which of the following is false?  
 (1) ROM is non-volatile  
 (2) SRAM need refreshing  
 (3) DRAM is made up of capacitors  
 (4) RAM is volatile  
 (5) None of these
190. One Nibble means ----  
 (1) 8 bits (2) 32 bits  
 (3) 4 bits (4) 16 bits  
 (5) None of these
191. ---- is capable of reading mnemonics  
 (1) Compiler  
 (2) Interpreter  
 (3) Operating system  
 (4) Assembler  
 (5) None of these
192. ---- process is used for getting the details stored in a web-server  
 (1) Installing (2) Copying  
 (3) Downloading (4) Booting  
 (5) None of these
193. In Microsoft Word, the shortcut used for spelling and grammar check is  
 (1) F2 (2) F5  
 (3) F7 (4) F8  
 (5) None of these
194. DBMS stands for  
 (1) Database Manager Software  
 (2) Database Management Software  
 (3) Databalancing Management System  
 (4) Database Management System  
 (5) None of these
195. Which of the following expresses the largest unit for storing data?  
 (1) GB (2) KB  
 (3) TB (4) MB  
 (5) B
196. Multiple paths are available in ---- topology  
 (1) Star (2) Ring  
 (3) Bus  
 (4) Mesh  
 (5) None of these
197. e-mail resides in ----  
 (1) Sender's computer  
 (2) Recipient's computer  
 (3) Server  
 (4) Both (1) & (2)  
 (5) None of these
198. Personal computers can be connected together to form a ----  
 (1) Supercomputer  
 (2) Server  
 (3) Hyperlink  
 (4) Network  
 (5) None of these
199. One byte means:  
 (1) 8 bits  
 (2) 32 bits  
 (3) 4 bits  
 (4) 1024 bits  
 (5) None of these
200. Which part of the computer stores data?  
 (1) Keyboard  
 (2) Monitor  
 (3) Printer  
 (4) Disk drive  
 (5) None of these

ANSWER KEY

1. (5) Pranab Mukharjee
2. (4) Non-Performing Assets
3. (3) A(H1N1) influenza or swine flu
4. (4) Nirupama Rao
5. (2) Meghalaya
6. (1) Cricket
7. (4) Sonapur
8. (4) President of Chile
9. (2) name of a rating agency
10. (3) World Anti-Doping Agency
11. (3) 31
12. (2) Israel
13. (3) Five
14. (4) Barack Obama
15. (2) Piped Natural Gas
16. (4) Ahmedabad
17. (2) France
18. (1) Rs.1,41,703 crore (About 34% hike)
19. (4) Sharm-el-Sheikh (in Egypt)
20. (1) July 18
21. (1) Carom
22. (4) 6.8 %
23. (5) Jaswant Singh
24. (4) Bill Gates
25. (3) O.P.Bhatt
26. (4) Note Sorting Machine
27. (1) January 1, 2010
28. (4) INS Arihant
29. (1) Tennis
30. (3) The Philippines
31. (4) Infosys Technologies Ltd
32. (3) Justice Liberhan
33. (3) Assam
34. (3) Bangladesh
35. (1) Sarvagna
36. (1) Sri Lanka
37. (3) Meira Kumar
38. (1) Bengal
39. (4) Goods and Service Tax
40. (3) 3
41. (4)
42. (2)
43. (5)
44. (2)
45. (5)
46. (3)
47. (3)
48. (3)
49. (3)
50. (4)
51. (5)
52. (2)
53. (3)
54. (2)
55. (1)
56. (3) 'Always' should come before 'takes' (=>'always' is an adverb and should be used before main verb)
57. (4) Replace 'lower' with 'lowered' (=>has/have must be followed by the past participle form)
58. (1) 'Explaining' should be replaced with 'to explain'
59. (5)
60. (4) Replace 'so' with 'as'
61. (3) 'Been' should be used before 'in' (=> the sentence is in the passive voice)
62. (2) Replace 'require' with 'required' (=>passive voice)
63. (5)
64. (1) Replace 'with' with 'to' (=> 'oblige' must be followed by 'to')
65. (3) Replace 'has' with 'have' (=> here the subject is 'best novelists', which is in plural)
66. (1) vacuum
67. (3) nocturnal
68. (5)
69. (2) hilarious
70. (3) hypocrisy
71. (4)
72. (1)
73. (5)
74. (3)
75. (2)
76. (2)
77. (1)
78. (2)
79. (3)
80. (4)
81. (5) None of these (= 256)
82. (4) 44946
83. (4) 113.3
84. (2) 507
85. (3) 123.256
86. (3) 5.5
87. (3) 33
88. (4) 746
89. (2) 224
90. (2) 591
91. (3) 6 7/30
92. (4) 1167
93. (5) 1483
94. (3) 3
95. (3) 78
96. (3) Rs.2,496/-
97. (4) Rs.28,750/-
98. (3) 94
99. (2) Rs.47,500/-
100. (3) 60
101. (2) 24 years
102. (5) None of these (=19:11)
103. (4) 950
104. (4) 176 cm
105. (3) 112
106. (1) 980
107. (5) None of these (= Rs.288/-)
108. (5) None of these (11%)
109. (1) Rs.2,536/-
110. (2) 540
111. (2) Rs.7,500/-
112. (3) 63
113. (2) 3/7
114. (4) 552
115. (1) 8400
116. (1) 150 metres
117. (4) Cannot be determined
118. (2) Rs.1,300/-
119. (4) 3960
120. (3) Rs.75,000/-
121. (4) More than three
122. (5) None of these (MFOBQ)
123. (3) 3948
124. (4) Three
125. (5) None of these (=32)
126. (3) Three (DEMO, MODE, DOME)
127. (3) Yam
128. (3) X (TEND, DENT)
129. (4) XYW
130. (5) None of these (North-East)
131. (3)
132. (5)
133. (2)
134. (4)
135. (1)
136. (4) \*@MP\* (condition ii)
137. (5) None of these (%#P@X%)
138. (1) M@A@JP (condition iii)
139. (4) #@X@AP (condition i)
140. (3) \$AM@X
141. (4) => K=P>S?R  
I. K?R: Not True  
II. P>R: Not true
142. (2) => X<Y?N=V  
I. X<N: Not true  
II. V?Y: True
143. (1) => T?L=M>G  
I. T>G: True  
II. M=T: Not True
144. (3) => A<C?W=Q  
I. A?Q: Not true/True  
II. Q>A: True/Not true  
(=> Here A?Q & Q>A or A<Q are complementary pairs)
145. (5) => B>D=U?H  
I. U<B: True  
II. B>H: True
146. (1) Between Jagadeesh and Lathika
147. (3) Lathika & Nagesh
148. (4) Lathika is immediate neighbour of Nagesh
149. (5) None of these
150. (3) Baiju is third to the left of Jagadeesh
151. (4) One (G 2 \$)
152. (4) T2K
153. (2) Two (2 \$ M, 5 % R)
154. (3) 52R
155. (2) 5M
156. (5)
157. (4)
158. (2)
159. (1)
160. (3)
161. (4)
162. (4)
163. (1)
164. (5)
165. (3)
166. (2)
167. (3)
168. (1)
169. (3)
170. (4)
171. (3)
172. (4)
173. (4)
174. (5)
175. (4)
176. (3)
177. (5)
178. (4)
179. (1)
180. (2)
181. (3) a social network using internet
182. (3) Insert
183. (2) pasting
184. (1) end
185. (1) Recognise Magnetic ink
186. (3) Converts Source-code into object-code
187. (4) Both (1) & (2)
188. (1) Dot-matrix
189. (2) SRAM need refreshing
190. (3) 4 bits
191. (4) Assembler
192. (3) Downloading
193. (3) F7
194. (4) Database Management System
195. (3) TB
196. (4) Mesh
197. (3) Server
198. (4) Network
199. (1) 8 bits
200. (4) Disk drive

വിശദീകരണങ്ങൾക്ക് തൊഴിൽവാർത്ത കാണുക