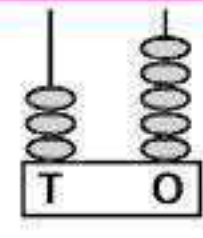


1. Which flower number matches with given abacus?



- (A) 35 (B) 30 (C) 38 (D) 39

2. Which tree lies between trees B and D?

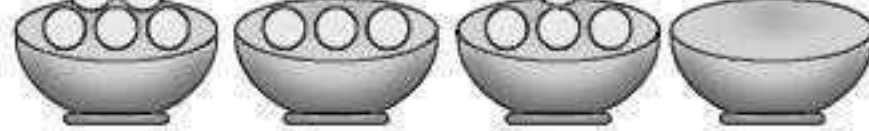


- (A) Tree A (B) Tree C (C) Tree E (D) Tree F


3. These are bowls of candy four friends have.

Who has zero candies?

- (A) Rupal (B) Meena (C) Laxmi (D) Mona



4. Which number line shows $4 + 4$?



5. Which star shows greatest number?



6. If $\begin{matrix} 3 \\ 2 \end{matrix} \rightarrow 5$, $\begin{matrix} 4 \\ 2 \end{matrix} \rightarrow 6$ then $\begin{matrix} 4 \\ 3 \end{matrix} \rightarrow ?$

- (A) 6 (B) 7 (C) 5 (D) 8

7. Count the number of candies shown below.



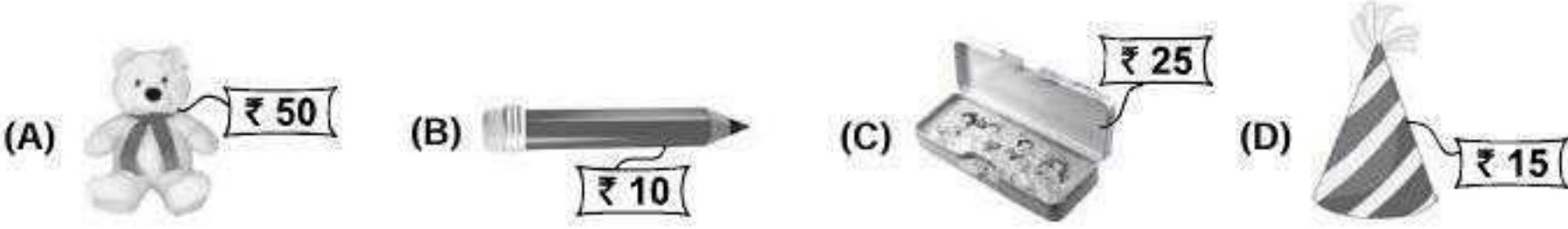
- (A) 11 (B) 10 (C) 12 (D) 15

8. Which pencil is the longest?



- (A) R (B) Q (C) P (D) S

9. What can be bought for ₹ 10?



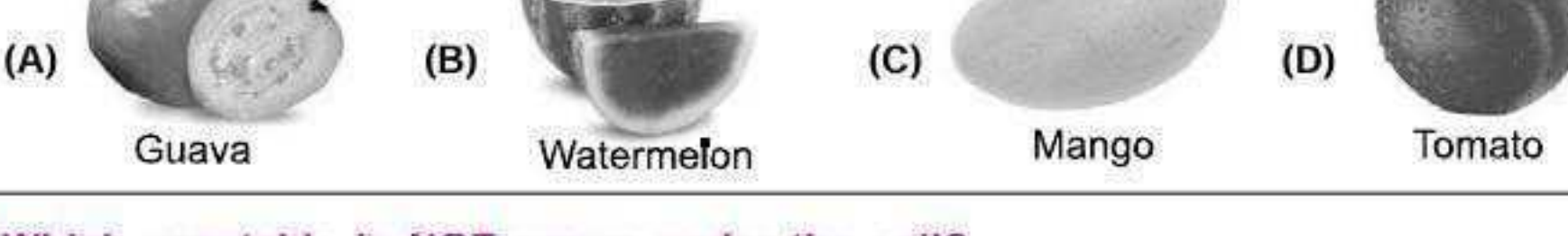
10. What is the missing number?



- (A) 58 (B) 53 (C) 55 (D) 59

SCIENCE

11. Whose seeds cannot be eaten?



- (A) Guava (B) Watermelon (C) Mango (D) Tomato

12. Which vegetable is NOT grown under the soil?



- (A) Potato (B) Carrot (C) Turnip (D) Brinjal

13. Which oil is NOT got from plants?

- (A) Olive oil (B) Coconut oil (C) Mustard oil (D) Kerosene oil

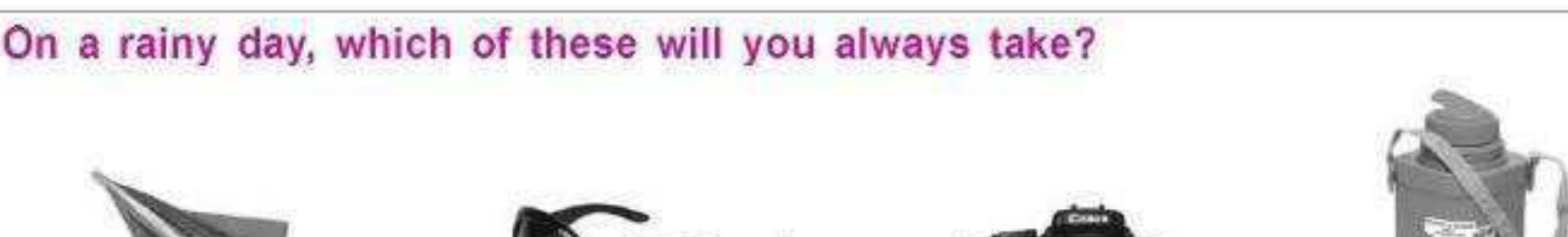
14. Wood is used to make _____.

- (A) House (B) Paper (C) Furniture (D) All of these

15. By saving paper, we can save _____.

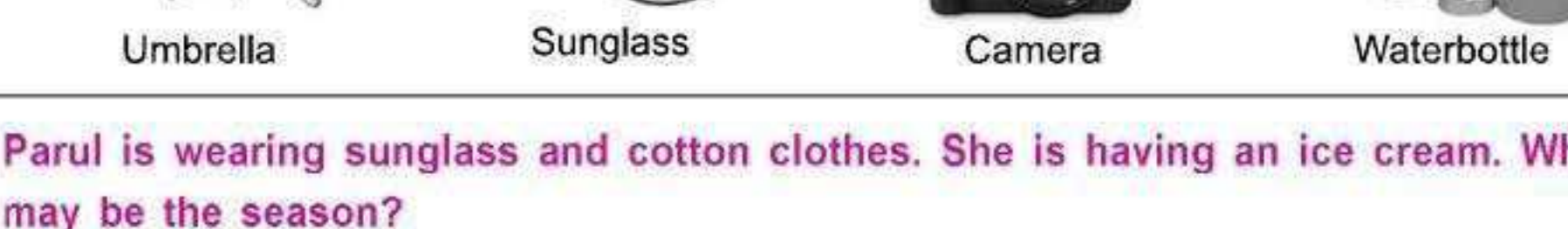
- (A) Water (B) Trees (C) Birds (D) Animals

16. Mona is looking at the night sky. Which of these she CANNOT see?



- (A) Stars (B) Moon (C) Sun (D) All of these

17. On a rainy day, which of these will you always take?

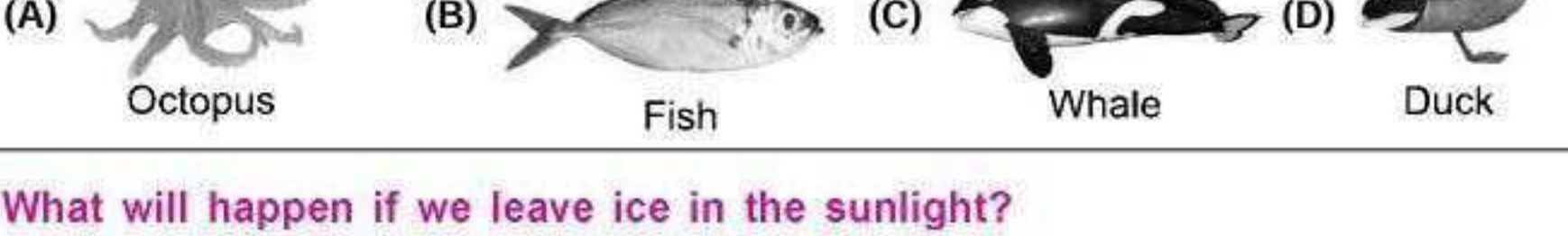


- (A) Umbrella (B) Sunglass (C) Camera (D) Waterbottle

18. Parul is wearing sunglasses and cotton clothes. She is having an ice cream. What may be the season?

- (A) Winter (B) Summer (C) Rainy (D) None of these

19. Which animal cannot live inside water?

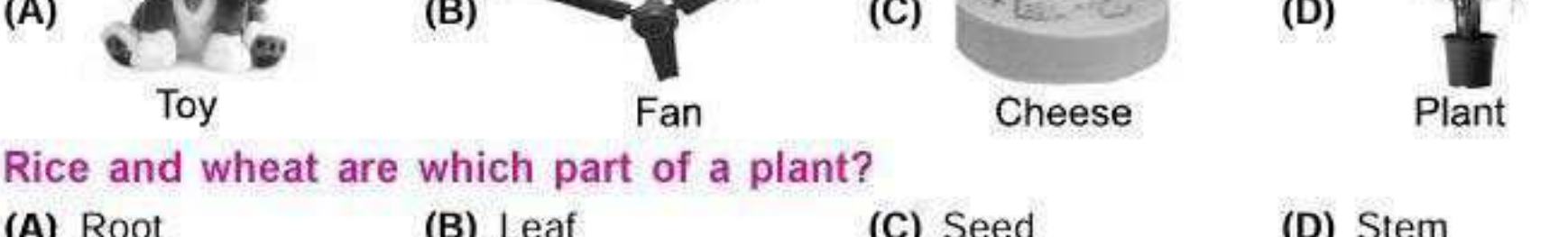


- (A) Octopus (B) Fish (C) Whale (D) Duck

20. What will happen if we leave ice in the sunlight?

- (A) It will change into water. (B) It will change into lime water. (C) Both (A) & (B). (D) It will increase in size.

21. Which of these needs food to grow?



- (A) Toy (B) Fan (C) Cheese (D) Plant

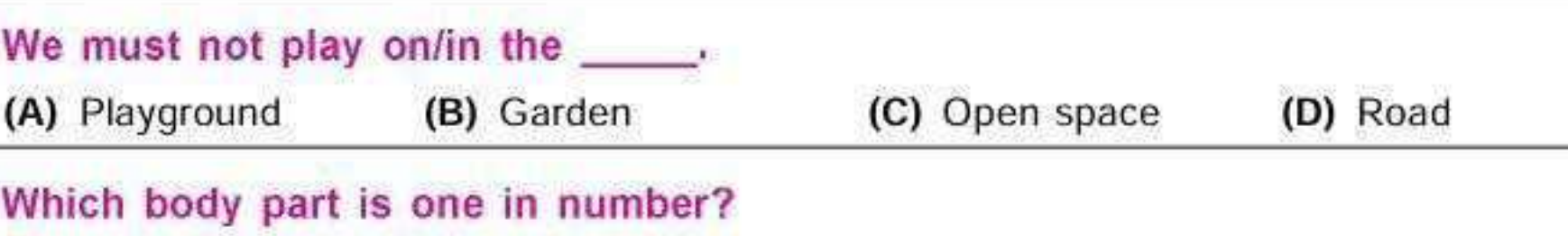
22. Rice and wheat are which part of a plant?

- (A) Root (B) Leaf (C) Seed (D) Stem

23. Which traffic signal makes you stop?

- (A) Green (B) Yellow (C) Red (D) Blue

24. Which of these should be used carefully?




- (A) Blade (B) Knife (C) Scissors (D) All of these

25. We must not play on/in the _____.

- (A) Playground (B) Garden (C) Open space (D) Road

26. Which body part is one in number?



- (A) Eye (B) Ear (C) Nose (D) Hand

27. Which part of the body helps you to enjoy a rainbow?

- (A) Ears (B) Nose (C) Eyes (D) Hair

28. _____ is filled with _____.



- (A) Sand (B) Water (C) Oil (D) Air

29. Which part of the body is shown here?



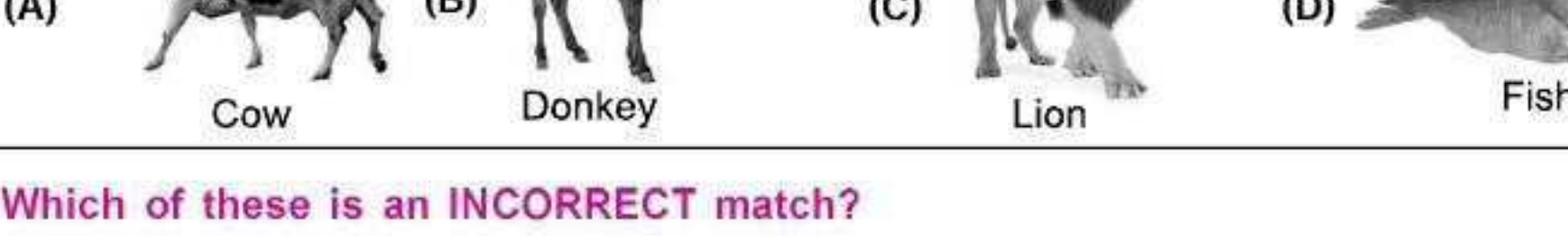
- (A) Fingers (B) Eyes (C) Head (D) Legs

30. Which of these needs water?




- (A) Washing clothes (B) Cooking food (C) Bathing (D) All of these

31. We like to sit near _____ in summers.



- (A) Fridge (B) Heater (C) Bonfire (D) Cooler

32. Which animal lives in forest?



- (A) Cow (B) Donkey (C) Lion (D) Fish

33. Which of these is an INCORRECT match?

Animal	Type of food it eats
(A) Eagle	Rat
(B) Squirrel	Grains
(C) Crow	Flesh
(D) Frog	Plants

34. Match Column I with Column II and select the correct option from the codes given below.

Column I (Animal)	Column II (Sound)
(a)	(i) Coo
(b)	(ii) Roar
(c)	(iii) Croak
(d)	(iv) Moo
	(v) Trumpet

(A) (a)-(v), (b) - (i), (c) - (ii), (d) - (iii)
 (B) (a)-(ii), (b) - (v), (c) - (i), (d) - (iii)
 (C) (a)-(ii), (b) - (i), (c) - (v), (d) - (iv)
 (D) (a)-(iii), (b) - (iv), (c) - (v), (d) - (ii)

35. For which part of the body is the given item used?



- (A) Eyes (B) Nose (C) Ear (D) Head