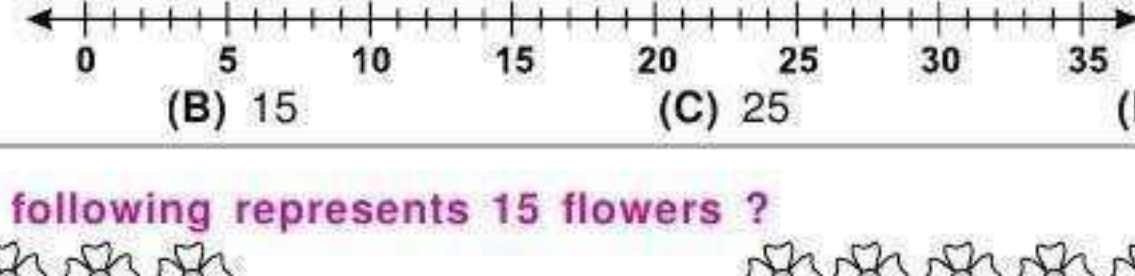







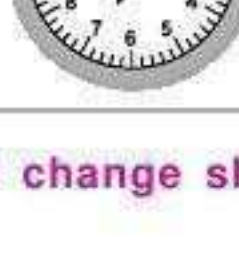
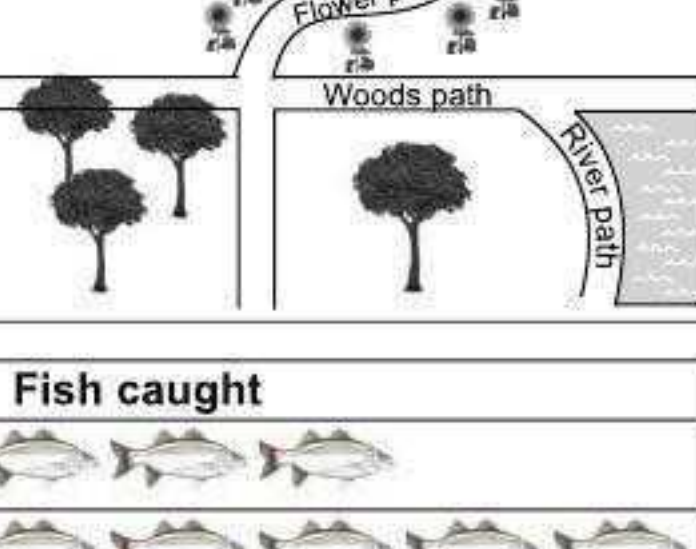

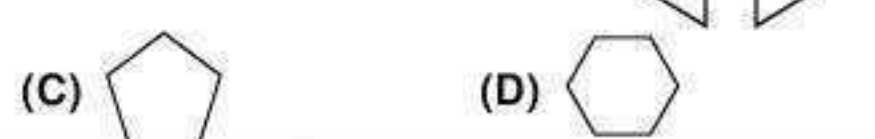
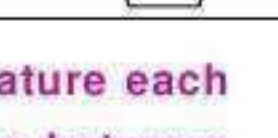








MENTAL ABILITY

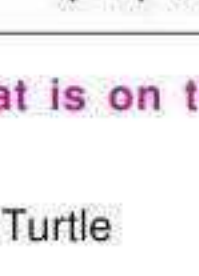



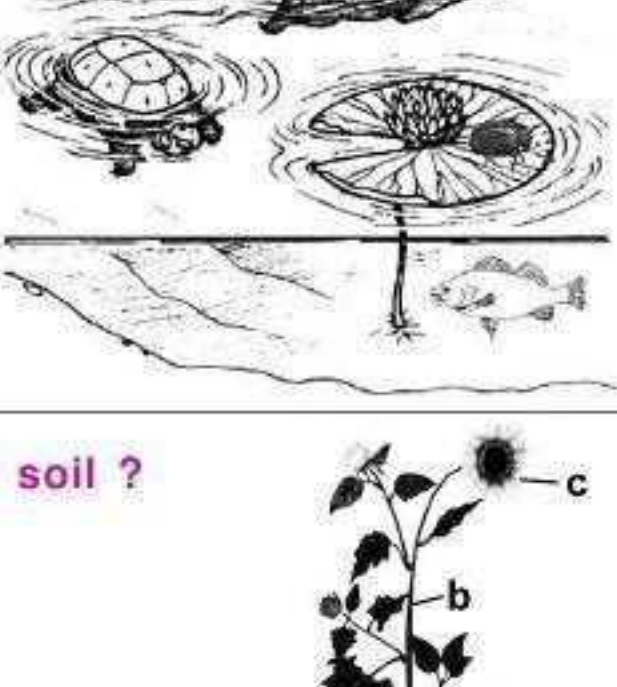
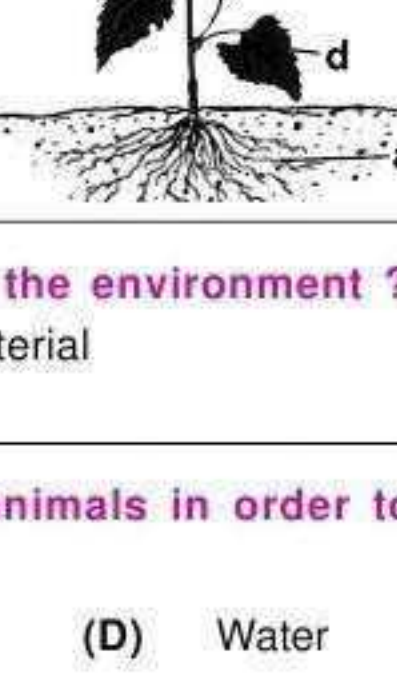
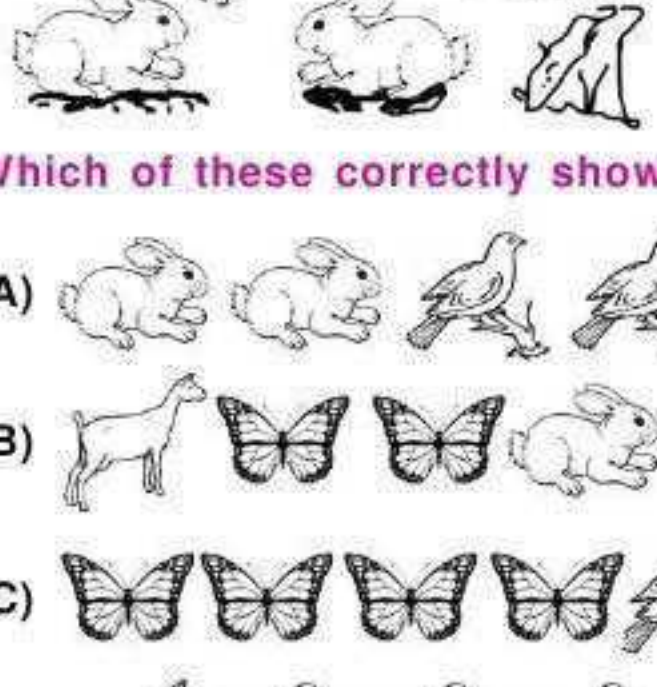

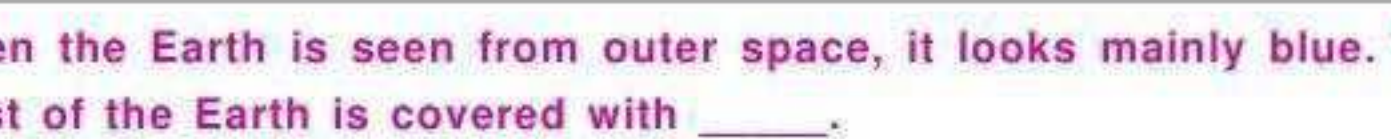

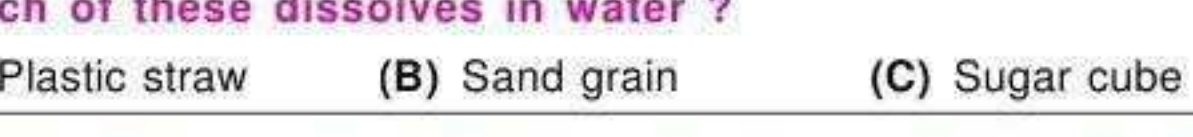
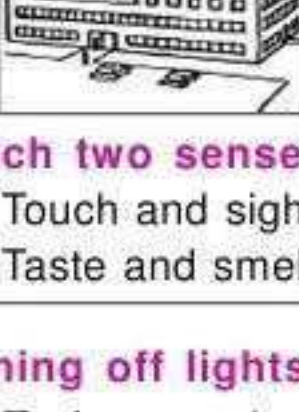

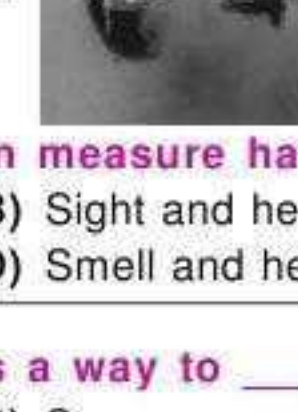
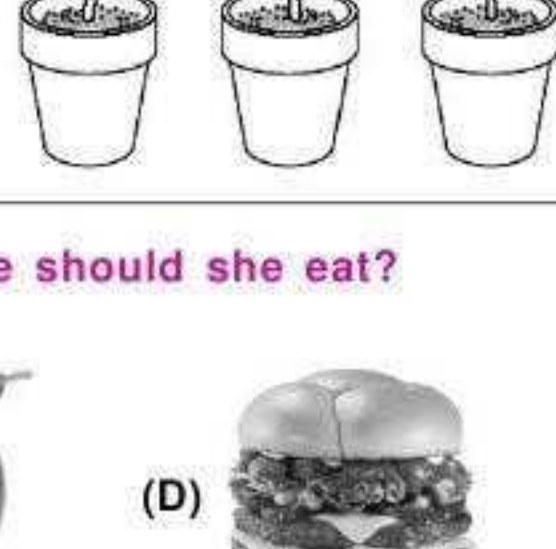
- Which of the following lists the numbers in order from least to greatest ?
 (A) 1000, 900, 800 (B) 700, 800, 900 (C) 300, 500, 400 (D) 100, 700, 600
- What is the distance on a number line from 16 to 31 ?

 (A) 14 (B) 15 (C) 25 (D) 27
- Which of the following represents 15 flowers ?
 (A) 
 (B) 
 (C) 
 (D) 
- Which clock appears to show 7:50 ?
 (A) 
 (B) 
 (C) 
 (D) 
- Jatin bought a notebook for ₹ 20.00. He paid ₹ 30.00. How much change should he receive ?
 (A) ₹ 10.00 (B) ₹ 35.00 (C) ₹ 25.00 (D) ₹ 5.00
- Which option is the same as the number sentence shown below ?
 $5 + 5 + 5 + 5 + 5 + 5 + 5 + 5 = \square$
 (A) $20 + 10 + 5$ (B) $20 + 4 + 4 + 5 + 5$
 (C) $10 + 10 + 10 + 10$ (D) $10 + 10 - 10 + 8$
- Which of these appears to be a straight path ?
 (A) Flower path (B) Woods path (C) River path (D) None of the above






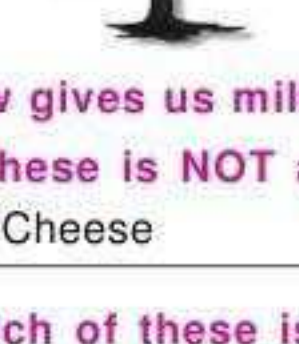
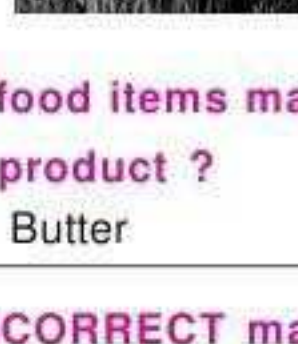
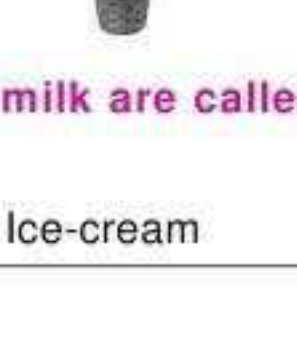
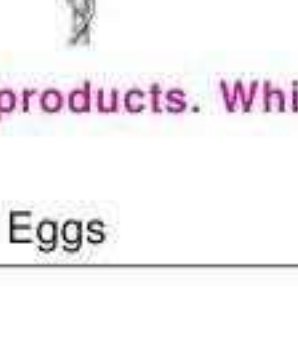






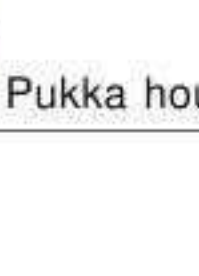
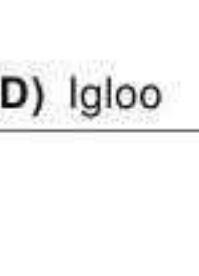
- Look at the given table. How many fish did Amit and Suhail catch all together ?
 (A) 4 (B) 6 (C) 10 (D) 12

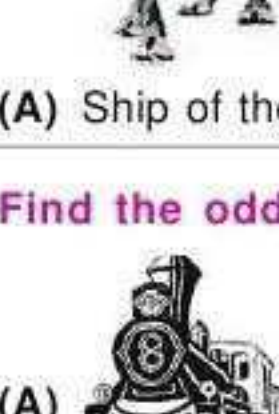
Fish caught	
Amit	
Suhail	
Monica	
Each	 = 1 fish
- Two shapes shown in the given figure can be put together to make a new shape. Which picture shows this new shape ?
 (A) 
 (B) 
 (C) 
 (D) 

- Ms. Malhotra's class recorded the temperature each day for one week. What was the difference between the highest and the lowest temperatures ?
 (A) 12° (B) 20° (C) 63° (D) 68°


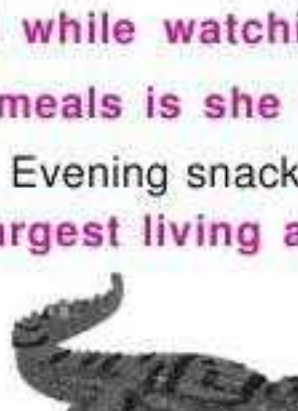


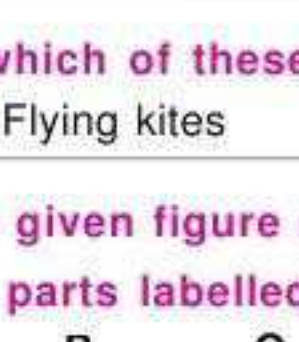
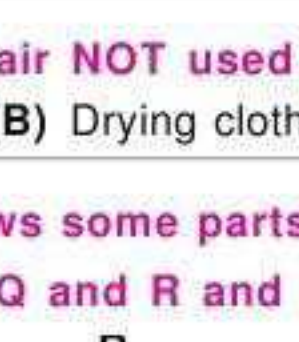
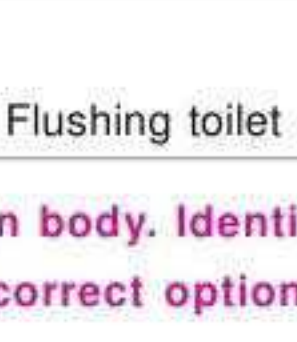
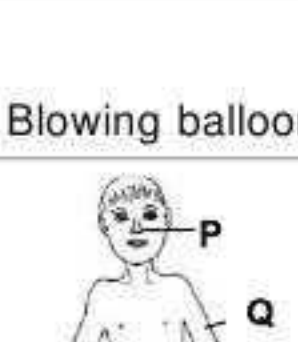
Days	Temperature Recorded
Sunday	65°
Monday	68°
Tuesday	75°
Wednesday	72°
Thursday	68°
Friday	64°
Saturday	63°


SCIENCE

- Which of the following weather conditions would make you put on a heavy, warm coat and gloves ?
 (A) 
 (B) 
 (C) 
 (D) 
- What is on the lotus leaf ?
 (A) Turtle (B) Beaver (C) Fish (D) Insect

- Which labelled part of the plant takes water from the soil ?
 (A) a (B) c (C) d (D) b

- Which of the following is a way by which people directly affect the environment ?
 (A) Playing soccer (B) Dumping waste material (C) Flying kites (D) Walking to school
- Which of the following is more important for plants than for animals in order to live ?
 (A) A place to live (B) Air (C) Sunlight (D) Water

- Which of these correctly shows the animals in the given figure ?
 (A) 
 (B) 
 (C) 
 (D) 
- When the Earth is seen from outer space, it looks mainly blue. This is because most of the Earth is covered with _____.
 (A) Mountains (B) Glaciers (C) Deserts (D) Oceans
- Which of these dissolves in water ?
 (A) Plastic straw (B) Sand grain (C) Sugar cube (D) Wooden spoon
- Which will have a bad effect on the air people breathe ?
 (A) 
 (B) 
 (C) 
 (D) Both (A) & (C)
- Which two senses would best help a person measure hair length ?
 (A) Touch and sight (B) Sight and hearing (C) Taste and smell (D) Smell and hearing
- Turning off lights when you leave a room is a way to _____.
 (A) Reduce waste material (B) Save energy (C) Recycle materials (D) Reuse natural resources
- The plants shown in the figure have all been growing on the same sunny windowsill for 6 weeks. What may have caused the difference in their appearance ?
 (A) Different amounts of light (B) Different amounts of water (C) Different-sized pots (D) Temperature difference


- Doctor advised Jaya to eat healthy food. Which of these should she eat?
 (A) 
 (B) 
 (C) 
 (D) 
- Very big plants are called trees. Trees have a hard and thick stem. Which of these is a tree ?
 (A) 
 (B) 
 (C) 
 (D) 
- Cow gives us milk. The food items made from milk are called milk products. Which of these is NOT a milk product ?
 (A) Cheese (B) Butter (C) Ice-cream (D) Eggs
- Which of these is an INCORRECT match ?
 (A)  
 (B)  
 (C)  
 (D)  

- House made up of solid snow is called _____.
 (A) Caravan (B) House boat (C) Pukka house (D) Igloo

- _____ is also called _____.
 (A) Ship of the snow (B) King of the desert (C) Boat of the city (D) Ship of the desert

- Find the odd one out.
 (A) 
 (B) 
 (C) 
 (D) 
- Rupal is taking a meal while watching her favourite cartoon show at 9.00 pm. Which of the following meals is she taking ?
 (A) Breakfast (B) Evening snacks (C) Lunch (D) Dinner
- Which of these is the largest living animal on the Earth ?
 (A) 
 (B) 
 (C) 
 (D) 

- In which of these is air NOT used ?
 (A) Flying kites (B) Drying clothes (C) Flushing toilet (D) Blowing balloon
- The given figure shows some parts of a human body. Identify the parts labelled P, Q and R and select the correct option.
 (A) Cheek (B) Nose (C) Lip (D) Nose
 (P) _____ (Q) _____ (R) _____
 (A) Chest (B) Neck (C) Arm (D) Arm
 (A) Knee (B) Foot (C) Ankle (D) Foot


- Which of these objects is most likely used in the weather shown in the given figure ?
 (A) Raincoat (B) Sunglasses (C) Hat (D) Gloves

- To stay clean and healthy which of these habits should NOT be followed ?
 (A) 
 (B) 
 (C) 
 (D) 