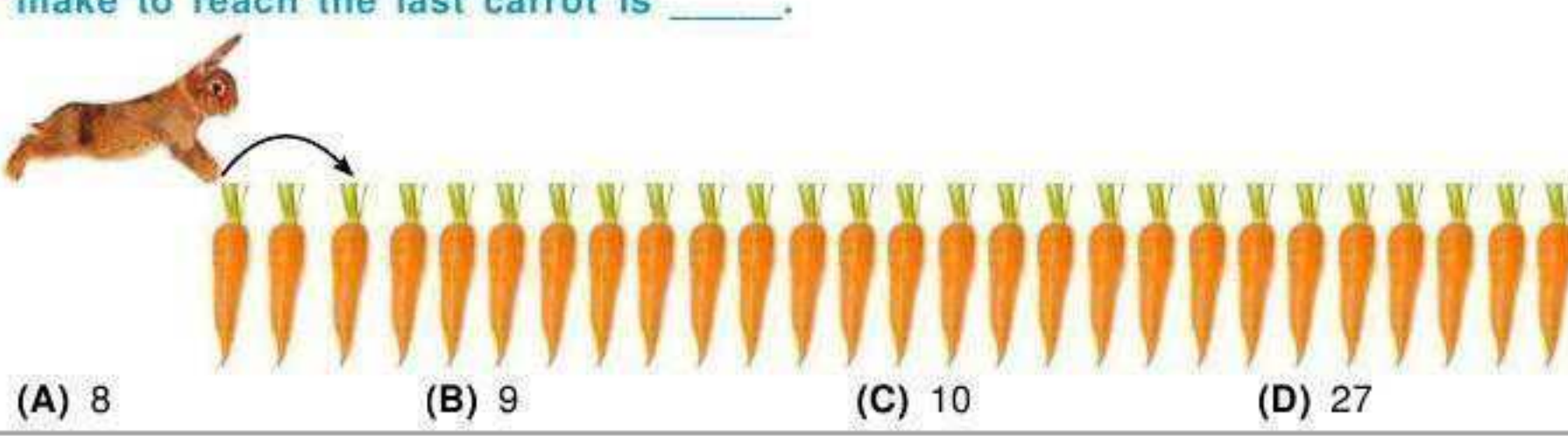


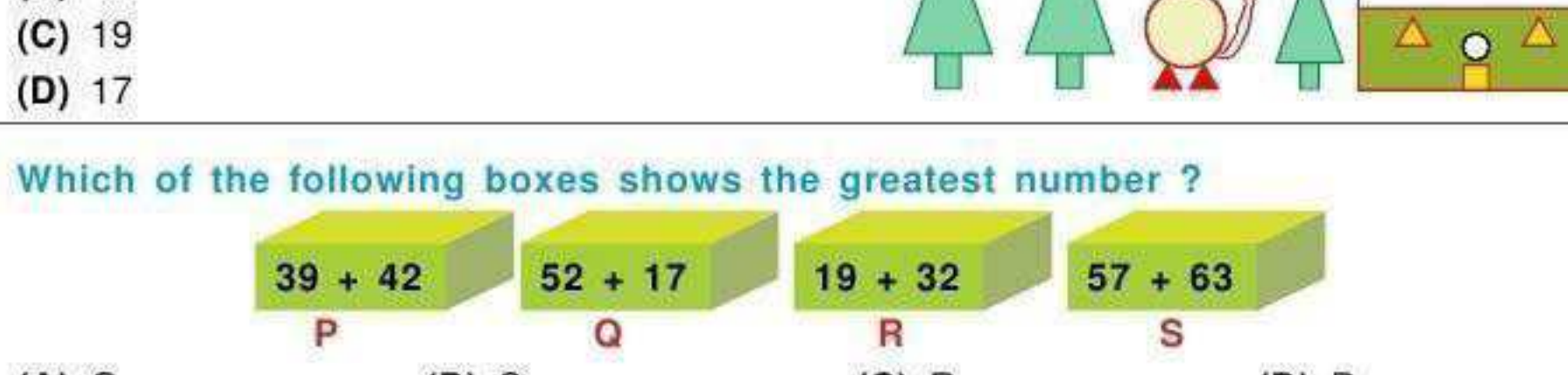
MENTAL ABILITY

1. If a rabbit jumps and gets every 3rd carrot, then the number of jumps rabbit will make to reach the last carrot is _____




- (A) 8 (B) 9 (C) 10 (D) 27

2. There are _____ more triangles than the circles in the given figure.



- (A) 24
(B) 15
(C) 19
(D) 17

3. Which of the following boxes shows the greatest number ?



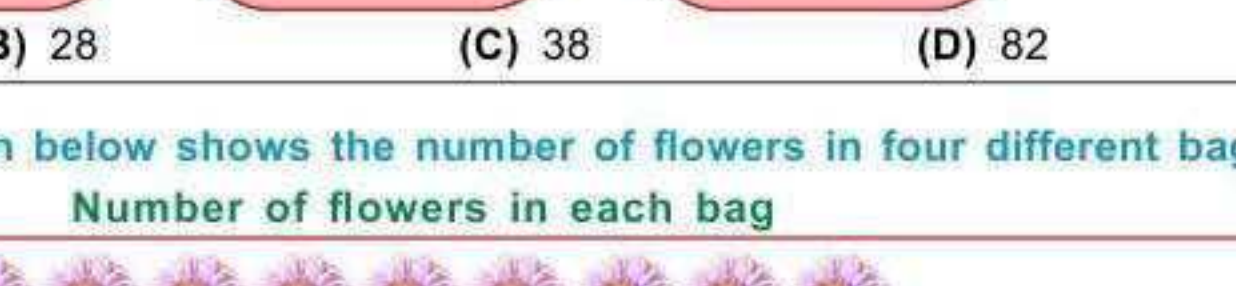
- (A) Q (B) S (C) R (D) P

4. _____ and _____ together costs ₹ 50. If _____ costs ₹ 17, then the cost of _____ is _____.




- (A) ₹ 27 (B) ₹ 23 (C) ₹ 33 (D) ₹ 43

5. Nail P is _____ cm longer than Nail Q.



- (A) 9
(B) 1
(C) 2
(D) 3

6. Which of the following figures comes in the place of question marks to complete the pattern given below ?



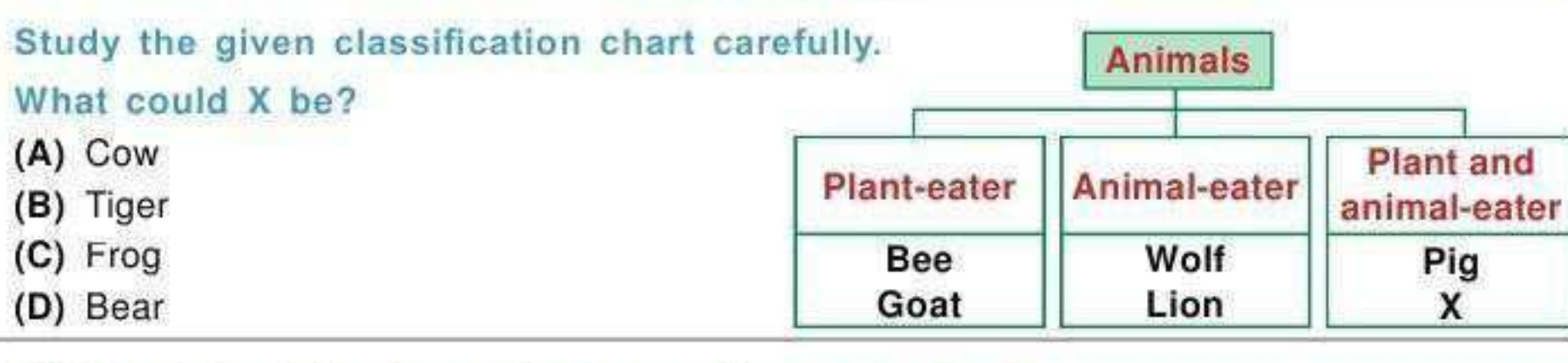
- (A) Green flower, red heart (B) Red heart, red heart (C) Green flower, green flower (D) Red heart, green flower

7. Fill the correct number in place of question mark.

5 Tens 3 Ones - 2 Tens 5 Ones = ?

- (A) 53 (B) 28 (C) 38 (D) 82

8. The picture graph given below shows the number of flowers in four different bags :



Which two bags has 27 flowers together?

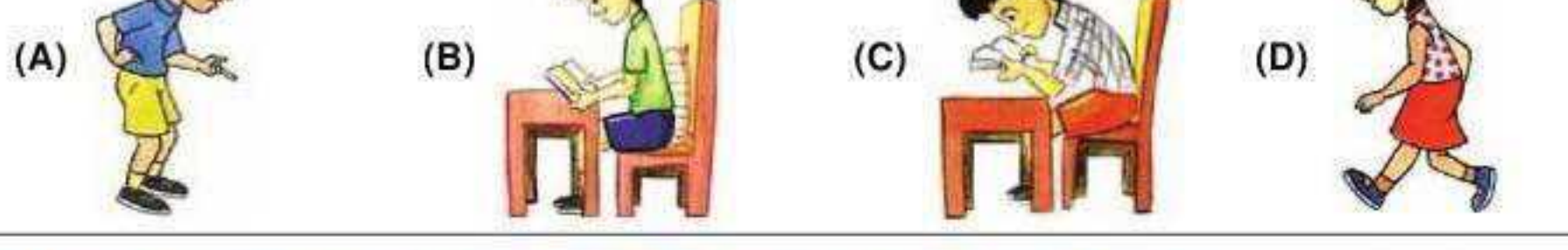
- (A) P and R (B) P and Q (C) R and S (D) P and S

9. Number of slanting lines in the given figure is _____.



- (A) 15
(B) 16
(C) 14
(D) 13

10. Which of the following clocks shows 15 minutes past 6 O' clock?

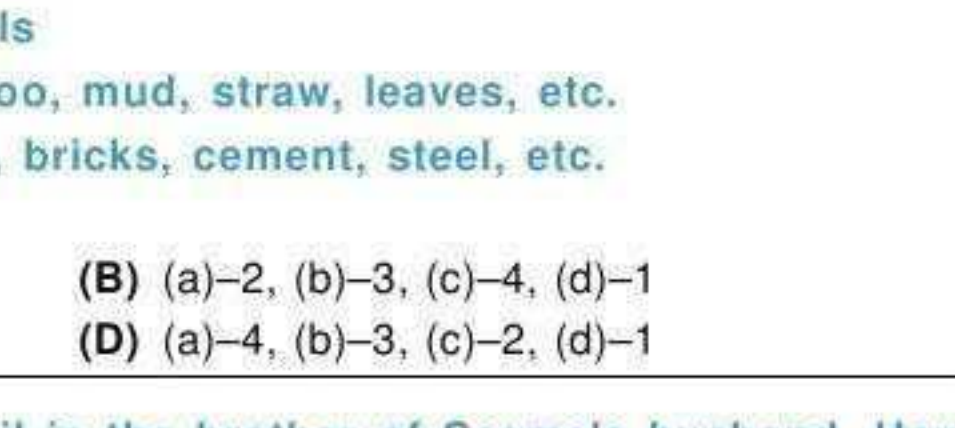


SCIENCE

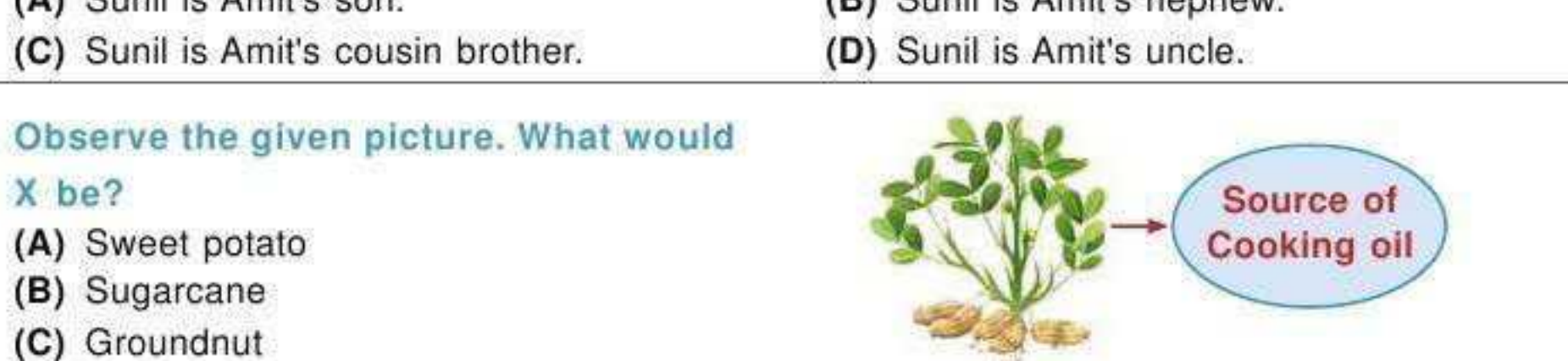
11. Study the given classification chart carefully.

What could X be?

- (A) Cow
(B) Tiger
(C) Frog
(D) Bear



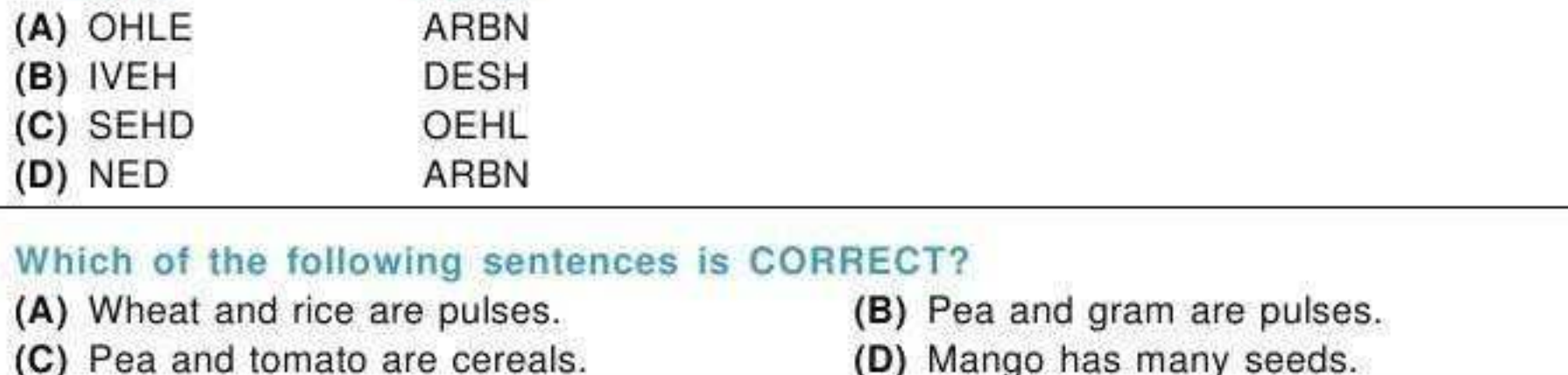
12. Which of the following animals provides us leather?



13. Which of the following shows the correct match of plant types along with their examples?

Tree	Shrub	Herb
(A) Banyan	Coriander	Hibiscus
(B) Rose	Hibiscus	Coriander
(C) Coconut	Rose	Marigold
(D) Coconut	Marigold	Rose

14. Which of the following body postures is correct?



15. Match Column-I with Column-II and select the correct option.

Column-I	Column-II
(a) Kutcha house	1. Made on wheels
(b) Pucca house	2. Made of bamboo, mud, straw, leaves, etc.
(c) Igloo	3. Made of wood, bricks, cement, steel, etc.
(d) Caravan	4. Made of snow

- (A) (a)-2, (b)-4, (c)-1, (d)-3 (B) (a)-2, (b)-3, (c)-4, (d)-1
(C) (a)-1, (b)-3, (c)-2, (d)-4 (D) (a)-4, (b)-3, (c)-2, (d)-1

16. Seema is daughter-in-law of Amit. Sunil is the brother of Seema's husband. How is Amit related to Sunil?

- (A) Sunil is Amit's son. (B) Sunil is Amit's nephew.
(C) Sunil is Amit's cousin brother. (D) Sunil is Amit's uncle.

17. Observe the given picture. What would X be?

- (A) Sweet potato
(B) Sugarcane
(C) Groundnut
(D) Aloe vera



18. The items shown in the picture are mainly used in which festival?

- (A) Holi
(B) Diwali
(C) Lohri
(D) Raksha Bandhan



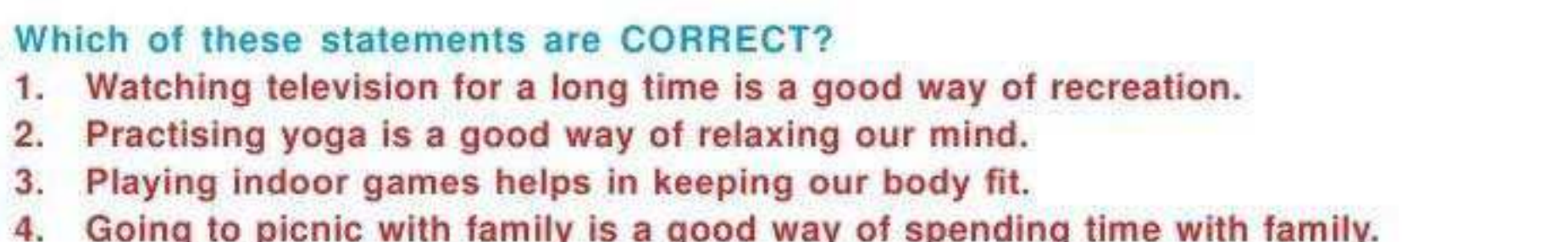
19. Which option when unscrambled will give the names of the houses of Bee and Cattle?

Bee	Cattle
(A) OHLE	ARBN
(B) IVEH	DESH
(C) SEHD	OEHL
(D) NED	ARBN

20. Which of the following sentences is CORRECT?

- (A) Wheat and rice are pulses. (B) Pea and gram are pulses.
(C) Pea and tomato are cereals. (D) Mango has many seeds.

21. Select the odd one out.



22. Which of the following is NOT a fruit?

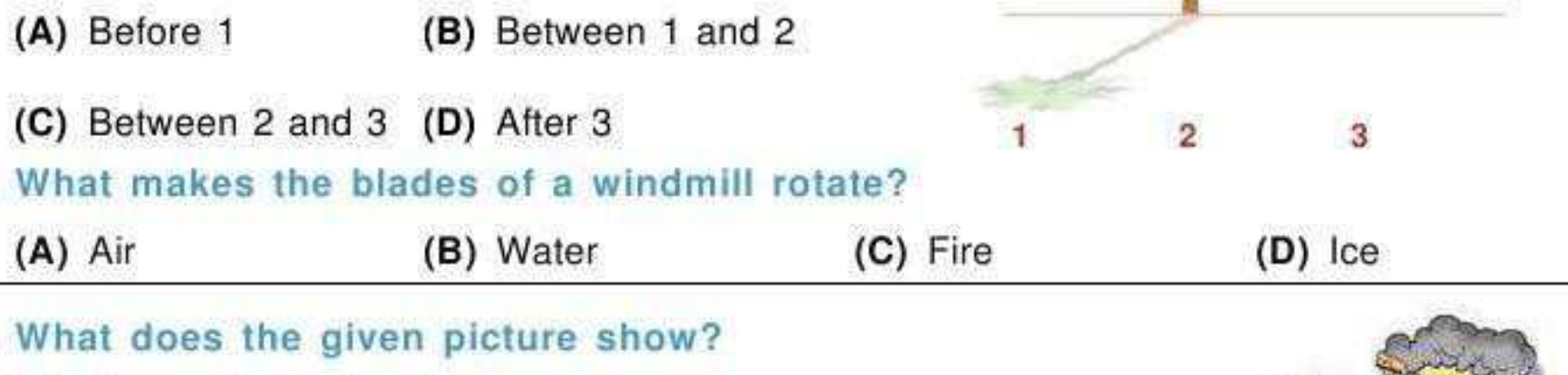


23. The given tools are used by a _____.

- (A) Potter
(B) Grocer
(C) Tailor
(D) Carpenter



24. Which animals are the tallest and largest animals in the world respectively?



- (A) 2 and 3 (B) 2 and 4 (C) 1 and 2 (D) 3 and 4

25. Which of the following statements are CORRECT?

1. Use your hanky when you sneeze.
2. Turn off the tap after washing your hands.
3. Throw wastes in the garden.
4. Always bite your nails.

- (A) 1 and 4 (B) 1 and 2 (C) 3 and 4 (D) 1, 2 and 3

26. Which of these is made of the material obtained from the animal shown?

- (A) Jute bags
(B) Woollen socks
(C) Cotton shirt
(D) Silk saree



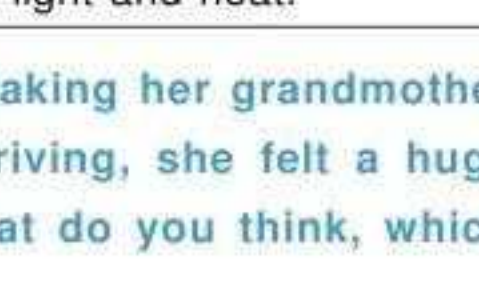
27. Which of these statements are CORRECT?

1. Watching television for a long time is a good way of recreation.
2. Practising yoga is a good way of relaxing our mind.
3. Playing indoor games helps in keeping our body fit.
4. Going to picnic with family is a good way of spending time with family.

- (A) 1 and 2 (B) 2 and 4 (C) 2, 3 and 4 (D) 3 and 4

28. Priya is blind-folded as shown in the picture. Which senses would help her to recognise things?

- (A) Hearing, Taste, Smell
(B) Hearing, Touch, Sight
(C) Hearing, Touch, Smell
(D) Hearing, Taste, Touch and Smell



29. There is a tree in Shuchi's backyard. She marked shadows of the tree at three different positions (1, 2 and 3) at different times as shown. When would most likely she have her lunch?

- (A) Before 1 (B) Between 1 and 2
(C) Between 2 and 3 (D) After 3



30. What makes the blades of a windmill rotate?

- (A) Air (B) Water (C) Fire (D) Ice

31. What does the given picture show?

- (A) The car is getting dirty.
(B) The air is getting dirty.
(C) The water is getting dirty.
(D) All of the above.

32. The food shown in the given picture fall under which food group?

- (A) Protective foods
(B) Body-building foods
(C) Energy-giving foods
(D) Roughage-giving foods

33. The given pictures show _____.

- (A) Summer season
(B) Winter season
(C) Autumn season
(D) Both (A) and (B)

34. What is INCORRECT about the Sun?

- (A) The Sun appears to rise from the west in the morning.
(B) The Sun makes the days warm and bright.
(C) The Sun is a star. (D) The Sun gives light and heat.

35. Anita's grandmother is suffering from back pain. Anita is taking her grandmother in her car, to hospital for a check up. Suddenly while driving, she felt a huge bounce which increased the pain of her grandmother. What do you think, which road sign she missed noticing?

