

## PRACTISE PAPER 8

### PAPER-I

#### Part-I (Physics)

#### Section-I

#### Straight Objective Type

##### Q1

According to Bernoulli's theorem  $P + \frac{1}{2}\rho v^2 + \rho gh = K$  (constant). The dimensions of  $K/P$  are same as that of which of the following?

- a. Thrust
- b. Pressure
- c. Angle
- d. Viscosity

##### Q2

The displacement  $x$  of a particle varies with time  $t$  as  $x = ae^{\alpha t} + be^{\beta t}$ , where  $a, b, \alpha$  and  $\beta$  are positive constants. The velocity of particle will

- a. Go on decreasing with time.
- b. Be independent of  $\alpha$  and  $\beta$
- c. Drop to zero where  $\alpha = \beta$
- d. Go on increasing with time.

##### Q3

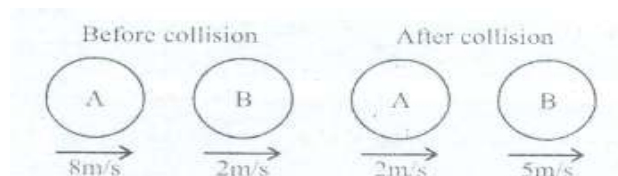
Two boys are standing at the ends  $A$  and  $B$  of a ground, where  $AB = a$ . The boy at  $B$  starts running in a direction perpendicular to  $AB$  with velocity  $v_1$ . The boy at  $A$  starts running simultaneously with velocity  $v$  and catches the other boy in a time  $t_1$  where  $t$  is

- a.  $a^2/\sqrt{v^2 + v_1^2}$
- b.  $a/\sqrt{v^2 - v_1^2}$
- c.  $a^2/(v + v_1)$
- d.  $a(v + v_1)$

##### Q4

The two diagrams show the situation before and after a collision between two spheres  $A$  and  $B$  of equal radii moving along the same straight line on a smooth horizontal surface. The coefficient of restitution  $e$  is:

- a.  $\frac{4}{3}$
- b.  $\frac{1}{2}$
- c.  $\frac{2}{3}$
- d.  $\frac{3}{4}$



**Q5**

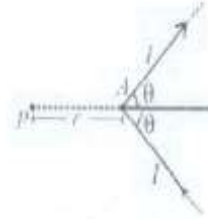
A vertical cylinder closed at both ends is fitted with a smooth piston dividing the volume into two parts each containing one mole of air. At the equilibrium temperature of 320 K, the upper end and lower parts are in the ratio 4 : 1. The ratio will become 3 : 1 at a temperature of :

- 450 K
- 328 K
- 480 K
- 670 K

**Q6**

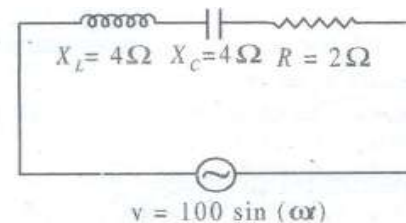
An infinite V-shaped wire carrying current  $I$  is shown in figure. Find the magnitude of magnetic field at point  $P$  due to the wire,  $AP = r$  if

- $\frac{\mu_0 I}{2\pi r} \tan\theta$
- $\frac{\mu_0 I}{\pi r} \tan\left(\frac{\theta}{2}\right)$
- $\frac{\mu_0 I}{2\pi r} \cot\left(\frac{\theta}{2}\right)$
- $\frac{\mu_0 I}{2\pi r} \sin\left(\frac{\theta}{2}\right)$

**Q7**

Which of the following statement is correct regarding the AC circuit shown in the figure ?

- The rms value of current through the circuit is  $15\sqrt{2}$  A
- The phase difference between source emf and current is  $\phi = \cos^{-1}\left(\frac{4}{3}\right)$
- Average power dissipated in the circuit is 500 W.
- None of the above

**Q8**

An inductor is placed in series with a resistor. An emf is applied to the combination. The rate at which power delivered by the battery is  $P_1$ . The rate at which power dissipated in the resistor is  $P_3$ . Rate at which energy stored in inductor is then which of the following statements is correct ?

- $P_1 = P_3 - P_2$
- $P_1 = P_3$
- $P_1 = P_2 + P_3$
- $P_1 < (P_2 + P_3)$

**Q9**

% kg of ice at  $-10^\circ\text{C}$  are added to 5 kg of water at  $10^\circ\text{C}$ . The temperature of resulting mixture is

- $0^\circ\text{C}$
- $-12^\circ\text{C}$
- $14^\circ\text{C}$
- $12^\circ\text{C}$

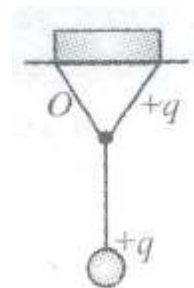
## Section-II

### Multiple Objective Type

#### Q10

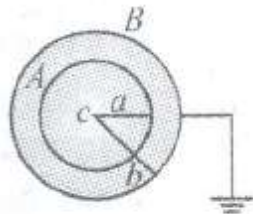
A simple pendulum of length  $l$  is suspended from point  $O$ . If a charge  $q$  is placed on the bob as well as on the point of suspension then:

- Time period of small oscillation of bob will be equal to  $2\pi \sqrt{\frac{l}{g}}$
- Time period of small oscillation of bob will be smaller than  $2\pi \sqrt{\frac{l}{g}}$
- During simple harmonic motion, the tension in the string at vertical condition will be greater than  $mg + qE$ , where  $E$  is the field at bob due charge at  $O$ .
- The acceleration of bob in vertical condition will be zero.



#### Q11

A conducting sphere  $A$  of radius with charge  $Q$  is placed concentrically inside a conducting shell  $B$  of radius  $b$  which is earthed.  $c$  is common centre of  $A$  and  $B$  :



- The field at a distance  $r$  from centre  $c$  is  $\frac{Q}{4\pi\epsilon_0 r^2}$  ( $a \leq r \leq b$ )
- The potential at a distance  $r$  from  $c$ , is  $\frac{Q}{4\pi\epsilon_0 r}$  ( $a \leq r \leq b$ )
- The potential difference between  $A$  and  $B$  is  $\frac{Q}{4\pi\epsilon_0} \left[ \frac{1}{a} - \frac{1}{b} \right]$
- The potential at a distance  $r$  from  $c$ , where ( $a \leq r \leq b$ ) is  $\frac{Q}{4\pi\epsilon_0} \left( \frac{1}{r} - \frac{1}{b} \right)$

#### Q12

In projectile motion, power of the gravitational force :

- Varies linearly with time.
- Is constant throughout.
- Is negative for the first half, positive for the second half.
- Is zero for the whole path.

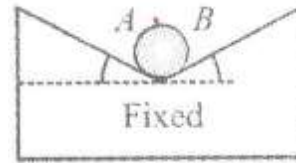
#### Q13

Two waves travelling in opposite directions produce standing wave. The individual wave functions are given by  $y_1 = 4 \sin(3x - 2t)$  cm and  $y_2 = \sin(3x + 2t)$  cm, where  $x$  and  $y$  are in cm. now, select the correct statements :

- Nodes are formed at  $x = \frac{\pi}{6}, \frac{\pi}{2}, \frac{5\pi}{6}, \frac{7\pi}{6} \dots$
- Antinodes are formed at  $x = 0, \frac{\pi}{3}, \frac{2\pi}{3}, \pi, \frac{4\pi}{3} \dots$
- Nodes are formed at  $x = 0, \frac{\pi}{3}, \frac{2\pi}{3}, \pi, \frac{4\pi}{3} \dots$
- Antinodes are formed at  $x = \frac{\pi}{6}, \frac{\pi}{2}, \frac{5\pi}{6}, \frac{7\pi}{6} \dots$

**Q14**

A circular cylinder of weight  $W$  and radius  $R$  rests in a V-shaped groove whose sides are inclined at angles  $\alpha$  and  $\beta$  to the horizontal. surfaces are smooth.  $N_A$  and  $N_B$  are the contact forces at point  $A$  and  $B$  respectively. Which of the following is correct?



All

a.  $\frac{W \sin \alpha}{\sin \alpha + \sin \beta} = N_A; \frac{W \sin \beta}{\sin \alpha + \sin \beta} = N_B$

b.  $\frac{W \sin \beta}{\sin(\alpha + \beta)} = N_A; \frac{W \sin \alpha}{\sin(\alpha + \beta)} = N_B$

c.  $W = N_A \sin \beta + N_B \sin \alpha$

d.  $N_A \cos \beta = N_B \cos \alpha$

**Q15**

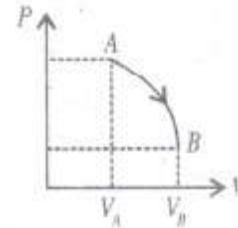
Which of the following is/are correct?

- The eQuation of continuity expresses the principle of conservation of mass in fluid mechanics.
- The Bernoulli's eQuation expresses the work-energy theorem in fluid mechanics.
- The Bernoulli's eQuation is valid for incompressible and non-viscous fluids, *i. e.*, for ideal fluids only.
- Two streamlines never cut each other in a laminar pipe flow.

**Q16**

One mole of an ideal mono-atomic gas is taken through process  $AB$  given by  $P = \alpha - \beta V^2$  (where  $\alpha$  and  $\beta$  are positive constants) on  $P - V$  diagram.

Which of the following is correct statement regarding the given process ?



a. Temperature is maximum at  $V = \sqrt{\frac{\alpha}{3\beta}}$

b. Temperature is minimum at  $V = \sqrt{\frac{2\alpha}{3\beta}}$

c. Rate of increase of temperature gas with volume is maximum at  $A$

d. Rate of increase of temperature of gas with volume is maximum at  $V = \sqrt{\frac{\alpha}{\beta}}$

**Q17**

A car runs around a curve of radius  $0.3 \text{ km}$  at a constant speed of  $60 \text{ ms}^{-1}$ . The car covers a curve of  $60^\circ$  arc. Which of the following statements is/are true ?

- Change in velocity of car is  $60 \text{ ms}^{-1}$
- Instantaneous acceleration of the car is  $12 \text{ m/s}^2$
- Average acceleration of the car is  $12 \text{ m/s}^2$
- Instantaneous and average acceleration are same in this case.

### Section-III

#### Assertion-Reason Type

##### Q18

##### **Statement-1:**

The relative velocity of two photons travelling in opposite direction is the velocity of light. because

##### **Statement-2:**

The rest mass of photon is zero.

- Statement-1 is True, Statement-2 is True; Statement-2 is a correct explanation for Statement-1
- Statement-1 is True, Statement-2 is True; Statement-2 is NOT a correct explanation for Statement-1
- Statement-1 is True, Statement-2 is False
- Statement-1 is False, Statement-2 is True

##### Q19

##### **Statement-1:**

The discharge tube appears black, when evacuated to very high low pressure. because

##### **Statement-2:**

Discharge stops passing through the discharge tube

- Statement-1 is True, Statement-2 is True; Statement-2 is a correct explanation for Statement-1
- Statement-1 is True, Statement-2 is True; Statement-2 is NOT a correct explanation for Statement-1
- Statement-1 is True, Statement-2 is False
- Statement-1 is False, Statement-2 is True

##### Q20

##### **Statement-1:**

If we consider electrons and photons of the same wave length, they will have the same momentum. because

##### **Statement-2:**

Electrons and photons have same energy.

- Statement-1 is True, Statement-2 is True; Statement-2 is a correct explanation for Statement-1
- Statement-1 is True, Statement-2 is True; Statement-2 is NOT a correct explanation for Statement-1
- Statement-1 is True, Statement-2 is False
- Statement-1 is False, Statement-2 is True

##### Q21

##### **Statement-1:**

Cathode rays are electromagnetic waves. because

##### **Statement-2:**

Cathode rays cast the shadow of the opaque object placed in their path.

- Statement-1 is True, Statement-2 is True; Statement-2 is a correct explanation for Statement-1
- Statement-1 is True, Statement-2 is True; Statement-2 is NOT a correct explanation for Statement-1
- Statement-1 is True, Statement-2 is False
- Statement-1 is False, Statement-2 is True

### Section-IV

#### Linked Comprehension Type

##### **P<sub>22-24</sub> : Paragraph for Question Nos. 22 to 24**

A block of mass 2 kg is placed over a 4 kg. If  $\mu = 0.1$  is the coefficient of friction between both the blocks and the system is placed on smooth horizontal floor.

**Q22**

If 9 N is applied horizontally on 4 kg block, the frictional force between the two blocks is :

- a. 16 N
- b. 8 N
- c. 4 N
- d. 2 N

**Q23**

The maximum horizontal force reQired so that there is no relative motion between the two blocks :

- a. 42 N
- b. 10 N
- c. 6 N
- d. 4 N

**Q24**

The maximum horizontal force applied on 2 kg block so that there is no relative motion between the two blocks is :

- a. 16 N
- b. 12 N
- c. 3 N
- d. 2N

**P<sub>25-27</sub> : Paragraph for Question Nos. 25 to 27**

A particle of mass 1 kg is projected at an angel  $\theta = \pi/4$  from horizontal with a muzzle velocity of 20 m/s.

A long slender rod of mass 5 kg and length 30 m is suspended vertically from a point at the same horizontal as that of projection and at a distance of 60 m from the projection point. The rod can rotate freely. If collision occurs, it is perfectly inelastic. ( $g = 10\text{m/s}^2$ )

**Q25**

The particle will :

- a. Not hit the rod at all
- b. Hit the rod at A
- c. Hit the rod between O and A, not at its mid point.
- d. Hit the rod at its mid point.

**Q26**

Angular velocity of the rod after collision is :

- a.  $\frac{1}{4\sqrt{2}}$  rad/sec
- b.  $\frac{14}{\sqrt{2}}$  rad/sec
- c.  $14\sqrt{2}$  rad/sec
- d. Zero

**Q27**

If the rod tilts to an angle after collision, then :

- a.  $\theta = 0^\circ$
- b.  $\theta = \cos^{-1} (40/41)$
- c.  $\theta = \cos^{-1} \left( \frac{27}{28} \right)$
- d.  $\theta = \left( \frac{3\pi}{2} \right)$

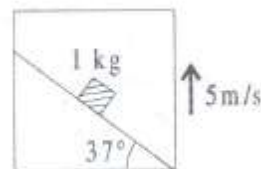
## Section-V

### Subjective Type

0	0	0	0
1	1	1	1
2	2	2	2
3	3	3	3
4	4	4	4
5	5	5	5
6	6	6	6
7	7	7	7
8	8	8	8
9	9	9	9

#### Q28

A block of mass 1 kg is kept on smooth inclined surface of an elevator moving up with a constant velocity of 5 m/s. calculate the work done by normal reaction (as seen from the ground) on the block in 2 seconds.



#### Q29

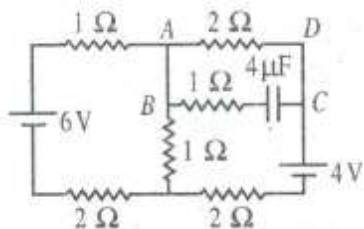
If 2 seconds be the time in which a projectile reaches a point P in its path and 8 seconds is the time from P till it reaches the horizontal plane through the point of projection. Find the height of P above the horizontal plane (Take  $g = 10 \text{ m/s}^2$ )

#### Q30

When an object is placed at a distance of 25 cm from a concave mirror, the magnification is  $m_2$ . If  $\frac{m_1}{m_2} = 2.5$ , then find focal length of the mirror. (Assume image is real in both cases  $m_1, m_2$  are numerical values)

#### Q31

Find the charge (in microcoulomb) on capacitor in steady state.



#### Q32

##### Column I

- a. Neutron was discovered by
- b. Radioactivity was discovered by
- c. Mass energy equation was given by
- d. First atomic reactor was designed by

##### Column II

- p. Fermi
- q. Einstein
- r. Chadwick
- s. Henry Becquerel

**Q33****Column I**

- a. Rectifier
- b. Amplifier
- c. Constant voltage power supply
- d. In switching the light on and off.

**Column II**

- p. Transistor
- Q. Zener diode
- r. Photo diode
- s. p – n junction diode

**Q34****Column I**

- a. Mass
- b. Force
- c. Linear momentum
- d. Displacement

**Column II**

- p. angular momentum
- Q. Moment of Inertia
- r. torQue
- s. Angle

**Part-II (Chemistry)****Section-I****Straight Objective Type****Q35**

0.1 millimole of  $\text{CdSO}_4$  are present in 10 ml, and 0.08  $\text{NH}_4\text{Cl}$  is also present.  $\text{H}_2\text{S}$  is passed to precipitate all the  $\text{Cd}^{2+}$  ions. The pH of solution after filtering off the ppt and making solution upto 100 ml by adding water is

- a. 2
- b. 5
- c. 4
- d. 6

**Q36**

Alkali metal hydride reacts with water to form

- a. acidic solution and  $\text{H}_2$  gas
- b. Basic solution and hydrogen gas
- c. Neutral solution and  $\text{H}_2$  gas
- d. Hydride ion only

**Q37**

A 3p orbital has

- a. Two radial nodes
- b. Two angular nodes
- c. One radial and one angular node
- d. One radial and two angular nodes.

**Q38**

Compound  $[\text{Cr}(\text{NH}_3)_5\text{NCS}][\text{ZnCl}_4]$  will be

- a. Colourless
- b. Diamagnetic
- c. Green coloured and shows coordination isomerism
- d. Green coloured and diamagnetic.



**Q39**

The e.m.f of cell  $Zn(s)|Zn^{2+}(0.01M)||Fe^{2+}(0.001M)|Fe(s)$  at 298 K is 0.2905 V. The value of equilibrium constant is

- a.  $e^{\frac{0.32}{0.0295}}$   
 b.  $10^{\frac{0.32}{0.0295}}$   
 c.  $10^{\frac{0.28}{0.0295}}$   
 d.  $10^{\frac{0.32}{0.0295}}$

**Q40**

Nitrogen dioxide cannot be obtained from

- a.  $Pb(NO_3)_2$   
 b.  $Hg(NO_3)_2$   
 c.  $NaNO_3$   
 d.  $AgNO_3$

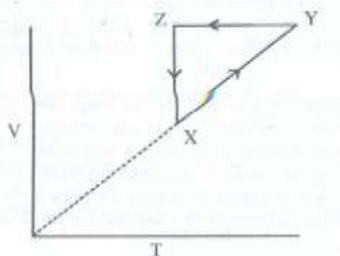
**Q41**

the solubility product of lead bromide is  $8 \times 10^{-5}$ . If the salt is 80% dissociated in saturated solution, then the solubility of salt is

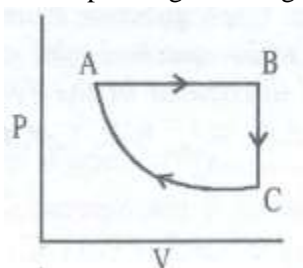
- a.  $4 \times 10^{-5}$   
 b.  $3.4 \times 10^{-2}$   
 c.  $3.9 \times 10^{-2}$   
 d.  $4 \times 10^{-6}$

**Q42**

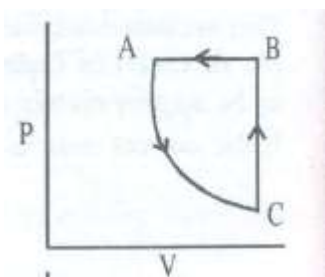
For a cyclic process XYZX as shown in the graph of V vs T



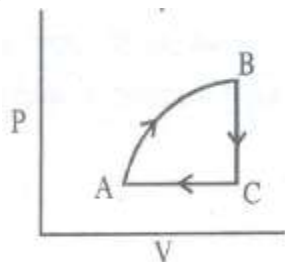
The corresponding P-V diagram would be :



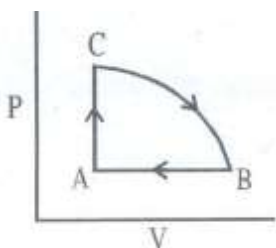
(a)



(b)



(c)



(d)

**Q43**

The pressure exerted by 12 g of an ideal gas at temperature  $t^\circ\text{C}$  in a vessel of volume  $V$  which is one atmosphere. When the temperature is increased by  $10^\circ\text{C}$  at the same volume the pressure increases by 10%

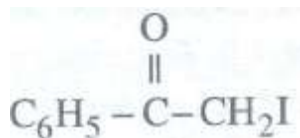
The temperature is.....[The molecular weight of gas =  $120\text{ g mol}^{-1}$ ]

- a. 200 K
- b. 100 K
- c.  $200^\circ\text{C}$
- d.  $100^\circ\text{C}$

**Section-II**

**Multiple Objective Type**

**Q44**



The compound will give yellow ppt. with which of the following ?

- a.  $\text{Ag}_2\text{O}$  (moist)
- b.  $\text{I}_2/\text{NaOH}$
- c. 2, 4 - DNP (2, 4-dinitrophenylhydrazine)
- d.  $\text{CuSO}_4 + \text{NaOH}$

**Q45**

Which of the following act as Lewis bases ?

- a. Alcohol
- b. Ethers
- c.  $NH_4^+$
- d.  $BF_3$

**Q46**

Bohr's theory does not explain the spectrum of which of the following ?

- a.  $He^+$
- b.  $Li^{2+}$
- c.  $He^{2+}$
- d. He

**Q47**

Which of the following will produce  $C_6H_5-OCH_2C_6H_5$  ?

- a.  $C_6H_5ONa + C_6H_5CH_2Cl \rightarrow$
- b.  $C_6H_5Cl + C_6H_5CH_2ONa \rightarrow$
- c.  $C_6H_5ONa + C_6H_5CH_2I \rightarrow$
- d. All of these

**Q48**

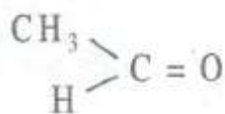
Which of the following are correct mathematical relations for ideal gas?

- a.  $\left(\frac{\partial U}{\partial V}\right)_r = 0$
- b.  $\left(\frac{\partial H}{\partial P}\right)_r = 0$
- c.  $C_p - C_v = R$
- d.  $\left(\frac{\partial C_v}{\partial V}\right)_r = 0$

**Q49**

When a non-volatile solute is added to pure solvent

- a. Vapour pressure of solution decreases.
- b. Boiling point of solution increases.
- c. Solution does not affect osmotic pressure of solution.
- d. The escaping tendency of solvent molecules into vapours from solution decrease.

**Q50**

When \_\_\_\_\_ is reacted with  $NH_2OH$ , then the final product formed is

- (a)  $\begin{array}{l} CH_3 \\ \diagdown \\ C=N-OH \\ \diagup \\ H \end{array}$       (b)  $\begin{array}{l} CH_3 \\ \diagdown \\ C=N-OH \\ \diagup \\ H \end{array}$
- (c)  $\begin{array}{l} CH_3 \\ \diagdown \\ C=N-H \\ \diagup \\ H \end{array}$       (d)  $\begin{array}{l} CH_3 \\ \diagdown \\ C \begin{array}{l} \diagup NH_2OH \\ \diagdown OH \end{array} \\ \diagup \\ H \end{array}$

51. the cell reactions taking place are  $AgCl(s) + e^- \rightarrow Ag(s) + Cl^-(aq)$ ;  $E^\circ = +0.22V$   $Ag^+e^- \rightarrow Ag(s)$ ;  $E^\circ = 0.80V$

- The  $E_{cell}$  value is 1.08V
- The  $E_{cell}$  value is  $-0.58V$
- The  $E_{sp}$  value of  $AgCl = 1.6 \times 10^{-10}$
- The  $K_{sp}$  value of  $AgCl = 1.6 \times 10^{-5}$

### Section-III

#### Assertion-Reason Type

##### Q52

###### Statement-1:

In a balloon the pressure and volume both are directly proportional. because

###### Statement-2:

Boyle's law is not obeyed in a balloon.

- Statement-1 is True, Statement-2 is True; Statement-2 is a correct explanation for Statement-1
- Statement-1 is True, Statement-2 is True; Statement-2 is not a correct explanation for Statement-1
- Statement-1 is True, Statement-2 is False
- Statement-1 is False, Statement-2 is True

##### Q53

###### Statement-1:

Phenol gives effervescence when sodium carbonate is added. because

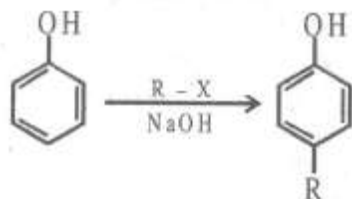
###### Statement-2:

$H_2CO_3$  is more acidic than phenol.

- Statement-1 is True, Statement-2 is True; Statement-2 is a correct explanation for Statement-1
- Statement-1 is True, Statement-2 is True; Statement-2 is not a correct explanation for Statement-1
- Statement-1 is True, Statement-2 is False
- Statement-1 is False, Statement-2 is True

##### Q54

###### Statement-1:



because

###### Statement-2:

The benzene ring in phenol is more electron rich than simple benzene.

- Statement-1 is True, Statement-2 is True; Statement-2 is a correct explanation for Statement-1
- Statement-1 is True, Statement-2 is True; Statement-2 is not a correct explanation for Statement-1
- Statement-1 is True, Statement-2 is False
- Statement-1 is False, Statement-2 is True

**Q55****Statement-1:**

Sodium carbonate does not decompose on heating to give  $\text{CO}_2$  because

**Statement-2:**

Sodium carbonate is highly ionic in nature.

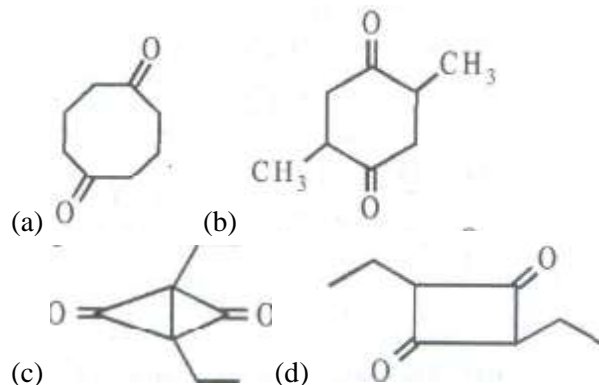
- Statement-1 is True, Statement-2 is True; Statement-2 is a correct explanation for Statement-1
- Statement-1 is True, Statement-2 is True; Statement-2 is not a correct explanation for Statement-1
- Statement-1 is True, Statement-2 is False
- Statement-1 is False, Statement-2 is True

**Section-IV****Linked Comprehension Type****C<sub>56-58</sub>: Paragraph for Question Nos. 56 to 58**

One mole of the compound (X)  $\text{C}_8\text{H}_{12}$  does not show stereoisomerism, reacts with only one mole of  $\text{H}_2$  on hydrogenation over Pd. 'X' undergoes ozonolysis to give a symmetrical diketones (Y) of formula  $\text{C}_8\text{H}_{16}\text{O}_2$ . Reduction of compound Y with  $\text{Zn} - \text{Hg}/\text{HCl}$  gives  $\text{C}_8\text{H}_{16}$  which is a symmetrical diketone is

**Q56**

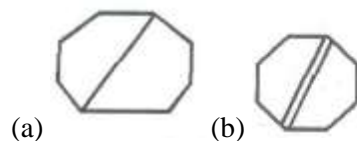
The compound (Y) which is a symmetrical diketone is



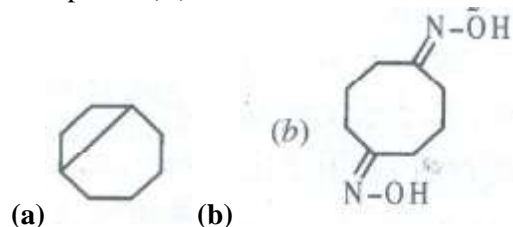
Since formula of compound  $\text{C}_8\text{H}_{12}\text{O}_2$  is and is symmetrical diketone.

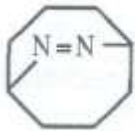
**Q57**

compound (X) must be

**Q58**

Compound (Y) on treatment with  $\text{NH}_2\text{OH}$  would give





(c)



(d)

59-61: Paragraph for Question Nos. 59 to 61

The reduction potential of few transition metals are given below :

Reaction at electrode	$E^\circ$ (volt)
$\text{Hg}^{2+} + 2e^- \rightarrow \text{Hg}$	+0.79V
$\text{Cu}^{2+} + 2e^- \rightarrow \text{Cu}$	+0.34V
$\text{Ni}^{2+} + 2e^- \rightarrow \text{Ni}$	-0.25V
$\text{Zn}^{2+} + 2e^- \rightarrow \text{Zn}$	-0.76V
$\text{Fe}^{2+} + 2e^- \rightarrow \text{Fe}$	-0.44V
$\text{Sc}^{3+} + 3e^- \rightarrow \text{Sc}$	-2.08V
$\text{La}^{3+} + 3e^- \rightarrow \text{La}$	-2.37V
$\text{Mn}^{2+} + 2e^- \rightarrow \text{Mn}$	-1.05V

**Q59**

Which is best reducing agent among the above metals ?

- La
- Sc
- Zn
- Ni

**Q60**

Which of these is best oxidising agent ?

- $\text{Hg}^{2+}$
- $\text{Cu}^{2+}$
- $\text{Ni}^{2+}$
- $\text{Zn}^{2+}$

**Q61**

Which of the following cannot displace hydrogen from dil acid ?

- Hg
- Ni
- Zn
- Sc

## Section-V

### Subjective Type

0	0	0	0
1	1	1	1
2	2	2	2
3	3	3	3
4	4	4	4
5	5	5	5
6	6	6	6
7	7	7	7
8	8	8	8
9	9	9	9

#### Q62

An excess of liquid mercury is added to an acidified solution  $10^{-4}$  M  $\text{Fe}^{3+}$ . It is found that 10% of  $\text{Fe}^{3+}$  ions remains at equilibrium at  $25^\circ\text{C}$ . What is the  $E_{\text{Hg}_2^{2+}/\text{Hg}}^\circ$  Assuming that the reaction taking place is mainly  $2\text{Hg} + 2\text{Fe}^{3+} \rightarrow \text{Hg}_2^{2+} + 2\text{Fe}^{2+}$  Given  $E_{\text{Fe}^{3+}/\text{Fe}^{2+}}^\circ = 0.77\text{V}$

#### Q63

A mixture of ethane ( $\text{C}_2\text{H}_6$ ) and ethane ( $\text{C}_2\text{H}_4$ ) occupies 40 litres at 1.00 atm at 400 K. The mixture reacts completely with 130 g of  $\text{O}_2$  to produce  $\text{CO}_2$  and  $\text{H}_2\text{O}$ . Assuming ideal gas behavior, calculate the mole fraction of  $\text{C}_2\text{H}_4$  in the mixture.

#### Q64

What is the mole fraction of  $\text{H}_2$  present at equilibrium if pure ethane is passed over Pd at 900 K and 1.0 atm such that dehydrogenation takes place, to ethene ?

$\Delta G$  for process =  $22.38 \text{ kJ mol}^{-1}$  at 900 K.

#### Q65

One litre of oxygen diffuses through a porous plug in 150 seconds. Under the same condition, one litre of a mixture of  $\text{O}_2$  and ethane containing 30% by volume of oxygen diffuses in 160 seconds. Calculate the density of ethane. The density of oxygen is  $1.42 \text{ g L}^{-1}$ .

## Section-VI

### Matrix-Match Type

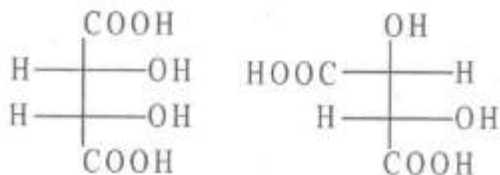
#### Q66

##### Column I

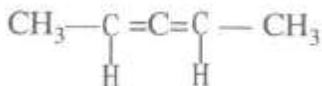
- $\text{M} + 2\text{H}_2\text{O} \rightarrow \text{M}(\text{OH})_2 + \text{H}_2$
- $\text{M} + 2\text{HCl} \rightarrow \text{MCl}_2 + \text{H}_2$
- $\text{M} + 2\text{NH}_3 \rightarrow \text{M}(\text{NH}_2)_2 + \text{H}_2$
- $2\text{M} + \text{O}_2 \rightarrow 2\text{MO}$

##### Column II

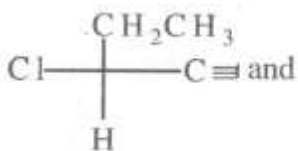
- All metals of group-II form metal oxide but Ba also forms peroxide. This ability of oxide increases down the group.
- All metals dissolve in  $\text{NH}_3$  to give deep blue black solution from which ammoniates  $[\text{M}(\text{NH}_3)_6]^{2+}$  can be recovered.
- the reactivity of metals with this reagent increases down the group.
- all metals react with dil. Acids liberating  $\text{H}_2$  but with  $\text{HNO}_3$ , Be becomes passive due to the formation of passive layer.

**Q67****Column I**

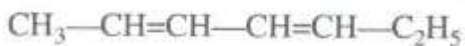
a.



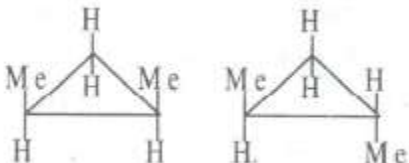
b.



c.



d.

**Column II**

p. S-isomers, 4 isomers

q. Geometrical isomers

r. Optical isomerism

s. Identical

**Q68****Column I**

a. Saponification

b. Glucose

c. Hofmann's method

d. Quarternary ammonium salt of long chain tertiary amine

**Column II**

p. cationic detergent

q. Test for 1°, 2°, 3° amines

r. Osazone

d. Glycerol

**PART-III (MATHEMATICS)****Section-I****Straight Objective Type****Q69**The equation  $ax^2 = \log x$ , has one solution if ( $x > 0$ ,  $a$  is a real number)

a.  $a < 0$  or  $a = \frac{1}{2e}$

b.  $a > 0$

c.  $a = \frac{1}{e}$

d.  $a = e/2$



**Q70**

Let  $AB$  be any chord of the circle  $x^2 + y^2 - 4x - 4y + 4 = 0$ , which subtends an angle of  $90^\circ$  at the point  $(2, 3)$ , then the locus of the mid-point of  $AB$  is circle whose centre is

- a.  $(1, 5)$
- b.  $(1, 5/2)$
- c.  $(1, 3/2)$
- d.  $(2, 5/2)$

**Q71**

Six persons A, B, C, D, E and F are to be seated at a circular table. The number of ways in which A always has either B or C on her right and B always has either C or D on his right must be

- a. 12
- c. 16
- c. 18
- d. None of these

**Q72**

The remainder when  $10^{101}$  is divided by 101 is

- a. 4
- b. 36
- c. 64
- d. 84

**Q73**

Given that  $\log_p x = \alpha$  and  $\log_q x = \beta$ , the value of  $\log_{\frac{p}{q}} x$  equals

- a.  $\frac{\alpha\beta}{\beta-\alpha}$
- b.  $\frac{\alpha-\beta}{\alpha\beta}$
- c.  $\frac{\alpha\beta}{\alpha-\beta}$
- d.  $\frac{\beta-\alpha}{\alpha\beta}$

**Q74**

a stick of length 20 units is to be divided into  $n$  parts so that the product of the lengths of the parts is greater than unity. The maximum possible value of  $n$  is

- a. 18
- b. 21
- c. 19
- d. 20

**Q75**

A rectangle  $ABCD$  is inscribed in a circle. Let  $PQ$  be the diameter of the circle parallel to the side  $AB$ . If  $\angle BPC=30^\circ$ , then the ratio of area of the rectangle to the area of the circle is

- a.  $\frac{\sqrt{3}}{2\pi}$
- b.  $\frac{\sqrt{3}}{9\pi}$
- c.  $\frac{3}{\pi}$
- d.  $\frac{\sqrt{3}}{\pi}$

**Q76**

Consider continuous function  $f$  on the interval  $[0, 1]$ , which satisfies the following two conditions :

- (i)  $f(x) \leq \sqrt{5}$  for all  $x \in [0,1]$
- (ii)  $f(x) \leq \frac{2}{x}$  for all  $x \in [\frac{1}{2}, 1]$

Then, the smallest real number  $\alpha$  such that the inequality  $\int_0^1 f(x) \leq \alpha$  holds for any such  $f$  is

- a.  $\frac{\sqrt{5}}{2} + 2 \log 2$
- b.  $2 + \log \frac{\sqrt{5}}{2}$
- c.  $2 + 2 \log \frac{\sqrt{5}}{2}$
- d.  $\sqrt{5}$

**Q77**

If  $z$  is a complex number satisfying  $|z|^2 + 2(z + \bar{z}) + 3i(z - \bar{z}) + 4 = 0$ , then complex number  $z + 3 + 2i$  will lie on

- a. circle with centre  $1 - 5i$  radius 4
- b. circle with centre  $1 + 5i$  radius 4
- c. circle with centre  $1 + 5i$  radius 3
- d. circle with centre  $1 - 5i$  radius 3

**Section-II****Multiple Objective Type****Q78**

Given  $(1 + \cos \alpha)(1 + \cos \beta)(1 + \cos \gamma) = (1 - \cos \alpha)(1 - \cos \beta)(1 - \cos \gamma)$  then both LHS or RHS may be equal to

- a.  $\sin \alpha \sin \beta \sin \gamma$
- b.  $\cos \alpha \cos \beta \cos \gamma$
- c.  $-\sin \alpha \sin \beta \sin \gamma$
- d.  $-\cos \alpha \cos \beta \cos \gamma$

**Q79**

If  $n$  is a positive integer and  $a > 1$ , then

- a.  $a^n - 1 \geq n \left( a^{\frac{n+1}{2}} - a^{\frac{n-1}{2}} \right)$
- b.  $\frac{a^n - 1}{a - 1} \geq n \cdot a^{\frac{n-1}{2}}$

c.  $\frac{a^n - 1}{a - 1} < na^n$

d.  $a^n - 1 < n \left( a^{\frac{n+1}{2}} - a^{\frac{n-1}{2}} \right)$

**Part-II (Mathematics)**

**Section-II**

**Q80**

If  $\alpha > -1, \beta > -1$  and  $I(\alpha, \beta) = \int_0^1 \frac{x^\beta - x^\alpha}{\log x} dx$  then

a.  $I(\alpha, \beta) = \log_e \frac{1+\beta}{1+\alpha}$

b.  $I(\alpha, \beta) = \log_e \frac{1+\alpha}{1+\beta}$

c.  $I(\alpha, \beta) = I(\beta, \alpha)$

d.  $I(\alpha, \beta) = -I(\beta, \alpha)$

**Q81**

Let  $f_n(x) = \frac{1}{n}(\sin^n x + \cos^n x)$ , where  $n$  is an arbitrary positive integer then

a.  $f_n(x)$  is a periodic function with least positive period for all  $n$ .

b.  $f_n(x)$  is a periodic function with least positive period for all  $n > 2$ .

c.  $f_4(x) - f_6(x) = 1/12$

d.  $f_4(x) - f_6(x) = 1/24$

**Q82**

$$I = \int_0^\infty \frac{\sin^4 x}{2^x} dx, J = \int_0^\infty \frac{\sin x}{x} dx$$

a.  $I = 2J$

b.  $I = J^4$

c.  $I = J/2$

d.  $1 > 0$

**Q84**

The cubic equation  $(a + b + x)^3 - 4(a^3 + b^3 + x^3) - 12abx = 0$

- a. has two roots whose sum is 1
- b. has two roots whose sum is zero
- c. has one root  $a + b$
- d. has one roots  $a + b + ab$

**Q85**

$P(1, \sqrt{3})$  and  $Q(\sqrt{3}, 1)$  be two points on the circle  $x^2 + y^2 = 4$ . Tangent and normal are drawn at  $P$  and  $Q$ , let  $\Delta_1$  be the area of triangle formed by tangent, normal drawn at  $P$  and with  $x$ -axis. Similarly  $\Delta_2$  be the area of triangle formed by  $x$ -axis and tangent, normal drawn at  $Q$  then

- a.  $\Delta_1 = 4\sqrt{3}$
- b.  $\Delta_1 = 2\sqrt{3}$
- c.  $\Delta_2 = \frac{2}{\sqrt{3}}$
- d.  $\Delta_2 = \frac{2}{\sqrt{3}}$

**Section-III****Assertion-Reason Type****Q86****Statement-1:**

The function  $\int_0^1 \frac{dz}{\sqrt{x^2+z^2}}$  is not defined at  $x = 0$ . because

**Statement-2:**

$$\int \frac{dz}{\sqrt{x^2+z^2}} = \log(x + \sqrt{x^2 + z^2}) + c$$

- a. Statement-1 is True, Statement-2 is True; Statement-2 is a correct explanation for Statement-1
- b. Statement-1 is True, Statement-2 is True; Statement-2 is not a correct explanation for Statement-1
- c. Statement-1 is True, Statement-2 is False
- d. Statement-1 is False, Statement-2 is True

### Q87

#### **Statement-1:**

If  $a + b + c = 0$  then  $a^6 + b^6 + c^6 = 3a^2b^2c^2 - 2(ab + bc + ac)^3$  because

#### **Statement-2:**

$a^6 + b^6 + c^6$  Is identically eQual to  $3a^2b^2c^2 - 2(ab + bc + ac)^3$

- Statement-1 is True, Statement-2 is True; Statement-2 is a correct explanation for Statement-1
- Statement-1 is True, Statement-2 is True; Statement-2 is not a correct explanation for Statement-1
- Statement-1 is True, Statement-2 is False
- Statement-1 is False, Statement-2 is True

### Q88

#### **Statement-1:**

If  $e = 1 + \frac{1}{1!} + \frac{1}{2!} + \frac{1}{3!} + \frac{1}{4!} + \dots \infty$   $S_n = 1 + \frac{1}{1!} + \frac{1}{2!} + \frac{1}{3!} + \dots + \frac{1}{(n+1)!}$ , then  $0 < e - S_n < 1$

because

#### **Statement-2:**

$e$  is irrational.

- Statement-1 is True, Statement-2 is True; Statement-2 is a correct explanation for Statement-1
- Statement-1 is True, Statement-2 is True; Statement-2 is not a correct explanation for Statement-1
- Statement-1 is True, Statement-2 is False
- Statement-1 is False, Statement-2 is True

### Q89

#### **Statement-1:**

If  $U_1 = u_2 = 1$  and  $u_n = u_{n-1} + u_{n-2}$  for  $n > 2$  then  $u_{2n+2} = u_1 + u_3 + u_5 + \dots + u_{2n+1}$

because

#### **Statement-2:**

Sum of first  $n + 1$  odd numbers is a perfect sQuare.

- Statement-1 is True, Statement-2 is True; Statement-2 is a correct explanation for Statement-1
- Statement-1 is True, Statement-2 is True; Statement-2 is not a correct explanation for Statement-1
- Statement-1 is True, Statement-2 is False
- Statement-1 is False, Statement-2 is True

## Section-IV

### Linked Comprehension Type

#### M<sub>90-92</sub> : Paragraph for Question Nos. 90 to 92

Consider the passion integral  $\int_0^{\infty} e^{-z^2} dz$  whose value is  $\frac{\sqrt{\pi}}{2}$ . Answer the following Question :

#### Q90

$\frac{1}{\sqrt{x}}$  must be eQual to

a.  $\frac{2}{\sqrt{\pi}} \int_0^{\infty} e^{-2z^2} dz$

b.  $\frac{2}{\sqrt{\pi}} \int_0^{\infty} e^{-2z^{2x}} dz$

c.  $\frac{1}{\sqrt{\pi}} \int_0^{\infty} e^{-2z^{2x}} dz$

d. None of these

#### Q91

$\int_0^{\infty} \frac{\sin x}{\sqrt{x}}$  must be eQual to

a.  $\frac{\sqrt{\pi}}{2}$

b.  $\sqrt{\frac{\pi}{2}}$

c.  $\frac{1}{\sqrt{2\pi}}$

d. None of these

#### Q92

$\int_0^{\infty} \frac{\cos x}{\sqrt{x}} dx$  must be eQual to

a.  $\frac{\sqrt{\pi}}{2}$

b.  $\sqrt{\frac{\pi}{2}}$

c.  $\frac{1}{\sqrt{2\pi}}$

d. None of these

**M<sub>93,95</sub> : Paragraph for Question Nos. 93 to 95**

Let  $a_2 = \sqrt{2} + \sqrt{3} + \sqrt{6}$  and  $a_{n+1} = \frac{a_n^2 - 5}{2(a_n + 2)}$  for positive integers. Answer the following Questions :

**Q93**

$a_0 + 2$  must be equal to

a.  $\cot \frac{\pi}{24}$

b.  $\cot \pi/10$

c.  $\cot \pi/48$

d. None of these

**Q94**

$$a_n = \cot \left( \frac{2^{n-3}\pi}{3} \right) - 2$$

a. is true for  $n = 0$  only

b. is true for  $n = 0$  and  $n = 1$  only

c. is true for all  $n$

d. None of these

**Q95**

If  $b_n = a_n + 2$ , ( $n \geq 1$ ) then  $b_{n+1}$  is given by

a.  $\frac{b_n^2 + 1}{2b_n}$

b.  $\frac{b_n^2 - 1}{2b_n}$

c.  $\frac{b_n^2 + 1}{b_n}$

d. None of these

**Section-V**

**Subjective Type**

0	0	0	0
1	1	1	1
2	2	2	2
3	3	3	3
4	4	4	4
5	5	5	5
6	6	6	6
7	7	7	7
8	8	8	8
9	9	9	9

**Q96**

In  $\Delta ABC$  if  $BC$  is unity,  $\sin \frac{A}{2} = a_1, \sin \frac{B}{2} = a_2, \cos \frac{A}{2} = a_3$  and  $\cos \frac{B}{2} = a_4$  with  $\left(\frac{a_1}{a_2}\right)^{2007} - \left(\frac{a_3}{a_4}\right)^{2006} = 0$ , then the length of  $AC$  is

**Q97**

If  $\alpha$  and  $\beta$  are non-real complex cube roots of unity then the value of  $\alpha^4 + \beta^4 + \frac{1}{\alpha\beta}$  must be

**Q98**

If the latus rectum of an ellipse is half of its minor axis then the eccentricity of the ellipse is  $\frac{\sqrt{\lambda}}{2}$ .  $\lambda$  must be

**Q99**

The number of dissimilar terms in the expansion of  $\left(x + y + \frac{1}{x} + \frac{1}{y}\right)^{14}$  is

**Section-VI**

**Matrix-Match Type**

**Q100**

Let  $A = x_1 + x_2\omega + x_3\omega^2, B = x_1 + x_3\omega^2 + x_2\omega$  where  $\omega, \omega^2$  are non-real complex cube roots of unity and  $x_1, x_2, x_3$  are the roots of  $x^3 + pxq = 0$ . If  $A^3$  and  $B^3$  are the roots of the Quadratic eQuation  $Pz^2 + QzR=0$ , then match the following :

**Column I**

- a.  $P$
- b.  $Q$
- c.  $R$

**Column II**

- p.  $27q$
- q.  $-27p^3$
- r. 1



**Q101**

If  $\sin^{-1}x + \sin^{-1}y = A\sin^{-1}[x\sqrt{1-x^2} + y\sqrt{1-y^2}] + B\pi$ , where  $A$  and  $B$  are numerical Quantities, then match the following :

**Column I**

- a.  $A = 1, B = 0$
- b.  $A = -1, B = -1$
- c.  $A = -1, B = +1$
- d.  $A = 0, B = 0$

**Column II**

- p.  $x^2 + y^2 > 1, x > 0, y > 0$
- q.  $x^2 + y^2 = 0$
- r.  $x^2 + y^2 > 1, x < 0, y < 0$
- s.  $xy < 0, x^2 + y^2 \leq 1$

**Q102**

Let  $f(x) = Ax^2 + Bx + C$  given that  $f'(1) = 8, f(2) + f'(2) = 33, \int_0^1 f(x)dx = \frac{7}{3}$ , then match the following :

**Column I**

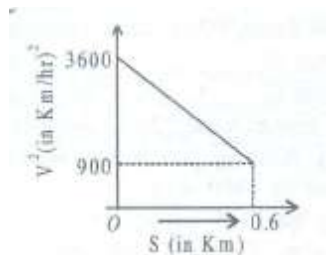
- a.  $A$
- b.  $B$
- c.  $C$
- d.  $\int_{-2}^2 xf(x)dx$

**Column II**

- p.  $-32$
- q.  $-6$
- r.  $7$
- s.  $3$

**PAPER – II****Part-I (Physics)****Section-I****Straight Objective Type****Q1**

A graph between the square of the velocity of a particle and the distance 'S' moved by the particle is shown in figure. The acceleration of the particle in kilometer per hour square



- a. 4250
- b. 425
- c. -2250
- d. -275

## Q2

A body falling freely under the action of gravity passes through two points 9 m apart (vertically) in 0.2 sec. from what height above the higher point did it start to fall ?

- a. 99 m
- b. 200 m
- c. 20 m
- d. 109 m

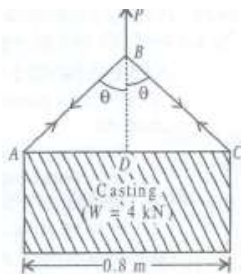
## Q3

A car starts from rest with an acceleration of  $6\text{m/s}^2$  which decreases to zero linearly with time, in 10 sec, after which the car continues at a constant speed. Find the time required for the car to travel 400 m from the start ?

- a. 16.675
- b. 25.6
- c. 20.56
- d. 19.56

## Q4

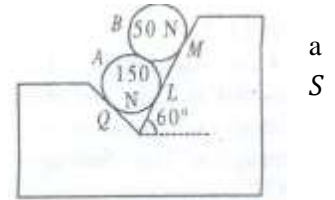
A casting weighing 4 kN is to be lifted by means of a rope as shown in figure. If allowable tension in the rope is 2.5 kN, minimum length of rope ABC is ?



- a. 0.667
- b. 4.22
- c. 4.334
- d. none of these

**Q5**

Two spheres  $A$  and  $B$  weighing  $150\text{ N}$  and  $50\text{ N}$  respectively are placed on rough inclined surface as shown in fig. the contact reactions at  $Q, L, M$  and are  $R_Q, R_L, R_M$  and  $R_S$  respectively. The correct option is/are:



a.  $R_S = 153\text{ N}$

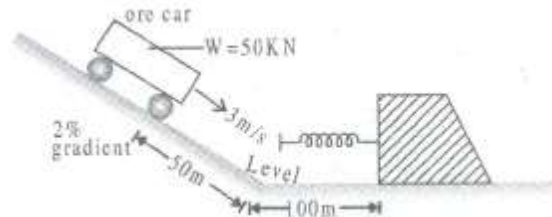
b.  $R_M = 135\text{ N}$

c.  $R_Q = 140\text{ N}$

d.  $R_L = 75\text{ N}$

**Q6**

At a mine, the end of a side track is to be provided with a spring bumper. The spring must be capable of stopping a  $50\text{ kN}$  ore car which has a velocity of  $3\text{ m/s}$  down the incline at a point  $50\text{ m}$  up the incline from  $A$ , and then coasts from there to the bumper, as shown in fig. the track resistance remains constant at  $400\text{ N}$ . if the spring is being compressed by  $0.6\text{ m}$  in order to stop the car, the modulus,  $K$  must be :



a.  $60.53\text{ N/mm}$

b.  $70.53\text{ N/mm}$

c.  $60.53\text{ N/m}$

d.  $170.53\text{ N/m}$

**Q7**

A sphere of mass ' $M$ ' moving with velocity  $u$  hits another stationary sphere of same mass. If  $e$  is the coefficient of restitution, what is the ratio of velocities of two sphere after the collision

a.  $\frac{(1+e)}{(1-e)}$

b.  $\frac{(1-e)}{(1+e)}$

c.  $\frac{(1+e)}{e}$

d.  $\frac{e}{(1-e)}$

### Q8

A block hangs from the free end of a sonometer wire of vibrating length 40 cm, when it was tuned to a tuning fork. The block when hung completely immersed in water, the resonant length is reduced to 30 cm. the relative density of block is

- a.  $16/3$
- b.  $16/5$
- c.  $16/7$
- d.  $16/9$

### Q9

A solid cube and solid sphere have equal surface areas. Both are at the same temperature of  $120^{\circ}\text{C}$  then

- a. The cube will cool down faster than sphere.
- b. The sphere will cool down faster than cube.
- c. Both of them will cool down at the same rate.
- d. Which ever of the two is heavier, will cool down faster.

## Section-II

### Multiple Objective Type

### Q10

if  $a_r$  and  $a_t$  represent radial and tangential acceleration, the motion of a particle will be circular if

- a.  $a_r = 0, a_t = 0$
- b.  $a_r = 0, a_t \neq 0$
- c.  $a_r \neq 0, a_t = 0$
- d.  $a_r \neq 0, a_t \neq 0$

**Q11**

Two satellites of same mass of a planet in circular orbits have periods of revolutions 32 days and 256 days. If the radius of the orbit at the first is  $R$ , then the

- a. Radius of the orbit at the second is  $4R$
- b. Radius at the orbit at the second is  $8R$
- c. Total mechanical energy of the second is greater than that of the first
- d. Kinetic energy of the second is more than that of the first.

**Q12**

Water is being poured in a vessel at a constant rate  $\beta^3 s^{-1}$ . There is a small hole of area  $\propto$  at the bottom of the tank. The maximum level of water in the vessel is proportional to

- a.  $\beta$
- b.  $\beta^2$
- c.  $\propto^{-1}$
- d.  $\propto^{-2}$

**Q13**

Action and reaction :

- a. Act on two different objects
- b. Have opposite directions
- c. Have eQual magnitude
- d. Have zero resultant

**Q14**

A projectile has the same range  $R$  for two angles of projections. If  $T_1$  and  $T_2$  be the times of flight in the two cases, then (using  $\theta$  as the angle of projection corresponding to  $T_1$ )

- a.  $T_1 T_2 \propto R$
- b.  $T_1 T_2 \propto R^2$
- c.  $\frac{T_1}{T_2} = \tan \theta$
- d.  $\frac{T_1}{T_2} = 1$

**Q15**

A long straight wire carries a current along the  $x$ -axis, consider the points  $A(0, 1, 0)$ ,  $B(0, 1, 1)$ ,  $C(1, 0, 1)$  and  $D(1, 1, 1)$ , which of the following pairs at point will have magnetic field of the same magnitude ?

- a.  $A$  and  $B$
- b.  $A$  and  $C$
- c.  $B$  and  $C$
- d.  $B$  and  $D$

**Q16**

An a.c. source rated 220 V supplies a current of 5 A in a circuit. Average power delivered by the source

- a. Must be 100 watt
- b. May be 1100 watt
- c. May be less than 1100 watt
- d. May be greater than 1100 watt

**Q17**

A uniform wire of resistance  $R$  is shaped into a regular  $n$ -sides polygon ( $n$  is even). The equivalent resistance between any two corners can have

- a. The maximum value of  $R/4$
- b. The maximum value of  $R/n$
- c. The minimum value of  $R\left(\frac{n-1}{n^2}\right)$
- d. The minimum value of  $R/n$

### Section-III

#### Assertion-Reason Type

#### Q18

##### Statement-1

On going away from a point charge or a small electric dipole, electric field decreases at the same rate in both the cases.

##### Statement-2

Electric field is inversely proportional to square of the distance from centre.

- a. Statement-1 is True, Statement-2 is True; Statement-2 is a correct explanation for Statement-1
- b. Statement-1 is True, Statement-2 is True; Statement-2 is NOT a correct explanation for Statement-1
- c. Statement-1 is True, Statement-2 is False
- d. Statement-1 is False, Statement-2 is True

#### Q19

##### Statement-1

A small metal ball is suspended in a uniform electric field with an insulated thread. If high energy x-ray beam falls on the ball, the ball will be deflected in the electric field. because

##### Statement-2

X-ray emits photoelectron and metal becomes negatively charged.

- a. Statement-1 is True, Statement-2 is True; Statement-2 is a correct explanation for Statement-1
- b. Statement-1 is True, Statement-2 is True; Statement-2 is NOT a correct explanation for Statement-1
- c. Statement-1 is True, Statement-2 is False
- d. Statement-1 is False, Statement-2 is True

#### Q20

##### Statement-1

Electrons move away from a region of higher potential level to a region of lower potential. because

##### Statement-2

Electrons have -ve charge.

- a. Statement-1 is True, Statement-2 is True; Statement-2 is a correct explanation for Statement-1
- b. Statement-1 is True, Statement-2 is True; Statement-2 is NOT a correct explanation for Statement-1
- c. Statement-1 is True, Statement-2 is False
- d. Statement-1 is False, Statement-2 is True

## **Q21**

### **Statement-1**

Circuits containing capacitors should be handled cautiously even when there is no current. because

### **Statement-2**

The capacitors are very delicate and so Quickly breakdown.

- a. Statement-1 is True, Statement-2 is True; Statement-2 is a correct explanation for Statement-1
- b. Statement-1 is True, Statement-2 is True; Statement-2 is NOT a correct explanation for Statement-1
- c. Statement-1 is True, Statement-2 is False
- d. Statement-1 is False, Statement-2 is True

## **Section-IV**

### **Linked Comprehension Type**

#### **P<sub>22-24</sub> : Paragraph For Question Nos. 22 to 24**

The internal resistance of a flashlight battery increase gradually with age, even though the battery is not used. The emf, however, remains fairly constant about 1.5 V. Batteries may be test5ed for age at the time of purchase by connecting an ammeter directly across the terminals of the battery and reading the current. The resistance of the ammeter is so small that the battery is practically short circuited.

### **Q22**

What is the internal resistance, if the short circuit current of a fresh flashlight battery (emf 1.5 V) is 14.8 A ?

- a. 101  $\Omega$
- b. 0.011  $\Omega$
- c. 0.101  $\Omega$
- d. 0.202  $\Omega$

### **Q23**

What is the internal resistance, if the short circuit current is only 6.8 A ?

- a. 0.11  $\Omega$
- b. 0.22  $\Omega$
- c. 0.33  $\Omega$
- d. 0.44  $\Omega$

### **Q24**

The short circuit current of a 12.6 V car battery may be as great as 1000 A then what will be the internal resistance?

- a. 0.0123
- b. 0.0124
- c. 0.125
- d. 0.0126

#### **P<sub>25-27</sub> : Paragraph For Question Nos. 24 to 27**

A beam of alpha particles is incident on a target of lead. A particular alpha particle comes in “head on” to a particular lead nucleus and stop  $5.50 \times 10^{-14}$  m away from the center of the nucleus. (This point is well



outside the nucleus). Assume that the lead nucleus with 82 protons, remains at rest. The mass of alpha particle is  $6.64 \times 10^{-27}$  kg.

**Q25**

Calculate the electrostatic potential energy at the instant that the alpha particle stops.

- a. 36.3 MeV
- b. 45.0 MeV
- c. 3.63 MeV
- d. 40.0 MeV

**Q26**

What initial K.E> (in joules and in MeV) did the alpha particle have ?

- a. 36.3
- b. 0.36
- c. 3.63
- d. 2.63

**Q27**

what was the initial speed of the alpha particle ?

- a.  $132 \times 10^2$  m/s
- b.  $1.32 \times 10^7$  m/s
- c.  $13.2 \times 10^2$  m/s
- d.  $0.13 \times 10^7$  m/s

**Section-V**

**Subjective Type**

0	0	0	0
1	1	1	1
2	2	2	2
3	3	3	3
4	4	4	4
5	5	5	5
6	6	6	6
7	7	7	7
8	8	8	8
9	9	9	9

--	--	--	--

**Q28**

An air filled parallel plate capacitor is to be constructed which can store  $12 \mu\text{C}$  of charge when operated at  $1200 \text{ V}$ . what can be the minimum area of capacitor? The dielectric strength of air is  $3 \times 10^7 \text{ V/m}$ . [in  $10^{-2} \text{ m}^2$ ]

**Q29**

A coil of inductance  $0.7 \text{ H}$  is joined in series with a resistance of  $220 \Omega$ . Find the wattles component of current in the circuit, when an alternating emf of  $220 \text{ V}$  at a frequency of  $50 \text{ Hz}$  is supplied to it.

**Q30**

A cubical vessel of height  $1 \text{ m}$  is full of water. What is the work done in pumping water out of the vessel ?

**Q31**

A diatomic gas ( $\gamma = 1.4$ ) does  $200 \text{ J}$  of work, when it is expanded isobarically. Find the heat given to the gas in the process ?

## Section-VI

### Matrix-Match Type Questions

#### Q32

##### Column I

- a. Weight of a body is maximum
- b. weight of a body decreases
- c. Weight of a body increases
- d. weight of a body is zero

##### Column II

- p. Zero gravitational field
- Q. At the surface of earth
- r. With increase in height from the surface of earth
- s. When body is moved from null point towards moon

#### Q33

##### Column I

- a. In a perfectly elastic collision.
- b. Co-efficient of restitution is zero
- c. Transfer of K.E. when two bodies of equal masses collide elastically
- d. Loss in K.E.

##### Column II

- p. 100%
- Q. No K.E. is lost
- r. Inelastic collision
- d. Perfectly inelastic collision

#### Q34

##### Column I

- a. Change in frequency due to relative motion between source and listener
- b. Intensity of sound varies with time
- c. Sound waves in air
- d. Light waves

##### Column II

- P. Beats
- Q. Transverse
- r. Doppler effect
- s. Longitudinal

## Part-II(Chemistry)

### Section-I

#### Straight Objective Type

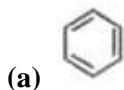
#### Q35

the molar conductance of

- a. 1<sup>st</sup> group chloride salt solution decreases down the group.
- b. 2<sup>nd</sup> group chloride salt solution decreases down the group.
- c. 1<sup>st</sup> group chloride salt solution increase down the group.
- d. 2<sup>nd</sup> group sulphate salt solution increases down the group.

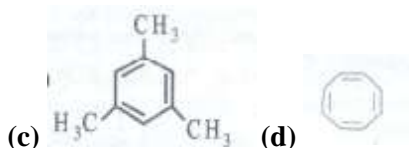
#### Q36

4 moles of acetylene when heated in presence of iron tube we get



(b)





**Q37**

A metal exists in BCC structure and has density  $7.5 \text{ g cm}^{-3}$ . If edge of the cell is  $5\text{\AA}$ , how many atoms are present in 15 g of metal ?

- a.  $3.2 \times 10^{22}$
- b.  $1.66 \times 10^{22}$
- c.  $1.66 \times 10^{24}$
- d. None of these

**Q38**

For a reaction  $A \rightleftharpoons E$ , the value of K will be



- a. 120
- b. 60
- c. 24
- d. 30

**Q39**

The volume of water to be added to a mixture of 25 L of 6 M HCl and 15 L of 2 M HCl to have normality eQual to 3 is

- a. 15 L
- b. 20 L
- c. 25 L
- d. 60 L

**Q40**

For a reversible reaction involving reactants A and B and products C and D. A and B react in the ratio 2 : 3 and are mixed in the ratio 4 : 5 to form C and D in the ratio 3 : 4. The eQuilibrium concentration of B and C are eQual. What are the eQuilibrium concentrations of A, B, C and D respectively ?

- a.  $\frac{5}{2}, \frac{7}{3}, \frac{5}{2}, \frac{10}{3}$
- b.  $\frac{7}{3}, \frac{5}{2}, \frac{5}{2}, \frac{10}{3}$
- c.  $\frac{5}{2}, \frac{10}{3}, \frac{7}{3}, \frac{5}{2}$
- d.  $\frac{10}{3}, \frac{10}{3}, \frac{5}{2}, \frac{5}{2}$

**Q41**

Which of the following relations are correct?

- a.  $r_1(H) = r_2(He^+)$
- b.  $r_1(H) = r_2(Li^{2+})$
- c.  $r_1(H) = r_2(Be^{3+})$
- d.  $r_1(H) = r_2(B^{4+})$

**Q42**

If the wavelength of the principal series limit of Rb atom spectrum is 296 nm then the ionization energy of Rb is

- 900 kJ/ml
- 1000 KJ/ml
- 403 kJ/ml
- 100 kJ/ml

**Q43**

Which of the following follow 1<sup>st</sup> order kinetic ?

- decomposition of  $\text{NH}_4\text{NO}_2(\text{s})$
- Decomposition of  $\text{NH}_3$
- Decomposition of  $\text{SO}_2$
- Decomposition of  $\text{H}_2\text{O}_2$  under all conditions.

**Section-II****Multiple Objective Type****Q44**

The ratio of  $\text{H}^+$  and  $\text{H}_2\text{O}$  molecules in one litre of water will be

- $1 : 6.023 \times 10^{23}$
- $1 : 2 \times 6.023 \times 10^{23}$
- $1 : M_{\text{H}_2\text{O}} \times 10^7$
- $1 : 55.4 \times 10^7$

**Q45**

Which of the following do not give alkane on decarboxylation on heating with sodalime ?

- $\text{C}_6\text{H}_5\text{COOH}$
- $\text{HCOOH}$
- $\text{CH}_3\text{COOH}$
- $\text{CH}_3\text{CH}_2\text{COOH}$



**Q46**

Which of the following statements are true about Breeder reactor ?

- It produces more fuel than it consumes.
- It makes use of  ${}^{239}_{94}\text{Pu}$  as fissionable material obtained by bombardment of  ${}^{238}_{92}\text{U}$  with neutron followed by emission of the  $\beta$ -particles.
- It consumes more fuel than it produces.
- It makes use of fusion reaction.

**Q47**

Which of the following statement are correct ?

- The enolate of  $\text{CH}_3\text{NO}_2$  is stable due to  $p\pi - p\pi$  bond.
- The enolate  of  $\text{CHCl}_3$  is stable due to  $p\pi - d\pi$  bond
- The enolate  of is stable due to aromaticity

- The enolate  of  $\text{Me}_2\text{S}=\text{O}$  can never be formed

**Q48**

The dissociation of ammonium carbonate may be represented by the equation  $\text{NH}_4\text{COONH}_2(\text{s}) \rightleftharpoons 2\text{NH}_3(\text{g}) + \text{CO}_2(\text{g})$ .

$\Delta H = -ve$  for forward reaction. The equilibrium will shift from left to right if there is

- A decrease in pressure
- A decrease in temperature
- An increase in concentration of ammonia
- A decrease in concentration of  $\text{CO}_2$

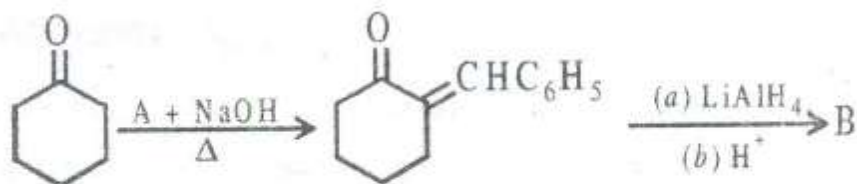
**Q49**

Glycerol, on being heated with oxalic acid at  $110^\circ\text{C}$ , followed by hydrolysis

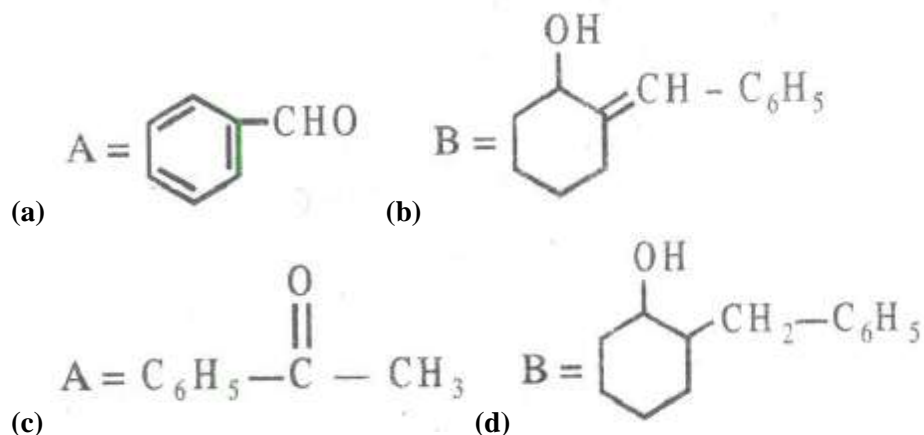
- Glycerylmonoformate
- Glycerylmonooxalate
- Formic acid
- Allyl alcohol

**Q50**

In the reaction sequence given



Hence here

**Q51**

In an adiabatic process, the work done by an ideal gas during expansion or compression is given by

- $nC_v\Delta T$
- $\frac{nR}{\gamma-1}(T_2 - T_1)$
- $-RP_{ext} \left[ \frac{T_1P_1 - T_2P_2}{P_1P_2} \right]$
- $-2.303RT \log \frac{V_2}{V_1}$

### Section-III

#### Assertion-Reason Type

##### Q52

##### **Statement-1:**

F<sub>2</sub> can displace Cl<sub>2</sub> from chloride solution. because

##### **Statement-2:**

F<sub>2</sub> is more reactive than Cl<sub>2</sub>.

- Statement-1 is True, Statement-2 is True; Statement-2 is a correct explanation for Statement-1
- Statement-1 is True, Statement-2 is True; Statement-2 is not a correct explanation for Statement-1
- Statement-1 is True, Statement-2 is False
- Statement-1 is False, Statement-2 is True

##### Q53

##### **Statement-1:**

Cis-2-Butene on reaction with cold alkaline KMnO<sub>4</sub> gives optically active butan-2, 3-diol. because

##### **Statement-2:**

Reaction of alkenes with alkaline KMnO<sub>4</sub> is a cis addition.

- Statement-1 is True, Statement-2 is True; Statement-2 is a correct explanation for Statement-1
- Statement-1 is True, Statement-2 is True; Statement-2 is not a correct explanation for Statement-1
- Statement-1 is True, Statement-2 is False
- Statement-1 is False, Statement-2 is True

##### Q54

##### **Statement-1:**

For an adiabatic expansion of ideal gas  $\Delta U = 0$  because

##### **Statement-2:**

During adiabatic expansion, temperature decreases.

- Statement-1 is True, Statement-2 is True; Statement-2 is a correct explanation for Statement-1
- Statement-1 is True, Statement-2 is True; Statement-2 is not a correct explanation for Statement-1
- Statement-1 is True, Statement-2 is False
- Statement-1 is False, Statement-2 is True

##### Q55

##### **Statement-1:**

Phenolphthalein is used as an indicator during the titration of oxalic acid against sodium hydroxide. because

##### **Statement-2:**

The pH range of phenolphthalein is from to 9.6.

- Statement-1 is True, Statement-2 is True; Statement-2 is a correct explanation for Statement-1
- Statement-1 is True, Statement-2 is True; Statement-2 is not a correct explanation for Statement-1
- Statement-1 is True, Statement-2 is False
- Statement-1 is False, Statement-2 is True

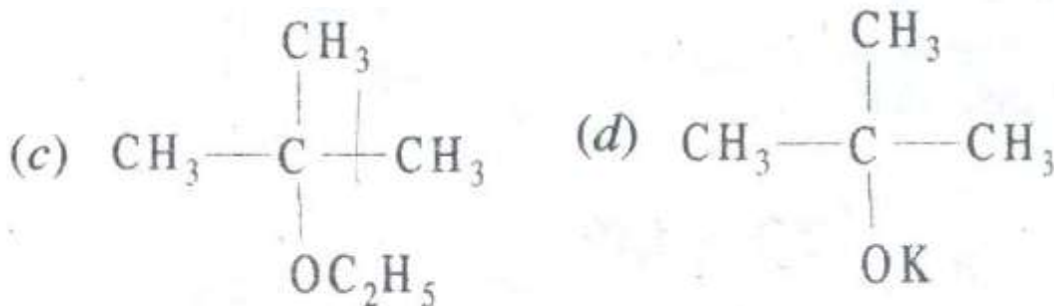
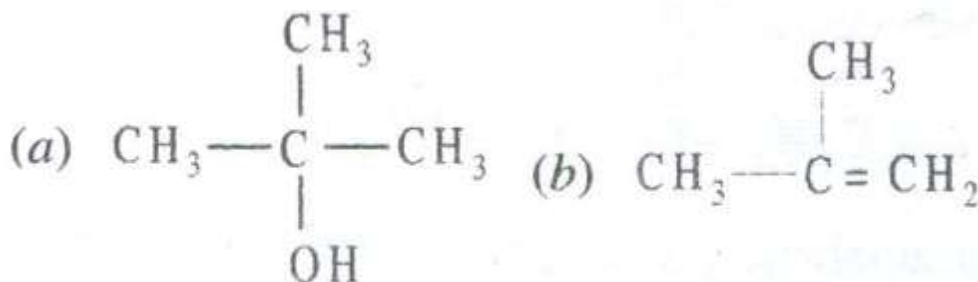
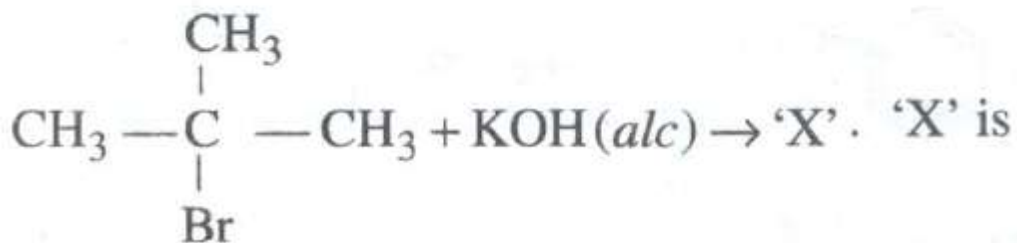
#### Section-IV

#### Linked Comprehension Type

#### C<sub>56-58</sub>: Paragraph for Question Nos. 56 to 58

Nucleophilic substitution reactions depend upon nature of nucleophile. Nucleophiles are negatively charged bases and have tendency to abstract a proton but also nucleophile can attack itself to +ve centre. It means substitution and elimination reaction compete with each other. 3° halides undergo elimination faster than substitution. In protic polar solvent, 1° halide mostly favour substitution but in aprotic polar solvent, high temperature, stronger nucleophile favour elimination.

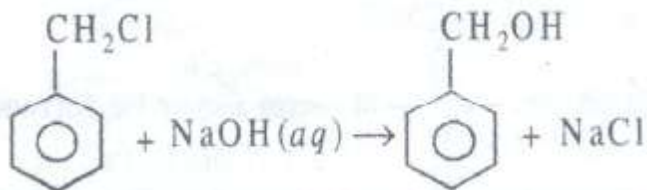
#### Q56



#### Q57

Which of the following ethers cannot be obtained?

- $(\text{CH}_3)_3\text{C}-\text{O}-\text{C}(\text{CH}_3)_3$
- $\text{C}_2\text{H}_5\text{OC}_2\text{H}_5$
- $\text{CH}_3\text{COCH}_3$
- $\text{C}_6\text{H}_5\text{OC}_6\text{H}_5$

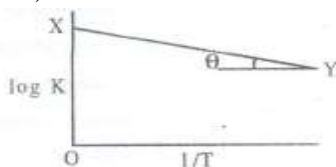
**Q58**

The above reaction follows

- $S_N1$  mechanism and is nucleophilic substitution
- $S_N2$  mechanism and is nucleophilic substitution
- $S_N1$  mechanism and is nucleophilic addition reaction
- $S_N2$  mechanism and is nucleophilic addition reaction

**C<sub>59-61</sub>: Paragraph for Question Nos. 59 to 61**

The variation of equilibrium constant  $K$  with temperature is given by  $\log K = \frac{\Delta S}{R} - \frac{\Delta H}{2.303RT}$  for a graph between  $\log K$  and  $1/T$  a straight line was observed as shown in the figure. The OX value = 9 and  $\theta = \tan^{-1}(0.6)$

**Q59**

The value of  $\Delta H$  for the reaction

- 15 J/mol
- 11.48 J/mol
- 20 J/mol
- 30 J/mol

**Q60**

$\log K$  is equal to

- $9 - \frac{0.6}{298}$
- $10 - \frac{0.6}{298}$
- $9 + \frac{0.6}{298}$
- $10 + \frac{0.6}{298}$

**Q61**

The value of  $\Delta S$  for the reaction

- 9 R
- $\frac{9}{R}$
- $0.6 R^2$
- $\frac{R}{0.6}$



## Section-V

### Subjective Type

0	0	0	0
1	1	1	1
2	2	2	2
3	3	3	3
4	4	4	4
5	5	5	5
6	6	6	6
7	7	7	7
8	8	8	8
9	9	9	9

#### Q62

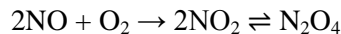
A sample of magnesium was burnt in air to give a mixture of MgO and Mg<sub>3</sub>N<sub>2</sub>. The ash was dissolved in 60 meQ HCl and the resulting solution back titrated with NaOH. 12 meQ of NaOH were reQuired to reach the end point. An excess of NaOH was then added to the solution distilled. The ammonia released was then trapped in 10 meQ of second acid solution. Back titration oif this reQuired 6 meQ of the base. Calculate the percentage of Mg burnt it the nitride.

#### Q63

calculate the enthalpy change for the combustion of cyclopropane at 298K. the enthalpy of formation of CO<sub>2</sub>(g) and H<sub>2</sub>O(l) and propene (g) are -393.5 kJ, -285.8 kJ and 20.42 kJ mol<sup>-1</sup> respectively. The enthalpy of isomerization of cyclopropane to propene is -33.0 kJ mol<sup>-1</sup>

#### Q64

A 250 ml flask and 100ml flask are separated by a stop cork. At 350 K the nitric oxide in the larger flask exerts a pressure of 0.46 atm and the smaller one contains oxygen at 0.86 atm. The gases are mixed by opening the stop cork. The reactions occurring are



The first reaction is complete while the second one is at eQuilibrium. Assuming all the gases behave ideally calculate the K<sub>p</sub> if final pressure is 0.37 atm.

#### Q65

The reaction  $A + \text{HO}^- \rightarrow \text{products}$  obey the rate law expression.  $\frac{-d[A]}{dt} = k[A][\text{OH}^-]$

If the initial concentration of [A] and [OH<sup>-</sup>] are 0.002 M and 0.3 M respectively. Calculate the rate constant if it takes 30 seconds for 1% A to react.

## Section-VI

### Matrix-Match Type

#### Q66

##### Column I

- [Sc(H<sub>2</sub>O)<sub>6</sub>]<sup>3+</sup>
- [Ti(H<sub>2</sub>O)<sub>6</sub>]<sup>3+</sup>
- [Cr(H<sub>2</sub>O)<sub>6</sub>]<sup>3+</sup>
- [Co(NH<sub>3</sub>)<sub>6</sub>]<sup>3+</sup>

##### Column II

- Coloured
- Colourless
- Paramagnetic μ<sub>BM</sub> = 3.7 app
- d<sup>2</sup>sp<sup>3</sup> hybridization

**Q67****Column I**

- a. Spinel
- b. Feldspar
- c. Malachite
- d. Sodium polumetaphosphate

**Column II**

- p. water softener
- q.  $\text{MgAl}_2\text{O}_4$
- r.  $\text{KAlSi}_3\text{O}_8$
- s.  $\text{CuCO}_3 \cdot \text{Cu(OH)}_2$

**Q68****Column I**

- a. Oxidation potential
- b. Discharge potential
- c. Concentration cell
- d. Standard hydrogen electrode

**Column II**

- p.  $+\text{Pt}(s) \left| \begin{array}{c} \text{H}_2 \\ P_1 \text{ atm} \end{array} \right| \begin{array}{c} \text{H}^+ \\ C_1 \end{array} \left| \left| \begin{array}{c} \text{H}^+ \\ C_1 \end{array} \right| \begin{array}{c} \text{H}_2 \\ P_2 \text{ atm} \end{array} \right| \text{Pt}(s)$
- q. Reduction potential = 0
- r. Depends upon the nature of electrode.
- s. Increases with dilution.
- t.  $\text{Zn}(s) \left| \begin{array}{c} \text{Zn}^{2+} \\ C_1 \end{array} \right| \left| \begin{array}{c} \text{Cu}^{2+} \\ C_1 \end{array} \right| \text{Cu}(s)$

**PART-III (Mathematics)****Section-I****Straight Objective Type****Q69**

If  $\alpha, \beta$  are the roots of  $x^2 + (\sin \phi - 1)x - \frac{1}{2} \cos^2 \phi = 0$ , then the values of  $\phi$  for which  $\alpha^2 + \beta^2$  maximum are

- a.  $2n\pi + \pi/2$
- b.  $2n\pi - \pi/2$
- c.  $n\pi + (-1)^n \pi/3$
- d. None of these

**Q70**

When  $3^{2002} + 7^{2002} + 2002$  is divided by 29, the remainder is

- a. 7
- b. 1
- c. 0
- d. 2

**Q71**

If  $\log_{30} 3 = a$  and  $\log_{30} 5 = b$ , then  $\log_{30} 8$  is equal to

- a.  $\frac{1}{2}(1 - a - b)$
- b.  $3(1 - a - b)$
- c.  $a + b$
- d.  $\frac{8}{3}(1 - a - b)$

**Q72**

The equation  $x - \log_e(1 + e^x) = c$  has a solution

- for every  $c < 1$
- for every  $c > -1$
- for every  $c < 0$
- for every  $c \geq 1$

**Q73**

The smallest value of  $\alpha$  satisfying the conditions that  $\alpha$  is a positive integer and that  $\frac{\alpha}{540}$  is the square of a rational number is

- 15
- 3
- 5
- 6

**Q74**

If  $f(x - y) = f(x)g(y) - f(y)g(x) \forall x, y \in R$ , where  $f(x)$  is non-zero function, then

- if  $f'(0^+)$  exists then it is equal to  $f'(0^-)$
- if  $f'(0^+)$  exists then  $f'(0^-)$  does not exist
- if  $f'(0^+)$  exists then  $f'(0^-)$  also exists but not equal
- None of these

**Q75**

If  $n$  be a positive integers, then the number of values of  $n$  satisfyin

$$\int_0^{\pi/2} \left[ n^2 \left( \cos 3x + \frac{1}{2} \cos x \right) + \sin x - 2n \cos x \right] dx \leq 1, \text{ is}$$

- 10
- 11
- 12
- None of these

**Q76**

The value of the integral  $\int \cos \log x \, dx$  is

- $x/2[\cos \log x - \sin \log x]$
- $x/2[\cos \log x + \sin \log x]$
- $x[\cos \log x + \sin \log x]$
- $x/2[\sin \log x - \cos \log x]$

**Q77**

Consider the functions  $f(x) = a|x + 1|$ ,  $g(x) = x + a^2|x|$ , where  $a$  is real parameter, Then the graphs of  $f(x)$  and  $g(x)$

- will cut at three distinct points if  $a = 1/2$
- will cut at three distinct points if  $a = 3/2$
- will not cut at three distinct points if  $a = 0$
- will cut at three distinct points for no value of  $a$

## Section-II

### Multiple Objective Type

#### Q78

If  $\tan \theta = n \tan \phi$  ( $n > 0$ ), then

a.  $\tan^2(\theta - \phi) = \frac{(n-1)^2}{(\cot \phi - n \tan \phi)^2 + 4n}$

b.  $\tan^2(\theta - \phi) = \frac{(n-1)^2}{(\cot \phi - n \tan \phi)^2}$

c.  $\tan^2(\theta - \phi) \leq \frac{(n-1)^2}{4n}$

d.  $\tan^2(\theta - \phi) \geq \frac{(n-1)^2}{4n}$

#### Q79

If  $0 \leq x, y, z < \pi/2$  and  $x + y + z = \pi/2$  then  $\tan x \tan y \tan z$

a. is minimum if  $x = y = z$

b. is maximum if  $x = y = z$

c. has a maximum value  $\left(\frac{1}{\sqrt{3}}\right)^3$

d. has a minimum value  $\left(\frac{1}{\sqrt{3}}\right)^3$

#### Q80

If  $a + b + c = 0$ , then

a.  $a^4 + b^4 + c^4 = \frac{1}{2}(a^2 + b^2 + c^2)^2$

b.  $a^4 + b^4 + c^4 = \frac{1}{4}(a^2 + b^2 + c^2)^2$

c.  $a^5 + b^5 + c^5 = -5abc(ab + bc + ac)$

d.  $a^5 + b^5 + c^5 = -10abc(ab + bc + ac)$

#### Q81

The inequality  $\left(1 + \frac{a}{\sin x}\right)\left(1 + \frac{b}{\cos x}\right) \geq (1 + \sqrt{2ab})^2$

a. is defined if  $a, b > 0, 0 < x < \pi/2$

- b. is defined if  $ab > 0, 0 < x < \pi/2$
- c. can not become an eQuality for any  $x$
- d. can become an eQuality for some  $x$

**Q82**

if  $y = \int_0^{\infty} \frac{e^x}{1+z^2} dz$ , then

- a.  $y$  as a function of  $x$  is increasing
- b.  $y$  as a function of  $x$  is decreasing
- c.  $y'' + y = 1/x$
- d.  $y'' - y = 1/x$

**Q83**

If  $a + b = c + d = p$  and  $\left(x + \frac{p}{2}\right)^2 = y$ , then the eQuation  $(x + a)(x + b)(x + c)(x + d) = m$

- a. is reducible to  $\left(y + ab - \frac{p^2}{4}\right)\left(y + cd - \frac{p^2}{4}\right) = m$
- b. . is reducible to  $\left(y + ab - \frac{p^2}{4}\right)\left(y + cd + \frac{p^2}{4}\right) = m$
- c. has four real roots if  $a, b, c, d, m$  are real
- d. can not have four positive roots for  $a, b, c, d, m \in R$  if  $ab + cd < p^2/2$

**Q84**

If  $n$  is a natural number of the type  $6k + 1$  and is greater than 6 then  $(x + y)^n - x^n - y^n$

- a. is divisible by  $x^2 + xy + y^2$
- b. is divisible by  $(x^2 + xy + y^2)^2$
- c. is divisible by  $(x^2 + xy + y^2)^3$
- d. is divisible by  $xy(x + y)$

**Q85**

If the third term of the expansion of  $\left(\frac{1}{x} + x^{\log_{10}x}\right)^5$  is 1000, is then  $x$  may be

- a. 5000
- b.  $x=100$
- c.  $1/\sqrt{10}$
- d.  $x = 1/10$

**Section-III****Assertion-Reason Type****Q86****Statement-1:**

$\int_0^b \frac{x dx}{(1+ax)^2} = \frac{1}{a^2} \log(1+ab) - \frac{b}{a(1+ab)}$  where  $b > a > 0$  because

**Statement-2:**

$$\int \frac{dx}{(1+ax)^2} = -\frac{1}{(1+ax)}$$

- a. Statement-1 is True, Statement-2 is True; Statement-2 is a correct explanation for Statement-1
- b. Statement-1 is True, Statement-2 is True; Statement-2 is not a correct explanation for Statement-1
- c. Statement-1 is True, Statement-2 is False
- d. Statement-1 is False, Statement-2 is True

**Q87****Statement-1:**

If  $a + b + c = 0$ , then  $6(a^5 + b^5 + c^5) = 5(a^2 + b^2 + c^2)(a^3 + b^3 + c^3)$  because

**Statement-2:**

If  $a + b + c = 0$ , then  $a^n + b^n + c^n = 3a^{n/3}b^{n/3}c^{n/3}$  if  $n$  is odd.

- a. Statement-1 is True, Statement-2 is True; Statement-2 is a correct explanation for Statement-1
- b. Statement-1 is True, Statement-2 is True; Statement-2 is not a correct explanation for Statement-1
- c. Statement-1 is True, Statement-2 is False
- d. Statement-1 is False, Statement-2 is True

### Q88

#### **Statement-1:**

The locus of point of intersectional variable lines ( $l, m$  variables,  $a, b$  constants)

$lx + my = a, mx - ly = b$  where  $l^2 + m^2 = 1$  is a circle because

#### **Statement-2:**

The eliminant is  $x^2 + y^2 = 1$

- a. Statement-1 is True, Statement-2 is True; Statement-2 is a correct explanation for Statement-1
- b. Statement-1 is True, Statement-2 is True; Statement-2 is not a correct explanation for Statement-1
- c. Statement-1 is True, Statement-2 is False
- d. Statement-1 is False, Statement-2 is True

### Q89

#### **Statement-1:**

If  $f(n) = \frac{n}{2n+1} + \frac{1}{2^3-2} + \frac{1}{4^3-4} + \frac{1}{6^3-6} + \dots + \frac{1}{(2n)^3-2n}$  and  $g(n) = \frac{1}{n+1} + \frac{1}{n+2} + \frac{1}{n+3} + \dots + \frac{1}{2n}$ , then  $f(n) = g(n)$  for all  $n$ . because

#### **Statement-2:**

$f(1) = g(1)$  and  $f(n + 1) - f(n) = g(n + 1) - g(n)$ .

- a. Statement-1 is True, Statement-2 is True; Statement-2 is a correct explanation for Statement-1
- b. Statement-1 is True, Statement-2 is True; Statement-2 is not a correct explanation for Statement-1
- c. Statement-1 is True, Statement-2 is False
- d. Statement-1 is False, Statement-2 is True

## Section-IV

### Linked Comprehension Type

#### **M<sub>90-92</sub>: Paragraph for Question Nos. 90 to 92**

Let the function  $f(x)$  be continuous on  $[0, \infty)$  and  $a > 0, b > 0$ . Answer the following Questions :

#### **Q90**

$\int_0^{\infty} \frac{f(ax)-f(bx)}{x} dx$  must be equal to

- a.  $(f(\infty) - f(0)) \log \frac{a}{b}$
- b.  $(f(\infty) + f(0)) \log \frac{a}{b}$
- c.  $\log f(\infty) - \log f(0)$
- d. None of these

#### **Q91**

The value of the integral  $a > 0, b > 0 \int_0^{\infty} \frac{e^{-ax}-e^{-bx}}{x} dx$  must be equal to

- a.  $\log a/b$
- b.  $\log \frac{b}{a}$
- c.  $\frac{a+b}{2}$
- d. None of these

#### **Q92**

The value of the integral  $\int_0^{\infty} \frac{\sin^3 x}{x^2} dx$

- a.  $1/4 \log 3$
- b.  $3/4 \log 3$
- c.  $1/3 \log 3$
- d. None of these

#### **M<sub>93-95</sub>: Paragraph for Question Nos. 93 to 95**

The cevian of a triangle is any segment joining any of its vertices to a point on the opposite sides. Let

$AD, BE, CE$  be three cevians, let  $r = \frac{\sin ABE}{\sin DAV} \frac{\sin BCF}{\sin EBC} \frac{\sin CAD}{\sin FCA}$ ,  $S = \frac{AF}{FB} \cdot \frac{BD}{DC} \cdot \frac{CE}{EA}$ .



Answer the following Questions :

**Q93**

If  $AD, BE, CF$  are concurrent, then

- a.  $r = 1/2$
- b.  $r = 2$
- c.  $r = 1$
- d. None of these

**Q94**

If  $r \neq 1$ , then

- a.  $s \neq 1$
- b.  $s = 1$
- c.  $s = 1/2$
- d. None of these

**Q95**

If  $s \neq 1$ , then which of the conclusions is false

- a.  $AD, BE, CF$  cannot be medians of the triangle  $ABC$
- b.  $AD, BE, CF$  cannot be altitudes of the triangle  $ABC$
- c.  $AD, BE, CF$  cannot be bisectors of  $\Delta ABC$
- d. None of these

## Section-V

### Subjective Type

0	0	0	0
1	1	1	1
2	2	2	2
3	3	3	3
4	4	4	4
5	5	5	5
6	6	6	6
7	7	7	7
8	8	8	8
9	9	9	9

#### Q96

$x, y \in R, x^2 + y^2 + xy = 1$ , then the minimum value of  $x^3y + xy^3 + 4$  is

#### Q97

If  $p$  and  $q$  are real and  $x^2 + px + q$  divides  $x^4 + 1$  then  $\sqrt{2}pq$  must be equal to

#### Q98

If the length of the perpendicular from origin to the common tangent of the conics  $y^2 = 4x$  and  $x^2 + 4y^2 = 8$  is  $\frac{4}{\sqrt{\lambda}}$ , then  $\lambda$  must be

#### Q99

If  $1^k + 2^k + 3^k + \dots + n^k = An^k + Bn^k + Cn^{k-1} + \dots + Ln$  then  $1/B$  must be equal to

## Section-VI

### Matrix-Match Type

#### Q100

Let  $f(x) = \frac{Kx^2 + L}{x-1} + Mx$ , where  $f(2) = 23, f'(0) = 4$  and  $\int_1^0 (x-1)f(x)dx = \frac{37}{6}$  match the following :

#### Column I

- a.  $K$
- b.  $L$
- c.  $M$

#### Column II

- p. 5
- q. 3
- r. 1

**Q101**

Match the following sequence with their characteristics :

**Column I**

a.  $\left(1 + \frac{1}{n}\right)^n$

b.  $n^{1/n}$

c.  $\frac{\sin n}{n}$

d.  $\sin n$

**Column II**

p. bounded

Q. monotonic

r. convergent

s. oscillatory

**Q102**

Match the following functions with their domains (in integer)

**Column I**

a.  $\sqrt{\sin x}$

b.  $\sqrt{\cos x^2}$

c.  $\sin^{-1} \frac{2x}{1+x}$

d.  $\cos^{-1}(2 \sin x)$

**Column II**

p.  $\left[\frac{\pi}{6} + n\pi, \frac{\pi}{6} + n\pi\right]$

Q.  $\left[\frac{1}{3}, 1\right]$

r.  $[4n^2\pi^2, (2n + 1)^2\pi^2]$

s.  $\left[-\sqrt{\frac{\pi}{2}}, \sqrt{\frac{\pi}{2}}\right] \cup \left[\sqrt{\frac{\pi}{2}(4n-1)}, \sqrt{\frac{\pi}{2}(4n+1)}\right] \cup \left[\sqrt{\frac{\pi}{2}(4n-1)}, \sqrt{\frac{\pi}{2}(4n+1)}\right]$