



# IES MASTER

Institute for Engineers (IES/GATE/PSUs)

# ESE-2016

## Detailed Exam Solutions (Objective Paper-II) Civil Engineering

In case there is any kind of discrepancy in solutions please write to us at [ies\\_master@yahoo.co.in](mailto:ies_master@yahoo.co.in) or call us at : Ph: 011-41013406, 09711853908 for rectification/deletion/updation of the same.

### OFFICE

F-126, Katwaria Sarai, N.D-16. Ph : 011-41013406, 9711853908, 8130909220

Email : [ies\\_master@yahoo.co.in](mailto:ies_master@yahoo.co.in), <http://www.iesmaster.org>

**SCROLL DOWN**



## Explanation of Civil Engg. Objective Paper-II (ESE - 2016)

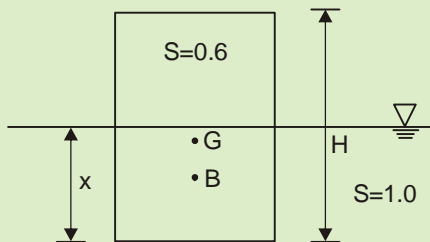
### SET - A

1. A solid cylinder of length  $H$ , diameter  $D$  and of relative density  $S$  floats in neutral equilibrium in water with its axis vertical. What is the ratio of  $H$  to  $D$  if  $S = 0.6$ ?

- (a) 0.86                      (b) 0.72  
(c) 0.52                      (d) 0.46

Ans. (b)

Sol.



Body will be floating

$$\Rightarrow AHS\gamma_w = Ax\gamma_w$$

$$\boxed{x = 0.6H}$$

For Neutral equilibrium

Metacentric height  $BM = BG$

Centre of Bouyancy will be at  $0.3H$  from bottom

as hence  $BG = 0.5 H - 0.3 H = 0.2 H$

$$BM = \frac{I}{V} = \frac{(\pi D^4 / 64)}{\frac{\pi D^2}{4} \times 0.6H}$$

$$BM = \frac{D^2}{16 \times 0.6H} = 0.2H$$

$$\left(\frac{H}{D}\right)^2 = \frac{1}{16 \times 0.12}$$

$$\boxed{\frac{H}{D} = 0.72}$$

2. In a two-dimensional flow, with its stream function  $\psi = 2xy$ , the velocity at a point  $(3,4)$  is

- (a) 12.0 units                      (b) 10.0 units  
(c) 8.0 units                      (d) 6.0 units

Ans. (b)

Sol. Stream function

$$\psi = 2xy$$

$$u = -\frac{\partial \psi}{\partial y} = -2x$$

$$v = \frac{\partial \psi}{\partial x} = +2y$$

$$\vec{v} = -2x\hat{i} + 2y\hat{j}$$

$$\text{at } (3,4) \quad \vec{v} = -6\hat{i} + 8\hat{j}$$

$$|\vec{v}| = \sqrt{6^2 + 8^2}$$

$$\boxed{V = 10 \text{ m/sec}}$$

3. An open rectangular tank of dimensions  $4\text{m} \times 3\text{m} \times 2\text{m}$  contains water to a height of  $1.6\text{m}$ . It is then accelerated along the longer side. What is the maximum acceleration possible without spilling the water? If this acceleration is then increased by 10%, what amount of water will be spilt off?

- (a)  $1.472 \text{ m/s}^2$  and  $0.48 \text{ m}^3$   
(b)  $1.962 \text{ m/s}^2$  and  $0.48 \text{ m}^3$   
(c)  $1.472 \text{ m/s}^2$  and  $0.52 \text{ m}^3$   
(d)  $1.962 \text{ m/s}^2$  and  $0.52 \text{ m}^3$

Ans. (b)

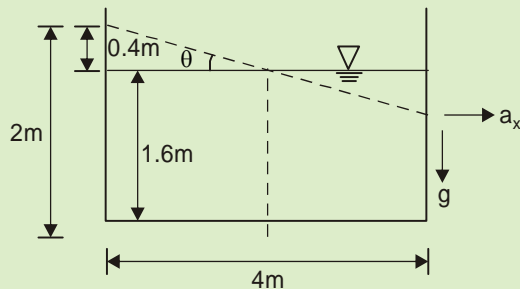
### OFFICE

F-126, Katwaria Sarai, N.D-16. Ph : 011-41013406, 9711853908 , 8010009955

Email : ies\_master@yahoo.co.in, http://www.iesmaster.org

**SCROLL DOWN**

**Sol.** Rectangular tank 4m × 3m × 2m



For maximum acceleration

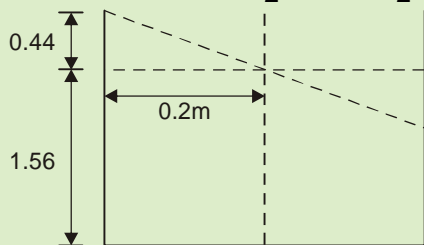
$$\frac{a_x}{g} = \frac{0.4}{2}$$

$$a_x = \frac{0.4 \times 9.81}{2}$$

$$a_x = 1.962 \text{ m/sec}^2$$

if acceleration is increased by 10%

$$\tan \theta = \frac{0.4}{2} \times 1.1 = \frac{0.44}{2}$$



Water remaining in the tank at this stage

$$= 1.56 \times 3 \times 4$$

Initial volume of water in tank = 1.6 × 3 × 4

Volume of spilling of water = 0.04 × 3 × 4

$$= 0.48 \text{ m}^3$$

4. In a laminar flow between two fixed plates held parallel to each other at a distance  $d$ , the shear stress is:

1. Maximum at plane  $\frac{d}{2}$  away from each plate and zero at the plate boundaries.

2. Zero throughout the passage.  
3. Maximum at the plate boundaries and zero

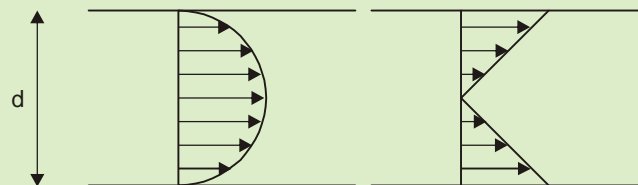
at a plane  $\frac{d}{2}$  away from each plate.

Which of the above statements is/are correct?

- (a) 1 only                      (b) 3 only  
(c) 2 only                      (d) 1, 2 and 3

**Ans. (b)**

**Sol.**



Velocity distribution in laminar flow

shear stress distribution in laminar flow

Hence statement 3 is correct

5. While conducting the flow measurement using a triangular notch, an error of +2% in head over the notch is observed. The percentage error in the computed discharge would be

- (a) +7%                      (b) -3%  
(c) +5%                      (d) -4%

**Ans. (c)**

**Sol.** For flow measurement using triangular notch

$$\text{discharge, } Q \propto H^{5/2}$$

$$\text{Hence, } \frac{dQ}{Q} = \frac{5}{2} \frac{dH}{H}$$

$$\% \text{ error in discharge} = \frac{5}{2} \times (+2\%) = +5\%$$

6. An orifice is located in the side of a tank with its centre 10 cm above the base of the tank. The constant water level is 1.0 m above the centre of orifice. The coefficient of velocity is

## OFFICE

F-126, Katwaria Sarai, N.D-16. Ph : 011-41013406, 9711853908 , 8010009955

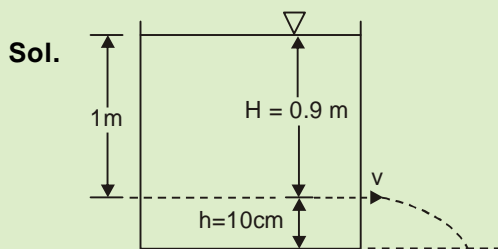
Email : ies\_master@yahoo.co.in, http://www.iesmaster.org

**SCROLL DOWN**

0.98. On the issuing jet, the horizontal distance from the vena-contracta to where the jet is 10 cm below vena-contracta is

- (a) 1.62m                      (b) 1.00m  
(c) 0.62m                      (d) 0.32m

**Ans. (c)**



$$\text{Velocity of jet} = C_v \sqrt{2gH}$$

$$h = \frac{1}{2}gt^2$$

$$t = \sqrt{\frac{2h}{g}}$$

horizontal distance  $x = ut$

$$= C_v \sqrt{2gH} \times \sqrt{\frac{2h}{g}}$$

$$= C_v \sqrt{4Hh}$$

$$= 0.98 \sqrt{4 \times 1 \times 0.1}$$

$$x = 0.62 \text{ m}$$

7. The velocity of water at the outer edge of a 60cm diameter whirlpool, where the water level is horizontal is 2.5 m/s. The velocity of water at a level where the diameter of the whirlpool is 15 cm, is

- (a) 1 m/s  
(b) 5 m/s

- (c) 8 m/s  
(d) 10 m/s

**Ans. (d)**

**Sol.** Whirlpool is an example of free vortex formation. Hence

$$V = \frac{C}{r} \text{ i.e. } Vr = \text{Constant}$$

$$V_1 r_1 = V_2 r_2$$

$$V_2 = \frac{V_1 r_1}{r_2} = \frac{60 \times 2.5}{15}$$

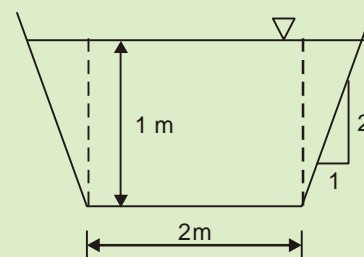
$$V_2 = 10 \text{ m/sec.}$$

8. In a trapezoidal channel with bed width of 2m, and side slopes of 2V on 1H, critical flow occurs at a depth of 1m. What will be the quantity of flow and the flow velocity? Take  $g$  as  $10\text{m/s}^2$ .

- (a)  $7.22 \text{ m}^3/\text{s}$  and  $3.10 \text{ m/s}$   
(b)  $6.82 \text{ m}^3/\text{s}$  and  $2.89 \text{ m/s}$   
(c)  $7.22 \text{ m}^3/\text{s}$  and  $2.89 \text{ m/s}$   
(d)  $6.82 \text{ m}^3/\text{s}$  and  $3.10 \text{ m/s}$

**Ans. (c)**

**Sol.**



$$B = 2 \text{ m}$$

$$\text{Depth of } y_c = 1 \text{ m}$$

$$\text{Area, } A = \frac{1}{2} \times (B + B + y) \times y$$

$$= \frac{1}{2} \times (2 + 2 + 1) \times 1$$

## OFFICE

F-126, Katwaria Sarai, N.D-16. Ph : 011-41013406, 9711853908 , 8010009955

Email : [ies\\_master@yahoo.co.in](mailto:ies_master@yahoo.co.in), <http://www.iesmaster.org>

**SCROLL DOWN**

$$= 2.5\text{m}^2$$

Top width,  $T = 3\text{ m}$

For critical flow  $F_r = 1$

$$\frac{V}{\sqrt{gA/T}} = 1 \Rightarrow V = \sqrt{9.81 \times \frac{2.5}{3}}$$

Velocity,  $V = 2.86\text{ m/sec.}$

Discharge,  $Q = VA = 2.86 \times 2.5$

$$Q = 7.15\text{ m}^3/\text{s}$$

Hence Answer is (c)

9. A 7.5 m wide rectangular channel conveys 12  $\text{m}^3/\text{s}$  of water with a velocity of 1.5 m/s. The specific energy head of the flow is

- (a) 1.18m                      (b) 1.78m  
(c) 2.18m                      (d) 2.78m

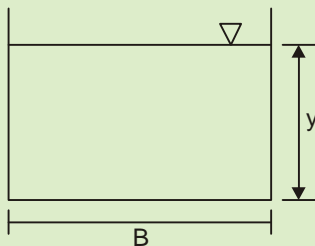
Ans. (a)

Sol.

$$Q = 12\text{ m}^3/\text{s}$$

$$B = 7.5\text{ m}$$

$$V = 1.5\text{ m/s}$$



$$\text{Area, } A = \frac{Q}{V} = \frac{12}{1.5} = 8\text{m}^2$$

$$By = 8\text{m}^2$$

$$y = \frac{8}{7.5} = 1.06\text{m}$$

$$\text{Specific energy} = y + \frac{U^2}{2g}$$

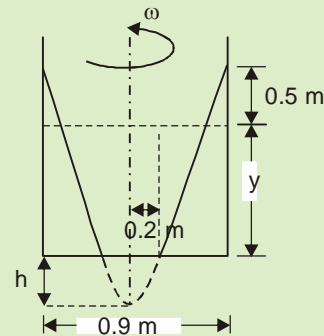
$$= 1.06 + \frac{(1.5)^2}{19.62}$$

$$= 1.18\text{ m}$$

10. A cylindrical vessel with closed bottom and open top is 0.9 m in diameter. What is the rotational speed about its vertical axis (with closed bottom below and open top above) when the contained incompressible fluid will rise 0.5m at the inner circumference of the vessel and a space of 0.4m diameter at the bottom will have no fluid thereon? Take  $g = 10\text{ m/s}^2$ .

- (a) 650 rpm                      (b) 600 rpm  
(c) 580 rpm                      (d) 470 rpm

Ans. (\*)



$$\frac{\omega^2 (0.2)^2}{2g} = h$$

$$\frac{\omega^2 (0.45)^2}{2g} = h + y + 0.5$$

$$\pi(0.45)^2 \times y = (y + 0.5) \times \pi(0.45)^2$$

$$\left[ \frac{\pi(0.45)^2 \times (h + y + 0.5)}{2} - \frac{\pi(0.2)^2 \times h}{2} \right]$$

$$\pi(0.45)^2 \times 0.5 = \frac{\pi}{2} (0.45)^2 [h + y + 0.5] - \frac{\pi(0.2)^2 \times h}{2}$$

## OFFICE

F-126, Katwaria Sarai, N.D-16. Ph : 011-41013406, 9711853908 , 8010009955

Email : ies\_master@yahoo.co.in, http://www.iesmaster.org

**SCROLL DOWN**



$$\frac{\pi(0.45)^2 \times 0.5}{2} = \frac{\pi}{2} (0.45)^2 (h+y) - \frac{\pi(0.2)^2 h}{2}$$

$$0.5 = h + y - \left(\frac{0.2}{0.45}\right)^2 h$$

$$\Rightarrow h + y = 0.5 + \frac{16}{81}h$$

$$\Rightarrow \frac{\omega^2(0.2)^2}{2g} = h$$

$$\frac{\omega^2(0.45)^2}{2g} = 0.5 + \frac{16}{81}h + 0.5$$

$$\frac{h(0.45)^2}{(0.2)^2} = 1 + \frac{16h}{81}$$

$$\frac{81h}{16} - \frac{16h}{81} = 1$$

$$\Rightarrow h = 0.2056 \text{ m}$$

$$\Rightarrow \omega = \sqrt{\frac{2 \times 10 \times 0.2056}{(0.2)^2}}$$

$$\omega = 10.139 \text{ rad/sec}$$

$$N = \frac{60 \times 10.139}{2\pi} = 96 \text{ rpm}$$

11. The sequent depth ratio in a hydraulic jump formed in a rectangular horizontal channel is 10. The Froude number of the supercritical flow is

- (a) 12.2 (b) 10.4  
(c) 7.42 (d) 4.21

Ans. (c)

Sol. 
$$\frac{y_2}{y_1} = 10 = \frac{1}{2} \left[ \sqrt{1 + 8F_1^2} - 1 \right]$$

Froude no. of super critical flow,

$$F_1 = \sqrt{\frac{21^2 - 1}{8}}$$

$$\boxed{F_1 = 7.416}$$

12. A fluid flow is described by a velocity field  $\vec{U} = 4x^2\hat{i} - 5x^2y\hat{j} + 1\hat{k}$ .

What is the absolute velocity (in magnitude) at the point (2,2,1)?

- (a)  $\sqrt{1802}$  (b)  $\sqrt{1828}$   
(c)  $\sqrt{1840}$  (d)  $\sqrt{1857}$

Ans. (d)

Sol. 
$$\vec{u} = 4x^2\hat{i} - 5x^2y\hat{j} + 1\hat{k}$$

At (2, 2, 1)

$$\vec{u} = 4 \times 2^2\hat{i} - 5 \times 2^2 \times 2\hat{j} + 1\hat{k}$$

$$\vec{u} = 16\hat{i} - 40\hat{j} + 1\hat{k}$$

Absolute velocity,  $|\vec{u}| = \sqrt{16^2 + 40^2 + 1}$

$$|\vec{u}| = \sqrt{1857} \text{ m/s}$$

13. A partially open sluice gate discharges water at 6 m/s with a depth of 40 cm in a rectangular horizontal channel of width 5 m. What would be the post-jump depth of flow on the downstream of the gate by taking  $g$  as 10 m/s<sup>2</sup>?

- (a) 1.51 m (b) 1.70 m  
(c) 1.85 m (d) 1.95 m

Ans. (a)

Sol. 
$$y_1 = 0.4 \text{ m}$$
  
$$v_1 = 6 \text{ m/s}$$
  
$$B = 5 \text{ m}$$

$$\text{Froude No. } F_{r_1} = \frac{V_1}{\sqrt{gy_1}} = \frac{6}{\sqrt{10 \times 0.4}} = 3.0$$

$$\frac{y_2}{y_1} = \frac{1}{2} \left[ \sqrt{1 + 8F_{r_1}^2} - 1 \right]$$

$$\frac{y_2}{0.4} = \frac{1}{2} \left[ \sqrt{1 + 8 \times 3^2} - 1 \right] = 3.77$$

Post jump depth  $y_2 = 1.508 \text{ m}$

OFFICE

F-126, Katwaria Sarai, N.D-16. Ph : 011-41013406, 9711853908, 8010009955

Email : ies\_master@yahoo.co.in, http://www.iesmaster.org

SCROLL DOWN



14. What is the maximum power available at the downstream end of a pipeline 3 km long, 20 cm in diameter, if water enters at the upstream end at a pressure of 720 m of water, with the taking pipe friction coefficient as 0.03 and  $g$  as  $10\text{m/s}^2$ ?

- (a) 770 mhp                      (b) 740 mhp  
(c) 700 mhp                      (d) 660 mhp

**Ans. (d)**

**Sol.** In question, instead of friction coefficient it should be friction factor = 0.03

In case of max. power transmission through pipe, head lost in friction =  $1/3^{\text{rd}}$  of total available head.

$$\therefore h_f = \frac{H}{3} = \frac{720}{3} = 240 \text{ m}$$

$$h_f = \frac{fLQ^2}{12.1D^5}$$
$$= \frac{0.03 \times 3000 \times Q^2}{12.1 \times (0.2)^5}$$

$$240 = 23243.8Q^2$$

$$\Rightarrow Q = 0.1016 \text{ m}^3/\text{s}$$

$$\text{Net available head} = H - h_f = 720 - 240 = 480\text{m}$$

$$P = \rho QgH$$
$$= 1000 \times 0.1016 \times 10 \times 480$$
$$= 487.68 \text{ kW}$$

In hp

$$P = \frac{487.68 \times 10^3}{735} = 663.5 \text{ hp}$$
$$= 663.5 \times 1.0138$$
$$= 672.65 \text{ metric hp}$$

15. In the design of pipeline the usual practice is to assume that due to aging of pipelines:

1. The effective roughness increases linearly with time
2. The friction factor increases linearly with time
3. The flow through the pipe becomes linearly lesser with time.

Which of the above statements is/are correct?

- (a) 1,2 and 3                      (b) 3 only  
(c) 2 only                          (d) 1 only

**Ans. (d)**

**Sol.** Effective toughness increases linearly with time statement 2 & 3 are incorrect.

16. Consider the following statements:

1. In flow through hydrodynamically smooth pipes, the friction factor  $f$  is always a constant.
2. In flow through hydrodynamically smooth pipes, the friction factor  $f$  is always a function of the flow Reynolds number.
3. In a fully developed rough turbulent pipe flow, the friction factor  $f$  is a function of relative roughness only.
4. In a fully developed rough turbulent pipe flow, the friction factor  $f$  is a function of the flow Reynolds number and relative roughness.

Which of the above statements are correct?

- (a) 1 and 3                          (b) 2 and 3  
(c) 2 and 4                          (d) 1 and 4

**Ans. (b)**

**Sol.** Statement 2 & 3 are correct.

17. Two identical centrifugal pumps are connected in parallel to a common delivery pipe of a system. The pump curve of each of the pumps is represented by  $H = 20 - 60Q^2$  where  $H$  is manometric head of the pump and  $Q$  is the discharge of the pump. The head loss equation when two such fully-similar pumps jointly deliver the same discharge  $Q$  will be

## OFFICE

F-126, Katwaria Sarai, N.D-16. Ph : 011-41013406, 9711853908 , 8010009955

Email : [ies\\_master@yahoo.co.in](mailto:ies_master@yahoo.co.in), <http://www.iesmaster.org>

**SCROLL DOWN**

- (a)  $H = 40 - 15Q^2$       (b)  $H = 20 - 60Q^2$   
 (c)  $H = 40 - 60Q^2$       (d)  $H = 20 - 15Q^2$

**Ans. (d)**

**Sol.** Given that  $H = 20 - 60Q^2$

When two pumps (joined in parallel) required to deliver discharge  $Q$  each pump will be delivering  $Q/2$  discharge. Hence Head loss equation

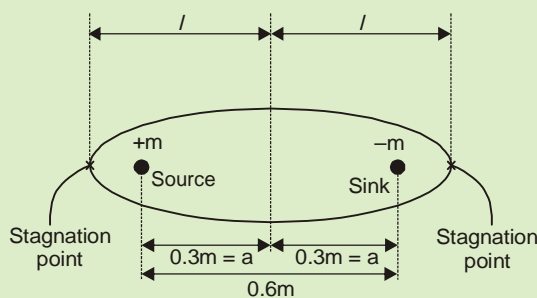
$$H = 20 - 60 \times \left(\frac{Q}{2}\right)^2$$

$$H = 20 - 15Q^2$$

- 18.** A line source of strength  $15\pi \text{ m/s}$  is situated within a uniform stream flowing at  $-12 \text{ m/s}$  (i.e., right to left). At a distance of  $0.6 \text{ m}$  downstream from the source is an equal sink. How far will the stagnation points be from the nearest source/sink?
- (a)  $0.38 \text{ m}$                       (b)  $0.46 \text{ m}$   
 (c)  $0.52 \text{ m}$                       (d)  $0.58 \text{ m}$

**Ans. (a)**

**Sol.**



$$l = \sqrt{\frac{ma}{\pi U} + a^2}$$

$$m = 15\pi \text{ m/s}$$

$$a = \frac{0.6 \text{ m}}{2} = 0.3 \text{ m}$$

$$U = 12 \text{ m/s}$$

$$\Rightarrow l = \sqrt{\frac{15\pi \times 0.3}{\pi \times 12} + (0.3)^2} = 0.682 \text{ m}$$

Distance between source/sink and stagnation point =  $l - a = 0.682 - 0.3 = 0.382 \text{ m}$ .

- 19.** At the point of operation with maximum efficiency, a turbine indicated unit power of 12 units and unit speed of 98 units and operates with  $3300 \text{ kgf/s}$  of flow. What are the speed in rpm and the specific speed of the machine respectively when its design head is  $8.5 \text{ m}$ ?
- (a)  $285 \text{ rpm}$  and  $339$       (b)  $270 \text{ rpm}$  and  $360$   
 (c)  $285 \text{ rpm}$  and  $360$       (d)  $270 \text{ rpm}$  and  $339$

**Ans. (a)**

**Sol.** Given that

$$\text{Unit speed} = N_u = 98$$

$$\text{Unit power } P_u = 12$$

$$\text{Design Head, } H = 8.5 \text{ m}$$

Unit speed is defined as speed of turbine working under unit head

$$\text{Hence } N = N_u \sqrt{H}$$

$$\text{Speed } N = 98 \sqrt{8.5} = 285.7 \text{ rpm}$$

$$\text{Similarly } P = P_u (H)^{3/2}$$

$$P = 12(8.5)^{3/2}$$

$$P = 297.38 \text{ KW}$$

$$\text{Hence, Specific Speed } N_s = \frac{N\sqrt{P}}{H^{5/4}}$$

$$= \frac{285.7 \times \sqrt{297.38}}{(8.5)^{5/4}}$$

$$N_s = 339.46 \text{ rpm}$$

- 20.** A hydraulic turbine develops  $8000 \text{ kW}$  when running at  $300 \text{ rpm}$  under a head of  $45 \text{ m}$ . the speed of the same turbine under a head of  $60 \text{ m}$  is
- (a)  $224.4 \text{ rpm}$                       (b)  $346.4 \text{ rpm}$   
 (c)  $424.8 \text{ rpm}$                       (d)  $485.8 \text{ rpm}$

## OFFICE

F-126, Katwaria Sarai, N.D-16. Ph : 011-41013406, 9711853908 , 8010009955

Email : ies\_master@yahoo.co.in, http://www.iesmaster.org

**SCROLL DOWN**





**Ans. (c)**

**Sol.** Power  $P = 8000 \text{ KW}$

Speed  $N = 300 \text{ rpm}$

Head  $H = 45 \text{ m}$

$$\text{Specific Speed, } N_s = \frac{N\sqrt{P}}{H^{5/4}}$$

i.e. for same power

$$N \propto H^{5/4}$$

$$N_2 = N_1 \left( \frac{H_2}{H_1} \right)^{5/4}$$

$$= 300 \times \left( \frac{60}{45} \right)^{5/4}$$

$$N_2 = 429.82 \text{ rpm}$$

**21.** In a single-acting reciprocating pump, the acceleration head at the beginning of the suction stroke is 3.5m. If the pump is 1.5m below the water level in the supply reservoir, the pressure head at the cylinder reservoir, the pressure head at the cylinder at that instant, considering the atmospheric pressure as 10.0m is

- (a) 2 m (abs)                      (b) 4 m (abs)  
 (c) 8 m (abs)                      (d) 16 m (abs)

**Ans. (c)**

**Sol.** Available head at the entrance of cylinder would be  $10 + 1.5 = 11.5 \text{ m}$ .

Suction head created by pump =  $-3.5\text{m}$

Hence, pressure head at the cylinder

$$= 11.5 - 3.5$$

$$= 8 \text{ m (abs)}$$

**22.** A solid cylinder of circular section of diameter  $d$  is of material with specific gravity  $S_s$ . This floats in a liquid of specific gravity  $S_l$ . What is

the maximum length of the cylinder if equilibrium is to be stable with the cylinder axis vertical?

(a)  $\frac{dS_s}{2\sqrt{S_s(S_l - S_s)}}$

(b)  $\frac{dS_l}{\sqrt{8S_s(S_l - S_s)}}$

(c)  $\frac{dS_l}{\sqrt{2S_s(S_l - S_s)}}$

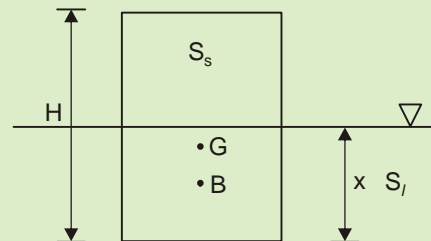
(d)  $\frac{d}{\sqrt{8(S_l - S_s)}}$

**Ans. (b)**

**Sol.** Let height at cylinder be  $H$ .

Sp. gravity of cylinder =  $S_s$

Sp. gravity of liquid =  $S_l$



$$\text{Now, } AH\gamma_w S_s = Ax\gamma_w S_l$$

$$x = \frac{HS_s}{S_l}$$

Hence, centre of buoyancy will be at  $x/2$  from bottom of cylinder.

$$BG = \frac{H}{2} - \frac{x}{2}$$

$$BG = \frac{H}{2} \left( 1 - \frac{S_s}{S_l} \right)$$

Let  $M$  be the meta centre

## OFFICE

F-126, Katwaria Sarai, N.D-16. Ph : 011-41013406, 9711853908 , 8010009955

Email : ies\_master@yahoo.co.in, http://www.iesmaster.org

**SCROLL DOWN**

$$BM = \frac{I}{V} = \frac{\left(\frac{\pi D^4}{64}\right)}{\frac{\pi D^2}{4} \times \frac{S_s H}{S_l}} = \frac{D^2}{16} \frac{S_s}{S_l} H$$

For stable equilibrium

$$BM > BG$$

$$\frac{D^2}{16} \frac{S_s}{S_l} H > \frac{H}{2} \left(1 - \frac{S_s}{S_l}\right)$$

$$H^2 < \frac{D^2}{8} \frac{S_s}{S_l} \left(1 - \frac{S_s}{S_l}\right)$$

$$H < \frac{DS_l}{\sqrt{8S_s(S_l - S_s)}}$$

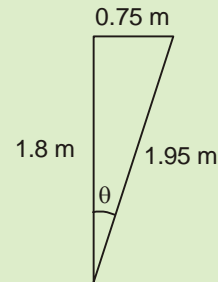
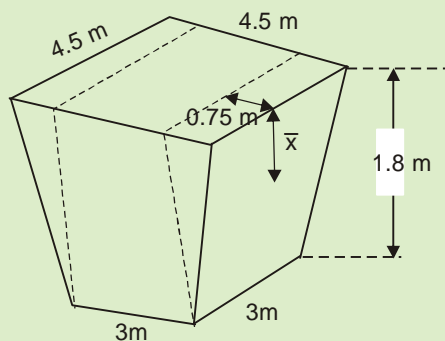
Maximum height of cylinder =  $\frac{DS_l}{\sqrt{8S_s(S_l - S_s)}}$

23. A tank is 1.8m deep and square length of 4.5m at the top and square length of 3m at the bottom. The four sides are plane and each has the same trapezoidal shape. The tank is completely full of oil weighing 936kg/m<sup>3</sup>. What is the resultant pressure on each side?

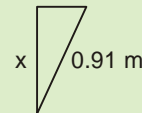
- (a) 5750 kgf                      (b) 5500 kgf  
(c) 5250 kgf                      (d) 5140 kgf

Ans. (a)

Sol.



$$\bar{x} = \frac{2 \times 3 + 4.5}{7.5} \times \frac{1.95}{3} = 0.91 \text{ m}$$



$$\frac{x}{0.91} = \frac{1.8}{1.95}$$

$$\Rightarrow x = 0.84 \text{ m}$$

pressure at C.G × Area = pressure force

$$\begin{aligned} &= \gamma x \times \frac{3+4.5}{2} \times 1.95 \\ &= 9.81 \times 936 \times 0.84 \times \frac{7.5}{2} \times 1.95 \\ &= 56401.4178 \text{ N} \\ &= 5749.38 \text{ kgf} \end{aligned}$$

24. Over a basin of area 333 km<sup>2</sup>, there was a storm for 6 h with a uniform intensity of 2 cm/h. The observed runoff was 20 × 10<sup>6</sup> m<sup>3</sup>. the average rate of infiltration for the basin was

- (a) 5 mm/h                      (b) 10 mm/h  
(c) 20 mm/h                      (d) 40 mm/h

Ans. (b)

Sol. Area of basin = 333 km<sup>2</sup>

Intensity  $i = 2 \text{ cm/hr}$

duration = 6 hr

Runoff = 20 × 10<sup>6</sup> m<sup>3</sup>

## OFFICE

F-126, Katwaria Sarai, N.D-16. Ph : 011-41013406, 9711853908 , 8010009955

Email : ies\_master@yahoo.co.in, http://www.iesmaster.org

**SCROLL DOWN**



$$\begin{aligned} \text{Average rate of infiltration} &= \frac{Ait - R}{At} \\ &= \frac{333 \times 10^6 \times 0.02 \times 6 - 20 \times 10^6}{333 \times 10^6 \times 6} \\ &= 10 \text{ mm/hr} \end{aligned}$$

25. International Traffic Intelligent Survey Data are related with

- (a) Origin and destination studies
- (b) Speed and delay studies
- (c) Classified traffic volume studies
- (d) Accident profiling studies

Ans. (b)

26. A peak flow of a flood hydrograph due to a six-hour storm is  $470 \text{ m}^3/\text{s}$ . The corresponding average depth of rainfall is 8 cm. Assume an infiltration loss of 0.25 cm/hr and a constant base flow of  $15 \text{ m}^3/\text{s}$ . What is the peak discharge of 6 hour unit hydrograph for this catchment?

- (a)  $60 \text{ m}^3/\text{s}$
- (b)  $70 \text{ m}^3/\text{s}$
- (c)  $80 \text{ m}^3/\text{s}$
- (d)  $90 \text{ m}^3/\text{s}$

Ans. (b)

Sol. Given,

$$\begin{aligned} Q_f &= 470 \text{ m}^3/\text{s} \\ d &= 8 \text{ cm } i = 0.25 \text{ cm/hr, } Q_b = 15 \text{ m}^3/\text{s} \\ d_e &= d - i \times t \\ (\text{d}_e &= \text{effective depth of rainfall}) \\ &= 8 - 0.25 \times 6 \\ &= 6.5 \text{ cm} \\ Q_d &= Q_f - Q_b \\ &= 470 - 15 \\ &= 455 \end{aligned}$$

$$\begin{aligned} Q_p \text{ of 6hr unit hydrograph} &= \frac{Q_d}{d_e} = \frac{455}{6.5} \\ &= 70 \text{ m}^3/\text{s} \end{aligned}$$

27. A new reservoir has a capacity of  $12 \text{ Mm}^3$  and its catchment area is  $400 \text{ km}^2$ . The annual sediment yield from this catchment is  $0.1 \text{ ha.m}/\text{km}^2$  and the trap efficiency can be assumed constant at 90%. The number of years it takes for the reservoir to lose 50% of its initial capacity is, nearly

- (a) 177 years
- (b) 77 years
- (c) 17 years
- (d) 7 years

Ans. (c)

Sol. Capacity of reservoir =  $12 \text{ Mm}^3$

$$\text{Catchment area} = 400 \text{ km}^2$$

$$\text{Annual sediment yield} = 0.1 \text{ ha.m}/\text{km}^2$$

$$\text{Total sediment yield in a layer}$$

$$= 400 \times 0.1 \times 0.9$$

$$= 36 \text{ ha.m}$$

$$\begin{aligned} 50\% \text{ of initial capacity} &= 12 \text{ Mm}^3 \times 0.5 \\ &= 6 \times 10^6 \text{ m}^3 \end{aligned}$$

Years required to lose 50% of initial capacity

$$= \frac{6 \times 10^6}{36 \times 10^4}$$

$$= 16.67 \text{ year}$$

$$\approx 17 \text{ years}$$

28. Cavitation is likely to occur if

1. Pressure becomes very high
2. Temperature becomes low
3. Pressure at the specific points falls below vapour pressure
4. Energy is released with the onset of a high intensity wave due to noise and vibration of the machine.

## OFFICE

F-126, Katwaria Sarai, N.D-16. Ph : 011-41013406, 9711853908 , 8010009955

Email : ies\_master@yahoo.co.in, <http://www.iesmaster.org>

**SCROLL DOWN**



Which of the above statements are correct?

- (a) 1 and 3                      (b) 2 and 3  
(c) 3 and 4                      (d) 2 and 4

**Ans. (c)**

**Sol.** Cavitation occurs when at a point fluid temperature gets too high or the fluid pressure becomes too low.

In cavitation, energy is released with the start of a high intensity wave due to noise and vibration of machine.

**29.** Which of the following statements are correct as regards aquifer characteristics?

1. The storage coefficient is the volume of water released from storage from the entire aquifer due to unit depression of piezometric head.
2. The storage coefficient is the same as the specific yield for water table aquifer.
3. Both the aquifer constants, viz. storage coefficient S and Transmissivity T are dimensionless numbers.

- (a) 1 only                      (b) 2 only  
(c) 3 only                      (d) 1, 2 and 3

**Ans. (b)**

**Sol.**

(i) Storage coefficient or storativity is the volume of water released from the storage per unit decline in piezometric head, per unit area of aquifer.

(ii) Water table aquifer  $\Rightarrow$  unconfined aquifer. For unconfined aquifer, storage coefficient is approximately equal to the specific yield.

(iii) Storage coefficient is a dimensionless number

Transmissivity = kd

$$\text{Unit} = \frac{\text{m}}{\text{day}} \times \text{m} = \text{m}^2/\text{day}$$

So transmissivity is not a dimensionless number.

**30.** The important parameters describing the performance of a hydraulic machine are P the power input, H the head produced across the machine and the efficiency,  $\eta$ . For a given geometrical design of the machine, the performance is characterized by the variables: H - the head increase across the machine,  $\rho$  - the fluid density,  $\omega$  - the angular velocity of the rotor, D - the diameter of the rotor,  $\mu$  - the fluid viscosity and Q - the flow rate; and both P and  $\eta$  are expressed through these variables. How many non-dimensional parameters are involved herein? Gravitational acceleration g has also to be considered necessarily?

- (a) 7                                      (b) 6  
(c) 5                                      (d) 4

**Ans. (d)**

**Sol.** P and  $\eta$  can be expressed in terms of 7 parameters viz H,  $\rho$ ,  $\omega$ , D,  $\mu$ , Q, g.

$\therefore$  No. of non dimensional parameter = 7 - 3 = 4

**31.** What are the values of coefficients a and c if velocity distribution in a laminar boundary layer on a flat is:

$$f(n) \frac{u}{U_0} = a + bn + cn^2 + dn^3$$

Where,  $n = \frac{y}{\delta}$

- (a)  $\frac{1}{2}$  and 1                      (b) 0 and 1  
(c)  $-\frac{1}{2}$  and 0                      (d) 0 and 0

**Ans. (d)**

**Sol.**  $\frac{u}{U_0} = a + bn + cn^2 + dn^3,$

## OFFICE

F-126, Katwaria Sarai, N.D-16. Ph : 011-41013406, 9711853908 , 8010009955

Email : [ies\\_master@yahoo.co.in](mailto:ies_master@yahoo.co.in), <http://www.iesmaster.org>

**SCROLL DOWN**



$$n = \frac{y}{\delta}$$

At  $y = 0, u = 0$

$\therefore 0 = a + 0 + 0 + 0$

$\Rightarrow a = 0$

At  $y = \delta, u = U_0$

$\Rightarrow \frac{u_0}{u_0} = b + c + d = 1$

And at  $y = \delta, \frac{du}{dy} = 0$

$$\frac{du}{dy} = b + 2cn + 3dn^2$$
$$0 = b + 2c + 3d$$

at  $y = 0, \frac{d^2u}{dy^2} = 0$

$\therefore 0 = 2c$

$\Rightarrow c = 0$

**32.** The conditions to be satisfied for a channel in 'Regime' as per Lacey are

1. Constant discharge
2. Silt grade and silt concentration are constant
3. The channel is flowing in unlimited incoherent alluvium of the same alluvial character as that transported.

Which of the above statements are correct?

- (a) 1 and 2 only      (b) 1, 2 and 3  
(c) 1 and 3 only      (d) 2 and 3 only

**Ans. (b)**

**Sol.** All three are the essential characteristics for the true regime condition according to Lacey. According to Lacey's theory for True Regime condition

1. Discharge is constant.
2. Flow is uniform
3. Silt charge is constant, i.e. amount of silt is constant.

4. Silt grade is constant, i.e. type and size of silt is always same.
5. Channel is flowing through incoherent alluvium, and it is of same grade which is transported.

**33.** Consider the following statements related to uplift pressure in gravity dams:

1. A drainage gallery reduces the uplift pressure at all levels below the gallery.
2. A drainage gallery below upstream water level reduces the uplift pressure at all levels below the upstream water level.
3. A grout curtain near the heel reduces seepage and uplift pressure everywhere on the gravity dam whatever the upstream water level.

Which of the above statements are correct?

- (a) 2 and 3 only      (b) 1 and 2 only  
(c) 1 and 3 only      (d) 1, 2 and 3

**Ans. (a)**

**34.** A barrage on a major river in the Gangetic plains has been designed for a flood discharge 7000 m<sup>3</sup>/s. It has been provided with a waterway of 360 m length. The looseness factor of this barrage is

- (a) 1.7      (b) 1.1  
(c) 0.7      (d) 0.1

**Ans. (\*)**

**Sol.** Looseness factor =  $\frac{\text{Actual width}}{\text{Regime width}}$

Actual width = 360 m (Given)

According to Lacey's theory

Regime width

$$\Rightarrow W = 4.75\sqrt{Q}$$

$$W = 4.75\sqrt{7000}$$

$$W = 397.41$$

## OFFICE

F-126, Katwaria Sarai, N.D-16. Ph : 011-41013406, 9711853908 , 8010009955

Email : ies\_master@yahoo.co.in, http://www.iesmaster.org

**SCROLL DOWN**



$$\text{Looseness factor} = \frac{360}{397.41} = 0.90$$

35. A 20 m long horizontal concrete floor under a barrage on a permeable foundation retains a 5m head of water and has a 5 m deep downstream end pile. The exit gradient is

- (a) 1 in 4                      (b) 1 in 5  
(c) 1 in 6                      (d) 1 in 8

Ans. (b)

Sol.  $G_E = \frac{H}{d} \cdot \frac{1}{\pi\sqrt{\lambda}}$

$$\lambda = \frac{1 + \sqrt{1 + \alpha^2}}{2}$$

$$\alpha = \frac{b}{d} = \frac{20}{5} = 4$$

$$\lambda = \frac{1 + \sqrt{1 + 4^2}}{2} = 2.56$$

$$G_E = \frac{5}{5} \cdot \frac{1}{3.14 \times \sqrt{2.56}}$$

$$G_E = \frac{1}{5}$$

36. Electrical conductivity (EC) of water and total dissolved solids (TDS) are related as:

The value of EC will

- (a) Decrease with increase in TDS  
(b) Increase with increase in TDS  
(c) Decrease initially and then increase with increase in TDS  
(d) Increase initially and then decrease with increase in TDS

Ans. (b)

Sol.  $EC \times 640 = TDS$

Hence, value of EC will increase with increase in TDS

37. Consider the following properties of fluorine:

1. It is a member of the halogen family
2. It is a greenish yellow diatomic gas
3. Chlorine, iodine, bromine and Helium are members of the halogen family.
4. Even fireproof of asbestos burns in the ambience of fluorine.

Which of the above are correct?

- (a) 1, 2 and 3 only      (b) 3 and 4 only  
(c) 1, 2 and 4 only      (d) 1, 2, 3 and 4

Ans. (c)

Sol. (i) Fluorine is the lightest halogen and exists as a highly toxic pale yellow diatomic gas.

(ii) Helium is not a member of halogen family

(iii) Even fireproof asbestos burns in the ambience of fluorine

38. The following are certain operating problems of a rapid sand filter:

1. Sand depth should never be depleted by more than 10 cm.
2. Air binding results due to development of negative head and formation of air bubbles in the filter sand.
3. Water softening with lime-soda leads to incrustation of sand.
4. Bumping of filter bed is caused due to negative head.

Which of the above statements are correct?

- (a) 1, 2 and 4 only      (b) 1, 2 and 3 only  
(c) 3 and 4 only      (d) 1, 2, 3 and 4

Ans. (b)

Sol. Sand bed should never be depleted more than 10cm from the original thickness.

Bumping is caused by improper back wash.

## OFFICE

F-126, Katwaria Sarai, N.D-16. Ph : 011-41013406, 9711853908 , 8010009955

Email : [ies\\_master@yahoo.co.in](mailto:ies_master@yahoo.co.in), <http://www.iesmaster.org>

**SCROLL DOWN**



39. Consider the following characteristics of E.Coli bacteria:

1. Gram negative
2. Spore-forming
3. Facultative anaerobic
4. Bacillus

Which of the above are correct?

- (a) 1, 2 and 3 only      (b) 2 and 4 only  
(c) 1, 3 and 4 only      (d) 1, 2, 3 and 4

**Ans. (c)**

**Sol.** E-coli bacteria is a gram negative, non-spore forming, facultatively anaerobic bacteria.

40. How much bleaching powder is needed to chlorinate 5000 l of water whose chlorine demand is 2 mg/l, assuming that the bleaching powder has 25% available chlorine?

- (a) 4 g                      (b) 40 g  
(c) 140 g                  (d) 400 g

**Ans. (b)**

**Sol.** Bleaching power required to chlorinate 5000 l of water

$$= 5000 \times \frac{2 \times 10^{-3}}{0.25} \text{ gm}$$
$$= 40 \text{ gm}$$

41. A water supply distribution system for an averagely-populated township is to be designed for

- (a) Maximum daily demand
- (b) Maximum hourly demand and fire demand
- (c) Average demand
- (d) Maximum daily demand and fire demand or maximum hourly demand, whichever is higher

**Ans. (d)**

**Sol.** A water supply distribution system is designed for Max. of  $\left\{ \begin{array}{l} \text{Max. daily demand + Fire demand} \\ \text{Max. hourly demand} \end{array} \right\}$

42. A combined sewerage system is more appropriate for developed areas where

- (a) Rainfall occurs for a very few days in a year
- (b) Rainfall occurs almost uniformly throughout the year
- (c) Air temperatures are nearly uniform throughout the year
- (d) Air temperatures through the year include extremes during certain runs of days

**Ans. (b)**

**Sol.** A combined sewerage system is more appropriate for developed areas where rainfall occurs almost uniformly throughout the year.

43. The velocity distribution in the boundary layer

is given by  $\frac{u}{U} = \frac{y}{\delta}$ , where u is the velocity at a distance of y from the boundary and  $u = U$  at  $y = \delta$ ,  $\delta$  being boundary layer thickness. Then the value of momentum thickness will be

- (a)  $\frac{\delta}{2}$                       (b)  $\frac{\delta}{4}$   
(c)  $\frac{\delta}{6}$                       (d)  $\frac{\delta}{8}$

**Ans. (c)**

**Sol.** Given  $\frac{u}{U_0} = \frac{y}{\delta}$

$$\text{Momentum Thickness} = \int_0^{\delta} \left( 1 - \frac{u}{U_0} \right) \frac{u}{U_0} dy$$

## OFFICE

F-126, Katwaria Sarai, N.D-16. Ph : 011-41013406, 9711853908 , 8010009955

Email : ies\_master@yahoo.co.in, <http://www.iesmaster.org>

**SCROLL DOWN**



$$\theta = \int_0^{\delta} \left(1 - \frac{y}{\delta}\right) * \frac{y}{\delta} dy$$

$$\theta = \int_0^{\delta} \left(\frac{y}{\delta} - \frac{y^2}{\delta^2}\right) dy$$

$$\theta = \left[ \frac{y^2}{2\delta} - \frac{y^3}{3\delta^2} \right]_0^{\delta}$$

$$\theta = \frac{\delta}{2} - \frac{\delta}{3}$$

$$\theta = \frac{\delta}{6}$$

44. 100 m<sup>3</sup> of sludge holds a moisture content of 95%. If its moisture content changes to 90%, the volume of this sludge will then be

- (a) 40.5m<sup>3</sup>                      (b) 50m<sup>3</sup>  
(c) 75m<sup>3</sup>                        (d) 94.7m<sup>3</sup>

**Ans. (b)**

**Sol.** With the change in moisture content, volume of solids remains same in both case.

Therefore equating the volume of solids in both cases.

$$V_1(1-P_1) = V_2(1-P_2)$$

$$100(1-0.95) = V_2(1-0.9)$$

$$5 = V_2 \times 0.1$$

$$V_2 = 50 \text{ m}^3$$

45. The design overflow rate of a sedimentation tank is chosen considering

- (a) Flow rate through the tank  
(b) Diameter of the particle intended to be removed  
(c) Volume of the sedimentation tank  
(d) Detention time in the tank

**Ans. (b)**

**Sol.** Design overflow rate of sedimentation tank is chosen considering diameter of the particle intended to be removed.

$$V_s = \frac{(G_s - 1)gd^2}{18\mu}$$

$V_s$  = Setting velocity of particle

$d$  = diameter of the particle

46. Consider the following statements in respect of flow equalization in a waste water treatment plant :

1. Biological treatment is enhanced because shock loadings are eliminated or minimized
2. Flow equalization is an attractive option for upgrading the performance of overloaded treatment plants.
3. Inhibiting substances can be diluted and pH can be stabilized
4. Thickening performance of primary sedimentation tanks following grit removal is improved

Which of the above statements are correct?

- (a) 1, 2, 3 and 4              (b) 1, 2 and 3 only  
(c) 1, 2 and 4 only        (d) 3 and 4 only

**Ans. (a)**

**Sol.**

- (i) Flow equalization is a method to overcome problems related to fluctuations in flow rate and pollution load.
- (ii) It helps in lowering the strength of waste water by diluting it with waste water already present in equalization tank.
- (iii) Flow equalization basin is located after screening and grit removal but before primary sedimentation.

## OFFICE

F-126, Katwaria Sarai, N.D-16. Ph : 011-41013406, 9711853908 , 8010009955

Email : [ies\\_master@yahoo.co.in](mailto:ies_master@yahoo.co.in), <http://www.iesmaster.org>

**SCROLL DOWN**





(iv) Thickner/settler and filter performance gets enhanced and their surface area gets reduced.

47. A drain carrying  $5\text{ m}^3/\text{s}$  of wastewater with its BOD of  $100\text{ mg/l}$  joins a stream carrying  $50\text{ m}^3/\text{s}$  flow with its BOD of  $5\text{ mg/l}$ . What will be the value of the BOD of the combined flow after complete mixing?

- (a)  $3.6\text{ mg/l}$
- (b)  $13.6\text{ mg/l}$
- (c)  $33.6\text{ mg/l}$
- (d)  $53.6\text{ mg/l}$

**Ans. (b)**

**Sol.** BOD after complete mixing

$$\begin{aligned} &= \frac{Q_w \text{BOD}_w + Q_s \text{BOD}_s}{Q_w + Q_s} \\ &= \frac{5 \times 100 + 50 \times 5}{5 + 50} \\ &= 13.63\text{ mg/l} \end{aligned}$$

48. Consider the following statements in respect of aerated grit chamber:

1. The grit accumulates at the bottom in advancing spiral-flow aeration tanks, locationally preceded by grit chambers, led to the eventual development of aerated grit chambers.
2. The excessive wear on grit handling equipment is a major factor for the popularity of aerated grit chambers.
3. Aerated grit chambers are designed to provide detention period of 1 minute at maximum rate of flow.
4. Diffusers are located at 0.45 m to 0.6 m above the bottom of the chamber.

Which of the above statements are correct?

- (a) 1, 2 and 3 only
- (b) 3 and 4 only
- (c) 1, 2 and 4 only
- (d) 1, 2, 3 and 4

**Ans. (c)**

- Sol.**
- (i) It is designed for typical detention time of 3 minutes at maximum flow.
  - (ii) Diffusers are located at 0.45 – 0.6m from the bottom
  - (iii) Excessive wear of grit handling equipment and necessity of separate grit washer can be eliminated by using aerated grit chamber.
  - (iv) An aerated grit chamber consists of a standard flow aeration tank provided with air diffusion tubes placed on one side of the tank.

49. The side of a square land was measured as 150 m and is in error by 0.05 m. What is the corresponding error in the computed area of the land.

- (a)  $5\text{ m}^2$
- (b)  $10\text{ m}^2$
- (c)  $15\text{ m}^2$
- (d)  $20\text{ m}^2$

**Ans. (c)**

**Sol.** Area = (side)<sup>2</sup>

$$\begin{aligned} \frac{d(\text{Area})}{d(\text{side})} &= 2 \times \text{side} \\ d(\text{Area}) &= 2 \times \text{side} \times d(\text{side}) \\ d(\text{Area}) &= 2 \times 150 \times 0.05 \\ d(\text{Area}) &= 15\text{ m}^2 \end{aligned}$$

50. Consider the following statements in respect of anaerobic sludge digester:

1. It is less expensive compared to several other methods available.
2. Processing of separable solids impacts the environment to a minimum
3. Quantity of separated solids requiring disposal is minimal
4. Digested sludge is very readily dewaterable.

## OFFICE

F-126, Katwaria Sarai, N.D-16. Ph : 011-41013406, 9711853908 , 8010009955

Email : [ies\\_master@yahoo.co.in](mailto:ies_master@yahoo.co.in), <http://www.iesmaster.org>

**SCROLL DOWN**



Which of the above statements are correct?

- (a) 1, 2, 3 and 4      (b) 1, 2 and 3 only  
(c) 3 and 4 only      (d) 1, 2 and 4 only

**Ans. (a)**

**51.** Consider the following statements as regards a Septic Tank:

1. The size required is large and uneconomical when serving more than roughly 100 persons.
2. It can remove around 90% of BOD and 80% of suspended solids.
3. As compared to the sludge holdings of a plain sedimentation tank, a septic tank can hold about 90% less of sludge volume.
4. Frequent removal of sludge is not required

Which of the above statements are correct?

- (a) 1 and 2      (b) 2 and 3  
(c) 3 and 4      (d) 1 and 4

**Ans. (c)**

**Sol.** (i) Septic tank can be provided when number of user does not exceed 300 persons.

- (ii) Septic tank removes around (25 – 65)% BOD and (40 – 75)% of suspended solids  
Statement 3 and 4 are correct.

**52.** Sewage sickness relates to

- (a) Toxicity of sewage interfering with 'response' to treatment
- (b) Destruction of aquatic flora and fauna due to gross pollution of receiving bodies of water by the sewage
- (c) reduction in the waste purifying capacity of the soil
- (d) Clogging of pores in soil due to excessive application of sewage leading to obstruction

of land aeration thereby leading to septic conditions in the land

**Ans. (d)**

**Sol.** Sewage sickness relates to clogging of pores in soil due to excessive application of sewage loading to obstruction of land aeration thereby leading to septic conditions in the land.

**53.** The waste water of a certain large colony contains  $10^{-5.6}$  mmol/l of  $\text{OH}^-$  ions at  $25^\circ\text{C}$ . The pH of this sample is

- (a) 8.6      (b) 7.9  
(c) 5.4      (d) 4.5

**Ans. (c)**

**Sol.** Concentration of  $\text{OH}^-$  ion =  $10^{-5.6}$  mmol/litre

$$= 10^{-5.6} \times 10^{-3} \text{ mol/litre}$$

$$= 10^{-8.6} \text{ mol/litre}$$

$$\text{pOH} = -\log [\text{OH}^-]$$

$$= -\log 10^{-8.6}$$

$$= 8.6$$

$$\text{pH} = 14 - \text{pOH}$$

$$= 14 - 8.6$$

$$= 5.4$$

**54.** Consider the relevance of the following features for causing photochemical smog:

1. Air stagnation
2. Abundant sunlight
3. High concentration of  $\text{NO}_x$  in atmosphere.
4. High concentration of  $\text{SO}_2$  in atmosphere.

Which of the above statements are correct?

- (a) 1, 2 and 4 only  
(b) 3 and 4 only  
(c) 1, 2 and 3 only  
(d) 1, 2, 3 and 4

**Ans. (c)**

## OFFICE

F-126, Katwaria Sarai, N.D-16. Ph : 011-41013406, 9711853908, 8010009955

Email : [ies\\_master@yahoo.co.in](mailto:ies_master@yahoo.co.in), <http://www.iesmaster.org>

**SCROLL DOWN**



**Sol.** A photochemical smog is a chemical reaction of sunlight, nitrogen oxides and volatile organic compounds in the atmosphere, which leaves airborne particles and ground-level ozone.

**55.** Consider the following statements related to ecology:

- All the physical, chemical and biological factors that a species needs in order to live and reproduce is called ecological niche.
- The boundary zone between two ecosystems is known as ecotone.
- The forests in the Arctics are known as tundra.
- A biome usually has a distinct climate and life forms adapted to that climate. Biome is more extensive and complex than an ecosystem

Which of the above statements are correct?

- (a) 1, 2 and 3 only      (b) 1, 2 and 4 only  
(c) 3 and 4 only      (d) 1, 2, 3 and 4

**Ans. (d)**

**Sol.** All the above statements are correct.

**56.** Consider the following laws of ecology suggested by Barry Commoner:

- Everything is connected to everything else.
- Everything must go somewhere.
- Nature knows best.
- There is no such thing as a free lunch.

Which of the above statements are correct?

- (a) 1, 2 and 3 only      (b) 1, 2 and 4 only  
(c) 3 and 4 only      (d) 1, 2, 3 and 4

**Ans. (d)**

**Sol.** These are four laws of ecology formulated by ecologist Barry commoner.

**57.** For a hydraulically efficient rectangular channel of bed width 5m, the hydraulic radius is

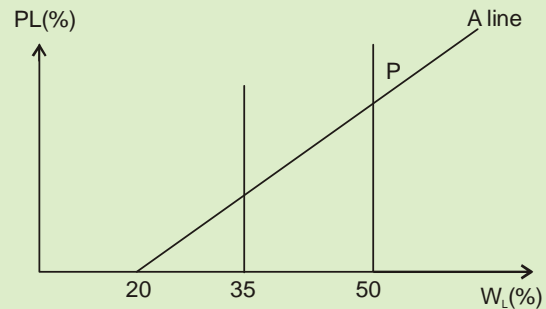
- (a) 0.5m                      (b) 1.25m  
(c) 2.75m                    (d) 4.25m

**Ans. (b)**

**Sol.** For a hydraulically efficient rectangular channel, hydraulic radius =  $\frac{y}{2}$  and  $B = 2y$  for hydraulically efficient channel

$$\therefore R = \frac{B}{2 \times 2} = \frac{B}{4} = \frac{5}{4} = 1.25 \text{ m}$$

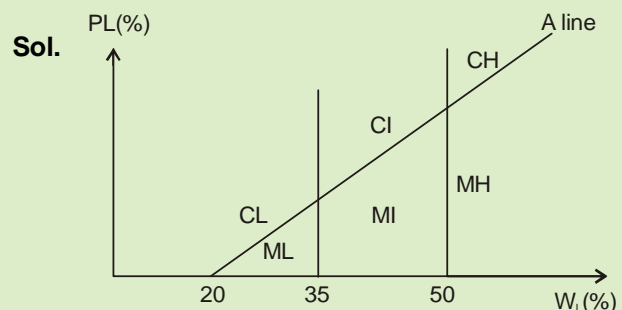
**58.** The standard plasticity chart by casagrande to classify fine-grained soils is shown in the figure.



The area marked P represents.

- (a) Inorganic clays of high plasticity  
(b) Organic clays and highly plastic organic silts  
(c) Organic and inorganic silts and siltclays  
(d) Clays

**Ans. (a)**



$\therefore$  P lies in the area of inorganic clays of high plasticity.

## OFFICE

F-126, Katwaria Sarai, N.D-16. Ph : 011-41013406, 9711853908 , 8010009955

Email : [ies\\_master@yahoo.co.in](mailto:ies_master@yahoo.co.in), <http://www.iesmaster.org>



59. A soil sample has shrinkage limit of 6%, and the specific gravity of the soil grains is 2.6. The porosity of soil at shrinkage limit is

- (a) 7.5% (b) 9.5%  
(c) 13.5% (d) 16.5%

Ans. (c)

Sol.  $\omega_s = 6\%$   $G_s = 2.6$

At shrinkage limit, soil is fully saturated.

Now  $S_e = \omega G_s$

$$1 \times e = 0.06 \times 2.6$$

$$e = 0.156$$

$$n = \frac{e}{1+e} = \frac{0.156}{1+0.156} = 0.135$$

60. What is the dry unit weight of a clay soil when the void ratio of a sample thereof is 0.50, the degree of saturation is 70%, and the specific gravity of the soil grains is 2.7? Take the value of  $\gamma_w$  to be 9.81 kN/m<sup>3</sup>?

- (a) 13.65 kN/m<sup>2</sup> (b) 19.95 kN/m<sup>2</sup>  
(c) 26.65 kN/m<sup>2</sup> (d) 29.95 kN/m<sup>2</sup>

Ans. (\*)

Sol.

$$\gamma_d = \frac{G_s \gamma_w}{1+e}$$
$$= \frac{2.7 \times 9.81}{1+0.5} = 17.658 \text{ kN/m}^3$$
$$\gamma_{\text{bulk}} = \frac{(G_s + S_e) \gamma_w}{1+e}$$
$$= \frac{(2.7 + 0.7 \times 0.5) \times 9.81}{1+0.5}$$
$$= 19.95 \text{ kN/m}^3$$

(In question it should be  $\gamma_{\text{bulk}}$  and not  $\gamma_{\text{dry}}$ )

61. Which technique of stabilization for the sub-base is preferred for a heavy plastic soil?

- (a) cement stabilization  
(b) mechanical stabilization  
(c) lime stabilization  
(d) bitumen stabilization

Ans. (c)

Sol. Lime changes the nature of the adsorbed layer and provides pozzolonic action. Plasticity index of highly plastic soils are reduced by addition as lime with soil. There is an increase in optimum water content and a decrease in the maximum compacted density and the strength and durability of soil increases.

62. A fill having volume of 150000 m<sup>3</sup> is to be constructed at a void ratio of 0.8. The borrow pit solid has a void ratio of 1.4. The volume of soil required to be excavated from the borrow pit will be

- (a) 150000 m<sup>3</sup> (b) 200000 m<sup>3</sup>  
(c) 250000 m<sup>3</sup> (d) 300000 m<sup>3</sup>

Ans. (b)

Sol. Solid volume required fill construction

$$= \frac{150000}{1+0.8} = 83333.33 \text{ m}^3$$

Volume of soil excavated from borrow pit

$$= 83333.33 \times (14)$$

$$= V_d (1+1.4) = 200,000 \text{ m}^3$$

63. A channel designed by Lacey's theory has a mean velocity of 1.1 m/s. The silt factor is 1.1. Then hydraulic mean radius will be

- (a) 1.13 m (b) 2.27 m  
(c) 3.13 m (d) 4.27 m

## OFFICE

F-126, Katwaria Sarai, N.D-16. Ph : 011-41013406, 9711853908, 8010009955

Email : [ies\\_master@yahoo.co.in](mailto:ies_master@yahoo.co.in), <http://www.iesmaster.org>

**SCROLL DOWN**



**Ans. (\*)**

**Sol.**

$$R = \frac{5 v^2}{2 f}$$

$$R = \frac{5}{2} \times \frac{1.1^2}{1.1}$$

$$R = 2.5 \times 1.1$$

$$R = 2.75 \text{ m}$$

$$= \frac{2K \times \frac{t}{2} + K \times t + 2K \times \frac{t}{2}}{\frac{t}{2} + t + \frac{t}{2}}$$

$$= \frac{3Kt}{2t} = 1.5K$$

**64.** Consider the following assumptions as regards field permeability test:

1. The flow is laminar and Darcy's law is valid.
2. The flow is horizontal and uniform at all the points in the vertical section.
3. The velocity of flow is proportional to the 'tangent magnitude' of the hydraulic gradient.

Which of the above assumptions are correct?

- (a) 1 and 2 only      (b) 1 and 3 only  
(c) 1 and 3 only      (d) 1, 2 and 3

**Ans. (d)**

**65.** In a three-layered soil system, the thicknesses of the top and bottom layers each are half the thickness of the middle layer. The coefficients of permeability of the top and bottom layers each are double the coefficient of permeability  $k$  of the middle layer. When horizontal flow occurs, the equivalent coefficient of permeability of the system will be

- (a) 1.5  $k$       (b) 3.0  $k$   
(c) 4.5  $k$       (d) 6.0  $k$

**Ans. (a)**

**Sol.**

$$K_H = \frac{K_1 H_1 + K_2 H_2 + K_3 H_3}{H_1 + H_2 + H_3}$$

**66.** A uniform collapsible sand stratum, 2.5 m thick, has specific gravity of its sand as 2.65, with a natural void ratio of 0.65. The hydraulic head required to cause quick collapsible sand condition is

- (a) 2.50 m      (b) 2.75 m  
(c) 3.25 m      (d) 3.50 m

**Ans. (a)**

**Sol.**

$$i_{Cr} = \frac{G_s - 1}{1 + e} = \frac{1.65}{1.65} = 1$$

$$i_{Cr} = \frac{h}{H}$$

$$h = i_{Cr} \times H$$

$$= 1 \times 2.5$$

$$= 2.5 \text{ m}$$

**67.** The ratio of dry unit weight to unit weight of water represents

- (a) Specific gravity of soil solids  
(b) Specific gravity of soil mass  
(c) Specific gravity of dry soil  
(d) Shrinkage ratio

**Ans. (d)**

**Sol.** Shrinkage ratio is mass specific gravity of the soil in dry state

## OFFICE

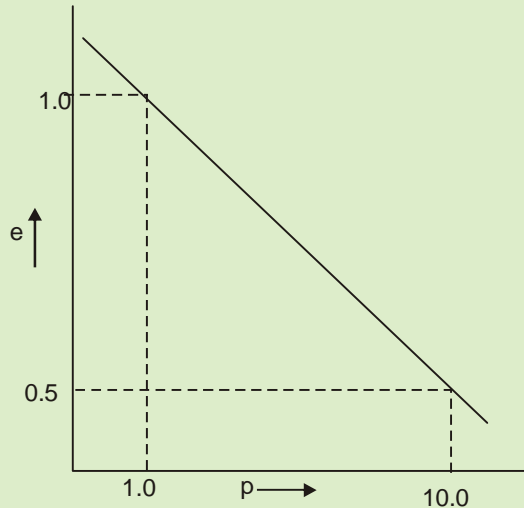
F-126, Katwaria Sarai, N.D-16. Ph : 011-41013406, 9711853908 , 8010009955

Email : ies\_master@yahoo.co.in, http://www.iesmaster.org

**SCROLL DOWN**



68.



The virgin compression curve with axes adopted as per convention in this regard for a clay soil is shown in the figure. The compression index of the soil is

- (a) 0.25                      (b) 0.50  
(c) 1.00                      (d) 1.25

**Ans. (b)**

**Sol.**

$$C_c = \frac{\Delta e}{\log_{10} \left( \frac{\bar{\sigma}_2}{\bar{\sigma}_1} \right)}$$

$$= \frac{1 - 0.5}{\log_{10} \left( \frac{10}{1} \right)} = 0.5$$

69. Proctor's compaction test for the maximum dry density of a certain soil gave the results as : 1.77 gm/cc and OMC 14.44%. The specific gravity of the clay soil grain was 2.66. What was the saturation degree for this soil?

- (a) 44%                      (b) 55%  
(c) 66%                      (d) 77%

**Ans. (d)**

**Sol.**

$$\gamma_d = \frac{G\gamma_w}{1+e}$$

$$1+e = \frac{2.66 \times 1}{1.77}$$

$$e = 0.5028$$

$$S = \frac{wG}{e} = \frac{14.44 \times 2.66}{0.5028}$$

$$= 76.39\%$$

$$\approx 77\%$$

70. A rigid retaining wall of 6m height has a saturated backfill of soft clay soil. What is the critical height when the properties of the clay soil are:

$\gamma_{sat} = 17.56 \text{ kN/m}^3$  and cohesion  $C = 18 \text{ kN/m}^2$ .

- (a) 1.1 m                      (b) 2.1 m  
(c) 3.1 m                      (d) 4.1 m

**Ans. (d)**

**Sol.**

$$H_c = 2z_0 = \frac{4C}{\gamma} = \frac{4 \times 18}{17.56}$$

$$= 4.1 \text{ m}$$

71. The Engineering News Record Formula,

$$Q_a = \frac{Wh}{6(s+0.25)}$$

is used for the case of

1. Drop hammer
2. Single acting hammer
3. Double acting hammer

Which of the above is/are correct?

- (a) 1 only                      (b) 2 only  
(c) 3 only                      (d) 1, 2 and 3

**Ans. (b)**

**Sol.** Empirical factor 'c' taken as 0.25 cm for single-acting hammer.

## OFFICE

F-126, Katwaria Sarai, N.D-16. Ph : 011-41013406, 9711853908 , 8010009955

Email : ies\_master@yahoo.co.in, http://www.iesmaster.org

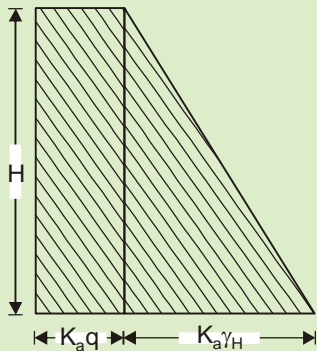
**SCROLL DOWN**

72. In a certain sea shore, the height of a retaining wall with smooth vertical back is 4.4 m. The foundation is over an expansive collapsible soil and has horizontal surace at the level of the top of the wall and carries a udl of 197 kPa. The unit weight and angle of internal friction are  $19 \text{ kN/m}^3$  and  $30^\circ$ , respectively. What is the nearest magnitude of the total active pressure per metre length of this sea shore wall?

- (a) 270 kN/m                      (b) 360 kN/m  
(c) 450 kN/m                      (d) 640 kN/m

Ans. (b)

Sol.



$$P_a = K_a \left[ \frac{1}{2} \times 19 \times 4.4 \times 4.4 + 197 \times 4.4 \right]$$

where,  $K_a = \frac{1 - \sin 30}{1 + \sin 30} = \frac{1}{3}$

Hence,  $P_a = 350.24 \text{ kN/m}$

73. Which of the following statements are rightly associated with the laws of weights in the theory of errors?

1. If an equation is multiplied by its own weight, then the weight of the resulting equation is equal to the reciprocal of the weight of the original equation.

2. The weight of the algebraic sum of two or more quantities is equal to the reciprocal of the sum of the individual weights.
3. If the quantity of a given weight is multiplied with a factor, then the weight of the resulting quantity is obtained by dividing the original weight by the square root of that factor.
4. If the quantity of a given weight is divided by a factor, then the weight of the resulting quantity is obtained by multiplying the original weight by the square of that factor.

- (a) 2 and 3                      (b) 2 and 4  
(c) 1 and 4                      (d) 1 and 3

Ans. (c)

Sol. The weight of the algebraic sum of two or more quantities is equal to the reciprocal of the sum of the reciprocal of their individual weights. If the quantity of a given weight is multiplied with a factor, then the weight of resulting quantity is obtained by dividing the original weight by square of that factor.

74. Hypotenusal allowance is given by the expression (adopting standard conventions)

- (a)  $(1 - \sec \theta) \times$  measured distance  
(b)  $(1 - \cos \theta) \times$  measured distance  
(c)  $(\sec \theta - 1) \times$  measured distance  
(d)  $(\cos \theta - 1) \times$  measured distance

Ans. (d)

Sol. Hypotenusal allowance is correction for slope

$$C_g = -L (1 - \cos \theta)$$

$$\therefore C_g = L (\cos \theta - 1)$$

75. The clogging of chain rings with mud introduces (with 'error' defined in the standard way)

## OFFICE

F-126, Katwaria Sarai, N.D-16. Ph : 011-41013406, 9711853908 , 8010009955

Email : ies\_master@yahoo.co.in, http://www.iesmaster.org

**SCROLL DOWN**



1. Negative cumulative error
2. Positive cumulative error
3. Compensating error

- (a) 1 only                      (b) 2 only  
(c) 3 only                      (d) 1, 2 and 3

**Ans. (b)**

**Sol.** Due to clogging of chain rings with mud, actual length of the chain will become less than nominal length of chain.

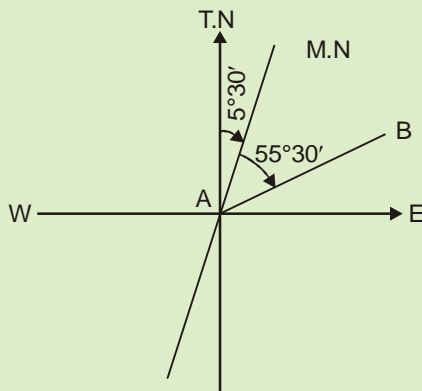
$$\begin{aligned} \therefore M.V &> T.V \\ \therefore \text{Error} &= M.V - T.V \\ \therefore \text{Error} &= +ve \end{aligned}$$

**76.** The magnetic bearing of a line (on full-circle mensuration basis) is  $55^\circ 30'$  East. The true magnetic bearing of the line will be.

- (a)  $61^\circ 00'$                       (b)  $55^\circ 30'$   
(c)  $40^\circ 00'$                       (d)  $50^\circ 00'$

**Ans. (a)**

**Sol.**  $T.B = 55^\circ 30' + 5^\circ 30'$   
 $T.B = 61^\circ$



**77.** In any closed traverse, if the survey work is error free, then

1. The algebraic sum of all the latitudes should be equal to zero.

2. The algebraic sum of all the departures should be equal to zero.
3. The sum of the northings should be equal to the sum of the southings.

Which of the above statements are correct?

- (a) 1 and 2 only                      (b) 1 and 3 only  
(c) 2 and 3 only                      (d) 1, 2 and 3

**Ans. (a)**

**Sol.** In a closed traverse, if the survey is error free.

1.  $\Sigma L = 0$
2.  $\Sigma D = 0$

**78.** The rise and fall method for obtaining the reduced levels of points provides a check on

1. Foresight
2. Backsight
3. Intermediate sight

Which of the above statements are correct?

- (a) 1 and 2 only                      (b) 1 and 3 only  
(c) 2 and 3 only                      (d) 1, 2 and 3

**Ans. (d)**

**Sol.** In rise and fall method R.L of back sight and fore sight are checked along with intermediate sight.

**79.** Turning of the theodolite telescope in vertical plane by  $180^\circ$  about the horizontal axis is known as

- (a) Setting                              (b) Centering  
(c) Transiting                              (d) Swinging

**Ans. (c)**

**Sol.** Turning the theodolite telescope in vertical plane by  $180^\circ$  about horizontal axis is called as transiting.

## OFFICE

F-126, Katwaria Sarai, N.D-16. Ph : 011-41013406, 9711853908 , 8010009955

Email : [ies\\_master@yahoo.co.in](mailto:ies_master@yahoo.co.in), <http://www.iesmaster.org>

**SCROLL DOWN**





Turning the theodolite telescope in horizontal plane about vertical axis is called swinging.

80. Which of the following are among the fundamental lines of a theodolite?

1. The vertical and horizontal axes
  2. The lines of collimation and axis of the plate levels.
  3. The bubble line of the altitude level
- (a) 1 and 2 only      (b) 1 and 3 only  
(c) 2 and 3 only      (d) 1, 2 and 3

Ans. (d)

Sol. Fundamental lines of theodolite are:

- (1) Vertical axis
- (2) Horizontal axis
- (3) Line of collimation
- (4) Axis of plate levels
- (5) Axis of telescope level

81. Local mean time of a place of longitude of  $42^{\circ}36'$  W is 8h 42 m 15 s AM. The corresponding Greenwich Mean Time is

- (a) 10 h 32 m 40 s AM  
(b) 11h 32 m 39s PM  
(c) 0 h 32 m 39s PM  
(d) 11 h 32 m 39s AM

Ans. (d)

Sol.  $GMT = 8h\ 42\ m\ 15s + \frac{42^{\circ}\ 30'}{15^{\circ}}$

GMT = 11 hr 32 m 39 sec AM

82. A vertical photograph of a flat area having an average elevation of 250m above mean sea level was taken with a camera of focal length

25 cm. A section line AB 300 m long in the area measures 15cm on the photograph; a tower BP in the area also appears on the photograph. The distance between images of top and bottom of the tower measures 0.5 cm on the photograph. The distance of the image of the top of the tower is 10 cm. The actual height of the tower is

- (a) 10 m      (b) 15 m  
(c) 20 m      (d) 25 m

Ans. (d)

Sol.  $h = 250m$ ,  $f = 25\ cm$ ,  $AB = 300m$ ,  $ab = 15\ cm$ ,  $d = 0.5\ cm$ ,  $r = 10\ cm$ , height of tower  $h_2 = ?$

$$S = \frac{ab}{AB} = \frac{f}{H-h}$$

$$\frac{15}{300} = \frac{25}{H-250}$$

$$H = 750$$

$$d = \frac{rh_2}{H-h_1}$$

$$0.5 = \frac{10 \times h_2}{750 - 250}$$

$$h_2 = 25\ m$$

83. A transportation trip survey was undertaken between private car, and public car transportation. The proportion of those using private cars is 0.45. While using the public transport, the further choices available are Metro Rail and Mono Rail, out of which commuting by a Mono Rail has a proportion of 0.55. In such a situation, the choice of interest in using a Metro Rail, Mono Rail and private car would be respectively.

- (a) 0.25, 0.3 and 0.45    (b) 0.45, 0.25 and 0.3  
(c) 0.25, 0.45 and 0.3    (d) 0.3, 0.25 and 0.45

## OFFICE

F-126, Katwaria Sarai, N.D-16. Ph : 011-41013406, 9711853908 , 8010009955

Email : [ies\\_master@yahoo.co.in](mailto:ies_master@yahoo.co.in), <http://www.iesmaster.org>

**SCROLL DOWN**



**Ans. (a)**

**Sol.**  $P_{\text{metro}} = 0.55 \times 0.45 = 0.2475 = 0.25$

$P_{\text{mono}} = 0.55 \times 0.55 = 0.3025 = 0.3$

$P_{\text{private car}} = 0.45$

**84.** An airfoil of surface area  $0.1 \text{ m}^2$  is tested for lift  $L$  in a wind tunnel. (Conditions can be considered as incompressible flow.) At an angle of attack of  $5^\circ$ , with standard air density  $1.22 \text{ kg/m}^3$ , at a speed of  $30 \text{ m/sec}$ , the lift is measured to be  $3.2 \text{ kgf}$ . What is the lift coefficient? For a prototype wing of area  $10 \text{ m}^2$ , what is the approximate lift at an air speed of  $160 \text{ kmph}$  at the same angle of attack of  $5^\circ$ ?

- (a) 0.572 and 700 kgf
- (b) 0.603 and 700 kfg
- (c) 0.572 and 570 kgf
- (d) 0.603 and 570 kgf

**Ans. (a)**

**Sol.**  $F_L = C_L \frac{\rho U_0^2}{2} A$

$3.2 \times 9.81 = \frac{C_L \times 1.22 (30)^2 \times 0.1}{2}$

$C_L = 0.572$

$F_L \propto 3.2 \times \left( \frac{160 \times 0.278}{30} \right)^2 \times \left( \frac{10}{0.1} \right)$   
 $= 702.33 \text{ Kgf}$

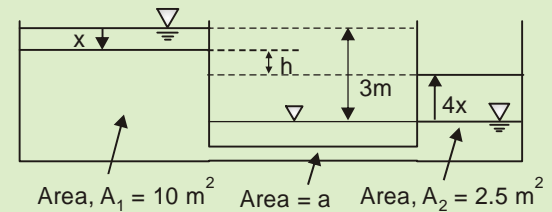
**85.** Two tanks A and B, of constant cross-sectional areas of  $10 \text{ m}^2$  and  $2.5 \text{ m}^2$ , respectively, are connected by a  $5 \text{ cm}$  pipe,  $100 \text{ m}$  long, with  $f = 0.03$ . If the initial difference of water levels is  $3 \text{ m}$ , how long will it take for  $2.5 \text{ m}^3$  of water to flow from A to B? Considering entry and exit

losses, it can be grossly assumed that the flow velocity, in  $\text{m/s}$ , through the pipe is  $1.75\sqrt{h}$ , where  $h$  is in  $\text{m}$ , taking  $g = 10 \text{ m/sec}^2$ ; also, may take area of pipe as  $2 \times 10^{-3} \text{ m}^2$ .

- (a) 535 seconds
- (b) 516 seconds
- (c) 485 seconds
- (d) 467 seconds

**Ans. (d)**

**Sol.**



$h = 3 - 4x - x$

$\Rightarrow h = 3 - 5x$

$V = 1.75\sqrt{3 - 5x}$

If in time  $dt$ , water level falls by  $dx$ , then

$V \times a(dt) = A dx$

$(1.75\sqrt{3 - 5x}) \times 2 \times 10^{-3} \times dt = 10 \cdot dx$

For  $2.5 \text{ m}^3$  of water to flow, time required =  $T$

$2.5 \text{ m}^3 = x_0 \times 10$

$x_0 = 0.25 \text{ m}$

$\Rightarrow \int_0^{0.25} \frac{10}{1.75\sqrt{3 - 5x}} dx = \int_0^T 2 \times 10^{-3} dt$

$\Rightarrow T = 467 \text{ sec}$

**86.** The consistency and flow resistance of a sample of bitumen can be determined through which of the following tests?

- (a) Viscosity test
- (b) Penetration test
- (c) Ductility test
- (d) Softening point test

## OFFICE

F-126, Katwaria Sarai, N.D-16. Ph : 011-41013406, 9711853908 , 8010009955

Email : ies\_master@yahoo.co.in, http://www.iesmaster.org

**SCROLL DOWN**



**Ans. (a)**

87. A pipe of 324 mm diameter, having friction coefficient as 0.04, connects two reservoirs with 15 m difference in their water levels through a 1500 m long pipe. What will be the discharge through the pipe?

- (a) 104 lps                      (b) 134 lps
- (c) 165 lps                     (d) 196 lps

**Ans. (a)**

**Sol.**

$$h = \frac{fV^2}{2gd}$$

$$V = 1.26 \text{ m/s}$$

$$Q = \frac{\pi}{4}(0.324)^2 \times 1.26 = 0.1038 \text{ m}^3/\text{s}$$

$$= 103.8 \text{ l/sec}$$

88. Flexible concrete is a mix comprising of

- (a) Gravel, filler and 30/40 bitumen
- (b) Sand, filler and 30/40 bitumen only
- (c) Gravel, sand, filler and 60/70 bitumen
- (d) Sand, filler and 60/70 bitumen only

**Ans. (c)**

89. Consider a soil sample, for which tests yield the following results:

Passing 75 micron sieve	62%
Liquid limit	35%
Plasticity Index	14%

As per the group index classification of soil, what is the soil condition of the above soil sample?

- (a) Poor                              (b) Fair
- (c) Good                            (d) Excellent

**Ans. (a)**

**Sol.**

$$GI = 0.2a + 0.005ac + 0.01bd$$

where,  $a = 62 - 35 = 27\%$

$$b = 62 - 15 = 47\%$$

$$c = 0$$

$$d = 21 - 10 = 11$$

$$P.I. = \omega_L - \omega_P = 21$$

$$GI = 0.2a + 0.005ac + 0.01bd = 10.57 \approx 11(\text{Poor})$$

90. Consider the following statements regarding ductility of bitumen:

1. Ductility is the property which does not permit bitumen to undergo large deformation without breaking.
2. Bitumens with high ductility are generally adhesive but do not have good cementing properties.
3. Ductility must be ascertained at two different temperatures in order to pronounce on the suitability of the material.

Which of the above statements is/are correct?

- (a) 3 only                              (b) 2 only
- (c) 1 only                             (d) 1, 2 and 3

**Ans. (a)**

91. A collapsible soil sub-grade sample was tested using Standard California Bearing Ratio apparatus; and the observations are given below

Sl. No.	Load	Penetration
1.	60.55 kg	2.5 mm
2.	80.55 kg	5.0 mm

Taking the standard assumption regarding the load penetration curve, CBR value of the sample will be taken as

## OFFICE

F-126, Katwaria Sarai, N.D-16. Ph : 011-41013406, 9711853908 , 8010009955

Email : ies\_master@yahoo.co.in, http://www.iesmaster.org

**SCROLL DOWN**



- (a) 3.9% (b) 4.0%  
(c) 4.4% (d) 5.5%

**Ans. (c)**

**Sol.** 
$$\text{CBR} = \frac{\text{Load carried by specimen}}{\text{load carried by standard specimen}} \times 100$$

At 2.5 mm penetration, CBR

$$= \frac{60.55}{1370} \times 100 = 4.4\%$$

At 5 mm penetration, CBR

$$= \frac{80.55}{2055} \times 100 = 3.9\%$$

CBR is the maximum of above two ratio i.e. 4.4%.

- 92.** What is the critical thickness of a prestressed concrete pavement (using Westergaard's Corner Load Formula) to support a maximum wheel load of 4200 kg? Allow 10% for impact. Tyre pressure may be taken as 7 kg/cm<sup>2</sup>. Assume flexural strength of concrete as 50 kg/cm<sup>2</sup>, factor of safety as 2, subgrade reaction for plastic mix road as 6 kg/cm<sup>3</sup>, and modulus of elasticity as 3 × 10<sup>5</sup> kg/cm<sup>2</sup>.

- (a) 19.6 cm (b) 21.6 cm  
(c) 23.6 cm (d) 25.6 cm

**Ans. (\*)**

- 93.** At a hydraulic jump, the flow depths are 0.4 m and 5 m at the upstream and downstream, respectively. The channel is wide rectangular. The discharge per unit width is nearly

- (a) 5.8 m<sup>2</sup>/s (b) 6.4 m<sup>2</sup>/s  
(c) 7.3 m<sup>2</sup>/s (d) 8.3 m<sup>2</sup>/s

**Ans. (c)**

**Sol.** 
$$\frac{2q^2}{g} = y_1 y_2 (y_1 + y_2)$$

$$\frac{2 \times q^2}{9.81} = 0.4 \times 5 (0.4 + 5)$$

$$q = 7.3 \text{ m}^3/\text{s}$$

- 94.** Overspeed and delay studies on a preselected section of a Highway are conducted by

- (a) Fast moving car method  
(b) Enoscope  
(c) Radar  
(d) Traffic contours

**Ans. (a)**

- 95.** The surface tension of water at 20°C is 75 × 10<sup>-3</sup> N/m. The difference in water surface within and outside an open-ended capillary tube of 1mm internal bore, inserted at the water surface, would nearly, be

- (a) 7 mm (b) 11 mm  
(c) 15 mm (d) 19 mm

**Ans. (c)**

**Sol.** 
$$h = \frac{4\sigma}{\gamma d}$$

$$= \frac{4 \times 75 \times 10^{-3}}{9.81 \times 10^3 \times 1 \times 10^{-3}} = 30 \text{ mm}$$

If we take bore as radius then d = 2mm  
⇒ h = 15 mm

- 96.** Survey of India was publishing toposheets using a scale of

- (a) 1 : 1000 (b) 1 : 5000  
(c) 1 : 10000 (d) 1 : 50000

**Ans. (d)**

- Sol.** Before adaptation of National Mapping Policy – 2005, Survey of India printed Topographical maps on 1 : 2, 50,000, 1 : 50,000 and 1 : 25,000. Scales.

## OFFICE

F-126, Katwaria Sarai, N.D-16. Ph : 011-41013406, 9711853908, 8010009955

Email : ies\_master@yahoo.co.in, http://www.iesmaster.org

**SCROLL DOWN**



97. The maximum speed of a train on B.G. track having a curvature of  $3^\circ$  and cant of 10 cm with allowable cant deficiency of 76 mm, for conditions obtaining in India, is

- (a) 87.6 km/h                      (b) 99.6 km/h  
 (c) 76.6 km/h                      (d) 65.6 km/h

Ans. (a)

Sol.  $D = \frac{1720}{R}$

$R = 573.33 \text{ m}$

$V = \sqrt{\frac{127Re}{G}}$

$= \sqrt{\frac{127 \times 573.33 \times 0.176}{1.676}}$

$= 87.44 \text{ Km/h}$

98. The gradient for a B.G railway line such that the grade resistance together with curve resistance due a  $4^\circ$  curve which will be equivalent to a simple ruling gradient of 1 in 150 is

- (a) 1 : 180                      (b) 1 : 200  
 (c) 1 : 300                      (d) 1 : 400

Ans. (b)

Sol. Grade resistance + Curve resistance = Ruling gradient resistance

$\frac{\omega}{x} + 0.0004\omega D = \frac{\omega}{150}$

$D = 4^\circ$

$x = 197.36 \approx 200$

Gradient is 1 in 200.

99. A pelton wheel works under a head of 400m. Friction loss through the pipe flow is limited to 10%. The coefficient of velocity for the jet is 0.98. What is the velocity of the jet? Take  $g = 10 \text{ m/s}^2$ .

- (a) 83 m/s                      (b) 71 m/s  
 (c) 65 m/s                      (d) 56 m/s

Ans. (a)

Sol. Head available at the nozzle =  $0.9 \times 400$

$= 360 \text{ m}$

$V = C_v \sqrt{2gH}$

$= 0.98 \sqrt{2 \times 9.81 \times 360}$

$= 82.36 \text{ m/s}$

100. The value of porosity of a soil sample in which the total volume of soil grains is equal to twice the total volume of voids would be

- (a) 30%                      (b) 40%  
 (c) 50%                      (d) 60%

Ans. (a)

Sol.  $V_s = 2V_v$

$n = \frac{V_v}{V_v + V_s} = \frac{1}{1 + \frac{V_s}{V_v}}$

$= \frac{1}{1+2} = \frac{1}{3} = 33.3\%$

101. Consider the the following statements:

1. In an Impulse turbine, the pressure of the, flowing water remains unchanged and is equal to atmospheric pressure.
2. In Impulse turbines, the water impinges on the buckets with 'pressure energy'.

## OFFICE

F-126, Katwaria Sarai, N.D-16. Ph : 011-41013406, 9711853908 , 8010009955

Email : ies\_master@yahoo.co.in,http://www.iesmaster.org

SCROLL DOWN



3. In a Reaction turbine, the pressure of the, flowing water remains unchanged and is equal to atmospheric pressure.

Which of the above statements is/are correct?

- (a) 1 only                      (b) 2 only  
(c) 3 only                      (d) 1, 2 and 3

**Ans. (a)**

**102.** A Pelton wheel with single jet rotates at 600 rpm. The velocity of the jet from the nozzle is 100 m/s. If the ratio of the bucket velocity of jet velocity is 0.44 and the speed ratio is 0.43, what is the coefficient of velocity of the nozzle?

- (a) 0.817                      (b) 0.882  
(c) 0.913                      (d) 0.977

**Ans. (d)**

**Sol.**

$$U_1 = K_{U1} \sqrt{2gH}$$
$$K_{U1} = \text{Speed ratio}$$
$$U_1 = 0.44 \times 100 = 44 \text{ m/s}$$
$$V = C_V \sqrt{2gH}$$
$$C_V = \frac{V}{\sqrt{2gH}} = \frac{100}{44/0.43} = 0.977$$

**Directions:**

Each of the next **Eighteen (18)** items consists of two statements, one labelled as the 'Statement (I)' and the other as 'Statement (II)', Examine these two statements carefully and select the answers to 'these items using the codes given below :

**Codes:**

- (a) Both Statement (I) and Statement (II) are individually true and Statement (II) is the correct explanation of Statement (I)  
(b) Both Statement (I) and Statement (II) are individually true but Statement (II) is **not** the correct explanation of Statement (I)  
(c) Statement (I) is true but Statement (II) is false

(d) Statement (I) is false but Statement (II) is true

**103. Statement (I):** : The shear strain graph for a Newtonian fluid is linear.

**Statement (II):** The coefficient of viscosity  $\mu$  of the fluid is not a constant.

**Ans. (c)**

**104. Statement (I):** : Reynolds number must be the same for model and the prototype when, both are tested as immersed in a subsonic flow.

**Statement (II):** A model should be geometrically similar to the prototype.

**Ans. (b)**

**105. Statement (I):** The ogee spillway is a control weir' having an S-shaped crest profile which provides a high discharge coefficient without causing cavitations.

**Statement (II):** The crest profile of ogee spillway conforms to the lower nappe of flow over a ventilated sharp-crested weir and ensures a constant discharge coefficient for all heads.

**Ans. (c)**

**Sol.** If head of water over the Ogee spillway is less than design head then falling jet of water will adhere to the crest of the spillway hence an positive hydrostatic pressure will be created which will reduce the discharge coefficient.

**106. Statement (I):** In open channel flow, the maximum velocity does not occur on the free surface.

**Statement (II):** There is wind drag on the free surface of an open channel.

**Ans. (b)**

**OFFICE**

F-126, Katwaria Sarai, N.D-16. Ph : 011-41013406, 9711853908 , 8010009955

Email : [ies\\_master@yahoo.co.in](mailto:ies_master@yahoo.co.in), <http://www.iesmaster.org>

**SCROLL DOWN**



107. **Statement (I):** The deeper a lake, the lesser the evaporation in summer and the more in winter.

**Statement (II):** Heat storage in water bodies affects seasonal evaporation

**Ans. (a)**

108. **Statement (I):** Flow over sharp-crested weirs, standing wave flumes and abrupt free overfalls at ends of long straight channels are examples of rapidly varied flow.

**Statement (II):** The above-listed flows are all essentially local phenomena and can be utilized for flow measurement in open channels.

**Ans. (a)**

109. **Statement (I):** Negative skin friction will act on the piles of a group in filled-up reclaimed soils or peat soil.

**Statement (II):** The filled-up' or peat soils' are not fully consolidated but start consolidating under their own overburden pressure, developing a drag on the surface of the piles.

**Ans. (a)**

110. **Statement (I):** The possibility of 'quicksand' condition occurring is more on the downstream of a weir on a permeable foundation than on the upstream' end with an upward component of seepage velocity.

**Statement (II):** Seepage lines end with an upward component of seepage velocity at the downstream reaches of such a weir.

**Ans. (a)**

**Sol.** Upward seepage reduces effective stress where as downward seepage increases effective stresses.

111. **Statement (I):** Multistage centrifugal pumps are used to produce very high delivery heads.

**Statement (II):** Roto-dynamic pumps must have to be centrifugal rather than centripetal, from the very basic principles of hydrodynamics. Also, the stages are in series.

**Ans. (a)**

112. **Statement (I):** The speed of a hydraulic turbine has to be maintained constant irrespective of the load on the machine for keeping the electrical power generation frequency constant

**Statement (II):** Governing of hydraulic turbines can be done by controlling the discharge through the turbines by adjusting the spear valve in Pelton turbines and the wicket in Francis or Kaplan turbines.

**Ans. (a)**

113. **Statement (I):** : A channel in alluvium running with constant discharge and constant sediment charge will first from its flow section and then its final longitudinal slope.

**Statement (II):** If a channel in alluvium has a section too small for a given discharge and slope steeper than required, degradation and aggradation happen and then the flow section attains final regime.

**Ans. (d)**

**Sol.** A channel in alluvium running with constant discharge and constant sediment charge will first from its longitudinal slope and then its final flow section.

114. **Statement (I):** The shear stress exerted by the stream flow on the bed is responsible for the movement of bed sediment particles.

**Statement (II):** The sediment will move when the shear stress crosses a threshold limit designated as a critical shear stress  $\tau_c$ .

## OFFICE

F-126, Katwaria Sarai, N.D-16. Ph : 011-41013406, 9711853908 , 8010009955

Email : [ies\\_master@yahoo.co.in](mailto:ies_master@yahoo.co.in), <http://www.iesmaster.org>

**SCROLL DOWN**



# IES MASTER

Institute for Engineers (IES/GATE/PSUs)

**Ans. (a)**

**115. Statement (I):** The trap efficiency of a reservoir increases with age as the reservoir capacity is reduced by sediment accumulation

**Statement (II):** The trap efficiency is a function of the ratio of reservoir capacity to the total inflow. A small reservoir on a large stream has a low trap efficiency efficiency.

**Ans. (d)**

**Sol.** The trap efficiency of reservoir decreases with the increasing age, as the capacity of reservoir decreases.

Trap efficiency is a function of

1. Ratio of reservoir capacity to mean annual inflow.
2. Sediment characteristics.

**116. Statement (I):** Recarbonation of water softened by lime-soda process results in increased hardness of the water.

**Statement (II):** : Suspended solids, like  $\text{CaSO}_4$  and  $\text{MgSO}_4$ , which have not settled in the sedimentation tank, get dissolved due to passage of  $\text{CO}_2$ .

**Ans. (a)**

**117. Statement (I):** Pipes carrying water are anchored at bends and other points of unbalanced thrusts

**Statement (II):** Pipes are anchored by firmly embedding In massive blocks of concrete or

masonry to counter side thrusts due to hydrodynamic forces exerted on the joints.

**Ans. (a)**

**118. Statement (I):** Aerobic condition in composting of refuse can be confirmed by temperature measurements.

**Statement (II):** Aerobic reactions are exothermic.

**Ans. (a)**

**119. Statement (I):** For a given soil, optimum moisture content increases with the increase in compactive effort.

**Statement (II):** Higher the compactive effort, higher is the dry density at the same moisture content.

**Ans. (d)**

**Sol.** Optimum moisture contain decreases with compactive effort.

**120. Statement (I):** Rate of settlement of a consolidating layer depends upon its coefficient of consolidation, which is directly proportional to the permeability and number of drainage paths available.

**Statement (II):** The excess hydrostatic pore pressure is relived fast in soil of higher permeability, in turn, depending on the number or drainage paths available in the consolidating layer.

**Ans. (a)**

## OFFICE

F-126, Katwaria Sarai, N.D-16. Ph : 011-41013406, 9711853908 , 8010009955

Email : [ies\\_master@yahoo.co.in](mailto:ies_master@yahoo.co.in), <http://www.iesmaster.org>

**SCROLL DOWN**



## OUR TOP RESULTS IN ESE-2015

AIR 2 CE		AIR 4 CE		AIR 5 CE		AIR 6 CE		AIR 7 CE		AIR 8 CE									
PIYUSH PATHAK		AMIT SHARMA		DHIRAJ AGARWAL		PAWAN JEPH		KIRTI KAUSHIK		AMAN GUPTA									
AIR 9 CE		AIR 10 CE		AIR 11 CE		AIR 13 CE		AIR 14 CE		AIR 20 CE									
MANGAL YADAV		AISHWARYA ALOK		RAMAN KUNWAR		PRATEEK		GOPAL KUMAR PATHAK		MANTU KUMAR									
AIR 3 ME		AIR 10 ME		AIR 13 ME		AIR 21 ME		AIR 28 ME		AIR 29 ME									
AARISH BANSAL		ARUN		KUMAR SAURAB		KRISHAN LALCHANDANI		SAILESH		ANUJ KUMAR MISHRA									
AIR 36 ME		AIR 44 ME		AIR 53 ME		AIR 54 ME		AIR 64 ME		AIR 29 ECE		AIR 30 EE		AIR 22 CE		AIR 23 CE		AIR 25 CE	
ROHIT		ANSHUMAN ABHISHEK		PARANJAY DARBARI		VEDANT DARBARI		SIDDHARTH SHANKAR		SANDIP GARAI		AKSHAY DUBEY		KRISHNA MOHAN		ISHAN SHRIVASTAVA		MUKUL JOSHI	
AIR 26 CE		AIR 30 CE		AIR 31 CE		AIR 35 CE		AIR 38 CE		AIR 39 CE		AIR 48 CE		AIR 49 CE		AIR 51 CE		AIR 55 CE	
NEERAJ SINGH		KASHISH KUKREJA		BIDYUT MONDAL		SHASHANK		RAHUL GUPTA		ANAND SURYAVANSHI		KAPIL VATS		ANAND AGRAWAL		HIMANSHU MEHTA		AKASH AGGARWAL	
AIR 57 CE		AIR 58 CE		AIR 68 CE		AIR 69 CE		AIR 73 CE		AIR 75 CE		AIR 77 CE		AIR 78 CE		AIR 79 CE		AIR 80 CE	
PRASOON KUMAR		DHEERAJ GOYAL		PANKAJ KR. GARG		MOHD. NUSRULLAH KHAN		ARMAN SINGH PATEL		ASHISH KAMAL		MAHENDRA KR. SINGHMAR		NIPUN KUMAR		SURESH MANDA		SANDEEPIKA YADAV	
AIR 82 CE		AIR 83 CE		AIR 84 CE		AIR 85 CE		AIR 87 CE		AIR 88 CE		AIR 90 CE		AIR 93 CE		AIR 94 CE		AIR 98 CE	
MAHIPAL		ABHAY KUMAR		SANDEEP KUMAR		HARISH KUMAR TANWAR		HITESH KUMAR MADAHAR		PRASHANT GAUTAM		GAURAV DONGRE		MANISH KUMAR		SUDHIR KUMAR		KOKONDA PAVAN KR.	

and Many More.....

## OUR TOP RESULTS IN ESE-2014

AIR 2 CE		AIR 4 CE		AIR 5 CE		AIR 8 CE		AIR 9 CE		AIR 10 CE																	
DEEPAK KR. BHARDWAJ		HIMANSHU AGGARWAL		DEEPIKA GILL		MAYANK SAXENA		ABHISHEK KR. SINGH		SHUBHAM KHURANA																	
AIR 2 ME		AIR 16 ME		AIR 21 ME		AIR 23 ME		AIR 32 ME		AIR 49 ME		AIR 51 ME		AIR 54 ME		AIR 60 ME		AIR 63 ME		AIR 82 ME		AIR 104 ME		AIR 105 ME		AIR 115 ME	
ABHINAV TRIVEDI		DEEPAK JHALANI		ASHISH CHAUHAN		PRAKHARI GUPTA		AJAY CHAUDHARY		HIMRAJ KUNAL		VAIBHAV AGRAWAL		PARIYANGAN SINGH		SURYA PRAKASH DWIVEDI		KRISHAN LALCHANDANI		SANDEEP KUMAR		ARNAV SINHA		VIKAS KUMAR		MONALISA TALUKBAR	

## OUR TOP RESULTS IN ESE-2013

AIR 1		AIR 2		AIR 4 CE		AIR 7 CE		AIR 8 CE	
Gaurav K. Singh ESE-2013 (CE)		Ashish Verma ESE-2013 (CE)		ABHINAV GARG		ANIL KUMAR ADEPUR		SWAPNIL CHAURASIA and Many More.....	

## OUR TOP RESULTS IN ESE-2012

AIR 1		AIR 2		AIR 7 CE		AIR 8 CE		AIR 12 CE	
Vikas Ahlawat ESE-2012 (CE) & GATE-2013		Inderjeet Kaushik ESE-2012 (CE)		VIPIN KUMAR		SUDHIR KUMAR		MUSALE GAUTAM SHRISH and Many More.....	