



Staff Selection Commission
(Government Of India)

REGISTRATION NUMBER :

EXAM DATE : 2-September-2016 EXAM NAME :

SSC Examination 2016 TOTAL MARKS : 200

CANDIDATE NAME :

EXAM START TIME : 13:15:00

EXAM DURATION : 01:15 Hrs

TOTAL NO OF QUESTIONS : 100

Question 1. Select the related word/letters/numbers from the given alternatives:

दिये गये विकल्पों में से संबंधित शब्द/अक्षरों/संख्या को चुनिए।

Peacock : India :: Bear : ?

मोर : भारत :: भालू : ?

Options:

1) Australia

ऑस्ट्रेलिया

2) America

अमेरिका

3) England

इंग्लैण्ड

4) Russia

रूस

Correct Answer: Russia

रूस

Candidate Answer: Russia

रूस

Question 2. Select the related word/letters/numbers from the given alternatives:

दिये गये विकल्पों में से संबंधित शब्द/अक्षरों/संख्या को चुनिए।

BDCE : FHGI :: RTSU : ?

Options:

1) VYWX

2) XYVW

3) VWXY

4) VXWY

Correct Answer: VXWY

Candidate Answer: VXWY

Question 3. Select the related word/letters/numbers from the given alternatives:

दिये गये विकल्पों में से संबंधित शब्द/अक्षरों/संख्या को चुनिए।

6 : 5 :: 8 : ?

Options:

1) 2

2) 4

3) 6

4) 10

Correct Answer: 6

Candidate Answer: 6

Question 4.

For the following questions

Find the odd words / letters / numbers from the given alternatives .

दिए गए विकल्पों में से विषम शब्द/अक्षर/संख्या चुनिये ।

Options:

1) Moon

चन्द्रमा

2) Mars

मंगल

3) Venus

शुक्र

4) Jupiter

बृहस्पति

Correct Answer: Moon

चन्द्रमा

Candidate Answer: Moon

चन्द्रमा

Question 5.

For the following questions

Find the odd words / letters / numbers from the given alternatives .

दिए गए विकल्पों में से विषम शब्द/अक्षर/संख्या चुनिये ।

Options:

1) ACEG

2) IKMO

3) FHJL

4) TUWY

Correct Answer: TUWY

Candidate Answer: TUWY

Question 6.

For the following questions

Find the odd words / letters / numbers from the given alternatives .

दिए गए विकल्पों में से विषम शब्द/अक्षर/संख्या चुनिये ।

Options:

1) 6

2) 24

3) 64

4) 120

Correct Answer: 64

Candidate Answer: 64

Question 7. Arrange the following words according to the dictionary order

निम्नलिखित शब्दों को शब्दकोश के क्रम में लिखिए।

a) Approach b) Appropriate c) Approval d) Approve

Options:

- 1) acdb
- 2) abdc
- 3) cdab
- 4) abcd

Correct Answer: abcd**Candidate Answer:** abcd

Question 8. A series is given, with one term missing. Choose the correct alternative from the given ones that will complete the series.

दिए गये अनुक्रम में एक पद लुप्त है। दिए गए विकल्पों में से वह सही विकल्प चुनिए जो श्रंखला को पूरा करता है।

ajs, gpy, ?, sbk, yhq

Options:

- 1) dmv
- 2) mve
- 3) oua
- 4) qzi

Correct Answer: mve**Candidate Answer:** mve

Question 9. A series is given, with one term missing. Choose the correct alternative from the given ones that will complete the series.

दिए गये अनुक्रम में एक पद लुप्त है। दिए गए विकल्पों में से वह सही विकल्प चुनिए जो श्रंखला को पूरा करता है।

5, 9, 6, 11, 7, ?

Options:

- 1) 13
- 2) 15
- 3) 17
- 4) 19

Correct Answer: 13**Candidate Answer:** 13

Question 10. Anand is son of Prema. Rajeev is brother of Prema. Neha is daughter of Rashmi. Neha is sister of Rajeev. How is Anand related to Rashmi?

आनन्द, प्रेमा का पुत्र है। राजीव, प्रेमा का भाई है। नेहा, रश्मि की पुत्री है। नेहा राजीव की बहन है। आनन्द का रश्मि से सम्बन्ध बताइए ?

Options:

- 1) Son
पुत्र
- 2) Grand Son
पौत्र
- 3) Grand father
दादा
- 4) Grand daughter
पौत्री

Correct Answer: Grand Son

पौत्र

Candidate Answer: Grand Son

पौत्र

Question 11. Nikhil is 8 yr younger than his brother Rohan. How old will Rohan be when he is twice as old as Nikhil?

निखिल अपने भाई रोहन से 8 वर्ष छोटा है। रोहन तब कितने वर्ष का होगा जब वह निखिल से दुगुनी उम्र का होगा ?

Options:

- 1) 4 yr
4 वर्ष
- 2) 6 yr
6 वर्ष
- 3) 8 yr
8 वर्ष
- 4) 16 yr
16 वर्ष

Correct Answer: 16 yr

16 वर्ष

Candidate Answer: 16 yr

16 वर्ष

Question 12. From the given alternative words, select the word which cannot be formed using the letters of the given word :

निम्नलिखित विकल्पों में से वह शब्द चुनिए जो दिए गए शब्द के अक्षरों का प्रयोग करके नहीं बनाया जा सकता

ORGANISATION

Options:

- 1) GRANT
- 2) NATION
- 3) GIANTS
- 4) ORANGE

Correct Answer: ORANGE**Candidate Answer:** ORANGE

Question 13. If EARTHQUAKE is coded as EKAUQHTRAE then ELECTORATE will be coded as ?

यदि EARTHQUAKE को EKAUQHTRAE के रूप में लिखा जाता है तो ELECTORATE को किस प्रकार लिखा जाएगा ?

Options:

- 1) ETAROELECT
- 2) EARTOTCELE
- 3) ETAROTCELE
- 4) ETAROCLELE

Correct Answer: ETAROTCELE**Candidate Answer:** ETAROTCELE

Question 14. If a denotes \times , b denotes \div , c denotes $+$ and d denotes $-$, then **8 a 3 c 24 b 12 d 19 = ?**

यदि a का आशय \times से है, b का आशय \div से है, c का आशय $+$ से है और d का आशय $-$ से है तो, **8 a 3 c 24 b 12 d 19 = ?**

Options:

- 1) 17
- 2) 7
- 3) 14
- 4) 8

Correct Answer: 7**Candidate Answer:** 7

Question 15. Given equations are solved on the basis of a certain system. Find the correct answer for the unsolved equation on that basis :

2 + 4 + 6 = 48 and

3 + 2 + 8 = 48,

then 2 + 5 + 7 = ?

निम्नलिखित समीकरण एक विशेष प्रणाली के आधार पर हल किए गये हैं। उसी आधार पर अनुत्तरित समीकरण का सही उत्तर ज्ञात कीजिए।

यदि 2 + 4 + 6 = 48 और

3 + 2 + 8 = 48,

तो 2 + 5 + 7 = ?

Options:

- 1) 48
- 2) 70
- 3) 14
- 4) 59

Correct Answer: 70**Candidate Answer:** 70

Question 16. Select the missing number from the given alternatives

दिए गए विकल्पों में से लुप्त संख्या चुनिए ?

28	20	7
84	35	12
45	?	9

Options:

- 1) 19
- 2) 22
- 3) 26
- 4) 25

Correct Answer: 25**Candidate Answer:** [NOT ANSWERED]

Question 17. If North is called North west , West is called South west , South is called South east and so on . A person walks straight from South west to North east and then turns left . Walks straight and again turns left . Now at what direction he is facing ?

यदि उत्तर को उत्तर-पश्चिम कहा जाए, पश्चिम को दक्षिण-पश्चिम कहा जाए, दक्षिण को दक्षिण-पूर्व कहा जाए और इत्यादि। एक व्यक्ति दक्षिण-पश्चिम से सीधा उत्तर-पूर्व की ओर जाए और फिर बायें मुड़े, फिर सीधे चल कर दोबारा बायें मुड़े, तो वह किस दिशा की ओर जा रहा है ?

Options:

- 1) South
दक्षिण
- 2) North east
उत्तर-पूर्व
- 3) North
उत्तर
- 4) South west
दक्षिण-पश्चिम

Correct Answer: South west

दक्षिण-पश्चिम

Candidate Answer: South west

दक्षिण-पश्चिम

Question 18. In the following question, one or two statement(s) is/are given followed by two conclusions/assumptions, I and II. You have to consider the statement to be true, even if it seems to be at variance from commonly known facts. You are to decide which of the given conclusions/assumptions can definitely be drawn from the given statement. Indicate your answer.

Statement: Some kings are queens. All queens are beautiful .

Conclusions: I- All kings are beautiful.

Conclusions: II- All queens are kings

निम्नलिखित प्रश्न में, एक या एक से अधिक वक्तव्य दिए गए हैं जिसके आगे दो निष्कर्ष/मान्यताएँ, I और II उल्लेखित हैं। आपको मानना है कि वक्तव्य सत्य ही है चाहे वह सामान्यतः ज्ञात तथ्यों से भिन्न प्रतीत होता हो। आपको तय करना है कि दिए गए वक्तव्य में से कौन-से निष्कर्ष/ मान्यतायें निश्चित रूप से सही हैं। अपने उत्तर को निर्दिष्ट कीजिए।

कथन : I- कुछ राजा रानियाँ हैं। सभी रानियाँ सुंदर हैं।

निष्कर्ष: I- सभी राजा सुंदर हैं।

निष्कर्ष: II- सभी रानियाँ राजा हैं।

Options:

1) Only conclusion I follows

केवल निष्कर्ष I सही है।

2) Only conclusion II follows

केवल निष्कर्ष II सही है।

3) Either conclusion I or II follows

या निष्कर्ष I सही है या II

4) Neither conclusion I nor conclusion II follows

न निष्कर्ष I सही है और न निष्कर्ष II

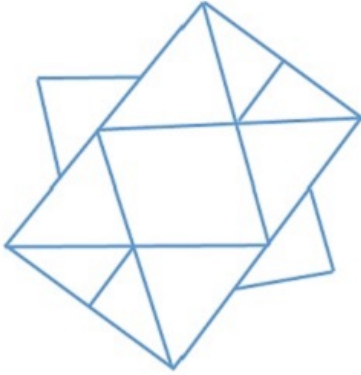
Correct Answer: Neither conclusion I nor conclusion II follows

न निष्कर्ष I सही है और न निष्कर्ष II

Candidate Answer: Neither conclusion I nor conclusion II follows

न निष्कर्ष I सही है और न निष्कर्ष II

Question 19. Find the number of triangles in the figure



आकृति में त्रिकोणों की संख्या बताइए ?

Options:

1) 12

2) 10

3) 18

4) 16

Correct Answer: 18**Candidate Answer:** 16Question 20. Identify the diagram that best represents the relationship among classes given below: **Elephants , Lions and Animals**

वह आरेख चुनिए जो नीचे दिए गए वर्गों के बीच सही सम्बन्ध को दर्शाता है। हाथी, शेर और पशु

Options:

1)



2)



3)



4)



Correct Answer:

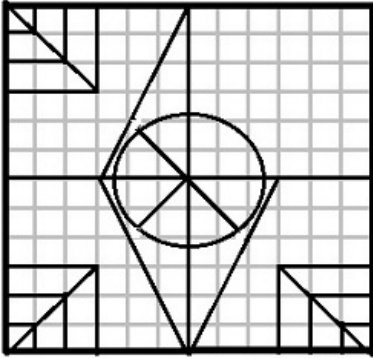


Candidate Answer:



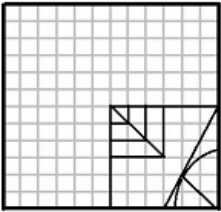
Question 21. Which answer figure will complete the pattern in the question figure?

कौन-सी उत्तर आकृति प्रश्न आकृति के पैटर्न को पूरा करेगी ?

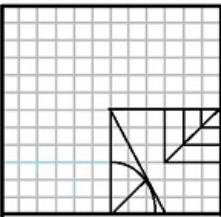


Options:

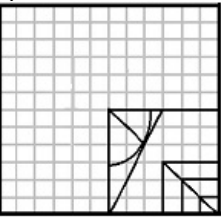
1)



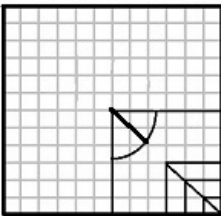
2)



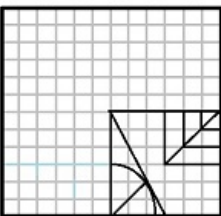
3)



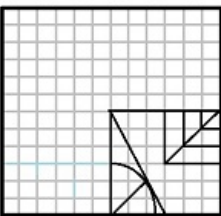
4)



Correct Answer:

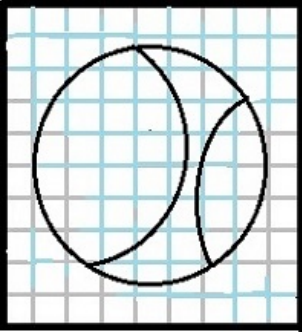


Candidate Answer:



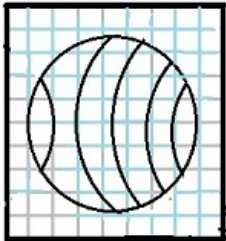
Question 22. From the given answer figures, select the one in which the question figure is hidden/embedded.

दी गई उत्तर आकृतियों में से उस आकृति को चुनिए जिसमें प्रश्न आकृति निहित है।

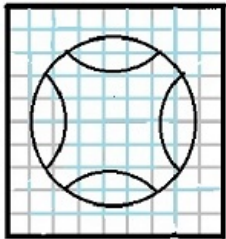


Options:

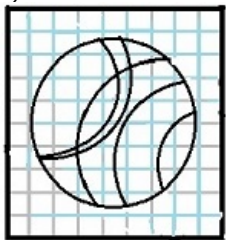
1)



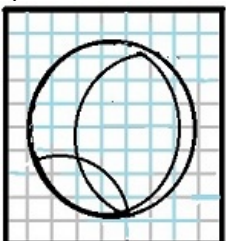
2)



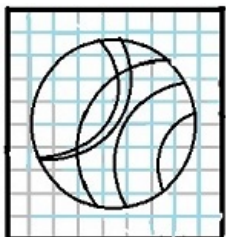
3)



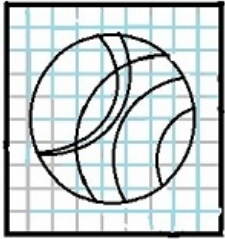
4)



Correct Answer:

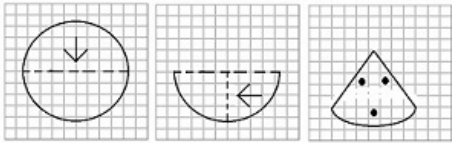


Candidate Answer:



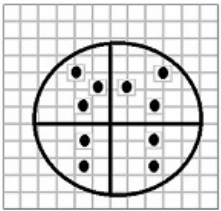
Question 23. A piece of paper is folded and cut as shown in the question figures, indicate how it will appear when opened.

प्रश्न आकृतियों में दिखाए अनुसार कागज को मोड़कर काटने तथा खोलने के बाद वह किस उत्तर आकृति जैसा दिखाई देगा ?

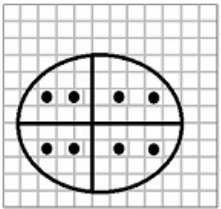


Options:

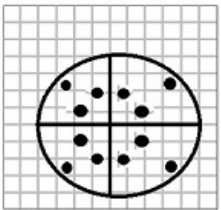
1)



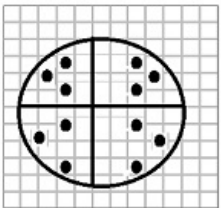
2)



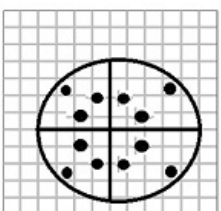
3)



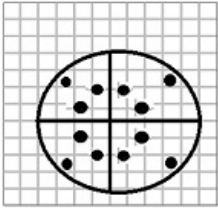
4)



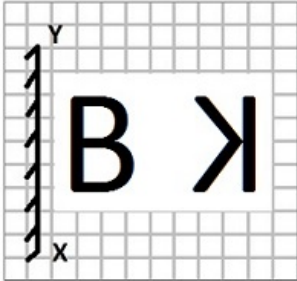
Correct Answer:



Candidate Answer:



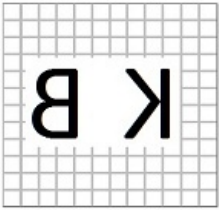
Question 24. If a mirror is placed on the line MN, then which of the answer figures is the right image of the given figure?



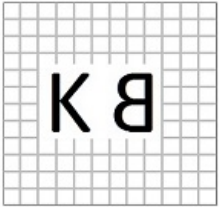
यदि एक दर्पण को MN रेखा पर रखा जाये तो दी गई उत्तर आकृतियों में से कौन-सी आकृति प्रश्न आकृति का सही प्रतिबिम्ब होगी ?

Options:

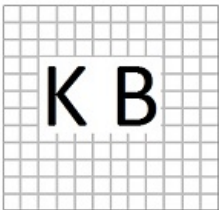
1)



2)



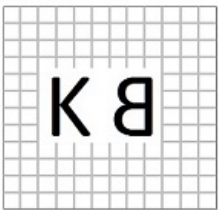
3)



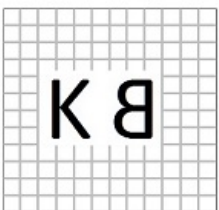
4)



Correct Answer:



Candidate Answer:



Question 25. The sets of numbers given in the alternatives are represented. The columns and rows of Matrix I are numbered from 0 to 4 and that of Matrix II are numbered from 5 to 9. A letter from these matrices can be represented first by its row and next by its column, e.g., 'A' can be represented by 12, 24, etc., and 'R' can be represented by 57, 76, etc. Similarly you have to identify the set for the word 'ROSE'

एक शब्द केवल एक संख्या-समूह द्वारा दर्शाया गया है, जैसे कि विकल्पों में से किसी एक में दिया गया है। विकल्पों में दिए गए संख्या समूह अक्षरों के दो वर्गों द्वारा दर्शाए गए हैं, जैसे कि नीचे दिए गए दो आव्यूहों में हैं। आव्यूह I के स्तंभ और पंक्ती की संख्या 0 से 4 और आव्यूह II की 5 से 9 दी गई है। इन आव्यूहों से एक अक्षर को पहले उसकी पंक्ती और बाद में स्तम्भ संख्या द्वारा दर्शाया जा सकता है। उदाहरण के लिए 'A' को 12, 24 आदि द्वारा दर्शाया जा सकता है तथा 'R' को 57, 76 आदि द्वारा दर्शाया जा सकता है। इसी तरह से आपको दिए हुए शब्द 'ROSE' के लिए समूह को पहचानना है।

MATRIX - I

	0	1	2	3	4
0	A	E	S	T	H
1	T	H	A	E	S
2	E	S	T	H	A
3	H	A	E	S	T
4	S	T	H	A	E

MATRIX - II

	5	6	7	8	9
5	P	O	R	K	L
6	K	L	P	O	R
7	O	R	K	L	P
8	L	P	O	R	K
9	R	K	L	P	O

Options:

1) 86, 67, 33, 44

2) 88, 76, 31, 32

3) 95, 75, 02, 32

4) 57, 87, 32, 33

Correct Answer: 95, 75, 02, 32

Candidate Answer: 95, 75, 02, 32

Question 26. Inflation is a situation characterised by

मुद्रा-स्फीति में निम्नलिखित में से कौन-सी स्थिति होती है ?

Options:

1) Too much money chasing too few goods

कम वस्तु पर अधिक मुद्रा व्यय

2) Too few money chasing too much goods

अत्यधिक वस्तु किंतु अल्प मुद्रा व्यय

3) Too many people chasing too few goods

अत्यधिक जन और अल्प मात्रा में वस्तु

4) Too many people chasing too little money

अत्यधिक जन और अल्प मात्रा में मुद्रा

Correct Answer: Too much money chasing too few goods

कम वस्तु पर अधिक मुद्रा व्यय

Candidate Answer: Too many people chasing too few goods

अत्यधिक जन और अल्प मात्रा में वस्तु

Question 27. Which of the following was published by Gandhiji during his stay in South Africa?

गांधी जी जब दक्षिण अफ्रीका में थे, तो उनके द्वारा निम्नलिखित में से क्या प्रकाशित किया गया था ?

Options:

1) Young India

यंग इण्डिया

2) Indian Opinion

इंडियन ओपीनियन

3) Nav Jivan

नव जीवन

4) None of these

इन में से कोई नहीं

Correct Answer: Indian Opinion

इंडियन ओपीनियन

Candidate Answer: [NOT ANSWERED]

Question 28. What was the immediate aim of the Treaty of Purander in 1665?

वर्ष 1665 में पुरन्दर की संधि का प्रत्यक्ष उद्देश्य क्या था ?

Options:

1) To gain goodwill of Shivaji

शिवाजी से मैत्री-भाव बनाए रखना

2) To sow seeds of contention between Shivaji and Sultan of Bijapur

शिवाजी और बिजापुर के सुलतान के बीच विवाद के बीज बोना

3) To deceive Shivaji

शिवाजी को धोखा देना

4) To make Shivaji a puppet of Mughals

शिवाजी को मुगलों के हाथ की कटपुतली बनाना

Correct Answer: To sow seeds of contention between Shivaji and Sultan of Bijapur

शिवाजी और बिजापुर के सुलतान के बीच विवाद के बीज बोना

Candidate Answer: [NOT ANSWERED]

Question 29. Match the following:

A. Mohenjodaro **1. Statue of a priest**

B. Harappa **2. Port**

C. Kalibangan **3. Plough marks**

D. Lothal **4. The Great Bath**

निम्नलिखित का मेल कीजिए।

A. मोहेनजोदारो **1. स्टैच्यू ऑफ प्रीस्ट**

B. हड़प्पा **2. पत्तन**

C. कालीबंगन **3. हल के चिन्ह**

D. लोथल **4. ग्रेट बाथ**

Options:

1) A-4, B-1, C-3, D-2

2) A-3, B-2, C-4, D-1

3) A-2, B-3, C-1, D-4

4) A-1, B-4, C-2, D-3

Correct Answer: A-4, B-1, C-3, D-2

Candidate Answer: A-4, B-1, C-3, D-2

Question 30. Blood is red in colour due to the presence of _____ .

रक्त का रंग निम्नलिखित में से किसकी उपस्थिति के कारण लाल होता है ?

Options:

1) Cytochrome

साइटोक्रोम

2) Chlorophyll

क्लोरोफिल

3) Hemocyanin

हीमोसायानीन

4) Haemoglobin

हीमोग्लोबिन

Correct Answer: Haemoglobin

हीमोग्लोबिन

Candidate Answer: Haemoglobin

हीमोग्लोबिन

Question 31. Which one of the following events in a botanical garden is never directly influenced by light?

किसी वनस्पति उद्यान में, निम्नलिखित में से किस पर प्रकाश का सीधा प्रभाव बिल्कुल नहीं पड़ता ?

Options:

- 1) Flowering
फूल निकलने की प्रक्रिया
- 2) Photosynthesis
प्रकाश संश्लेषण
- 3) Transpiration
वाष्पोत्सर्जन
- 4) Fertilization
निषेचन

Correct Answer: Fertilization

निषेचन

Candidate Answer: Fertilization

निषेचन

Question 32. What type of lens is used to correct vision of a person suffering from Myopia?

निकट दृष्टि दोष से पीड़ित व्यक्ति की दृष्टि सही करने के लिए किस प्रकार के लेन्स का प्रयोग किया जाता है ?

Options:

- 1) Convex lens
उत्तल लेन्स
- 2) Concave lens
अवतल लेन्स
- 3) Crossed lens
अल्पतम विपथी लेन्स
- 4) Cylindrical lens
सिलिंड्रिकल लेन्स

Correct Answer: Concave lens

अवतल लेन्स

Candidate Answer: Concave lens

अवतल लेन्स

Question 33. Iodex, a pain relief balm, has the smell of _____ .

दर्द निवारक मरहम, आयोडेक्स में से किसकी गंध आती है ?

Options:

- 1) Methyl salicylate
मिथाइल सेलिसिलेट
- 2) Ethyl salicylate
इथाईल सेलिसिलेट
- 3) Propyl salicylate
प्रोपाईल सेलिसिलेट
- 4) Butyl salicylate
ब्यूटाईल सेलिसिलेट

Correct Answer: Methyl salicylate

मिथाइल सेलिसिलेट

Candidate Answer: [NOT ANSWERED]

Question 34. Which of the following is usually not an air-pollutant?

निम्नलिखित में से कौन-सा सामान्यतः वायु प्रदूषक नहीं है ?

Options:

- 1) Hydrocarbons
हाइड्रोकार्बन
- 2) Sulphur dioxide
सल्फर डाइऑक्साइड
- 3) Carbon dioxide
कार्बन डाइऑक्साइड
- 4) Nitrous oxide
नाइट्रस ऑक्साइड

Correct Answer: Nitrous oxide

नाइट्रस ऑक्साइड

Candidate Answer: Carbon dioxide

कार्बन डाइऑक्साइड

Question 35. Which of the following is called the Land of White Elephants?

निम्नलिखित में से किसे सफेद हाथियों का देश कहते हैं ?

Options:

1) Thailand

थाइलैंड

2) Africa

अफ्रीका

3) Cuba

क्यूबा

4) Turkey

टर्की

Correct Answer: Thailand

थाइलैंड

Candidate Answer: [NOT ANSWERED]

Question 36. On April 10 2016, a huge fire broke out during fireworks display at one of the following temples of Kerala .

10 अप्रैल 2016 को केरल के एक मंदिर में आतिश-बाजी के दौरान भीषण आग लग गई थी। वह मन्दिर कौन-सा था ?

Options:

1) Chhotanikkara temple

छोटानीक्कारा मन्दिर

2) Puttingal temple

पुट्टिंगल मन्दिर

3) Vishnuvira temple

विष्णुवीर मन्दिर

4) Manarasala temple

मन्नारसाला मन्दिर

Correct Answer: Puttingal temple

पुट्टिंगल मन्दिर

Candidate Answer: Puttingal temple

पुट्टिंगल मन्दिर

Question 37. Which of the following games was included in Rio Olympics after more than 100 years?

निम्नलिखित में से किस खेल को रियो ओलंपिक में 100 साल से ज्यादा समय के बाद शामिल किया गया?

Options:

1) Diving

डाइविंग

2) Taekwondo

ताइक्वोंडो

3) Beach Volleyball

बीच-वॉलीबॉल

4) Golf

गॉल्फ

Correct Answer: Golf

गॉल्फ

Candidate Answer: Golf

गॉल्फ

Question 38. One of the following is 'Labour' in Economics.

निम्नलिखित में से एक अर्थशास्त्र में 'श्रमिक' कहलाता है, वह कौन है ?

Options:

1) A Musician performing for a benefit fund

कोई संगीतज्ञ जो किसी सुविधा-निधि के लिए कार्यक्रम में भाग ले रहा हो

2) A Painter working for his own pleasure

कोई चित्रकार जो अपने आनंद के लिए कार्य कर रहा है

3) Reading a book as a hobby

शौक के तौर पर पुस्तक पढ़ने वाला

4) A Mother teaching her own son

अपने पुत्र को पढ़ाने वाली माँ

Correct Answer: A Musician performing for a benefit fund

कोई संगीतज्ञ जो किसी सुविधा-निधि के लिए कार्यक्रम में भाग ले रहा हो

Candidate Answer: A Musician performing for a benefit fund
कोई संगीतज्ञ जो किसी सुविधा-निधि के लिए कार्यक्रम में भाग ले रहा हो

Question 39. Which of the following is a fish?

निम्नलिखित विकल्पों में से कौन सी मछली है ?

Options:

1) Jelly fish

जेली फिश

2) Lobster

लोबस्टर

3) Salmon

सालमन

4) Whale

व्हेल

Correct Answer: Salmon

सालमन

Candidate Answer: [NOT ANSWERED]

Question 40. The disconnected lines drawn on a map for showing slope -

किसी नक्शे पर ढाल को दिखाने के लिए खींची गई असम्बद्ध रेखाएं क्या कहलाती हैं ?

Options:

1) Bench marks

तल चिन्ह

2) Contours

समोच्च रेखा

3) Form lines

प्रपत्र लाईनें

4) Hachure

हैच्युर

Correct Answer: Hachure

हैच्युर

Candidate Answer: [NOT ANSWERED]

Question 41. A man standing close to the platform at a railway station experiences a pulling force towards a fast moving train because of _____ .

रेलवे स्टेशन के प्लेटफार्म पर खड़ा व्यक्ति तेजी से आती हुई ट्रेन की ओर खींचाव सा क्यों महसूस करता है ?

Options:

1) gravitational force between train and man

ट्रेन और व्यक्ति के बीच गुरुत्वाकर्षण बल

2) illusion of the man

व्यक्ति का भ्रम

3) the centripetal force

अभिकेन्द्र बल

4) pressure difference due to fast moving air in between

उनके बीच तेजी से गतिमान वायु के कारण दाब में अंतर

Correct Answer: pressure difference due to fast moving air in between

उनके बीच तेजी से गतिमान वायु के कारण दाब में अंतर

Candidate Answer: pressure difference due to fast moving air in between

उनके बीच तेजी से गतिमान वायु के कारण दाब में अंतर

Question 42. The Network is overloaded with enormous data sent by many computers within the network. The inability of the network to deliver the data is termed as _____ .

नेटवर्क के अंदर बहुत से कंप्यूटरों द्वारा भेजे गए भारी मात्रा में डाटा के अत्याधिक भर जाने पर नेटवर्क डाटा नहीं दे पाता, उसे क्या कहते हैं ?

Options:

1) Access control

एक्सेस कंट्रोल

2) Congestion

कन्जेशन

3) Error propagation

एरर प्रोपेगेशन

4) Deadlock

डेडलॉक

Correct Answer: Congestion

कन्जेशन

Candidate Answer: [NOT ANSWERED]

Question 43. Who is referred to as 'Frontier Gandhi'?

'सीमांत गांधी' किसे कहा जाता है ?

Options:

1) Sheikh Abdullah

शेख अब्दुल्ला

2) Manilal Gandhi

मणीलाल गांधी

3) Khan Abdul Gaffar Khan

खान अब्दुल गफ्फार खान

4) Gopal Krishna Gokhale

गोपाल कृष्ण गोखले

Correct Answer: Khan Abdul Gaffar Khan

खान अब्दुल गफ्फार खान

Candidate Answer: [NOT ANSWERED]

Question 44. Which of the following fuels causes minimum environmental pollution?

निम्नलिखित में से कौन से ईंधन से सबसे कम पर्यावरण प्रदूषण होता है ?

Options:

1) Diesel

डीजल

2) Kerosene

केरोसीन

3) Hydrogen

हाइड्रोजन

4) Coal

कोयला

Correct Answer: Hydrogen

हाइड्रोजन

Candidate Answer: Hydrogen

हाइड्रोजन

Question 45. 'Sun Temple' is situated in the state of _____ .

सूर्य मन्दिर कौन-से राज्य में स्थित है ?

Options:

1) Rajasthan

राजस्थान

2) Andhra Pradesh

आन्ध्र प्रदेश

3) Odisha

उड़ीसा

4) Tamil Nadu

तमिल नाडु

Correct Answer: Odisha

उड़ीसा

Candidate Answer: Rajasthan

राजस्थान

Question 46. Vinegar is _____ .

सिरका क्या है ?

Options:

1) diluted acetic acid

तनु एसिटिक एसिड

2) glacial acetic acid

ग्लेसिअल एसिटिक एसिड

3) glacial formic acid

ग्लेसिअल फोर्मिक एसिड

4) diluted formic acid

तनु फोर्मिक एसिड

Correct Answer: diluted acetic acid

तनु एसिटिक एसिड

Candidate Answer: glacial formic acid

ग्लेसिअल फोर्मिक एसिड

Question 47. Open Market Operations refer to _____ .

खुला बाजार कार्यवाही से क्या तात्पर्य है ?

Options:

1) Borrowings by Scheduled banks from RBI

अनुसूचित बैंकों द्वारा भारतीय रिजर्व बैंक से उधार लेना

2) Lending by Commercial banks to industry

वाणिज्यिक बैंकों द्वारा उद्योगों को उधार देना

3) Purchase and sale of Government securities by RBI

भारतीय रिजर्व बैंक द्वारा सरकारी प्रतिभूतियों की खरीद और बिक्री

4) Deposit mobilisation

निक्षेप संग्रहण

Correct Answer: Purchase and sale of Government securities by RBI

भारतीय रिजर्व बैंक द्वारा सरकारी प्रतिभूतियों की खरीद और बिक्री

Candidate Answer: Purchase and sale of Government securities by RBI

भारतीय रिजर्व बैंक द्वारा सरकारी प्रतिभूतियों की खरीद और बिक्री

Question 48. International 'Yoga Divas' is celebrated every year on _____ .

अन्तर्राष्ट्रीय योग दिवस प्रति वर्ष किस दिन मनाया जाता है ?

Options:

1) 21st May

21 मई

2) 21st June

21 जून

3) 25th May

25 मई

4) 25th June

25 जून

Correct Answer: 21st June

21 जून

Candidate Answer: 25th June

25 जून

Question 49. Which of the following Article of Indian Constitution deals with the Right to Equality before Law?

भारतीय संविधान का निम्नलिखित में से कौन-सा अनुच्छेद विधि के समक्ष समता के अधिकार से संबंधित है ?

Options:

1) Article - 13

अनुच्छेद-13

2) Article - 14

अनुच्छेद-14

3) Article - 15

अनुच्छेद-15

4) Article - 17

अनुच्छेद-17

Correct Answer: Article - 14

अनुच्छेद-14

Candidate Answer: [NOT ANSWERED]

Question 50. A group of inter-connected islands is known as _____ .

आपस में जुड़े द्वीप समूह को क्या कहते हैं ?

Options:

1) Strait

जलडमरू मध्य

2) Peninsula

प्रायद्वीप

3) Archipelago

आर्किपीलागो

4) Lagoon

लैगून

Correct Answer: Archipelago

आर्किपीलागो

Candidate Answer: Strait

जलडमरू मध्य

Question 51. Koushik can do a piece of work in X days and Krishnu can do the same work in Y days. If they work together, then they can do the work in

कौशिक किसी काम को X दिन में कर सकता है और क्रिश्नु उसी काम को Y दिन में कर सकता है। यदि दोनों मिलकर काम करें तो वे उस काम को कितने दिन में करसकेंगे ?

Options:

1) (X+Y) days

2)

$1/(X+Y)$ days

3)

$XY/(X+Y)$ days

4)

$(X+Y)/XY$ days

Correct Answer:

$XY/(X+Y)$ days

Candidate Answer:

$(X+Y)/XY$ days

Question 52. A hollow hemispherical bowl is made of silver with its outer radius 8 cm and inner radius 4 cm respectively. The bowl is melted to form a solid right circular cone of radius 8 cm. The height of the cone formed is

एक खोखला अर्धगोलाकार कटोरा सिल्वर का बना है जिसकी बाहरी त्रिज्या 8 से.मी. और आंतरिक त्रिज्या 4 से.मी. की है। कटोरे को 8 से.मी. त्रिज्या वाला एक ठोस समकोणिक शंकु बनाने के लिए गलाया जाता है। बने हुए शंकु की ऊंचाई कितनी होगी ?

Options:

1) 7 cm

7 से.मी.

2) 9 cm

9 से.मी.

3) 12 cm

12 से.मी.

4) 14 cm

14 से.मी.

Correct Answer: 14 cm

14 से.मी.

Candidate Answer: [NOT ANSWERED]

Question 53. While selling a shirt, a shopkeeper gives a discount of 7%. If he gives discount of 9% he earns Rs. 15 less on profit. The market price of the shirt is :-

एक कमीज़ बेचने पर दुकानदार 7% की छूट देता है। यदि वह 9% की छूट देता है, तो उसे Rs. 15 कम का लाभ मिलते हैं। कमीज़ का बाजार मूल्य कितना है ?

Options:

- 1) 712
- 2) 787
- 3) 750
- 4) 697

Correct Answer: 750**Candidate Answer:** 750

Question 54. The railway fares of air conditioned sleeper and ordinary sleeper class are in the ratio 4:1. The number of passengers travelled by air conditioned sleeper and ordinary sleeper classes were in the ratio 3:25. If the total collection was Rs. 37,000, how much did air conditioner sleeper passengers pay?

वातानुकूलित शयन श्रेणी और साधारण शयन श्रेणी का रेलवे किराया 4:1 के अनुपात में है। वातानुकूलित शयन और साधारण शयन श्रेणी द्वारा यात्रा करने वाले यात्रियों की संख्या 3:25 के अनुपात में थी। यदि कुल किराया संग्रह Rs. 37,000 हुआ, तो वातानुकूलित शयन श्रेणी के यात्रियों ने कितने किराये का भुगतान किया ?

Options:

- 1) Rs. 15,000
- 2) Rs. 10,000
- 3) Rs. 12,000
- 4) Rs. 16,000

Correct Answer: Rs. 12,000**Candidate Answer:** Rs. 12,000

Question 55. If the cost price of 20 books is the same as selling price of 25 books, then the loss percentage is

यदि 20 पुस्तकों का लागत मूल्य 25 पुस्तकों के विक्रय मूल्य के बराबर हो, तो हानि का प्रतिशत कितना होगा ?

Options:

- 1) 20
- 2) 25
- 3) 22
- 4) 24

Correct Answer: 20**Candidate Answer:** [NOT ANSWERED]

Question 56. The number of students in a class is increased by 20% and the number now becomes 66. Initially the number was

एक कक्षा में छात्रों की संख्या 20% बढ़कर 66 हो जाती है, तो प्रारम्भिक संख्या कितनी थी ?

Options:

- 1) 45
- 2) 50
- 3) 55
- 4) 60

Correct Answer: 55**Candidate Answer:** [NOT ANSWERED]

Question 57. Two trains start from a certain place on two parallel tracks in the same direction. The speed of the trains are 45 Km/hr and 40 Km/hr respectively. The distance between the two trains after 45 minutes will be

दो ट्रेनों किसी स्थान से दो समांतर ट्रैकों पर समान दिशा में चलती हैं। ट्रेनों की गति क्रमशः 45 कि.मी. /घंटा और 40 कि.मी. /घंटा है तो 45 मिनट बाद दोनों ट्रेनों के बीच की दूरी कितनी होगी ?

Options:

- 1) 2.5 km
2.5 कि.मी.
- 2) 2.75 km
2.75 कि.मी.
- 3) 3.7 km
3.7 कि.मी.
- 4) 3.75 km
3.75 कि.मी.

Correct Answer: 3.75 km

3.75 कि.मी.

Candidate Answer: [NOT ANSWERED]

Question 58.

If $x + 5 + \frac{1}{x+1} = 6$, then the value of $(x+1)^3 + \frac{1}{(x+1)^3}$ is

यदि $x + 5 + \frac{1}{x+1} = 6$ हो, तो $(x+1)^3 + \frac{1}{(x+1)^3}$ का मान बताएं।

Options:

- 1) 2
- 2) 0
- 3) -2
- 4) 4

Correct Answer: 2

Candidate Answer: [NOT ANSWERED]

Question 59.

If $a^2 + 1 = 9a$, ($a \neq 0$) then the value of $(a)^2 + \frac{1}{(a)^2}$ is

यदि $a^2 + 1 = 9a$, ($a \neq 0$) हो, तो $(a)^2 + \frac{1}{(a)^2}$ का मान बताएं।

Options:

- 1) 81
- 2) 18
- 3) 79
- 4) 83

Correct Answer: 79

Candidate Answer: [NOT ANSWERED]

Question 60. The vertical angle A of an isosceles triangle $\triangle ABC$ is three times the angle B of it. The measure of the angle A is

किसी समद्विभुज $\triangle ABC$ का शीर्ष कोण A उसके कोण B से तीन गुणा है तो कोण A का माप क्या होगा ?

Options:

- 1) 90°
- 2) 108°
- 3) 100°
- 4) 36°

Correct Answer: 108°

Candidate Answer: [NOT ANSWERED]

Question 61. Two circles touch each other internally. The radius of the larger circle is 6 cm and the distance between the centre is 2 cm, then the radius (in cms) of the other circle is

दो वृत्त एक दूसरे को अंदर की ओर स्पर्श करते हैं। बड़े वृत्त की त्रिज्या 6 से.मी. है, और केन्द्रों के बीच दूरी 2 से.मी. है, तो दूसरे वृत्त की त्रिज्या (से.मी. में) कितनी होगी ?

Options:

- 1) 8
- 2) 2
- 3) 4
- 4) 3

Correct Answer: 4

Candidate Answer: [NOT ANSWERED]

Question 62.

If $y = 2 \sec\theta$ and $x = 3\tan\theta$ then $\frac{x^2}{9} - \frac{y^2}{4}$ is

यदि $y = 2 \sec\theta$ and $x = 3\tan\theta$ हो, तो $\frac{x^2}{9} - \frac{y^2}{4}$ का मान बताइए ?

Options:

- 1) 0
- 2) -1
- 3) 2
- 4) 1

Correct Answer: -1**Candidate Answer:** [NOT ANSWERED]Question 63. When n is divided by 4, the remainder is 3. The remainder when $2n$ is divided by 4 is:

n को 4 से भाग देने पर 3 शेष रहता है। $2n$ को 4 से भाग देने पर क्या शेष होगा ?

Options:

- 1) 1
- 2) 2
- 3) 3
- 4) 6

Correct Answer: 2**Candidate Answer:** [NOT ANSWERED]

Question 64. Eight members of a club donate Rs. 100 each towards a Relief Fund and the President of the club donates Rs. 50 more than the average donation of all (including President) of them. Then the contribution of the president is

किसी क्लब के आठ सदस्य राहत कोष में Rs. 100 प्रति व्यक्ति दान देते हैं, और क्लब का अध्यक्ष औसत दान से, (जिसमें अध्यक्ष का दान शामिल है) Rs. 50 अधिक दान देता है, तो अध्यक्ष का अंशदान कितना है ?

Options:

- 1) 106.25
- 2) 156.25
- 3) 56.25
- 4) 206.25

Correct Answer: 106.25**Candidate Answer:** [NOT ANSWERED]

Question 65.

If $a + b + c = 15$ and $\frac{1}{a} + \frac{1}{b} + \frac{1}{c} = \frac{71}{abc}$, then the value of $a^3 + b^3 + c^3 - 3abc$ is

यदि $a + b + c = 15$ और $\frac{1}{a} + \frac{1}{b} + \frac{1}{c} = \frac{71}{abc}$, तो $a^3 + b^3 + c^3 - 3abc$ किस्के बराबर होगा?

Options:

- 1) 160
- 2) 180
- 3) 200
- 4) 220

Correct Answer: 180**Candidate Answer:** [NOT ANSWERED]

Question 66.

If k is the largest possible real number such that $p^4 + q^4 = (p^2 + kpq + q^2)(p^2 - kpq + q^2)$, then the value of k is

यदि k सबसे बड़ी संभव वास्तविक ऐसी संख्या है कि $p^4 + q^4 = (p^2 + kpq + q^2)(p^2 - kpq + q^2)$ हो तो k का मान क्या होगा ?

Options:

1) 1

2)

 $-\sqrt{2}$

3) 2

4)

 $\sqrt{2}$ **Correct Answer:** $\sqrt{2}$ **Candidate Answer:** [NOT ANSWERED]Question 67. ΔABC is similar to ΔDEF . If the ratio of similar sides is $K:1$, the ratio of their areas is

ΔABC , ΔDEF के बराबर है। यदि समान भुजाओं का अनुपात $K:1$ है, तो उनके क्षेत्रफलों का अनुपात क्या होगा ?

Options:

1)

 $k^2 : 1$ 2) $2k:1$

3)

 $\frac{k^2}{2} : 1$

4)

 $2k^2:1$ **Correct Answer:** $k^2 : 1$ **Candidate Answer:** [NOT ANSWERED]

Question 68.

ΔABC inscribed in a circle so that BC is diameter. The tangent at a point C intersects BA when produced at a point D .

If $\angle ABC = 36^\circ$ then the value of $\angle ADC$ is

एक वृत्त में ΔABC इस प्रकार बना है कि BC व्यास है। स्पर्श रेखा बिंदु C पर BA को तब काटती है जब उसे बिंदु D तक खिंचा जाए। यदि $\angle ABC = 36^\circ$ तो $\angle ADC$ का मान क्या है?

Options:1) 36° 2) 44° 3) 48° 4) 54° **Correct Answer:** 54° **Candidate Answer:** 54° Question 69. If the length of the shadow of a vertical pole be $\sqrt{3}$ times the height of the pole, the angle of elevation of the sun is:-

यदि किसी उर्ध्वाधर खम्भे की छाया खम्भे की ऊंचाई से $\sqrt{3}$ गुणा हो तो सूर्य का उन्नयन कोण अकितने डिग्री का होगा ?

Options:

- 1) 60°
- 2) 45°
- 3) 30°
- 4) 90°

Correct Answer: 30° **Candidate Answer:** 30°

Question 70. If the simple interest on a sum of money for 2 years at 5% per annum is Rs. 50, the compound interest on the same at the same rate and for the same time is:-

यदि किसी राशि पर 5% वार्षिक की दर से 2 वर्ष का साधारण ब्याज Rs. 50 है, तो उस राशि पर उसी दर से उतने ही समय का चक्रवृद्धि ब्याज कितना होगा ?

Options:

- 1) Rs. 50.50
- 2) Rs. 51.25
- 3) Rs. 51.50
- 4) Rs. 50.05

Correct Answer: Rs. 51.25**Candidate Answer:** Rs. 51.25

Question 71.

If $r \sin \theta = \sqrt{3}$, and $r \cos \theta = 1$, then values of r and θ are: ($0^\circ \leq \theta \leq 90^\circ$)

यदि $r \sin \theta = \sqrt{3}$ और $r \cos \theta = 1$, तो r और θ का मान क्या होगा? ($0^\circ \leq \theta \leq 90^\circ$)

Options:

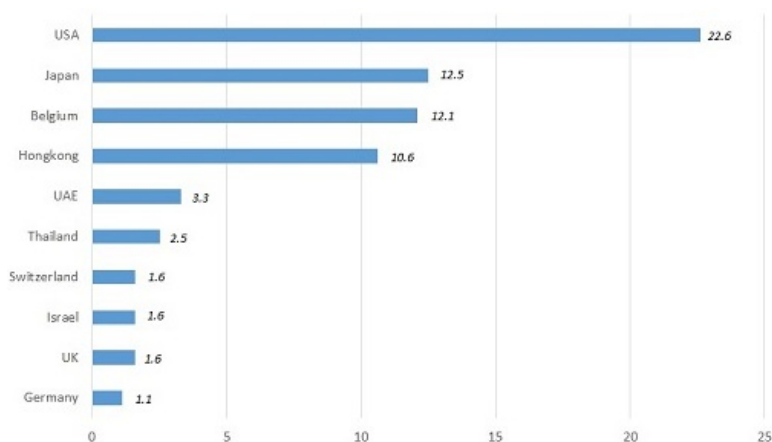
- 1) $r=1, \theta=30^\circ$
- 2) $r=1/2, \theta=30^\circ$
- 3)
 $r=\sqrt{3}, \theta=30^\circ$

- 4) $r=2, \theta=60^\circ$

Correct Answer: $r=2, \theta=60^\circ$ **Candidate Answer:** [NOT ANSWERED]

Question 72. Study the bar diagram carefully and answer the following questions. Export (in Billion Rupees) of gems and jewellery in the year 1991-1992 is given.

बार डाइग्राम का ध्यानपूर्वक अध्ययन कीजिए और निम्नलिखित प्रश्नों के उत्तर دیجिए। रत्न और आभूषणों का 1991-1992 में निर्यात (रुपये बिलियन में) दिया गया है।



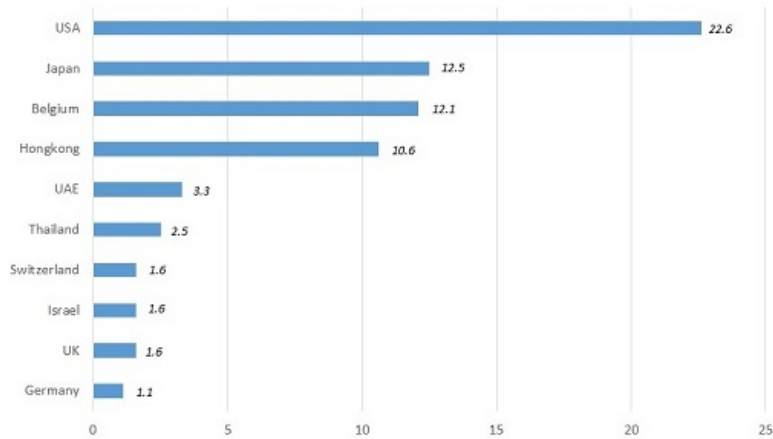
The ratio of the sum of the exports to the bottom six countries to the total exports to all the given countries in 1991-1992 is approximately:

1991-92 में नीचे छह देशों के किए गए निर्यात के योग और दिए गए सभी देशों के कुल निर्यात के योग का अनुपात लगभग कितना है ?

Options:1) $\frac{1}{6}$ 2) $\frac{1}{5}$ 3) $\frac{1}{8}$ 4) $\frac{2}{9}$ **Correct Answer:** $\frac{1}{6}$ **Candidate Answer:** $\frac{1}{6}$

Question 73. Study the bar diagram carefully and answer the following questions. Export (in Billion Rupees) of gems and jewellery in the year 1991-1992 is given.

बार डाइग्राम का ध्यानपूर्वक अध्ययन कीजिए और निम्नलिखित प्रश्नों के उत्तर दीजिए। रत्न और आभूषणों का 1991-1992 में निर्यात (रुपये बिलियन में) दिया गया है।



The country to which twice the export is nearly equal to the average exports in 1991-92 is

वह कौन-सा देश है जिसमें 1991-92 में हुआ निर्यात का दोगुना, औसत निर्यात के बराबर है ?

Options:

1) U.K

यू.के.

2) Thailand

थाइलैण्ड

3) Israel

इजराइल

4) UAE

यू. ए. ई.

Correct Answer: UAE

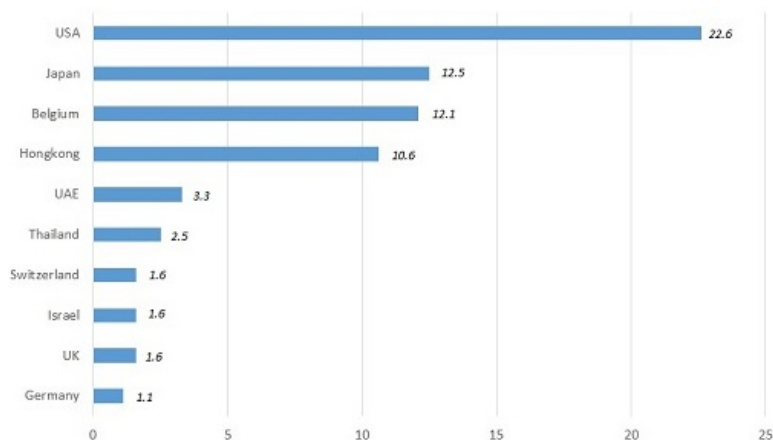
यू. ए. ई.

Candidate Answer: UAE

यू. ए. ई.

Question 74. Study the bar diagram carefully and answer the following questions. Export (in Billion Rupees) of gems and jewelry in the year 1991-1992 is given.

बार डायग्राम का ध्यानपूर्वक अध्ययन कीजिए और निम्नलिखित प्रश्नों के उत्तर दीजिए। रत्न और आभूषणों का 1991-1992 में निर्यात (रुपये बिलियन में) दिया गया है।



The ratio of the total exports to Japan, Belgium and HongKong to the export to rest of the countries in 1991-92 is nearly:

जापान, बेल्जियम और हॉंगकॉग को किए गए कुल निर्यात और 1991-92 में शेष देशों को किए गए निर्यात का अनुपात लगभग कितना है ?

Options:

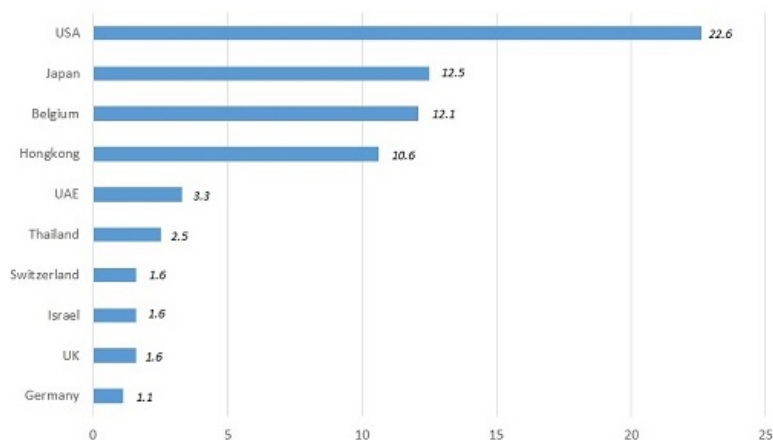
- 1) 35:34
- 2) 35:69
- 3) 69:35
- 4) 35:35

Correct Answer: 35:34

Candidate Answer: 35:34

Question 75. Study the bar diagram carefully and answer the following questions. Export (in Billion Rupees) of gems and jewelry in the year 1991-1992 is given.

बार डायग्राम का ध्यानपूर्वक अध्ययन कीजिए और निम्नलिखित प्रश्नों के उत्तर दीजिए। रत्न और आभूषणों का 1991-1992 में निर्यात (रुपये बिलियन में) दिया गया है।



The export to Hongkong is approximately how many times the export to Germany?

हॉंगकॉगको किया गया निर्यात जर्मनी को किए गए निर्यात के लगभग कितना गुना है ?

Options:

- 1) 8
- 2) 9
- 3) 10
- 4) 11

Correct Answer: 10

Candidate Answer: 9

Question 76. In the following question, out of the four alternatives, choose the word which best expresses the meaning of the given word and click the button corresponding to it.

SCANDALIZED

Options:

- 1) IRRITATED
- 2) SCARED
- 3) WORRIED
- 4) SHOCKED

Correct Answer: SHOCKED

Candidate Answer: [NOT ANSWERED]

Question 77. In the following question, out of the four alternatives, choose the word which is opposite in meaning to the given word and click the button corresponding to it.

INSOLENT

Options:

- 1) MANNERLY
- 2) HAUGHTY
- 3) DEFIANT
- 4) RUDE

Correct Answer: MANNERLY

Candidate Answer: [NOT ANSWERED]

Question 78. Four words are given, out of which only one word is spelt correctly. Choose the correctly spelt word and click the button corresponding to it.

Options:

- 1) Immense
- 2) Imense
- 3) Immiense
- 4) Imminse

Correct Answer: Immense

Candidate Answer: Immense

Question 79. In the following questions, one part of the sentence may have an error. Find out which part of the sentence has an error and click the button corresponding to it. If the sentence is free from error, click the "No error" option.

The leader (A) / with all his followers (B) / are send to prison. (C) / No Error (D)

Options:

- 1) A
- 2) B
- 3) C
- 4) D

Correct Answer: C

Candidate Answer: C

Question 80. In the following questions, one part of the sentence may have an error. Find out which part of the sentence has an error and click the button corresponding to it. If the sentence is free from error, click the "No error" option.

Do you know (A) / whom the (B) / next speaker is? (C) / No Error (D)

Options:

- 1) A
- 2) B
- 3) C
- 4) D

Correct Answer: B

Candidate Answer: D

Question 81. In the following questions, one part of the sentence may have an error. Find out which part of the sentence has an error and click the button corresponding to it. If the sentence is free from error, click the "No error" option.

He is having an attack (A) / of fever everyday (B) / for the last few days. (C) / No Error (D)

Options:

- 1) A
- 2) B
- 3) C
- 4) D

Correct Answer: A

Candidate Answer: [NOT ANSWERED]

Question 82. The sentences given with blanks are to be filled with an appropriate word(s). Four alternatives are suggested for each question. For each question, choose the correct alternative and click the button corresponding to it.

Children must be _____ to their parents.

Options:

- 1) obedient
- 2) obeying
- 3) obey
- 4) obeyed

Correct Answer: obedient

Candidate Answer: obedient

Question 83. The sentences given with blanks are to be filled with an appropriate word(s). Four alternatives are suggested for each question. For each question, choose the correct alternative and click the button corresponding to it.

Every minister is _____ to the Parliament.

Options:

- 1) responsive
- 2) response
- 3) responsibility
- 4) responsible

Correct Answer: responsible

Candidate Answer: responsible

Question 84. The sentences given with blanks are to be filled with an appropriate word(s). Four alternatives are suggested for each question. For each question, choose the correct alternative and click the button corresponding to it.

She had a _____ talk with her friend.

Options:

- 1) hard to hard
- 2) heart to heart
- 3) hard to heart
- 4) heart to hard

Correct Answer: heart to heart

Candidate Answer: heart to heart

Question 85. In each of the questions, four alternatives are given for the Idiom/Phrase. Choose the alternative which best expresses the meaning of the Idiom/Phrase and click the button corresponding to it.

Bark is worse than his bite

Options:

- 1) Threat is worse than the action taken
- 2) Temper cannot be controlled
- 3) Ferocious scolding hurt more than his action
- 4) Anger is always justified

Correct Answer: Threat is worse than the action taken

Candidate Answer: Ferocious scolding hurt more than his action

Question 86. In each of the questions, four alternatives are given for the Idiom/Phrase. Choose the alternative which best expresses the meaning of the Idiom/Phrase and click the button corresponding to it.

Throw caution to the winds

Options:

- 1) To be fearful
- 2) To warn others not to travel
- 3) To behave recklessly
- 4) To behave with care and caution

Correct Answer: To behave recklessly

Candidate Answer: To behave recklessly

Question 87. In each of the questions, four alternatives are given for the Idiom/Phrase. Choose the alternative which best expresses the meaning of the Idiom/Phrase and click the button corresponding to it.

Ill at ease

Options:

- 1) Unwell
- 2) Irritated
- 3) Uneasy
- 4) Confused

Correct Answer: Uneasy

Candidate Answer: [NOT ANSWERED]

Question 88. Out of the four alternatives, choose the one which can be substituted for the given words/sentences and click the button corresponding to it.

An action or event that happens before another important one and forms an introduction to it.

Options:

- 1) Foreword
- 2) Predecessor
- 3) Prefix
- 4) Prelude

Correct Answer: Prelude

Candidate Answer: Prelude

Question 89. Out of the four alternatives, choose the one which can be substituted for the given words/sentences and click the button corresponding to it.

A computer printout sent out by a bank regarding debits and credits in your account.

Options:

- 1) Bank draft
- 2) Statement
- 3) Over-draft
- 4) Payee

Correct Answer: Statement

Candidate Answer: Statement

Question 90. Out of the four alternatives, choose the one which can be substituted for the given words/sentences and click the button corresponding to it.

Refresh and revive

Options:

- 1) Invigorate
- 2) Investigate
- 3) Invalidate
- 4) Invigilate

Correct Answer: Invigorate

Candidate Answer: [NOT ANSWERED]

Question 91. A sentence/a part of the sentence is underlined. Four alternatives are given to the underlined part which will improve the sentence. Choose the correct alternative and click the button corresponding to it. In case no improvement is needed, click the button corresponding to "No improvement".

Except him, no one could answer the question.

Options:

- 1) Exception of him
- 2) Excepting him
- 3) Except for him
- 4) No improvement

Correct Answer: Except for him

Candidate Answer: No improvement

Question 92. A sentence/a part of the sentence is underlined. Four alternatives are given to the underlined part which will improve the sentence. Choose the correct alternative and click the button corresponding to it. In case no improvement is needed, click the button corresponding to "No improvement".

The common fruitfly is technically called as "drosophila"

Options:

- 1) called
- 2) known by
- 3) known as
- 4) No improvement

Correct Answer: known as

Candidate Answer: known as

Question 93. A sentence/a part of the sentence is underlined. Four alternatives are given to the underlined part which will improve the sentence. Choose the correct alternative and click the button corresponding to it. In case no improvement is needed, click the button corresponding to "No improvement".

Give the tickets to whomever comes first.

Options:

- 1) whoever
- 2) whichever
- 3) whatever
- 4) No improvement

Correct Answer: whoever

Candidate Answer: whoever

Question 94. A sentence/a part of the sentence is underlined. Four alternatives are given to the underlined part which will improve the sentence. Choose the correct alternative and click the button corresponding to it. In case no improvement is needed, click the button corresponding to "No improvement".

Though very young, she has a sense of flying high.

Options:

- 1) imagery
- 2) imaginary
- 3) imagination
- 4) No improvement

Correct Answer: imagination

Candidate Answer: No improvement

Question 95. A sentence/a part of the sentence is underlined. Four alternatives are given to the underlined part which will improve the sentence. Choose the correct alternative and click the button corresponding to it. In case no improvement is needed, click the button corresponding to "No improvement".

The greatest thing in the style of writing or speaking, is to have a use of metaphor.

Options:

- 1) knowledge
- 2) command
- 3) need
- 4) No improvement

Correct Answer: knowledge

Candidate Answer: [NOT ANSWERED]

Question 96. A passage is given with 5 questions following it. Read the passage carefully and choose the best answer to each question out of the four alternatives and click the button corresponding to it.

My worries were increasing. The boy at the shop was becoming more clamorous. My sales were poor, as the railways were admitting more pedlars on the platforms. My cash receipts were going down and my credit sales alone flourished. The wholesale merchants who supplied me with goods stopped credit to me. The boy's method of account-keeping was so chaotic that I did not know whether I was moving forward or backward. He produced cash from the counter in a haphazard manner, and there were immense gaps on the shelves all over the shop. The complaint by the public was that nothing one wanted was ever available. Suddenly the railways gave me notice to quit. I pleaded with the old stationmaster and porter, but they could do nothing; the order had come from high up. The shop was given to a new contractor.

I could not contemplate the prospect of being cut off from the railways. I grew desperate and angry. I shed tears at seeing a new man in the place where I and my father had sat. I slapped the boy on the cheek and he cried, and his father, the porter, came down on me and said, 'this is what he gets for helping you! I'd always told the boy- He was not your paid servant, anyway.'

Why does the speaker say that his sales were poor?

Options:

- 1) Because his cash receipts were going down
- 2) Because the boy at the shop was becoming more clamorous.
- 3) Because the railways were admitting more pedlars on the platform
- 4) Because there were no buyers

Correct Answer: Because the railways were admitting more pedlars on the platform

Candidate Answer: Because the railways were admitting more pedlars on the platform

Question 97. A passage is given with 5 questions following it. Read the passage carefully and choose the best answer to each question out of the four alternatives and click the button corresponding to it.

My worries were increasing. The boy at the shop was becoming more clamorous. My sales were poor, as the railways were admitting more pedlars on the platforms. My cash receipts were going down and my credit sales alone flourished. The wholesale merchants who supplied me with goods stopped credit to me. The boy's method of account-keeping was so chaotic that I did not know whether I was moving forward or backward. He produced cash from the counter in a haphazard manner, and there were immense gaps on the shelves all over the shop. The complaint by the public was that nothing one wanted was ever available. Suddenly the railways gave me notice to quit. I pleaded with the old stationmaster and porter, but they could do nothing; the order had come from high up. The shop was given to a new contractor.

I could not contemplate the prospect of being cut off from the railways. I grew desperate and angry. I shed tears at seeing a new man in the place where I and my father had sat. I slapped the boy on the cheek and he cried, and his father, the porter, came down on me and said, 'this is what he gets for helping you! I'd always told the boy- He was not your paid servant, anyway.'

How did the boy's method of account-keeping affect the speaker?

Options:

- 1) His worries increased
- 2) He produced cash from the counter in a haphazard manner.
- 3) His sales were poor
- 4) He did not know if he was moving forward or backward

Correct Answer: He did not know if he was moving forward or backward

Candidate Answer: He did not know if he was moving forward or backward

Question 98. A passage is given with 5 questions following it. Read the passage carefully and choose the best answer to each question out of the four alternatives and click the button corresponding to it.

My worries were increasing. The boy at the shop was becoming more clamorous. My sales were poor, as the railways were admitting more pedlars on the platforms. My cash receipts were going down and my credit sales alone flourished. The wholesale merchants who supplied me with goods stopped credit to me. The boy's method of account-keeping was so chaotic that I did not know whether I was moving forward or backward. He produced cash from the counter in a haphazard manner, and there were immense gaps on the shelves all over the shop. The complaint by the public was that nothing one wanted was ever available. Suddenly the railways gave me notice to quit. I pleaded with the old stationmaster and porter, but they could do nothing; the order had come from high up. The shop was given to a new contractor.

I could not contemplate the prospect of being cut off from the railways. I grew desperate and angry. I shed tears at seeing a new man in the place where I and my father had sat. I slapped the boy on the cheek and he cried, and his father, the porter, came down on me and said, 'this is what he gets for helping you! I'd always told the boy- He was not your paid servant, anyway.'

Why did the public complain?

Options:

- 1) Because his credit at the wholesalers' was gone
- 2) Because nothing one ever wanted was available
- 3) Because there were gaps on the shelves all over the shop
- 4) Because the railways gave him notice to quit

Correct Answer: Because nothing one ever wanted was available

Candidate Answer: Because nothing one ever wanted was available

Question 99. A passage is given with 5 questions following it. Read the passage carefully and choose the best answer to each question out of the four alternatives and click the button corresponding to it.

My worries were increasing. The boy at the shop was becoming more clamorous. My sales were poor, as the railways were admitting more pedlars on the platforms. My cash receipts were going down and my credit sales alone flourished. The wholesale merchants who supplied me with goods stopped credit to me. The boy's method of account-keeping was so chaotic that I did not know whether I was moving forward or backward. He produced cash from the counter in a haphazard manner, and there were immense gaps on the shelves all over the shop. The complaint by the public was that nothing one wanted was ever available. Suddenly the railways gave me notice to quit. I pleaded with the old stationmaster and porter, but they could do nothing; the order had come from high up. The shop was given to a new contractor.

I could not contemplate the prospect of being cut off from the railways. I grew desperate and angry. I shed tears at seeing a new man in the place where I and my father had sat. I slapped the boy on the cheek and he cried, and his father, the porter, came down on me and said, 'this is what he gets for helping you! I'd always told the boy- He was not your paid servant, anyway.'

Where did the order to quit come from?

Options:

- 1) From the old station master
- 2) From high up.
- 3) From the railway authorities
- 4) From the contractor

Correct Answer: From high up.

Candidate Answer: From the railway authorities

Question 100. A passage is given with 5 questions following it. Read the passage carefully and choose the best answer to each question out of the four alternatives and click the button corresponding to it.

My worries were increasing. The boy at the shop was becoming more clamorous. My sales were poor, as the railways were admitting more pedlars on the platforms. My cash receipts were going down and my credit sales alone flourished. The wholesale merchants who supplied me with goods stopped credit to me. The boy's method of account-keeping was so chaotic that I did not know whether I was moving forward or backward. He produced cash from the counter in a haphazard manner, and there were immense gaps on the shelves all over the shop. The complaint by the public was that nothing one wanted was ever available. Suddenly the railways gave me notice to quit. I pleaded with the old stationmaster and porter, but they could do nothing; the order had come from high up. The shop was given to a new contractor.

I could not contemplate the prospect of being cut off from the railways. I grew desperate and angry. I shed tears at seeing a new man in the place where I and my father had sat. I slapped the boy on the cheek and he cried, and his father, the porter, came down on me and said, 'this is what he gets for helping you! I'd always told the boy- He was not your paid servant, anyway.'

Why did the speaker shed tears?

Options:

- 1) Because he saw a new person, where he and his father had sat
- 2) Because he was cut off from the railways.
- 3) Because he grew desperate and angry.
- 4) Because he slapped the boy on the cheek.

Correct Answer: Because he saw a new person, where he and his father had sat

Candidate Answer: Because he saw a new person, where he and his father had sat