



Staff Selection Commission
(Government Of India)

REGISTRATION NUMBER : 1203007813
EXAM DATE : 3-September-2016
EXAM NAME : SSC Examination 2016
TOTAL MARKS : 200

CANDIDATE NAME : ANTRIKSH PAL
EXAM START TIME : 13:15:00
EXAM DURATION : 01:15 Hrs
TOTAL NO OF QUESTIONS : 100

Question 1. Select the related word/letters/numbers from the given alternatives:

दिये गये विकल्पों में से संबन्धित शब्द/अक्षरों/संख्या को चुनिए।

Accomodation : Rent :: Journey : ?

आवास : किराया :: यात्रा : ?

Options:

1) Expense

व्यय

2) Octroi

चुंगी

3) Freight

भाड़ा

4) Fare

किराया

Correct Answer: Fare

किराया

Candidate Answer: Fare

किराया

Question 2. Select the related word/letters/numbers from the given alternatives:

दिये गये विकल्पों में से संबन्धित शब्द/अक्षरों/संख्या को चुनिए।

दिए गए विकल्पों में से सम्बन्धित शब्द/अक्षर/संख्या को चुनिए

ECFG : FDGH :: SQTU : ?

Options:

1) TRVU

2) TVUR

3) TRUV

4) SRTV

Correct Answer: TRUV

Candidate Answer: TRVU

Question 3. Select the related word/letters/numbers from the given alternatives:

दिये गये विकल्पों में से संबन्धित शब्द/अक्षरों/संख्या को चुनिए।

3 : 243 :: 5 : ?

Options:

1) 125

2) 625

3) 3025

4) 3125

Correct Answer: 3125

Candidate Answer: 3125

Question 4.

For the following questions

Find the odd word/letters/number from the given alternatives.

दिए गए विकल्पों में से विषम शब्द/अक्षर/संख्या को चुनिए

Options:

1) Kilogram

किलोग्राम

2) Quintal

क्विंटल

3) Ton

टन

4) Gallon

गैलन

Correct Answer: Gallon

गैलन

Candidate Answer: Gallon

गैलन

Question 5.

For the following questions

Find the odd word/letters/number from the given alternatives.

दिए गए विकल्पों में से विषम शब्द/अक्षर/संख्या को चुनिए

Options:

1) DBZ

2) QOM

3) USQ

4) JLN

Correct Answer: JLN

Candidate Answer: JLN

Question 6.

For the following questions

Find the odd word/letters/number from the given alternatives.

दिए गए विकल्पों में से विषम शब्द/अक्षर/संख्या को चुनिए ?

Options:

1) 36

2) 64

3) 54

4) 108

Correct Answer: 64

Candidate Answer: 64

Question 7. Arrange the following words as per order in the dictionary.

निम्नलिखित शब्दों को शब्दकोश में दिए गए क्रम के अनुसार लिखिए

1. Situation 2. Silver 3. Sitter 4. Simple 5. Signal

Options:

1) 5, 1, 3, 2, 4

2) 1, 4, 2, 5, 3

3) 5, 2, 4, 3, 1

4) 4, 2, 1, 5, 3

Correct Answer: 5, 2, 4, 3, 1

Candidate Answer: [NOT ANSWERED]

Question 8. A series is given, with one term missing. Choose the correct alternative from the given ones that will complete the series.

निम्नलिखित प्रश्न में एक अनुक्रम दिया गया है, जिसमें एक पद लुप्त है। दिए गए विकल्पों में से वह सही विकल्प चुनिए जो अनुक्रम को पूरा करेगा

ZXV , USQ , PNL , ?

Options:

1) MJH

2) JHF

3) KIG

4) KJI

Correct Answer: KIG

Candidate Answer: KIG

Question 9. In the following question, one term in the number series is wrong. Find out the wrong term.

निम्नलिखित प्रश्न में एक अनुक्रम दिया है, जिसमें एक पद गलत है। गलत पद ज्ञात कीजिए

3, 10, 27, 4, 16, 64, 5, 25, 125

Options:

1) 3

2) 4

3) 10

4) 27

Correct Answer: 10

Candidate Answer: 10

Question 10.

'A' and 'B' are brothers. 'C' and 'D' are sisters. A's son is D's brother. How is B related to C?

A और 'B' भाई हैं। 'C' और 'D' बहनें हैं। A का पुत्र D का भाई है। B का C से क्या संबंध है ?

Options:

1) Father

पिता

2) Brother

भाई

3) Grandfather

पितामह

4) Uncle

चाचा

Correct Answer: Uncle

चाचा

Candidate Answer: Uncle

चाचा

Question 11. A gets more marks than B but less than C. D gets less marks than E but more than A. If C gets less than D then who amongst A, B, C, D, E gets the highest marks?

A, B से अधिक किंतु C से कम अंक प्राप्त करता है। D, E से कम किंतु A से अधिक अंक प्राप्त करता है। यदि C, D से कम अंक प्राप्त करता है तो यह बताइए कि A, B, C, D, E में सबसे अधिक अंक कौन प्राप्त करता है ?

Options:

1) C

2) D

3) E

4) B

Correct Answer: E

Candidate Answer: [NOT ANSWERED]

Question 12. From the given alternative words, select the word which cannot be formed using the letters of the given word:

निम्नलिखित विकल्पों में से वह शब्द चुनिए जो दिए गए शब्द के अक्षरों का प्रयोग करके नहीं बनाया जा सकता ?

EXORBITANT

Options:

1) BITTER

2) EXPORT

3) EXNORA

4) EXTANT

Correct Answer: EXPORT

Candidate Answer: BITTER

Question 13. If $D = 4$
 $DESK = 39$, then
the value of $DRAW$ is

यदि $D = 4$

और $DESK = 39$ हो, तो

$DRAW$ किसके बराबर होगा ?

Options:

1) 57

2) 46

3) 45

4) 36

Correct Answer: 46

Candidate Answer: 46

Question 14.If ' \div ' stands for subtraction, '-' stands for addition, 'x' stands for division and '+' stands for multiplication, then which one of the following equation is correct?

यदि \div का अर्थ घटा है, - का अर्थ जोड़ना है, x का अर्थ भाग है, और + का अर्थ गुणा है। तो निम्नलिखित में से कौन-सा समीकरण सही है ?

Options:

1) $35 \div 4 - 25 \times 5 + 5 = 28$

2) $35 \div 4 - 25 \times 5 + 5 = 61$

3) $35 \div 4 - 25 \times 5 + 5 = 41$

4) $35 \div 4 - 25 \times 5 + 5 = 56$

Correct Answer: $35 \div 4 - 25 \times 5 + 5 = 56$

Candidate Answer: $35 \div 4 - 25 \times 5 + 5 = 28$

Question 15. In this question, some equations are solved on the basis of a certain system. On the same basis find out the correct answer from amongst the four alternatives for the unsolved equation.

$$15 \times 26 = 6512$$

$$29 \times 36 = 6923,$$

$$46 \times 54 = ?$$

कुछ समीकरण एक निश्चित प्रणाली से हल किए गए हैं। उसी आधार पर दिए गए विकल्पों में से सही उत्तर चुनकर लिखिए ?

$$15 \times 26 = 6512$$

$$29 \times 36 = 6923$$

$$46 \times 54 = ?$$

Options:

1) 5464

2) 4645

3) 4564

4) 4465

Correct Answer: 4645

Candidate Answer: 4645

Question 16. Select the missing numbers from the given alternatives

दिए गए विकल्पों में से लुप्त संख्या ज्ञात कीजिए ?

7	14	4
4	12	9
6	24	?

Options:

1) 19

2) 16

3) 21

4) 20

Correct Answer: 16

Candidate Answer: 16

Question 17. Rohan walks a distance of 3 kms towards North, then turns to his left and walks for 2 kms. He again turns left and walks for 3kms. At this point he turns to his left and walks for 3 kms. How far is he from the starting point?

रोहन उत्तर की ओर 3 कि.मी. की दूरी तय करता है, तब अपने बाईं ओर मुड़कर 2 कि.मी. तक चलता है। वह फिर बाईं ओर मुड़ जाता है और 3 कि.मी. तक चलता है। इस स्थान से वह फिर बाईं ओर मुड़कर 3 कि.मी. चलता है। अब वह अपने आरम्भिक स्थान से कितने कि.मी. दूर है ?

Options:

1) 5 kms

5 कि.मी.

2) 3 kms

3 कि.मी.

3) 2 kms

2 कि.मी.

4) 1 km

1 कि.मी.

Correct Answer: 1 km

1 कि.मी.

Candidate Answer: 1 km

1 कि.मी.

Question 18. Consider the given statement/s to be true and decide which of the given conclusions/assumptions can definitely be drawn from the given statement.

Statements: 1. Some principals are teachers.

2. All teachers are students.

Conclusions: I. All principals are students.

II. Some students are principals.

निम्नलिखित प्रश्न में एक या दो वक्तव्य दिये गये हैं, जिनके आगे दो निष्कर्ष/मान्यताएं, I और II निकाले गये हैं। आपको विचार करना है कि वक्तव्य सत्य है चाहे वह सामान्यतः शर्त तथ्यों से भिन्न प्रतीत होता हो। आपको निर्णय करना है कि दिए गए वक्तव्य में से कोन-सा निश्चित रूप से सही निष्कर्ष/मान्यता निकाला जा सकता है ?

वक्तव्य : 1. कुछ प्राधानचार्य शिक्षक हैं।

2. सभी शिक्षक छात्र हैं।

निष्कर्ष : I. सभी प्राधानाचार्य छात्र हैं।

II. कुछ छात्र प्राधानाचार्य हैं।

Options:

1) Only conclusion I follows

केवल निष्कर्ष I सही है।

2) Only conclusion II follows

केवल निष्कर्ष II सही है।

3) Both conclusion I and conclusion II follow

निष्कर्ष I और II दोनों सही हैं।

4) Neither conclusion I nor conclusion II follows

ना तो निष्कर्ष I सही है और ना ही निष्कर्ष II सही है।

Correct Answer: Only conclusion II follows

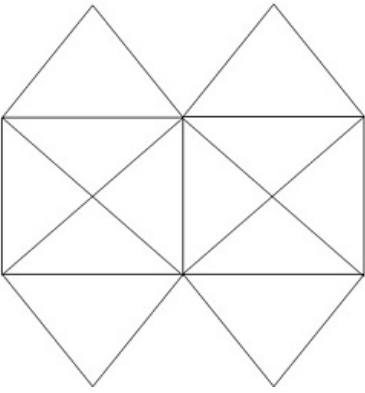
केवल निष्कर्ष II सही है।

Candidate Answer: Both conclusion I and conclusion II follow

निष्कर्ष I और II दोनों सही हैं।

Question 19. Find the number of triangles in the figure.

दी गई आकृति में कितने त्रिभुज हैं ?



Options:

1) 12

2) 20

3) 22

4) 24

Correct Answer: 22

Candidate Answer: 20

Question 20. Identify the diagram that best represents the relationship among the classes given below.

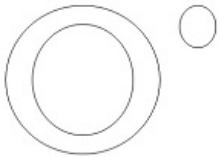
Criminals, Judges, Thieves

वह आरेख चुनिए जो निम्नलिखित वर्गों के बीच सही सम्बन्ध को दर्शाता है।

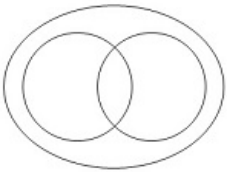
अपराधी, न्यायाधीश, चोर

Options:

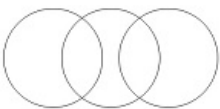
1)



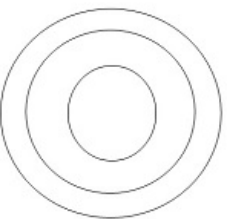
2)



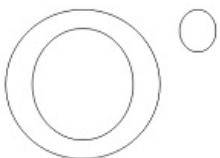
3)



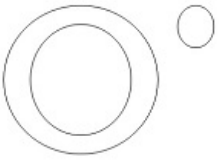
4)



Correct Answer:

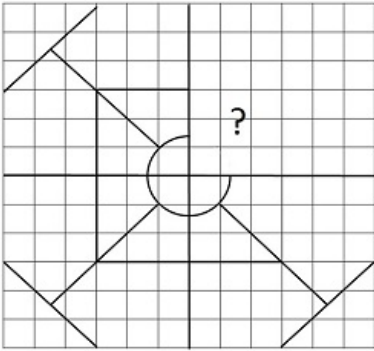


Candidate Answer:



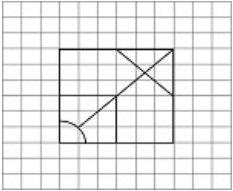
Question 21. Which answer figure will complete the pattern in the question figure?

कौन-सी उत्तर आकृति प्रश्न आकृति के प्रतिरूप को पूरा करेगी ?

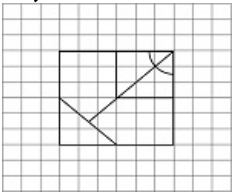


Options:

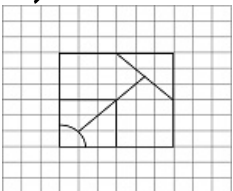
1)



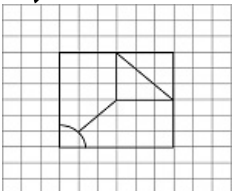
2)



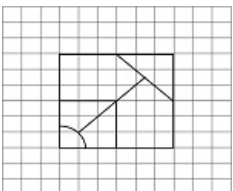
3)



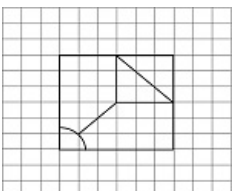
4)



Correct Answer:

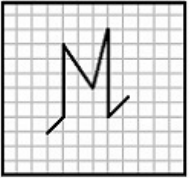


Candidate Answer:



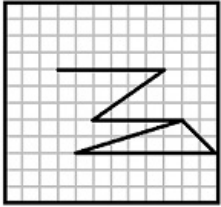
Question 22. From the given answer figures, select the one in which the question figure is hidden.

दी गई उत्तर आकृतियों में से उस उत्तर आकृति को चुनिए जिसमें प्रश्न आकृति निहित है ?

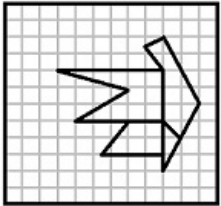


Options:

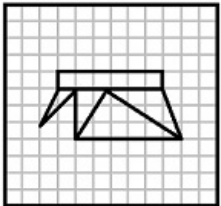
1)



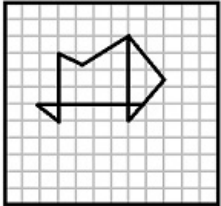
2)



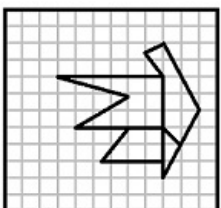
3)



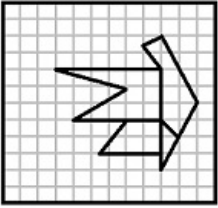
4)



Correct Answer:

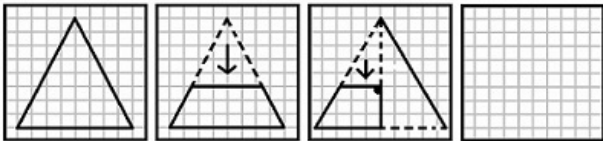


Candidate Answer:



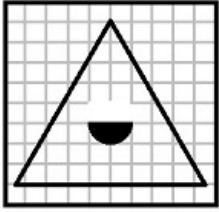
Question 23. A piece of paper is folded and cut as shown below in the question figures. From the given answer figures, indicate how it will appear when opened.

यदि किसी कागज को, नीचे प्रश्न आकृतियों में दिखाए अनुसार मोड़कर काटा जाए तो खोलने के बाद वह किस उत्तर आकृति जैसा दिखाई देगा ?

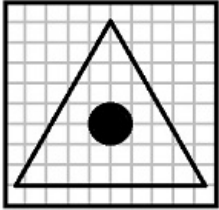


Options:


1)



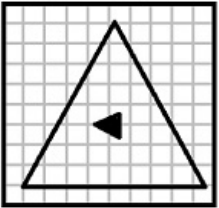
2)



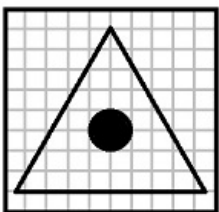
3)



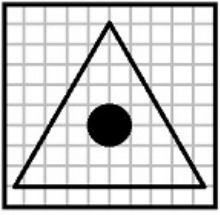
4)



Correct Answer:

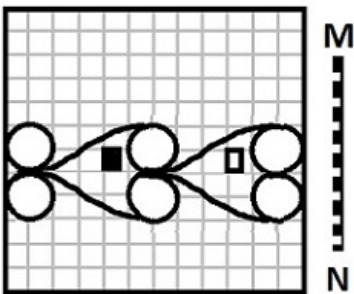


Candidate Answer:



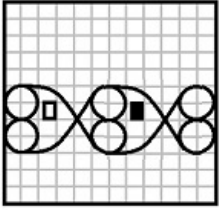
Question 24. If a mirror is placed on the line MN, then which of the answer figures is the right image of the given figure?

यदि एक दर्पण को MN रेखा पर रखा जाए तो दी गई उत्तर आकृतियों में से कौन-सी आकृति प्रश्न आकृति का सही प्रतिबिम्ब होगी ?

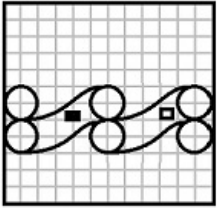


Options:

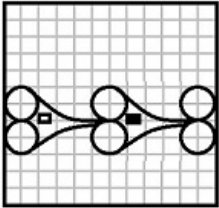
1)



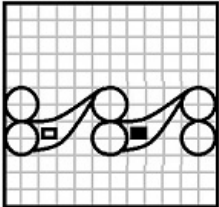
2)



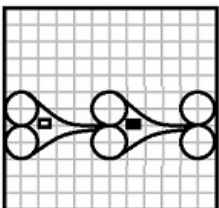
3)



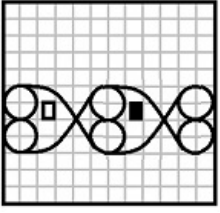
4)



Correct Answer:



Candidate Answer:



Question 25. rices can be represented *first by its row and next by its column*, e.g., 'L' can be represented by 00, 13, 24 etc., and 'T' can be represented by 59, 66, 78, etc.

Similarly you have to identify the set for the word 'CORK'

निम्नलिखित प्रश्न में विकल्पों में दिए गए संख्या-समूह, अक्षरों के दो वर्गों द्वारा दर्शाए गए हैं, जैसे कि नीचे दिए गए दो आव्यूहों में हैं। आव्यूह I के सतम्भ और पंक्ति की संख्या 0 से 4 तक दी गई है, और आव्यूह II के 5 से 9 तक, इन आव्यूहों से एक अक्षर को पहले उसकी पंक्ति और बाद में स्तम्भ संख्या द्वारा दर्शाया जा सकता है। उदाहरण के लिए, L को 00, 12, 24 आदि द्वारा दर्शाया जा सकता है तथा T को 59, 66, 78 आदि द्वारा दर्शाया जा सकता है। इसी तरह से आपको दिए शब्द 'CORK' के लिए समूह को पहचानना है।

	0	1	2	3	4
0	L	E	O	S	C
1	S	C	L	E	O
2	E	O	S	C	L
3	C	L	E	O	S
4	O	S	C	L	E

	5	6	7	8	9
5	R	K	U	N	T
6	N	T	R	K	U
7	K	U	N	T	R
8	T	R	K	U	N
9	U	N	T	R	K

Options:

1) 42, 21, 67, 58

2) 23, 33, 86, 85

3) 11, 40, 55, 75

4) 30, 14, 97, 56

Correct Answer: 11, 40, 55, 75

Candidate Answer: 11, 40, 55, 75

Question 26. Which of the following was not advocated by Mahatma Gandhi?

महात्मा गाँधी ने निम्नलिखित में से किसका समर्थन नहीं किया था ?

Options:

1) Prohibition

मद्य निषेध

2) Heavy Industries

भारी उद्योग

3) Village Panchayat

ग्राम पंचायत

4) Dignity of Labour

श्रम की गरिमा

Correct Answer: Heavy Industries

भारी उद्योग

Candidate Answer: Heavy Industries

भारी उद्योग

Question 27.The term of a Governor is

राज्यपाल का कार्यकाल कितने वर्ष का होता है ?

Options:

1) 4 Years

4 वर्ष

2) 5 Years

5 वर्ष

3) 6 Years

6 वर्ष

4) 3 Years

3 वर्ष

Correct Answer: 5 Years

5 वर्ष

Candidate Answer: 6 Years

6 वर्ष

Question 28.One of the following was not associated with the
Gadar party

निम्नलिखित में से किसका संबंध गदर पार्टी से नहीं था ?

Options:

1) Lala Hardayal

लाला हरदयाल

2) Baba Gurdit Singh

बाबा गुरदीत सिंह

3) Mohammad Barkatullah

मोहम्मद बर्कतुल्ला

4) Sohan Singh Bhakna

सोहन सिंह भाकरा

Correct Answer: Baba Gurdit Singh

बाबा गुरदीत सिंह

Candidate Answer: Sohan Singh Bhakna

सोहन सिंह भाकरा

Question 29. The hormone that stimulates heart beat is

हृदय की धड़कन को उत्तेजित करने वाला हार्मोन कौन-सा है ?

Options:

1) Thyroxine

थाईरोक्सिन

2) Gastrin

गैस्ट्रिन

3) Glycogen

ग्लाइकोजन

4) Dopamine

डोपामाइन

Correct Answer: Thyroxine

थाईरोक्सिन

Candidate Answer: Gastrin

गैस्ट्रिन

Question 30. Transformer is a device to convert

ट्रांसफॉर्मर किसे परिवर्तित करने की युक्ति है ?

Options:

1) D.C. to A.C.

डी.सी. को ए.सी. में

2) Low voltage D.C. into high voltage D.C.

कम वोल्टेज डी.सी को उच्च वोल्टेज डी.सी में

3) Low voltage A.C. into high voltage A.C.

कम वोल्टेज ए.सी को उच्च वोल्टेज ए.सी में

4) Mechanical energy into Electrical energy

यांत्रिक ऊर्जा को विद्युत ऊर्जा में

Correct Answer: Low voltage A.C. into high voltage A.C.

कम वोल्टेज ए.सी को उच्च वोल्टेज ए.सी में

Candidate Answer: D.C. to A.C.

डी.सी. को ए.सी. में

Question 31. _____ is a type of computing that performs computation, storage and even applications as a service across a network.

कम्प्यूटिंग का कौन-सा प्रकार कम्प्यूटेशन, स्टोरेज और यहां तक कि एप्लीकेशन को भी पूरे नेटवर्क में सर्विस के रूप में करता है ?

Options:

1) Cloud Computing

क्लाउड कम्प्यूटिंग

2) Distributed Computing

डिस्ट्रीब्यूटिड कम्प्यूटिंग

3) Parallel Computing

पैरलल कम्प्यूटिंग

4) Virtual Computing

वर्चुअल कम्प्यूटिंग

Correct Answer: Cloud Computing

क्लाउड कम्प्यूटिंग

Candidate Answer: [NOT ANSWERED]

Question 32. The presence of air bubble in blood stream is dangerous to life because

रक्त प्रवाह में हवा के बुलबुले का होना जीवन के लिए क्यों खतरनाक होता है ?

Options:

1) Air combines with blood forming a complex

हवा रक्त के साथ मिलकर जटिलता उत्पन्न कर देती है

2) The flow of blood increases manifold

रक्त का प्रवाह कई गुणा बढ़ जाता है

3) The flow of blood is obstructed

रक्त के प्रवाह में बाधा उत्पन्न हो जाती है

4) The pressure of blood increases manifold

रक्त दाब कई गुणा बढ़ जाता है

Correct Answer: The flow of blood is obstructed

रक्त के प्रवाह में बाधा उत्पन्न हो जाती है

Candidate Answer: The pressure of blood increases manifold
रक्त दाब कई गुणा बढ़ जाता है

Question 33. The study of relation of animals and plants to their surroundings is called_____

आस-पास के वातावरण में पशुओं और पौधों के संबन्ध के अध्ययन को क्या कहते हैं ?

Options:

1) Ecology
पारिस्थितिक विज्ञान

2) Ethrology
नृजाति विज्ञान

3) Genealogy
वंशावली विज्ञान

4) Iconology
प्रतिभाशास्त्र

Correct Answer: Ecology
पारिस्थितिक विज्ञान

Candidate Answer: Ecology
पारिस्थितिक विज्ञान

Question 34. Who among the following was not a member of Boxing team of India at Rio Olympics?

निम्नलिखित में से कौन रिओ ओलंपिक्स में भारतीय बॉक्सिंग टीम का सदस्य नहीं था ?

Options:

1) Shiv Thapa

शिव थापा

2) Manoj Kumar

मनोज कुमार

3) Vikas Krishan

विकास कृष्ण

4) Avtar Singh

अवतार सिंह

Correct Answer: Avtar Singh

अवतार सिंह

Candidate Answer: Manoj Kumar

मनोज कुमार

Question 35. As per the 2016-17 Budget, the largest source of money to the Government of India is

2016-17 के बजट के अनुसार, भारत सरकार के लिए पूंजी का सबसे बड़ा साधन क्या है ?

Options:

1) Income Tax

आय कर

2) Corporation Tax

निगम कर

3) Non-tax revenues

गैर-कर राजस्व

4) Borrowings and other liabilities

ऋण एवं अन्य दायित्व

Correct Answer: Borrowings and other liabilities

ऋण एवं अन्य दायित्व

Candidate Answer: Corporation Tax

निगम कर

Question 36. According to Malthusian theory of population

मलथूसियन के जनसंख्या सिद्धांत के अनुसार _____

Options:

1) Population increases in geometric ratio, food supply increases in arithmetic ratio

जनसंख्या ज्यामितीय अनुपात में बढ़ती है, खाद्य आपूर्ति गणितीय अनुपात में बढ़ती है ।

2) Population increases in arithmetic ratio, food supply increases in geometric ratio

जनसंख्या गणितीय अनुपात में बढ़ती है, खाद्य आपूर्ति ज्यामितीय अनुपात में बढ़ती है ।

3) Population increases in a harmonic mean, food supply increases in geometric ratio

जनसंख्या गुणोत्तर माध्य में बढ़ती है, खाद्य आपूर्ति ज्यामितीय अनुपात में बढ़ती है ।

4) Population increases in a harmonic ratio, food supply increases in a arithmetic ratio

जनसंख्या गुणोत्तर माध्य में बढ़ती है, खाद्य आपूर्ति गणितीय अनुपात में बढ़ती है ।

Correct Answer: Population increases in geometric ratio, food supply increases in arithmetic ratio
जनसंख्या ज्यामितीय अनुपात में बढ़ती है, खाद्य आपूर्ति गणितीय अनुपात में बढ़ती है ।

Candidate Answer: [NOT ANSWERED]

Question 37. The weight of an object is maximum

किसी वस्तु का अधिकतम भार किस स्थिति में होगा ?

Options:

1) on the equator
भूमध्य रेखा

2) on the surface of the earth
पृथ्वी की सतह पर

3) at the centre of the earth
पृथ्वी के केन्द्र पर

4) on the poles of the earth
पृथ्वी के ध्रुवों पर

Correct Answer: on the poles of the earth
पृथ्वी के ध्रुवों पर

Candidate Answer: at the centre of the earth
पृथ्वी के केन्द्र पर

Question 38. Which of the following plays an important role in photosynthesis?

निम्नलिखित में से क्या प्रकाश संश्लेषण में महत्वपूर्ण भूमिका निभाता है ?

Options:

1) Chloroplast

क्लोरोप्लास्ट

2) Centrosome

सेंट्रोसोम

3) Tonoplast

टोनोप्लास्ट

4) Nematoblast

नेमाटोब्लास्ट

Correct Answer: Chloroplast

क्लोरोप्लास्ट

Candidate Answer: Chloroplast

क्लोरोप्लास्ट

Question 39. The impact of Green Revolution was felt most in the case of

हरित क्रान्ति का सर्वाधिक प्रभाव किसमें देखा गया था?

Options:

1) Wheat

गेहूँ

2) Rice

चावल

3) Pulses

दाल

4) Oil seeds

तिलहन

Correct Answer: Wheat

गेहूँ

Candidate Answer: Pulses

दाल

Question 40. What is a bank rate?

बैंक दर क्या है ?

Options:

1) Rate at which Central bank of a country advances loans to other banks in the country

वह दर जिस पर किसी देश का केन्द्रीय बैंक, देश के अन्य बैंकों को ऋण देता है

2) Rate at which banks advance loans to the customers

वह दर जिस पर बैंक ग्राहकों को ऋण देता है

3) Rate at which banks lend among themselves

वह दर जिस पर बैंक परस्पर ऋण देते हैं

4) Rate at which banks lend to money lenders

वह दर जिस पर बैंक महाजनों को ऋण देते हैं

Correct Answer: Rate at which Central bank of a country advances loans to other banks in the country
वह दर जिस पर किसी देश का केन्द्रीय बैंक, देश के अन्य बैंकों को ऋण देता है

Candidate Answer: Rate at which banks lend among themselves
वह दर जिस पर बैंक परस्पर ऋण देते हैं

Question 41. Which of the following tax systems will help to reduce economic inequalities in India?

निम्नलिखित में से कौन-सी कर प्रणाली भारत में आर्थिक विषमता को कम करने में सहायक होगी ?

Options:

1) Regressive Tax
प्रतिगामी कर

2) Progressive Tax
प्रगामी कर

3) Flat rate tax
समान दर कर

4) None of these
इनमें से कोई नहीं

Correct Answer: Progressive Tax
प्रगामी कर

Candidate Answer: None of these
इनमें से कोई नहीं

Question 42. President of India can be removed from his office by

भारत के राष्ट्रपति को उनके पद से कौन हटा सकता है ?

Options:

1) Prime Minister of India

भारत के प्रधानमन्त्री

2) Chief Justice of India

भारत के मुख्य न्यायाधीश

3) Parliament

संसद

4) Lok Sabha

लोक सभा

Correct Answer: Parliament

संसद

Candidate Answer: Chief Justice of India

भारत के मुख्य न्यायाधीश

Question 43. A broad, low embankment built up along the banks of a river channel during floods is called

बाढ़ के दौरान नदी चैनल के किनारों के साथ बने चौड़े एवं नीचे किनारबंदी को क्या कहते हैं ?

Options:

1) Delta

डेल्टा

2) Levee

तटबंध

3) Flood Plain

बाढ़ क्षेत्र

4) Dune

टीला

Correct Answer: Levee

तटबंध

Candidate Answer: Flood Plain

बाढ़ क्षेत्र

Question 44. At which stage in its life cycle does the silkworm yield the fiber of commercial use

रेशम कीट अपने जीवन चक्र में किस चरण में वाणिज्यिक प्रयोग का तंतु पैदा करता है ?

Options:

1) Larva

लार्वा

2) Egg

अण्डा

3) Pupa

प्यूपा

4) Imago

पूर्ण कीट

Correct Answer: Pupa

प्यूपा

Candidate Answer: Larva

लार्वा

Question 45. Quality of a musical note depends on

संगीत में सुर की कोटि किस पर निर्भर होती है ?

Options:

1) Fundamental frequency

मूल आवृत्ति

2) Amplitude of the wave

तरंग प्रवर्धन

3) Harmonics present

मौजूदा हार्मोनिक (संनाद)

4) Velocity of sound in the medium

माध्यम में ध्वनि का वेग

Correct Answer: Harmonics present

मौजूदा हार्मोनिक (संनाद)

Candidate Answer: Fundamental frequency

मूल आवृत्ति

Question 46. The tides in the sea are primarily due to

समुद्र में अधिकांशतः ज्वार-भाटा किस कारण आता है ?

Options:

1) the atmospheric effect of the Earth

पृथ्वी का वायुमण्डलीय प्रभाव

2) the gravitational effect of Venus on the Earth

पृथ्वी पर शुक्र का गुरुत्वाकर्षण प्रभाव

3) the gravitational effect of the Sun on the Earth

पृथ्वी पर सूर्य का गुरुत्वाकर्षण प्रभाव

4) the gravitational effect of the Moon on the Earth

पृथ्वी पर चन्द्रमा का गुरुत्वाकर्षण प्रभाव

Correct Answer: the gravitational effect of the Moon on the Earth

पृथ्वी पर चन्द्रमा का गुरुत्वाकर्षण प्रभाव

Candidate Answer: the gravitational effect of the Moon on the Earth

पृथ्वी पर चन्द्रमा का गुरुत्वाकर्षण प्रभाव

Question 47. The five permanent members of the UN security council are

संयुक्त राष्ट्र सुरक्षा परिषद के पाँच स्थायी सदस्य कौन-कौन हैं ?

Options:

- 1) USA, China, France, Russia and Canada
अमेरिका, चीन, फ्राँस, रूस और कनाडा
- 2) China, France, Russia, UK and USA
चीन, फ्राँस, रूस, ब्रिटेन और अमेरिका
- 3) Japan, Germany, Russia, UK and USA
जापान, जर्मनी, रूस, ब्रिटेन और अमेरिका
- 4) Germany, China, USA. Russia and UK
जर्मनी, चीन, अमेरिका, रूस और ब्रिटेन

Correct Answer: China, France, Russia, UK and USA
चीन, फ्राँस, रूस, ब्रिटेन और अमेरिका

Candidate Answer: Germany, China, USA. Russia and UK
जर्मनी, चीन, अमेरिका, रूस और ब्रिटेन

Question 48. Which of the following is not correctly paired?

निम्नलिखित में से कौन-सा युग्म सही नहीं है ?

Options:

- 1) Sania Mirza- Tennis
सानिया मिर्जा- टेनिस
- 2) Saina Nehwal - Badminton
साइना नेहवाल - बैडमिंटन
- 3) Jhoolan Goswami - Cricket
झूलन गोस्वामी - क्रिकेट
- 4) Jeev Milka Singh - Chess
जीव मिलखा सिंह - शतरंज

Correct Answer: Jeev Milka Singh - Chess
जीव मिलखा सिंह - शतरंज

Candidate Answer: Jeev Milka Singh - Chess

जीव मिल्खा सिंह - शतरंज

Question 49. Aryabhatta and Kalidasa were in the court of which Gupta Emperor?

आर्यभट्ट और कालीदास किस 'गुप्त' शासक के दरबार में थे ?

Options:

1) Kumara Gupta I

कुमारगुप्त I

2) Chandra Gupta II

चन्द्रगुप्त II

3) Samudra Gupta

समुद्रगुप्त

4) Skanda Gupta

स्कन्दगुप्त

Correct Answer: Chandra Gupta II

चन्द्रगुप्त II

Candidate Answer: Samudra Gupta

समुद्रगुप्त

Question 50. What process takes place during the youthful stage of a river?

नदी की तरुणावस्था में कौन-सी प्रक्रिया होती है ?

Options:

1) Valley widening

घाटी को चौड़ा करना

2) River rejuvenating

नदी का कायाकल्प करना

3) Valley deepening

घाटी को गहरा करना

4) Meandering

टेढ़े-मेढ़े बहना

Correct Answer: Valley deepening

घाटी को गहरा करना

Candidate Answer: River rejuvenating

नदी का कायाकल्प करना

Question 51.If 10 people can do a job in 20 days,then 20 people with twice the efficiency can do the same job in

यदि 10 व्यक्ति किसी काम को 20 दिन में कर सकते हैं तो दुगुनी क्षमता वाले 20 व्यक्ति उस काम को कितने दिन में पूरा करेंगे ?

Options:

1) 5 days

5 दिन

2) 10 days

10 दिन

3) 20 days

20 दिन

4) 40 days

40 दिन

Correct Answer: 5 days

5 दिन

Candidate Answer: [NOT ANSWERED]

Question 52. ABCD is a quadrilateral in which BD and AC are diagonals then

ABCD एक चतुर्भुज है, जिसमें BD और AC विकर्ण हैं, तो :

Options:

1) $AB + BC + CD + AD < AC + BD$

2) $AB + BC + CD + DA > AC + BD$

3) $AB + BC + CD + DA = AC + BD$

4) $AB + BC + CD + DA > 2(AC + BD)$

Correct Answer: $AB + BC + CD + DA > AC + BD$

Candidate Answer: $AB + BC + CD + DA = AC + BD$

Question 53. Two consecutive discounts $x\%$ and $y\%$ is equivalent to the discount

$X\%$ और $Y\%$ की क्रमवार छूट निम्नलिखित में से किस छूट के समान होगी ?

Options:

1)

$$\left(x - y + \frac{xy}{100}\right)\%$$

2)

$$\left(x + y + \frac{xy}{100}\right)\%$$

3)

$$\left(x - y - \frac{xy}{100}\right)\%$$

4)

$$\left(x + y - \frac{xy}{100}\right)\%$$

Correct Answer:

$$\left(x + y - \frac{xy}{100}\right)\%$$

Candidate Answer: [NOT ANSWERED]

Question 54. A box of sweets was distributed between A and B in the ratio 3 : 4. If A got 36 sweets, what was the total no. of sweets

एक मिठाई का डिब्बा A और B के बीच 3 : 4 के अनुपात में बाँटा गया। यदि A को मिठाई के 36 टुकड़े मिले तो मिठाई की कुल संख्या क्या थी ?

Options:

1) 12

2) 84

3) 144

4) 27

Correct Answer: 84

Candidate Answer: 27

Question 55.If the ratio of cost price and selling price is 4 : 5 , then the percentage of profit will be

यदि क्रय मूल्य और विक्रय मूल्य में 4 : 5 का अनुपात हो तो लाभ प्रतिशत बताइए ?

Options:

1) 20

2) 0.1

3) 10

4) 25

Correct Answer: 25

Candidate Answer: 20

Question 56.If the value of a company stock drops from Rs. 25 per share to Rs. 21 per share, the percentage decrease per share is

यदि किसी कम्पनी के स्टॉक का मूल्य Rs. 25 प्रति शेयर से गिर कर Rs. 21 प्रति शेयर हो गया हो, तो प्रति शेयर के मूल्य में कितने प्रतिशत की गिरावट हुई है ?

Options:

1) 4

2) 8

3) 12

4) 16

Correct Answer: 16

Candidate Answer: 4

Question 57.A farmer travelled a distance of 61 km in 9 hours . He travelled partly on foot at a speed of 4 km/hour and partly on bicycle at a speed of 9 km/hour . The distance travelled on foot is

एक किसान ने 9 घण्टे में 61 कि.मी. की यात्रा तय की। यदि उसने कुछ यात्रा 4 कि.मी./घंटा की रफ्तार से पैदल तय की हो और कुछ यात्रा 9 कि.मी./घण्टा की रफ्तार से साईकिल द्वारा तय की हो, तो उसने कितनी यात्रा पैदल की ?

Options:

- 1) 14 km
14 कि.मी.
- 2) 16 km
16 कि.मी.
- 3) 20 km
20 कि.मी.
- 4) 18 km
18 कि.मी.

Correct Answer: 16 km
16 कि.मी.

Candidate Answer: 16 km
16 कि.मी.

Question 58. If $(2x - y)^2 + (3y - 2z)^2 = 0$, then the ratio $x:y:z$ is

यदि $(2x - y)^2 + (3y - 2z)^2 = 0$ हो तो $x:y:z$ का अनुपात ज्ञात कीजिए?

Options:

- 1) 1 : 3 : 2
- 2) 1 : 2 : 3
- 3) 3 : 1 : 2
- 4) 3 : 2 : 1

Correct Answer: 1 : 2 : 3

Candidate Answer: 1 : 3 : 2

Question 59.If $(4a - 3)^2 = 0$, then the value of $64a^3 - 48a^2 + 12a + 13$ is

यदि $(4a - 3)^2 = 0$ हो तो $64a^3 - 48a^2 + 12a + 13$ का मान बताइए ?

Options:

1) 0

2) 11

3) 22

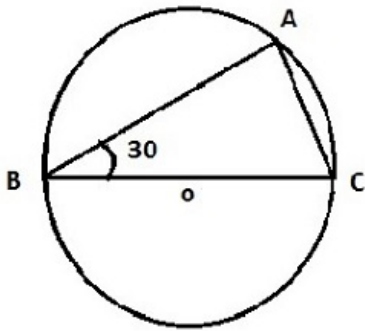
4) 33

Correct Answer: 22

Candidate Answer: 22

Question 60. In the fig ΔABC is inscribed in a circle with centre O . If $\angle ABC = 30^\circ$ then $\angle ACB$ is equal to

दिए गए चित्र में त्रिभुज ABC को एक वृत्त जिसका केन्द्र बिन्दु O है, उसके अन्दर बनाया गया है और यदि कोण $ABC = 30^\circ$ हो, तो कोण ACB का मान बताईए?



Options:

1) 30°

2) 60°

3) 50°

4) 90°

Correct Answer: 60°

Candidate Answer: 60°

Question 61. Three consecutive angles of a cyclic quadrilateral are in the ratio of 1 : 4 : 5 . The measure of fourth angle is

एक चक्रीय चतुर्भुज के क्रमिक कोण 1 : 4 : 5 के अनुपात में हैं। चौथे कोण का माप बताइए?

Options:

1) 120°

2) 60°

3) 30°

4) 80°

Correct Answer: 60°

Candidate Answer: [NOT ANSWERED]

Question 62. The value of $\cos^2 20^\circ + \cos^2 70^\circ$ is

$\cos^2 20^\circ + \cos^2 70^\circ$ का मान बताइए?

Options:

1) 0

2) 1

3) $\frac{1}{2}$

4) $\frac{1}{\sqrt{3}}$

Correct Answer: 1

Candidate Answer: 1

Question 63. Nine students of a class contribute a certain sum of money . Seven of them gave Rs. 50 each and the other two gave respectively Rs. 50 and Rs. 90 more than the others. The average contribution of the class of 9 students is

किसी कक्षा के 9 छात्र कुछ राशि का योगदान करते हैं। उनमें से 7 छात्रों में से प्रत्येक Rs. 50 का योगदान देता है और अन्य दो सभी 9 छात्रों द्वारा दिए गए औसत योगदान से क्रमशः Rs. 50 और Rs. 90 अधिक देते हैं। कक्षा के सभी 9 छात्रों का औसत योगदान बताइए ?

Options:

1) Rs. 70

2) Rs. 50

3) Rs. 100

4) Rs. 120

Correct Answer: Rs. 70

Candidate Answer: [NOT ANSWERED]

Question 64. If $a = 101$ then the value of $a(a^2 - 3a + 3)$ is

यदि $a = 101$ हो, तो

$a(a^2 - 3a + 3)$ का मान बताइए?

Options:

1) 1000000

2) 1010101

3) 1000001

4) 999999

Correct Answer: 1000001

Candidate Answer: 1000001

Question 65.

If $x = 2 + \sqrt{3}$, then the value of $\frac{x^2-x+1}{x^2+x+1}$ is

यदि $x = 2 + \sqrt{3}$ हो, तो $\frac{x^2-x+1}{x^2+x+1}$ का मान बताएं।

Options:

1) $\frac{2}{3}$

2) $\frac{3}{4}$

3) $\frac{4}{5}$

4) $\frac{3}{5}$

Correct Answer: $\frac{3}{5}$

Candidate Answer: $\frac{3}{4}$

Question 66. In $\triangle ABC$, $\angle B = 35^\circ$, $\angle C = 65^\circ$ and the bisector of $\angle BAC$ meets BC in D . Then $\angle ADB$ is

यदि त्रिभुज ABC में कोण $B = 35^\circ$, कोण $C = 65^\circ$ और कोण BAC का द्विभाजक BC को D पर मिलता है तो कोण ADB क्या होगा ?

Options:

1) 40°

2) 75°

3) 90°

4) 105°

Correct Answer: 105°

Candidate Answer: 105°

Question 67. AB is a diameter of a circle. C is a point on the tangent drawn at A . If $AB = 8$ cm and $AC = 6$ cm, then the length of BC is

AB किसी वृत्त का व्यास है। A पर खींची गई एक स्पर्श रेखा पर C एक बिन्दु है। यदि $AB = 8$ से.मी. और $AC = 6$ से.मी. तो BC की लम्बाई बताइए ?

Options:

1) 10 cm

10 से.मी.

2) 14 cm

14 से.मी.

3) 5 cm

5 से.मी.

4) 7 cm

7 से.मी.

Correct Answer: 10 cm

10 से.मी.

Candidate Answer: 10 cm

10 से.मी.

Question 68. From a point P on a level ground, the angle of elevation to the top of the tower is 30° . If the tower is 100m high, the distance of point P from the foot of the tower is (Take $\sqrt{3} = 1.73$)

किसी समतल भूमि पर बिन्दु P से मीनार के शीर्ष पर उन्नयन का कोण 30° है। यदि मीनार 100 मीटर ऊंची हो तो मीनार के तल से बिन्दु P की दूरी क्या होगी ? (यह मानते हुए कि $\sqrt{3} = 1.73$)

Options:

1) 149 m

149 मीटर

2) 156 m

156 मीटर

3) 173 m

173 मीटर

4) 188 m

188 मीटर

Correct Answer: 173 m

173 मीटर

Candidate Answer: 173 m

173 मीटर

Question 69.If the sum of the digits of any integer between 100 and 1000 is subtracted from the same integer , the resulting number is always divisible by

यदि 100 और 1000 के बीच किसी पूर्णांक के अंकों के जोड़ को उसी पूर्णांक से घटाया जाए तो परिणामी संख्या हमेशा निम्नलिखित में से किससे विभाज्य होगी ?

Options:

1) 2

2) 5

3) 6

4) 9

Correct Answer: 9

Candidate Answer: 5

Question 70.If a sum of money deposited in a bank at simple interest is doubled in 6 years, then after 12 years, the amount will be

यदि कोई धनराशि बैंक में साधारण ब्याज दर पर जमा करवाने पर 6 वर्ष में दुगनी हो जाती है,तो 12 वर्ष में वह धन राशि कितनी होगी ?

Options:

1) $5/2$ times the original amount

$5/2$ गुणा

2) 3times the original amount

3 गुणा

3) $7/2$ times the original amount

$7/2$ गुणा

4) 4times the original amount

4 गुणा

Correct Answer: 3times the original amount

3 गुणा

Candidate Answer: 3times the original amount
3 गुणा

Question 71.

Rs 782 is divided into 3 parts in the ratio $\frac{1}{2} : \frac{2}{3} : \frac{3}{4}$, *the first part is*

782 रु. कि राशि को तीन भागों में $\frac{1}{2} : \frac{2}{3} : \frac{3}{4}$ के अनुपात में विभक्त किया जाता है, पहला भाग क्या होगा ।

Options:

1) Rs. 182

2) Rs. 204

3) Rs. 190

4) Rs. 196

Correct Answer: Rs. 204

Candidate Answer: Rs. 196

Question 72. Number of 5 types of cycles manufactured by a company over the years is given below :

किसी कम्पनी द्वारा विगत वर्षों में निर्मित 5 प्रकार की साइकिलों की संख्या निम्नलिखित है।

year	Types of Cycles (in 1000)				
	A	B	C	D	E
1997	200	150	78	90	65
1998	150	180	100	105	70
1999	180	175	92	110	85
2000	195	160	120	125	75
2001	220	185	130	135	80

What was the approximate percentage of increase in production of 'D' type of the cycle from 1998 - 2000

वर्ष 1998-2000 के बीच D प्रकार की साइकिलों के उत्पादन में वृद्धि का अनुमानित प्रतिशत बताइए ?

Options:

1) 10

2) 19

3) 15

4) 17

Correct Answer: 19

Candidate Answer: [NOT ANSWERED]

Question 73. Number of 5 types of cycles manufactured by a company over the years is given below :

किसी कम्पनी द्वारा विगत वर्षों में निर्मित 5 प्रकार की साइकिलों की संख्या निम्नलिखित है।

year	Types of Cycles (in 1000)				
	A	B	C	D	E
1997	200	150	78	90	65
1998	150	180	100	105	70
1999	180	175	92	110	85
2000	195	160	120	125	75
2001	220	185	130	135	80

In the case of which type of cycles was total production of the given 5 years the maximum ?

किस प्रकार की साइकिलों का दिए गए विगत 5 वर्षों में कुल उत्पादन अधिकतम था ?

Options:

1) A

2) B

3) C

4) D

Correct Answer: A

Candidate Answer: [NOT ANSWERED]

Question 74. Number of 5 types of cycles manufactured by a company over the years is given below :

किसी कम्पनी द्वारा विगत वर्षों में निर्मित 5 प्रकार की साइकिलों की संख्या निम्नलिखित है।

year	Types of Cycles (in 1000)				
	A	B	C	D	E
1997	200	150	78	90	65
1998	150	180	100	105	70
1999	180	175	92	110	85
2000	195	160	120	125	75
2001	220	185	130	135	80

What was the percentage drop in production of A type cycle from 1997 - 1999 ?

वर्ष 1997 से 1999 के बीच A प्रकार की साइकिलों के उत्पादन में कितने प्रतिशत कमी हुई ?

Options:

1) 10

2) 25

3) 20

4) 15

Correct Answer: 10

Candidate Answer: [NOT ANSWERED]

Question 75. Number of 5 types of cycles manufactured by a company over the years is given below :

किसी कम्पनी द्वारा विगत वर्षों में निर्मित 5 प्रकार की साइकिलों की संख्या निम्नलिखित है।

year	Types of Cycles (in 1000)				
	A	B	C	D	E
1997	200	150	78	90	65
1998	150	180	100	105	70
1999	180	175	92	110	85
2000	195	160	120	125	75
2001	220	185	130	135	80

The production of E type of cycle in 2001 was what percent of production of B type in 2000 ?

E प्रकार की साइकिलों का वर्ष 2001 का उत्पादन, B प्रकार की साइकिलों के वर्ष 2000 के उत्पादन का कितने प्रतिशत था ?

Options:

1) 40

2) 50

3) 45

4) 25

Correct Answer: 50

Candidate Answer: [NOT ANSWERED]

Question 76. In the following question, out of the four alternatives, choose the word which best expresses the meaning of the given word and click the button corresponding to it.

ABORTIVE

Options:

- 1) PLENTIFUL
- 2) LAWFUL
- 3) UNSUCCESSFUL
- 4) FRUITFUL

Correct Answer: UNSUCCESSFUL

Candidate Answer: [NOT ANSWERED]

Question 77. In the following question, out of the four alternatives, choose the word which is opposite in meaning to the given word and click the button corresponding to it.

IRASCIBLE

Options:

- 1) CRANKY
- 2) CHOLERIC
- 3) AMIABLE
- 4) WASPISH

Correct Answer: AMIABLE

Candidate Answer: [NOT ANSWERED]

Question 78. Four words are given, out of which only one word is spelt correctly. Choose the correctly spelt word and click the button corresponding to it.

Options:

- 1) Thoruoghly
- 2) Thoroughly
- 3) Thoroghoully
- 4) Thorougholy

Correct Answer: Thoroughly

Candidate Answer: [NOT ANSWERED]

Question 79. In the following questions, one part of the sentence may have an error. Find out which part of the sentence has an error and click the button corresponding to it. If the sentence is free from error, click the "No error" option.

The trek is difficult (A) / but it is far worth (B) / the endeavour. (C) / No Error (D)

Options:

- 1) A
- 2) B
- 3) C
- 4) D

Correct Answer: B

Candidate Answer: [NOT ANSWERED]

Question 80. In the following questions, one part of the sentence may have an error. Find out which part of the sentence has an error and click the button corresponding to it. If the sentence is free from error, click the "No error" option.

What man can die (A) / better than (B) / serving his country? (C) / No Error (D)

Options:

- 1) A
- 2) B
- 3) C
- 4) D

Correct Answer: A

Candidate Answer: [NOT ANSWERED]

Question 81. In the following questions, one part of the sentence may have an error. Find out which part of the sentence has an error and click the button corresponding to it. If the sentence is free from error, click the "No error" option.

The teacher prevented (A) / the boys (B) / to go there. (C) / No Error (D)

Options:

- 1) A
- 2) B
- 3) C
- 4) D

Correct Answer: C

Candidate Answer: [NOT ANSWERED]

Question 82. The sentences given with blanks are to be filled with an appropriate word(s). Four alternatives are suggested for each question. For each question, choose the correct alternative and click the button corresponding to it.

He has no recommendations; he will _____ , get the job.

Options:

- 1) however
- 2) whatsoever
- 3) whereas
- 4) whatever

Correct Answer: however

Candidate Answer: [NOT ANSWERED]

Question 83. The sentences given with blanks are to be filled with an appropriate word(s). Four alternatives are suggested for each question. For each question, choose the correct alternative and click the button corresponding to it.

Leaves _____ in autumn.

Options:

- 1) fall down
- 2) fall of
- 3) fall on
- 4) fall off

Correct Answer: fall off

Candidate Answer: [NOT ANSWERED]

Question 84. The sentences given with blanks are to be filled with an appropriate word(s). Four alternatives are suggested for each question. For each question, choose the correct alternative and click the button corresponding to it.

Each time he tried to climb the tree, he failed to do _____ .

Options:

- 1) thus
- 2) then
- 3) so
- 4) this

Correct Answer: so

Candidate Answer: [NOT ANSWERED]

Question 85. In each of the questions, four alternatives are given for the Idiom/Phrase. Choose the alternative which best expresses the meaning of the Idiom/Phrase and click the button corresponding to it.

A cuckoo in the nest

Options:

- 1) One who likes to stay at home
- 2) A view from a high place
- 3) An unwelcome intruder
- 4) One who is chosen as the leader of the group

Correct Answer: An unwelcome intruder

Candidate Answer: [NOT ANSWERED]

Question 86. In each of the questions, four alternatives are given for the Idiom/Phrase. Choose the alternative which best expresses the meaning of the Idiom/Phrase and click the button corresponding to it.

A house of cards

Options:

- 1) An insecure scheme
- 2) A gambling house
- 3) A plan with high stakes
- 4) A place where cards are printed

Correct Answer: An insecure scheme

Candidate Answer: [NOT ANSWERED]

Question 87. In each of the questions, four alternatives are given for the Idiom/Phrase. Choose the alternative which best expresses the meaning of the Idiom/Phrase and click the button corresponding to it.

To smell a rat

Options:

- 1) To see signs of plague epidemic
- 2) To get the bad smell of a dead rat
- 3) To suspect foul dealings
- 4) To be in a bad mood

Correct Answer: To suspect foul dealings

Candidate Answer: [NOT ANSWERED]

Question 88. Out of the four alternatives, choose the one which can be substituted for the given words/sentences and click the button corresponding to it.

A small shop that sells fashionable clothes, cosmetics etc.

Options:

- 1) Store
- 2) Stall
- 3) Boutique
- 4) Booth

Correct Answer: Boutique

Candidate Answer: [NOT ANSWERED]

Question 89. Out of the four alternatives, choose the one which can be substituted for the given words/sentences and click the button corresponding to it.

Interval between two events

Options:

- 1) Recess
- 2) Interlude
- 3) Shuttle
- 4) Prelude

Correct Answer: Interlude

Candidate Answer: [NOT ANSWERED]

Question 90. Out of the four alternatives, choose the one which can be substituted for the given words/sentences and click the button corresponding to it.

A person's peculiar habit

Options:

- 1) Peculiarity
- 2) Trait
- 3) Distinction
- 4) Idiosyncrasy

Correct Answer: Idiosyncrasy

Candidate Answer: [NOT ANSWERED]

Question 91. A sentence/a part of the sentence is underlined. Four alternatives are given to the underlined part which will improve the sentence. Choose the correct alternative and click the button corresponding to it. In case no improvement is needed, click the button corresponding to "No improvement".

The priest told the devotees that the wages of sin are death.

Options:

- 1) was
- 2) is
- 3) were
- 4) No improvement

Correct Answer: is

Candidate Answer: [NOT ANSWERED]

Question 92. A sentence/a part of the sentence is underlined. Four alternatives are given to the underlined part which will improve the sentence. Choose the correct alternative and click the button corresponding to it. In case no improvement is needed, click the button corresponding to "No improvement".

Careful drivers never take eyes of the road.

Options:

- 1) by
- 2) from
- 3) off
- 4) No improvement

Correct Answer: off

Candidate Answer: [NOT ANSWERED]

Question 93. A sentence/a part of the sentence is underlined. Four alternatives are given to the underlined part which will improve the sentence. Choose the correct alternative and click the button corresponding to it. In case no improvement is needed, click the button corresponding to "No improvement".

For all his wealth, he has no joy in life.

Options:

- 1) With
- 2) Beside
- 3) Despite of
- 4) No improvement

Correct Answer: With

Candidate Answer: [NOT ANSWERED]

Question 94. A sentence/a part of the sentence is underlined. Four alternatives are given to the underlined part which will improve the sentence. Choose the correct alternative and click the button corresponding to it. In case no improvement is needed, click the button corresponding to "No improvement".

The teacher asked him where did he live.

Options:

- 1) he has been living
- 2) he lives
- 3) he lived
- 4) No improvement

Correct Answer: he lived

Candidate Answer: [NOT ANSWERED]

Question 95. A sentence/a part of the sentence is underlined. Four alternatives are given to the underlined part which will improve the sentence. Choose the correct alternative and click the button corresponding to it. In case no improvement is needed, click the button corresponding to "No improvement".

The meeting was advanced until the following Monday.

Options:

- 1) adjourned
- 2) suspended
- 3) forwarded
- 4) No improvement

Correct Answer: adjourned

Candidate Answer: [NOT ANSWERED]

Question 96. A passage is given with 5 questions following it. Read the passage carefully and choose the best answer to each question out of the four alternatives and click the button corresponding to it.

Of the many changes that have taken place thanks to liberalisation, a major one is that today's youngsters are earning more than ever before. In some cases, they draw even fatter salaries than their parents. But are they blowing it up or sensibly saving it? Though some tend to splurge there are many who have started saving. Some of them go in for mutual funds and tax saving bonds. Some even go in for investments which give them tax breaks - insurance, home loans, mutual fund savings schemes. In fact the average age of a person taking a housing loan has come down from 41 to 28 in the last five years. Now, where do they get their investment advice from? Some feel it's a combination of friends, family, broker - advisors, the media and the net.

Liberalisation has enabled our youngsters to:

Options:

- 1) Be paid more
- 2) Work hard
- 3) Blow up money
- 4) Look after their money

Correct Answer: Be paid more

Candidate Answer: [NOT ANSWERED]

Question 97. A passage is given with 5 questions following it. Read the passage carefully and choose the best answer to each question out of the four alternatives and click the button corresponding to it.

Of the many changes that have taken place thanks to liberalisation, a major one is that today's youngsters are earning more than ever before. In some cases, they draw even fatter salaries than their parents. But are they blowing it up or sensibly saving it? Though some tend to splurge there are many who have started saving. Some of them go in for mutual funds and tax saving bonds. Some even go in for investments which give them tax breaks - insurance, home loans, mutual fund savings schemes. In fact the average age of a person taking a housing loan has come down from 41 to 28 in the last five years. Now, where do they get their investment advice from? Some feel it's a combination of friends, family, broker - advisors, the media and the net.

'Blowing it up' means:

Options:

- 1) Spending extravagantly
- 2) Exaggerating
- 3) Spending on smoking
- 4) Donating liberally

Correct Answer: Spending extravagantly

Candidate Answer: [NOT ANSWERED]

Question 98. A passage is given with 5 questions following it. Read the passage carefully and choose the best answer to each question out of the four alternatives and click the button corresponding to it.

Of the many changes that have taken place thanks to liberalisation, a major one is that today's youngsters are earning more than ever before. In some cases, they draw even fatter salaries than their parents. But are they blowing it up or sensibly saving it? Though some tend to splurge there are many who have started saving. Some of them go in for mutual funds and tax saving bonds. Some even go in for investments which give them tax breaks - insurance, home loans, mutual fund savings schemes. In fact the average age of a person taking a housing loan has come down from 41 to 28 in the last five years. Now, where do they get their investment advice from? Some feel it's a combination of friends, family, broker - advisors, the media and the net.

The average age of a person taking housing loan has come down because he:

Options:

- 1) Gets fat salaries even at a young age.
- 2) Has wealthy parents.
- 3) Goes in for mutual funds.
- 4) Buys lottery tickets.

Correct Answer: Gets fat salaries even at a young age.

Candidate Answer: [NOT ANSWERED]

Question 99. A passage is given with 5 questions following it. Read the passage carefully and choose the best answer to each question out of the four alternatives and click the button corresponding to it.

Of the many changes that have taken place thanks to liberalisation, a major one is that today's youngsters are earning more than ever before. In some cases, they draw even fatter salaries than their parents. But are they blowing it up or sensibly saving it? Though some tend to splurge there are many who have started saving. Some of them go in for mutual funds and tax saving bonds. Some even go in for investments which give them tax breaks - insurance, home loans, mutual fund savings schemes. In fact the average age of a person taking a housing loan has come down from 41 to 28 in the last five years. Now, where do they get their investment advice from? Some feel it's a combination of friends, family, broker - advisors, the media and the net.

Which of the following is 'False'?

The investment that give people tax breaks are:

Options:

- 1) Mutual funds
- 2) Home loans
- 3) Savings scheme
- 4) Purchasing jewellery

Correct Answer: Purchasing jewellery

Candidate Answer: [NOT ANSWERED]

Question 100. A passage is given with 5 questions following it. Read the passage carefully and choose the best answer to each question out of the four alternatives and click the button corresponding to it.

Of the many changes that have taken place thanks to liberalisation, a major one is that today's youngsters are earning more than ever before. In some cases, they draw even fatter salaries than their parents. But are they blowing it up or sensibly saving it? Though some tend to splurge there are many who have started saving. Some of them go in for mutual funds and tax saving bonds. Some even go in for investments which give them tax breaks - insurance, home loans, mutual fund savings schemes. In fact the average age of a person taking a housing loan has come down from 41 to 28 in the last five years. Now, where do they get their investment advice from? Some feel it's a combination of friends, family, broker - advisors, the media and the net.

Which of the following is true'?

Options:

- 1) The youngsters today spend all the money they get
- 2) All the youngsters save all the money they get
- 3) Many youngsters save all the money they get
- 4) A few youngsters spend more while some save

Correct Answer: A few youngsters spend more while some save