



Staff Selection Commission
(Government Of India)

REGISTRATION NUMBER : 8003027770
EXAM DATE : 10-September-2016
EXAM NAME : SSC Examination 2016
TOTAL MARKS : 200

CANDIDATE NAME : SHAIK SHAHID BASHA
EXAM START TIME : 10:00:00
EXAM DURATION : 01:15 Hrs
TOTAL NO OF QUESTIONS : 100

Question 1. Select the related word/letters/numbers from the given alternatives:

दिये गये विकल्पों में से संबंधित शब्द/अक्षरों/संख्या को चुनिए।

Cytology : Cells :: ? : Birds

कोशिका विज्ञान : कोशिका :: ? : पक्षी

Options:

1) Odontology

ओडॉटोलोजी

2) Mycology

कवक विज्ञान

3) Etymology

शब्द साधन

4) Ornithology

पक्षीविज्ञान

Correct Answer: Ornithology

पक्षीविज्ञान

Candidate Answer: Ornithology

पक्षीविज्ञान

Question 2. Select the related word/letters/numbers from the given alternatives:

दिये गये विकल्पों में से संबंधित शब्द/अक्षरों/संख्या को चुनिए।

RIGT : WDBY :: FUSH : ?

Options:

1) PKJQ

2) BYWD

3) DXWB

4) QKJR

Correct Answer: BYWD

Candidate Answer: PKJQ

Question 3. Select the related word/letters/numbers from the given alternatives:

दिये गये विकल्पों में से संबंधित शब्द/अक्षरों/संख्या को चुनिए।

42 : 56 :: 110 : ?

Options:

1) 18

2) 132

3) 136

4) 140

Correct Answer: 132

Candidate Answer: 132

Question 4.

For the following questions

Find the odd word/letters/number from the given alternatives.

निम्नलिखित प्रश्न में दिए गए विकल्पों में से विषम शब्द/अक्षर/संख्या को चुनिए ?

Options:

- 1) Rupee
रुपये
- 2) Pound
पाँड
- 3) Yen
येन
- 4) Currency
मुद्रा

Correct Answer: Currency

मुद्रा

Candidate Answer: Currency

मुद्रा

Question 5.

For the following questions

Find the odd word/letters/number from the given alternatives.

निम्नलिखित प्रश्न में दिए गए विकल्पों में से विषम शब्द/अक्षर/संख्या को चुनिए ?

Options:

- 1) DAEH
- 2) KIMP
- 3) HEIL
- 4) FCGJ

Correct Answer: KIMP**Candidate Answer:** KIMP

Question 6.

For the following questions

Find the odd word/letters/number from the given alternatives.

निम्नलिखित प्रश्न में दिए गए विकल्पों में से विषम शब्द/अक्षर/संख्या को चुनिए ?

Options:

- 1) 43-6
- 2) 28-4
- 3) 50-7
- 4) 36-5

Correct Answer: 28-4**Candidate Answer:** 28-4

Question 7. Arrange the following words as per order in the dictionary

निम्नलिखित शब्दों को शब्दकोश में दिए गए क्रम के अनुसार लिखिए ?

1. Direction 2. Directed 3. Director 4. Directing**Options:**

- 1) 1, 4, 3, 2
- 2) 2, 4, 1, 3
- 3) 4, 2, 3, 1
- 4) 4, 1, 2, 3

Correct Answer: 2, 4, 1, 3

Candidate Answer: 2, 4, 1, 3

Question 8. A series is given, with one term missing. Choose the correct alternative from the given ones that will complete the series.

निम्नलिखित प्रश्न में एक अनुक्रम दिया गया है, जिसमें एक पद लुप्त है। दिए गए विकल्पों में से वह सही विकल्प चुनिए जो अनुक्रम को पूरा करे ?

IGT, JHS, KIR, LJQ, MKP, ?

Options:

- 1) LOP
- 2) NOP
- 3) NLO
- 4) LNO

Correct Answer: NLO

Candidate Answer: NLO

Question 9. A series is given, with one term missing. Choose the correct alternative from the given ones that will complete the series.

निम्नलिखित प्रश्न में एक अनुक्रम दिया गया है, जिसमें एक पद लुप्त है। दिए गए विकल्पों में से वह सही विकल्प चुनिए जो अनुक्रम को पूरा करे ?

6, 10, 18, 34, ?, 130

Options:

- 1) 78
- 2) 52
- 3) 66
- 4) 94

Correct Answer: 66

Candidate Answer: 66

Question 10. Introducing Reeta, Monica said, "She is the only daughter of my father's only daughter." How is Monica related to Reeta?

रीटा का परिचय करवाते हुए मोनिका ने कहा, " यह मेरे पिता की एकमात्र पुत्री की एकमात्र पुत्री है।" मोनिका का रीटा से क्या संबंध है ?

Options:

- 1) Aunt
चाची/ मौसी /मामी
- 2) Niece
भांजी/भतीजी
- 3) Cousin
चचेरी / ममेरी बहन
- 4) Mother
मां

Correct Answer: Mother

मां

Candidate Answer: Mother

मां

Question 11. In a row of students, if John, who is 16th from the left, and Johnson, who is 8th from the right, interchange their positions, John becomes 33rd from left. How many students are there in a row?

छात्रों की एक पंक्ति में जॉन बायें से 16वें स्थान पर है, और जॉनसन, जो दाहिने से 8वें स्थान पर है, अपना - अपना स्थान परस्पर बदल लेते हैं। जॉन बायें से 33वें स्थान पर हो जाता है। पंक्ति में कुल कितने छात्र हैं ?

Options:

- 1) 38
- 2) 39
- 3) 40
- 4) 41

Correct Answer: 40

Candidate Answer: 40

Question 12. From the given alternative words, select the word which cannot be formed using the letters of the given word:

निम्नलिखित विकल्पों में से वह शब्द चुनिए जो दिए गए शब्द के अक्षरों का प्रयोग करके नहीं बनाया जा सकता ?

ADMISSION

Options:

- 1) MISSION
- 2) DISMISS
- 3) MASONS
- 4) NOMADS

Correct Answer: DISMISS

Candidate Answer: DISMISS

Question 13.If in a certain language TEACHER is coded as QBXZEBO, then how is STUDENT coded in the same language?

यदि किसी विशिष्ट भाषा में TEACHER को QBXZEBO के रूप में कूटीकृत किया गया है।तो उस भाषा में STUDENT को कैसे कूटीकृत किया जाएगा ?

Options:

- 1) PQRBAQK
- 2) PQRABKQ
- 3) PQRKBAQ
- 4) PRKQBAQ

Correct Answer: PQRABKQ

Candidate Answer: PQRABKQ

Question 14.If 'x' means addition, '-' means division, '÷' means subtraction and '+' means multiplication, then which of the equations is correct?

यदि x का मतलब योग हो, - का मतलब भाग हो, ÷ का मतलब घटा और + का मतलब गुणा हो,तो निम्नलिखित में से कौन-सा समीकरण सही है ?

Options:

- 1) $16 \times 5 \div 10 + 4 - 3 = 19$
- 2) $16 + 5 \div 10 \times 4 - 3 = 9$
- 3) $16 + 5 - 10 \times 4 \div 3 = 9$
- 4) $16 - 5 \times 10 \div 4 + 3 = 12$

Correct Answer: $16 + 5 - 10 \times 4 \div 3 = 9$

Candidate Answer: $16 + 5 - 10 \times 4 \div 3 = 9$

Question 15.If $4 \times 5 \times 2 = 524$,

$$3 \times 7 \times 2 = 723$$

$$\text{and } 6 \times 8 \times 7 = 876$$

$$\text{then } 9 \times 4 \times 5 = ?$$

$$\text{यदि } 4 \times 5 \times 2 = 524,$$

$$3 \times 7 \times 2 = 723$$

$$\text{और } 6 \times 8 \times 7 = 876 \text{ हो, तो}$$

$$9 \times 4 \times 5 = ?$$

Options:

- 1) 495
- 2) 459
- 3) 549
- 4) 954

Correct Answer: 459

Candidate Answer: 459

Question 16.Select the missing numbers from the given responses

दिए गए विकल्पों में से लुप्त अंक जात कीजिए ?

43	25	?
21	40	35
35	34	28

Options:

- 1) 36
- 2) 46
- 3) 40
- 4) 26

Correct Answer: 36

Candidate Answer: [NOT ANSWERED]

Question 17. Johnson left for his office in his car. He drove 15km towards North and then 10km towards West. He then turned to the South and covered 5km. Further he turned to East & moved 8km. Finally he turned right and moved 10km. How far & in which direction is he from his starting point?

जॉन्सन अपने कार्यालय के लिए कार से चला | वह उत्तर की ओर 15 कि.मी. चला, फिर 10 कि.मी. पश्चिम की ओर चला, फिर वह दक्षिण की ओर मुड़ा और 5 कि.मी. चला। इसके बाद वह पूर्व की ओर मुड़ा और 8 कि.मी. चला। अन्ततः वह दाहिने मुड़ा और 10 कि.मी. चला। जिस बिन्दु से वह चला था उस बिन्दु से वह कितनी दूर है और किस दिशा में है ?

Options:

- 1) 2 km, West
2 कि.मी. पश्चिम
- 2) 5 km, East
5 कि.मी. पूर्व
- 3) 3 km, North
3 कि.मी. उत्तर
- 4) 3 km, South
3 कि.मी. दक्षिण

Correct Answer: 2 km, West

2 कि.मी. पश्चिम

Candidate Answer: 2 km, West

2 कि.मी. पश्चिम

Question 18. Consider the given statement/s to be true and decide which of the given conclusions/assumptions can definitely be drawn from the given statement.

Statements: 1. All stenographers are lazy. 2. Some men are stenographers.

Conclusions: I. All lazy people are men. II. Some men are lazy.

निम्नलिखित प्रश्न में एक या दो वक्तव्य दिये गये हैं, जिसके आगे दो निष्कर्ष/मान्यताएं, I और II निकाले गये हैं। आपको विचार करना है कि वक्तव्य सत्य है चाहे वह सामान्यतः ज्ञात तथ्यों से भिन्न प्रतीत होता हो। आपको निर्णय करना है कि दिए गए वक्तव्य में से कौन-सा निश्चित रूप से सही निष्कर्ष/मान्यता निकाला जा सकता है ?

वक्तव्य : 1. सब स्टेनोग्राफर सुस्त हैं।

2. कुछ आदमी स्टेनोग्राफर हैं।

निष्कर्ष : I सभी सुस्त लोग आदमी हैं।

II कुछ आदमी सुस्त हैं।

Options:

- 1) Only conclusion I follows
केवल निष्कर्ष I सही है।
- 2) Only conclusion II follows
केवल निष्कर्ष II सही है।
- 3) Both conclusion I and conclusion II follow
निष्कर्ष I और II दोनों सही हैं।
- 4) Neither conclusion I nor conclusion II follows
ना तो निष्कर्ष I सही है और ना ही निष्कर्ष II सही है।

Correct Answer: Only conclusion II follows

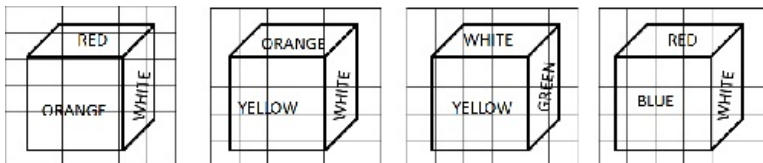
केवल निष्कर्ष II सही है।

Candidate Answer: Only conclusion II follows

केवल निष्कर्ष II सही है।

Question 19. Four positions of a cube are shown below. Which color is opposite to white color in the given cubes?

नीचे किसी घन की चार अवस्थाएं दर्शायी गयी है। दिए गए घनों में सफेद रंग के ठीक सामने कौन-सा रंग है ?



Options:

1) Orange

नारंगी

2) Blue

नीला

3) Red

लाल

4) Yellow

पीला

Correct Answer: Blue

नीला

Candidate Answer: Blue

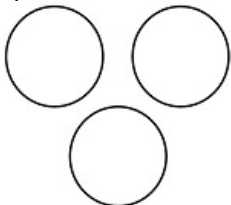
नीला

Question 20. Which one of the following figures best represents the relationship among **Kitchen, House and Garden?**

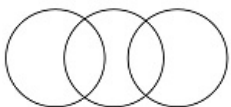
निम्नलिखित में से कौन सी आकृति रसोई, घर और बगीचे के संबंध को दर्शाती है ?

Options:

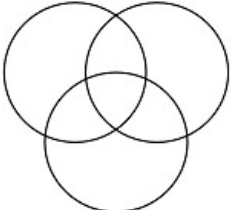
1)



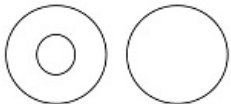
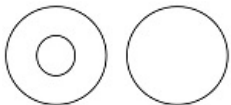
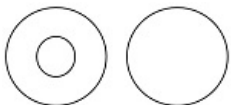
2)



3)

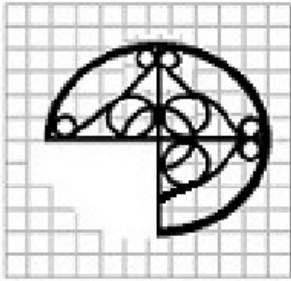


4)

**Correct Answer:****Candidate Answer:**

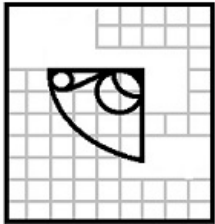
Question 21. Which answer figure will complete the pattern in the question figure?

कौन-सी उत्तर आकृति प्रश्न आकृति के प्रतिरूप को पूरा करेगी ?

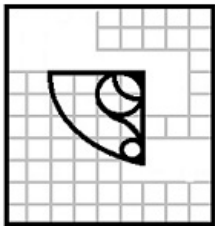


Options:

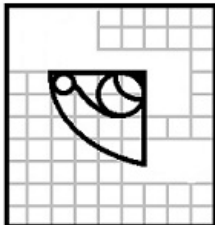
1)



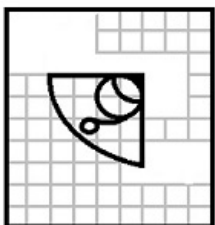
2)



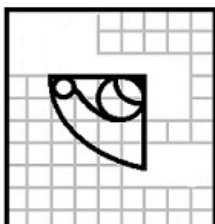
3)



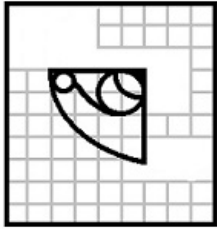
4)



Correct Answer:

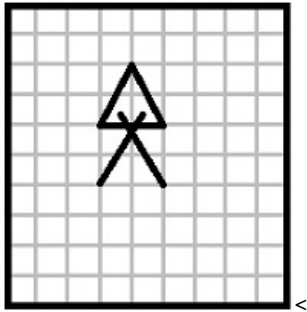


Candidate Answer:



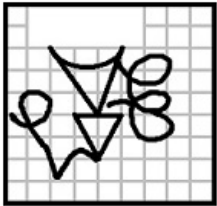
Question 22. From the given answer figures, select the one in which the question figure is hidden/embedded

दी गई उत्तर आकृतियों में से उस उत्तर आकृति को चुनिए जिसमें प्रश्न आकृति निहित है ?




Options:

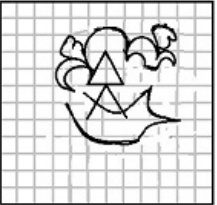
1)



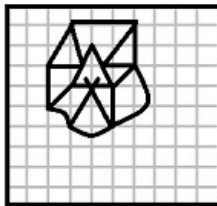
2)



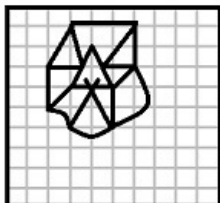
3)



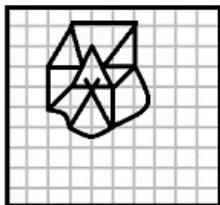
4)



Correct Answer:

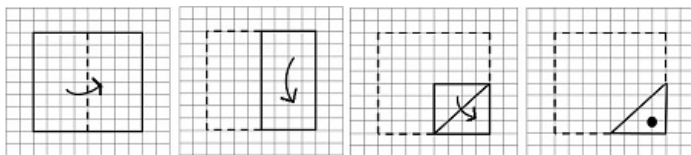


Candidate Answer:



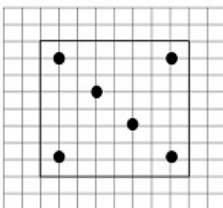
Question 23. A piece of paper is folded and cut as shown below in the question figures. From the given answer figures, indicate how it will appear when opened.

यदि किसी कागज को नीचे दिखाए प्रश्न के अनुसार मोड़कर काटा जाए तो खोलने के बाद वह किस उत्तर आकृति जैसा दिखाई देगा ?

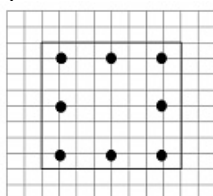


Options:

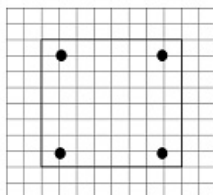
1)



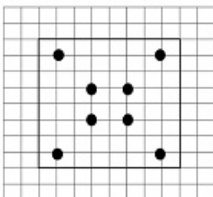
2)



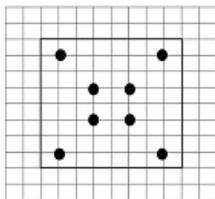
3)



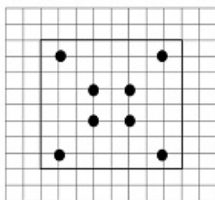
4)



Correct Answer:

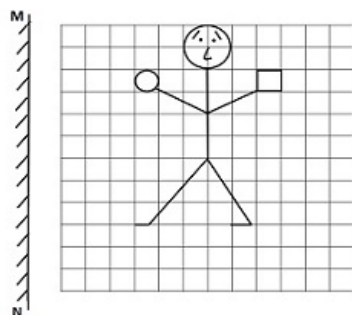


Candidate Answer:



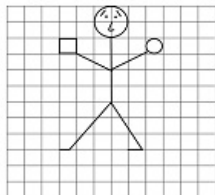
Question 24.If a mirror is placed on the line MN, then which of the answer figures is the right image of the given figure?

यदि एक दर्पण को MN रेखा पर रखा जाए तो दी गई उत्तर आकृतियों में से कौन-सी आकृति प्रश्न आकृति का सही प्रतिबिम्ब होगी ?

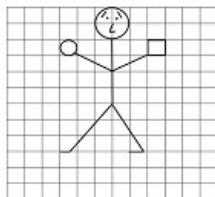


Options:


1)



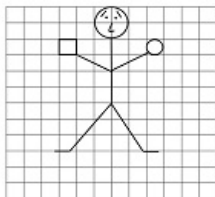
2)

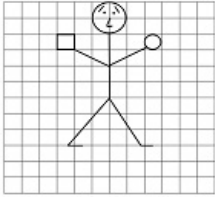
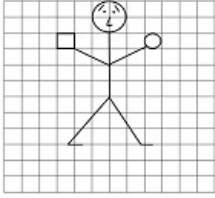


3)



4)



Correct Answer:**Candidate Answer:**

Question 25. In the question, a word is represented by only one set of numbers as given in any one of the alternatives. The sets of numbers given in the alternatives are represented by two classes of alphabets as in two matrices given below. The columns and rows of Matrix I are numbered from 0 to 4 and that of Matrix II are numbered from 5 to 9. A letter from these matrices can be represented first by its row and next by its column, e.g., 'P' can be represented by 02, 13, etc., and 'A' can be represented by 57, 68, etc. Similarly you have to identify the set for the word '**GUNS**'

निम्नलिखित प्रश्न में विकल्पों में दिए गए संख्या-समूह, अक्षरों के दो वर्गों द्वारा दर्शाए गए हैं, जैसे कि नीचे दिए गए दो आव्यूहों में हैं। आव्यूह I के सतम्भ और पंक्ति की संख्या 0 से 4 तक दी गई है, और आव्यूह II के 5 से 9 तक, इन आव्यूहों से एक अक्षर को पहले उसकी पंक्ति और बाद में स्तम्भ संख्या द्वारा दर्शाया जा सकता है। उदाहरण के लिए, P को 02, 13, आदि द्वारा दर्शाया जा सकता है तथा A को 57, 68, आदि द्वारा दर्शाया जा सकता है। इसी तरह से आपको दिए शब्द '**GUNS**' के लिए समूह को पहचानना है।

	0	1	2	3	4
0	S	U	P	E	R
1	R	S	U	P	E
2	E	R	S	U	P
3	P	E	R	S	U
4	U	P	E	R	S

	5	6	7	8	9
5	G	L	A	N	D
6	D	G	L	A	N
7	N	D	G	L	A
8	A	N	D	G	L
9	L	A	N	D	G

Options:

- 1) 88, 23, 59, 33
- 2) 66, 40, 67, 11
- 3) 55, 34, 77, 44
- 4) 99, 12, 86, 22

Correct Answer: 99, 12, 86, 22**Candidate Answer:** 99, 12, 86, 22

Question 26. Which one of the following countries is not a member of the "BRICS" group?

निम्नलिखित में कौन-सा देश ब्रिक्स ग्रुप का सदस्य नहीं है ?

Options:

- 1) Brazil
ब्राजील
- 2) Russia
रूस
- 3) China
चीन
- 4) Indonesia
इंडोनेशिया

Correct Answer: Indonesia

इंडोनेशिया

Candidate Answer: Indonesia

इंडोनेशिया

Question 27. 'Do or Die' is associated with which of the movements in India's freedom struggle

भारतीय स्वतंत्रता संग्राम में 'करो या मरो' का नारा किस आन्दोलन से जुड़ा है ?

Options:

- 1) Dandi March
दांडी यात्रा
- 2) Non-Cooperation Movement
असहयोग आन्दोलन
- 3) Khilafat Movement
खिलाफत आन्दोलन
- 4) Quit India Movement
भारत छोड़ो आन्दोलन

Correct Answer: Quit India Movement

भारत छोड़ो आन्दोलन

Candidate Answer: Quit India Movement

भारत छोड़ो आन्दोलन

Question 28.'Parsec' is the unit measurement of

परसेक किसकी मापन इकाई है ?

Options:

- 1) Density of stars
तारकों की सघनता
- 2) Astronomical distance
खगोलीय दूरी
- 3) Brightness of heavenly bodies
खगोलीय पिंडों की चमक
- 4) Orbital velocity of giant stars
विशालकाय तारकों का कक्षकीय वेग

Correct Answer: Astronomical distance

खगोलीय दूरी

Candidate Answer: Astronomical distance

खगोलीय दूरी

Question 29.A collective term used by the Jains for their sacred books is

जैनियों द्वारा अपने पवित्र ग्रन्थों के लिए सामूहिक रूप से किस शब्द का प्रयोग किया जाता है ?

Options:

- 1) Prabandhas
प्रबंध
- 2) Angas
अंग
- 3) Nibandhas
निबन्ध
- 4) Charits
चरित

Correct Answer: Angas

अंग

Candidate Answer: [NOT ANSWERED]

Question 30.Which one of the following is not an instrument of Fiscal policy?

निम्नलिखित में कौनसी वित्तीय नीति नहीं है ?

Options:

- 1) Open Market Operations
खुला बाजार ऑपरेशन
- 2) Taxation
कराधान
- 3) Public borrowing
जनता से उधार लेना
- 4) Public expenditure
जन व्यय

Correct Answer: Open Market Operations

खुला बाजार ऑपरेशन

Candidate Answer: Taxation

कराधान

Question 31. At room temperature, the metal that remains liquid is:

कमरे के ताप पर कौन सी धातु तरल अवस्था में बनी रहती है ?

Options:

1) Mercury

पारद

2) Platinum

प्लैटिनम

3) Lead

सीसा

4) Zinc

जिंक

Correct Answer: Mercury

पारद

Candidate Answer: Mercury

पारद

Question 32. Which is known as carbolic acid?

निम्नलिखित में कौन कार्बोलिक अम्ल के नाम से जाना जाता है ?

Options:

1) Phenol

फिनोल

2) Ethanol

एथेनॉल

3) Acetic acid

ऐसिटिक एसिड

4) Oxalic acid

ऑक्सालिक एसिड

Correct Answer: Phenol

फिनोल

Candidate Answer: [NOT ANSWERED]

Question 33. On which river is the Tehri dam built?

टिहरी बांध किस नदी पर बना हुआ है ?

Options:

1) Alakananda

अलकनन्दा

2) Bhagirathi

भागीरथी

3) Ganga

गंगा

4) Hooghly

हुगली

Correct Answer: Bhagirathi

भागीरथी

Candidate Answer: Bhagirathi

भागीरथी

Question 34. With which country, India has the longest international boundary?

किस देश के साथ भारत की सबसे लम्बी अन्तर्राष्ट्रीय सीमा लगी हुई है ?

Options:

1) Nepal

नेपाल

2) Pakistan

पाकिस्तान

3) China

चीन

4) Bangladesh

बांग्लादेश

Correct Answer: Bangladesh

बांग्लादेश

Candidate Answer: Bangladesh
बांग्लादेश

Question 35. Which State in India has the largest coastline?

भारत के किस राज्य में सबसे लम्बी तटीय रेखा है ?

Options:

1) Tamil Nadu

तमिल नाडू

2) Andhra Pradesh

आन्ध्र प्रदेश

3) Gujrat

गुजरात

4) West Bengal

पश्चिम बंगाल

Correct Answer: Gujrat

गुजरात

Candidate Answer: Gujrat

गुजरात

Question 36. Jog falls in Karnataka is located over which river?

कर्नाटक स्थित जॉग प्रपात किस नदी पर है ?

Options:

1) Kaveri

कावेरी

2) Godavari

गोदावरी

3) Saraswati

सरस्वती

4) Krishna

कृष्णा

Correct Answer: Saraswati

सरस्वती

Candidate Answer: Krishna

कृष्णा

Question 37. In which of the following market forms, a firm does not exercise control over price?

निम्नलिखित में से किस प्रकार का बाजार कीमतों को नियंत्रित करने में असमर्थ रहता है ?

Options:

1) Monopoly

एकाधिपत्य

2) Perfect competition

पूर्ण स्पर्धा

3) Oligopoly

अल्पाधिकार

4) Monopolistic competition

एकाधिकार प्रतियोगिता

Correct Answer: Perfect competition

पूर्ण स्पर्धा

Candidate Answer: [NOT ANSWERED]

Question 38. Which one of the following areas of India is covered by tropical evergreen forest?

निम्नलिखित में से भारत का कौन-सा क्षेत्र उष्णकटिबंधीय सदाबहार वन से ढका हुआ है ?

Options:

1) Semi-arid areas of Gujarat

गुजरात का अर्ध-शुष्क क्षेत्र

2) Eastern Ghats

पूर्वीघाट

3) Western Ghats

पश्चिमी घाट

4) Madhya Pradesh

मध्य प्रदेश

Correct Answer: Western Ghats

पश्चिमी घाट

Candidate Answer: Western Ghats

पश्चिमी घाट

Question 39. Which one of the following substances is normally found in urine?

निम्नलिखित में से कौन-सा पदार्थ सामान्यता मूत्र में पाया जाता है ?

Options:

1) Blood proteins

रक्त प्रोटीन

2) creatinine

क्रिएटिनिन

3) red blood cells

लाल रक्त कोशिकाएँ

4) white blood cells

श्वेत रक्त कोशिकाएँ

Correct Answer: creatinine

क्रिएटिनिन

Candidate Answer: white blood cells

श्वेत रक्त कोशिकाएँ

Question 40. The thymus gland produces a hormone called

थायमस ग्रन्थि जिस हार्मोन्स को पैदा करती है, उसे क्या कहते हैं।

Options:

1) thyroxine

थायरोक्सिन

2) thymosin

थायमोसिन

3) thyronine

थायरोनीन

4) calcitonin

कैल्सीटोनिन

Correct Answer: thymosin

थायमोसिन

Candidate Answer: [NOT ANSWERED]

Question 41. Blood group AB has

ए. बी. रक्त समूह में

Options:

1) No antigen

एंटीजैन नहीं रहते

2) No antibody

एंटीबॉडी नहीं रहते

3) Neither antigen nor antibody

ना तो एंटीजैन और ना ही एंटीबॉडी पाए जाते हैं

4) Both antigen and antibody

एंटीजैन तथा एंटीबॉडी दोनों पाए जाते हैं

Correct Answer: No antibody

एंटीबॉडी नहीं रहते

Candidate Answer: No antibody

एंटीबॉडी नहीं रहते

Question 42. Which Vitamins are those, if taken in excess can be dangerous as they are stored in the body?

ऐसा कौनसा विटामिन है जिसकी अत्याधिक मात्रा के सेवन से वे शरीर में संगृहित हो जाते हैं और घातक प्रभाव डालते हैं ?

Options:

1) B Complex

बी. काम्प्लेक्स

2) E and C

ई तथा सी

3) B and C

बी तथा सी

4) A and D

ए तथा डी

Correct Answer: A and D

ए तथा डी

Candidate Answer: [NOT ANSWERED]

Question 43. Atomic explosion is triggered by

परमाणु प्रस्फोटन किसके द्वारा प्रेरित होता है ?

Options:

1) thermo nuclear reaction

तापीय न्यूक्लियर अभिक्रिया

2) chemical reaction

रासायन अभिक्रिया

3) controlled chain reaction

नियन्त्रित श्रृंखला अभिक्रिया

4) uncontrolled chain reaction

अनियन्त्रित श्रृंखला अभिक्रिया

Correct Answer: uncontrolled chain reaction

अनियन्त्रित श्रृंखला अभिक्रिया

Candidate Answer: controlled chain reaction

नियन्त्रित श्रृंखला अभिक्रिया

Question 44. The phenomenon of change in direction of light when it passes from one medium to another is called

प्रकाश की दिशा में होने वाले परिवर्तन की घटना जब वह एक माध्यम से अन्य माध्यम में होकर गुजरता है क्या कहलाती है ?

Options:

1) Propagation

संचरण

2) Reflection

परावर्तन

3) Refraction

अपवर्तन

4) Dispersion

वितरण

Correct Answer: Refraction

अपवर्तन

Candidate Answer: Refraction

अपवर्तन

Question 45. Who has the right to decide whether a Bill is a money bill or not?

यह निर्णय लेने का अधिकार किसको है कि 'बिल' मुद्रा बिल है अथवा नहीं ?

Options:

1) Speaker of Lok Sabha

लोक सभा अध्यक्ष

2) Prime Minister

प्रधान मंत्री

3) President

राष्ट्रपति

4) Finance Minister

वित्त मंत्री

Correct Answer: Speaker of Lok Sabha

लोक सभा अध्यक्ष

Candidate Answer: Speaker of Lok Sabha

लोक सभा अध्यक्ष

Question 46. What is the name of portal launched by RBI recently to check illegal money collection?

गैरकानूनी (अवैधानिक) मुद्रा संग्रहण को नियंत्रित करने के लिए हाल ही में रिजर्व बैंक ऑफ इण्डिया ने पोर्टल स्थापित किया। इसका नाम क्या है ?

Options:

1) Sahyog

सहयोग

2) Sahayata

सहायता

3) Sampark

संपर्क

4) Sachet

सचेत

Correct Answer: Sachet

सचेत

Candidate Answer: [NOT ANSWERED]

Question 47. Which of the following is not an operating system

निम्नलिखित में कौन ऑपरेटिंग तंत्र नहीं है ?

Options:

1) Android

एंड्रॉयड

2) Vista

विस्टा

3) iOS

आईओएस

4) Opera

ओपेरा

Correct Answer: Opera

ओपेरा

Candidate Answer: Opera

ओपेरा

Question 48. Which pair of the following Indians has been selected for grant of Raman Magasaysay Award 2016

निम्नलिखित में से किस भारतीय जोड़े को रमण मैगासायसे 2016 के पुरस्कार के लिए चुना गया ?

Options:

1) Bezwada Wilson and T.M. Krishna

बैजुआड़ा विल्सन और टी.एम. कृष्णा

2) T.M. Krishna and Arvind Adiga

टी.एम. कृष्णा और अरविन्द ऐडिगा

3) Arvind Adiga and Bezwada Wilson

अरविंद ऐडिगा और बैजुआड़ा विल्सन

4) T.M. Krishna and Satish Gujral

टी. एम. कृष्णा और सतीश गुजराल

Correct Answer: Bezwada Wilson and T.M. Krishna

बैजुआड़ा विल्सन और टी.एम. कृष्णा

Candidate Answer: Bezwada Wilson and T.M. Krishna

बैजुआड़ा विल्सन और टी.एम. कृष्णा

Question 49. The discretionary powers of a Governor is limited in

राज्यपाल के विवेकाधिकार कहाँ पर सीमित हैं ?

Options:

1) Appointment of Chief Minister

मुख्य मंत्री की नियुक्ति

2) Dismissal of the Ministry

मंत्रालय की बर्खास्तगी

3) Dissolution of the Legislative Assembly

विधान सभा को भंग करना

4) Assent to Bills

विधेयकों को स्वीकृति देना

Correct Answer: Assent to Bills

विधेयकों को स्वीकृति देना

Candidate Answer: Dissolution of the Legislative Assembly
विधान सभा को भंग करना

Question 50. Who is the first law officer of the country?

देश का प्रथम विधि अधिकारी कौन है ?

Options:

1) Chief Justice of India

भारत का प्रमुख न्यायाधीश

2) Attorney General

महान्यायवादी

3) Law Minister

विधि मंत्री

4) Solicitor General

महा न्यायिकि कर्ता

Correct Answer: Attorney General

महान्यायवादी

Candidate Answer: Attorney General

महान्यायवादी

Question 51. A is twice as good as B and together they finish a piece of work in 16 days. The number of days taken by A alone to finish the work is

B की अपेक्षा A दुगुनी गति से काम करता है और वे दोनों एक साथ काम करके किसी काम को 16 दिन में पूरा कर लेते हैं, तो बताइये A अकेला उस काम को कितने दिन में पूरा करेगा ?

Options:

1) 20 days

20 दिन

2) 21 days

21 दिन

3) 22 days

22 दिन

4) 24 days

24 दिन

Correct Answer: 24 days

24 दिन

Candidate Answer: 24 days

24 दिन

Question 52. The successive discount of 15%, 20% and 25% on an article is equivalent to the single discount of

किसी वस्तु पर क्रमशः 15%, 20% और 25% की छूट निम्नलिखित में से किस छूट के बराबर होगी ?

Options:

1) 60%

2) 47%

3) 49%

4) 40%

Correct Answer: 49%

Candidate Answer: 49%

Question 53. The numbers x, y, z are respectively proportional to 2, 3, 5 and the sum of x, y and z is 80. If the number z is given by the equation $z = ax - 8$, then a is

संख्याएँ x, y, z क्रमशः 2, 3, 5 के अनुपात में हैं और x, y, z का योगफल 80 है। यदि संख्या z का समीकरण $z = ax - 8$ हो तो a का मान ज्ञात कीजिये ?

Options:

1) 6

2) 3/2

3) 3

4) 5/2

Correct Answer: 6

Candidate Answer: 3

Question 54.If the ratio of cost price and selling price be 10:11, then the profit percentage is

यदि क्रय मूल्य और विक्रय मूल्य 10:11 के अनुपात में हो तो लाभ प्रतिशत क्या होगा ?

Options:

1) 1%

2) 10%

3) 5%

4) 8%

Correct Answer: 10%

Candidate Answer: 10%

Question 55.The price of rice has increased by 60%. In order to restore the original price, the new price must be reduced by

चावल की कीमत 60% बढ़ गई है। चावल को पुनः मूल कीमत पर लाने के लिए नई कीमत को कितना कम करना चाहिये ?

Options:

1)

$$33\frac{1}{3}\%$$

2)

$$37\frac{1}{2}\%$$

3) 40%

4) 45%

Correct Answer:

$$37\frac{1}{2}\%$$

Candidate Answer:

$$37\frac{1}{2}\%$$

Question 56.A man covers a total distance of 100 km on bicycle. For the first 2 hours, the speed was 20 km/hr and for the rest of the journey, it came down to 10 km/hr. The average speed will be

कोई व्यक्ति साइकिल पर 100 कि.मी. की दूरी तय करता है। पहले 2 घण्टे में उसकी चाल 20 कि.मी./घण्टा रहती है और शेष यात्रा में उसकी चाल 10 कि.मी./घण्टा हो जाती है। औसत चाल ज्ञात कीजिये ?

Options:

1)

$$12\frac{1}{2} \text{ km/hr}$$

$$12\frac{1}{2} \text{ कि.मी./घंटा}$$

2) 13 km/hr

13 कि.मी./घंटा

3) 15 1/8 km/hr

15 1/8 कि.मी./घंटा

4) 20 Km/hr

20 कि.मी./घंटा

Correct Answer:

$$12\frac{1}{2} \text{ km/hr}$$

$$12\frac{1}{2} \text{ कि.मी./घंटा}$$

Candidate Answer:

$$12\frac{1}{2} \text{ km/hr}$$

$$12\frac{1}{2} \text{ कि.मी./घंटा}$$

Question 57. Alipta got some amount of money from her father. In how many years will the ratio of the money and the interest obtained from it be 10:3 at 6% simple interest per annum?

अलिप्ता को उसके पिताजी ने कोई धनराशि दी। कितने वर्षों में 6% साधारण ब्याज की दर से उस धन और उस पर मिलने वाले ब्याज का अनुपात 10:3 हो जायेगा ?

Options:

1) 7 years

7 वर्ष

2) 3 years

3 वर्ष

3) 5 years

5 वर्ष

4) 4 years

4 वर्ष

Correct Answer: 5 years

5 वर्ष

Candidate Answer: 5 years

5 वर्ष

Question 58. If $(x - 2)(x - p) = x^2 - ax + 6$, then the value of $(a - p)$ is

यदि $(x - 2)(x - p) = x^2 - ax + 6$ हो तो $(a - p)$ का मान बताइए ?

Options:

1) 0

2) 1

3) 2

4) 3

Correct Answer: 2

Candidate Answer: 2

Question 59.

When $2x + \frac{2}{x} = 3$, then value of $x^3 + \frac{1}{x} + 2$ is

यदि $2x + \frac{2}{x} = 3$ हो, तो $x^3 + \frac{1}{x} + 2$ का मान बताएं।

Options:

1) 2/7

2) 7/8

3) 7/2

4) 8/7

Correct Answer: 7/8

Candidate Answer: [NOT ANSWERED]

Question 60.

In a triangle ABC, if $\angle A + \angle C = 140^\circ$ and $\angle A + 3\angle B = 180^\circ$, then $\angle A$ is equal to

किसी ABC त्रिकोण में $\angle A + \angle C = 140^\circ$ एवं $\angle A + 3\angle B = 180^\circ$, तो $\angle A$ किसके बराबर होगा?

Options:

- 1) 80°
- 2) 40°
- 3) 60°
- 4) 20°

Correct Answer: 60°

Candidate Answer: 60°

Question 61.

If PA and PB are two tangents to a circle with centre O such that $\angle APB = 80^\circ$. Then, $\angle AOP =$

यदि PA और PB किसी वृत्त, जिसका केन्द्र O है, पर इस प्रकार स्पर्शा रेखाएँ हैं कि $\angle APB = 80^\circ$ तो $\angle AOP = ?$

Options:

- 1) 40°
- 2) 50°
- 3) 60°
- 4) 70°

Correct Answer: 50°

Candidate Answer: 50°

Question 62. If $\tan(5x - 10^\circ) = \cot(5y + 20^\circ)$, then the value of $x + y$ is

यदि $\tan(5x - 10^\circ) = \cot(5y + 20^\circ)$ तो $x + y$ का मान ज्ञात कीजिये ?

Options:

- 1) 15°
- 2) 16°
- 3) $22\frac{1}{2}^\circ$
- 4) 24°

Correct Answer: 16°

Candidate Answer: 16°

Question 63. Which one of the following is the minimum value of the sum of two integers whose product is 24?

दो पूर्णाकों, जिनका गुणनफल 24 है, के योगफल का न्यूनतम मान निम्नलिखित में से क्या होगा ?

Options:

- 1) 25
- 2) 11
- 3) 8
- 4) 10

Correct Answer: 10

Candidate Answer: 10

Question 64. The average marks obtained by a class of 60 students is 65. The average marks of half of the students is found to be 85. The average marks of the remaining students is

60 विद्यार्थियों की एक कक्षा में प्राप्त अंको का औसत 65 है। उनमें से आधे विद्यार्थियों द्वारा औसतन 85 अंक प्राप्त किए जाते हैं, शेष विद्यार्थियों द्वारा प्राप्त औसत अंक ज्ञात कीजिये ?

Options:

- 1) 35
- 2) 45
- 3) 55
- 4) 65

Correct Answer: 45**Candidate Answer:** 45

Question 65.

If $x = \sqrt{a} + \frac{1}{\sqrt{a}}$, $y = \sqrt{a} - \frac{1}{\sqrt{a}}$, ($a > 0$), then the value of $x^4 + y^4 - 2x^2y^2$ is

यदि $x = \sqrt{a} + \frac{1}{\sqrt{a}}$ और $y = \sqrt{a} - \frac{1}{\sqrt{a}}$, ($a > 0$), हो तो $x^4 + y^4 - 2x^2y^2$ का मान ज्ञात कीजिये

Options:

- 1) 16
- 2) 20
- 3) 10
- 4) 5

Correct Answer: 16**Candidate Answer:** 16

Question 66.

If $x = \sqrt[3]{x^2 + 11} - 2$, then the value of $x^3 + 5x^2 + 12x$ is

यदि $x = \sqrt[3]{x^2 + 11} - 2$ हो, तो $x^3 + 5x^2 + 12x$ का मान बताएं।

Options:

- 1) 0
- 2) 3
- 3) 7
- 4) 11

Correct Answer: 3**Candidate Answer:** 3

Question 67. Which of the set of three sides can't form a triangle?

निम्नलिखित में से तीन भुजाओं वाले कौन से सेट से त्रिभुज नहीं बन सकता है ?

Options:

- 1) 5 cm, 6 cm, 7 cm
5 से.मी., 6 से.मी., 7 से.मी.
- 2) 5 cm, 8 cm, 15 cm
5 से.मी., 8 से.मी., 15 से.मी.
- 3) 8 cm, 15 cm, 18 cm
8 से.मी., 15 से.मी., 18 से.मी.
- 4) 6 cm, 7 cm, 11 cm
6 से.मी., 7 से.मी., 11 से.मी.

Correct Answer: 5 cm, 8 cm, 15 cm

5 से.मी., 8 से.मी., 15 से.मी.

Candidate Answer: 5 cm, 8 cm, 15 cm

5 से.मी., 8 से.मी., 15 से.मी.

Question 68.

AB is the diameter of a circle with centre O and P be a point on its circumference, If $\angle POA = 120^\circ$, then the value of $\angle PBO$ is:

किसी वृत्त का व्यास AB है और उसका केन्द्र O है तथा उसकी परिधि पर P एक बिन्दु है। यदि $\angle POA = 120^\circ$ हो तो $\angle PBO$ का मान ज्ञात कीजिये ?

Options:

- 1) 30°
- 2) 60°
- 3) 50°
- 4) 40°

Correct Answer: 60° **Candidate Answer:** 60°

Question 69. A pilot in an aeroplane at an altitude of 200 m observes two points lying on either side of a river. If the angles of depression of the two points be 45° and 60° , then the width of the river is

200 मी. की ऊँचाई पर उड़ने वाले किसी विमान का पायलट किसी नदी के दोनों किनारों पर दो बिन्दु देखता है। यदि दोनों बिन्दुओं के अवनयन कोण 45° और 60° हो तो नदी की चौड़ाई ज्ञात कीजिये ?

Options:

- 1) $(200 + \frac{200}{\sqrt{3}}) m$
- 2) $(200 - \frac{200}{\sqrt{3}}) m$
- 3) $400\sqrt{3} m$
- 4) $(\frac{400}{\sqrt{3}}) m$

Correct Answer:

$$(200 - \frac{200}{\sqrt{3}}) m$$

Candidate Answer:

$$(200 + \frac{200}{\sqrt{3}}) m$$

Question 70. A solid sphere of radius 9 cm is melted to form a sphere of radius 6 cm and a right circular cylinder of same radius. The height of the cylinder so formed is

9 से.मी. त्रिज्या वाले एक ठोस गोलक को पिघलाकर 6 से.मी. त्रिज्या वाला एक गोलक बनाया जाता है। इस प्रकार बने गोलक की ऊँचाई ज्ञात कीजिये ?

Options:

- 1) 19 cm
- 19 से.मी.
- 2) 21 cm
- 21 से.मी.
- 3) 23 cm
- 23 से.मी.
- 4) 25 cm
- 25 से.मी.

Correct Answer: 19 cm

19 से.मी.

Candidate Answer: 19 cm

19 से.मी.

Question 71. An arc of 30° in one circle is double an arc in a second circle, the radius of which is three times the radius of the first. Then the angles subtended by the arc of the second circle at its centre is

एक वृत्त में 30° की चाप है जो एक दूसरे वृत्त की चाप से दुगुनी है, यदि दूसरे वृत्त की त्रिज्या पहले वृत्त की तुलना में तीन-गुणी है, तो दूसरे वृत्त के केन्द्र से चाप द्वारा अन्तरित कोण क्या होगा ?

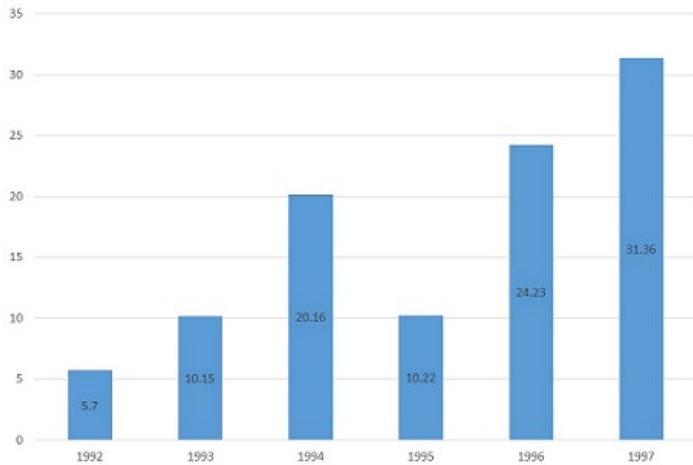
Options:

- 1) 3°
- 2) 4°
- 3) 5°
- 4) 6°

Correct Answer: 5° **Candidate Answer:** [NOT ANSWERED]

Question 72. Study the Bar diagram carefully and answer the questions. The Bar diagram shows the trends of foreign direct investment (FDI) into India from all over the World (in Rs. crores).

बार ग्राफ में समस्त विश्व से भारत में विदेशी प्रत्यक्ष निवेश (एफ डी आई) की प्रवृत्ति को दर्शाया गया है। बार ग्राफ का ध्यानपूर्वक अध्ययन कीजिए और प्रश्नों का उत्तर दीजिए।



The sum of FDI of 1992 and 1993 is

वर्ष 1992 और 1993 में विदेशी प्रत्यक्ष निवेश का कुल योग कितना है ?

Options:

1) 15.58 cr

15.58 करोड़

2) 15.85 cr

15.85 करोड़

3) 15.22 cr

15.22 करोड़

4) 15.65 cr

15.65 करोड़

Correct Answer: 15.85 cr

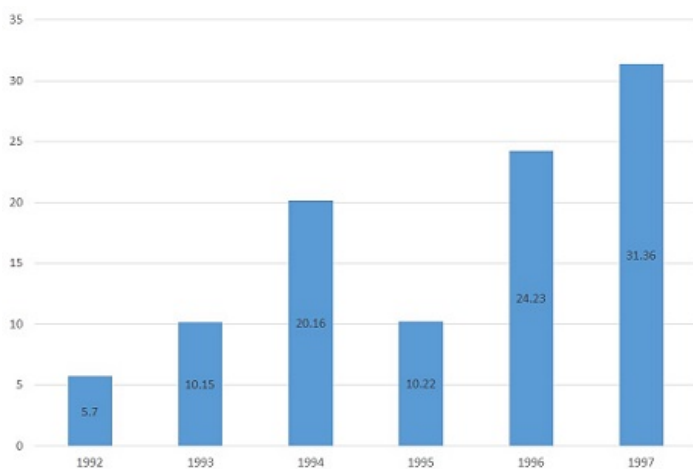
15.85 करोड़

Candidate Answer: 15.85 cr

15.85 करोड़

Question 73. Study the Bar diagram carefully and answer the questions. The Bar diagram shows the trends of foreign direct investment (FDI) into India from all over the World (in Rs. crores).

बार ग्राफ में समस्त विश्व से भारत में विदेशी प्रत्यक्ष निवेश (एफ डी आई) की प्रवृत्ति को दर्शाया गया है। बार ग्राफ का ध्यानपूर्वक अध्ययन कीजिए और प्रश्नों का उत्तर दीजिए।



The year which exhibited the 2nd highest growth percentage in FDI in India over the period shown is

दर्शाया गया अवधि में भारत में किस वर्ष सर्वाधिक विदेशी प्रत्यक्ष निवेश किया गया ?

Options:

1) 1993

2) 1994

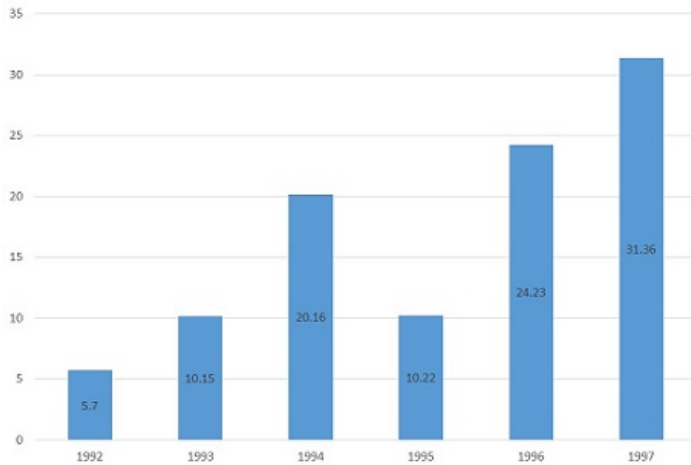
3) 1997

4) 1996

Correct Answer: 1996**Candidate Answer:** 1993

Question 74. Study the Bar diagram carefully and answer the questions. The Bar diagram shows the trends of foreign direct investment (FDI) into India from all over the World (in Rs. crores).

बार ग्राफ में समस्त विश्व से भारत में विदेशी प्रत्यक्ष निवेश (एफ डी आई) की प्रवृत्ति को दर्शाया गया है। बार ग्राफ का ध्यानपूर्वक अध्ययन कीजिए और प्रश्नो का उत्तर दीजिए ।



The ratio of investment in 1997 to the average investment is

वर्ष 1992 और 1997 में किए गए निवेश का अनुपात क्या है ।

Options:

1) 2:1

2) 1:2

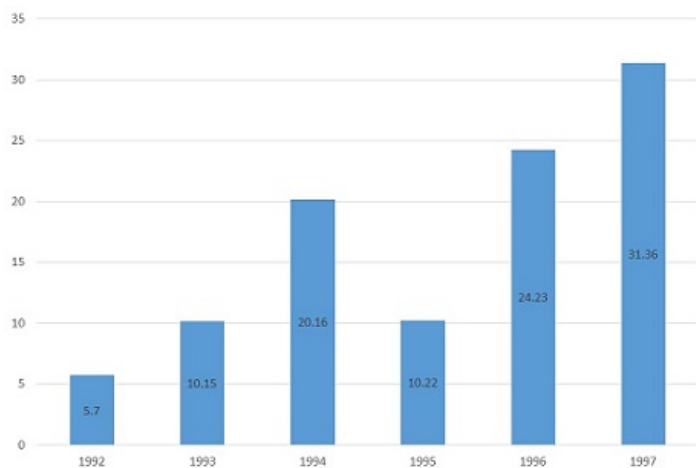
3) 1:1

4) 3:1

Correct Answer: 2:1**Candidate Answer:** 2:1

Question 75. Study the Bar diagram carefully and answer the questions. The Bar diagram shows the trends of foreign direct investment (FDI) into India from all over the World (in Rs. crores).

बार ग्राफ में समस्त विश्व से भारत में विदेशी प्रत्यक्ष निवेश (एफ डी आई) की प्रवृत्ति को दर्शाया गया है। बार ग्राफ का ध्यानपूर्वक अध्ययन कीजिए और प्रश्नों का उत्तर दीजिए।



The absolute difference in FDI to India between 1996 and 1997

वर्ष 1996 और 1997 के बीच भारत में किए गए विदेशी प्रत्यक्ष निवेश में सम्पूर्ण अन्तर कितना है।

Options:

1) 7.29

2) 7.13

3) 7.16

4) 7.22

Correct Answer: 7.13

Candidate Answer: 7.13

Question 76. In the following question, out of the four alternatives, choose the word which best expresses the meaning of the given word and click the button corresponding to it.

FORSWEAR

Options:

1) SWEAR

2) OATH

3) ABUSE

4) FORSAKE

Correct Answer: FORSAKE

Candidate Answer: [NOT ANSWERED]

Question 77. In the following question, out of the four alternatives, choose the word which is opposite in meaning to the given word and click the button corresponding to it.

INCLEMENT

Options:

1) RADICAL

2) MILD

3) HARSH

4) TYRANNICAL

Correct Answer: MILD

Candidate Answer: [NOT ANSWERED]

Question 78. Four words are given, out of which only one word is spelt correctly. Choose the correctly spelt word and click the button corresponding to it.

Options:

1) ANTICEPTIC

2) ANTECEPTIC

3) ANTICEPTIQUE

4) ANTISEPTIC

Correct Answer: ANTISEPTIC

Candidate Answer: ANTISEPTIC

Question 79. In the following questions, one part of the sentence may have an error. Find out which part of the sentence has an error and click the button corresponding to it. If the sentence is free from error, click the "No error" option.

The doctor says that(A)/the patient will recover(B)/in few days(C)/No Error(D)

Options:

- 1) A
- 2) B
- 3) C
- 4) D

Correct Answer: C

Candidate Answer: B

Question 80. In the following questions, one part of the sentence may have an error. Find out which part of the sentence has an error and click the button corresponding to it. If the sentence is free from error, click the "No error" option.

I do not think that(A)/I can cope up(B)/with this problem(C)/No Error(D)

Options:

- 1) A
- 2) B
- 3) C
- 4) D

Correct Answer: B

Candidate Answer: B

Question 81. In the following questions, one part of the sentence may have an error. Find out which part of the sentence has an error and click the button corresponding to it. If the sentence is free from error, click the "No error" option.

The mother(A)/yearns for(B)/her only child(C)/No Error(D)

Options:

- 1) A
- 2) B
- 3) C
- 4) D

Correct Answer: D

Candidate Answer: D

Question 82. The sentences given with blanks are to be filled with an appropriate word(s). Four alternatives are suggested for each question. For each question, choose the correct alternative and click the button corresponding to it.

Since last year his condition has been _____

Options:

- 1) deteriorate
- 2) deteriorating
- 3) severely deteriorated
- 4) deterioratingly

Correct Answer: deteriorating

Candidate Answer: deteriorating

Question 83. The sentences given with blanks are to be filled with an appropriate word(s). Four alternatives are suggested for each question. For each question, choose the correct alternative and click the button corresponding to it.

Most children remain _____ school between the ages of seven and ten.

Options:

- 1) in
- 2) under
- 3) at
- 4) inside

Correct Answer: at

Candidate Answer: at

Question 84. The sentences given with blanks are to be filled with an appropriate word(s). Four alternatives are suggested for each question. For each question, choose the correct alternative and click the button corresponding to it.

The quake also _____ mudslides on the outskirts of the city.

Options:

- 1) tempered
- 2) tampered
- 3) erupted
- 4) triggered

Correct Answer: triggered

Candidate Answer: triggered

Question 85. In each of the questions, four alternatives are given for the Idiom/Phrase. Choose the alternative which best expresses the meaning of the Idiom/Phrase and click the button corresponding to it.

Wet behind the ears

Options:

- 1) Skillful
- 2) Young and rich with experience
- 3) Young and without much experience
- 4) Hearing impaired

Correct Answer: Young and without much experience

Candidate Answer: Young and without much experience

Question 86. In each of the questions, four alternatives are given for the Idiom/Phrase. Choose the alternative which best expresses the meaning of the Idiom/Phrase and click the button corresponding to it.

Under a cloud

Options:

- 1) Sheltered from the sun
- 2) Under suspicion
- 3) Out in the open
- 4) Get wet

Correct Answer: Under suspicion

Candidate Answer: Under suspicion

Question 87. In each of the questions, four alternatives are given for the Idiom/Phrase. Choose the alternative which best expresses the meaning of the Idiom/Phrase and click the button corresponding to it.

Get the sack

Options:

- 1) Look for a sack
- 2) Find a sack
- 3) Get a call back
- 4) Be dismissed

Correct Answer: Be dismissed

Candidate Answer: Be dismissed

Question 88. Out of the four alternatives, choose the one which can be substituted for the given words/sentences and click the button corresponding to it.

A person's peculiar habit

Options:

- 1) Trait
- 2) Idiosyncrasy
- 3) Idiolect
- 4) Talent

Correct Answer: Idiosyncrasy

Candidate Answer: Idiosyncrasy

Question 89. Out of the four alternatives, choose the one which can be substituted for the given words/sentences and click the button corresponding to it.

Speech delivered without preparation

Options:

- 1) Rhetoric
- 2) Oration
- 3) Extempore
- 4) Maiden speech

Correct Answer: Extempore

Candidate Answer: Extempore

Question 90. Out of the four alternatives, choose the one which can be substituted for the given words/sentences and click the button corresponding to it.

One who will do any job for anyone for money

Options:

- 1) Mercenary
- 2) Recruit
- 3) Hoodlum
- 4) Merchant

Correct Answer: Mercenary

Candidate Answer: Mercenary

Question 91. A sentence/a part of the sentence is underlined. Four alternatives are given to the underlined part which will improve the sentence. Choose the correct alternative and click the button corresponding to it. In case no improvement is needed, click the button corresponding to "No improvement".

The more they earn, more they spend

Options:

- 1) The more they earn, the more they spend
- 2) More they earn, the more they spend
- 3) More they earn, more they spend
- 4) No improvement

Correct Answer: The more they earn, the more they spend

Candidate Answer: The more they earn, the more they spend

Question 92. A sentence/a part of the sentence is underlined. Four alternatives are given to the underlined part which will improve the sentence. Choose the correct alternative and click the button corresponding to it. In case no improvement is needed, click the button corresponding to "No improvement".

The offerings were placed on the alter

Options:

- 1) on the altar
- 2) on the steps
- 3) on the platform
- 4) No improvement

Correct Answer: on the altar

Candidate Answer: on the altar

Question 93. A sentence/a part of the sentence is underlined. Four alternatives are given to the underlined part which will improve the sentence. Choose the correct alternative and click the button corresponding to it. In case no improvement is needed, click the button corresponding to "No improvement".

Really speaking, no man is perfect

Options:

- 1) Strictly
- 2) slightly
- 3) vaguely
- 4) No improvement

Correct Answer: Strictly

Candidate Answer: Strictly

Question 94. A sentence/a part of the sentence is underlined. Four alternatives are given to the underlined part which will improve the sentence. Choose the correct alternative and click the button corresponding to it. In case no improvement is needed, click the button corresponding to "No improvement".

Mankind does not know this

Options:

- 1) do
- 2) had
- 3) is
- 4) No improvement

Correct Answer: No improvement

Candidate Answer: No improvement

Question 95. A sentence/a part of the sentence is underlined. Four alternatives are given to the underlined part which will improve the sentence. Choose the correct alternative and click the button corresponding to it. In case no improvement is needed, click the button corresponding to "No improvement".

Practically every part of the coconut tree is used by man

Options:

- 1) each
- 2) most
- 3) any
- 4) No improvement

Correct Answer: No improvement

Candidate Answer: No improvement

Question 96. A passage is given with 5 questions following it. Read the passage carefully and choose the best answer to each question out of the four alternatives and click the button corresponding to it.

Dyslexia is a perceptual disorder often occurring in persons of normal, or even above average intelligence. The reader is unable to perceive correctly what is on a page. Letters and numbers often appear reversed: "b" seems to be "d", "quite" is "quiet" and "from" is "form". The reader tends to leave out letters or words or insert words or letters that are not there. Vowel and consonant sounds may be confused. Many dyslexics are left-handed or able to write with either hand. They often confuse left and right. Learning to speak may also be delayed beyond infancy. The condition seems to be inherited. It may persist into adulthood. However, with early recognition and specialized approaches to teaching reading, most dyslexics can learn to read.

Some researchers believe that latent dyslexia may be aggravated by the way reading is taught. The modern whole-word, or look-and-say, method seems to be more of a hindrance to learning for dyslexics than it is for ordinary pupils. The phonetic method of teaching students to learn letters and sound them out appears to achieve better reading results. The problem of words that cannot be sounded out - such as rough, laugh or through - is not solved by phonetics. These words must simply be memorized. However, for children with dyslexia the problem can be compounded by the failure of parents or teachers to recognize the condition. This can easily lead to emotional problems for dyslexic children, who cannot understand their failure to keep up with their classmates.

Dyslexia, often occurring in persons of normal, or even above average intelligence, is a _____

Options:

- 1) Conceptual disorder
- 2) Pathological disease
- 3) Perceptive disorder
- 4) Perceptual disorder

Correct Answer: Perceptual disorder

Candidate Answer: Perceptual disorder

Question 97. A passage is given with 5 questions following it. Read the passage carefully and choose the best answer to each question out of the four alternatives and click the button corresponding to it.

Dyslexia is a perceptual disorder often occurring in persons of normal, or even above average intelligence. The reader is unable to perceive correctly what is on a page. Letters and numbers often appear reversed: "b" seems to be "d", "quite" is "quiet" and "from" is "form". The reader tends to leave out letters or words or insert words or letters that are not there. Vowel and consonant sounds may be confused. Many dyslexics are left-handed or able to write with either hand. They often confuse left and right. Learning to speak may also be delayed beyond infancy. The condition seems to be inherited. It may persist into adulthood. However, with early recognition and specialized approaches to teaching reading, most dyslexics can learn to read.

Some researchers believe that latent dyslexia may be aggravated by the way reading is taught. The modern whole-word, or look-and-say, method seems to be more of a hindrance to learning for dyslexics than it is for ordinary pupils. The phonetic method of teaching students to learn letters and sound them out appears to achieve better reading results. The problem of words that cannot be sounded out - such as rough, laugh or through - is not solved by phonetics. These words must simply be memorized. However, for children with dyslexia the problem can be compounded by the failure of parents or teachers to recognize the condition. This can easily lead to emotional problems for dyslexic children, who cannot understand their failure to keep up with their classmates.

In Dyslexia, letters and figures often appear _____

Options:

- 1) Inverted
- 2) Blurred
- 3) Reversed
- 4) Clustered

Correct Answer: Reversed

Candidate Answer: Reversed

Question 98. A passage is given with 5 questions following it. Read the passage carefully and choose the best answer to each question out of the four alternatives and click the button corresponding to it.

Dyslexia is a perceptual disorder often occurring in persons of normal, or even above average intelligence. The reader is unable to perceive correctly what is on a page. Letters and numbers often appear reversed: "b" seems to be "d", "quite" is "quiet" and "from" is "form". The reader tends to leave out letters or words or insert words or letters that are not there. Vowel and consonant sounds may be confused. Many dyslexics are left-handed or able to write with either hand. They often confuse left and right. Learning to speak may also be delayed beyond infancy. The condition seems to be inherited. It may persist into adulthood. However, with early recognition and specialized approaches to teaching reading, most dyslexics can learn to read.

Some researchers believe that latent dyslexia may be aggravated by the way reading is taught. The modern whole-word, or look-and-say, method seems to be more of a hindrance to learning for dyslexics than it is for ordinary pupils. The phonetic method of teaching students to learn letters and sound them out appears to achieve better reading results. The problem of words that cannot be sounded out - such as rough, laugh or through - is not solved by phonetics. These words must simply be memorized. However, for children with dyslexia the problem can be compounded by the failure of parents or teachers to recognize the condition. This can easily lead to emotional problems for dyslexic children, who cannot understand their failure to keep up with their classmates.

People suffering from dyslexia are often _____

Options:

- 1) right handed
- 2) far sighted
- 3) ambidextrous
- 4) only left handed

Correct Answer: ambidextrous

Candidate Answer: ambidextrous

Question 99. A passage is given with 5 questions following it. Read the passage carefully and choose the best answer to each question out of the four alternatives and click the button corresponding to it.

Dyslexia is a perceptual disorder often occurring in persons of normal, or even above average intelligence. The reader is unable to perceive correctly what is on a page. Letters and numbers often appear reversed: "b" seems to be "d", "quite" is "quiet" and "from" is "form". The reader tends to leave out letters or words or insert words or letters that are not there. Vowel and consonant sounds may be confused. Many dyslexics are left-handed or able to write with either hand. They often confuse left and right. Learning to speak may also be delayed beyond infancy. The condition seems to be inherited. It may persist into adulthood. However, with early recognition and specialized approaches to teaching reading, most dyslexics can learn to read.

Some researchers believe that latent dyslexia may be aggravated by the way reading is taught. The modern whole-word, or look-and-say, method seems to be more of a hindrance to learning for dyslexics than it is for ordinary pupils. The phonetic method of teaching students to learn letters and sound them out appears to achieve better reading results. The problem of words that cannot be sounded out - such as rough, laugh or through - is not solved by phonetics. These words must simply be memorized. However, for children with dyslexia the problem can be compounded by the failure of parents or teachers to recognize the condition. This can easily lead to emotional problems for dyslexic children, who cannot understand their failure to keep up with their classmates.

Dyslexia may _____

Options:

- 1) be noticed during infancy
- 2) last till childhood
- 3) persist into adulthood
- 4) end when one goes to school

Correct Answer: persist into adulthood

Candidate Answer: persist into adulthood

Question 100. A passage is given with 5 questions following it. Read the passage carefully and choose the best answer to each question out of the four alternatives and click the button corresponding to it.

Dyslexia is a perceptual disorder often occurring in persons of normal, or even above average intelligence. The reader is unable to perceive correctly what is on a page. Letters and numbers often appear reversed: "b" seems to be "d", "quite" is "quiet" and "from" is "form". The reader tends to leave out letters or words or insert words or letters that are not there. Vowel and consonant sounds may be confused. Many dyslexics are left-handed or able to write with either hand. They often confuse left and right. Learning to speak may also be delayed beyond infancy. The condition seems to be inherited. It may persist into adulthood. However, with early recognition and specialized approaches to teaching reading, most dyslexics can learn to read.

Some researchers believe that latent dyslexia may be aggravated by the way reading is taught. The modern whole-word, or look-and-say, method seems to be more of a hindrance to learning for dyslexics than it is for ordinary pupils. The phonetic method of teaching students to learn letters and sound them out appears to achieve better reading results. The problem of words that cannot be sounded out - such as rough, laugh or through - is not solved by phonetics. These words must simply be memorized. However, for children with dyslexia the problem can be compounded by the failure of parents or teachers to recognize the condition. This can easily lead to emotional problems for dyslexic children, who cannot understand their failure to keep up with their classmates.

The problem of perception can be compounded by the failure of parents and teachers to

Options:

- 1) provide treatment
- 2) recognize the condition
- 3) correct the child at infancy
- 4) understand the child

Correct Answer: recognize the condition

Candidate Answer: recognize the condition