



Staff Selection Commission
(Government Of India)

REGISTRATION NUMBER :
EXAM DATE : 11-September-2016
EXAM NAME : SSC Examination 2016
TOTAL MARKS : 200

CANDIDATE NAME :
EXAM START TIME : 13:15:00
EXAM DURATION : 01:15 Hrs
TOTAL NO OF QUESTIONS : 100

Question 1. Select the related word/letters/number from the given alternatives.

दिये गये विकल्पों में से संबंधित शब्द/अक्षरों/संख्या को चुनिए।

Maharashtra:India::Texas:?

महाराष्ट्र : भारत :: टेक्सास : ?

Options:

1) Canada

कनाडा

2) Mexico

मैक्सिको

3) Brazil

ब्राज़ील

4) USA

यू. एस. ए

Correct Answer: USA

यू. एस. ए

Candidate Answer: USA

यू. एस. ए

Question 2. Select the related word/letters/number from the given alternatives.

दिये गये विकल्पों में से संबंधित शब्द/अक्षरों/संख्या को चुनिए।

JK:QR::____?:____?

Options:

1) ST:UV

2) WX:ZY

3) BC:IJ

4) MN:OR

Correct Answer: BC:IJ

Candidate Answer: BC:IJ

Question 3. Select the related word/letters/number from the given alternatives.

दिये गये विकल्पों में से संबंधित शब्द/अक्षरों/संख्या को चुनिए।

72:90::156:?

Options:

1) 184

2) 168

3) 182

4) 176

Correct Answer: 182

Candidate Answer: [NOT ANSWERED]

Question 4. Find the odd word/letters/number pair from the given alternatives.

दिये गये विकल्पों में से विषम शब्द/ अक्षर/संख्या युग्म चुनिए।

(A) Square (B) Sphere (C) Rectangle (D) Circle

(A) वर्ग (B) गोलक (C) आयत (D) वृत्त

Options:

1) A

2) B

3) C

4) D

Correct Answer: B

Candidate Answer: B

Question 5. Find the odd word/letters/number pair from the given alternatives.

दिये गये विकल्पों में से विषम शब्द/ अक्षर/संख्या युग्म चुनिए।

(A) AE (B) CG (C) JN (D) MO

Options:

1) A

2) B

3) C

4) D

Correct Answer: D

Candidate Answer: D

Question 6. Find the odd word/letters/number pair from the given alternatives.

दिये गये विकल्पों में से विषम शब्द/ अक्षर/संख्या युग्म चुनिए।

(A) 4-16 (B) 8-24 (C) 14-26 (D) 16-36

Options:

1) A

2) B

3) C

4) D

Correct Answer: C

Candidate Answer: D

Question 7. Arrange the following words as per order in the dictionary.

निम्नलिखित शब्दों को शब्दकोश में दिए गए क्रम के अनुसार लिखिए।

1. Stilt 2. Stifle 3. Stink 4. Stingy

Options:

1) 3,4,2,1

2) 1,3,4,2

3) 2,1,4,3

4) 2,3,4,1

Correct Answer: 2,1,4,3

Candidate Answer: 2,1,4,3

Question 8. A series is given, with one term missing. Choose the correct alternative from the given ones that will complete the series.

दिए गए अनुक्रम में एक पद लुप्त है। दिए गए विकल्पों में से वह सही विकल्प चुनिए जो अनुक्रम को पूरा करे।

CL, HQ, MV, ?

Options:

1) RA

2) QZ

3) SB

4) TC

Correct Answer: RA

Candidate Answer: RA

Question 9. Which number will complete the series?

कौन-सी संख्या श्रृंखला को पूरा करेगी।

11, 13, 17, 19, 23, 25, _____

Options:

1) 25

2) 27

3) 29

4) 31

Correct Answer: 29

Candidate Answer: 29

Question 10. Introducing a man, a woman said that, "He is the son of my mother's brother's father's son." Then how is the woman related to the man?

एक पुरुष का परिचय देते हुए एक स्त्री ने कहा, "यह मेरी माँ के भाई के पिता के पुत्र का पुत्र है"। बताइए उस स्त्री का उस पुरुष से क्या सम्बन्ध है ?

Options:

1) Nephew

भतीजा

2) Brother

भाई

3) Son

पुत्र

4) Cousin

ममेरा भाई

Correct Answer: Cousin

ममेरा भाई

Candidate Answer: Cousin

ममेरा भाई

Question 11. Ram leaves his house at 20 mins to seven in the morning, reaches Kunal's house in 25 mins. They finish their breakfast in another 15 mins and leave for their office which takes another 35 minutes. At what time do they leave Kunal's house to reach their office?

राम 7 बजने में 20 मिनट पर घर से निकलता है और 25 मिनट में कुणाल के घर पहुँचता है। वे 15 मिनट में अपना नाश्ता खत्म करते हैं और फिर अपने कार्यालय के लिए निकल जाते हैं। कार्यालय पहुँचने में उन्हें 35 मिनट लगते हैं। वे कार्यालय जाने के लिए कुणाल के घर से कितने बजे निकले ?

Options:

1) 7:40 A.M

2) 7:20 A.M

3) 7:45 A.M

4) 8:15 A.M

Correct Answer: 7:20 A.M

Candidate Answer: 7:20 A.M

Question 12. From the given alternative words, select the word which cannot be formed using the letters of the given word:

निम्नलिखित विकल्पों में से वह शब्द चुनिए जो दिए गए शब्द के अक्षरों का प्रयोग करके नहीं बनाया जा सकता है।

LEGALIZATION

Options:

1) ALERT

2) ALEGATION

3) GALLANT

4) NATAL

Correct Answer: ALERT

Candidate Answer: ALERT

Question 13.If DECEMBER is coded as EDECBMRE then FEBRUARY will be coded as

यदि DECEMBER को EDECBMRE लिखा जाता है, तो उसी कोड में FEBRUARY को कैसे लिखा जाएगा ?

Options:

1) EFRBUAYR

2) EFBRAUYR

3) EFRBUARY

4) EFRBAUYR

Correct Answer: EFRBAUYR

Candidate Answer: EFRBUAYR

Question 14.If, $6 \times 4 = 12$

$$4 \times 12 = 24$$

$$12 \times 6 = 36$$

then $6 \times 9 = ?$

यदि, $6 \times 4 = 12$,

$$4 \times 12 = 24,$$

$12 \times 6 = 36$ हो तो

$6 \times 9 = ?$ का मान ज्ञात कीजिए ?

Options:

1) 35

2) 24

3) 27

4) 31

Correct Answer: 27

Candidate Answer: 27

Question 15.If \times means $+$, $+$ means \div , $-$ means \times and \div means $-$, then $8 \times 7 - 8 + 40 \div 2 = ?$

यदि \times का अर्थ है $+$, $+$ का अर्थ है \div , $-$ का अर्थ है \times और \div का अर्थ है $-$, तब $8 \times 7 - 8 + 40 \div 2$ क्या होगा ?

Options:

1) 1

2)
 $\frac{37}{5}$

3)
 $8\frac{3}{5}$

4) 44

Correct Answer:

$\frac{37}{5}$

Candidate Answer:

$\frac{37}{5}$

Question 16. Find the missing term in the following question:-

निम्नलिखित प्रश्न में लुप्त संख्या ज्ञात कीजिए ।

10	6	9
18	14	17
28	34	?
20	26	32

Options:

1) 25

2) 37

3) 40

4) 57

Correct Answer: 40

Candidate Answer: 40

Question 17. Sunita travels 6 Km towards north east. Then travels 9 Km towards west. From there, she goes 6 Km south-west and finally goes 3 Km towards east. How far is she from her initial position?

सुनीता उत्तर-पूर्व की ओर 6 कि.मी. चलती है फिर वह पश्चिम की ओर 9 कि.मी. चलती है वहाँ से वह दक्षिण-पश्चिम की ओर 6 कि.मी. चलती है और अंत में पूर्व की ओर 3 कि.मी. चलती है। वह अपने प्रारम्भिक स्थान से कितनी दूरी पर है ?

Options:

1) 3 Km

3 कि.मी.

2) 6 Km

6 कि.मी.

3) 9 Km

9 कि.मी.

4) 12 Km

12 कि.मी.

Correct Answer: 6 Km

6 कि.मी.

Candidate Answer: 6 Km

6 कि.मी.

Question 18. Consider the given statement/s to be true and decide which of the given conclusions/assumptions can definitely be drawn from the given statement.

Statement: I Some bags are pockets.

Statement: II No pocket is a pouch.

Conclusion: I Some bags are not pouches.

Conclusion: II Some pockets are bags.

निम्नलिखित प्रश्न में एक या दो वक्तव्य दिये गये हैं, जिसके आगे दो निष्कर्ष/मान्यताएं, I और II निकाले गये हैं। आपको विचार करना है कि वक्तव्य सत्य है चाहे वह सामान्यतः शर्त तथ्यों से भिन्न प्रतीत होता हो। आपको निर्णय करना है कि दिए गए वक्तव्य में से कोन-सा निश्चित रूप से सही निष्कर्ष/मान्यता निकाला जा सकता है।

वक्तव्य I : कुछ थैले जेबे हैं।

वक्तव्य II : कोई भी जेब थैली नहीं है।

निष्कर्ष: I कुछ थैले थैलियाँ नहीं है।

निष्कर्ष: II कुछ जेबें थैले हैं।

Options:

1) Only conclusion I follows

केवल निष्कर्ष I निकलता है

2) Only conclusion II follows

केवल निष्कर्ष II निकलता है

3) Both conclusion I and conclusion II follow

दोनों निष्कर्ष I और II निकलते हैं।

4) Neither conclusion I nor conclusion II follows

न ही निष्कर्ष I और न ही निष्कर्ष II निकलता है

Correct Answer: Both conclusion I and conclusion II

follow

दोनों निष्कर्ष I और II निकलते हैं।

Candidate Answer: Only conclusion II follows
केवल निष्कर्ष II निकलता है

Question 19. Find the number of triangles in the figure.

दी गई आकृति में कितने त्रिभुज हैं ।



Options:

1) 8

2) 10

3) 12

4) 14

Correct Answer: 14

Candidate Answer: 12

Question 20. In a group of 50 students, 25 play Hockey, 30 play Football, and 8 play neither game. What is the number of students who play both Hockey and Football?

50 छात्रों की एक कक्षा में 25 छात्र हॉकी खेलते हैं, 30 छात्र फुटबॉल खेलते हैं और 8 छात्र कोई खेल नहीं खेलते हैं। उन छात्रों की संख्या बताइए जो हॉकी और फुटबॉल दोनों खेलते हैं ?

Options:

1) 10

2) 11

3) 12

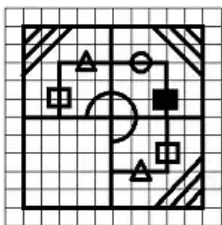
4) 13

Correct Answer: 13

Candidate Answer: 13

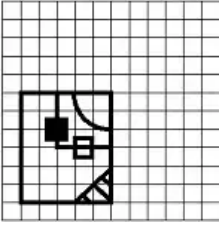
Question 21. Which answer figure will complete the pattern in the question figure?

कौन-सी उत्तर आकृति प्रश्न आकृति के प्रतिरूप को पूरा करती है ?

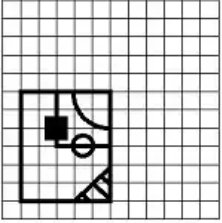


Options:

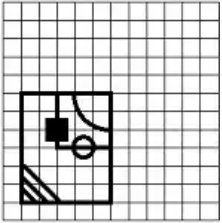
1)



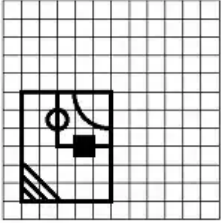
2)



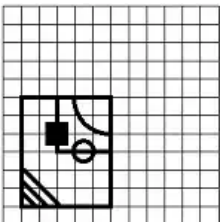
3)



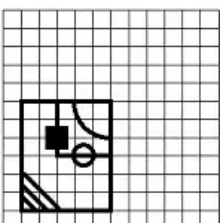
4)



Correct Answer:

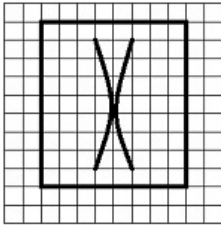


Candidate Answer:



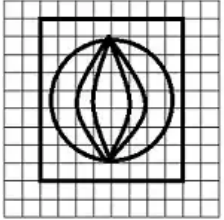
Question 22. From the given answer figures, select the one in which the question figure is hidden/embedded.

दी गई उत्तर आकृतियों में से उस एक उत्तर आकृति को चुनिए जिसमें प्रश्न आकृति निहित है।

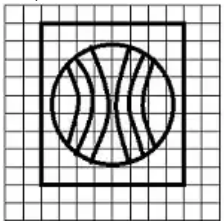


Options:

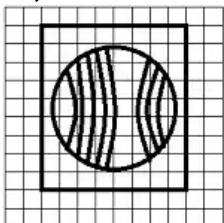
1)



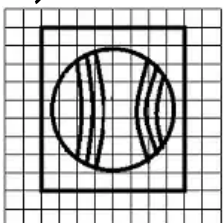
2)



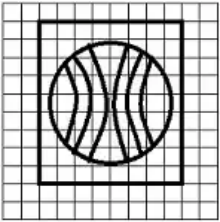
3)



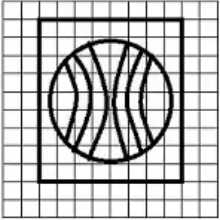
4)



Correct Answer:

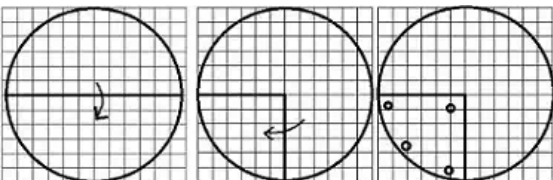


Candidate Answer:



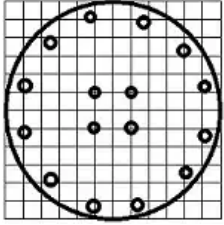
Question 23. A piece of paper is folded and cut as shown below in the question figures. From the given answer figures, indicate how it will appear when opened.

नीचे प्रश्न आकृति में चित्र अनुसार कागज को मोड़कर काटने और खोलने के बाद वह किस उत्तर आकृति जैसा दिखाई देगा ?

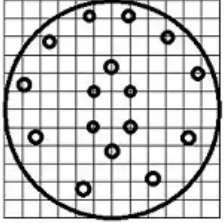


Options:

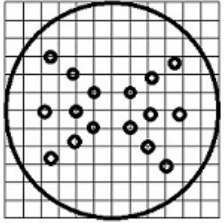
1)



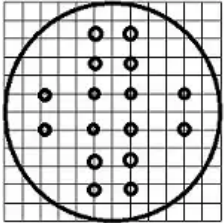
2)



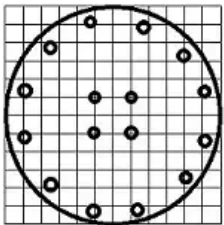
3)



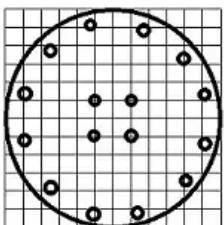
4)



Correct Answer:

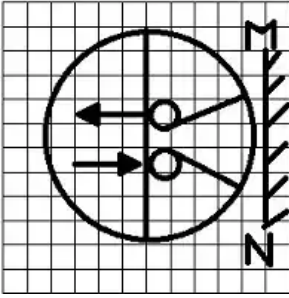


Candidate Answer:



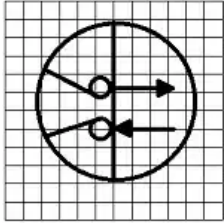
Question 24. If a mirror is placed on the line MN, then which of the answer figures is the right image of the given figure?

यदि एक दर्पण को MN रेखा पर रखा जाये तो दी गई उत्तर आकृतियों में से कौन-सी आकृति प्रश्न आकृति का सही प्रतिबिम्ब होगी ?

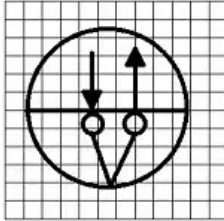


Options:

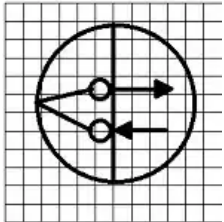
1)



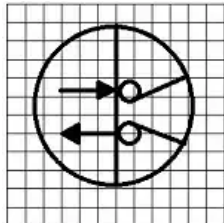
2)



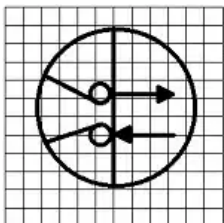
3)



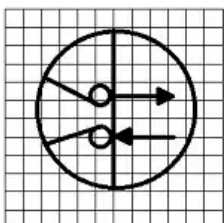
4)



Correct Answer:



Candidate Answer:



Question 25. In the question, a word is represented by only one set of numbers as given in any one of the alternatives. The sets of numbers given in the alternatives are represented by two classes of alphabets as in two matrices given below. The columns and rows of Matrix I are numbered from 0 to 4 and that of Matrix II are numbered from 5 to 9. A letter from these matrices can be represented first by its row and next by its column, e.g., A can be represented by 02, 14, 40, etc., and P can be represented by 56, 75, 87 etc. You have to identify the set for the word 'TAKE'.

निम्नलिखित प्रश्न में विकल्पों में दिए गए संख्या-समूह, अक्षरों के दो वर्गों द्वारा दर्शाए गए हैं, जैसे कि नीचे दिए गए दो आव्यूहों में हैं। आव्यूह I के सतम्भ और पंक्ति की संख्या 0 से 4 तक दी गई है, और आव्यूह II के 5 से 9 तक, इन आव्यूहों से एक अक्षर को पहले उसकी पंक्ति और बाद में स्तम्भ संख्या द्वारा दर्शाया जा सकता है। उदाहरण के लिए, 'A' को 02, 14, 40 आदि द्वारा दर्शाया जा सकता है तथा 'P' को 56, 75, 87 आदि द्वारा दर्शाया जा सकता है। इसी प्रकार से आपको दिए शब्द 'TAKE' के लिए समूह को पहचानना है।

Matrix-I						Matrix-II					
	0	1	2	3	4		5	6	7	8	9
0	B	H	A	R	T	5	S	P	E	A	K
1	R	T	B	H	A	6	A	K	S	P	E
2	H	A	R	T	B	7	P	E	A	K	S
3	T	B	H	A	R	8	K	S	P	E	A
4	A	R	T	B	H	9	E	A	K	S	P

Options:

1) 23, 21, 85, 95

2) 30, 33, 87, 88

3) 04, 33, 66, 99

4) 11, 21, 85, 86

Correct Answer: 23, 21, 85, 95

Candidate Answer: 23, 21, 85, 95

Question 26. Which Governor General decided to make English as the medium of instruction in India?

निम्नलिखित में से कौन-से गवर्नर जनरल ने भारत में अंग्रेजी को शिक्षा का माध्यम बनाने का निर्णय लिया ?

Options:

1) Lord Wellesley

लॉर्ड वेलस्ले

2) Lord Hardinge

लॉर्ड हार्डिंग

3) Lord Dalhousie

लॉर्ड डलहौज़ी

4) Lord William Bentinck

लॉर्ड विलियम बेन्टिंक

Correct Answer: Lord William Bentinck

लॉर्ड विलियम बेन्टिंक

Candidate Answer: Lord William Bentinck

लॉर्ड विलियम बेन्टिंक

Question 27. Who among the following is a renowned campaigner against manual scavenging who was recently conferred with the prestigious Magsaysay award?

निम्नलिखित में से कौन प्रसिद्ध अभियानकर्ता हैं जिन्होंने हाथ से मैला उठाने के विरुद्ध आन्दोलन किया और उन्हें प्रतिष्ठित मैगसेसे पुरस्कार से सम्मानित किया गया ?

Options:

1) T.M. Krishna

टी. एम. कृष्ण

2) Bezwada Wilson

बेज़वाड़ा विल्सन

3) Anshu Gupta

अंशु गुप्ता

4) Sanjiv Chaturvedi

संजीव चतुर्वेदी

Correct Answer: Bezwada Wilson

बेज़वाड़ा विल्सन

Candidate Answer: T.M. Krishna

टी. एम. कृष्ण

Question 28. An indifference curve measures _____ level of satisfaction derived from different combinations of commodity X and Y.

एक अनधिमान वक्र, X और Y के विभिन्न संगतों से मिलने वाली सन्तुष्टि के _____ स्तर को मापती है ?

Options:

1) same

समान

2) higher

उच्च

3) lower

कम

4) minimum

न्यूनतम

Correct Answer: same

समान

Candidate Answer: [NOT ANSWERED]

Question 29. Who among the following was the first to make use of artillery in warfare in medieval India?

मध्य कालीन भारत में निम्नलिखित में से किसने पहली बार युद्ध में तोपों का इस्तेमाल किया ?

Options:

1) Babur

बाबर

2) Ibrahim Lodi

इब्राहिम लोधी

3) Sher Shah Suri

शेर शाह सूरी

4) Akbar

अकबर

Correct Answer: Babur

बाबर

Candidate Answer: [NOT ANSWERED]

Question 30. Person who is colour-blind cannot distinguish between

वर्णान्ध व्यक्ति किन रंगों में भेद नहीं कर पाता है ?

Options:

1) Black and yellow

काले और पीले

2) Red and green

लाल और हरे

3) Yellow and white

पीले और सफेद

4) Green and blue

हरे और नीले

Correct Answer: Red and green

लाल और हरे

Candidate Answer: Red and green

लाल और हरे

Question 31. During the motion of a projectile fired from the earth surface, _____

पृथ्वी की सतह से फायर किये गए प्रक्षेप्य की गति के दौरान, _____

Options:

1) its kinetic energy remains constant

उसकी गतिज ऊर्जा स्थिर रहती है

2) its momentum remains constant

उसका संवेग स्थिर रहता है

3) vertical component of its velocity remains constant

उसके वेग का ऊर्ध्व घटक स्थिर रहता है

4) horizontal component of its velocity remains constant

उसके वेग का क्षैतिज घटक स्थिर रहता है

Correct Answer: horizontal component of its velocity remains constant

उसके वेग का क्षैतिज घटक स्थिर रहता है

Candidate Answer: [NOT ANSWERED]

Question 32. Which of the following waves cannot be polarised?

निम्नलिखित में से कौन-सी तरंगों को ध्रुवित नहीं किया जा सकता ?

Options:

1) Radio

रेडियो

2) Ultra violet

पराबैंगनी

3) Infrared

अवरक्त

4) Ultrasonic

पराश्रव्य

Correct Answer: Ultrasonic

पराश्रव्य

Candidate Answer: [NOT ANSWERED]

Question 33. Of the following commonly used materials, the one that is not an alloy is

सामान्यतः प्रयुक्त होने वाले निम्नलिखित पदार्थों में से कौन-सा मिश्रधातु नहीं है ?

Options:

1) Steel

इस्पात

2) Brass

पीतल

3) Bronze

कांसा

4) Copper

तांबा

Correct Answer: Copper

तांबा

Candidate Answer: Copper

तांबा

Question 34. "Himayat" is a training cum-placement programme for unemployed youth in the State of

किस राज्य में 'हिमायत' बेरोज़गार युवकों के लिए एक प्रशिक्षण व नियोजन कार्यक्रम है ?

Options:

1) Haryana

हरियाणा

2) Punjab

पंजाब

3) Jammu and Kashmir

जम्मू-कश्मीर

4) Himachal Pradesh

हिमाचल प्रदेश

Correct Answer: Jammu and Kashmir

जम्मू-कश्मीर

Candidate Answer: [NOT ANSWERED]

Question 35. "Agha Khan Cup" is associated with the game of

आगा खां कप किस खेल से सम्बंधित है ?

Options:

1) Cricket

क्रिकेट

2) Football

फुटबॉल

3) Lawn Tennis

लॉन टेनिस

4) Hockey

हॉकी

Correct Answer: Hockey

हॉकी

Candidate Answer: Hockey

हॉकी

Question 36. Absolute Zero is defined as

"परम शून्य" को किस प्रकार परिभाषित किया जाता है ?

Options:

1) The temperature at which all molecular motion ceases
वह तापमान जिस पर सब आण्विक गति बंद हो जाती है

2) At which water boils at 298K
जिस पर जल 298 K पर उबलता है

3) At which liquid Helium boils
जिस पर तरल हीलियम उबलता है

4) At which the volume becomes zero
जिस पर आयतन शून्य हो जाता है

Correct Answer: The temperature at which all molecular motion ceases

वह तापमान जिस पर सब आण्विक गति बंद हो जाती है

Candidate Answer: The temperature at which all molecular motion ceases

वह तापमान जिस पर सब आण्विक गति बंद हो जाती है

Question 37. Nitrogen fixation is a process of

नाइट्रोजन यौगिकीकरण एक प्रक्रिया है जिसमें

Options:

1) Assimilation of nitrate

नाइट्रेट का स्वांगीकरण होता है

2) Utilisation of nitrogen gas

नाइट्रोजन गैस का उपयोग होता है

3) Conversion of organic nitrogen to proteins

ऑर्गेनिक नाइट्रोजन प्रोटीन में रूपांतरित होती है

4) Conversion of molecular nitrogen to ammonia

आण्विक नाइट्रोजन अमोनिया में रूपांतरित होती है

Correct Answer: Conversion of organic nitrogen to proteins

ऑर्गेनिक नाइट्रोजन प्रोटीन में रूपांतरित होती है

Candidate Answer: [NOT ANSWERED]

Question 38. Which among the following is called as 'Land of the midnight Sun'?

निम्नलिखित में से किसे 'लैंड ऑफ द मिडनाइट सन' कहा जाता है ?

Options:

1) Norway

नॉर्वे

2) Sweden

स्वीडन

3) Denmark

डेनमार्क

4) France

फ्रांस

Correct Answer: Norway

नॉर्वे

Candidate Answer: Norway

नॉर्वे

Question 39. Among the following which one lays eggs and does not produce young ones directly?

निम्नलिखित में से कौन-सा जीव अंडे देता है और प्रत्यक्षतः बच्चे पैदा नहीं करता ?

Options:

1) Echidna

एकिडना

2) Kangaroo

कंगारू

3) Porcupine

साही

4) Whale

व्हेल

Correct Answer: Echidna

एकिडना

Candidate Answer: Echidna

एकिडना

Question 40. The mountain range which divides the North and the South India is

उत्तर और दक्षिण भारत को कौन-सी पर्वत श्रृंखला पृथक करती है ?

Options:

1) Himalayas

हिमालय

2) Western ghats

पश्चिमी घाट

3) Vindhyas

विंध्या

4) Satpura

सतपुड़ा

Correct Answer: Vindhyas

विंध्या

Candidate Answer: Satpura

सतपुड़ा

Question 41. Bronze is an alloy of

काँसा किसकी मिश्र धातु है?

Options:

1) Copper & tin

तांबा और टिन

2) Copper & zinc

तांबा और जस्ता

3) Copper & iron

तांबा और लोहा

4) Iron & nickel

लोहा और निकल

Correct Answer: Copper & tin

तांबा और टिन

Candidate Answer: Copper & zinc

तांबा और जस्ता

Question 42. In which of the following States is Dampa Tiger Reserve situated?

निम्नलिखित में से किस राज्य में 'दम्पा टाइगर रिजर्व' स्थित है ?

Options:

1) Assam

असम

2) Karnataka

कर्नाटक

3) Mizoram

मिज़ोरम

4) Orissa

उड़ीसा

Correct Answer: Mizoram

मिज़ोरम

Candidate Answer: Assam

असम

Question 43. Japanese folk tradition and ritual, with no founder or single sacred scripture, is popularly known as _____

जापानी लोक परम्परा और अनुष्ठान, जिसका कोई संस्थापक या कोई एक पवित्र धर्म ग्रन्थ नहीं है, किस नाम से प्रचलित है ?

Options:

1) Taoism

टाओवाद

2) Zoroastrianism

ज़ोराष्ट्रवाद

3) Shintoism

शिन्टोवाद

4) Paganism

पेगनवाद

Correct Answer: Shintoism

शिन्टोवाद

Candidate Answer: Shintoism

शिन्टोवाद

Question 44. In IT the technique that is used to increase the bandwidth is

आई टी में 'बैंडविथ' बढ़ाने के लिए किस तकनीक का इस्तेमाल किया जाता है ?

Options:

1) Memory Management

मैमोरी मैनेजमेण्ट

2) Memory Interleaving

मैमोरी इन्टरलीविंग

3) Memory Intraleaving

मैमोरी इन्ट्रालीविंग

4) Memory Leaving

मैमोरी लीविंग

Correct Answer: Memory Interleaving

मैमोरी इन्टरलीविंग

Candidate Answer: Memory Intraleaving

मैमोरी इन्ट्रालीविंग

Question 45. A motion that seeks to reduce the amount of demand presented by government to ₹ 1/- is known as

सरकार द्वारा प्रस्तुत मांग की राशि कम करके ₹ 1 करने संबंधी प्रस्ताव को क्या कहते हैं?

Options:

1) Disapproval of policy Cut

पॉलिसी में असम्मति की कटौती

2) Token cut

टोकन कटौती

3) Economy cut

मितव्ययिता कटौती

4) Vote on account

लेखानुदान

Correct Answer: Disapproval of policy Cut

पॉलिसी में असम्मति की कटौती

Candidate Answer: [NOT ANSWERED]

Question 46. The State which produces largest number of orchids in India is

भारत के कौनसे राज्य में अधिकतम संख्या में ऑर्किड होते हैं ?

Options:

1) Assam

असम

2) Arunachal Pradesh

अरुणाचल प्रदेश

3) Meghalaya

मेघालय

4) Sikkim

सिक्किम

Correct Answer: Sikkim

सिक्किम

Candidate Answer: Sikkim

सिक्किम

Question 47. Which one of the following bio reserves of India is not included in the World Network of Biosphere Reserve?

भारत में निम्नलिखित में से कौनसा जैव-रिज़र्व, 'वर्ल्ड नेटवर्क आफ बायोस्फियर रिज़र्व' में शामिल नहीं है?

Options:

1) Sunderbans

सुन्दरबन

2) Gulf of Mannar

मन्नार की खाड़ी

3) Nandadevi

नन्दादेवी

4) Corbett

कार्बेट

Correct Answer: Corbett

कार्बेट

Candidate Answer: Gulf of Mannar

मन्नार की खाड़ी

Question 48. What was 'Kamagata Maru'?

"कोमागाता मारू" क्या था ?

Options:

1) An army unit

एक सैनिक यूनिट

2) A harbour

एक बन्दरगाह

3) A ship

एक पोत

4) An industrial township

एक औद्योगिक नगर

Correct Answer: A ship

एक पोत

Candidate Answer: A ship

एक पोत

Question 49. Redistribution of income in a country can be brought about through

किसी देश में आय का पुनर्वितरण किस प्रकार किया जा सकता है ?

Options:

1) Progressive taxation combined with progressive expenditure

उत्तरोत्तर कराधान और साथ में उत्तरोत्तर व्यय

2) Progressive taxation combined with regressive expenditure

उत्तरोत्तर कराधान और साथ में प्रत्यावर्ती व्यय

3) Regressive taxation combined with regressive expenditure

प्रत्यावर्ती कराधान और साथ में प्रत्यावर्ती व्यय

4) Regressive taxation combined with progressive expenditure

प्रत्यावर्ती कराधान और साथ में उत्तरोत्तर व्यय

Correct Answer: Progressive taxation combined with progressive expenditure

उत्तरोत्तर कराधान और साथ में उत्तरोत्तर व्यय

Candidate Answer: [NOT ANSWERED]

Question 50. A motion moved by Member of Parliament when he feels a minister has committed a breach of privilege of the House by withholding facts of a case is called

जब किसी संसद सदस्य को यह लगे कि किसी मंत्री ने मामले के तथ्यों को छुपा कर सदन का विशेषाधिकार भंग किया है, तो उसके द्वारा उठाया गया प्रस्ताव क्या कहलाता है ?

Options:

1) No confidence motion

अविश्वास प्रस्ताव

2) Censure motion

निंदा प्रस्ताव

3) Privilege motion

विशेषाधिकार प्रस्ताव

4) Cut motion

कटौती प्रस्ताव

Correct Answer: Privilege motion

विशेषाधिकार प्रस्ताव

Candidate Answer: Censure motion

निंदा प्रस्ताव

Question 51.If 7 spiders make 7 webs in 7 days , then 1 spider will make 1 web in how many days ?

यदि 7 मकड़ियां 7 दिन में 7 जाल बनाते हैं, तो 1 मकड़ी 1 जाल कितने दिन में बनायेगी ?

Options:

1) 1

2) 7/2

3) 7

4) 49

Correct Answer: 7

Candidate Answer: 7

Question 52. A fan is listed at Rs. 150 with a discount of 20%. What additional discount must be offered to the customer to bring the net price to Rs. 108?

एक पंखे का सूची मूल्य 20% की छूट के साथ Rs. 150 है। ग्राहक को कितनी अतिरिक्त छूट दी जाए कि शुद्ध मूल्य Rs. 108 हो जाए।

Options:

- 1) $11 \frac{1}{9}\%$
 - 2) 15%
 - 3) 8%
 - 4) None of these
- इनमें से कोई नहीं

Correct Answer: $11 \frac{1}{9}\%$

Candidate Answer: None of these
इनमें से कोई नहीं

Question 53. Three numbers are in the ratio 1 : 2 : 3 and the sum of their cubes is 4500. The smallest number is

तीन संख्याएँ 1 : 2 : 3 के अनुपात में हैं और उनके घनों का योग 4500 है। सबसे छोटी संख्या क्या है ?

Options:

- 1) 4
- 2) 5
- 3) 6
- 4) 10

Correct Answer: 5

Candidate Answer: 5

Question 54.If by selling an article for ₹ 390 a shopkeeper gains 20% , then the cost is

यदि कोई वस्तु ₹ 390 में बेचने पर दुकानदार को 20% का लाभ होता है, तो उसकी लागत क्या है ?

Options:

1) ₹ 370

2) ₹ 325

3) ₹ 350

4) ₹ 300

Correct Answer: ₹ 325

Candidate Answer: ₹ 325

Question 55.There is a 4% increase in volume when a liquid freezes to its solid state. The percentage decrease when solid melts to liquid again , is

जब कोई तरल अपनी ठोस अवस्था में जम जाता है तो उसके आयतन में 4% की वृद्धि हो जाती है। ठोस के वापस तरल में पिघलने पर आयतन में कितने प्रतिशत कमी होगी ?

Options:

1)

$$3\frac{3}{13}\%$$

2) 4%

3)

$$4\frac{1}{13}\%$$

4)

$$3\frac{11}{13}\%$$

Correct Answer:

$$3\frac{11}{13}\%$$

Candidate Answer:

$$3\frac{11}{13}\%$$

Question 56. A man travelled a distance of 61 km. in 9 hours, partly by walking at speed of 4 km / hr and partly on bicycle at speed of 9 km / hr. The distance covered by walking is

एक व्यक्ति ने आंशिक रूप से 4 कि.मी./घण्टा की रफ्तार पैदल चलकर और आंशिक रूप से 9 कि.मी./घण्टा साईकिल पर चलकर 9 घण्टे में 61 कि.मी. की यात्रा तय की। पैदल चलकर कितनी दूरी तय की गई ?

Options:

1) 16 Km

16 कि.मी.

2) 12 Km

12 कि.मी.

3) 15 Km

15 कि.मी.

4) 17 Km

17 कि.मी.

Correct Answer: 16 Km

16 कि.मी.

Candidate Answer: 16 Km

16 कि.मी.

Question 57. The rate of simple interest per annum at which a sum of money double itself in $16\frac{2}{3}$ yrs. is

साधारण ब्याज की वह वार्षिक दर क्या होगी जिससे कोई राशि $16\frac{2}{3}$ वर्ष में दुगुनी हो जाएगी ?

Options:

1) 4%

2) 5%

3) 6%

4)

$6\frac{2}{3}\%$

Correct Answer: 6%

Candidate Answer: 6%

Question 58. If $a + b + c = 0$, then the value of $a^3 + b^3 + c^3$ is

यदि $a + b + c = 0$, तो $a^3 + b^3 + c^3$ का मान ज्ञात कीजिए ?

Options:

1) abc

2) 2abc

3) 3abc

4) 0

Correct Answer: 3abc

Candidate Answer: 3abc

Question 59.

The value of $(x^{\frac{1}{3}} + x^{-\frac{1}{3}})(x^{\frac{2}{3}} - 1 + x^{-\frac{2}{3}})$ is

$(x^{\frac{1}{3}} + x^{-\frac{1}{3}})(x^{\frac{2}{3}} - 1 + x^{-\frac{2}{3}})$ का मान क्या है ?

Options:

1)

$$x^{-1} + x^{\frac{2}{3}}$$

2)

$$x + x^{-\frac{1}{3}}$$

3)

$$x^{\frac{1}{3}} + x^{-1}$$

4)

$$x + x^{-1}$$

Correct Answer:

$$x^{\frac{1}{3}} + x^{-1}$$

Candidate Answer: [NOT ANSWERED]

Question 60. In $\triangle ABC$, $DE \parallel AC$. Where D and E are two points lying on AB and BC respectively. If $AB = 5$ cm and $AD = 3$ cm, then $BE : EC$ is

$\triangle ABC$ में $DE \parallel AC$ है। इसमें D और E क्रमशः AB और BC स्थित दो बिन्दु हैं। यदि $AB = 5$ से.मी. और $AD = 3$ से.मी. तो $BE : EC$ क्या है ?

Options:

1) 2:3

2) 3:2

3) 5:3

4) 3:5

Correct Answer: 2:3

Candidate Answer: 2:3

Question 61. PT is a tangent to a circle with centre O and radius 6 cm. If PT is 8 cm then length of OP is

PT, एक वृत्त जिसका केन्द्र O और त्रिज्या 6 से.मी. है, की स्पर्श रेखा है। यदि PT 8 से.मी. हो, तो OP की लम्बाई कितनी होगी ?

Options:

1) 10 cm

10 से.मी.

2) 12 cm

12 से.मी.

3) 16 cm

16 से.मी.

4) 9 cm

9 से.मी.

Correct Answer: 10 cm

10 से.मी.

Candidate Answer: 10 cm

10 से.मी.

Question 62.

If $\tan\theta = \frac{4}{3}$, then the value of $\frac{3\sin\theta + 2\cos\theta}{3\sin\theta - 2\cos\theta}$ is

यदि $\tan\theta = \frac{4}{3}$, तो $\frac{3\sin\theta + 2\cos\theta}{3\sin\theta - 2\cos\theta}$ का मान कितना होगा?

Options:

1) $1/2$

2)

$1\frac{1}{2}$

3) 3

4) -3

Correct Answer: 3

Candidate Answer: 3

Question 63. In a school, 391 boys and 323 girls have been divided into the largest possible equal classes, so that each class of boys numbers the same as each class of girls. What is the number of classes?

एक विद्यालय में 391 लड़कों और 323 लड़कियों को यथासंभव सबसे बड़ी समान कक्षाओं में विभाजित किया गया है जिससे लड़कों की प्रत्येक कक्षा की संख्या लड़कियों की प्रत्येक कक्षा के बराबर हो गई। कक्षाओं की संख्या कितनी है ?

Options:

1) 23

2) 19

3) 44

4) 17

Correct Answer: 17

Candidate Answer: [NOT ANSWERED]

Question 64. The average temperature of Monday, Tuesday, Wednesday and Thursday is 60° , The average for Tuesday, Wednesday, Thursday and Friday is 63° ; If the ratio of temperature for Monday and Friday is 21 : 25, then what is the temperature of Friday?

सोमवार, मंगलवार, बुधवार और बृहस्पतिवार का औसत तापमान 60° है। मंगलवार, बुधवार, बृहस्पतिवार और शुक्रवार का औसत तापमान 63° है। यदि सोमवार और शुक्रवार के तापमान का अनुपात 21 : 25 है तो शुक्रवार का तापमान क्या है ?

Options:

1) 70°

2) 73°

3) 75°

4) 78°

Correct Answer: 75°

Candidate Answer: 75°

Question 65.

If, $\frac{1}{p} + \frac{1}{q} = \frac{1}{p+q}$, then the value of $p^3 - q^3$ is

यदि $\frac{1}{p} + \frac{1}{q} = \frac{1}{p+q}$, तो $p^3 - q^3$ का मान क्या है?

Options:

1) $p-q$

2) pq

3) 1

4) 0

Correct Answer: 0

Candidate Answer: 0

Question 66.If $x = 93$, $y = 93$, $z = 94$ then the value of $x^2 - y^2 + 10xz + 10yz$ is

यदि $x=93,y=93,z=94$ तो $x^2 - y^2 + 10xz + 10yz$ का मान क्या है ?

Options:

1) 104784

2) 147840

3) 174840

4) 184740

Correct Answer: 174840

Candidate Answer: 174840

Question 67.D , E , F are the mid - points of the sides BC , CA and AB respectively of a ΔABC . Then the ratio of the areas of ΔDEF and ΔABC is

D,E,F एक त्रिभुज ABC की भुजाओं BC, CA और AB के क्रमशः मध्य बिन्दु हैं, तो ΔDEF और ΔABC के क्षेत्रफलों का अनुपात क्या होगा ?

Options:

1) $1/2$

2) $1/4$

3) $1/8$

4) $1/16$

Correct Answer: $1/4$

Candidate Answer: 1/4

Question 68. A circle has its centre at O . A tangent drawn from a point P , which is situated outside the circle , touches the circle at A. If PA = 4 cm & PO=5 cm, then the length of the radius of the circle is

एक वृत्त का केन्द्र O है । वृत्त के बाहर स्थित बिन्दु P से एक स्पर्श रेखा खींची गई है जो वृत्त को A पर स्पर्श करती है। यदि PA = 4 से.मी. और PO = 5 से.मी. तो वृत्त की त्रिज्या की लंबाई कितनी है ?

Options:

1) 1 cm

1 से.मी.

2) 2 cm

2 से.मी.

3) 3 cm

3 से.मी.

4) 4 cm

4 से.मी.

Correct Answer: 3 cm

3 से.मी.

Candidate Answer: 3 cm

3 से.मी.

Question 69. If $\sec(4x - 50^\circ) = \operatorname{cosec}(50^\circ - x)$, Then the value of x is

यदि $\sec(4x - 50^\circ) = \operatorname{cosec}(50^\circ - x)$, तो x का मान क्या है ?

Options:

1) 45°

2) 90°

3) 30°

4) 60°

Correct Answer: 30°

Candidate Answer: 30°

Question 70. An inverted conical shaped vessel is filled with water to its brim. The height of the vessel is 8 cm and radius of the open end is 5 cm. When a few solid spherical metallic balls each of radius $\frac{1}{2}$ cm are dropped in the vessel, 25% water is overflowed. The number of balls is:

एक उल्टा शंक्वाकार बर्तन पानी से लबालब भरा हुआ है। बर्तन की ऊँचाई 8 से.मी. है और खुले सिरे की त्रिज्या 5 से.मी. है। यदि $\frac{1}{2}$ से.मी. त्रिज्या वाले कुछ ठोस गोले बर्तन में डाले जाते हैं तो 25% पानी बाहर निकल जाता है। गोलों की संख्या कितनी है ?

Options:

1) 100

2) 400

3) 200

4) 150

Correct Answer: 100

Candidate Answer: 100

Question 71. The shadow of a tower when the angle of elevation of the sun is 45° , is found to be 10 m longer than when it was 60° . The height of the tower is

एक टॉवर की छाया, जब सूर्य का उन्नतांश 45° 10 मी. लम्बी होती है उसी टॉवर की छाया से जब उन्नतांश 60° होता है। टॉवर की ऊँचाई कितनी है ?

Options:

1) $5(\sqrt{3} - 1)$ m

$5(\sqrt{3} - 1)$ मी.

2) $5(\sqrt{3} + 1)$ m

$5(\sqrt{3} + 1)$ मी.

3) $10(\sqrt{3} - 1)$ m

$10(\sqrt{3} - 1)$ मी.

4) $10(\sqrt{3} + 1)$ m

$10(\sqrt{3} + 1)$ मी.

Correct Answer: $5(\sqrt{3} + 1)$ m

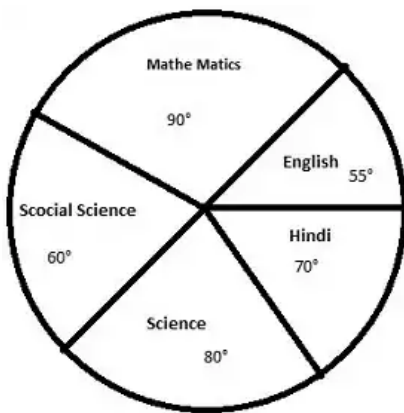
$5(\sqrt{3} + 1)$ मी.

Candidate Answer: $10(\sqrt{3} - 1)$ m

$10(\sqrt{3} - 1)$ मी.

Question 72. The following pie diagram gives the marks scored by a student in different subjects- English , Hindi , mathematics , science and social science in an examination . Assuming that the total marks obtained for the examination are 540 , answer the question

निम्नलिखित पाई चार्ट में एक छात्र द्वारा विभिन्न विषयों - अंग्रेजी, हिन्दी, गणित, विज्ञान और सामाजिक विज्ञान में प्राप्त अंकों को दर्शाया गया है। माना कि परीक्षा के कुल प्राप्तांक 540 हैं, यह मानते हुए नीचे दिये प्रश्नों का उत्तर دیجिये ।



The marks scored in English , Science and Social science exceed the marks scored in Hindi and Mathematics by

अंग्रेजी, विज्ञान और सामाजिक विज्ञान में प्राप्त अंक हिन्दी और गणित में प्राप्त अंकों से कितने अधिक हैं ?

Options:

1) 10%

2)

$10\frac{1}{9}\%$

3) 11%

4)

$11\frac{1}{9}\%$

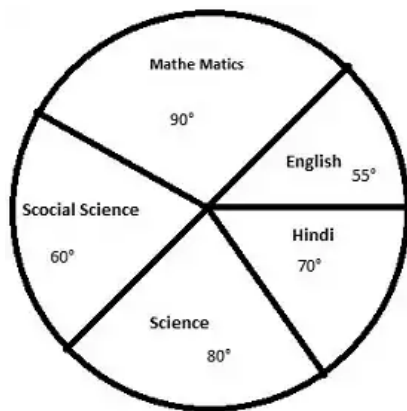
Correct Answer:

$11\frac{1}{9}\%$

Candidate Answer: [NOT ANSWERED]

Question 73. The following pie diagram gives the marks scored by a student in different subjects- English , Hindi , mathematics , science and social science in an examination . Assuming that the total marks obtained for the examination are 540 , answer the question

निम्नलिखित पाई चार्ट में एक छात्र द्वारा विभिन्न विषयों - अंग्रेजी, हिन्दी, गणित, विज्ञान और सामाजिक विज्ञान में प्राप्त अंकों को दर्शाया गया है। माना कि परीक्षा के कुल प्राप्तांक 540 हैं, यह मानते हुए नीचे दिये प्रश्नों का उत्तर دیجिये ।



The subject in which the student scored 105 marks is

छात्र ने किस विषय में 105 अंक प्राप्त किए ?

Options:

1) English

अंग्रेजी

2) Hindi

हिन्दी

3) Mathematics

गणित

4) Science

विज्ञान

Correct Answer: Hindi

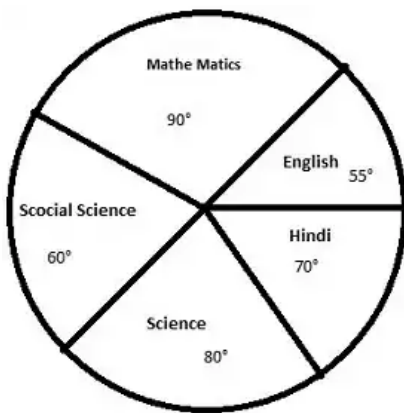
हिन्दी

Candidate Answer: Hindi

हिन्दी

Question 74. The following pie diagram gives the marks scored by a student in different subjects- English , Hindi , mathematics , science and social science in an examination . Assuming that the total marks obtained for the examination are 540 , answer the question

निम्नलिखित पाई चार्ट में एक छात्र द्वारा विभिन्न विषयों - अंग्रेजी, हिन्दी, गणित, विज्ञान और सामाजिक विज्ञान में प्राप्त अंकों को दर्शाया गया है। माना कि परीक्षा के कुल प्राप्तांक 540 हैं, यह मानते हुए नीचे दिये प्रश्नों का उत्तर دیجिये ।



The difference of marks between English and Science is the same as between

कौन से विषयों के अंको का अंतर अंग्रेजी और विज्ञान के अंकों के अंतर के समान है ?

Options:

1) Science and English

विज्ञान और अंग्रेजी

2) Hindi and Social science

हिन्दी और सामाजिक विज्ञान

3) English and Hindi

अंग्रेजी और हिन्दी

4) Mathematics and Social science

गणित और सामाजिक विज्ञान

Correct Answer: Mathematics and Social science

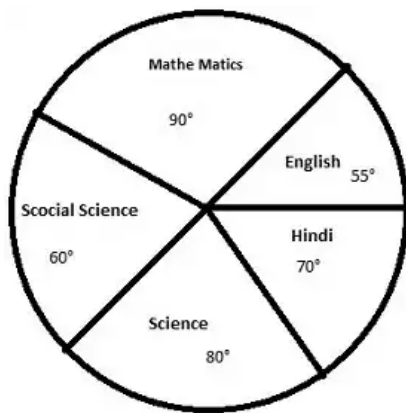
गणित और सामाजिक विज्ञान

Candidate Answer: Science and English

विज्ञान और अंग्रेजी

Question 75. The following pie diagram gives the marks scored by a student in different subjects- English , Hindi , mathematics , science and social science in an examination . Assuming that the total marks obtained for the examination are 540 , answer the question

निम्नलिखित पाई चार्ट में एक छात्र द्वारा विभिन्न विषयों - अंग्रेजी, हिन्दी, गणित, विज्ञान और सामाजिक विज्ञान में प्राप्त अंकों को दर्शाया गया है। माना कि परीक्षा के कुल प्राप्तांक 540 हैं, यह मानते हुए नीचे दिये प्रश्नों का उत्तर دیجिये ।



The marks scored in Hindi and Mathematics exceed the marks scored in English and Social science by

हिन्दी और गणित में प्राप्त अंक अंग्रेजी और सामाजिक विज्ञान में प्राप्त अंकों से कितने अधिक हैं ?

Options:

1) 30

2) 40

3) 60

4) 75

Correct Answer: 60

Candidate Answer: [NOT ANSWERED]

Question 76. In the following question, out of the four alternatives, choose the word which best expresses the meaning of the given word and click the button corresponding to it.

INNOCUOUS

Options:

- 1) INNOCENT
- 2) INNOVATIVE
- 3) INOFFENSIVE
- 4) INNERMOST

Correct Answer: INOFFENSIVE

Candidate Answer: [NOT ANSWERED]

Question 77. In the following question, out of the four alternatives, choose the word which is opposite in meaning to the given word and click the button corresponding to it.

INFIRM

Options:

- 1) STRONG
- 2) WEAK
- 3) SUPPORTER
- 4) BELIEVER

Correct Answer: STRONG

Candidate Answer: STRONG

Question 78. Four words are given, out of which only one word is spelt correctly. Choose the correctly spelt word and click the button corresponding to it.

Options:

- 1) Correspondent
- 2) Correspondant
- 3) Correspondent
- 4) Corespondent

Correct Answer: Correspondent

Candidate Answer: Correspondent

Question 79. In the following questions, one part of the sentence may have an error. Find out which part of the sentence has an error and click the button corresponding to it. If the sentence is free from error, click the "No error" option.

Computers give us (A) / the easier access (B) / to information. (C) / No Error (D)

Options:

- 1) A
- 2) B
- 3) C
- 4) D

Correct Answer: B

Candidate Answer: B

Question 80. In the following questions, one part of the sentence may have an error. Find out which part of the sentence has an error and click the button corresponding to it. If the sentence is free from error, click the "No error" option.

I don't have (A) / any money to (B) / spend for luxuries.
(C) / No Error (D)

Options:

- 1) A
- 2) B
- 3) C
- 4) D

Correct Answer: C

Candidate Answer: B

Question 81. In the following questions, one part of the sentence may have an error. Find out which part of the sentence has an error and click the button corresponding to it. If the sentence is free from error, click the "No error" option.

I was first (A) / to reach the school (B) / today (C) / No Error (D)

Options:

- 1) A
- 2) B
- 3) C
- 4) D

Correct Answer: A

Candidate Answer: A

Question 82. The sentences given with blanks are to be filled with an appropriate word(s). Four alternatives are suggested for each question. For each question, choose the correct alternative and click the button corresponding to it.

The President will finally have a national memorial _____ his honour.

Options:

- 1) at
- 2) upon
- 3) in
- 4) on

Correct Answer: in

Candidate Answer: in

Question 83. The sentences given with blanks are to be filled with an appropriate word(s). Four alternatives are suggested for each question. For each question, choose the correct alternative and click the button corresponding to it.

Cultural _____ is very important in international business.

Options:

- 1) sensibility
- 2) sensitivity
- 3) smartness
- 4) susceptibility

Correct Answer: sensitivity

Candidate Answer: sensibility

Question 84. The sentences given with blanks are to be filled with an appropriate word(s). Four alternatives are suggested for each question. For each question, choose the correct alternative and click the button corresponding to it.

We should first collect the funds and then _____ action.

Options:

- 1) plunge into
- 2) plunge onto
- 3) plunge at
- 4) plunge in

Correct Answer: plunge into

Candidate Answer: plunge into

Question 85. In each of the questions, four alternatives are given for the Idiom/Phrase. Choose the alternative which best expresses the meaning of the Idiom/Phrase and click the button corresponding to it.

Held up

Options:

- 1) Kidnapped
- 2) Delayed
- 3) Caught
- 4) Nabbed

Correct Answer: Delayed

Candidate Answer: Delayed

Question 86. In each of the questions, four alternatives are given for the Idiom/Phrase. Choose the alternative which best expresses the meaning of the Idiom/Phrase and click the button corresponding to it.

To play fast and loose

Options:

- 1) To be narrow minded
- 2) To play a good game
- 3) To act in an unreliable way
- 4) To defeat a person

Correct Answer: To act in an unreliable way

Candidate Answer: To act in an unreliable way

Question 87. In each of the questions, four alternatives are given for the Idiom/Phrase. Choose the alternative which best expresses the meaning of the Idiom/Phrase and click the button corresponding to it.

Feather one's own nest

Options:

- 1) Decorate
- 2) Work hard at home
- 3) build a home
- 4) make money in an improper way

Correct Answer: make money in an improper way

Candidate Answer: make money in an improper way

Question 88. Out of the four alternatives, choose the one which can be substituted for the given words/sentences and click the button corresponding to it.

The act of killing a king

Options:

- 1) Regicide
- 2) Regalcide
- 3) Genocide
- 4) Homicide

Correct Answer: Regicide

Candidate Answer: Regicide

Question 89. Out of the four alternatives, choose the one which can be substituted for the given words/sentences and click the button corresponding to it.

Emission of light or heat from a central point

Options:

- 1) Rays
- 2) Refraction
- 3) Reflection
- 4) Radiation

Correct Answer: Radiation

Candidate Answer: Radiation

Question 90. Out of the four alternatives, choose the one which can be substituted for the given words/sentences and click the button corresponding to it.

That which cannot be believed

Options:

- 1) Awesome
- 2) Incredible
- 3) Credible
- 4) Ineffective

Correct Answer: Incredible**Candidate Answer:** Incredible

Question 91. A sentence/a part of the sentence is underlined. Four alternatives are given to the underlined part which will improve the sentence. Choose the correct alternative and click the button corresponding to it. In case no improvement is needed, click the button corresponding to "No improvement".

I tried to cane her, but of no purpose.

Options:

- 1) for
- 2) with
- 3) to
- 4) No improvement

Correct Answer: to**Candidate Answer:** for

Question 92. A sentence/a part of the sentence is underlined. Four alternatives are given to the underlined part which will improve the sentence. Choose the correct alternative and click the button corresponding to it. In case no improvement is needed, click the button corresponding to "No improvement".

The soldier mentioned that they had to pay a consideration of fifty pounds with accordance in the contract we signed.

Options:

- 1) by accordance with
- 2) in accordance with
- 3) with accordance to
- 4) No improvement

Correct Answer: in accordance with

Candidate Answer: in accordance with

Question 93. A sentence/a part of the sentence is underlined. Four alternatives are given to the underlined part which will improve the sentence. Choose the correct alternative and click the button corresponding to it. In case no improvement is needed, click the button corresponding to "No improvement".

Pankaj couldn't have seen us or he will have waved.

Options:

- 1) may
- 2) would have
- 3) should have
- 4) No improvement

Correct Answer: would have

Candidate Answer: would have

Question 94. A sentence/a part of the sentence is underlined. Four alternatives are given to the underlined part which will improve the sentence. Choose the correct alternative and click the button corresponding to it. In case no improvement is needed, click the button corresponding to "No improvement".

Elephants live in groups in the jungle.

Options:

- 1) crowds
- 2) herds
- 3) hoards
- 4) No improvement

Correct Answer: herds

Candidate Answer: hoards

Question 95. A sentence/a part of the sentence is underlined. Four alternatives are given to the underlined part which will improve the sentence. Choose the correct alternative and click the button corresponding to it. In case no improvement is needed, click the button corresponding to "No improvement".

Taking the test, the teacher gave me a passing grade.

Options:

- 1) After I took the test
- 2) After taking the test
- 3) As I took the test
- 4) No improvement

Correct Answer: After I took the test

Candidate Answer: After I took the test

Question 96. A passage is given with 5 questions following it. Read the passage carefully and choose the best answer to each question out of the four alternatives and click the button corresponding to it.

Reporters and city officials gathered at a Chicago railroad station one afternoon in 1953. The person they were meeting was the 1952 Nobel Peace Prize winner. A few minutes after the train came to a stop, a giant of a man - six feet four inches - with bushy hair and a large moustache stepped out from the train. Cameras flashed. City officials approached him with hands outstretched. Various people began telling him how honoured they were to meet him.

The man politely thanked them and then, looking over their heads, asked if he could be excused for a moment. He quickly walked through the crowd until he reached the side of an elderly black woman who was struggling with two large suitcases. He picked up the bags with a smile, escorted the woman to a bus. After helping her aboard, he wished her a safe journey. As he returned to the greeting party he apologized, "Sorry to have kept you waiting." Not many whites would have done what he did.

The man was Dr. Albert Schweitzer, the famous missionary doctor who had spent his life helping the poor in Africa. In response to Dr. Schweitzer's action, one member of the reception committee said with great

admiration to the reporter standing next to him, "That's the first time I ever saw a sermon walking."

Dr. Albert Schweitzer was the winner of the _____ .

Options:

- 1) Nobel Prize in 1952 for Medicine
- 2) Nobel Prize in 1952 for Peace
- 3) Nobel Prize in 1952 for Chemistry
- 4) Nobel Prize in 1953 for Peace

Correct Answer: Nobel Prize in 1952 for Peace

Candidate Answer: Nobel Prize in 1952 for Peace

Question 97. A passage is given with 5 questions following it. Read the passage carefully and choose the best answer to each question out of the four alternatives and click the button corresponding to it.

Reporters and city officials gathered at a Chicago railroad station one afternoon in 1953. The person they were meeting was the 1952 Nobel Peace Prize winner. A few minutes after the train came to a stop, a giant of a man - six feet four inches - with bushy hair and a large moustache stepped out from the train. Cameras flashed. City officials approached him with hands outstretched. Various people began telling him how honoured they were to meet him.

The man politely thanked them and then, looking over their heads, asked if he could be excused for a moment. He quickly walked through the crowd until he reached the side of an elderly black woman who was struggling with two large suitcases. He picked up the bags with a smile,

escorted the woman to a bus. After helping her aboard, he wished her a safe journey. As he returned to the greeting party he apologized, "Sorry to have kept you waiting." Not many whites would have done what he did.

The man was Dr. Albert Schweitzer, the famous missionary doctor who had spent his life helping the poor in Africa. In response to Dr. Schweitzer's action, one member of the reception committee said with great admiration to the reporter standing next to him, "That's the first time I ever saw a sermon walking."

Dr. Albert delighted _____ .

Options:

- 1) in being helped by others
- 2) in not being honoured
- 3) in being honoured
- 4) in helping others

Correct Answer: in helping others

Candidate Answer: in helping others

Question 98. A passage is given with 5 questions following it. Read the passage carefully and choose the best answer to each question out of the four alternatives and click the button corresponding to it.

Reporters and city officials gathered at a Chicago railroad station one afternoon in 1953. The person they were meeting was the 1952 Nobel Peace Prize winner. A few minutes after the train came to a stop, a giant of a man - six feet four inches - with bushy hair and a large moustache stepped out from the train. Cameras flashed.

City officials approached him with hands outstretched. Various people began telling him how honoured they were to meet him.

The man politely thanked them and then, looking over their heads, asked if he could be excused for a moment. He quickly walked through the crowd until he reached the side of an elderly black woman who was struggling with two large suitcases. He picked up the bags with a smile, escorted the woman to a bus. After helping her aboard, he wished her a safe journey. As he returned to the greeting party he apologized, "Sorry to have kept you waiting." Not many whites would have done what he did.

The man was Dr. Albert Schweitzer, the famous missionary doctor who had spent his life helping the poor in Africa. In response to Dr. Schweitzer's action, one member of the reception committee said with great admiration to the reporter standing next to him, "That's the first time I ever saw a sermon walking."

Dr. Albert Schweitzer _____ .

Options:

- 1) was not prejudiced against Whites
- 2) was not prejudiced against Blacks
- 3) was prejudiced against Whites
- 4) was prejudiced against Blacks

Correct Answer: was not prejudiced against Blacks

Candidate Answer: was not prejudiced against Blacks

Question 99. A passage is given with 5 questions following it. Read the passage carefully and choose the

best answer to each question out of the four alternatives and click the button corresponding to it.

Reporters and city officials gathered at a Chicago railroad station one afternoon in 1953. The person they were meeting was the 1952 Nobel Peace Prize winner. A few minutes after the train came to a stop, a giant of a man - six feet four inches - with bushy hair and a large moustache stepped out from the train. Cameras flashed. City officials approached him with hands outstretched. Various people began telling him how honoured they were to meet him.

The man politely thanked them and then, looking over their heads, asked if he could be excused for a moment. He quickly walked through the crowd until he reached the side of an elderly black woman who was struggling with two large suitcases. He picked up the bags with a smile, escorted the woman to a bus. After helping her aboard, he wished her a safe journey. As he returned to the greeting party he apologized, "Sorry to have kept you waiting." Not many whites would have done what he did.

The man was Dr. Albert Schweitzer, the famous missionary doctor who had spent his life helping the poor in Africa. In response to Dr. Schweitzer's action, one member of the reception committee said with great admiration to the reporter standing next to him, "That's the first time I ever saw a sermon walking."

Dr. Albert was _____ person.

Options:

- 1) a generous and friendly
- 2) a proud
- 3) a timid
- 4) a kind and helpful

Correct Answer: a kind and helpful

Candidate Answer: a kind and helpful

Question 100. A passage is given with 5 questions following it. Read the passage carefully and choose the best answer to each question out of the four alternatives and click the button corresponding to it.

Reporters and city officials gathered at a Chicago railroad station one afternoon in 1953. The person they were meeting was the 1952 Nobel Peace Prize winner. A few minutes after the train came to a stop, a giant of a man - six feet four inches - with bushy hair and a large moustache stepped out from the train. Cameras flashed. City officials approached him with hands outstretched. Various people began telling him how honoured they were to meet him.

The man politely thanked them and then, looking over their heads, asked if he could be excused for a moment. He quickly walked through the crowd until he reached the side of an elderly black woman who was struggling with two large suitcases. He picked up the bags with a smile, escorted the woman to a bus. After helping her aboard, he wished her a safe journey. As he returned to the greeting party he apologized, "Sorry to have kept you waiting." Not many whites would have done what he did.

The man was Dr. Albert Schweitzer, the famous missionary doctor who had spent his life helping the poor in Africa. In response to Dr. Schweitzer's action, one member of the reception committee said with great admiration to the reporter standing next to him, "That's the first time I ever saw a sermon walking."

Dr. Albert preferred to let his actions _____ .

Options:

- 1) speak louder than his words
- 2) be admired
- 3) be advertised
- 4) be written about

Correct Answer: speak louder than his words

Candidate Answer: speak louder than his words

www.toprankers.com