

Class - Mathematics
Class - IX

Time: 3 hrs

Marks: 80

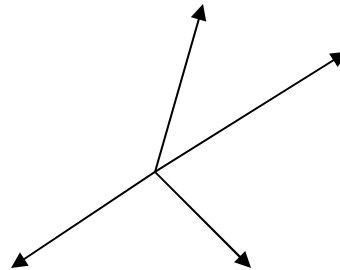
General Instructions:

-
- (i) All questions are compulsory.
 - (ii) The question paper consists of 30 questions divided into four sections – A, B, C and D. Section A contains 10 questions of 1 mark each, Section B is of 5 questions of 2 marks each, Section C is of 10 questions of 3 marks each and section D is of 5 questions of 6 marks each.
 - (iii) There is no overall choice. However, an internal choice has been provided in sections B,C and D
 - (iv) In question on construction, the drawing should be neat and exactly as per the given measurements.
 - (v) Use of calculator is not permitted.
-

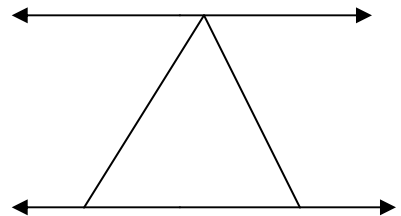
SECTION A

(Qns 1 – 10 carry 1 mark each)

1. Find four rational numbers between $\frac{3}{5}$ and $\frac{4}{5}$.
2. Find $P(1)$ and $P(2)$ if $P(x) = 3x+1$
3. In which quadrant or on which axis do each of the following points lie? . $(-2,4)$, $(-1, 0)$, $(1,2)$ and $(-3, -5)$
4. Find the value of k if $x = 2$, $y = 1$ is a solution of the equation $2x + 3y = k$.
5. Write any two postulates of Euclid
6. If $x + y = w + z$, then show that AOB is a line AD and BC equal perpendiculars to a line segment AB ,Show that CD bisects AB



7. Find x and y if $AB \parallel CD$, $\angle APQ = 50^\circ$ and $\angle PRD = 127^\circ$.



8. Evaluate 103×107 by using a suitable identity.
9. Simplify $2^{2/3} \cdot 2^{1/3}$.
10. Write two solutions of $2x + y = 7$.

SECTION – B

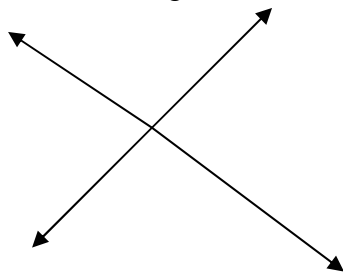
(Qns 11 – 16 carry 2 marks each)

11. Find remainder when $x^3 + 3x^2 + 3x + 1$ is divided by $(x-1)$ by using factor theorem.
12. Prove that angle opposite to equal sides of an isosceles triangle are equal.
13. Draw the graph of $x + y = 3$.
14. Expand $(x - 2y)^3$.
15. Expand $(2x + 1)^3$.
16. Rationalise $1/\sqrt{7}$.

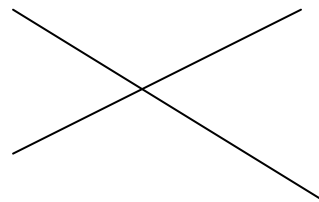
SECTION – C

(Qns 17 – 28 carry 3 marks each)

17. Find the value of k if $x - 1$ is a factor of $x^2 - 3x + k$
18. Simplify $1/(\sqrt{7} - \sqrt{2})$.
19. Factorise $9x^2 + 6xy + y^2$
20. Solve $2x + 1 = x - 3$ and represent the solutions on the Cartesian plane.
21. In figure, line PQ and RS intersect each other at O . If $\angle POR : \angle ROQ = 5:7$. Find all the angles.

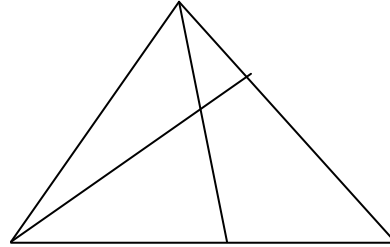


22. Prove that the sum of the angles of a triangle is 180° .
23. In figure $OA = OB$ and $OC = OD$ Show that $\triangle AOD \cong \triangle BOC$.



24. In $\triangle ABC$, the bisector AD of A is perpendicular to BC . Show that $AB = AC$.

25. In figure $QT \perp PR$, $\angle TQR = 40^\circ$ and $\angle SPR = 30^\circ$, find x and y .



26. Express the following equations in the form of $ax + by + c = 0$ (i) $x - y/5 = 10$

(ii) $y - 2 = 0$

27. Express $0.3333\dots$ in the form of p/q .

28. Evaluate $(999)^3$.

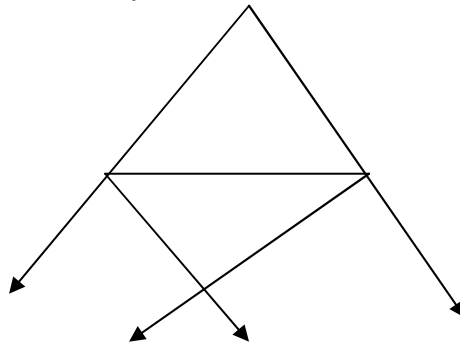
SECTION – C

(Qns 29 – 34 carry 6marks each)

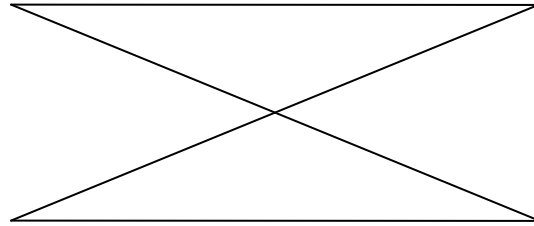
29. Factorise $49a^2 + 70ab + 25b^2$ (i) $25/4 x^2 - y^2 / 9$

30. If the point $(3,4)$ lies on the graph $3y = ax + 7$, find the value of a .

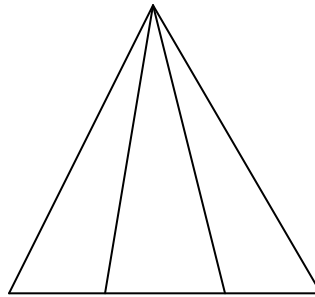
31. In figure the sides AB and AC of a triangle are produced to points E and D respectively. If bisectors BF and CG of $\angle CBE$ and $\angle BCD$ respectively meet at the point O , then prove that $\angle BOC = 90 - 1/2 \angle BAC$.



32. Line segment AB is parallel to another line segment CD , O is the mid-point of AD . Show that (i) $\triangle AOB \cong \triangle DOC$ (ii) O is also the mid-point of BC .



33. In an isosceles triangle ABC with $AB = AC$, D and E are points on BC such that $BE = CD$. Show that $AD = AE$.



34. Factorise (i) $8x^3 - 64y^3$ (ii) $125a^3 + 27b^3$.