



ITL PUBLIC SCHOOL SECTOR – 9, DWARKA

SESSION 2014 -2015
SUMMATIVE ASSESSMENT (I)
SET (A)

CLASS: III
TIME: 2 hrs
Student's Name: _____
No. of Pages: 4

DATE: 16th September 2014
SUBJECT: Social Studies
M.M: 60
Roll No. : _____
Invigilator's Signature: _____




General Instructions:

*Read the question paper carefully.
This paper contains 11 questions.
All the questions are mandatory.
Write the question number properly,*

1	<p>Multiple Choice Questions (choose the correct answer):-</p> <p>i) A _____ is a drawing of a place on a flat surface. a) Map b) Compass c) Globe d) Ocean</p> <p>ii) India became independent on _____. a) 15 April 1987 b) 26 January 1950 c) 15 August 1947 d) 2 October 1959</p> <p>iii) There are _____ continents in the world. a) 9 b) 7 c) 8 d) 5</p> <p>iv) Assam is a _____. a) Union Territory b) State c) District d) Village</p> <p>v) The height of the Mount Everest is _____. a) 9849m b) 8848m c) 9391m d) 8080m</p> <p>vi) Delhi is situated on the bank of river _____. a) Yamuna b) Ganga c) Satluj d) Brahmaputra</p> <p>vii) _____ is famous for many rock-cut caves. a) Elephanta Caves b) Allora Caves c) Ajanta Caves d) Pallava Caves</p>	10
----------	--	-----------

	<p>viii. Poultry farming is related to _____.</p> <p>a)Hens b) Fish c)Goats d)Cows</p> <p>ix. Official name of Delhi is _____.</p> <p>a)National Capital Territory of Delhi b)Old Delhi Capital c)Territory of Delhi d) National Delhi</p> <p>x.CST stands for_____.</p> <p>a)Chhatrapati Shivaji Terminus b) Central State Terminal c) Chhatrapati Studio of Talent d) Commando Service Training</p>	
2	<p>Fill in the blanks:-</p> <p>a) A _____ is the model of the Earth.</p> <p>b) The governor lives in _____.</p> <p>c) In _____ farming animals like cows, goat and buffaloes are reared for milk.</p> <p>d) The great plains of India is also called as _____.</p> <p>e) The Central Secretariat building has_____ blocks.</p> <p>f) The maps that can be hung on a wall are called_____.</p> <p>g) Mumbai lies on the _____ coast of India facing the Arabian Sea.</p> <p>h) The plains along the eastern and the western coast of India are thin strips of flat land. They meet in the south at a place called_____.</p> <p>i) _____Hills present the most beautiful view of Mumbai.</p> <p>j) _____ is the capital of Sikkim.</p> <p>k) The _____ has two houses Rajya Sabha and Lok Sabha.</p> <p>l) The work or job that helps us to earn money is called _____.</p>	6
3	<p>State who am I:-</p> <p>a) I am a plateau which occupies the largest part of India.</p> <p>b) I am a book of maps.</p> <p>c) I am an island that lies in the Arabian Sea.</p> <p>d) I am a colour which is used to show water bodies on the map of the world.</p> <p>e) I am the person who made the observatory at Jantar Mantar.</p> <p>f) I am a law making body of the central government.</p> <p>g) I am the main occupation of the people living in the coastal areas.</p> <p>h) I am used as a fuel to run car, buses etc.</p> <p>i) I am under the direct control of the central government and not included in any of the 29 states.</p> <p>j) I am a famous festival of Mumbai.</p> <p>k) We were the first one to build the city Delhi.</p> <p>l) I am a language which is spoken in Mumbai.</p>	6

4	<p>Unscramble the given words by using the hints:-</p> <p>a) LLIHS-_____ (Hint-Low mountain ranges)</p> <p>b) CRAITC-_____ (Hint-smallest ocean)</p> <p>c) JAR HGTA-_____ (Hint-Samadhi of Mahatma Gandhi)</p> <p>d) HSTOU LOKBC-_____ (Hint-Office of Prime Minister is here)</p> <p>e) UHUIJ-_____ (Hint-famous beach of Mumbai)</p> <p>f) INMNIG-_____ (Hint-digging up of minerals)</p>	3																								
5	<p>Explore your world and answer in one word:-</p> <p>a) The person who grows different crops like rice, wheat etc-_____</p> <p>b) The person who stitches your clothes-_____</p> <p>c) The person who teaches you-_____</p> <p>d) The person who treats you when you are sick-_____</p>	2																								
6	<p>Match the column:-</p> <table style="width: 100%; border: none;"> <tr> <td style="text-align: center; width: 50%;">A</td> <td style="text-align: center; width: 50%;">B</td> </tr> <tr> <td>a) Used to find the direction</td> <td>Thar Desert</td> </tr> <tr> <td>b) House of the President</td> <td>City of Dreams</td> </tr> <tr> <td>c) Foreign offices in Delhi</td> <td>Rashtrapati Bhawan</td> </tr> <tr> <td>d) Indian Desert</td> <td>Cobbler</td> </tr> <tr> <td>e) Mumbai</td> <td>Embassies</td> </tr> <tr> <td>f) A person who mends your shoes</td> <td>Compass</td> </tr> </table>	A	B	a) Used to find the direction	Thar Desert	b) House of the President	City of Dreams	c) Foreign offices in Delhi	Rashtrapati Bhawan	d) Indian Desert	Cobbler	e) Mumbai	Embassies	f) A person who mends your shoes	Compass	3										
A	B																									
a) Used to find the direction	Thar Desert																									
b) House of the President	City of Dreams																									
c) Foreign offices in Delhi	Rashtrapati Bhawan																									
d) Indian Desert	Cobbler																									
e) Mumbai	Embassies																									
f) A person who mends your shoes	Compass																									
7	<p>Complete the given table :-</p> <table border="1" style="width: 100%; border-collapse: collapse;"> <thead> <tr> <th style="width: 5%;"></th> <th style="width: 40%;">STATES</th> <th style="width: 55%;">CAPITALS</th> </tr> </thead> <tbody> <tr> <td>a)</td> <td>Gujarat</td> <td>_____</td> </tr> <tr> <td>b)</td> <td>_____</td> <td>Panaji</td> </tr> <tr> <td>c)</td> <td>West Bengal</td> <td>_____</td> </tr> <tr> <td>d)</td> <td>_____</td> <td>Jaipur</td> </tr> <tr> <td>e)</td> <td>Bihar</td> <td>_____</td> </tr> <tr> <td>f)</td> <td>Telangana</td> <td>_____</td> </tr> <tr> <td></td> <td></td> <td></td> </tr> </tbody> </table>		STATES	CAPITALS	a)	Gujarat	_____	b)	_____	Panaji	c)	West Bengal	_____	d)	_____	Jaipur	e)	Bihar	_____	f)	Telangana	_____				3
	STATES	CAPITALS																								
a)	Gujarat	_____																								
b)	_____	Panaji																								
c)	West Bengal	_____																								
d)	_____	Jaipur																								
e)	Bihar	_____																								
f)	Telangana	_____																								

<p>8</p>	<p>Answer in short:-</p> <ul style="list-style-type: none"> a) Name the person who planned and designed the city Delhi. b) Why is Bombay High famous? c) What happens at Red Fort on 15 August every year? d) Many people help us by doing different work. How can we show that we appreciate their help? e) Why was India divided into states? f) What is a plateau? 	<p>6</p>
<p>9.</p>	<p>Answer in detail:-</p> <ul style="list-style-type: none"> a) What are oceans? Name any 2 oceans. b) Write the difference between central government and state government.(1point each) c) Why Delhi is called ‘Mini India’? d) Explain the climate of Mumbai. e) Why do Governor and Chief Minister of Maharashtra live in Mumbai? f) Why is Deccan Plateau not fertile? g) Why is AmarJawan Jyoti lit at the India Gate? a) I am Shweta, I am planning my trip to Mumbai. Can you help me to know atleast 4 places which I should visit in Mumbai? 	<p>16</p>
<p>10</p>	<p>Time to show your creativity:-</p> <ul style="list-style-type: none"> a) Draw any one physical division of India and write one sentence on it. 	<p>2</p>
<p>11</p>	<p>Time to apply your knowledge by identifying the following pictures:-</p> <div style="display: flex; justify-content: space-around; align-items: flex-start;"> <div style="text-align: center;"> <p>a)</p>  </div> <div style="text-align: center;"> <p>b)</p>  </div> <div style="text-align: center;"> <p>c)</p>  </div> </div>	<p>3</p>

