

prepared By
SITC SAINUDHEEN P &
JSITC
GVHSS PAYYOLI

For www.shenischool.in

Register Number : 990140

Time Remaining - 0:59:50

[Finish Theory Exam](#)

Multiple Choices

Very Short Answer

0 out of 10 questions answered

- Question 1
- Question 2
- Question 3
- Question 4
- Question 5
- Question 6
- Question 7
- Question 8
- Question 9
- Question 10

Who founded Gnu Project in 1983?

[Click here to zoom Image](#)

- | | |
|---|--|
| <p>A <input type="checkbox"/> Richard Mathew Stallman</p> | <p>B <input type="checkbox"/> Dennis Ritchie</p> |
| <p>C <input type="checkbox"/> Ken Thomson</p> | <p>D <input type="checkbox"/> Linus Torvalds</p> |

Register Number : 990140

Time Remaining - 0:58:52

[Finish Theory Exam](#)

Multiple Choices

Very Short Answer

0 out of 10 questions answered

- [Question 1](#)
- [Question 2](#)
- [Question 3](#)
- [Question 4](#)
- [Question 5](#)
- [Question 6](#)
- [Question 7](#)
- [Question 8](#)
- [Question 9](#)
- [Question 10](#)

Identify the File System suitable for Microsoft Windows.

A Ext3

B NTFS

C HPFS

D HPFS+

Register Number : 990140

Time Remaining - 0:58:6

[Finish Theory Exam](#)

Multiple Choices

Very Short Answer

0 out of 10 questions answered

- [Question 1](#)
- [Question 2](#)
- [Question 3](#)
- [Question 4](#)
- [Question 5](#)
- [Question 6](#)
- [Question 7](#)
- [Question 8](#)
- [Question 9](#)
- [Question 10](#)

Choose an open source Html editor from below

A

B

C

D

Register Number : 990140

Time Remaining - 0:57:35

[Finish Theory Exam](#)

Multiple Choices

Very Short Answer

0 out of 10 questions answered

Question 1

Question 2

Question 3

Question 4

Question 5

Question 6

Question 7

Question 8

Question 9

Question 10

While designing a Web page including Cascading Styles using Element Selector, a tag should be used within `<style>` to give a background color . Identify the tag.

[Click here to zoom Image](#) A `body { background:yellow; }` B `body < background:yellow; >` C `body [background:yellow;]` D `body bgcolor="yellow"`

Register Number : 990140

Time Remaining - 0:57:3

[Finish Theory Exam](#)

Multiple Choices

Very Short Answer

0 out of 10 questions answered

- [Question 1](#)
- [Question 2](#)
- [Question 3](#)
- [Question 4](#)
- [Question 5](#)
- [Question 6](#)
- [Question 7](#)
- [Question 8](#)
- [Question 9](#)
- [Question 10](#)

Which one of the following is a Vector Image File?

[Click here to zoom Image](#)

A Circle.png

B Circle.jpg

C Circle.svg

D Circle.gif

Register Number : 990140

Time Remaining - 0:56:39

[Finish Theory Exam](#)

Multiple Choices

Very Short Answer

0 out of 10 questions answered

- Question 1
- Question 2
- Question 3
- Question 4
- Question 5
- Question 6**
- Question 7
- Question 8
- Question 9
- Question 10

Select the true statement related to the image files from the following

[Click here to zoom Image](#)

A Raster pictures retains its clarity even when zoomed in

B Raster images created in every software can also be exported as Vector images

C Vector files retains its clarity even when zoomed in .

D Vector files are saved in the computer based on the property of each pixel.

Register Number : 990140

Time Remaining - 0:56:6

[Finish Theory Exam](#)

Multiple Choices

Very Short Answer

0 out of 10 questions answered

- [Question 1](#)
- [Question 2](#)
- [Question 3](#)
- [Question 4](#)
- [Question 5](#)
- [Question 6](#)
- [Question 7](#)
- [Question 8](#)
- [Question 9](#)
- [Question 10](#)

Which is the easiest method to give the same format to all headings in a book or in a large document?

[Click here to zoom Image](#)

A Character Formatting

B Paragraph Formatting

C Styles and Formatting

D Page Formatting

Register Number : 990140

Time Remaining - 0:55:35

[Finish Theory Exam](#)

Multiple Choices

Very Short Answer

0 out of 10 questions answered

- Question 1
- Question 2
- Question 3
- Question 4
- Question 5
- Question 6
- Question 7
- Question 8**
- Question 9
- Question 10

What will be the name of the window, opened on clicking More Styles from the Apply Style Box in Libre Office

A Paragraph Formatting

C Character Formatting

B Styles and Formatting

D Page Formatting

Register Number : 990140

Time Remaining - 0:54:49

[Finish Theory Exam](#)

Multiple Choices

Very Short Answer

0 out of 10 questions answered

- Question 1
- Question 2
- Question 3
- Question 4
- Question 5
- Question 6
- Question 7
- Question 8
- Question 9
- Question 10

This is the picture of Transform Tool in Synfig Studio. What is its use?



A To make an object in square shape.

B To make an object in circle shape.

C To select an object and to control its handles.

D To blend two or more colors.

Register Number : 990141

Time Remaining - 0:59:52

[Finish Theory Exam](#)

Multiple Choices

Very Short Answer

0 out of 10 questions answered

- Question 1
- Question 2
- Question 3
- Question 4
- Question 5
- Question 6
- Question 7
- Question 8
- Question 9
- Question 10

Which of the following device is connected to modem with the connector RJ 11?

A Modem

B Switch

C Computer

D Telephone

Register Number : 990141

Time Remaining - 0:59:27

[Finish Theory Exam](#)

Multiple Choices

Very Short Answer

0 out of 10 questions answered

- [Question 1](#)
- [Question 2](#)
- [Question 3](#)
- [Question 4](#)
- [Question 5](#)
- [Question 6](#)
- [Question 7](#)
- [Question 8](#)
- [Question 9](#)
- [Question 10](#)

Identify the form of data send to Modem from Telephone Network.

A Digital

B Analogue

C Decimal

D Hexadecimal

Register Number : 990141

Time Remaining - 0:58:52

[Finish Theory Exam](#)

Multiple Choices

Very Short Answer

0 out of 10 questions answered

- Question 1
- Question 2
- Question 3
- Question 4
- Question 5
- Question 6
- Question 7
- Question 8
- Question 9
- Question 10

which of the following technique can be used for avoiding the repetitive use of html tags and attributes in a web page?

[Click here to zoom Image](#)

A Inkscape

B GeoGebra

C GIMP

D CSS

Register Number : 990141

Time Remaining - 0:58:11

[Finish Theory Exam](#)

Multiple Choices

Very Short Answer

0 out of 10 questions answered

Question 1

Question 2

Question 3

Question 4

Question 5

Question 6

Question 7

Question 8

Question 9

Question 10

Which of the following instruction is to be included in the CSS file for applying same color to all headings of h2 section of a web page using External Cascading Style ?

[Click here to zoom Image](#) A h2 – color = " #D6B0B0 " B h2 – colour = #D6B0B0 C h2 { color : #D6B0B0 ; } D h2 < colour = #D6B0B0 >

Register Number : 990141

Time Remaining - 0:57:51

[Finish Theory Exam](#)

Multiple Choices

Very Short Answer

0 out of 10 questions answered

- [Question 1](#)
- [Question 2](#)
- [Question 3](#)
- [Question 4](#)
- [Question 5](#)
- [Question 6](#)
- [Question 7](#)
- [Question 8](#)
- [Question 9](#)
- [Question 10](#)

Identify the tool in the Clock/Map window of the software Suncllock to display or hide longitudinal lines.

[Click here to zoom Image](#)

A Toggle Meridian (M)

B Solar time mode (S)

C Toggle Night (N)

D Toggle Sun/Moon (Y)

Register Number : 990141

Time Remaining - 0:57:18

Finish Theory Exam

Multiple Choices

Very Short Answer

0 out of 10 questions answered

- Question 1
- Question 2
- Question 3
- Question 4
- Question 5
- Question 6
- Question 7
- Question 8
- Question 9
- Question 10

Identify the steps to display the details about the features included in a Layer in QGIS Map.

A Right click on the Layer →
Open Attribute Table

B Right click on the Layer →
Toggle Editing

C Right click on the Layer →
Filter

D Right click on the Layer →
Properties

Register Number : 990141

Time Remaining - 0:56:48

[Finish Theory Exam](#)

Multiple Choices

Very Short Answer

0 out of 10 questions answered

- [Question 1](#)
- [Question 2](#)
- [Question 3](#)
- [Question 4](#)
- [Question 5](#)
- [Question 6](#)
- [Question 7](#)
- [Question 8](#)
- [Question 9](#)
- [Question 10](#)

Which one of the tool will help to apply the format of a given heading to other headings in a document prepared in Libre Office Writer?

[Click here to zoom Image](#)

- A Page Fomattng
- B Clear Direct Formatting Tool
- C Clone Formatting Tool
- D Standard Tool

Register Number : 990141

Time Remaining - 0:56:23

[Finish Theory Exam](#)

Multiple Choices

Very Short Answer

0 out of 10 questions answered

- Question 1
- Question 2
- Question 3
- Question 4
- Question 5
- Question 6
- Question 7
- Question 8**
- Question 9
- Question 10

Name the technique that helps to include the addresses from a SpreadSheet file **address.ods** to a letter file **letter.odt** prepared in Word Processor

A Export

B Mail Merge

C Wrap

D Import

Register Number : 990141

Time Remaining - 0:55:40

[Finish Theory Exam](#)

Multiple Choices

Very Short Answer

0 out of 10 questions answered

- [Question 1](#)
- [Question 2](#)
- [Question 3](#)
- [Question 4](#)
- [Question 5](#)
- [Question 6](#)
- [Question 7](#)
- [Question 8](#)
- [Question 9](#)
- [Question 10](#)

Which of the following is the very first instruction of a Python Graphics program?

[Click here to zoom Image](#)

A for i in range (4):

B begin_fill()

C from turtle import*

D right()

Register Number : 990141

Time Remaining - 0:55:9

[Finish Theory Exam](#)

Multiple Choices

Very Short Answer

0 out of 10 questions answered

Question 1

Question 2

Question 3

Question 4

Question 5

Question 6

Question 7

Question 8

Question 9

Question 10

Identify the instruction to be given in the Python Graphics program to mark a blue dot in the Graphics window.

[Click here to zoom Image](#)A dot(20,"blue")B dot("blue",20)C point(20,"blue")D point("blue",20)

Register Number : 990142

Time Remaining - 0:59:56

[Finish Theory Exam](#)

Multiple Choices

Very Short Answer

0 out of 10 questions answered

- Question 1
- Question 2
- Question 3
- Question 4
- Question 5
- Question 6
- Question 7
- Question 8
- Question 9
- Question 10

Which of the following is a Geographical Information System software?

A Quantum GIS

B Python

C GeoGebra

D GIMP

Register Number : 990142

Time Remaining - 0:59:34

[Finish Theory Exam](#)

Multiple Choices

Very Short Answer

0 out of 10 questions answered

Question 1

Question 2

Question 3

Question 4

Question 5

Question 6

Question 7

Question 8

Question 9

Question 10

Observe and analyse the given image of the Clock/Map window of Sunclock software and identify the true statement from the following.



A As per the image, duration of night time is shorter in Southern hemisphere.

B As per the image, duration of night time is shorter in Northern hemisphere.

C As per the image, duration of day and night time are equal in Southern and Northern hemispheres.

D As per the image, duration of day time is shorter in Southern hemisphere.

Register Number : 990142

Time Remaining - 0:59:5

[Finish Theory Exam](#)

Multiple Choices

Very Short Answer

0 out of 10 questions answered

- Question 1
- Question 2
- Question 3
- Question 4
- Question 5
- Question 6
- Question 7
- Question 8
- Question 9
- Question 10

Which of the following instructions is to be used in a Python Graphics program to give different colours to geometrical figures?

[Click here to zoom Image](#)

A pen-color()

C colour()

B pencolour()

D color()

Register Number : 990142

Time Remaining - 0:58:46

[Finish Theory Exam](#)

Multiple Choices

Very Short Answer

0 out of 10 questions answered

- [Question 1](#)
- [Question 2](#)
- [Question 3](#)
- [Question 4](#)
- [Question 5](#)
- [Question 6](#)
- [Question 7](#)
- [Question 8](#)
- [Question 9](#)
- [Question 10](#)

Identify the command used to make the Python instructions execute repeatedly in a program.

[Click here to zoom Image](#)

A for

C forward

B turtle

D right

Register Number : 990142

Time Remaining - 0:58:19

[Finish Theory Exam](#)

Multiple Choices

Very Short Answer

0 out of 10 questions answered

- [Question 1](#)
- [Question 2](#)
- [Question 3](#)
- [Question 4](#)
- [Question 5](#)
- [Question 6](#)
- [Question 7](#)
- [Question 8](#)
- [Question 9](#)
- [Question 10](#)

The various files prepared by Diya are given below. Choose the correct format of the file that is prepared in Word Processor.

[Click here to zoom Image](#)

- | | |
|---|---|
| <p>A <input type="checkbox"/> Certificate.ods</p> | <p>B <input type="checkbox"/> Certificate.odt</p> |
| <p>C <input type="checkbox"/> Certificate.odp</p> | <p>D <input type="checkbox"/> Certificate.odg</p> |

Register Number : 990142

Time Remaining - 0:57:47

[Finish Theory Exam](#)

Multiple Choices

Very Short Answer

0 out of 10 questions answered

- [Question 1](#)
- [Question 2](#)
- [Question 3](#)
- [Question 4](#)
- [Question 5](#)
- [Question 6](#)
- [Question 7](#)
- [Question 8](#)
- [Question 9](#)
- [Question 10](#)

When we apply style Heading 1 from the Apply style box in Word processor ,which one of the following things will be identified by the software?

[Click here to zoom Image](#)

A Identifies the selected words as header of each page

C Identifies the selected words as headings

B Selects the headings

D Identifies the selected words as paragraphs.

Register Number : 990142

Time Remaining - 0:57:21

[Finish Theory Exam](#)

Multiple Choices

Very Short Answer

0 out of 10 questions answered

- [Question 1](#)
- [Question 2](#)
- [Question 3](#)
- [Question 4](#)
- [Question 5](#)
- [Question 6](#)
- [Question 7](#)**
- [Question 8](#)
- [Question 9](#)
- [Question 10](#)

Which of the following technique can be used for avoiding the repetitive use of html tags and attributes in designing a web page?

[Click here to zoom image](#)

- | | |
|--|---|
| <p><input type="checkbox"/> A</p> <p>Cascading Style Sheets</p> | <p><input type="checkbox"/> B</p> <p>Web Content Management System</p> |
| <p><input type="checkbox"/> C</p> <p>HTML Editors</p> | <p><input type="checkbox"/> D</p> <p>Text Editors</p> |

Register Number : 990142

Time Remaining - 0:56:48

[Finish Theory Exam](#)

Multiple Choices

Very Short Answer

0 out of 10 questions answered

- Question 1
- Question 2
- Question 3
- Question 4
- Question 5
- Question 6
- Question 7
- Question 8**
- Question 9
- Question 10

Name the tag necessary to include Internal Cascading Style to a Web Page

[Click here to zoom Image](#)

A `<p>...</p>`

B `<style>...</style>`

C `<body>...</body>`

D `...`

Register Number : 990142

Time Remaining - 0:56:14

[Finish Theory Exam](#)

Multiple Choices

Very Short Answer

0 out of 10 questions answered

- Question 1
- Question 2
- Question 3
- Question 4
- Question 5
- Question 6
- Question 7
- Question 8
- Question 9
- Question 10


Name the connector used to connect UTP cables to computer.

A Serial Connector

B RJ 45

C RJ 11

D Parallel Connector

 Theory Section

Register Number : 990142

Time Remaining - 0:55:51

[Finish Theory Exam](#)

Multiple Choices

Very Short Answer

0 out of 10 questions answered

- Question 1
- Question 2
- Question 3
- Question 4
- Question 5
- Question 6
- Question 7
- Question 8
- Question 9
- Question 10

Identify the form of data send to Telephone Network from Modem.

- | | |
|---|---|
| <p>A <input type="checkbox"/> Digital</p> | <p>B <input type="checkbox"/> Analogue</p> |
| <p>C <input type="checkbox"/> Decimal</p> | <p>D <input type="checkbox"/> Hexadecimal</p> |

Register Number : 990143

Time Remaining - 0:59:59

[Finish Theory Exam](#)

Multiple Choices

Very Short Answer

0 out of 10 questions answered

- Question 1
- Question 2
- Question 3
- Question 4
- Question 5
- Question 6
- Question 7
- Question 8
- Question 9
- Question 10

Which of the following is the **form of data** processed and saved in computer?

[Click here to zoom image](#)

A Digital

B Analogue

C Decimal

D None of the above

Register Number : 990143

Time Remaining - 0:59:30

[Finish Theory Exam](#)

Multiple Choices

Very Short Answer

0 out of 10 questions answered

- Question 1
- Question 2
- Question 3
- Question 4
- Question 5
- Question 6
- Question 7
- Question 8
- Question 9
- Question 10

Identify the type of Computer Network of Railway,Army, Banks etc. which are spread through out the country.

[Click here to zoom Image](#)

A LAN

C PAN

B WAN

D MAN

Register Number : 990143

Time Remaining - 0:58:40

[Finish Theory Exam](#)

Multiple Choices

Very Short Answer

0 out of 10 questions answered

Question 1

Question 2

Question 3

Question 4

Question 5

Question 6

Question 7

Question 8

Question 9

Question 10

Anu has set the Progress Value in the Clock & Map window of the software Suncllock as 1 hour and pressed the button A. Identify the change of time that happened in the Suncllock window.

[Click here to zoom image](#)A Time moves 1 hour back.B Time moves 1 hour forward.C Time moves 1 minute back.D Time moves 1 minute forward.

Register Number : 990143

Time Remaining - 0:58:16

[Finish Theory Exam](#)

Multiple Choices

Very Short Answer

0 out of 10 questions answered

- [Question 1](#)
- [Question 2](#)
- [Question 3](#)
- [Question 4](#)
- [Question 5](#)
- [Question 6](#)
- [Question 7](#)
- [Question 8](#)
- [Question 9](#)
- [Question 10](#)

Which of the following is a Geographical Information System software?

[Click here to zoom Image](#)

A Quantum GIS

C GeoGebra

B Python

D GIMP

Register Number : 990143

Time Remaining - 0:57:50

[Finish Theory Exam](#)

Multiple Choices

Very Short Answer

0 out of 10 questions answered

- [Question 1](#)
- [Question 2](#)
- [Question 3](#)
- [Question 4](#)
- [Question 5](#)
- [Question 6](#)
- [Question 7](#)
- [Question 8](#)
- [Question 9](#)
- [Question 10](#)

Lincy created a database using LibreOffice Base including all the books in her school Library. Which technique can be used to know the availability of certain books of a writer?

[Click here to zoom Image](#)

A Tables

B Forms

C Queries

D Print

Register Number : 990143

Time Remaining - 0:57:27

[Finish Theory Exam](#)

Multiple Choices

Very Short Answer

0 out of 10 questions answered

- Question 1
- Question 2
- Question 3
- Question 4
- Question 5
- Question 6**
- Question 7
- Question 8
- Question 9
- Question 10

Decimal[DECIMAL] is a field type in a database created in LibreOffice Base. Which data can be included in this field?

[Click here to zoom Image](#)

A Image

B Date

C Currency

D Text

Register Number : 990143

Time Remaining - 0:57:9

[Finish Theory Exam](#)

Multiple Choices

Very Short Answer

0 out of 10 questions answered

- Question 1
- Question 2
- Question 3
- Question 4
- Question 5
- Question 6
- Question 7**
- Question 8
- Question 9
- Question 10

Which of the following languages uses to create a web page ?

- | | |
|--|---|
| <p>A <input type="checkbox"/> Python</p> | <p>B <input type="checkbox"/> LaTeX</p> |
| <p>C <input type="checkbox"/> HTML</p> | <p>D <input type="checkbox"/> CPP</p> |

Register Number : 990143

Time Remaining - 0:56:48

[Finish Theory Exam](#)

Multiple Choices

Very Short Answer

0 out of 10 questions answered

- [Question 1](#)
- [Question 2](#)
- [Question 3](#)
- [Question 4](#)
- [Question 5](#)
- [Question 6](#)
- [Question 7](#)
- [Question 8](#)
- [Question 9](#)
- [Question 10](#)

Which website helps us to share our videos?

[Click here to zoom image](#)

A Vimeo

C Wordpress

B Wiktionary

D Google

Register Number : 990143

Time Remaining - 0:56:21

[Finish Theory Exam](#)

Multiple Choices

Very Short Answer

0 out of 10 questions answered

- [Question 1](#)
- [Question 2](#)
- [Question 3](#)
- [Question 4](#)
- [Question 5](#)
- [Question 6](#)
- [Question 7](#)
- [Question 8](#)
- [Question 9](#)
- [Question 10](#)

What is the name of each image that prepared in Synfig Studio from the given options?

[Click here to zoom Image](#)

- | | |
|--|---|
| <p>A <input type="checkbox"/></p> <p>Objects</p> | <p>B <input type="checkbox"/></p> <p>Animations</p> |
| <p>C <input type="checkbox"/></p> <p>Scenes</p> | <p>D <input type="checkbox"/></p> <p>Parameters</p> |

Register Number : 990143

Time Remaining - 0:55:21

[Finish Theory Exam](#)

Multiple Choices

Very Short Answer

0 out of 10 questions answered

- Question 1
- Question 2
- Question 3
- Question 4
- Question 5
- Question 6
- Question 7
- Question 8
- Question 9
- Question 10

What do we name the first frame and the last frame when an animation is completing through Tweening technique in Synfig Studio?

A Motion Tween

C Parameters

B Key Frames

D Interpolation

Register Number : 990144

Time Remaining - 0:59:16

[Finish Theory Exam](#)

Multiple Choices

Very Short Answer

0 out of 10 questions answered

- Question 1
- Question 2
- Question 3
- Question 4
- Question 5
- Question 6
- Question 7
- Question 8
- Question 9
- Question 10

Lincy created a database using LibreOffice Base including all the books in her school Library. Which technique can be used to know the availability of certain books of a writer?

[Click here to zoom Image](#)

A Tables

B Forms

C Queries

D Print

Register Number : 990144

Time Remaining - 0:58:21

[Finish Theory Exam](#)

Multiple Choices

Very Short Answer

0 out of 10 questions answered

- Question 1
- Question 2
- Question 3
- Question 4
- Question 5
- Question 6
- Question 7
- Question 8
- Question 9
- Question 10

Which of the following is correct about Form in Database?

[Click here to zoom Image](#)

A A technique to add data to database.

B A technique to get data from database.

C A technique to print data from database.

D A technique to avoid data from database.

Register Number : 990144

Time Remaining - 0:57:51

[Finish Theory Exam](#)

Multiple Choices

Very Short Answer

0 out of 10 questions answered

- [Question 1](#)
- [Question 2](#)
- [Question 3](#)
- [Question 4](#)
- [Question 5](#)
- [Question 6](#)
- [Question 7](#)
- [Question 8](#)
- [Question 9](#)
- [Question 10](#)

Choose the format of a Picture file from the following

[Click here to zoom Image](#)

A dv

B mpeg

C png

D flv

Register Number : 990144

Time Remaining - 0:57:20

[Finish Theory Exam](#)

Multiple Choices

Very Short Answer

0 out of 10 questions answered

- [Question 1](#)
- [Question 2](#)
- [Question 3](#)
- [Question 4](#)
- [Question 5](#)
- [Question 6](#)
- [Question 7](#)
- [Question 8](#)
- [Question 9](#)
- [Question 10](#)

The imported image in Inkscape appears above the picture drawn.
A facility in the object menu will help to move it behind. Choose the facility from the given options

[Click here to zoom Image](#)

A Raise

C Up

B Lower

D Down

Register Number : 990144

Time Remaining - 0:56:58

[Finish Theory Exam](#)

Multiple Choices

Very Short Answer

0 out of 10 questions answered

- [Question 1](#)
- [Question 2](#)
- [Question 3](#)
- [Question 4](#)
- [Question 5](#)
- [Question 6](#)
- [Question 7](#)
- [Question 8](#)
- [Question 9](#)
- [Question 10](#)

Who founded Gnu Project in 1983?

[Click here to zoom Image](#)

A Richard Mathew Stallman

B Dennis Ritchie

C Ken Thomson

D Linus Torvalds

 Theory Section

Register Number : 990144

Time Remaining - 0:56:34

[Finish Theory Exam](#)

Multiple Choices

Very Short Answer

0 out of 10 questions answered

- [Question 1](#)
- [Question 2](#)
- [Question 3](#)
- [Question 4](#)
- [Question 5](#)
- [Question 6](#)**
- [Question 7](#)
- [Question 8](#)
- [Question 9](#)
- [Question 10](#)

Who are the first developers of the Operating System Unix?

[Click here to zoom Image](#)

A Bell Laboratories in the United States of America.

B California University in America.

C The Computer Workshop of Apple Corporation.

D The Computer Workshop of GNU Project.

Register Number : 990144

Time Remaining - 0:56:8


[Finish Theory Exam](#)

Multiple Choices

Very Short Answer

0 out of 10 questions answered

- Question 1
- Question 2
- Question 3
- Question 4
- Question 5
- Question 6
- Question 7**
- Question 8
- Question 9
- Question 10

Identify the tool in Synfig Studio from the given image. 

A Transform Tool

B SmoothMove Tool

C Fill Tool

D Gradient Tool

Register Number : 990144

Time Remaining - 0:55:46

[Finish Theory Exam](#)

Multiple Choices

Very Short Answer

0 out of 10 questions answered

- [Question 1](#)
- [Question 2](#)
- [Question 3](#)
- [Question 4](#)
- [Question 5](#)
- [Question 6](#)
- [Question 7](#)
- [Question 8](#)
- [Question 9](#)
- [Question 10](#)

Yami drew a square using Rectangle Tool in Synfig Studio to make an animation. Which is the tool suitable to color the square?

A Transform Tool

C Fill Tool

B SmoothMove Tool

D Circle Tool

[Click here to zoom Image](#)

Register Number : 990144

Time Remaining - 0:55:22

[Finish Theory Exam](#)

Multiple Choices

Very Short Answer

0 out of 10 questions answered

- Question 1
- Question 2
- Question 3
- Question 4
- Question 5
- Question 6
- Question 7
- Question 8
- Question 9
- Question 10

Which is the method used to move from the Table of Contents to the related pages of a Word Processor document?

A Press the Ctrl key and click on the heading

B Press the Alt key and click on the heading

C Press the Shift key and click on the heading

D Press the Enter key

Register Number : 990144

Time Remaining - 0:54:36

[Finish Theory Exam](#)

Multiple Choices

Very Short Answer

0 out of 10 questions answered

Question 1

Question 2

Question 3

Question 4

Question 5

Question 6

Question 7

Question 8

Question 9

Question 10

Arun decided to create a new style to the heading of a document prepared by him in Word Processor by selecting two set of formats from given below. Which one of the format is true about the heading

- 1 . Font Size: 17 Font family: Rachana Font color:Red
2. Distance from the margin :12, Text Alignment :Left

A Both the instructions can help him to format the heading

B Only the first instruction is suitable for the heading where as the second one is not suitable

C The first instruction can not be used. Where as the second instruction will be suitable for the heading

D Both of the instructions are not suitable to format the heading

Register Number : 990145

Time Remaining - 0:59:33

[Finish Theory Exam](#)

Multiple Choices

Very Short Answer

0 out of 10 questions answered

- Question 1
- Question 2
- Question 3
- Question 4
- Question 5
- Question 6
- Question 7
- Question 8
- Question 9
- Question 10

Identify the device used to convert Digital signals to Analogue signals and vice versa.

[Click here to zoom Image](#)

A Modem

B RJ 45

C RJ 11

D Hub

Register Number : 990145

Time Remaining - 0:59:9

[Finish Theory Exam](#)

Multiple Choices

Very Short Answer

0 out of 10 questions answered

- Question 1
- Question 2
- Question 3
- Question 4
- Question 5
- Question 6
- Question 7
- Question 8
- Question 9
- Question 10

Identify the form of data send to Telephone Network from Modem
[Click here to zoom Image](#)

A Digital

B Analogue

C Decimal

D Hexadecimal

Register Number : 990145

Time Remaining - 0:58:44

[Finish Theory Exam](#)

Multiple Choices

Very Short Answer

0 out of 10 questions answered

- [Question 1](#)
- [Question 2](#)
- [Question 3](#)
- [Question 4](#)
- [Question 5](#)
- [Question 6](#)
- [Question 7](#)
- [Question 8](#)
- [Question 9](#)
- [Question 10](#)

Which of the following technique can be used to arrange one of the two objects drawn in Inkscape below the other ?

[Click here to zoom Image](#)

A Lower

B Down

C Above

D UP

Register Number : 990145

Time Remaining - 0:54:58

[Finish Theory Exam](#)

Multiple Choices

Very Short Answer

0 out of 10 questions answered

- [Question 1](#)
- [Question 2](#)
- [Question 3](#)
- [Question 4](#)
- [Question 5](#)
- [Question 6](#)
- [Question 7](#)
- [Question 8](#)
- [Question 9](#)
- [Question 10](#)

Select a true statement about picture fles from the following

[Click here to zoom Image](#)

A

B

C

D

Register Number : 990145

Time Remaining - 0:54:25

[Finish Theory Exam](#)

Multiple Choices

Very Short Answer

0 out of 10 questions answered

- [Question 1](#)
- [Question 2](#)
- [Question 3](#)
- [Question 4](#)
- [Question 5](#)
- [Question 6](#)
- [Question 7](#)
- [Question 8](#)
- [Question 9](#)
- [Question 10](#)

Which of the following windows displays the output of a Python Graphics program?

[Click here to zoom Image](#)

A Python Shell

B IDLE window

C Python Graphics Window

D Web Browser

Register Number : 990145

Time Remaining - 0:54:3

[Finish Theory Exam](#)

Multiple Choices

Very Short Answer

0 out of 10 questions answered

Question 1

Question 2

Question 3

Question 4

Question 5

Question 6

Question 7

Question 8

Question 9

Question 10

Identify the Python Graphics program segment which is syntactically correct and give correct output.

[Click here to zoom Image](#)

A

```
for i in range(3):  
    forward(100)  
    right(120)
```

B

```
for 1 in range(3):  
    forward(100)  
    right(120)
```

C

```
for i in range(3)  
    forward(100)  
    right(120)
```

D

```
for 1 in range(3)  
    forward(100)  
    right(120)
```


Register Number : 990145

Time Remaining - 0:53:41

[Finish Theory Exam](#)

Multiple Choices

Very Short Answer

0 out of 10 questions answered

- [Question 1](#)
- [Question 2](#)
- [Question 3](#)
- [Question 4](#)
- [Question 5](#)
- [Question 6](#)
- [Question 7](#)
- [Question 8](#)
- [Question 9](#)
- [Question 10](#)

Which one of the following facility will help to give the same layouts to different Web Pages of a Web Site?

[Click here to zoom Image](#)

A Word Processors

B Web Browsers

C Mark up languages

D Cascading Style Sheets

Register Number : 990145

Time Remaining - 0:53:22

[Finish Theory Exam](#)

Multiple Choices

Very Short Answer

0 out of 10 questions answered

- [Question 1](#)
- [Question 2](#)
- [Question 3](#)
- [Question 4](#)
- [Question 5](#)
- [Question 6](#)
- [Question 7](#)
- [Question 8](#)**
- [Question 9](#)
- [Question 10](#)

The Webpage created by Anu has different paragraphs. Choose the selector to be used to give different colours including Cascading Styles

[Click here to zoom Image](#)

A Element Selector

C Internal Selector

B Class Selector

D External Selector

Register Number : 990145

Time Remaining - 0:52:57

[Finish Theory Exam](#)

Multiple Choices

Very Short Answer

0 out of 10 questions answered

- Question 1
- Question 2
- Question 3
- Question 4
- Question 5
- Question 6
- Question 7
- Question 8
- Question 9
- Question 10

Identify the given tool in Libre Office Writer



A Insert Chart

B Apply Style Box

C Add Decimal Place

D Clone Formatting

Register Number : 990145

Time Remaining - 0:52:20

[Finish Theory Exam](#)

Multiple Choices

Very Short Answer

0 out of 10 questions answered

- [Question 1](#)
- [Question 2](#)
- [Question 3](#)
- [Question 4](#)
- [Question 5](#)
- [Question 6](#)
- [Question 7](#)
- [Question 8](#)
- [Question 9](#)
- [Question 10](#)

The table of the winners of a School Kalolsavam is available in a Database. The certificates of these students should be prepared in Word processor using this table. Which one of the following technique will be suitable to do this?

[Click here to zoom Image](#)

A Mail merge

B Mail attach

C Database Query

D Export pdf

Theory Section

Register Number : 990146

Time Remaining - 0:59:58

[Finish Theory Exam](#)

Multiple Choices

Very Short Answer

0 out of 10 questions answered

- Question 1
- Question 2
- Question 3
- Question 4
- Question 5
- Question 6
- Question 7
- Question 8
- Question 9
- Question 10

Write the expanded form of WCMS that helps to create Web sites.

- A Web Content Management System
- B Web Control Machine System
- C Wiki Content Management system
- D Wiki Control Machine System

Register Number : 990146

Time Remaining - 0:59:33

[Finish Theory Exam](#)

Multiple Choices

Very Short Answer

0 out of 10 questions answered

Question 1

Question 2

Question 3

Question 4

Question 5

Question 6

Question 7

Question 8

Question 9

Question 10

Select a suitable instruction used to give background colour to a web page using Cascading Style from the given options

[Click here to zoom image](#) A `body { background : #C8DDD2 ; }` B `body ((background : #C8DDD2 ;))` C `body [background : #C8DDD2 ;]` D `body << background : #C8DDD2 ; >>`

Register Number : 990146

Time Remaining - 0:59:9

[Finish Theory Exam](#)

Multiple Choices

Very Short Answer

0 out of 10 questions answered

- Question 1
- Question 2
- Question 3
- Question 4
- Question 5
- Question 6
- Question 7
- Question 8
- Question 9
- Question 10

Name the connector used to connect UTP cables to computer.

- | | | | |
|----------------------------|------------------|----------------------------|--------------------|
| <input type="checkbox"/> A | Serial Connector | <input type="checkbox"/> B | RJ 45 |
| <input type="checkbox"/> C | RJ 11 | <input type="checkbox"/> D | Parallel Connector |

Register Number : 990146

Time Remaining - 0:58:45

[Finish Theory Exam](#)

Multiple Choices

Very Short Answer

0 out of 10 questions answered

- Question 1
- Question 2
- Question 3
- Question 4
- Question 5
- Question 6
- Question 7
- Question 8
- Question 9
- Question 10

Identify the type of Computer Network of Railway, Army, Banks etc. which are spread through out the country.

<p>A <input type="checkbox"/> LAN</p>	<p>B <input type="checkbox"/> WAN</p>
<p>C <input type="checkbox"/> PAN</p>	<p>D <input type="checkbox"/> MAN</p>

Register Number : 990146

Time Remaining - 0:58:20

[Finish Theory Exam](#)

Multiple Choices

Very Short Answer

0 out of 10 questions answered

- [Question 1](#)
- [Question 2](#)
- [Question 3](#)
- [Question 4](#)
- [Question 5](#)
- [Question 6](#)
- [Question 7](#)
- [Question 8](#)
- [Question 9](#)
- [Question 10](#)

Which of the following can be an attribute of a Layer in QGIS Map.

[Click here to zoom Image](#)

- | | |
|---|---|
| <p><input type="checkbox"/> A Owner</p> | <p><input type="checkbox"/> B River</p> |
| <p><input type="checkbox"/> C Well</p> | <p><input type="checkbox"/> D House</p> |

Register Number : 990146

Time Remaining - 0:57:55

[Finish Theory Exam](#)

Multiple Choices

Very Short Answer

0 out of 10 questions answered

Question 1

Question 2

Question 3

Question 4

Question 5

Question 6

Question 7

Question 8

Question 9

Question 10

Observe and analyse the given image of the Clock/Map window of Sunclock software and identify the true statement from the following.



A As per the image, duration of night time is shorter in Southern hemisphere.

B As per the image, duration of night time is shorter in Northern hemisphere.

C As per the image, duration of day and night time are equal in Southern and Northern hemispheres.

D As per the image, duration of day time is shorter in Southern hemisphere.

Register Number : 990146

Time Remaining - 0:56:48

[Finish Theory Exam](#)

Multiple Choices

Very Short Answer

0 out of 10 questions answered

- Question 1
- Question 2
- Question 3
- Question 4
- Question 5
- Question 6
- Question 7**
- Question 8
- Question 9
- Question 10

Which of the following is the very first instruction of a Python Graphics program?

A for i in range (4):

B begin_fill()

C from turtle import*

D right()

Register Number : 990146

Time Remaining - 0:56:30

[Finish Theory Exam](#)

Multiple Choices

Very Short Answer

0 out of 10 questions answered

Question 1

Question 2

Question 3

Question 4

Question 5

Question 6

Question 7

Question 8

Question 9

Question 10

Identify the output of the given Python Graphics program.

```
from turtle import*  
for i in range(6):  
    forward(100)  
    right(60)
```

A

Square

B

Rectangle

C

Regular Pentagon

D

Regular Hexagon

 Theory Section

Register Number : 990146

Time Remaining - 0:55:54

Finish Theory Exam

Multiple Choices

Very Short Answer

0 out of 10 questions answered

- Question 1
- Question 2
- Question 3
- Question 4
- Question 5
- Question 6
- Question 7
- Question 8
- Question 9
- Question 10

What is correct about service websites in internet?

- A www.hscap.kerala.gov.in is an online website for higher secondary admission.
- B www.google.com is a social media.
- C www.olam.com a search engine in internet.
- D www.wiktionary.org is the email address of Malayalam wikipedia.

 Theory Section

Register Number : 990146

Time Remaining - 0:55:25

[Finish Theory Exam](#)

Multiple Choices

Very Short Answer

0 out of 10 questions answered

- Question 1
- Question 2
- Question 3
- Question 4
- Question 5
- Question 6
- Question 7
- Question 8
- Question 9
- Question 10

Which organization controls the structure, attitudes and common discussions on Internet?

A World Wide Web

B The Internet Engineering Task Force (IETF)

C The Internet Corporation for Assigned Names and Numbers (ICANN)

D The Internet Society

Register Number : 990147

Time Remaining - 0:59:55

[Finish Theory Exam](#)

Multiple Choices

Very Short Answer

0 out of 10 questions answered

- Question 1
- Question 2
- Question 3
- Question 4
- Question 5
- Question 6
- Question 7
- Question 8
- Question 9
- Question 10

Choose the step to include Table of Contents in a Word Processor document

A Insert → Indexes and Tables

B Format → Indexes and Tables

C view → Indexes and Tables

D Edit → Indexes and Tables

Register Number : 990147

Time Remaining - 0:59:17

[Finish Theory Exam](#)

Multiple Choices

Very Short Answer

0 out of 10 questions answered

Question 1

Question 2

Question 3

Question 4

Question 5

Question 6

Question 7

Question 8

Question 9

Question 10

Arun decided to create a new style to the heading of a document prepared by him in Word Processor by selecting two set of formats from given below. Which one of the format is true about the heading

- 1 . Font Size: 17 Font family: Rachana Font color:Red
2. Distance from the margin :12, Text Alignment :Left

A Both the instructions can help him to format the heading

B Only the first instruction is suitable for the heading where as the second one is not suitable

C The first instruction can not be used.Where as the second instruction will be suitable for the heading

D Both of the instructions are not suitable to format the heading

Register Number : 990147

Time Remaining - 0:58:52

[Finish Theory Exam](#)

Multiple Choices

Very Short Answer

0 out of 10 questions answered

- Question 1
- Question 2
- Question 3
- Question 4
- Question 5
- Question 6
- Question 7
- Question 8
- Question 9
- Question 10

Which one of the following is a Vector Image File?

[Click here to zoom Image](#)

A Circle.png

B Circle.jpg

C Circle.svg

D Circle.gif

Register Number : 990147

Time Remaining - 0:58:29

[Finish Theory Exam](#)

Multiple Choices

Very Short Answer

0 out of 10 questions answered

- Question 1
- Question 2
- Question 3
- Question 4
- Question 5
- Question 6
- Question 7
- Question 8
- Question 9
- Question 10

Name the suitable option to be selected from the Export Winow in Inkscape to export a picture to the size of its carvas ?

- | | | | |
|----------------------------|-----------|----------------------------|---------|
| <input type="checkbox"/> A | Page | <input type="checkbox"/> B | Drawing |
| <input type="checkbox"/> C | Selection | <input type="checkbox"/> D | Custom |

Register Number : 990147

Time Remaining - 0:58:5

[Finish Theory Exam](#)

Multiple Choices

Very Short Answer

0 out of 10 questions answered

- [Question 1](#)
- [Question 2](#)
- [Question 3](#)
- [Question 4](#)
- [Question 5](#)
- [Question 6](#)
- [Question 7](#)
- [Question 8](#)
- [Question 9](#)
- [Question 10](#)

Who founded Gnu Project in 1983?

[Click here to zoom Image](#)

A Richard Mathew Stallman

B Dennis Ritchie

C Ken Thomson

D Linus Torvalds

Register Number : 990147

Time Remaining - 0:57:42

[Finish Theory Exam](#)

Multiple Choices

Very Short Answer

0 out of 10 questions answered

- [Question 1](#)
- [Question 2](#)
- [Question 3](#)
- [Question 4](#)
- [Question 5](#)
- [Question 6](#)
- [Question 7](#)
- [Question 8](#)
- [Question 9](#)
- [Question 10](#)

Which of the following Operating Systems is **NOT** based on Linux?

[Click here to zoom Image](#)

A Debian

B Android

C Tizen

D iOS

Register Number : 990147

Time Remaining - 0:57:13

[Finish Theory Exam](#)

Multiple Choices

Very Short Answer

0 out of 10 questions answered

- [Question 1](#)
- [Question 2](#)
- [Question 3](#)
- [Question 4](#)
- [Question 5](#)
- [Question 6](#)
- [Question 7](#)
- [Question 8](#)
- [Question 9](#)
- [Question 10](#)

Which is the software to create animation in the following?

[Click here to zoom Image](#)

A LibreOffice Writer

B LibreOffice Calc

C Synfig Studio

D Quantum GIS

Register Number : 990147

Time Remaining - 0:56:48

[Finish Theory Exam](#)

Multiple Choices

Very Short Answer

0 out of 10 questions answered

- Question 1
- Question 2
- Question 3
- Question 4
- Question 5
- Question 6
- Question 7
- Question 8**
- Question 9
- Question 10

What is the name of each image that prepared in Synfig Studio from the given options?

- | | |
|--|---|
| <p>A <input type="checkbox"/></p> <p>Objects</p> | <p>B <input type="checkbox"/></p> <p>Animations</p> |
| <p>C <input type="checkbox"/></p> <p>Scenes</p> | <p>D <input type="checkbox"/></p> <p>Parameters</p> |

Register Number : 990147

Time Remaining - 0:56:19

[Finish Theory Exam](#)

Multiple Choices

Very Short Answer

0 out of 10 questions answered

- Question 1
- Question 2
- Question 3
- Question 4
- Question 5
- Question 6
- Question 7
- Question 8
- Question 9
- Question 10

Which one is not available in LibreOffice Base?

A Tables

B Queries

C Forms

D Tweening

Register Number : 990147

Time Remaining - 0:55:47

[Finish Theory Exam](#)

Multiple Choices

Very Short Answer

0 out of 10 questions answered

- Question 1
- Question 2
- Question 3
- Question 4
- Question 5
- Question 6
- Question 7
- Question 8
- Question 9
- Question 10

Which of the following is correct about Query in Database ?

A A system to edit the data in a database on conditions.

C A system to add data to database.

B A system to avoid the data from database.

D A system to get data from database on conditions.

Register Number : 990148

Time Remaining - 0:58:54

[Finish Theory Exam](#)

Multiple Choices

Very Short Answer

0 out of 10 questions answered

- Question 1
- Question 2
- Question 3
- Question 4
- Question 5
- Question 6
- Question 7
- Question 8
- Question 9
- Question 10

Which one of the tool will help to apply the format of a given heading to other headings in a document prepared in Libre Office Writer?

- A Page Fommatting
- B Clear Direct Formatting Tool
- C Clone Formatting Tool
- D Standard Tool

Register Number : 990148

Time Remaining - 0:58:26

[Finish Theory Exam](#)

Multiple Choices

Very Short Answer

0 out of 10 questions answered

- Question 1
- Question 2
- Question 3
- Question 4
- Question 5
- Question 6
- Question 7
- Question 8
- Question 9
- Question 10

Which is the method used to move from the Table of Contents to the related pages of a document?

[Click here to zoom Image](#)

A Press the Ctrl key and click on the heading

B Press the Alt key and click on the heading

C Press the Shift key and click on the heading

D Press the Enter key

Register Number : 990148

Time Remaining - 0:57:46

[Finish Theory Exam](#)

Multiple Choices

Very Short Answer

0 out of 10 questions answered

- [Question 1](#)
- [Question 2](#)
- [Question 3](#)
- [Question 4](#)
- [Question 5](#)
- [Question 6](#)
- [Question 7](#)
- [Question 8](#)
- [Question 9](#)
- [Question 10](#)

Ritha wants to find out the duration of Night time in a locality in various months. Which of the following software will help her?

[Click here to zoom Image](#)

A Inkscape

B Qgis

C Sunclock

D GeoGebra

Register Number : 990148

Time Remaining - 0:57:19

[Finish Theory Exam](#)

Multiple Choices

Very Short Answer

0 out of 10 questions answered

- [Question 1](#)
- [Question 2](#)
- [Question 3](#)
- [Question 4](#)
- [Question 5](#)
- [Question 6](#)
- [Question 7](#)
- [Question 8](#)
- [Question 9](#)
- [Question 10](#)

Which of the following instructions is to be used in a Python Graphics program to give different colours to geometrical figures?

[Click here to zoom image](#)

A pen-color()

B pencolour()

C colour()

D color()

Register Number : 990148

Time Remaining - 0:57:0

[Finish Theory Exam](#)

Multiple Choices

Very Short Answer

0 out of 10 questions answered

- Question 1
- Question 2
- Question 3
- Question 4
- Question 5
- Question 6**
- Question 7
- Question 8
- Question 9
- Question 10

Identify the command used to make the Python instructions execute repeatedly in a program.

A for

B turtle

C forward

D right

Register Number : 990148

Time Remaining - 0:56:39

[Finish Theory Exam](#)

Multiple Choices

Very Short Answer

0 out of 10 questions answered

- [Question 1](#)
- [Question 2](#)
- [Question 3](#)
- [Question 4](#)
- [Question 5](#)
- [Question 6](#)
- [Question 7](#)**
- [Question 8](#)
- [Question 9](#)
- [Question 10](#)

UTP cables are used to connect computers. Identify the number of wires present in a cable.

[Click here to zoom Image](#)

A 4

C 8

B 12

D 2

Register Number : 990148

Time Remaining - 0:55:31

[Finish Theory Exam](#)

Multiple Choices

Very Short Answer

0 out of 10 questions answered

- [Question 1](#)
- [Question 2](#)
- [Question 3](#)
- [Question 4](#)
- [Question 5](#)
- [Question 6](#)
- [Question 7](#)
- [Question 8](#)**
- [Question 9](#)
- [Question 10](#)

Identify the form of data send to Modem from Telephone Network.

[Click here to zoom Image](#)

A Digital

B Analogue

C Decimal

D Hexadecimal

Theory Section

Register Number : 990148

Time Remaining - 0:54:59

[Finish Theory Exam](#)

Multiple Choices

Very Short Answer

0 out of 10 questions answered

- Question 1
- Question 2
- Question 3
- Question 4
- Question 5
- Question 6
- Question 7
- Question 8
- Question 9
- Question 10

Which of the following technique can be used for avoiding the repetitive use of html tags and attributes in designing a web page?

A Cascading Style Sheets

C HTML Editors

B Web Content Management System

D Text Editors

Register Number : 990148

Time Remaining - 0:53:57

[Finish Theory Exam](#)

Multiple Choices

Very Short Answer

0 out of 10 questions answered

- Question 1
- Question 2
- Question 3
- Question 4
- Question 5
- Question 6
- Question 7
- Question 8
- Question 9
- Question 10

Name the tag necessary to include Internal Cascading Style to a Web Page

A `<p>...</p>`

B `<style>...</style>`

C `<body>...</body>`

D `...`

Register Number : 990201

Time Remaining - 0:59:54


[Finish Theory Exam](#)

Multiple Choices

Very Short Answer

0 out of 10 questions answered

- Question 1
- Question 2
- Question 3
- Question 4
- Question 5
- Question 6
- Question 7
- Question 8
- Question 9
- Question 10

Identify the tool in Synfig Studio from the given image. 

A Transform Tool

B SmoothMove Tool

C Fill Tool

D Gradient Tool

Register Number : 990201

Time Remaining - 0:59:34

[Finish Theory Exam](#)

Multiple Choices

Very Short Answer

0 out of 10 questions answered

- Question 1
- Question 2
- Question 3
- Question 4
- Question 5
- Question 6
- Question 7
- Question 8
- Question 9
- Question 10

Which is a project file prepared in Synfig Studio?

[Click here to zoom image](#)

A sky.xcf

B sky.osp

C sky.aup

D sky.sifz

Register Number : 990201

Time Remaining - 0:59:14

[Finish Theory Exam](#)


Multiple Choices

Very Short Answer

0 out of 10 questions answered

- Question 1
- Question 2
- Question 3
- Question 4
- Question 5
- Question 6
- Question 7
- Question 8
- Question 9
- Question 10

The image is of a famous computer programmer Dennis Ritchie. He participated in the designing of



Dennis Ritchie

A Unix

C Minix

B Linux

D Windows

Register Number : 990201

Time Remaining - 0:58:55

[Finish Theory Exam](#)

Multiple Choices

Very Short Answer

0 out of 10 questions answered

- [Question 1](#)
- [Question 2](#)
- [Question 3](#)
- [Question 4](#)
- [Question 5](#)
- [Question 6](#)
- [Question 7](#)
- [Question 8](#)
- [Question 9](#)
- [Question 10](#)

Name the part of the Operating System which communicates with computer hardware directly or with the help of Drivers.

[Click here to zoom Image](#)

A Kernel

B Shell

C CPU

D GUI

Register Number : 990201

Time Remaining - 0:58:33

[Finish Theory Exam](#)

Multiple Choices

Very Short Answer

0 out of 10 questions answered

- [Question 1](#)
- [Question 2](#)
- [Question 3](#)
- [Question 4](#)
- [Question 5](#)
- [Question 6](#)
- [Question 7](#)
- [Question 8](#)
- [Question 9](#)
- [Question 10](#)

The Webpage created by Anu has different paragraphs. Choose the selector to be used to give different colours including Cascading Styles

[Click here to zoom Image](#)

A Element Selector

B Class Selector

C Internal Selector

D External Selector

Register Number : 990201

Time Remaining - 0:58:10

[Finish Theory Exam](#)

Multiple Choices

Very Short Answer

0 out of 10 questions answered

- [Question 1](#)
- [Question 2](#)
- [Question 3](#)
- [Question 4](#)
- [Question 5](#)
- [Question 6](#)**
- [Question 7](#)
- [Question 8](#)
- [Question 9](#)
- [Question 10](#)

Which of the following can be used when the name of the html tag itself is used for defining the cascading style in a web page ?

[Click here to zoom Image](#)

A Class Selector

B Hyperlink

C Element Selector

D WYSIWG Editor

Register Number : 990201

Time Remaining - 0:57:46

[Finish Theory Exam](#)

Multiple Choices

Very Short Answer

0 out of 10 questions answered

- [Question 1](#)
- [Question 2](#)
- [Question 3](#)
- [Question 4](#)
- [Question 5](#)
- [Question 6](#)
- [Question 7](#)
- [Question 8](#)
- [Question 9](#)
- [Question 10](#)

Which is the easiest method to apply the given format of a word to other words in a document ?

[Click here to zoom Image](#)

- | | |
|--|--|
| <p>A <input type="checkbox"/> Paragraph Formatting</p> | <p>B <input type="checkbox"/> Clone Formatting</p> |
| <p>C <input type="checkbox"/> Character Formatting</p> | <p>D <input type="checkbox"/> Page Formatting</p> |

Register Number : 990201

Time Remaining - 0:57:28

[Finish Theory Exam](#)

Multiple Choices

Very Short Answer

0 out of 10 questions answered

- [Question 1](#)
- [Question 2](#)
- [Question 3](#)
- [Question 4](#)
- [Question 5](#)
- [Question 6](#)
- [Question 7](#)
- [Question 8](#)**
- [Question 9](#)
- [Question 10](#)

What will be the name of the window, opened on clicking More Styles from the Apply Style Box in Libre Office

[Click here to zoom Image](#)

A Paragraph Formatting

B Styles and Formatting

C Character Formatting

D Page Formatting

Register Number : 990201

Time Remaining - 0:57:4

[Finish Theory Exam](#)


Multiple Choices


Very Short Answer


0 out of 10 questions answered


- Question 1
- Question 2
- Question 3
- Question 4
- Question 5
- Question 6
- Question 7
- Question 8
- Question 9
- Question 10

Select a suitable tool to include a Text to the picture drawn in InkscapeSoftware

A Create rectangles and squares 

C Create circles, ellipses and arcs 

B Create and edit text objects 

D Create stars and polygons 

Register Number : 990201

Time Remaining - 0:56:34

[Finish Theory Exam](#)

Multiple Choices

Very Short Answer

0 out of 10 questions answered

- [Question 1](#)
- [Question 2](#)
- [Question 3](#)
- [Question 4](#)
- [Question 5](#)
- [Question 6](#)
- [Question 7](#)
- [Question 8](#)
- [Question 9](#)
- [Question 10](#)

Select a true statement about picture files from the following

A svg images are vector images

B Clarity is lost on scaling Vector images

C Bitmap images are also called Vector images.

D svg images are Raster images

[Click here to zoom Image](#)

Register Number : 990202

Time Remaining - 0:59:59

[Finish Theory Exam](#)

Multiple Choices

Very Short Answer

0 out of 10 questions answered

- Question 1
- Question 2
- Question 3
- Question 4
- Question 5
- Question 6
- Question 7
- Question 8
- Question 9
- Question 10

Which is a Social Media in the following?

A Whatsapp

B Google

C Wikipedia

D Yahoo

Register Number : 990202

Time Remaining - 0:59:17

[Finish Theory Exam](#)

Multiple Choices

Very Short Answer

0 out of 10 questions answered

- Question 1
- Question 2
- Question 3
- Question 4
- Question 5
- Question 6
- Question 7
- Question 8
- Question 9
- Question 10

What is the process of storing websites in a server?

[Click here to zoom Image](#)

A Blogging

C Hosting

B Formatting

D Bullying

Register Number : 990202

Time Remaining - 0:58:51

[Finish Theory Exam](#)

Multiple Choices

Very Short Answer

0 out of 10 questions answered

- [Question 1](#)
- [Question 2](#)
- [Question 3](#)
- [Question 4](#)
- [Question 5](#)
- [Question 6](#)
- [Question 7](#)
- [Question 8](#)
- [Question 9](#)
- [Question 10](#)

Name the connector used to connect UTP cables to computer.

[Click here to zoom Image](#)

A Serial Connector

B RJ 45

C RJ 11

D Parallel Connector

Register Number : 990202

Time Remaining - 0:58:27

[Finish Theory Exam](#)

Multiple Choices

Very Short Answer

0 out of 10 questions answered

- [Question 1](#)
- [Question 2](#)
- [Question 3](#)
- [Question 4](#)
- [Question 5](#)
- [Question 6](#)
- [Question 7](#)
- [Question 8](#)
- [Question 9](#)
- [Question 10](#)

Which of the following is the name of Norms that are to be obeyed in naming of computers included in a Network?

[Click here to zoom Image](#)

A IP Address

B Netmask

C Network Protocols

D Sharing

Register Number : 990202

Time Remaining - 0:58:2

[Finish Theory Exam](#)

Multiple Choices

Very Short Answer

0 out of 10 questions answered

- [Question 1](#)
- [Question 2](#)
- [Question 3](#)
- [Question 4](#)
- [Question 5](#)
- [Question 6](#)
- [Question 7](#)
- [Question 8](#)
- [Question 9](#)
- [Question 10](#)

This is the picture of Gradient Tool in Synfig Studio. What is its use?



[Click here to zoom Image](#)

A To make an object in square shape.

B To make an object in circle shape.

C To select an object and to control its handles.

D To blend two or more colors.

Register Number : 990202

Time Remaining - 0:57:34

[Finish Theory Exam](#)

Multiple Choices

Very Short Answer

0 out of 10 questions answered

- [Question 1](#)
- [Question 2](#)
- [Question 3](#)
- [Question 4](#)
- [Question 5](#)
- [Question 6](#)
- [Question 7](#)
- [Question 8](#)
- [Question 9](#)
- [Question 10](#)

What decides the naturality of movements of characters in an animation?

[Click here to zoom Image](#)

A SmoothMove Tool

C Transform Tool

B Frames Per Second

D Parameters

Register Number : 990202

Time Remaining - 0:57:12

[Finish Theory Exam](#)

Multiple Choices

Very Short Answer

0 out of 10 questions answered

- Question 1
- Question 2
- Question 3
- Question 4
- Question 5
- Question 6
- Question 7**
- Question 8
- Question 9
- Question 10

Anu has set the Progress Value in the Clock & Map window of the software Sunclonk as 1 hour and pressed the button B. Identify the change of time that happened in the Sunclonk window.

[Click here to zoom Image](#)

A Time moves 1 hour back.

B Time moves 1 hour forward.

C Time moves 1 minute back.

D Time moves 1 minute forward.

Register Number : 990202

Time Remaining - 0:56:54

[Finish Theory Exam](#)

Multiple Choices

Very Short Answer

0 out of 10 questions answered

- Question 1
- Question 2
- Question 3
- Question 4
- Question 5
- Question 6
- Question 7
- Question 8**
- Question 9
- Question 10

Which of the following is a Geographical Information System software?

A Quantum GIS

B Python

C GeoGebra

D GIMP

Register Number : 990202

Time Remaining - 0:56:17

[Finish Theory Exam](#)

Multiple Choices

Very Short Answer

0 out of 10 questions answered

- [Question 1](#)
- [Question 2](#)
- [Question 3](#)
- [Question 4](#)
- [Question 5](#)
- [Question 6](#)
- [Question 7](#)
- [Question 8](#)
- [Question 9](#)
- [Question 10](#)

Select a Query language to contact with database from the following.

[Click here to zoom Image](#)

A

B

C

D

Register Number : 990202

Time Remaining - 0:55:53

[Finish Theory Exam](#)

Multiple Choices

Very Short Answer

0 out of 10 questions answered

- Question 1
- Question 2
- Question 3
- Question 4
- Question 5
- Question 6
- Question 7
- Question 8
- Question 9
- Question 10

Text[VARCHAR] is a field type in a database created in LibreOffice Base. Which data can be included in this field?

A Image

C Currency

B Number

D Text

Register Number : 990140

Time Remaining - 0:55:14

[Finish Theory Exam](#)


Multiple Choices

Very Short Answer

0 out of 10 questions answered

- Question 1
- Question 2
- Question 3
- Question 4
- Question 5
- Question 6
- Question 7
- Question 8
- Question 9
- Question 10

Identify the tool in Synfig Studio from the given image.



[Click here to zoom Image](#)

A Transform Tool

C Fill Tool

B SmoothMove Tool

D Gradient Tool

Register Number : 990148

Time Remaining - 0:58:4

[Finish Theory Exam](#)

Multiple Choices

Very Short Answer

0 out of 10 questions answered

- [Question 1](#)
- [Question 2](#)
- [Question 3](#)
- [Question 4](#)
- [Question 5](#)
- [Question 6](#)
- [Question 7](#)
- [Question 8](#)
- [Question 9](#)
- [Question 10](#)

Identify the set of tools which can be used to arrange the speed of animation in the software Suncllock.

[Click here to zoom Image](#)

A

M	P	T
---	---	---

C

A	B	G
---	---	---

B

<	!	X
---	---	---

D

N	Y	M
---	---	---

Register Number : 990140

Time Remaining - 0:54:17

[Finish Theory Exam](#)

Multiple Choices

Very Short Answer

0 out of 5 questions answered

Question 1

Question 2

Question 3

Question 4

Question 5

Which are the field types to add numerical data in LibreOffice Base?

A Date [DATE]

B

Number[NUMERIC]

C Text[VARCHAR]

D

Text [VARCHAR_IGNORECASE]

E Decimal[DECIMAL]

Register Number : 990140

Time Remaining - 0:53:55

[Finish Theory Exam](#)

Multiple Choices

Very Short Answer

0 out of 5 questions answered

Question 1

Question 2

Question 3

Question 4

Question 5

Identify two true statements regarding Network Protocol.

[Click here to zoom image](#)

A The Norms to be obeyed by the devices included in a Network.

B The Norms to be obeyed by the Input / Output devices.

C The Norms to be obeyed by peripheral devices.

D SSH, SMB and POP are various protocols.

E UPS, SMPS and SVG are various protocols.

Register Number : 990140

Time Remaining - 0:53:22

[Finish Theory Exam](#)

Multiple Choices

Very Short Answer

0 out of 5 questions answered

Question 1

Question 2

Question 3

Question 4

Question 5

Identify the steps to set time 1 day backward in the Clock/Map window of the software Sumclock.

[Click here to zoom Image](#)

A Set the progress value (G) as 1 hour.

B Set the progress value (G) as 1 day.

C Press the tool Toggle Tropic(T).

D Press the tool Backward Time (B) once.

E Press the tool Forward Time (A) once.

Register Number : 990140

Time Remaining - 0:53:2

[Finish Theory Exam](#)

Multiple Choices

Very Short Answer

0 out of 5 questions answered

Question 1

Question 2

Question 3

Question 4

Question 5

Select correct statements related with Email services.

[Click here to zoom Image](#)

A A sender and recipient should have Email addresses by the same service provider.

B Email is a service in Internet.

C An Email address is needed only to send an Email.

D An Email address is needed only to receive an Email.

E www.yahoo.com, www.gmail.com etc. are examples for Email service providers.

Register Number : 990140

Time Remaining - 0:52:38

[Finish Theory Exam](#)

Multiple Choices

Very Short Answer

0 out of 5 questions answered

Question 1

Question 2

Question 3

Question 4

Question 5

Identify two true statements regarding Python Programming language.

A All the Python Programs are typed and saved in the Python Shell Window.

B Output of all the Python Programs are displayed in the Python Shell Window.

C Python Programs can be typed and run in Python Graphics Window.

D Geometrical figures created with the help of Python program are displayed in Python Graphics Window.

E Some additional software are required to create Geometrical figures using Python program.

[Click here to zoom Image](#)

Register Number : 990141

Time Remaining - 0:54:42

[Finish Theory Exam](#)

Multiple Choices

Very Short Answer

0 out of 5 questions answered

Question 1

Question 2

Question 3

Question 4

Question 5

A picture of png format is opened in Gimp Software.
Which of the following statements are true about it?

A png picture opens in a larger size than the actual size of the picture

B The clarity of the picture increases when moved to a larger canvas

C png picture opens in the actual size of the picture.

D The clarity of the picture is lost when moved to a larger canvas

E The picture loses its original colour.

Register Number : 990141

Time Remaining - 0:54:24

[Finish Theory Exam](#)

Multiple Choices

Very Short Answer

0 out of 5 questions answered

- [Question 1](#)
- [Question 2](#)
- [Question 3](#)
- [Question 4](#)
- [Question 5](#)

Identify the two parts of an Operating System in its working level.

- A Kernel
- C Swap
- E Shell

- B GNU
- D XNU

Register Number : 990141

Time Remaining - 0:54:2

[Finish Theory Exam](#)

Multiple Choices

Very Short Answer

0 out of 5 questions answered

Question 1

Question 2

Question 3

Question 4

Question 5

Select two correct statements related with E-banking from the following.

[Click here to zoom Image](#)

A Conducting the transactions of a Bank account through a website specifically built for the purpose is called E-Banking

C He needs going to bank for transferring money to another account.

E He needs to go bank after online transactions to pay the money.

B Account holder should have website.

D He can pay telephone, electricity bills online if there is money in the account.

Register Number : 990141

Time Remaining - 0:53:28

[Finish Theory Exam](#)

Multiple Choices

Very Short Answer

0 out of 5 questions answered

Question 1

Question 2

Question 3

Question 4

Question 5

What are the uses of Report in LibreOffice database?

A To add data to a table.

B To display the required data from a table.

C To check the type of data in a table.

D To form sub tables including the data in the table.

E To get the data in the table in a prescribed format.

Register Number : 990141

Time Remaining - 0:52:59

[Finish Theory Exam](#)

Multiple Choices

Very Short Answer

0 out of 5 questions answered

- [Question 1](#)
- [Question 2](#)
- [Question 3](#)
- [Question 4](#)
- [Question 5](#)

Find out two free software from the following to make animation videos.

- A Pencil
- C Synfig Studio
- E Adobe Flash

- B ToonBoom
- D Anim Studio

Register Number : 990142

Time Remaining - 0:55:24

[Finish Theory Exam](#)

Multiple Choices

Very Short Answer

0 out of 5 questions answered

- Question 1**
- Question 2
- Question 3
- Question 4
- Question 5

GNU/Linux Operating System has many versions now.
These versions are known as Linux Distributions.
Identify the Linux Distributions from the following.

- A Windows
- C Unix
- E Debian

- B Free BSD
- D Red hat

Register Number : 990142

Time Remaining - 0:55:3

[Finish Theory Exam](#)

Multiple Choices

Very Short Answer

0 out of 5 questions answered

- [Question 1](#)
- [Question 2](#)
- [Question 3](#)
- [Question 4](#)
- [Question 5](#)

Select the suitable file formats of image files from the given options

- A jpeg
- C svg
- E mp4

- B mpeg
- D flv