

ജില്ലാപഞ്ചായത്ത് - കണ്ണൂർ  
Mukulam Model Examination-2018

SSLC

CHEMISTRY

Marks 40  
Time 1½ Hrs

Common instructions

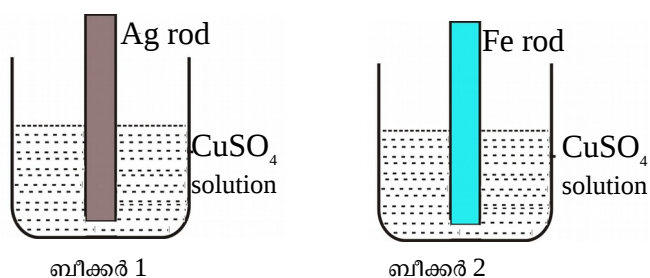
- \* 15 minutes is given as cool-off time.
- \* This time is to spent for reading question paper.
- \* Attempt questions according to the instructions.

**Questions 1 to 5 carry 1 score each. Answer any four(4) of them.**

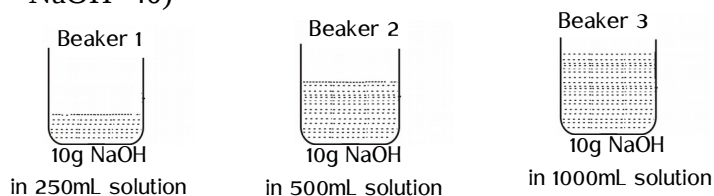
1. A dense white fume is obtained when a glass rod, dipped in hydrochloric acid, shown above ammonia jar.  
What is the chemical present in the white fume?
2. What is the number of moles present in 90g water? [Molecular mass of water - 18]
3. How many carbon atoms are present in one molecule of Propanal?
4.  $\text{SO}_2(\text{g}) + \text{Cl}_2(\text{g}) \xrightarrow{\text{sunlight}} \text{SO}_2\text{Cl}_2(\text{g})$   
Choose the factor that influence rate of the above reaction?  
[ temperature , light , surface area , concentration ]
5. Benzene is the simplest aromatic compound. Write molecular formula of benzene.

**Questions 5 to 10 carry 2 score each. Answer any four(4) of them.**

6. Figures of two beaker are given. Observe the figure carefully and answer the the question.



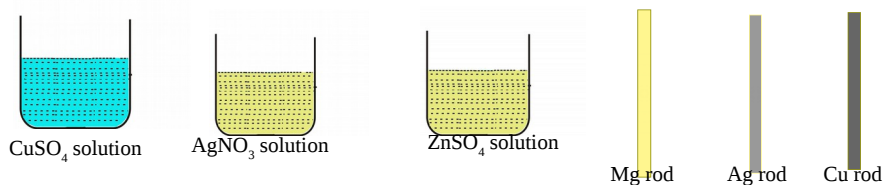
- a) In which beaker displacement reaction takesplace?
- b) Write the chemical equation for this reaction.
7. Chemical formula of some organic compounds are given.  
[  $\text{CH}_3\text{-OH}$  ,  $\text{CH}_4$  ,  $\text{CH}_3\text{-COOH}$  ,  $\text{CH}_3\text{-CHO}$  ]  
i) Select the compounds required for the preparation of an ester.  
ii) Write the chemical equation for the preparation of an ester.
8. 10g of NaOH is present in the each solution taken the in beakers. (Molecular mass of NaOH=40)



- a) Which is the one molar (1M) NaOH solution among this?
- b) What is the molarity of solution which contains 20g NaOH in one litre?
9. Aluminium is extracted by the electrolysis of molten alumina.(Hall-Heroult process)  
a) Write the chemical equation for the reaction takes place at cathode.  
b) During the process carbon anodes are replaced time to time. Why?
10. Coal is a fossil fuel obtained from the depths of the earth.  
a) Name the process by which the remains of plants are transformed in to coal.



18. Three solutions and metal rods are given.



- Draw a Galvanic cell by selecting suitable solutions and electrodes
  - Which is the anode here?
  - Write the chemical equation for the reaction which takes at anode.
19. The chemical equations for the reactions that take place in the blast furnace are given below.
- $C + O_2 \rightarrow CO_2 + \text{heat}$
  - $CO_2 + C + \text{heat} \rightarrow 2CO$
  - $Fe_2O_3 + 3CO \rightarrow 2Fe + 3CO_2$
  - $CaCO_3 + \text{heat} \rightarrow CaO + CO_2$
  - $CaO + SiO_2 \rightarrow CaSiO_3$
- Which is the reducing agent used here?
  - Why is the calcium carbonate ( $CaCO_3$ ) mixed along with the ore?
  - Select the chemical equation showing the formation of slag.
  - Name the iron obtained from the blast furnace.
20. Given below are the chemical formulae of some hydrocarbons .
- $C_6H_{14}$
  - $C_6H_{12}$
  - $C_6H_{10}$
  - $C_5H_{12}$
- Which among these is an alkene?
  - Write the structural formula of alkene having double bond in between in the first and second carbon atoms.
  - Write the IUPAC name of this compound.
  - draw the structure of cyclic isomer of this alkene.

\*\*\*\*\*