

Sl. No.

SSLC MODEL EXAMINATION, FEBRUARY - 2018.
SOCIAL SCIENCE
(English)

Time : 2½ Hours

Total Score : 80

Instructions :

- First 15 minutes are given as cool off time.
- The score and time for each question should be considered while answering.
- Answer all questions in Part - A. Answer any one from the questions given under each question number in Part - B.

	Score		
PART - A			
1. Who was the chairman of the meeting held in Bombay in 1934 where Congress Socialist Party was formed ?	1		
(A) Bhagat Singh	(B) Jai Prakash Narayan		
(C) Raj Guru	(D) V.D. Savarkar		
2. Which among the following is a tributary of the River Kaveri ?	1		
(A) Indravathi	(B) Kabani	(C) Sabari	(D) Bhima
3. Which is the largest agrobased industry in India ?	1		
4. Point out the invisible and indivisible element of state.	1		
5. Point out any three aims of Co-operative banks.	3		
6. How did miseries of the sepoys and dissatisfaction of kings caused the first war of Indian independence of 1857 ?	4		
7. What is meant by obligatory functions of state ? Give two examples of such functions.	3		

P.T.O.

- | | Score |
|---|-------|
| 8. Commercial banks provide its current account holders a facility to withdraw money over and above the balance in the account.

Identify the name of this facility provided by the commercial bank mentioned in the above statement. | 1 |
| 9. Write a note on the advancement of Arabian sea branch of monsoon winds. | 3 |
| 10. Write down the compensations obtained for consumer disputes through consumer courts. | 4 |
| 11. Boycotting elections was one of the features of the non-cooperation movement. What were its other features ? | 4 |
| 12. Distinguish between participant observation and non-participant observation methods of study. | 3 |
| 13. Elucidate the construction and management of state highways, district roads and village roads. | 3 |
| 14. Arrange the following in chronological order. <ul style="list-style-type: none">• Kundara Proclamation• Pandarappatta Vilambaram• Attingal Revolt• Battle of Colachel | 4 |
| 15. Mark and label the given Geo-information on the outline map of India provided. <ul style="list-style-type: none">(A) River Mahanadi(B) Deccan Plateau(C) Mumbai Port(D) Kachchh Peninsula | 4 |

PART - B

16. What are the commissions appointed after independence to study Indian education and to submit recommendations ? 3

OR

Assess the role of national education in the emergence of Indian nationalism.

17. Answer the following questions related to atmospheric pressure. 3

- (A) Name the instrument used for measuring atmospheric pressure.
(B) Mention the unit for representing atmospheric pressure.
(C) What is the average atmospheric pressure ?

OR

Write a short note on Autumn season.

18. Explain the different levels of human resource development. 4

OR

Write the differences between surcharge and cess.

19. Prepare a short note on any two of the following. 4

- Lokpal
- Lokayukta
- Ombudsman

OR

Explain the concept of civic consciousness. Write any two examples of activities with civic consciousness.

20. Prepare a note based on the contributions made by Dinabandhu Mitra in the emergence of Indian Nationalism. 3

OR

Write any three achievements made by independent India in the economic sector.

Score

21. What are Global pressure belts ? Explain the formation of Equatorial low pressure belt and polar high pressure belts. 5

OR

Give an account of the differences between Solstices and Equinoxes.

22. Explain how healthy persons can participate in the progress of a country. 4

OR

Explain the goals of fiscal policy.

23. What are the purposes and functions of Bureaucracy ? 4

OR

What is the main challenge faced by civic consciousness ? Suggest suitable means to overcome this challenge.

24. Explain the circumstances that led Bolsheviks into power in Russia. Identify the measures taken by the Cabinet headed by Lenin. 6





OR

Explain the consequences of second World War.

25. Write a short note on Geo stationary Satellites. 4

OR

Identify the geographical features represented by the given map symbols.

	Symbol	Colour
(A)		Black
(B)		Red
(C)		Brown
(D)		Red