



FUSCO'S SCHOOL (ICSE)

Indiranagar, Bangalore

Half Yearly Examination 2016-17

Subject : Social

Class: II

Marks:80

I. Choose the correct answers:

(1x6=6)

- Parsis go to the.....to worship.
a. Temple b. Fire temple c. Gurdwara.
- Eid is celebrated by.....
a. Hindus b. Sikhs c. Muslims.
-is the harvest festival of Assam.
a. Bihu b. Lohri c. Onam.
- Republic Day is celebrated every year on
a. January 26th b. August 15th c. October 2nd.
-is a form of recreation.
a. Studying b, cleaning c. reading.
- The lowland between hills is called.
a. Valley b. plains c. plateau.

II. Fill in the blanks:

(1x6=6)

- Flat lands are called.....
- Pongal is celebrated in the month of.....
- An.....fixes and repairs electrical things.
-is the founder of Sikhism.
-is the holy book of Hindus.
- During Ramzan, Muslims keep a fast of.....days.

III. Match the following:

(1x6=6)

- | A | B |
|-------------|---------------|
| 1. Temple | 1. Christians |
| 2. Church | 2. Kerala |
| 3. Mosque | 3. Sikhs. |
| 4. Onam | 4. Hindus. |
| 5. Gurpurab | 5. Punjab. |
| 6. Lohri | 6. Muslims. |

IV. Write whether true or false:

(1x6=6)

- Bihu is celebrated at four different times of the year.
- On Eid, people make sewian.
- In India, people worship the rivers Ganga and Yamuna.
- There is more land on earth than water.
- India became a Republic on 26th January 1951.
- River water cannot be used for cooking.

V. Give one word:

(1x6=6)

1. Festival of lights.
2. Tip of a mountain.
3. A highland that is flat on top and looks like a table.
4. The work a person does to earn money.
5. The place of worship of Sikhs.
6. The holy book of Christians.

VI. Find the odd one:

(4x2=8)

1. Diwali, Bihu, Gurpurab, Eid.
2. Pongal, Gandhi Jayanti, environmental day, Independence Day.
3. Watching Tv, studying, cycling, swimming.
4. Sand, camel, forest, cactus.

VII. Some people who help us are introducing themselves. Identify them. (1x6=6)

1. I look after people when they are sick. Who am I?
2. I design homes for you. Who am I?
3. I deliver your letters. Who am I?
4. I build your home. Who am I?
5. I grow crops for everyone. Who am I?
6. I sell meat. Who am I?

VIII. Identify the pictures:




(1x5=5)




(1)



(2)



- IX. The different natural features on the earth's surface are represented below. Label it. (5marks)**



- X. Answer the following questions: (1x6=6)**
1. A few plants grow in the desert. Give reason.
 2. What is recreation?
 3. Name any two public holidays.
 4. What do firefighters do?
 5. River water is also known as fresh water. Why?
 6. What is celebrated on 2nd October?
- XI. Explain the following questions: (5x2=10)**
1. Who is the founder of Sikhism? Name their holy book.
 2. Name any two people who help you every day. How do they help you?
 3. Write two lines on how people celebrate Diwali.
 4. What is the difference between a hill and a mountain?
 5. Name two holy books of Hindus.
- XII. Answer the following general question: (2x3=6)**
1. How can we take care of our earth?
 2. How do outdoor games help you?
- XIII. Name and draw two things that the earth gives us. (4marks)**