

Reg. No. :

Code No. 2029

Name :

**SECOND YEAR
SAY/IMPROVEMENT
JUNE 2018**

Time : 2 Hours
Cool-off time : 15 Minutes

Part - III

GEOGRAPHY

Maximum : 60 Scores

(Map to Accompany)

General Instructions to Candidates :

- There is a 'Cool-off time' of 15 minutes in addition to the writing time.
- Use the 'Cool-off time' to get familiar with questions and to plan your answers.
- Read questions carefully before answering.
- Read the instructions carefully.
- Calculations, figures and graphs should be shown in the answer sheet itself.
- Malayalam version of the questions is also provided.
- Give equations wherever necessary.
- Electronic devices except non-programmable calculators are not allowed in the Examination Hall.

വിദ്യാർത്ഥികൾക്കുള്ള പൊതുനിർദ്ദേശങ്ങൾ :

- നിർദ്ദിഷ്ട സമയത്തിന് പുറമെ 15 മിനിറ്റ് 'കൂൾ ഓഫ് ടൈം' ഉണ്ടായിരിക്കും.
- 'കൂൾ ഓഫ് ടൈം' ചോദ്യങ്ങൾ പരിചയപ്പെടാനും ഉത്തരങ്ങൾ ആസൂത്രണം ചെയ്യാനും ഉപയോഗിക്കുക.
- ഉത്തരങ്ങൾ എഴുതുന്നതിന് മുമ്പ് ചോദ്യങ്ങൾ ശ്രദ്ധാപൂർവ്വം വായിക്കണം.
- നിർദ്ദേശങ്ങൾ മുഴുവനും ശ്രദ്ധാപൂർവ്വം വായിക്കണം.
- കണക്ക് കൂട്ടലുകൾ, ചിത്രങ്ങൾ, ഗ്രാഫുകൾ, എന്നിവ ഉത്തരപേപ്പറിൽ തന്നെ ഉണ്ടായിരിക്കണം.
- ചോദ്യങ്ങൾ മലയാളത്തിലും നല്കിയിട്ടുണ്ട്.
- ആവശ്യമുള്ള സാമഗ്രി സമവാക്യങ്ങൾ കൊടുക്കണം.
- പ്രോഗ്രാമുകൾ ചെയ്യാനാകാത്ത കാൽക്കുലേറ്ററുകൾ ഒഴികെയുള്ള ഒരു ഇലക്ട്രോണിക് ഉപകരണവും പരീക്ഷാഹാളിൽ ഉപയോഗിക്കുവാൻ പാടില്ല.

SECTION – A

Answer all questions from 1 to 6. Each question carries 1 score. (6 × 1 = 6)

- The geographer who put forth the idea of stop and go determinism :
 - Griffith Taylor
 - Ratzel
 - Ellen C Semple
 - Paul Vidal de la Blache
- Name the first Indian satellite in the orbit.
- Name the Canal that connects the Mediterranean Sea with the Red Sea.
- The Union Territory of India with the highest literacy rate.
 - Lakshadweep
 - Chandigarh
 - Daman & Diu
 - Andaman & Nicobar Islands
- Name the watershed programme in India sponsored by the Central Government.
- The National water way that connects Allahabad with Haldia.

SECTION – B

Question Nos. 7 – 14. Answer any 6. Each question carries 2 scores. (6 × 2 = 12)

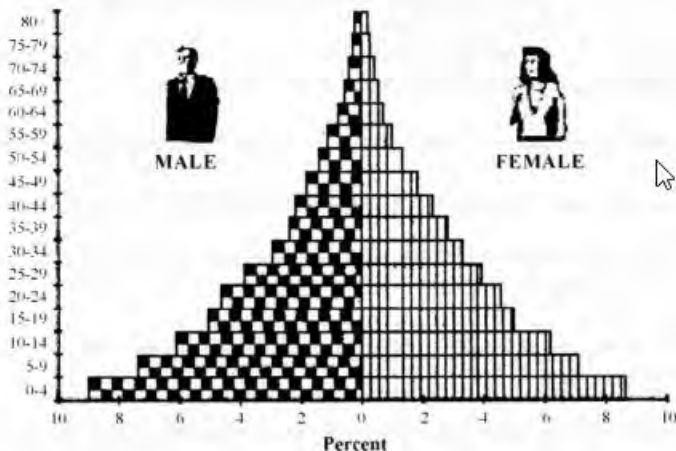
- Even with good amount of rain, Kerala still faces drought. Cite a few measures to alleviate it.
- Differentiate between bi-lateral trade and multi-lateral trade.
- Distinguish between chain stores and departmental stores.
- Air pollution in urban areas is higher than in rural areas. Give reasons.
- Identify the basic programmes for the development of hilly regions in India.
- Identify the stage of demographic transition in which the population is either stable or growing slowly. Name a country which belongs to this stage.

13. List out the problems of urban areas in developing countries.
14. Mention the push and pull factors of migration.

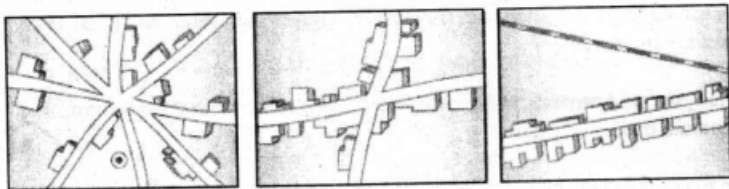
SECTION - C

Question Nos. 15 – 22. Answer any 6. Each question carries 3 scores. (6 × 3 = 18)

15. The Agriculture sector has the largest share of workers in India. Explain the reasons.
16. Non-conventional energy is considered as the energy of future generation. Justify the statement.
17. Distinguish between mass communication and personal communication with suitable examples.
18. Classify the Indian towns on the basis of their evolution with suitable examples.
19. Briefly explain the classification of industries based on ownership.
20. Give a brief account on the information represented by the given age – sex pyramid by analysing it.



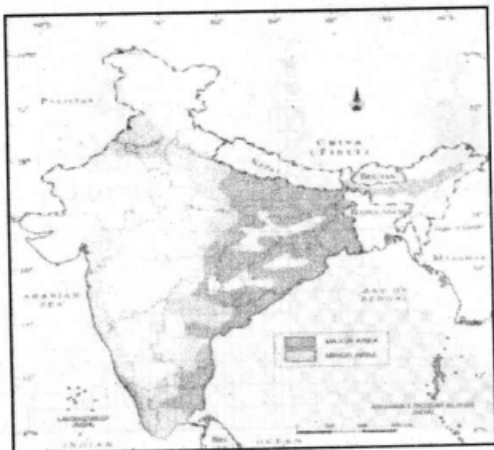
21. List out the geographical factors that determine the distribution of population and explain any two of them.
22. Identify the settlement patterns given below and explain their formation.



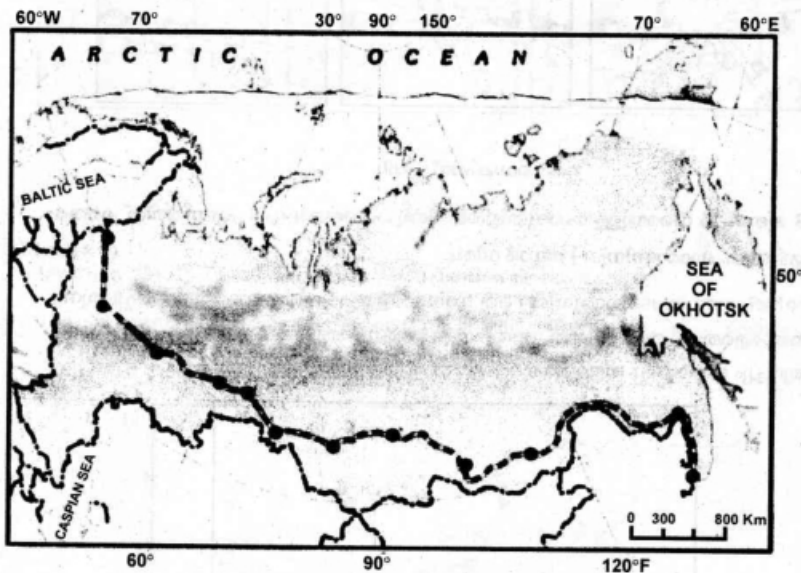
SECTION - D

Question Nos. 23-26. Answer any 3. Each question carries 4 scores. (3 × 4 = 12)

23. The given map shows the distribution of a crop in India. Identify the crop and prepare a note on its features and distribution.



24. Discuss the different approaches to human development.
25. List out the major problems faced by the farmers in India and describe about any three of them.
26. Observe the map given below and give a brief description about the transcontinental railway line mentioned.



SECTION – E

Question Nos. 27 and 28. Answer any 1. Each question carries 6 scores. (1 × 6 = 6)

27. There are different types of agricultural practices in the world. Prepare a note on any three of them.
28. Explain the factors determining the location of an Industry.

SECTION - F

Identify and mark the following on the given outline map of India :

(6 × 1 = 6)

29. (a) The port in Mahanadi Delta.
(b) The software technology park located in the Southern most part of India.
(c) The Iron and Steel plant in India built in collaboration with UK.
(d) The leading manganese producing State in India.
(e) The leading producer of coffee in India.
(f) The major cotton textile centre in Gujarat.
-