


Question bank for first class---Maths—2014

Name of HM---B.A.L.Sarada,kv-tirumalagiri



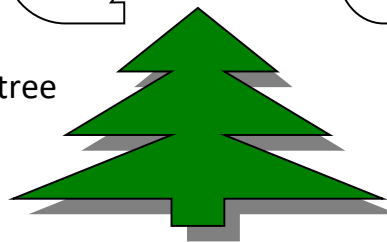
1.Tick the big



2.Tick the small

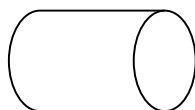
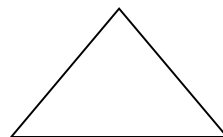
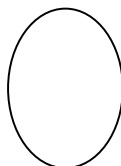

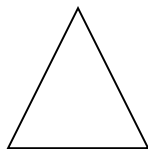


3.Tick the biggest tree



4.Tick the smallest fruit

5.Join the similar shapes



6.Colour with yellow ,green,and blue



7.HOW many ice creams are there?

8.write missing numbers

$2 - 1 = \square$ $5 - 4 = 1 - \square$ $10 - 5 = \square$ $3 - 1 = \square$ $2 - 2 = \square$ $8 - 7 = \square$

9.Subtract and match-----

$4 - 2$ 8

$6 - 3$ 2

$9 - 1$ 6

$4 - 2$ 2

10 Fill in the blanks

SIX RUPEES=TWO RUPEES+TWO RUPEES+

TWO RUPEES=ONE RUPEE+