

# Question bank

**SUB:-E.V.S**

**CLASS-IV**

Q.1 Explain the following terms in one sentence or phrase ?

- (1) Vallam -----
- (2) Jugad -----
- (3) Bela ghar -----
- (4) Trolley -----
- (5) Uruka -----

Q 2 Name the place where

- 1. Rains heavily -----
- 2. Strong iron rope is used to cross the river -----
- 3. Small boats are used -----
- 4. Paths are rocky and uneven -----

Q.2 Write the name of a flower used :

- 1. For decoration -----
- 2. As medicines -----
- 3. For making scent -----
- 4. For eating -----
- 5. For making garland -----

Q.4 Write the name of :




- (1) 2 outdoor games -----
- 
- (2) 2 Indoor games -----
-

- (3) 2 green vegetables -----  
-----
- (4) 2 yellow fruits -----  
-----
- (5) 2 fruits with smooth surface -----  
-----
- (6) 2 vegetables with strong odor or smell -----  
-----
- (7) 2 vegetables that can be eaten raw -----  
-----
- (8) 2 cartoon watched by you -----  
-----
- (9) A animal with sharp teeth -----
- (10) A bird that cannot fly -----
- (11) Two animals which lay eggs -----  
-----
- (12) Two animals which do not have hair -----  
-----
- (13) Animal with its ears on the top -----

Q.5 Classify the following in air water and land transports and write in the give bubbles

(car, bus, aeroplane ,yatch, ship, helicopter)

Air transport                          water transport                          land  
transport



Q.6 what do you call the persons associated or works with following items



---



---



---

Q.7 who I am? write my name.

- (1) I look like a nail but brown like a chocolate  
I soothe in the toothache



---

(2) I look like green Zeera and useful in stomach pain



---

(3) I am round like a pearl my color is black. I can make your food spicy



---

- (4) I am red hot and spicy I am used in powdered form to make vegetable tasty



Q.8 Observe the picture and classify them in cooking or serving utensils




Q.9 Tick the picture of the vegetables which are roots



Q.10 Match the following animals with their ears.

Elephant



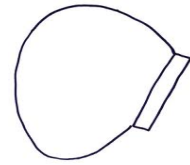
Mouse



Rabbit



Horse



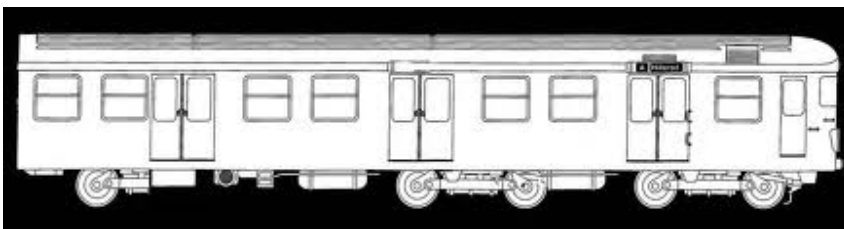
Q.11 Draw the bird feet which can meet following needs:

(1) To swim in water

(2) To climb the tree


(3) To walk on the land

Q.12 Fill in the following picture by writing the name of things or people you can see on the railway platform



Q.13 Make a floral rangoli design and colour it

Q.14 Write the purpose for which following animal body parts can be used







(2)



(3)

---

Q.15 Observe the picture write which type of house is it ?  
Kuccha/Puccha

Write the material used for making it



-----

-----

-----

-----

Q.16 what are the source of water draw the picture of source of water used in your home

\_\_\_\_\_  
\_\_\_\_\_

Q.17 Write any two work done by you at home to work your parents

(1)

\_\_\_\_\_  
\_\_\_\_\_

(2)

\_\_\_\_\_  
\_\_\_\_\_

Q.18 which is your favorite game? Draw anything used to play that game.

Q.19 Find the name by jumbling the letters

(1) A person who cannot speak U M D B \_\_\_\_\_

(2) A person cannot walk A M L E \_\_\_\_\_

(3) A person who cannot see L B I D N \_\_\_\_\_

(4) A person who cannot hear E D F A \_\_\_\_\_

Q.20 Do you clean the water before drinking ? How?

---

---

---

---

Q.21 Fill ups

(1)\_\_\_\_\_ lays egg in the nest of crow.

(2) Coppersmith bird is also called \_\_\_\_\_

(3)Desert oak tree is found in \_\_\_\_\_

(4)\_\_\_\_\_ is used to make the food yellow

(5) The pea nut plant has \_\_\_\_\_ stem

Q.22 True/false

- 1) Peacock is our national bird
- 2) Some birds use their feet to hold branches of the tree
- 3) Snakes chew their food with their teeth
- 4) The women were dressed in yellow to celebrate Bihu festival

Q.23 read the following train reservation ticket carefully and answers the question



- (1) Name the train mentioned in ticket? \_\_\_\_\_
- (2) What is departure time given in the ticket  
\_\_\_\_\_
- (3) What is total journey time  
Arrival time - departure time=-----
- (4) what is the total cost of their ticket \_\_\_\_\_

Q.24 Join the numbers and complete the picture which animal is it? Name it and write 4-5 lines about it: