

# Question Paper of BHU MCA - 2015 (Set No. 1)

1. The value of  $\frac{9}{20} - \left[ \frac{1}{5} + \left\{ \frac{1}{4} + \left( \frac{5}{6} - \frac{1}{3} + \frac{1}{2} \right) \right\} \right]$  is equal to

(a) 0

(b)  $\frac{1}{4}$

(c)  $\frac{9}{10}$

(d)  $\frac{9}{20}$

2. The solution of simultaneous equation  $x + \frac{1}{y} = \frac{3}{2}$  and  $y + \frac{1}{x} = 3$  is

(a)  $x = 1, y = \frac{1}{2}$

(b)  $x = \frac{1}{2}, y = 1$

(c)  $x = 1, y = 1$

(d)  $x = 1, y = -1$

**JITENDRA MISHRA ACADEMY (JMA), INDORE (India's No. 1 Institute for All India MCA Entrance Training)**

JMA HOUSE - 7, CHANDRALOK COLONY, INDORE (M.P.) Ph.: 0731 - 4236844 / 2566799 Visit us : [www.jmaindore.com](http://www.jmaindore.com)

MCA Entrance

3. If  $1, \omega, \omega^2, \dots, \omega^{n-1}$  are  $n$ th roots of unity, then  $(1 - \omega)(1 - \omega^2) \dots (1 - \omega^{n-1})$  is equal to

(a)  $n$

(b) 1

(c) 0

(d)  $n^2$

4. The value of  $7 \log \frac{16}{15} + 5 \log \frac{25}{24} + 3 \log \frac{81}{80}$  is equal to

(a) Unity

(b) Zero

(c)  $\log 2$

(d) 0.2

5. The  $n$ th term of the series

$$2\frac{1}{2} + 1\frac{7}{13} + 1\frac{1}{9} + \frac{20}{23} + \dots \text{ is}$$

- (a)  $\frac{20}{5n^2+3}$       (b)  $\frac{20}{5n-3}$       (c)  $20(5n+3)$       (d)  $\frac{20}{5n+3}$

6. The number of subsets of a set containing  $n$  distinct object is

- (a)  ${}^nC_1 + {}^nC_2 + {}^nC_3 + {}^nC_4 + \dots + {}^nC_n$       (b)  ${}^nC_0 + {}^nC_1 + {}^nC_2 + \dots + {}^nC_n$   
 (c)  $2^n - 1$       (d)  $2^n + 1$

7. In the binomial expansion of  $(a - b)^n$ ,  $n \geq 5$ , the sum of the 5th and 6th terms is zero. Then  $\frac{a}{b}$  equals

- (a)  $\frac{n-5}{6}$       (b)  $\frac{n-4}{5}$       (c)  $\frac{5}{n-4}$       (d)  $\frac{6}{n-5}$

**JITENDRA MISHRA ACADEMY (JMA), INDORE (India's No. 1 Institute for All India MCA Entrance Training)**

JMA HOUSE - 7, CHANDRALOK COLONY, INDORE (M.P.) Ph.: 0731 - 4236844 / 2566799 Visit us : [www.jmaindore.com](http://www.jmaindore.com)

8. If  $\Delta = \begin{vmatrix} a & c & b \\ c & 0 & a \\ b & a & 0 \end{vmatrix}$ , then  $\Delta =$

- (a)  $\begin{vmatrix} b^2+c^2 & 1 & 1 \\ 1 & a^2+b^2 & 1 \\ 1 & 1 & a^2+b^2 \end{vmatrix}$       (b)  $\begin{vmatrix} ab+bc & bc & ab \\ ab & bc+ca & bc \\ ca & ab & ca+ab \end{vmatrix}$   
 (c)  $\begin{vmatrix} b^2+c^2 & a^2 & a^2 \\ b^2 & c^2+a^2 & b^2 \\ c^2 & c^2 & c^2+b^2 \end{vmatrix}$       (d) 0

9. If  $A = \begin{bmatrix} -1 & 2 \\ 3 & 1 \end{bmatrix} - \begin{bmatrix} -4 & 1 \\ 7 & 7 \end{bmatrix}$ , then  $A$  is equals to :

- (a)  $\begin{bmatrix} 1 & 1 \\ -2 & 3 \end{bmatrix}$       (b)  $\begin{bmatrix} -1 & 1 \\ 2 & 3 \end{bmatrix}$       (c)  $\begin{bmatrix} 1 & 1 \\ 2 & 3 \end{bmatrix}$       (d)  $\begin{bmatrix} 1 & -1 \\ 2 & 3 \end{bmatrix}$

**JITENDRA MISHRA ACADEMY (JMA), INDORE (India's No. 1 Institute for All India MCA Entrance Training)**

JMA HOUSE - 7, CHANDRALOK COLONY, INDORE (M.P.) Ph.: 0731 - 4236844 / 2566799 Visit us : [www.jmaindore.com](http://www.jmaindore.com)

10. The equations :

$$3x + y + 2z = k$$

$$x + 2y + 3z = l$$

$$2x + 3y + z = m$$

- (a) have a unique solution      (b) are inconstant  
 (c) have a trivial solution      (d) have infinitely many non-trivial solutions

11. If  $A = \{0, 1, 3, 4\}$ ,  $B = \left\{1, \frac{1}{3}, \frac{1}{5}, \frac{1}{7}\right\}$  and  $C = \left\{\frac{1}{5}, 3\right\}$ , then the value of  $(A \cup B) \cup C$  is equal to

- (a)  $\left\{0, 1, 3, 5, \frac{1}{7}\right\}$  (b)  $\left\{0, 1, 3, \frac{1}{3}, \frac{1}{5}, \frac{1}{7}\right\}$   
 (c)  $\left\{0, 1, 3, 5, \frac{1}{3}, \frac{1}{5}, \frac{1}{7}\right\}$  (d)  $\left\{0, 3, \frac{1}{3}, \frac{1}{5}, \frac{1}{7}\right\}$

12. For all sets A, B and C, if  $A \subseteq B$  and  $B \subseteq C$  and  $C \subseteq A$ , then :

- (a)  $B = C$  (b)  $B \neq C$  (c)  $A = \emptyset$  (d)  $B = \emptyset$

**JITENDRA MISHRA ACADEMY (JMA), INDORE (India's No. 1 Institute for All India MCA Entrance Training)**

JMA HOUSE - 7, CHANDRALOK COLONY, INDORE (M.P.) Ph.: 0731 - 4236844 / 2566799 Visit us : [www.jmaindore.com](http://www.jmaindore.com)

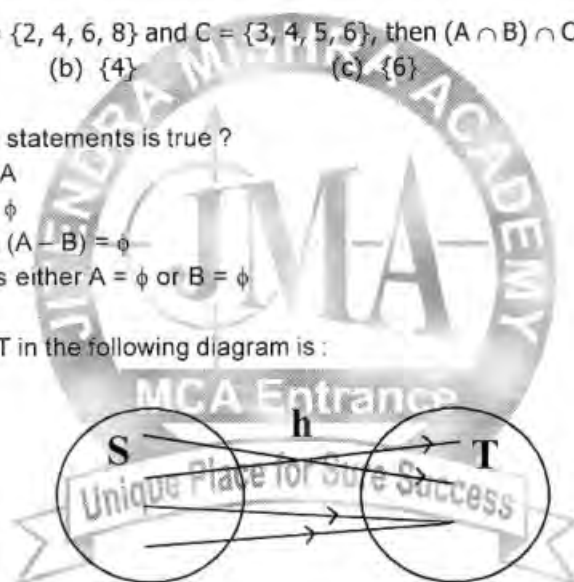
13. If  $A = \{1, 2, 3, 4\}$ ,  $B = \{2, 4, 6, 8\}$  and  $C = \{3, 4, 5, 6\}$ , then  $(A \cap B) \cap C$  is equal to

- (a)  $\{2\}$  (b)  $\{4\}$  (c)  $\{6\}$  (d)  $\emptyset$

14. Which of the following statements is true ?

- (a)  $A \subset B \Rightarrow A \cup B = A$   
 (b)  $A \subset B \Rightarrow A \cap B = \emptyset$   
 (c) If  $A \subset B$ , then  $A \cap (A - B) = \emptyset$   
 (d)  $A \cap B = \emptyset$ , implies either  $A = \emptyset$  or  $B = \emptyset$

15. The mapping  $h : S \rightarrow T$  in the following diagram is :



- (a) many- one into (b) One - one into  
 (c) One - one onto (d) Many - one onto

**JITENDRA MISHRA ACADEMY (JMA), INDORE (India's No. 1 Institute for All India MCA Entrance Training)**

JMA HOUSE - 7, CHANDRALOK COLONY, INDORE (M.P.) Ph.: 0731 - 4236844 / 2566799 Visit us : [www.jmaindore.com](http://www.jmaindore.com)

16. If  $A = \{-2, -1, 0, 1, 2\}$  and the function  $f : A \rightarrow R$  be defined by the formula  $f(x) = x^2 + 1$ , then the range off is :

- (a)  $\{0, 5, 2, 1\}$  (b)  $\{5, -2, 1\}$  (c)  $\{0, 5, 2\}$  (d)  $\{0, 2, 1\}$

17. If A, B, C be sets and  $R \subseteq A \times B$  and  $S \subseteq B \times C$ , then the value of  $(SOR)^{-1}$  is equal to

- (a)  $R^{-1} \circ S^{-1}$  (b)  $R^{-1} \circ A^{-1}$  (c)  $S^{-1} \circ B^{-1}$  (d)  $A^{-1} \circ C^{-1}$

18. If A be the set of all triangles in a plane and R be the relation in A defined by  $x R y$  if and only if x is congruent to y,  $x \in A, y \in A$ , then R is an :

- (a) Reflexive relation (b) Anti-symmetric relation  
 (c) Transitive relation (d) Equivalence relation

**JITENDRA MISHRA ACADEMY (JMA), INDORE (India's No. 1 Institute for All India MCA Entrance Training)**

JMA HOUSE - 7, CHANDRALOK COLONY, INDORE (M.P.) Ph.: 0731 - 4236844 / 2566799 Visit us : [www.jmaindore.com](http://www.jmaindore.com)

19. If  $m$  is the mid point of the side  $BC$  of the triangle  $ABC$ , then :
- (a)  $AB^2 + AC^2 = AM^2 + BM^2$  (b)  $AB^2 + AC^2 = 2AM^2 + 2BM^2$   
 (c)  $AM^2 + MB^2 = 2AC^2$  (d)  $2AB^2 + 2AC^2 = AM^2 + BM^2$
20. A straight line passes through the point  $(x_1, y_1)$ . If its portion intercepted between the axes is divided at  $(x_1, y_1)$  in the ratio  $m : n$ , then its equation is
- (a)  $mx x_1 + ny y_1 = m + n$  (b)  $nx x_1 + my y_1 = m + n$   
 (c)  $\frac{mx}{x_1} + \frac{ny}{y_1} = m + n$  (d)  $\frac{nx}{x_1} + \frac{my}{y_1} = m + n$
21. The equation of the straight line passing through the point of intersection of  $4x + 3y - 8 = 0$  and  $x + y - 1 = 0$ , and the point  $(-2, 5)$  is :
- (a)  $9x + 7y - 17 = 0$  (b)  $4x + 5y + 6 = 0$  (c)  $3x - 2y + 19 = 0$  (d)  $3x - 4y - 7 = 0$

**JITENDRA MISHRA ACADEMY (JMA), INDORE (India's No. 1 Institute for All India MCA Entrance Training)**

JMA HOUSE - 7, CHANDRALOK COLONY, INDORE (M.P.) Ph.: 0731 - 4236844 / 2566799 Visit us : [www.jmaindore.com](http://www.jmaindore.com)

22. The equation of circle passing through  $(-1, 2)$  and concentric with  $x^2 + y^2 - 2x - 4y - 4 = 0$  is :
- (a)  $x^2 + y^2 - 2x - 4y + 8 = 0$  (b)  $x^2 + y^2 - 2x + 4 = 0$   
 (c)  $x^2 + y^2 - 2x - 4y + 1 = 0$  (d)  $x^2 + y^2 - 2x - 2y + 2 = 0$
23. The angle between the two straight line represented by the equation  $6x^2 + 5xy - 4y^2 + 7x + 13y - 3 = 0$  is :
- (a)  $\tan^{-1} \frac{3}{5}$  (b)  $\tan^{-1} \frac{5}{3}$  (c)  $\tan^{-1} \frac{2}{11}$  (d)  $\tan^{-1} \frac{11}{2}$
24. The focal distance of a point on the parabola  $y^2 = 8x$  is 4. Its ordinates are :
- (a)  $\pm 1$  (b)  $\pm 2$  (c)  $\pm 3$  (d)  $\pm 4$

**JITENDRA MISHRA ACADEMY (JMA), INDORE (India's No. 1 Institute for All India MCA Entrance Training)**

JMA HOUSE - 7, CHANDRALOK COLONY, INDORE (M.P.) Ph.: 0731 - 4236844 / 2566799 Visit us : [www.jmaindore.com](http://www.jmaindore.com)

25. The line  $y = mx + c$  touches the ellipse  $\frac{x^2}{a^2} + \frac{y^2}{b^2} = 1$ , if  $c$  is equal to
- (a)  $\pm \sqrt{a^2 - m^2 b^2}$  (b)  $\pm \sqrt{a^2 m^2 + b^2}$  (c)  $\pm \sqrt{a^2 + m^2 b^2}$  (d)  $\pm \sqrt{a^2 - m^2 - b^2}$
26. The line  $x \cos \theta + y \sin \theta = p$  will touch the hyperbola  $\frac{x^2}{a^2} - \frac{y^2}{b^2} = 1$  if :
- (a)  $p^2 = a^2 \cos^2 \theta - b^2 \sin^2 \theta$  (b)  $p^2 = a^2 \sin^2 \theta - b^2 \cos^2 \theta$   
 (c)  $p^2 = a^2 \cos^2 \theta + b^2 \sin^2 \theta$  (d)  $p^2 = a^2 \sin^2 \theta + b^2 \cos^2 \theta$
27. If  $x^1, x^2, x^3$  as well as  $y^1, y^2, y^3$  are in A.P., then the points  $(x_1, y_1)$ ,  $(x_2, y_2)$  and  $(x_3, y_3)$  are
- (a) conyclic (b) collinear  
 (c) Three vertices of a parallelogram (d) The vertices of a triangle

**JITENDRA MISHRA ACADEMY (JMA), INDORE (India's No. 1 Institute for All India MCA Entrance Training)**

JMA HOUSE - 7, CHANDRALOK COLONY, INDORE (M.P.) Ph.: 0731 - 4236844 / 2566799 Visit us : [www.jmaindore.com](http://www.jmaindore.com)

28. If  $bx + ay = ab$  touches the circle  $x^2 + y^2 = r^2$ , then the point  $\left(\frac{1}{a}, \frac{1}{b}\right)$  lies on
- (a) a circle                      (b) an ellipse                      (c) a straight line                      (d) a parabola

29. The  $\lim_{x \rightarrow 0} [(1+x)^n - 1]$  is equal to
- (a)  $\frac{1}{n}$                       (b)  $-\frac{1}{n}$                       (c)  $n^2$                       (d)  $n$

30. The function  $f(x) = \frac{x-1}{1+e^{1/(x-1)}}$ ,  $x \neq 0$  is continuous for  $x = 1$  when  $f(1)$  equals :
- (a)  $-1$                       (b)  $0$                       (c)  $1$                       (d)  $2$

**JITENDRA MISHRA ACADEMY (JMA), INDORE (India's No. 1 Institute for All India MCA Entrance Training)**  
 JMA HOUSE - 7, CHANDRALOK COLONY, INDORE (M.P.) Ph.: 0731 - 4236844 / 2566799 Visit us : [www.jmaindore.com](http://www.jmaindore.com)

31. If  $\sin(x+y) = xy$ , then  $\frac{dy}{dx}$  is equal to
- (a)  $\frac{x + \cos(x+y)}{\sin(x+y) + y}$                       (b)  $\frac{x - \cos(x+y)}{\cos(x+y) - y}$                       (c)  $\frac{x + \sin(x+y)}{\cos(x+y) + y}$                       (d)  $\frac{x + \sin(x+y)}{\cos(x+y) - y}$

32. The equation of tangent to the curve  $y^2 = 2x^3 - x^2 + 3$  at the point  $(1, 4)$ , is
- (a)  $x = 2y$                       (b)  $x = 4y$                       (c)  $y = 2x$                       (d)  $y = 4x$

33. Let  $f'(c) = 0 = f''(c) = \dots = f^{(n-1)}(c)$  and  $f^{(n)}(c) \neq 0$ . If  $n$  is even, then
- (a)  $f(c)$  is not an extreme value  
 (b)  $f(c)$  is a minimum value of if  $f^{(n)}(c) = 0$   
 (c)  $f(c)$  is a minimum value of if  $f^{(n)}(c) > 0$   
 (d)  $f(c)$  is a maximum value of if  $f^{(n)}(c) > 0$

**JITENDRA MISHRA ACADEMY (JMA), INDORE (India's No. 1 Institute for All India MCA Entrance Training)**  
 JMA HOUSE - 7, CHANDRALOK COLONY, INDORE (M.P.) Ph.: 0731 - 4236844 / 2566799 Visit us : [www.jmaindore.com](http://www.jmaindore.com)

34. The value of  $\int e^x \left( \frac{1+x \log x}{x} \right) dx$  is equal to
- (a)  $xe^x$                       (b)  $e^x \log x$                       (c)  $\frac{e^x}{x}$                       (d)  $e^x + \log x$

35. The value of  $\int_0^{\pi/2} \log(\tan x) dx$  is equal to
- (a)  $0$                       (b)  $\frac{x}{4}$                       (c)  $\frac{x}{2}$                       (d)  $\pi$

36. The value of  $\int \frac{1}{e^x - 1} dx$  is equal to

- (a)  $\log(e^x - 1) - x \log x$  (b)  $\log(e^x + x) + x \log x$   
 (c)  $\log(e^x - 1) - x$  (d)  $\log(e^x - 1) + x$

37. The volume and surface of a spherical cap of height  $h$  cut off from sphere of radius  $r$  are :

- (a)  $\frac{2}{3}h^2\left(r - \frac{1}{3}h\right); \frac{2}{3}rh$  (b)  $\frac{2}{3}h^2\left(r - \frac{1}{3}h\right); 2rh$   
 (c)  $\frac{1}{3}h^2\left(r - \frac{1}{3}h\right); \frac{1}{3}rh$  (d)  $\frac{1}{2}h^2\left(r - \frac{1}{3}h\right); \frac{1}{2}rh$

**JITENDRA MISHRA ACADEMY (JMA), INDORE (India's No. 1 Institute for All India MCA Entrance Training)**

JMA HOUSE - 7, CHANDRALOK COLONY, INDORE (M.P.) Ph.: 0731 - 4236844 / 2566799 Visit us : [www.jmaindore.com](http://www.jmaindore.com)

38. If  $f(x)$  and all its derivatives upto the  $(n - 1)$ th order be continuous in  $|a, a + h|$  and  $f^{(n)}(x)$  exists in  $|a, a + h|$ , then there exists a real number  $\theta, 0 < \theta < 1$ , such that

- (a)  $f(a + h) = f(a) + h f'(a) + \frac{h^2}{2!} f''(a) + \dots + \frac{h^{n-1}}{(n-1)!} f^{(n-1)}(a) + \frac{h^n}{(n-1)!} (1 - \theta)^{n-1} f^{(n)}(a + \theta h)$   
 (b)  $f(a + h) = f(a) + h f'(a) + \frac{h^2}{2!} f''(a) + \dots + \frac{h^{n-1}}{(n-1)!} f^{(n-1)}(a) + \frac{h^n}{n!} f^{(n)}(a + \theta h)$   
 (c) either (a) or (b)  
 (d) Neither (a) nor (b)

39. The order of differential equation is defined as :

- (a) the power of highest derivative in the equation  
 (b) the power of lowest derivative in the equation  
 (c) the order of lowest derivative occurring in the equation  
 (d) the order of highest derivative occurring in the equation

40. The degree of the differential equation

$$\left[ 3 + 4 \left( \frac{dy}{dx} \right)^2 + 5 \left( \frac{d^2y}{dx^2} \right)^2 \right]^{2/3} = \left( \frac{d^3y}{dx^3} \right)^2 \text{ is}$$

- (A) 6 (B) 5 (C) 4 (D) 3

**JITENDRA MISHRA ACADEMY (JMA), INDORE (India's No. 1 Institute for All India MCA Entrance Training)**

JMA HOUSE - 7, CHANDRALOK COLONY, INDORE (M.P.) Ph.: 0731 - 4236844 / 2566799 Visit us : [www.jmaindore.com](http://www.jmaindore.com)

41. The auxiliary equation of the differential equation  $3 \frac{d^3y}{dx^3} + 4 \frac{d^2y}{dx^2} - 3y = e^x + \sin^{-1} x$  is

- (a)  $3 \frac{d^3y}{dx^3} + 4 \frac{d^2y}{dx^2} - 3y = e^x$  (b)  $3 \frac{d^3y}{dx^3} + 4 \frac{d^2y}{dx^2} - 3y = \sin^{-1} x$   
 (c)  $3 \frac{d^3y}{dx^3} + 4 \frac{d^2y}{dx^2} - 3y = 0$  (d)  $3 \frac{d^3y}{dx^3} + 4 \frac{d^2y}{dx^2} - 3y = e^x \sin^{-1} x$

42. The general solution of the linear differential equation

$$a_0 \frac{d^n y}{dx^n} + a_1 \frac{d^{n-1} y}{dx^{n-1}} + a_2 \frac{d^{n-2} y}{dx^{n-2}} + \dots + a_{n-1} \frac{dy}{dx} + ay = x \text{ is given by}$$

- (a)  $y =$  complementary function (C. F.)  
 (b)  $y =$  particular integral (P.I.)  
 (c)  $y =$  C. F.  $\times$  P.I.  
 (d)  $y =$  C. F. + P.I.

43. The particular integral of the differential equation

$$\frac{d^2 y}{dx^2} - y \frac{dy}{dx} + 13y = 24e^{2x} \sin 3x \text{ is given by :}$$

- (a)  $-8 e^{2x} \sin 3x$       (b)  $-8 e^{2x} \cos 3x$       (c)  $-4 e^{2x} \cos 3x$       (d)  $-4 e^{2x} \sin 3x$

44. The solution of  $\frac{dy}{dx} = \frac{xy+y}{xy+x}$  is given by

- (a)  $cy = xe^{y-x}$       (b)  $cx = ye^{y-x}$       (c)  $cy = xe^{x-y}$       (d)  $cx = ye^{x-y}$

**JITENDRA MISHRA ACADEMY (JMA), INDORE (India's No. 1 Institute for All India MCA Entrance Training)**

JMA HOUSE - 7, CHANDRALOK COLONY, INDORE (M.P.) Ph.: 0731 - 4236844 / 2566799 Visit us : [www.jmaindore.com](http://www.jmaindore.com)

45. Which one of the following differential equations is linear :

(a)  $4y \left( \frac{dy}{dx} \right)^2 + \frac{d^2 y}{dx^2} = \left( \frac{dy}{dx} \right)^4 + 3$       (b)  $\left( \frac{d^3 y}{dx^3} \right)^2 + 2 \left( \frac{dy}{dx} \right)^4 + yx = 0$

(c)  $(2xy + 2x^3) \frac{dy}{dx} y^2 + 6x^2 y = 0$       (d)  $\frac{d^2 y}{dx^2} + x^2 \frac{dy}{dx} - y = 0$

46. Which one of the following provides a general solution of the differential equation  $\sec^2 \tan y \, dx + \sec^2 y \, \tan x \, dy = 0$  ?

- (a)  $\tan x \tan y = c$       (b)  $\tan x + \tan y = c$   
 (c)  $\sec x \sec y = c$       (d)  $\sec x + \sec y = c$

47. Let the vectors  $\vec{a}$ ,  $\vec{b}$ ,  $\vec{c}$  be the position vectors of the vertices P, Q, R of a triangle respectively. Which of the following represents the area of the triangle ?

- (A)  $\frac{1}{2} |\vec{a} \times \vec{b}|$       (B)  $\frac{1}{2} |\vec{b} \times \vec{c}|$   
 (C)  $\frac{1}{2} |\vec{c} \times \vec{a}|$       (D)  $\frac{1}{2} |\vec{a} \times \vec{b} + \vec{b} \times \vec{c} + \vec{c} \times \vec{a}|$

**JITENDRA MISHRA ACADEMY (JMA), INDORE (India's No. 1 Institute for All India MCA Entrance Training)**

JMA HOUSE - 7, CHANDRALOK COLONY, INDORE (M.P.) Ph.: 0731 - 4236844 / 2566799 Visit us : [www.jmaindore.com](http://www.jmaindore.com)

48. If ABC is a triangle, then the value of  $\overline{AB} + \overline{BC} + \overline{CA}$  is equal to

- (a) 0      (b) 1      (c) 2      (d) 3

49. The value of  $\lambda$  so that the unit vector  $\frac{2\hat{i} + \lambda\hat{j} + \hat{k}}{\sqrt{5 + \lambda^2}}$  and  $\frac{\hat{i} - 2\hat{j} + 3\hat{k}}{\sqrt{14}}$  are orthogonal is

- (a)  $\frac{3}{7}$                       (b)  $\frac{5}{2}$                       (c)  $\frac{2}{5}$                       (d)  $\frac{2}{7}$

50. The vector  $(\vec{a} - \vec{b}) \times (\vec{a} + \vec{b})$  is equal to

- (a)  $\frac{1}{2}(\vec{a} \times \vec{b})$                       (b)  $\vec{a} + \vec{b}$                       (c)  $2(\vec{a} \times \vec{b})$                       (d)  $2(\vec{a} + \vec{b})$

**JITENDRA MISHRA ACADEMY (JMA), INDORE (India's No. 1 Institute for All India MCA Entrance Training)**

JMA HOUSE - 7, CHANDRALOK COLONY, INDORE (M.P.) Ph.: 0731 - 4236844 / 2566799 Visit us : [www.jmaindore.com](http://www.jmaindore.com)

51. If  $\vec{a}, \vec{b}, \vec{c}$  are non coplanar vectors and  $\vec{d} = \lambda\vec{a} + \mu\vec{b} + \gamma\vec{c}$ , then  $\lambda$  is equal to

- (a)  $\frac{[\vec{a} \vec{b} \vec{c}]}{[\vec{b} \vec{a} \vec{c}]}$                       (b)  $\frac{[\vec{b} \vec{c} \vec{d}]}{[\vec{b} \vec{c} \vec{a}]}$                       (c)  $\frac{[\vec{b} \vec{d} \vec{c}]}{[\vec{a} \vec{b} \vec{c}]}$                       (d)  $\frac{[\vec{c} \vec{b} \vec{d}]}{[\vec{a} \vec{b} \vec{c}]}$

52. The position vectors of the point A, B, C and D are  $3\hat{i} - 2\hat{j} - \hat{k}$ ,  $3\hat{i} - 2\hat{j} - \hat{k}$ ,  $2\hat{i} + 3\hat{j} - 4\hat{k}$ ,  $-\hat{i} + \hat{j} + 2\hat{k}$  and  $4\hat{i} + 5\hat{j} + \lambda\hat{k}$ . It is known that these points are coplanar, then  $\lambda$  is equal to :

- (a)  $-\frac{146}{17}$                       (b)  $-\frac{137}{17}$                       (c)  $-\frac{154}{17}$                       (d)  $-\frac{164}{17}$

53. The position vectors  $60\hat{i} + 3\hat{j}$ ,  $40\hat{i} - 8\hat{j}$ ,  $a\hat{i} - 52\hat{j}$  are collinear if

- (a) 20                      (b) -20                      (c) 40                      (d) -40

**JITENDRA MISHRA ACADEMY (JMA), INDORE (India's No. 1 Institute for All India MCA Entrance Training)**

JMA HOUSE - 7, CHANDRALOK COLONY, INDORE (M.P.) Ph.: 0731 - 4236844 / 2566799 Visit us : [www.jmaindore.com](http://www.jmaindore.com)

54. The value of  $\vec{a} \times (\vec{b} \times \vec{c})$  is equal to

- (a)  $(\vec{a} \cdot \vec{b})\vec{a} + (\vec{a} \cdot \vec{c})\vec{c}$                       (b)  $(\vec{b} \cdot \vec{c})\vec{a} - (\vec{b} \cdot \vec{a})\vec{c}$   
(c)  $(\vec{a} \cdot \vec{c})\vec{b} - (\vec{a} \cdot \vec{b})\vec{c}$                       (d)  $(\vec{c} \cdot \vec{a})\vec{a} - (\vec{b} \cdot \vec{a})\vec{c}$

55. The shortest distance between two straight lines whose vector equations are

$$\vec{r} = \hat{i} + \hat{j} + \lambda(2\hat{i} - \hat{j} + \hat{k}) \text{ and}$$

$$\vec{r} = 2\hat{i} + \hat{j} - \hat{k} + \mu(3\hat{i} - 5\hat{j} + 2\hat{k}) \text{ is :}$$

- (a)  $\frac{5}{\sqrt{59}}$                       (b)  $\frac{10}{\sqrt{59}}$                       (c)  $\frac{\sqrt{59}}{5}$                       (d)  $\frac{\sqrt{59}}{10}$

**JITENDRA MISHRA ACADEMY (JMA), INDORE (India's No. 1 Institute for All India MCA Entrance Training)**

JMA HOUSE - 7, CHANDRALOK COLONY, INDORE (M.P.) Ph.: 0731 - 4236844 / 2566799 Visit us : [www.jmaindore.com](http://www.jmaindore.com)



56. The angle between straight line

$$\vec{r} = (\hat{i} + 2\hat{j} - \hat{k}) + \lambda(\hat{i} - \hat{j} + \hat{k})$$

and plane  $\vec{r} \cdot (2\hat{i} - \hat{j} + \hat{k}) = 4$  is

- (a)  $\sin^{-1}\left(\frac{2\sqrt{2}}{3}\right)$       (b)  $\cos^{-1}\left(\frac{2\sqrt{2}}{3}\right)$       (c)  $\sin^{-1}\left(\frac{3\sqrt{2}}{2}\right)$       (d)  $\cos^{-1}\left(\frac{3\sqrt{2}}{2}\right)$

57. The value of  $\frac{\tan A + \sec A - 1}{\tan A - \sec A + 1}$  is equal to

- (a)  $\frac{1 + \cos A}{\sin A}$       (b)  $\frac{1 - \cos A}{\sin A}$       (c)  $\frac{1 + \sin A}{\cos A}$       (d)  $\frac{1 - \sin A}{\cos A}$

58. The value of  $2 \sin^2 \alpha + 4 \cos(\alpha + \beta) \sin \alpha \sin \beta + \cos 2(\alpha + \beta)$  is equal to

- (a)  $\sin 2\alpha$       (b)  $\cos 2\alpha$       (c)  $1 + \sin \alpha$       (d)  $1 + \cos \alpha$

**JITENDRA MISHRA ACADEMY (JMA), INDORE (India's No. 1 Institute for All India MCA Entrance Training)**

JMA HOUSE - 7, CHANDRALOK COLONY, INDORE (M.P.) Ph.: 0731 - 4236844 / 2566799 Visit us : [www.jmaindore.com](http://www.jmaindore.com)

59. The value of  $\theta$  in the trigonometric equation  $\sin^2 \theta - \cos \theta = \frac{1}{4}$ , in the interval  $0 \leq \theta \leq 2\pi$  are

- (a)  $\frac{\pi}{4}, \frac{5\pi}{4}$       (b)  $\frac{3\pi}{4}, \pi$       (c)  $\frac{2\pi}{3}, \frac{4\pi}{3}$       (d)  $\frac{\pi}{3}, \frac{5\pi}{3}$

60. If  $\sin A = \sin B$  and  $\cos a = \cos B$ , then the values of the A in terms of B is

- (a)  $A = 2n\pi - B$       (b)  $A = 2n\pi + B$       (c)  $A = n\pi - B$       (d)  $A = n\pi + B$

61. In any triangle ABC, the value of  $\frac{b^2 - c^2}{a^2}$  is equal to

- (a)  $\frac{\sin(B - C)}{\sin(B + C)}$       (b)  $\frac{\sin(B + C)}{\sin(B - C)}$       (c)  $\frac{\cos(B - C)}{\cos(B + C)}$       (d)  $\frac{\cos(B + C)}{\cos(B - C)}$

**JITENDRA MISHRA ACADEMY (JMA), INDORE (India's No. 1 Institute for All India MCA Entrance Training)**

JMA HOUSE - 7, CHANDRALOK COLONY, INDORE (M.P.) Ph.: 0731 - 4236844 / 2566799 Visit us : [www.jmaindore.com](http://www.jmaindore.com)

62. If  $p_1, p_2, p_3$  are the altitudes of a triangle from the vertices A, B, C and  $\Delta$ , the area of the triangle, then

value of  $\frac{1}{p_1} + \frac{1}{p_2} + \frac{1}{p_3}$  is

- (a)  $\frac{ab}{(a+b+c)\Delta} \cos^2 C$       (b)  $\frac{ab}{(a+b+c)\Delta} \sin^2 C$       (c)  $\frac{2ab}{(a+b+c)\Delta} \cos^2 \frac{1}{2}C$       (d)  $\frac{2ab}{(a+b+c)\Delta} \sin^2 \frac{1}{2}C$

63. If in a  $\Delta ABC$ ,  $\angle C = 90^\circ$ ,  $a = 3$ ,  $b = 4$  and D is a point on AB so that  $\angle BCD = 30^\circ$ , then length CD is equal to

- (a)  $\frac{3}{7}(3\sqrt{2} + 5)$       (b)  $\frac{5}{7}(3\sqrt{2} - 5)$       (c)  $\frac{8}{13}(4\sqrt{3} + 3)$       (d)  $\frac{8}{13}(4\sqrt{3} - 3)$

64. If  $a = 5$ ,  $b = 4$  and  $\cos(A - B) = \frac{31}{32}$ , then the third side  $C$  will be :
- (a) 7 (b) 6 (c) 5 (d) 4
65. A person standing on the bank of a river observes that the angle subtended by a tree on the opposite bank is  $60^\circ$ , when he retires 40 feet from the bank the find the angle to be  $30^\circ$ . The height of the tree and the breadth of the river are :
- (a)  $20\sqrt{3}, 20$  (b)  $10\sqrt{3}, 10$  (c)  $20\sqrt{3}, 15$  (d)  $10\sqrt{3}, 15$
66. If  $\sin^{-1}\left(\frac{1}{3}\right) + \sin^{-1}\left(\frac{2}{3}\right) = \sin^{-1}x$ , then  $x$  is equal to
- (a)  $\frac{4 + \sqrt{5}}{9}$  (b)  $\frac{4\sqrt{2} + \sqrt{5}}{9}$  (c)  $\frac{\sqrt{3} + 1}{6}$  (d) 1

**JITENDRA MISHRA ACADEMY (JMA), INDORE (India's No. 1 Institute for All India MCA Entrance Training)**

JMA HOUSE - 7, CHANDRALOK COLONY, INDORE (M.P.) Ph.: 0731 - 4236844 / 2566799 Visit us : [www.jmaindore.com](http://www.jmaindore.com)

67. The chance of throwing an ace in the first only of two successive thrown with an ordinary die is :
- (a)  $\frac{1}{6}$  (b)  $\frac{5}{36}$  (c)  $\frac{1}{36}$  (d)  $\frac{25}{36}$
68. There are six letters and six addressed envelopes. What is the probability that all the letters are not dispatched in the right envelopes ?
- (a)  $\frac{5}{7}$  (b)  $\frac{6}{7}$  (c)  $\frac{713}{720}$  (d)  $\frac{719}{720}$
69. The average of  $n$  numbers  $x_1, x_2, x_3, \dots, x_n$  is  $A$ . If  $x_n$  is replaced by  $(n + 1)x_n$ , then the new average is
- (A)  $\frac{(n-1)A + nx_n}{n}$  (B)  $\frac{nA + (n+1)A + x_n}{n}$  (C)  $\frac{(n+1)A + nx_n}{n}$  (D)  $A + x_n$
70. Secondary data :
- (a) should be used after careful scrutiny  
 (b) should be used without any scrutiny  
 (c) should be used after finding out its sources  
 (d) should never be used

**JITENDRA MISHRA ACADEMY (JMA), INDORE (India's No. 1 Institute for All India MCA Entrance Training)**

JMA HOUSE - 7, CHANDRALOK COLONY, INDORE (M.P.) Ph.: 0731 - 4236844 / 2566799 Visit us : [www.jmaindore.com](http://www.jmaindore.com)

71. How many classes should be taken while forming a grouped frequency a grouped frequency distribution
- (a) Five (b) less than five  
 (c) Between five and ten (d) Any number
72. A frequency distribution can be presented graphically by a :
- (a) pie diagram (b) histogram  
 (c) pictogram (d) cartogram

73. Which one of the following is not the measure of dispersions :

- (a) Range (b) Average deviation  
(c) Standard deviation (d) Complex number

74. The coefficient of skewness is equal to :

- (a)  $\frac{\text{Mean} - \text{Mode}}{\text{Standard deviation}}$  (b)  $\frac{\text{Mean} - \text{Median}}{\text{Standard deviation}}$   
(c)  $\frac{\text{Median} + \text{Mean}}{\text{Standard deviation}}$  (d)  $\frac{2(\text{Mean} + \text{Mode})}{\text{Standard deviation}}$

75. Normal curve  $y = y_0 e^{-x^2/2\sigma^2}$  is

- (a) Symmetrical about the x-axis  
(b) Symmetrical about the y-axis. The mean, median and mode coincide at the origin  
(c) It is not a unimodal curve  
(d) The points of inflection of normal curve are equidistant for the mean

**JITENDRA MISHRA ACADEMY (JMA), INDORE (India's No. 1 Institute for All India MCA Entrance Training)**

JMA HOUSE - 7, CHANDRALOK COLONY, INDORE (M.P.) Ph.: 0731 - 4236844 / 2566799 Visit us : [www.jmaindore.com](http://www.jmaindore.com)

76. For Poisson's distribution  $M \sigma_1 \sigma_2$  is :

- (a) < 1 (b) > 1 (c) 0 (d) 1

77. If  $8x - 10y + 66 = 0$  and  $40x - 18y = 214$  are two regression lines, then the coefficient of correlation between x and y is

- (a) 0.6 (b) 0.8 (c) 0.45 (d) 0.3

78. If  $r, \sigma_x, \sigma_y$  have their usual meaning and  $\theta$  is the acute angle between the two regression lines in case of two variables x and y, then the value of  $\tan \theta$  is equal to

- (a)  $\frac{1+r^2}{r} \frac{\sigma_x \sigma_y}{\sigma_x + \sigma_y}$  (b)  $\frac{1+r}{r} \frac{\sigma_x \sigma_y}{\sigma_x - \sigma_y}$  (c)  $\frac{1-r^2}{r} \frac{\sigma_x \sigma_y}{\sigma_x + \sigma_y}$  (d)  $\frac{1-r}{r} \frac{\sigma_x \sigma_y}{\sigma_x^2 - \sigma_y^2}$

79. In simplex method, when the number of non-zero variables is equal to the number constraints, the set of values is said to form a :

- (a) basic solution (b) feasible (c) iso-cost solution (d) optimal solution

**JITENDRA MISHRA ACADEMY (JMA), INDORE (India's No. 1 Institute for All India MCA Entrance Training)**

JMA HOUSE - 7, CHANDRALOK COLONY, INDORE (M.P.) Ph.: 0731 - 4236844 / 2566799 Visit us : [www.jmaindore.com](http://www.jmaindore.com)

80. Solve the following linear programming problems by Simplex method :

Maximize  $P = 3x + 7y + 6z$  Subject to

$$2x + 2y + 2z \leq 8$$

$$x + y \leq 3$$

$$x, y, z \geq 0$$

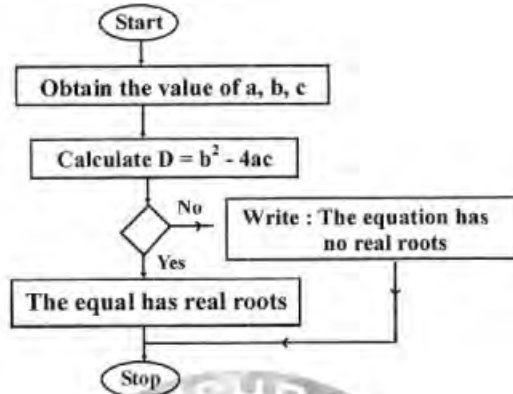
- (a) 21 (b) 23 (c) 25 (d) 27

81. What is symbolic form of the following statement ?

"If wind is from the North and there is halo round the moon, then there will be rains"

- (a)  $(p \vee q) \Rightarrow r$  (b)  $p \wedge q \Rightarrow r$  (c)  $p \Rightarrow q \vee r$  (d)  $q \Rightarrow p \vee r$

82. In the following flow chart for finding the roots of the quadratic equation  $ax^2 + bx + c = 0 \neq 0$ , what should be written in the empty box to make the flow chart correct ?



- (a) is  $D = 0$       (b) is  $D \geq 0$       (c) is  $D \leq 0$       (d) is  $D = 1$

**JITENDRA MISHRA ACADEMY (JMA), INDORE (India's No. 1 Institute for All India MCA Entrance Training)**

JMA HOUSE - 7, CHANDRALOK COLONY, INDORE (M.P.) Ph.: 0731 - 4236844 / 2566799 Visit us : [www.jmaindore.com](http://www.jmaindore.com)

83. The base of the binary number system is  
 (a) 2      (b) 16      (c) 8      (d) 10
84. A computer executes at a time :  
 (a) millions of instructions      (b) only ten instructions  
 (c) only two instructions      (d) only one instructions
85. The WHILE -DO control structure executes the loop at least :  
 (a) trice      (b) twice      (c) once      (d) None of these
86. ABCDE is a pentagon. Force acting on a particle are represented in magnitude and direction by  $\overline{AB}, \overline{BC}, \overline{CD}, 2\overline{DE}, \overline{AD}$  and  $\overline{AE}$ . Their resultant is given by  
 (a)  $\overline{AE}$       (b)  $2\overline{AE}$       (c)  $3\overline{AE}$       (D)  $4\overline{AE}$

**JITENDRA MISHRA ACADEMY (JMA), INDORE (India's No. 1 Institute for All India MCA Entrance Training)**

JMA HOUSE - 7, CHANDRALOK COLONY, INDORE (M.P.) Ph.: 0731 - 4236844 / 2566799 Visit us : [www.jmaindore.com](http://www.jmaindore.com)

87. If the line action of the resultant of two force P and Q divides the angle between them in the ratio 1 : 2, then the magnitude of the resultant is :  
 (a)  $\frac{P^2 - Q^2}{Q}$       (b)  $\frac{P^2 - Q^2}{P}$       (c)  $\frac{P^2 + Q^2}{Q}$       (d)  $\frac{P^2 + Q^2}{P}$
88. P and Q are two parallel forces acting at A and B respectively. If they interchange position, then the point of application of the resultant is displaced along AB through a distance :  
 (a)  $\frac{P+Q}{p-Q} AB$       (b)  $\frac{P-Q}{p+Q} AB$       (c)  $\frac{PQ}{P-Q} AB$       (d)  $\frac{PQ}{P+Q} AB$
89. Two parallel force not having the same line of action form a couple if they are :  
 (a) like and unequal      (b) like and equal      (c) unequal and unlike      (d) equal and unlike

90. Like parallel forces act at vertices A, B, C of a triangle and are proportional to the lengths BC, CA and AB respectively. The centre of the force is at the :  
 (a) centroid (b) circum centre (c) in centre (d) mid of one of the side
91. ABCD is a square. Equal forces P are acting along AB, CB, AD and DC. Their resultant is a force 2P acting.  
 (a) along DC (b) along AB (c) along AC (d) parallel to AB through the centre of square
92. If six forces of relative magnitudes 1, 2, 3, 4, 5 and 6 act along the sides of a regular hexagon taken in order, then the single equivalent force is or relative magnitude is :  
 (a) 1 (b) 3 (c) 5 (d) 6

**JITENDRA MISHRA ACADEMY (JMA), INDORE (India's No. 1 Institute for All India MCA Entrance Training)**

JMA HOUSE - 7, CHANDRALOK COLONY, INDORE (M.P.) Ph.: 0731 - 4236844 / 2566799 Visit us : [www.jmaindore.com](http://www.jmaindore.com)

93. To a man walking at 2 km/hr the rain appears to fall vertically, when he increases his speed to 4 km/hr it appear to meet him at angle of  $45^\circ$ . Then the actual velocity of the rain is  
 (a)  $2\sqrt{2}$  km / hr (b)  $2\sqrt{3}$  km / hr (c)  $\sqrt{2}$  km / hr (d)  $\sqrt{3}$  km / hr
94. Displacement has :  
 (a) magnitude only (b) sense only (c) both sense and magnitude (d) absolute quantity
95. Acceleratino of moving point is  
 (a) a negative quantity (b) a vector quantity (c) a single number (d) a positive number
96. The law of motion is a straight line being  $s = \frac{1}{2}vt$ , the accelaration is  
 (a) constant (b) variable (c) uniform (d) unknown

**JITENDRA MISHRA ACADEMY (JMA), INDORE (India's No. 1 Institute for All India MCA Entrance Training)**

JMA HOUSE - 7, CHANDRALOK COLONY, INDORE (M.P.) Ph.: 0731 - 4236844 / 2566799 Visit us : [www.jmaindore.com](http://www.jmaindore.com)

97. If a body is falling freely under gravity, then the acceleration :  
 (a) varies as the inverse of the distance travelled (b) varies as the square of the distance travelled (c) in uniform (d) is zero
98. The equation of motion  $p = ma$ , is due to  
 (a) Newton's first law of motion (b) Newton's second law of motion (c) Newton's third law of motion (d) Newton's first and second law of motion
99. The time of flight of a particle, which if projected with the velocity u in a direction making an angle  $\alpha$ , is given by  
 (a)  $2u \sin \alpha$  (b)  $2u \cos \alpha$  (c)  $\frac{2u \sin \alpha}{g}$  (d)  $\frac{2u \cos \alpha}{g}$

100. If a particle is projected with a velocity  $u$  at angle  $\alpha = 45^\circ$ , then :
- (a) the range is minimum  
 (b) the range is maximum  
 (c) the range is maximum and equals  $\frac{u^2}{2g}$   
 (d) the time to the highest point is  $\frac{u}{g\sqrt{2}}$

101. How many such letter-pairs are there in the world MONKEY having same no. of letters left between them as then have in the series ?
- (a) 4                                      (b) 3                                      (c) 2                                      (d) 1

102. Which is the 8th letter to the right of 15th letter your left in the following series ?  
 A B C D E F G H I J K L M N O P Q R S T U V W X Y Z
- (a) G                                      (b) H                                      (c) V                                      (d) W

**JITENDRA MISHRA ACADEMY (JMA), INDORE (India's No. 1 Institute for All India MCA Entrance Training)**

JMA HOUSE - 7, CHANDRALOK COLONY, INDORE (M.P.) Ph.: 0731 - 4236844 / 2566799 Visit us : [www.jmaindore.com](http://www.jmaindore.com)

103. If KEDGY is coded as EKDYG then how will LIGHT be coded ?
- (a) ILHTG                                      (b) ILGHT                                      (c) ILGTH                                      (d) THGIL
104. If Hand is coded as Leg, Leg is coded as car, car is coded as Nose, Nose is coded as Eyes, then by which part of body you walk on the earth ?
- (a) Nose                                      (b) Leg                                      (c) Hand                                      (d) Ear
105. As 'House' is related to the 'Mason', similarly 'Furniture' is related to what ?
- (a) Magicia                                      (b) Carpenter                                      (c) Sailor                                      (d) Tailor
106. Letters of which of the alternative answers when placed at the blank places one after another will complete the given letter-series ?
- a \_\_\_\_\_ bbc \_\_\_\_\_ aab \_\_\_\_\_ cca \_\_\_\_\_ bbcc
- (A) acba                                      (B) bacb                                      (C) caba                                      (D) abba

**JITENDRA MISHRA ACADEMY (JMA), INDORE (India's No. 1 Institute for All India MCA Entrance Training)**

JMA HOUSE - 7, CHANDRALOK COLONY, INDORE (M.P.) Ph.: 0731 - 4236844 / 2566799 Visit us : [www.jmaindore.com](http://www.jmaindore.com)

107. Ankita is at 25th place from one end in a group of 35 students. What is his position from the other end?
- (a) 10                                      (b) 11                                      (c) 12                                      (d) 15
108. Priya goes 25 km towards south from her fixed place. Then after turning to her right she goes 30 km and then again turning her left she goes 10 km. In the end after turning to her left she goes 30 km. How far is she from her starting point ?
- (a) 30 km                                      (b) 40 km                                      (c) 35 km                                      (d) 45 km
109. If 25 is related with 50 in the same way 29 is related to which of the following numbers ?
- (a) 11                                      (b) 18                                      (c) 92                                      (d) 22

110. In the following question two statements are given and four conclusions I, II, III and IV are given under them. The given statements may be contrary to the universal opinion, even then you have to assume them as true. Then decide which conclusion on the basis of given statement is logically valid.

Statements : All kings are beggars.

All beggars are monks.

Conclusions : I. All beggars are kings.

II. All kings are monks.

III. Some monks are beggars.

IV. No monk is beggar.

- (a) Only I                      (b) All come                      (c) only III and IV                      (d) only II and III come

111. Introducing Priyanka, Saroj says that her mother is the only daughter of my mother. How is Saroj related to Priyanka ?

- (a) Mother                      (b) Sister                      (c) Daughter                      (d) Aunt

112. If + means  $\times$ ,  $\times$  mean  $-$ ,  $-$  means  $\times$  and  $\times$  means  $+$ , then the values of  $48 + 16 - 4 - 2 + 8$  is :

- (a) 3                      (b) 6                      (c) 28                      (d) 112

**JITENDRA MISHRA ACADEMY (JMA), INDORE (India's No. 1 Institute for All India MCA Entrance Training)**

JMA HOUSE - 7, CHANDRALOK COLONY, INDORE (M.P.) Ph.: 0731 - 4236844 / 2566799 Visit us : [www.jmaindore.com](http://www.jmaindore.com)

113. Directions. In the following question a statement is followed by two assumptions. On the basis of the statement choose which is/are implicit.

Statement. "Please issue a circular to all the officers to assemble in the conference Hall for attending a notice." Director tells his secretary.

Assumptions. (I) All the officers will follow the instruction.

(II) Some officers may not attend the meeting.

- (a) Only assumption II is implicit  
(b) Only assumption I is implicit  
(c) Either I or II is implicit  
(d) Both II and I are implicit

114. Direction. In the following question, four alternatives are given. One of these four shows the most essential component. Hence find out the correct answer. In the desert it is necessary :

- (a) camel                      (b) sand                      (c) watermelon                      (d) wind

115. Four person P, Q, R and S read a book turn by turn. R reads just before P, Q reads after P but before S. Who does read first ?

- (a) P                      (b) Q                      (c) R                      (d) Q or R

**JITENDRA MISHRA ACADEMY (JMA), INDORE (India's No. 1 Institute for All India MCA Entrance Training)**

JMA HOUSE - 7, CHANDRALOK COLONY, INDORE (M.P.) Ph.: 0731 - 4236844 / 2566799 Visit us : [www.jmaindore.com](http://www.jmaindore.com)

116. As 'class' is related to 'student' in the same way "Train is related to "

- (a) Wheel                      (b) Rails                      (c) Passenger                      (d) Driver

117. The following letter series which one of the following alternative would replace the question - mark ?

BE, DG, FI, HK, ?

- (a) KM                      (b) KN                      (c) LO                      (d) JM

**Directions : (Q. 118-122) :** Data on the candidates, who took an examination in Social Sciences, Mathematics and Science are given below :

Passed in all Subjects	167	Failed in all Subjects	60
Failed in Social Sciences	175	Failed in Mathematics	199
Failed in Science	191	Passed in Social Sciences only	62
Passed in Mathematics only	48	Passed in Science only	52

Answer the following questions based on above data :

118. How many failed in one subject only ?  
 (A) 56 (B) 61 (C) 144 (D) 152
119. How many failed in two subjects only ?  
 (A) 56 (B) 61 (C) 144 (D) 162
120. How many failed in Social Sciences only ?  
 (A) 15 (B) 21 (C) 30 (D) 42
121. How many passed at least in one subject ?  
 (A) 167 (B) 304 (C) 390 (D) 450
122. How many passed in Mathematics and at least in one more subject ?  
 (A) 94 (B) 170 (C) 203 (D) 210

**JITENDRAMISHRAACADEMY (JMA), INDORE (India's No. 1 Institute for All India MCA Entrance Training)**

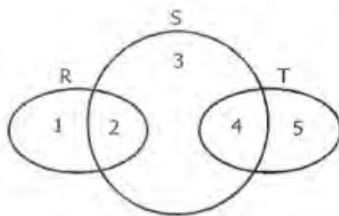
JMA HOUSE - 7, CHANDRALOK COLONY, INDORE (M.P.) Ph.: 0731 - 4236844 / 2566799 Visit us : [www.jmaindore.com](http://www.jmaindore.com)

123. A survey was conducted on a sample of 1000 persons with reference to their knowledge of English, French and German. The result is presented in the Venn Diagram. The ratio of the number of persons who do not know the three languages to those who know all the three languages is



- (A)  $\frac{1}{27}$  (B)  $\frac{1}{25}$  (C)  $\frac{7}{550}$  (D)  $\frac{175}{1000}$

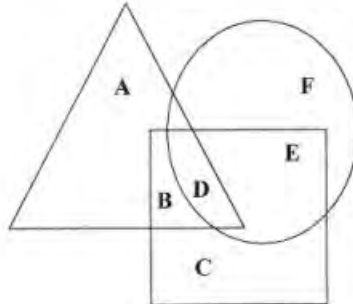
124. The following diagram, R represents businessmen, S represents rich men, T represents honest men. Which number will represent honest rich men ?



- (A) 2 (B) 3 (C) 5 (D) 4



125. In the given figure, the triangle represents, the square represents sports persons and circle represents coaches. The portion in the figure which represents girls who are sports persons but not coaches is labelled ?



- (a) A                      (b) B                      (c) D                      (d) E

**JITENDRA MISHRA ACADEMY (JMA), INDORE (India's No. 1 Institute for All India MCA Entrance Training)**

JMA HOUSE - 7, CHANDRALOK COLONY, INDORE (M.P.) Ph.: 0731 - 4236844 / 2566799 Visit us : [www.jmaindore.com](http://www.jmaindore.com)

**Directions : Q. 126 - 130.** In each of the question from 126 to 130, four alternatives are given. One of these four shows the most essential component. Hence find out the correct answer

126. In a desert it is necessary

- (a) camel                      (b) sand                      (c) watermelon                      (d) wind

127. In a man it is necessary

- (a) heart                      (b) Teeth                      (c) Fingers                      (d) Eyes

128. In a tree it is necessary -

- (a) Leaves                      (b) Fruits                      (c) Flowers                      (d) Roots

129. In a country it is necessary -

- (a) Prime Minister                      (b) Army                      (c) Area                      (d) Industry

130. The most essential for a hospital is :

- (a) Air                      (b) Nurse                      (c) Telephone                      (d) Doctor

**JITENDRA MISHRA ACADEMY (JMA), INDORE (India's No. 1 Institute for All India MCA Entrance Training)**

JMA HOUSE - 7, CHANDRALOK COLONY, INDORE (M.P.) Ph.: 0731 - 4236844 / 2566799 Visit us : [www.jmaindore.com](http://www.jmaindore.com)

**Direction Q. 131 - 132 :** In the question 131 and 132, choose the word, which is most nearly the same in meaning to the bold word and mark it.

131. His style quite **transparent** :

- (a) verbose                      (b) involved                      (c) lucid                      (d) witty

132. **High** :

- (a) Tall                      (b) Short                      (c) Fat                      (d) Thin

**Direction Q. 133 - 134 :** In the question 133 and 134, choose the word, which is most nearly the OPPOSITE in meaning to the bold word and mark it.

133. Lucky is a **smart** girl

- (a) active                      (b) indecent                      (c) casual                      (d) lazy

134. Day

- (A) Year (B) Month (C) Night (D) Hour

**Direction Q. 135 :** In the following question 135. sentence are given with blanks to be filled in with appropriate words. Choose correct alternative out of the four and mark it.

135. He granted the request because he was ..... to ..... his friend :

- (a) sure, displeasure (b) unwilling, please (c) reluctant, disappoint (d) bound, hurt

136. The heart and the nerve centre of a computer is its

- (a) C.P.U. (b) Memory (c) Output unit (d) Input unit

137. A finite sequence of steps needed to solve a problem is called a / an :

- (a) method of solution (b) process (c) algorithm (d) flow-chart

**JITENDRA MISHRA ACADEMY (JMA), INDORE (India's No. 1 Institute for All India MCA Entrance Training)**

JMA HOUSE - 7, CHANDRALOK COLONY, INDORE (M.P.) Ph.: 0731 - 4236844 / 2566799 Visit us : [www.jmaindore.com](http://www.jmaindore.com)

138. Main memory unit of a computer

- (A) Performs arithmetic (B) Stores a small amount of data and instructions  
(C) Stores bulk of data and instructions (D) Supervises the working of all the unit

139. The symbolic statement  $i = i + a$  is true, if here  $i$  stands for multiplicative identity.

- (a) not true in any algebra (b) in both the algebras  
(c) only in ordinary algebra (d) only in Boolean algebra

140. If  $a, b, c$  are elements of Boolean algebra, then  $ab + c (a' + b')$  will be equal to

- (a)  $a + bc$  (b)  $ab + c$  (c)  $ac + b$  (d)  $a + bc$

141. A CPU consist of :

- (a) input, output unit (b) memory unit  
(c) arithmetic and logical unit, central unit (d) keyboard, printer

**JITENDRA MISHRA ACADEMY (JMA), INDORE (India's No. 1 Institute for All India MCA Entrance Training)**

JMA HOUSE - 7, CHANDRALOK COLONY, INDORE (M.P.) Ph.: 0731 - 4236844 / 2566799 Visit us : [www.jmaindore.com](http://www.jmaindore.com)

142. C is a :

- (a) Middle level language (b) High level language  
(c) Low level language (d) None of the above

143. Which of the following shows the correct hierarchy of arithmetic operations in C :

- (a)  $()$ ,  $**$ ,  $*$  or  $/$ ,  $+$  or  $-$  (b)  $()$ ,  $**$ ,  $*$ ,  $/$ ,  $+$ ,  $-$   
(c)  $()$ ,  $**$ ,  $/$ ,  $*$ ,  $+$ ,  $-$  (d)  $()$ ,  $/$  or  $*$ ,  $-$  or  $+$

144. Which of the following is a storage class specification of C ?

- (a) Automatic (b) External (c) Internal (d) All of the above

145. In C, structure values can be passed as arguments to function by :

- (a) passing each number of the structure as an actual argument of function code  
(b) passing a copy of the entire structure to the called function  
(c) passing the structure as an argument using pointers.  
(d) All of the above

**JITENDRA MISHRA ACADEMY (JMA), INDORE (India's No. 1 Institute for All India MCA Entrance Training)**

JMA HOUSE - 7, CHANDRALOK COLONY, INDORE (M.P.) Ph.: 0731 - 4236844 / 2566799 Visit us : [www.jmaindore.com](http://www.jmaindore.com)

146. Which newspaper has the motto ..... Journalism of courage ?  
(a) The Hindustan Times (b) The Washington Post  
(c) The Indian Express (d) The Guradian
147. The Indian Railways is one of the largest railway systems with an extensive networks of over 63,000 route kilometers. Approximately ..... of the network is electrified.  
(a) 50% (b) 25% (c) 45% (d) 60%
148. The National Literacy Mission (NLM) seeks to achieve full literacy i.e. a sustainable threshold level of 75% literacy by year :  
(a) 2005 (b) 2010 (c) 2015 (d) 2020

**JITENDRA MISHRA ACADEMY (JMA), INDORE (India's No. 1 Institute for All India MCA Entrance Training)**

JMA HOUSE - 7, CHANDRALOK COLONY, INDORE (M.P.) Ph.: 0731 - 4236844 / 2566799 Visit us : [www.jmaindore.com](http://www.jmaindore.com)

149. Who is appointed the Governor of a State ?  
(a) The President of India  
(b) Chief Justice of India  
(c) Prime Minister of India  
(d) Vice-President of India
150. Bhopal gas tragedy is associated with the leakage of :  
(a) ethylcyanide (b) phenyl isocyanate (c) methyl isocyanate (d) methyl isocyanide
- 