



St. Xavier's Sr. Sec. School

Delhi-54

Class : 3
Date: 22.02.16

SUMMATIVE ASSESSMENT 2
MATHS

Marks: 60
Time: 1 Hour

Name: _____ Class & Sec. _____ R. No. _____

Note: All the answers should be done on the question paper itself.

I Mental Maths : (1x10=10)

- 1) Dividend \div divisor = _____.
- 2) When a number is multiplied by 0, the product is always _____.
- 3) Distance between two cities is measured in _____.
- 4) Quarter to 7 is written as _____.
- 5) $1206 \div 10 = Q$ _____ R _____.
- 6) $50 \times 1000 =$ _____.
- 7) 15 minutes past 12 can be read as _____.
- 8) $108 \div 12 = Q$ _____ R _____.
- 9) The number by which we multiply is called the _____.
- 10) $\times 96 = 96 \times 27$

II Multiple choice questions : (1x5=5)

- 1) One leap year = _____ days.
(a) 365 () (b) 366 () (c) 636 ()
- 2) When both hands are at 12, the time is _____
(a) 12^o clock () (b) 1^o clock () (c) 11^o clock ()
- 3) The product of 7 and 8 is _____
(a) 51 () (b) 55 () (c) 56 ()
- 4) Which is the shortest length?
(a) 1m () (b) 4 mm () (c) 1cm ()
- 5) The quotient of $2500 \div 100$ is _____



St. Xavier's Sr. Sec. School

Delhi-54

(a) 52 ()

(b) 250 ()

(c) 25 ()

III Fill in the blanks :

(1x5=5)

- 1) What is the time at 7 in the morning ? _____
- 2) A necklace has 11 beads. So _____ necklaces have 110 beads.
- 3) _____ is the standard unit for measuring length.
- 4) A line has two end points. (True / False)
- 5) One book has 80 pages. So 12 books have _____ pages

Cont'd....2/-

-2-

(Class 3, Maths, 22.02.16)

IV Draw the hands of the following clocks :




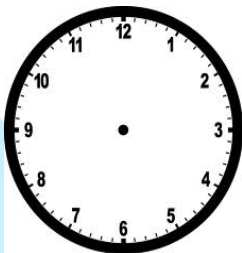
(1x4=4)

(a) 9:15

b) 8:45

(c) 7:30

(d) 4^o clock


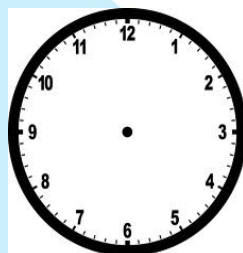


V Write the time :

(1/2x4=2)

a)

b)







St. Xavier's Sr. Sec. School

Delhi-54

b)



d)



VI Convert the following by showing method:
(1x4=4)

a) 3 km 480m into m

b) 99 mm into cm

c) 5m.05cm into cm

d) 8769m into km

VII. Draw the line segment of the given measurement and name them :
(1x2=2)

a) 5 cm

b) 3.5 cm

Cont'd....3/-



St. Xavier's Sr. Sec. School

Delhi-54

VIII. Multiply:-

(2x4=8)

a) 68×26

b) 95×57

c) 206×38

e) 178×44

IX Divide :

(2x4=8)

a) $5634 \div 3$

b) $3583 \div 6$



St. Xavier's Sr. Sec. School

Delhi-54

Q

R

Q

R

-4-

Cont'd....4/-
(Class 3, Maths, 22.02.16)

c) $6437 \div 8$

d) $7219 \div 5$

Q

R

Q

R

VIII

Word problems:

(4x3=12)

- a) 4774 bulbs are to be packed equally in 7 cartons. How many bulbs are there in each carton?



St. Xavier's Sr. Sec. School

Delhi-54

-5-

Cont'd....5/-
(Class 3, Maths, 22.02.16)

- b) A book has 209 pages. How many pages are there in 29 such books?
- c) 504 students were divided into 6 equal groups. How many students are there in each group?
