

1. Four of the following five are alike in a certain way and so form a group. Which is the one that does not belong to the group?

(A) 125 (B) 729 (C) 216 (D) 512 (E) 648

2. How many such pairs of letters are there in the word EXECUTION, each of which has as many letters between them in the word as they have between them in the English alphabet?

(A) None (B) One (C) Two (D) Three (E) More than three

3. In a certain code DESIRABLE is written as JTFEQFMCB, how is DIMENSION written in that code?

(A) FNJEMTJPO (B) FNJELOOPJT (C) FNJEMOPJT (D) EJNFMOPJT (E) None of these

4. In a certain code KNIFE is written as \$3%#5 and LAKE is written as 7@\$5. How is FAIL written in that code ?

(A) %\$#7 (B) #@\$7 (C) \$@%7 (D) \$%@7 (E) None of these

5. How many such pairs of digits are there in the number 75938462, each of which has as many digits between them in the number as they have between them when arranged in ascending order?

(A) None (B) One (C) Two (D) Three (E) More than three

Directions—(Q. 6–10) Given an input line a machine generates passcodes step by step following certain rules as illustrated below— Input : talk seven 37 48 given 83 likely 62

Step I : 37 talk seven 48 given 83 likely 62

Step II : 37 talk 48 seven given 83 likely 62

Step III : 37 talk 48 seven given 83 likely

Step IV : 37 talk 48 seven 62 likely given 83

Step V : 37 talk 48 seven 62 likely 83 given Step V is the last step for this input. In the following questions same logic as illustrated above is to be used.

6. Step II for an input is “23 working 48 32 park blossom 26 garden”. What will be the fifth step?

(A) 23 working 26 park 48 32 blossom garden

(B) 23 working 26 park 32 48 blossom garden

(C) 23 working 26 32 park 48 blossom garden

(D) 23 working 26 48 park 32 blossom garden

(E) None of these

7. Second step of an input is “12 where 82 33 great wall 49 just”. Which step will be the last step?

(A) VI (B) VII (C) VIII (D) IV (E) None of these

8. What will be Step III for the following input? **Input** : Phone computer 32 link 18 75 46 diary

- (A) 18 phone 46 link computer 75 32 diary
- (B) 18 phone 32 link 46 computer 75 diary
- (C) 18 phone 32 computer link 75 46 diary
- (D) 18 phone 32 link computer 75 46 diary
- (E) None of these

9. Step IV of an input is “22 united 37 trading killer 45 72 jogger”. What will be the input definitely ?

- (A) United 22 37 jogger 45 trading 72 killer (B) United trading 22 37 jogger 45 72 killer (C) United 22 trading jogger 37, killer 45 72 (D) Cannot be determined (E) None of these

10. What will be the third step of an input whose first step is “17 45 follow rule examination 36 85 hut” ?

- (A) 17 rule 36 45 follow examination 85 hut (B) 17 rule 36 45 follow 85 examination hut (C) 17 rule 36 45 examination follow 85 hut (D) Cannot be determined (E) None of these

Directions—(Q. 11–15) In the following questions, the symbols @, #, %, \$, * are used with different meanings as follows :

‘A @ B’ means ‘A is not smaller than B’.

‘A # B’ means ‘A is not greater than B’.

‘A % B’ means ‘A is neither smaller than nor equal to B’.

‘A \$ B’ means ‘A is neither greater than nor equal to B’.

‘A * B’ means ‘A is neither greater than nor smaller than B’.

In each of the following questions assuming the given statements to be true, find out which of the three conclusions I, II and III given below them is/are **definitely true**.

11. **Statements** : R % Q, Q @ T, T * U, U # M **Conclusions** : I. M @ T II. Q @ M III. Q * M

- (A) Only either II or III follows
- (B) Only I follows
- (C) Only II follows
- (D) Only I and either II or III follow
- (E) None of these

12. **Statements** : M # K, K @ Z, Z % H, H * D **Conclusions** : I. D \$ K II. H \$ M III. H @ M

- (A) Only I and either II or III follow
- (B) Only I follows

- (C) Only either II or III follows
- (D) Only I & II follow
- (E) None of these

13. **Statements** : $W @ V, V \# T, T \$ P, P @ Q$ **Conclusions** : I. $P \% V$ II. $T \$ Q$ III. $Q @ V$

- (A) Only I & II follow
- (B) Only II & III
- (C) Only I & III follow
- (D) All I, II & III follow
- (E) None of these

14. **Statements** : $J @ L, K \# L, K \$ V, V \% W$ **Conclusions** : I. $J \% K$ II. $L @ V$ III. $K \$ W$

- (A) Only I follows
- (B) Only II follows
- (C) Only II & III follow
- (D) Only I & II follow
- (E) None of these

15. **Statements** : $L \% F, F @ H, H \$ E, E * N$ **Conclusions** : I. $H \$ L$ II. $H \$ N$ III. $L * N$

- (A) Only I & III follow
- (B) Only I & II follow
- (C) Only II & III follow
- (D) Only either I or II and III follow
- (E) None of these

Answers:

- 1. (E)
- 2. (E)
- 3. (C)
- 4. (B)
- 5. (E)
- 6. (B)
- 7. (A)
- 8. (D)
- 9. (D)
- 10. (A)
- 11. (B)
- 12. (B)
- 14. (E)
- 15. (B)

All the remaining sections will be added shortly.

Directions—(Q. 16–20) In each of the questions below are given four statements followed by three conclusions numbered I, II and III. You have to take the given statements to be true even if they seem to be at variance from commonly known facts. Read all the conclusions and then decide which of the given conclusions logically follows from the given statements disregarding commonly known facts.

16. **Statements:** Some leaves are flowers. No flower is fruit. Some fruits are branches. Some branches are stems.

Conclusions : I. Some leaves are stems. II. All leaves are either stems or fruits. III. All stems are either branches or fruits.

- (A) Only I follows
- (B) Only II & III follow
- (C) Only III follows
- (D) All follow
- (E) None follows

17. **Statements :** All lions are tigers. All tigers are leopards. Some leopards are wolves.

Conclusions : I. No elephant is lion. II. Some wolves are lions. III. Some leopards are lions.

- (A) Only I follows
- (B) Only II follows
- (C) Only III follows
- (D) Only I & III follow
- (E) All follow

18. **Statements :** Some caps are umbrellas. Some umbrellas are raincoats. All raincoats are trousers. All trousers are jackets.

Conclusions : I. Some raincoats are caps. II. Some trousers are umbrellas. III. All raincoats are jackets.

- (A) None follows
- (B) Only I & II follow
- (C) Only II & III follow
- (D) Only I & III follow
- (E) None of these

19. **Statements :** Some fans are coolers. Some coolers are machines. Some machines are computers. All computers are televisions.

Conclusions : I. Some televisions are machines. II. Some machines are fans. III. No machine is fan.

- (A) None follows
- (B) Only I follows
- (C) Only either II or III follows
- (D) Only I and either II or III follow
- (E) All follow

20. **Statements** : All keys are staplers. All staplers are blades. Some blades are erasers. Some erasers are sharpeners.

Conclusions : I. Some sharpeners are keys. II. All keys are blades. III. Some erasers are keys.

- (A) Only I & II follow
- (B) Only I follows
- (C) Only II follows
- (D) All follow
- (E) None of these

Directions—(Q. 21–25) *These questions are based on the following arrangement—*

*D 5 4 I H * \$ K E 3 L B @ A R M 1 6 F % J £ 2 7 C G 9*

21. If all the digits are dropped from the above arrangement, which of the following will be fourth to the left of seventh from the right end ?

- (A) B (B) @ (C) L (D) A (E) None of these

22. How many such symbols are there in the above arrangement each of which is either immediately followed or immediately preceded by a consonant but not both ?

- (A) None (B) One (C) Two (D) Three (E) More than three

23. If the position of ten elements from the right end is reversed which of the following will be fifth to the right of thirteenth from the right ? (A) % (B) F

- (C) C (D) G (E) None of these

24. How many such consonants are there in the above arrangement each of which is immediately preceded by a vowel and also immediately followed by another consonant ?

- (A) None (B) One (C) Two (D) Three (E) More than three

25. Four of the following five are alike in a certain way on the basis of their positions in the above arrangement and so form a group. Which is the one that **does not** belong to the group ?

- (A) KL3 (B) F£J (C) R61 (D) 1\$* (E) [@MA](#)

Directions—(Q. 26–30) In each of the following questions, two rows of numbers are given. The resultant number in each row is to be worked out separately based on the following rules and the question below the rows is to be answered. The operations of numbers progress from left to right.

Rules :

- (i) If an even number is followed by another even number they are to be added.
- (ii) If an even number is followed by a prime number, they are to be multiplied.
- (iii) If an odd number is followed by an even number, even number is to be subtracted from the odd number.
- (iv) If an odd number is followed by another odd number the first number is to be added to the square of the second number.
- (v) If an even number is followed by a composite odd number, the even number is to be divided by odd number.

26. I. 84 21 13 II. 15 11 44

What is half of the sum of the resultants of the two rows ?

(A) 116 (B) 132 (C) 232 (D) 236 (E) None of these

27. I. 45 18 12 II. 22 14 9

What is the product of the resultants of the two rows ?

(A) 75 (B) 48 (C) 45 (D) 64 (E) None of these

28. I. 12 7 16 II. 79 28 15

What is the difference between the resultants of the second row and the first row ?

(A) 276 (B) 176 (C) 100 (D) 156 (E) None of these

29. I. 36 13 39
II. 77 30 7

What will be the outcome if the resultant of second row is divided by the resultant of first row ?

(A) 12 (B) 16 (C) 8 (D) 6 (E) None of these

30. I. 65 11 12
II. 15 3 11

What is the sum of the resultants of the two rows ?

(A) 366 (B) 66 (C) 264 (D) 462 (E) None of these

Directions—(Q. 31–35) Study the following information carefully to answer these questions—

Eight members A, B, C, D, E, F, G and H belonging to three families X, Y, Z go for weekend outing in three different cars I, II, III. Four out of eight members are females. Members of any one family travel in different cars. Each car has at least one male and one female members. Each family has at least two members.

A belongs to family Y and he travels in car III. D is wife of E and they travel in cars I & II respectively. H is son of B who is wife of G and they belong to family Z. C is daughter of F who is wife of A. C travels in car II. G does not travel with F.

31. Which of the following group of persons travel in car I ?

(A) D, F, G (B) D, E, G (C) D, G, H (D) D, F, H (E) None of these

32. Which car has only two members travelling in it ?

(A) I (B) II

(C) III (D) II or III (E) Cannot be determined

33. Which of the following members of families

Y and Z travel in different cars ?

(A) F, G (B) C, G (C) F, H (D) C, F (E) None of these

34. Which of the following group of persons is a group of all females ?

(A) B, D, G (B) A, B, C (C) B, E, F (D) D, E, F (E) None of these

35. Which of the following members of families

X and Y travel in the same car ?

(A) C, F (B) D, F (C) C, D (D) F, E (E) None of these

Answers:

16. (E)

17. (C)

18. (C)

19. (D)

20. (C)

21. (A)
22. (E)
23. (C)
24. (B)
25. (E)
26. (A)
27. (E)
28. (B)
29. (C)
30. (D)
31. (D)
32. (C)
33. (A)
34. (E)
35. (B)

Directions—(Q. 36–38) Study the following information carefully to answer these questions—

'A \$ B' means 'A is wife of B'.

'A # B' means 'A is son of B'.

'A % B' means 'A is father of B'.

*'A * B' means 'A is sister of B'.*

36. Which of the following expressions represents the relationship 'T is brother of H' ?

- (A) $H * T \% K$ (B) $T * H \% K$ (C) $H \# K \% T$ (D) $H * K \% T$ (E) None of these

37. In $H * T \# F \% L$, how is H related to L ?

- (A) Cousin
 (B) Brother
 (C) Sister
 (D) Cannot be determined
 (E) None of these

38. Which of the following expressions represent the relationship 'R is mother of J' ?

- (A) $M * J \# K \$ R$ (B) $* J \# R \$ K$ (C) $J \# R \# T$ (D) $R \$ K \% M \$ J$ (E) None of these

Directions—(Q. 39–40) These questions are based on the following set of numbers—

153 364 279 536 298

39. If in each number, the second and the third digits are interchanged and the newly formed numbers are arranged in ascending order, which number will be second ?

(A) 153 (B) 364 (C) 279 (D) 536 (E) 298

40. If in each number '1' is added to the first digit and then the first and second digits are interchanged which number will be the smallest ?

(A) 153 (B) 364 (C) 279 (D) 536 (E) 298

Directions—(Q. 41–45) In each question below is given a statement followed by two courses of action **numbered I and II**. A course of action is a step or administrative decision to be taken for improvement, follow-up or further action in regard to the problem, policy, etc. On the basis of the information given in the statement, you have to assume everything in the statement to be true, then decide which of the suggested courses of action logically follow(s) for pursuing.

Give answer (A) if only I follows. Give answer (B) if only II follows.

Give answer (C) if either I or II follows. Give answer (D) if neither I nor II follows. Give answer (E) if both I and II follow.

41. **Statement** : An increased number of credit/ debit card forgery cases have been recorded recently.

Courses of Action :

- I. The banks should make stricter verification to ensure the access to credit/debit card by the authorized person.
- II. The banks should advise their customers to be more careful in dealing with the plastic money.

42. **Statement** : Drinking and rave parties have become fashion among the present college youth which diverts from their studies.

Courses of Action :

- I. The State Government should make it a rule to disallow the students from entering Pubs and Bars.
- II. The parents as well as the colleges should impose strict discipline among the college going youth.

43. **Statements** : Increasing competition on various fronts is putting children and youth under tremendous pressure leading them to take extremely drastic steps.

Courses of Action :

- I. Children and youth along-with their parents should be counselled for facing the competition in right spirit.
- II. Parents and teachers should be advised not to bring pressure on children.

44. **Statements** : Power cuts in most parts of the country has put the students in tremendous difficulty during examination time.

Courses of Action :

- I. Government should advise the public to make standby arrangements like generators and invertors.
- II. Parents of the students should take out a morcha to the State Electricity Boards in protest against power cuts.

45. **Statements** : Increasing construction of residential towers in the city is hampering the infrastructural arrangements like water supply, sewage system etc.

Courses of Action :

- I. Municipal authorities in the city should not permit construction of towers unless adequate provisions for infrastructural facilities are made.
- II. Concerned authorities should take stringent action against those builders who are violating the rules.

Directions— (Q. 46–50) *In making decisions about important questions, it is desirable to be able to distinguish between ‘strong’ arguments and ‘weak’ arguments. ‘Strong’ arguments must be both important and directly related to the question. ‘Weak’ arguments may not be directly related to the question and may be of minor importance or may be related to the trivial aspects of the question.*

Each question below is followed by two arguments numbered I and II. You have to decide which of the arguments is a ‘strong’ argument and which is a ‘weak’ argument.

Give answer (A) if only argument I is strong. Give answer (B) if only argument II is strong. Give answer (C) if either argument I or II is strong.

Give answer (D) if neither argument I nor II is strong.

Give answer (E) if both arguments I and II are strong.

46. Should graduation be made minimum educational qualification for entry level jobs in any public sector organization ?

Arguments :

- I. Yes, graduates always perform better than the non-graduates by virtue of their higher level of education.
- II. No, there are quite a few people who cannot afford to remain unemployed till the completion of graduation and are capable of performing equally well as the graduate candidates.

47. Should the examination bodies for all university examinations permit the use of calculators ?

Arguments :

I. No, it is necessary for the students to know the methods of manual calculation to make their concepts clear.

II. Yes, manual calculations are no more required with extensive use of computers in all fields.

48. Should the knowledge of Hindi language be made compulsory for all the employees of public sector organizations ?

Arguments :

I. Yes, it is necessary for dealing with people from the educationally backward strata of the society.

II. No, it is not necessary for every employee to have the knowledge of Hindi language.

49. Should it be made compulsory for all the private sector organizations to reserve quota for socially backward classes ?

Arguments :

I. No, the private sector should not be governed by the Government rules.

II. Yes, private sector organizations should also contribute in upliftment of socially backward classes.

50. Should the women be advised not to travel alone at night in view of the increasing incidences of rapes and sexual abuse ? **Arguments :**

I. No, instead the Government should take measures to control such incidences.

II. Yes, it is difficult even for the police department to control such cases.

Directions—(Q. 51–55) Below is given a passage followed by several possible inferences which can be drawn from the facts stated in the passage. You have to examine each inference separately in the context of the passage and decide upon its degree of truth or falsity.

Mark answer (A) if the inference is 'definitely true' i.e., it properly follows from the statement of facts given.

Mark answer (B) if the inference is 'probably true' though not 'definitely true' in the light of the facts given.

Mark answer (C) if the data are inadequate i.e., from the facts given you cannot say whether the inference is likely to be true or false.

Mark answer (D) if the inference is 'probably false' though not 'definitely false' in the light of the facts given.

Mark answer (E) if the inference is 'definitely false' i.e., it cannot possibly be drawn from the facts given or it contradicts the given facts.

The immediate challenge is on the food front. Shortfalls in production have been allowed to affect supplies and hence prices. The Government is planning to focus on investment in irrigation and even revival of agricultural extension system what is probably needed is a fresh dose of Green Revolution strategy. It appears that the Green Revolution instruments to encourage farmers to invest are no longer effective. The Green Revolution strategy was based on the state taking out the risk of collapse in prices. 'Farmers were offered remunerative prices and a guaranteed procurement of their produce in case the open market could not absorb it. Farmers could then borrow from banks, acquire the Green Revolution Technology and produce as much as they could. The pressure on the food subsidy was manageable as long as there was a food shortage. Prices in the open market then tended to be above the procurement prices. But with the food surpluses the situation has changed. The situation was unsustainable not merely because of the magnitude of this subsidy. It was also inefficient. It meant farmers were being led to produce crops based just on the prices Government fixed and not in relation to any real demand. In these circumstances, the Government was reluctant to keep increasing procurement prices at the pace that used to be the norm in earlier years.

51. The Government is planning to make crucial changes in the Green Revolution strategies.

52. The Government is no longer in a position to provide subsidy to farmers.

53. As the open market prices are lower, all the burden of procurement of crops is on the Government.

54. Demand is much higher than the quantity of crops produced by the farmers.

55. The farmers tend to produce the crops as per their convenience and not consonant with the demand.

56. **Cause** : All the major rivers in the state have been flowing way over the danger level for the past few weeks. Which of the following is/are possible effect(s) of the above cause ?

(1) Many villages situated near the river-banks are submerged forcing residents to flee.

(2) Govt. has decided to provide alternate shelter to all the affected villagers residing near the river banks.

(3) The entire state has been put on high flood alert.

(A) Only (1)

(B) Only (1) and (2)

(C) Only (2) and (3)

- (D) All (1), (2) and (3)
- (E) None of these

57. **Effect** : This year majority of the final year students of the management institute have opted for finance specialization. Which of the following can be a probable cause of the above effect ?

- (A) Last year most of the students with HR specialization got better job offers than other specializations.
- (B) The management institute offers only finance specialization to its final year students.
- (C) Last year the students with finance specialization bagged most of the lucrative offers vis-a-vis students with other specializations.
- (D) The management institute has recently started its finance specialization in addition to Marketing and HR being offered earlier.
- (E) None of these

58. **Effect** : Govt. has allowed all the airlines to charge additional amount as peak time congestion charges for the flights landing between 6-00 a.m. to 10-00 a.m. Which of the following is a probable cause of the above effect ?

- (A) All the airline companies had threatened to suspend their services during peak hours.
- (B) The Govt. has increased its tax for peak time flights.
- (C) The aircrafts are routinely put on hold over the airports while landing during peak time causing extra fuel consumption.
- (D) The airlines companies can now charge unlimited additional charge for peak time flights
- (E) None of these

59. **Cause** : The cement manufacturing companies have increased the price of cement by about fifteen per cent with immediate effect. Which of the following is/are possible effect(s) of the above cause ?

- (1) Govt. will direct the cement manufacturing companies to reduce the price increase to five per cent.
- (2) The prices of residential flats and commercial companies will see an upward trend.
- (3) The construction companies may stop all on going construction projects with immediate effect.

- (A) Only (2)
- (B) Only (1)
- (C) Only (3)
- (D) Only (2) and (3)
- (E) None of these

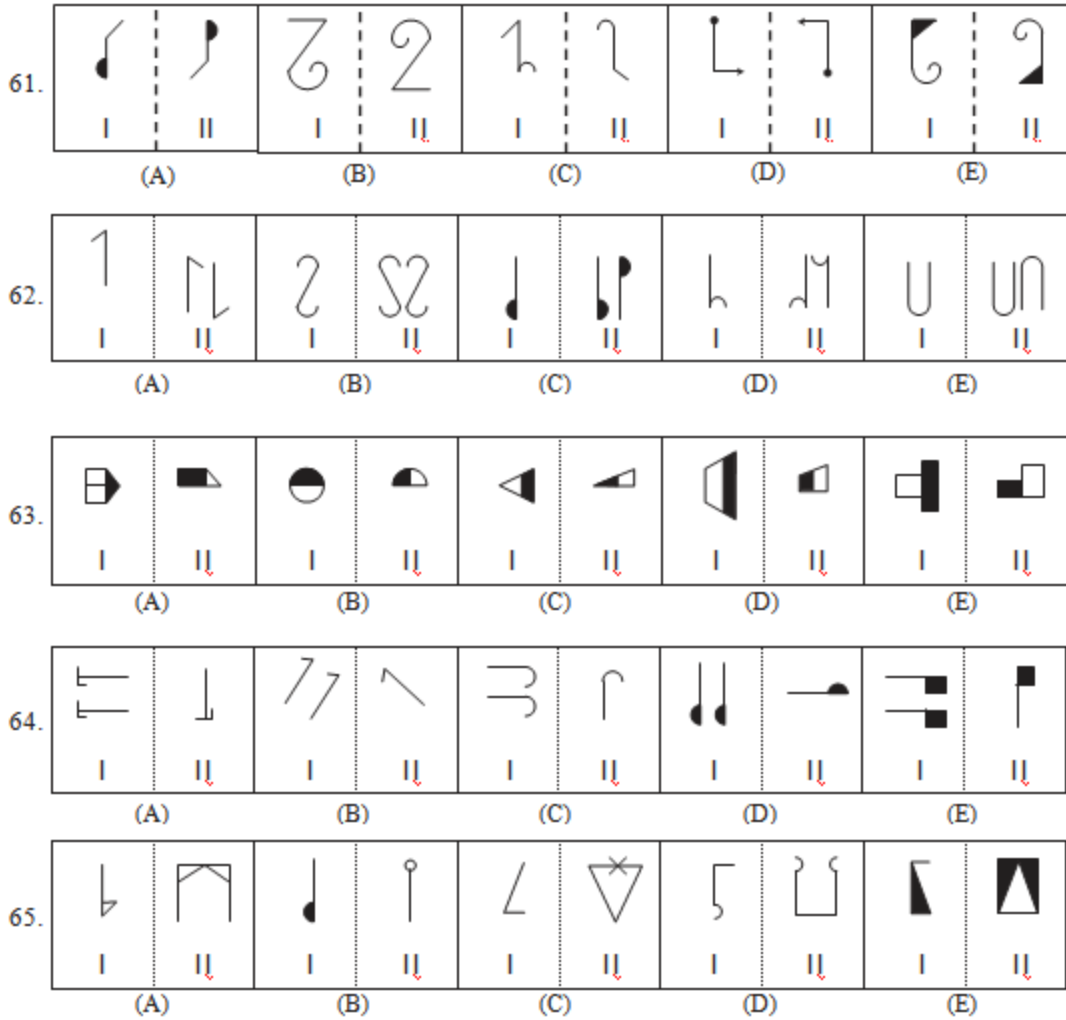
60. **Effect** : There has been unprecedented increase in the number of institutions training spoken phonetic English in all the major cities of India during the last few years. Which of the following can be a probable cause of the above effect ?

- (A) Many parents want their children to speak fluent English.
- (B) Various activities being outsourced to India by many European and North American countries.
- (C) English is no longer being taught in the schools and colleges in India
- (D) India has highest number of English speaking educated youth compared to any other country.
- (E) None of these

Answers:

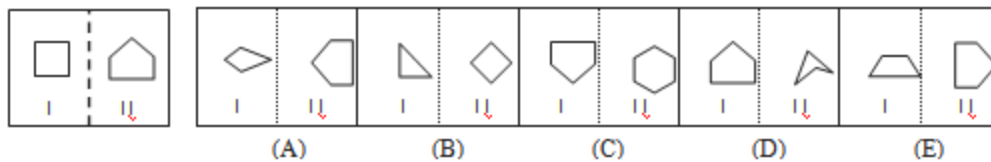
- 36. (A)
- 37. (C)
- 38. (B)
- 39. (E)
- 40. (D)
- 41. (A)
- 42. (E)
- 43. (A)
- 44. (D)
- 45. (E)
- 46. (B)
- 47. (B)
- 48. (A)
- 49. (A)
- 50. (A)
- 51. (B)
- 52. (C)
- 53. (A)
- 54. (E)
- 55. (A)
- 56. (D)
- 57. (C)
- 58. (B)
- 59. (D)
- 60. (D)

Directions—(Q. 61–65) *In each of the following questions in four out of the five figures, element I is related to element II in the same particular way. Find out the figure in which the element I is **not** so related to element II.*





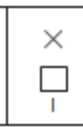



Directions—(Q. 66–70) In each of the following questions, a related pair of figures is followed by five lettered pairs of figures. Select the pair that has a relationship **similar** to that in the **unlettered** pair. The best answer is to be selected from a group of fairly close choices.



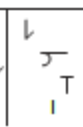


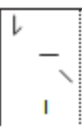
Study the following question—









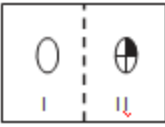

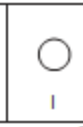



In this question element II of unlettered figure is related to the element I of the figure in a certain way. Element II has one side more than the element I. The pair in the figure letter (E) has the same relationship. Therefore, (E) is the answer.

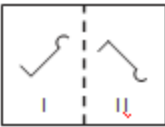




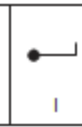
Now solve the following questions—

66.  (A)  (B)  (C)  (D)  (E) 

67.  (A)  (B)  (C)  (D)  (E) 

68.  (A)  (B)  (C)  (D)  (E) 

69.  (A)  (B)  (C)  (D)  (E) 

70.  (A)  (B)  (C)  (D)  (E) 

Directions—(Q. 71–75) In each of the questions given below which one of the five answer figures on the right should come after the problem figures on the left, if the sequence were continued.

	Question Figures					Answer Figures				
71.										
						(A)	(B)	(C)	(D)	(E)
72.										
						(A)	(B)	(C)	(D)	(E)
73.										
						(A)	(B)	(C)	(D)	(E)
74.										
						(A)	(B)	(C)	(D)	(E)
75.										
						(A)	(B)	(C)	(D)	(E)

Answers:

- 61. (C)
- 62. (E)
- 63. (B)
- 64. (D)
- 65. (B)
- 66. (B)
- 67. (A)
- 68. (C)
- 69. (D)
- 70. (E)
- 71. (B)
- 72. (C)
- 73. (A)
- 74. (D)
- 75. (E)

1. Who has been appointed as the Governor of Madhya Pradesh ?

- 1. Hans Raj Bhardwaj
- 2. Devanand Konwar
- 3. Rameshwar Thakur
- 4. R.L. Bhatia
- 5. None of these

2. Jeev Milkha Singh is related to———.

- 1. Tennis

2. Football
 3. Golf
 4. Chess
 5. None of these
3. Karl Malden who passed away recently was a famous————.
1. Politician
 2. Sportsman
 3. Actor
 4. Singer
 5. None of these
4. Who is the author of the book "The Making of Barack Obama" ?
1. Imran Sheikh
 2. R.S. Sharma
 3. Amartya Sen
 4. Richard Wolffe
 5. None of these
5. When is the International Youth Day celebrated ?
1. July 11
 2. August 12
 3. September 21
 4. June 5
 5. None of these
6. Central Statistical Organisation is set up during————
1. 1950-57
 2. 1951-52
 3. 1952-53
 4. 1942-43
 5. None of these
7. Regional Rural Banks are the Brain child of————
1. C. Rangrajan
 2. M.Swaminathan
 3. K.C. Niyogi
 4. R. Gadgil
 5. None of these
8. The largest source of National Income in India is————
1. Service sector
 2. Agricultural Sector
 3. Industrial sector
 4. Trade sector
 5. None of these
9. Which Indian Bank has maximum branch is abroad ?
1. Bank of Hindustan
 2. State Bank of India
 3. Bank of Baroda
 4. Canara Bank
 5. None of these

10. About how much amount has been approved by Central Government for "Pradhan Mantri Adarsh" Gram Yojana" in Budget 2009-10?
1. Rs. 100 cr.
 2. Rs. 250 cr.
 3. Rs. 285 cr.
 4. Rs. 300 cr.
 5. None of these
11. How many community colleges are established by government to trained the unskilled person to improve their skills ?
1. 630
 2. 670
 3. 600
 4. 580
 5. None of these
12. How many T-20 tanks are included in Indian Army to strengthen its condition?
1. 50
 2. 52
 3. 59
 4. 49
 5. None of these
13. Recently to which bank RBI said to make more clear norm about NPAs ?
1. State Bank of India
 2. Urban Co-operative Bank
 3. Rural Co-operative Bank
 4. Allahabad Bank
 5. None of these
14. Government approved————amount for Rural electrification in budget 2009-10.
1. Rs. 3000 cr.
 2. Rs. 7000 cr.
 3. Rs. 5000 cr.
 4. Rs. 4000 cr.
 5. None of these
15. In which city the first EMU Train is launched ?
1. Delhi
 2. Bangalore
 3. Kolkata
 4. Bangalore
 5. None of these

Answers:

1. (3)
2. (3)
3. (3)
4. (4)
5. (2)

6. (2)
7. (2)
8. (1)
9. (3)
10. (1)
11. (3)
12. (1)
13. (2)
14. (2)
15. (3)

16. Which of the following countries has launched the World Largest Commercial Satellite?

1. Russia
2. North Korea
3. USA
4. India
5. None of these

17. Who has been appointed as the new Foreign Secretary of Bangladesh?

1. Nirupama Rao
2. Mijarul Quayes
3. Shiv Shankar Menon
4. M. Touhid Hossein
5. None of these

18. Which of the following banks have won the Model Bank Award for 2009?

1. Indian Bank
2. Punjab National Bank
3. Canara Bank
4. Corporation Bank
5. None of these

19. Railway Minister has announced that——— "Adarsh Stations" will be established?

1. 375
2. 400
3. 425
4. 455
5. None of these

20. Goa carbon will be launched its wholly owned subsidiary unit in which country?

1. America
2. China
3. France
4. Japan
5. None of these

21. Who has been appointed as the Secretary in the department of Defence?

1. Vijay Singh
2. Madhukar Gupta
3. S.N. Menon
4. Raj Kumar Singh

5. None of these
22. Which country comes at the top in the emission Green House Gases?
 1. America
 2. France
 3. China
 4. India
 5. None of these
23. Which of the following company is the subsidiary of Indian oil corporation?
 1. Manali Petroleum Corporation
 2. Chennai Petroleum Corporation
 3. Madras Petroleum Corporation
 4. Bengal Petroleum Corporation
 5. None of these
24. Which of the following Tax is imposed by Central Government?
 1. Service Tax
 2. Entertainment Tax
 3. Sale Tax
 4. Land Tax
 5. None of these
25. Which Bank started Kiosc Banking in Rural sectors?
 1. Corporation Bank
 2. State Bank of India
 3. Bank of India
 4. Allahabad Bank
 5. None of these
26. Which of the following state is the largest producer of Tobacco in India?
 1. Punjab
 2. Himachal Pradesh
 3. Andhra Pradesh
 4. Kerala
 5. None of these
27. In Budget 2008-09, About how much additional amount is approved for NREGA?
 1. Rs. 400000 cr.
 2. Rs. 39100 cr.
 3. Rs. 35100 cr.
 4. Rs. 45100 cr.
 5. None of these
28. In Rajasthan—————launches "Mini Bank Scheme".
 1. Gramin Bank
 2. State Bank of India
 3. Allahabad Bank
 4. Corporation Bank
 5. None of these
29. What is the recent forecast of IMF about economic growth of India?
 1. 5.4%
 2. 4.7%

3. 9.8%
 4. 7.8%
 5. None of these
30. Recently which of the following countries has made law for Rural Land Disputes?
1. China
 2. Russia
 3. India
 4. Bangladesh
 5. None of these

Answers:

16. (3)
17. (2)
18. (1)
19. (1)
20. (2)
21. (4)
22. (3)
23. (2)
24. (1)
25. (2)
26. (3)
27. (2)
28. (1)
29. (1)
30. (1)

31. Which of the following countries is the Major Asian Investor in India during 2008?
1. Dubai
 2. Singapore
 3. Malaysia
 4. China
 5. None of these
32. "Brain Gain" scheme is related to——.
1. Education
 2. Infrastructure Development
 3. Indian Culture
 4. Poverty
 5. None of these
33. Which of the following countries celebrate "Bastil Day" as "National Day"?
1. Russia
 2. France
 3. Japan
 4. Thailand
 5. None of these

34. Which of the following statements is/are true about Kiosc Banking ? (A) It will provide banking facilities to Rural India.(B) This banking is started under "State Wide Area Network" scheme. (C) State Bank of India started this project in Rajasthan
1. Only A
 2. Only B
 3. A and B
 4. All
 5. None of these
35. Recently which country joins membership of International Monetary Fund (IMF)?
1. Bangladesh
 2. Kosovo
 3. China
 4. North Korea
 5. None of these
36. How many outlet stores will be opened by Zudas France in India?
1. 290
 2. 280
 3. 250
 4. 270
 5. None of these
37. Who is appointed as Chairman of National Developmental Council ?
1. Dr. Man Mohan Singh
 2. Montek Singh Ahluwalia
 3. Nirupama Rao
 4. Shiv Shankar Menon
 5. None of these
38. With which Bank Tata Motor signed an agreement for purchasing Fiat cars?
1. State Bank of India
 2. Allahabad Bank
 3. Canara Bank
 4. Punjab National Bank
 5. None of these
39. Book "India and Global Economic crises " is written by-
1. Ruskin Bond
 2. Salman Rushdie
 3. Y.V. Reddy
 4. Amartya Sen
 5. None of these
40. About how much amount has been allocated for Defence Sector in Budget 2009-10?
1. Rs. 17006 cr.
 2. Rs. 146100 cr.
 3. Rs. 147100 cr.
 4. Rs. 141703 cr.
 5. None of these
41. Q.I.P. stands for –
1. Qualified Investment Placement

2. Qualify Investment Programme
 3. Qualified Institutional Placement
 4. Qualified Institution Placement
 5. None of these
42. Which of the following actors are nominated for 12th Rajiv Gandhi Award?
1. Saif Ali Khan
 2. Shahid Kapoor
 3. Sharukh Khan
 4. Amitabh Bachchan
 5. None of these
43. Who is appointed as Home secretary of India?
1. Rahul Khullar
 2. N. M. Nelkani
 3. G.K. Pillai
 4. S.S. Menon
 5. None of these
44. Who was the Author of Book "Boys will be Boys"?
1. Mohammad Hanif
 2. Ruskin Bond
 3. Richard Wolfie
 4. Amartya Sen
 5. None of these
45. 7 July is celebrated as—————
1. International Cooperative Day
 2. International Laughing Days
 3. International Population Day
 4. International Environmental Day
 5. None of these
46. Fiat Money is known as –
1. Legally declared Money
 2. Advance Money
 3. Soft Money
 4. Hot Money
 5. None of these
47. Finance commission is included under————of Indian constitution.
1. Article 180
 2. Article 220
 3. Article 280
 4. Article 260
 5. None of these
48. In the recently released Monetary Policy of RBI which rate is remain unchanged?
1. Cash Reserve Ratio
 2. Statutory Liquid Ratio
 3. Bank Rate
 4. All
 5. None of these

49. How many countries are included in Human Development Report which is released by UNO?

1. 176
2. 179
3. 177
4. 165
5. None of these

50. Which one is not included in the Indian economy?

1. M_1
2. M_2
3. M_3
4. Both (1) and (2)
5. None of these

Answers:

31. (2)
32. (1)
33. (2)
34. (3)
35. (2)
36. (3)
37. (1)
38. (3)
39. (3)
40. (4)
41. (3)
42. (2)
43. (1)
44. (2)
45. (1)
46. (1)
47. (3)
48. (4)
49. (3)
50. (2)