

**CCE PF
REVISED**

C

ಕರ್ನಾಟಕ ಪ್ರೌಢ ಶಿಕ್ಷಣ ಪರೀಕ್ಷಾ ಮಂಡಳಿ, ಮಲ್ಲೇಶ್ವರಂ, ಬೆಂಗಳೂರು – 560 003

**KARNATAKA SECONDARY EDUCATION EXAMINATION BOARD, MALLESWARAM,
BANGALORE – 560 003**

ಎಸ್.ಎಸ್.ಎಲ್.ಸಿ. ಪರೀಕ್ಷೆ, ಮಾರ್ಚ್ / ಏಪ್ರಿಲ್ – 2019

S. S. L. C. EXAMINATION, MARCH/APRIL, 2019

ಮಾದರಿ ಉತ್ತರಗಳು

MODEL ANSWERS

ದಿನಾಂಕ : 25. 03. 2019]

ಸಂಕೇತ ಸಂಖ್ಯೆ : **81-E**

Date : 25. 03. 2019]

CODE No. : **81-E**

ವಿಷಯ : ಗಣಿತ

Subject : MATHEMATICS

(ಹೊಸ ಪಠ್ಯಕ್ರಮ / New Syllabus)

(ಖಾಸಗಿ ಅಭ್ಯರ್ಥಿ / Private Fresh)

(ಇಂಗ್ಲಿಷ್ ಭಾಷಾಂತರ / English Version)

[ಗರಿಷ್ಠ ಅಂಕಗಳು : 100

[Max. Marks : 100

Qn. Nos.	Ans. Key	Value Points	Marks allotted
I. 1.		If the n -th term of an arithmetic progression $a_n = 24 - 3n$, then its 2nd term is (A) 18 (B) 15 (C) 0 (D) 2 Ans. : (A) 18	1

PF(C)-606

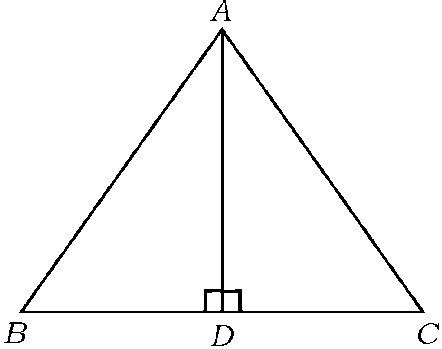
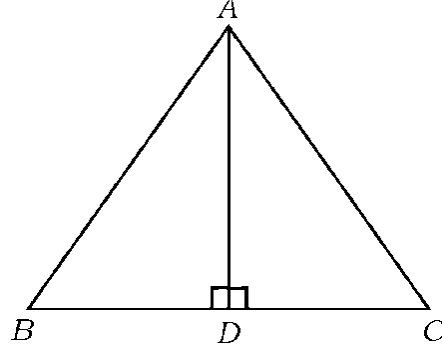
[Turn over

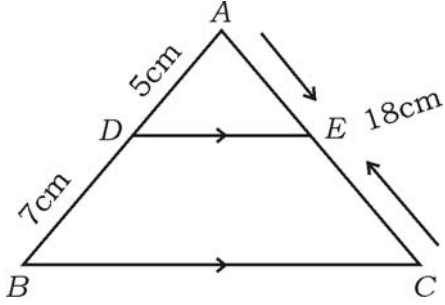
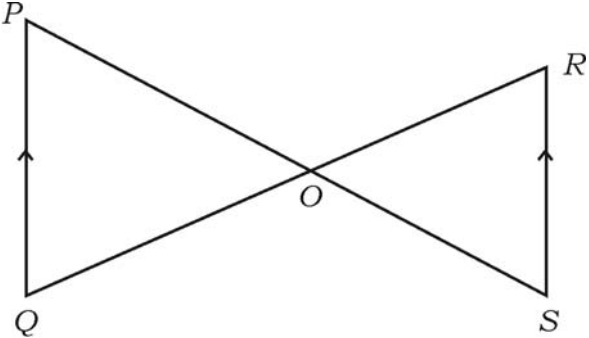
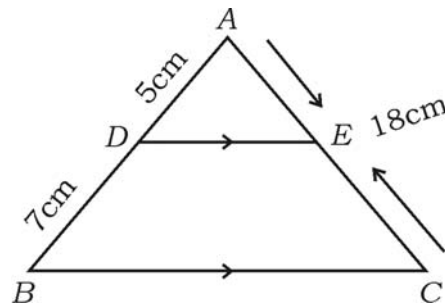
Qn. Nos.	Ans. Key	Value Points	Marks allotted
2.	(D)	<p>The lines represented by $2x + 3y - 9 = 0$ and $4x + 6y - 18 = 0$ are</p> <p>(A) Intersecting lines (B) Perpendicular lines to each other (C) Parallel lines (D) Coincident lines</p> <p><i>Ans. :</i> Coincident lines</p>	1
3.	(B)	<p>A straight line which passes through two points on a circle is</p> <p>(A) a chord (B) a secant (C) a tangent (D) the radius</p> <p><i>Ans. :</i> a secant</p>	1
4.	(C)	<p>If the area of a circle is 49π sq.units then its perimeter is</p> <p>(A) 7π units (B) 9π units (C) 14π units (D) 49π units</p> <p><i>Ans. :</i> 14π units</p>	1
5.	(D)	<p>“The product of two consecutive positive integers is 30.” This can be expressed algebraically as</p> <p>(A) $x(x + 2) = 30$ (B) $x(x - 2) = 30$ (C) $x(x - 3) = 30$ (D) $x(x + 1) = 30$</p> <p><i>Ans. :</i> $x(x + 1) = 30$</p>	1

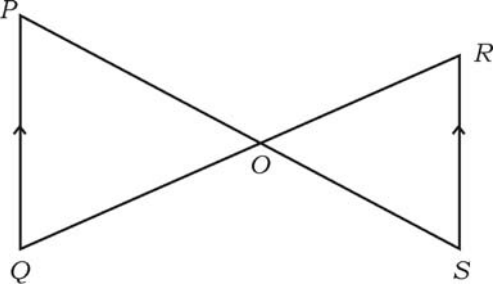
Qn. Nos.	Ans. Key	Value Points	Marks allotted
6.		<p>If a and b are any two positive integers then $\text{HCF} (a, b) \times \text{LCM} (a, b)$ is equal to</p> <p>(A) $a + b$</p> <p>(B) $a - b$</p> <p>(C) $a \times b$</p> <p>(D) $a \div b$</p> <p>Ans. :</p>	1
7.	(C)	<p>The value of $\cos 48^\circ - \sin 42^\circ$ is</p> <p>(A) 0</p> <p>(B) $\frac{1}{4}$</p> <p>(C) $\frac{1}{2}$</p> <p>(D) 1</p> <p>Ans. :</p>	1
8.	(B)	<p>If $P (A) = 0.05$ then $P (\bar{A})$ is</p> <p>(A) 0.59</p> <p>(B) 0.95</p> <p>(C) 1</p> <p>(D) 1.05</p> <p>Ans. :</p>	1

Qn. Nos.	Value Points	Marks allotted
II.	Answer the following : $6 \times 1 = 6$ (Question Numbers 9 to 14, give full marks to direct answers)	
9.	The given graph represents a pair of linear equations in two variables. Write how many solution these pair of equations have.	
	Ans. : one or unique	1
10.	$17 = 6 \times 2 + 5$ is compared with Euclid's Division lemma $a = bq + r$, then which number is representing the remainder ?	
	Ans. : 5	1
11.	Find the zeroes of the polynomial $P(x) = x^2 - 3$.	
	Ans. : $x^2 - 3 = 0$ $(x + \sqrt{3})(x - \sqrt{3}) = 0$	
	$x = -\sqrt{3}, \quad x = \sqrt{3}$	$\frac{1}{2} + \frac{1}{2}$
	Direct answer give full marks.	1

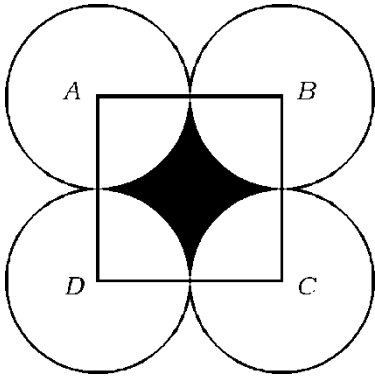
Qn. Nos.	Value Points	Marks allotted
12.	Write the degree of the polynomial $P(x) = 2x^2 - x^3 + 5$. Ans. : 3	1
13.	Find the value of the discriminant of the quadratic equation $2x^2 - 4x + 3 = 0$. Ans. : $b^2 - 4ac$ 1/2 $= (-4)^2 - 4 \times 2 \times 3$ $= 16 - 24$ $= -8$ 1/2	1
III. 15.	Find the sum of first twenty terms of Arithmetic series $2 + 7 + 12 + \dots$ using suitable formula. 2 Ans. : $a = 2$ $d = 7 - 2 = 5$ $n = 20$ $S_n = \frac{n}{2} [2a + (n-1)d]$ 1/2 $S_{20} = \frac{20}{2} [2 \times 2 + (20-1) \times 5]$ 1/2 $= 10 [4 + 19 \times 5]$ $= 10 \times 99$ 1/2 $S_{20} = 990$ 1/2	2

Qn. Nos.	Value Points	Marks allotted
16.	In $\triangle ABC$, $AD \perp BC$ and $AD^2 = BD \times CD$, prove that	
	$AB^2 + AC^2 = (BD + CD)^2$.	2
		
	Ans. :	
		
	In $\triangle ABD$ $AB^2 = AD^2 + BD^2$... (i)	$\frac{1}{2}$
	In $\triangle ADC$ $AC^2 = AD^2 + CD^2$... (ii)	$\frac{1}{2}$
	(i) + (ii)	
	$AB^2 + AC^2 = 2AD^2 + BD^2 + CD^2$	$\frac{1}{2}$
	Put $AD^2 = BD \times CD$	
	$AB^2 + AC^2 = 2BD \cdot CD + BD^2 + CD^2$	$\frac{1}{2}$
	$AB^2 + AC^2 = (BD + CD)^2$	

Qn. Nos.	Value Points	Marks allotted
17.	<p>In $\triangle ABC$, $DE \parallel BC$. If $AD = 5$ cm, $BD = 7$ cm and $AC = 18$ cm, find the length of AE.</p> <div style="text-align: center;">  </div> <p style="text-align: center;">OR</p> <p>In the given figure if $PQ \parallel RS$, prove that $\triangle POQ \sim \triangle SOR$.</p> <div style="text-align: center;">  </div> <p>Ans. :</p> <div style="text-align: center;">  </div> <p>In $\triangle ABC$, $DE \parallel BC$</p> $\therefore \frac{AD}{AB} = \frac{AE}{AC} \quad \frac{1}{2}$ $\frac{5}{12} = \frac{AE}{18} \quad \frac{1}{2}$	2

Qn. Nos.	Value Points	Marks allotted
	$\frac{5}{12} \times 18 = AE$ $AE = \frac{15}{2}$ $AE = 7.5 \text{ cm}$	$\frac{1}{2}$ $\frac{1}{2}$ 2
	<i>Alternate method give marks.</i>	
	<p style="text-align: center;">OR</p>  <p>In $\triangle POQ$ and $\triangle SOR$</p> $\angle P = \angle S \quad (\text{Alternate angles})$ $\angle Q = \angle R \quad (\text{Alternate angles})$ $\angle POQ = \angle ROS \quad (\text{V.O.A.})$ <p style="text-align: center;">(A.A. criterion)</p> $\triangle POQ \sim \triangle SOR.$	
18.	<p>Solve the following pair of linear equations by any suitable method :</p> $x + y = 5$ $2x - 3y = 5.$ <p>Ans. :</p> <p><i>Substitution method :</i></p> $x + y = 5 \quad \dots (i)$ $2x - 3y = 5 \quad \dots (ii)$ $x + y = 5$ $y = 5 - x$	 $\frac{1}{2}$

Qn. Nos.	Value Points	Marks allotted
	<p>Substitute the value of y in equation (ii) we get</p> $2x - 3(5 - x) = 5$ $2x - 15 + 3x = 5$ $5x - 15 = 5$ $5x = 5 + 15$ $5x = 20$ $x = \frac{20}{5}$ $x = 4$	<p>$\frac{1}{2}$</p> <p>$\frac{1}{2}$</p>
	<p>Substituting the value of x in equation (i)</p> $x + y = 5$ $4 + y = 5$ $y = 5 - 4$ $y = 1$	<p>$\frac{1}{2}$</p> <p>2</p>
	<p>Elimination method :</p> $x + y = 5$ $x + y = 5 \quad \dots \text{(i)} \times 2$ $2x - 3y = 5 \quad \dots \text{(ii)}$ $2x + 2y = 10 \quad \dots \text{iii}$ $2x - 3y = 5 \quad \dots \text{ii}$ $\begin{array}{r} (-) \quad (+) \quad (-) \quad \text{(iii) — (ii)} \\ \hline 5y = 5 \\ y = \frac{5}{5} \quad \quad \quad y = 1 \end{array}$	<p>$\frac{1}{2}$</p> <p>$\frac{1}{2}$</p>
	<p>Substitute the value of y in equation (i)</p> $x + y = 5$ $x + 1 = 5$ $x = 5 - 1$ $x = 4$	<p>$\frac{1}{2}$</p> <p>$\frac{1}{2}$</p> <p>2</p>

Qn. Nos.	Value Points	Marks allotted
	<p><i>Cross multiplication method :</i></p> $\begin{array}{ccc} x & y & 1 \\ 1 & -5 & 1 \\ -3 & -5 & 2 \end{array} \quad \begin{array}{c} 1 \\ -3 \end{array}$ $\frac{x}{-5-15} = \frac{y}{-10+5} = \frac{1}{-3-2}$ $\frac{x}{-20} = \frac{y}{-5} = \frac{1}{-5}$ $\frac{x}{-20} = \frac{1}{-5}$ $-5x = -20$ $x = \frac{-20}{-5}$ $x = 4$ $\frac{y}{-5} = -\frac{1}{5}$ $-5y = -5$ $y = \frac{-5}{-5}$ $y = 1$	<p>$\frac{1}{2}$</p> <p>$\frac{1}{2}$</p> <p>$\frac{1}{2}$</p> <p>$\frac{1}{2}$</p> <p>$\frac{1}{2}$</p> <p>2</p>
19.	<p>In the figure, $ABCD$ is a square of side 14 cm. A, B, C and D are the centres of four congruent circles such that each circle touch externally two of the remaining three circles. Find the area of the shaded region.</p> 	2
	<p><i>Ans. :</i></p>	

Qn. Nos.	Value Points	Marks allotted
	Area of the shaded region = Area of square – 4 × area of quadrant	1/2
	Area of a square = (side) ² = (14) ²	
	Area of the square = 196 cm ²	1/2
	Area of a quadrant = $\frac{1}{4} \pi r^2$	
	4 × Area of quadrant = $4 \times \frac{1}{4} \pi r^2$ = $4 \times \frac{1}{4} \times \frac{22}{7} \times 7^2$	1/2
	4 × Area of quadrant = 22 × 7 = 154 cm ²	
	Area of shaded region = 196 – 154	
	Area of shaded region = 42 cm ²	1/2
	<i>Alternate method :</i>	
	Area of the shaded region = Area of a square – 4 × area of quadrant	1/2
	Area of a square = (side) ² = (14) ²	
	Area of the square = 196 cm ²	1/2
	Area of a quadrant = $\frac{\theta}{360^\circ} \times \pi r^2$	
	4 × area of a quadrant = $4 \times \frac{90^\circ}{360^\circ} \times \frac{22}{7} \times 7^2$ = 154 cm ²	1/2
	Area of shaded region = 196 – 154	
	Area of shaded region = 42 cm ² .	1/2
	<i>Note :</i> Any alternate method marks can be given. [Area of shaded region = Area of a square – Area of a circle]	2

Qn. Nos.	Value Points	Marks allotted
20.	Draw a circle of radius 4 cm and construct a pair of tangents such that the angle between them is 60° .	2
	Ans. : Angle between the radius = $180^\circ - 60^\circ = 120^\circ$	$\frac{1}{2}$
	Circle — $\frac{1}{2}$ Radii — $\frac{1}{2}$ Tangents — $\frac{1}{2}$	2
21.	Find the co-ordinates of point which divides the line segment joining the points $(4, -3)$ and $(8, 5)$ in the ratio $3 : 1$ internally.	2
	Ans. : Let $P(x, y)$ be the required point $(x, y) = \left(\frac{m_1 x_2 + m_2 x_1}{m_1 + m_2}, \frac{m_1 y_2 + m_2 y_1}{m_1 + m_2} \right)$	1
	OR $P(x, y) = \left(\frac{mx_2 + nx_1}{m+n}, \frac{my_2 + ny_1}{m+n} \right)$	

Qn. Nos.	Value Points	Marks allotted
	$= \left(\frac{3 \times (8) + (4)}{3+1}, \frac{3 \times (5) + 1 \times (-3)}{3+1} \right)$ $= \left(\frac{24+4}{4}, \frac{15-3}{4} \right)$ $= \left(\frac{28}{4}, \frac{12}{4} \right)$	1/2
22.	<p>Prove that $3 + \sqrt{5}$ is an irrational number.</p> <p><i>Ans. :</i></p> <p>Let us assume $3 + \sqrt{5}$ is a rational number</p> $3 + \sqrt{5} = \frac{p}{q} \text{ where } p, q \in \mathbb{Z}, q \neq 0$ $\sqrt{5} = \frac{p}{q} - 3$ <p>Rearranging this equation</p> $\sqrt{5} = \frac{p-3q}{q}$ <p>Since p and q are integers we get $\frac{p-3q}{q}$ is rational</p> <p>So $\sqrt{5}$ is rational.</p> <p>But this contradicts the fact that $\sqrt{5}$ is irrational</p> <p>$\therefore 3 + \sqrt{5}$ is irrational</p>	1/2 2 1/2 1/2 1/2
23.	<p>The sum and product of the zeroes of a quadratic polynomial</p> <p>$P(x) = ax^2 + bx + c$ are -3 and 2 respectively. Show that $b + c = 5a$.</p> <p><i>Ans. :</i></p>	2

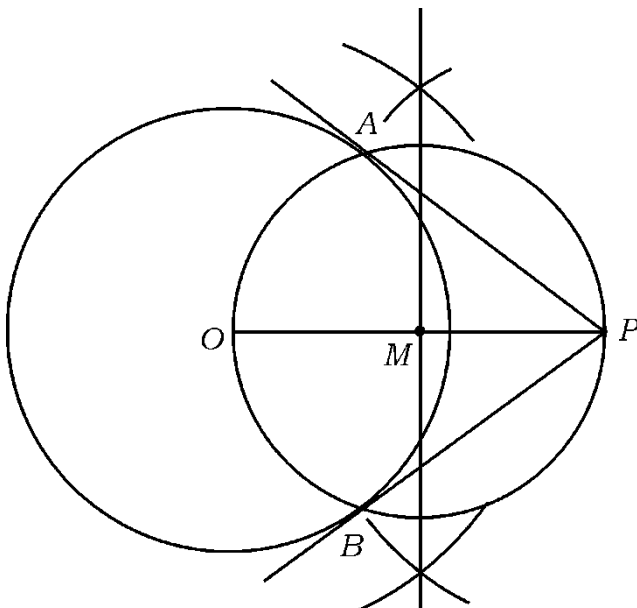
Qn. Nos.	Value Points	Marks allotted
24.	Let α and β are the zeroes of the quadratic polynomial $P(x)$	
	$\alpha + \beta = -3$	$\frac{1}{2}$
	$-\frac{b}{a} = -3$	
	$-b = -3a$	
	$b = 3a$... (i)	$\frac{1}{2}$
	$\alpha\beta = 2$	
	$\frac{c}{a} = 2$	
	$c = 2a$... (ii)	$\frac{1}{2}$
	(i) + (ii) gives	
	$b + c = 3a + 2a$	
$b + c = 5a.$	$\frac{1}{2}$	
2		
24.	Find the quotient and the remainder when $P(x) = 3x^3 + x^2 + 2x + 5$ is divided by $g(x) = x^2 + 2x + 1.$	2
	Ans. :	
	$x^2 + 2x + 1 \overline{) 3x^3 + x^2 + 2x + 5}$	
	$\begin{array}{r} 3x - 5 \\ \underline{3x^3 + 6x^2 + 3x} \\ 3x^3 + x^2 + 2x + 5 \\ \underline{3x^3 + 6x^2 + 3x} \\ -5x^2 - x + 5 \\ \underline{-5x^2 - 10x - 5} \\ 9x + 10 \end{array}$	1
	$\begin{array}{r} (-) \quad (-) \quad (-) \\ \underline{-5x^2 - x + 5} \\ -5x^2 - 10x - 5 \\ \underline{(+)\quad (+)\quad (+)} \\ 9x + 10 \end{array}$	
	Quotient = $3x - 5$	$\frac{1}{2}$
	Remainder = $9x + 10$	$\frac{1}{2}$
	2	2

Qn. Nos.	Value Points	Marks allotted
25.	<p>Solve $2x^2 - 5x + 3 = 0$ by using formula.</p> <p>Ans. :</p> <p>Comparing the equation with</p> $ax^2 + bx + c = 0$ $a = 2 \quad b = -5 \quad c = 3$ $x = \frac{-b \pm \sqrt{b^2 - 4ac}}{2a}$ $x = \frac{-(-5) \pm \sqrt{(-5)^2 - 4 \times 2 \times 3}}{2 \times 2}$ $x = \frac{5 \pm \sqrt{25 - 24}}{4}$ $x = \frac{5 \pm \sqrt{1}}{4}$ $x = \frac{5 \pm 1}{4}$ $x = \frac{5+1}{4}, \quad x = \frac{5-1}{4}$ $x = \frac{6}{4} \quad x = \frac{4}{4}$ $x = \frac{3}{2} \quad x = 1$	<p>2</p> <p>$\frac{1}{2}$</p> <p>$\frac{1}{2}$</p> <p>$\frac{1}{2}$</p> <p>$\frac{1}{2}$</p> <p>2</p>
26.	<p>The length of a rectangular field is 3 times its breadth. If the area of the field is 147 sq.m find its length and breadth.</p> <p>Ans. :</p> <p>Let the breadth be, x</p> <p>\therefore Length = $3x$</p> $A = l \times b$ $147 = 3x \times x$ $147 = 3x^2$ $x^2 = \frac{147}{3}$	<p>2</p> <p>$\frac{1}{2}$</p> <p>$\frac{1}{2}$</p>

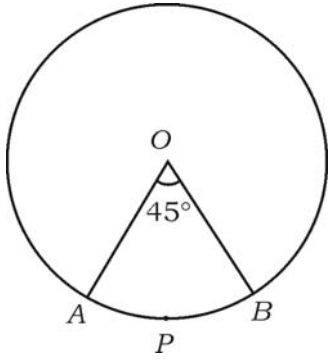
Qn. Nos.	Value Points	Marks allotted
27.	$x^2 = 49$ $x = \pm \sqrt{49}$ $x = \pm 7$ $\therefore \text{Breadth } (x) = 7 \text{ cm}$ $\text{Length } (3x) = 3 \times 7 = 21 \text{ cm}$	$\frac{1}{2}$ $\frac{1}{2}$ 2
	<p data-bbox="284 638 1002 705">If $\sin \theta = \frac{12}{13}$ find the values of $\cos \theta$ and $\tan \theta$.</p> <p data-bbox="774 772 821 806" style="text-align: center;">OR</p> <p data-bbox="284 840 1225 896">If $\sqrt{3} \tan \theta = 1$ and θ is acute find the value of $\sin 3\theta + \cos 2\theta$.</p> <p data-bbox="284 918 375 952">Ans. :</p> <div data-bbox="598 963 997 1299" style="text-align: center;"> </div> $AB^2 = AC^2 + BC^2$ $13^2 = 12^2 + BC^2$ $169 = 144 + BC^2$ $BC^2 = 169 - 144$ $BC^2 = 25 \quad BC = \sqrt{25}$ $BC = 5$ $\cos \theta = \frac{BC}{AB} = \frac{5}{13}$ $\tan \theta = \frac{AC}{BC} = \frac{12}{5}$	<p data-bbox="1268 649 1292 683" style="text-align: right;">2</p> <p data-bbox="1268 1310 1300 1344" style="text-align: right;">$\frac{1}{2}$</p> <p data-bbox="1268 1691 1300 1724" style="text-align: right;">$\frac{1}{2}$</p> <p data-bbox="1268 1758 1300 1792" style="text-align: right;">$\frac{1}{2}$</p> <p data-bbox="1268 1848 1300 1881" style="text-align: right;">$\frac{1}{2}$</p> <p data-bbox="1388 1881 1412 1915" style="text-align: right;">2</p> <p data-bbox="774 1937 821 1971" style="text-align: center;">OR</p>

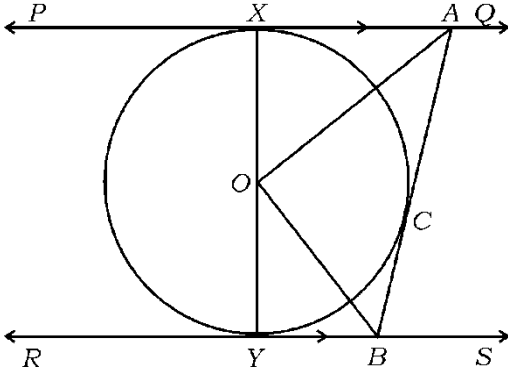
Qn. Nos.	Value Points	Marks allotted
28.	$\sqrt{3} \tan \theta = 1$ $\tan \theta = \frac{1}{\sqrt{3}}$	1/2
	$\tan \theta = \tan 30^\circ$ $\theta = 30^\circ$	
	$\sin 3\theta = \sin 3 \times 30^\circ = \sin 90^\circ = 1$ $\cos 2\theta = \cos 2 \times 30^\circ = \cos 60^\circ = \frac{1}{2}$	1
	$\sin 3\theta + \cos 2\theta = 1 + \frac{1}{2} = 1\frac{1}{2}$	
	$\sin 3\theta + \cos 2\theta = \frac{3}{2}$	1/2
	Prove that $\left(\frac{1 + \cos \theta}{1 - \cos \theta} \right) = (\operatorname{cosec} \theta + \cot \theta)^2$.	2
	<i>Ans. :</i>	
	L.H.S. = $\left(\frac{1 + \cos \theta}{1 - \cos \theta} \right)$	
	$= \frac{(1 + \cos \theta)}{(1 - \cos \theta)} \times \frac{(1 + \cos \theta)}{(1 + \cos \theta)}$	1/2
	$= \frac{(1 + \cos \theta)^2}{1^2 - \cos^2 \theta}$	
$= \frac{(1 + \cos \theta)^2}{\sin^2 \theta}$	1/2	
$= \left(\frac{1 + \cos \theta}{\sin \theta} \right)^2$		
$= \left(\frac{1}{\sin \theta} + \frac{\cos \theta}{\sin \theta} \right)^2$	1/2	
$\frac{1 + \cos \theta}{1 - \cos \theta} = (\operatorname{cosec} \theta + \cot \theta)^2 = \text{R.H.S.}$	1/2	
Any alternative method, marks can be awarded.	2	

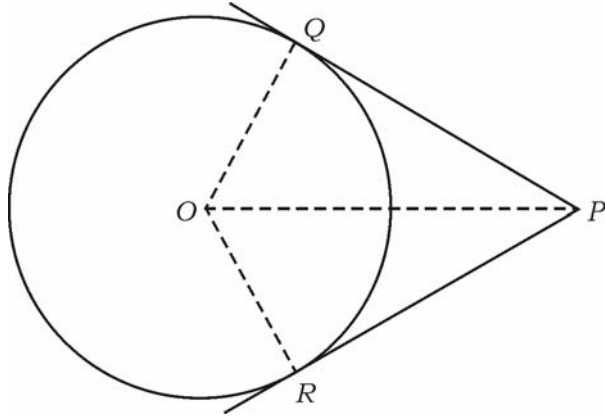
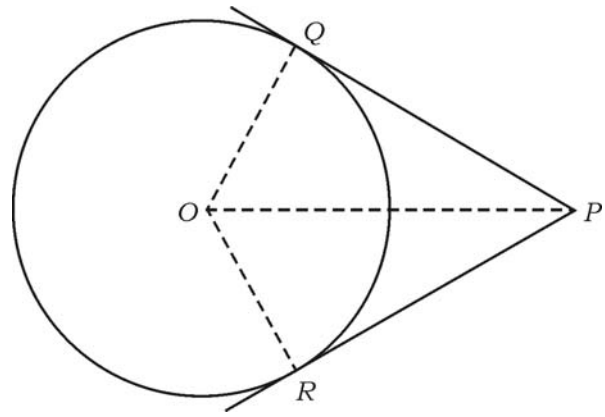
Qn. Nos.	Value Points	Marks allotted
29.	<p>A cubical die numbered from 1 to 6 are rolled twice. Find the probability of getting the sum of numbers on its faces is 10. 2</p> <p>Ans. :</p> $n(S) = 36 \quad \frac{1}{2}$ $n(A) = \{(5, 5) (4, 6) (6, 4)\} = 3 \quad \frac{1}{2}$ $P(A) = \frac{n(A)}{n(S)} \quad \frac{1}{2}$ $= \frac{3}{36} \quad \frac{1}{2}$	2
30.	<p>The radii of two circular ends of a frustum of a cone shaped dustbin are 15 cm and 8 cm. If its depth is 63 cm, find the volume of the dustbin. 2</p> <p>Ans. :</p> $r_1 = 15 \text{ cm} \quad r_2 = 8 \text{ cm} \quad h = 63 \text{ cm}$ $\text{Volume of dustbin (V)} = \frac{1}{3} \pi h (r_1^2 + r_2^2 + r_1 r_2) \quad \frac{1}{2}$ $= \frac{1}{3} \times \frac{22}{7} \times 63 (15^2 + 8^2 + 15 \times 8) \quad \frac{1}{2}$ $= 66 (225 + 64 + 120) \quad \frac{1}{2}$ $= 66 \times 409$ $\text{Volume of dustbin (V)} = 26994 \text{ cm}^3. \quad \frac{1}{2}$	2
31.	<p>If x, 13, y and 3 are in arithmetic progression, find the values of x and y. 2</p> <p>Ans. :</p> $\text{Let } x = a + 3d, \quad 13 = a + 2d \quad y = a + d \quad \text{and} \quad a = 3 \quad \frac{1}{2}$ $a + 2d = 13$ $3 + 2d = 13$ $2d = 13 - 3$	

Qn. Nos.	Value Points	Marks allotted
33.	<p>Find the HCF and LCM of 6 and 20.</p> <p>Ans. :</p> $\begin{array}{r} 2 \overline{) 6} \\ 3 \overline{) 3} \\ \hline 1 \end{array}$ $\begin{array}{r} 2 \overline{) 20} \\ 2 \overline{) 10} \\ 5 \overline{) 5} \\ \hline 1 \end{array}$ <p>Factors of 6 = 2×3</p> <p>Factors of 20 = $2^2 \times 5$</p> <p>H.C.F. = 2</p> <p>L.C.M. = $2^2 \times 3 \times 5$ = $4 \times 3 \times 5$</p> <p>L.C.M. = 60</p> <p>Any correct alternate method may be given marks.</p>	<p>2</p> <p>$\frac{1}{2}$</p> <p>$\frac{1}{2}$</p> <p>$\frac{1}{2}$</p> <p>$\frac{1}{2}$</p> <p>$\frac{1}{2}$</p> <p>2</p>
34.	<p>Draw a tangent to a circle of radius 3 cm from a point 5 cm away from its centre.</p> <p>Ans. :</p>  <p>Circle — $\frac{1}{2}$</p> <p>Bisecting OP — $\frac{1}{2}$</p> <p>Tangents — 1</p>	<p>2</p> <p>2</p>

Qn. Nos.	Value Points	Marks allotted
35.	<p>In a circle of radius 21 cm an arc subtends an angle of 60° at the centre. Find the length of the arc.</p> <p style="text-align: right;">2</p> <p><i>Ans. :</i></p> <p>$r = 21 \text{ cm} \quad \theta = 60^\circ$ 1/2</p> <p>Length of the arc = $\frac{\theta}{360^\circ} \times 2\pi r$ 1/2</p> $= \frac{60^\circ}{360^\circ} \times 2 \times \frac{22}{7} \times 21$ <p style="text-align: right;">1/2</p> <p style="text-align: center;">Length of the arc = 22 cm 1/2</p>	2
36.	<p>Express the given equation in the standard form</p> <p>$(x - 2)^2 + 1 = 2x + 3$. 2</p> <p><i>Ans. :</i></p> <p>$(x - 2)^2 + 1 = 2x + 3$</p> <p>$x^2 - 2 \times x \times 2 + 2^2 + 1 = 2x + 3$ 1/2</p> <p>$x^2 - 4x + 4 + 1 = 2x + 3$ 1/2</p> <p>$x^2 - 4x + 5 = 2x + 3$</p> <p>$x^2 - 4x + 5 - 2x - 3 = 0$ 1/2</p> <p>Standard form = $x^2 - 6x + 2 = 0$ 1/2</p>	2
37.	<p>Write the probability of sure event and impossible event. 2</p> <p><i>Ans. :</i></p> <p>Probability of sure event — 1</p> <p>Probability of Impossible event — 0</p>	2

Qn. Nos.	Value Points	Marks allotted
38.	<p>Find the area of the sector of a circle with radius 4 cm and of angle 45°. (use $\pi = 3.14$).</p> <div style="text-align: center;">  </div> <p>Ans. :</p> <p>$\theta = 45^\circ$ $r = 4$</p> <p>Area of the sector = $\frac{\theta}{360^\circ} \times \pi r^2$</p> <p style="margin-left: 100px;">$= \frac{45^\circ}{360^\circ} \times 3.14 \times 4^2$</p> <p style="margin-left: 100px;">$= \frac{1}{8} \times 3.14 \times 16$</p> <p>Area of the sector = 6.28 cm^2</p>	<p style="text-align: right;">2</p> <p style="text-align: right;">$\frac{1}{2}$</p> <p style="text-align: right;">$\frac{1}{2}$</p> <p style="text-align: right;">$\frac{1}{2}$</p> <p style="text-align: right;">$\frac{1}{2}$</p> <p style="text-align: right;">2</p>
39.	<p>Find the distance between (3, 4) from the origin.</p> <p>Ans. :</p> <p>Co-ordinates of origin (0, 0)</p> <p>$(x_1, y_1) = (0, 0)$ $(x_2, y_2) = (3, 4)$</p> <p>$d = \sqrt{(x_2 - x_1)^2 + (y_2 - y_1)^2}$</p> <p style="margin-left: 40px;">$= \sqrt{(3 - 0)^2 + (4 - 0)^2}$</p> <p style="margin-left: 40px;">$= \sqrt{3^2 + 4^2}$</p> <p style="margin-left: 40px;">$= \sqrt{9 + 16}$</p> <p style="margin-left: 40px;">$= \sqrt{25}$</p> <p>$d = 5$ units.</p>	<p style="text-align: right;">2</p> <p style="text-align: right;">$\frac{1}{2}$</p> <p style="text-align: right;">$\frac{1}{2}$</p> <p style="text-align: right;">$\frac{1}{2}$</p> <p style="text-align: right;">2</p>

Qn. Nos.	Value Points	Marks allotted
40.	<p>Two coins are tossed together. Find the probability of getting at least one head.</p> <p style="text-align: right;">2</p> <p>Ans. :</p> <p>$n(S) = 4$ $\frac{1}{2}$</p> <p>$n(A) = \{(H, H), (H, T), (T, H)\} = 3$ $\frac{1}{2}$</p> <p>$P(A) = \frac{n(A)}{n(S)}$ $\frac{1}{2}$</p> <p>$P(A) = \frac{3}{4}$ $\frac{1}{2}$</p>	2
IV. 41.	<p>Prove that “the lengths of tangents drawn from an external point to a circle are equal”.</p> <p style="text-align: right;">3</p> <p style="text-align: center;">OR</p> <p>In the given figure PQ and RS are two parallel tangents to a circle with centre O and another tangent AB with point of contact C intersecting PQ at A and RS at B. Prove that $\angle AOB = 90^\circ$.</p> <div style="text-align: center;">  </div> <p>Ans. :</p>	

Qn. Nos.	Value Points	Marks allotted
	<div style="text-align: center;">  </div> <p style="text-align: right; margin-right: 20px;">$\frac{1}{2}$</p> <p><i>Data :</i> O is the centre of the circle P is an external point $\frac{1}{2}$ PQ and PR are the tangents $\frac{1}{2}$</p> <p><i>To prove :</i> $PQ = PR$ $\frac{1}{2}$</p> <p><i>Construction :</i> OQ, OR and OP are joined $\frac{1}{2}$</p> <p><i>Proof :</i> In ΔPOQ and ΔPOR $\angle PQO = \angle PRO$ (Radius drawn at the point of contact is perpendicular to the tangent) <i>hyp</i> $OP = OP$ (Common side) $OQ = OR$ (Radii of same circle)</p> <p style="text-align: right; margin-right: 20px;">$\therefore \Delta POQ \cong \Delta POR$ (R.H.S. theorem) $\frac{1}{2}$</p> <p style="text-align: right; margin-right: 20px;">$\therefore PQ = PR$ $\frac{1}{2}$</p> <p><i>Alternate method :</i></p> <div style="text-align: center; margin-top: 20px;">  </div> <p style="text-align: right; margin-right: 20px;">$\frac{1}{2}$</p>	<p>3</p>

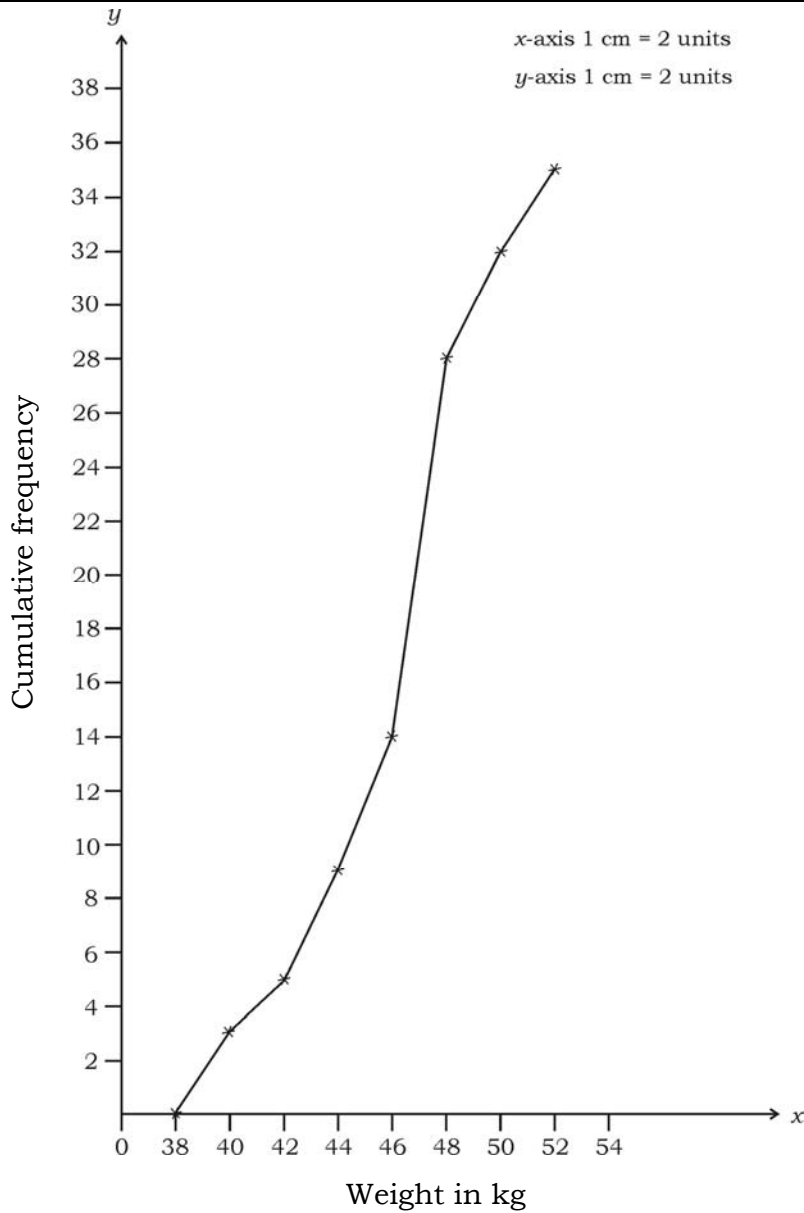
Qn. Nos.	Value Points	Marks allotted
	<p><i>Proof:</i> We are given a circle with centre O a point P lying outside the circle and two tangents PQ and PR on the circle from P. 1/2</p> <p>We are required to prove that $PQ = PR$ 1/2</p> <p>For this we join OP, OQ and OR.</p> <p>Then $\angle OQP$ and $\angle ORP$ are right angles because these are angles between the radii and tangents. 1/2</p> <p>According to theorem 4.1 they are right angles</p> <p>Now in right angles $\angle OQP$ and $\angle ORP$</p> <p style="text-align: center;">$OQ = OR$ (Radii of same circle) 1/2</p> <p style="text-align: center;">$OP = OP$ (common)</p> <p>Therefore $\triangle OQP = \triangle ORP$ (R.H.S.)</p> <p>This gives $PQ = PR$. 1/2</p> <div style="text-align: center;"> </div> <p>Let $\angle OAB = x$</p> <p>$\therefore \angle OAX = x$</p> <p>$\angle OBA = y$ 1/2</p> <p>$\angle OBY = y$</p> <p>$PQ \parallel RS$</p> <p>$\therefore \angle XAB + \angle YBA = 180^\circ$</p> <p>$2x + 2y = 180^\circ$ 1</p> <p>$2(x + y) = 180^\circ$</p>	3

Qn. Nos.	Value Points	Marks allotted																												
42.	$x + y = \frac{180^\circ}{2}$ $x + y = 90^\circ$ <p>In $\triangle AOB$</p> $\angle OAB + \angle OBA + \angle AOB = 180^\circ$ $x + y + \angle AOB = 180^\circ$ $90^\circ + \angle AOB = 180^\circ \quad (\because x + y = 90^\circ)$ $\angle AOB = 180^\circ - 90^\circ$ $\angle AOB = 90^\circ$ <p>Calculate the median of the following frequency distribution table : 3</p> <table border="1" data-bbox="571 887 1136 1281"> <thead> <tr> <th>Class-interval</th> <th>Frequency (f_i)</th> </tr> </thead> <tbody> <tr> <td>1 — 4</td> <td>6</td> </tr> <tr> <td>4 — 7</td> <td>30</td> </tr> <tr> <td>7 — 10</td> <td>40</td> </tr> <tr> <td>10 — 13</td> <td>16</td> </tr> <tr> <td>13 — 16</td> <td>4</td> </tr> <tr> <td>16 — 19</td> <td>4</td> </tr> </tbody> </table> $\Sigma f_i = 100$ <p style="text-align: center;">OR</p> <p>Calculate the mode for the following frequency distribution table.</p> <table border="1" data-bbox="571 1444 1136 1839"> <thead> <tr> <th>Class-interval</th> <th>Frequency (f_i)</th> </tr> </thead> <tbody> <tr> <td>10 — 25</td> <td>2</td> </tr> <tr> <td>25 — 40</td> <td>3</td> </tr> <tr> <td>40 — 55</td> <td>7</td> </tr> <tr> <td>55 — 70</td> <td>6</td> </tr> <tr> <td>70 — 85</td> <td>6</td> </tr> <tr> <td>85 — 100</td> <td>6</td> </tr> </tbody> </table> $\Sigma f_i = 30$ <p>Ans. :</p>	Class-interval	Frequency (f_i)	1 — 4	6	4 — 7	30	7 — 10	40	10 — 13	16	13 — 16	4	16 — 19	4	Class-interval	Frequency (f_i)	10 — 25	2	25 — 40	3	40 — 55	7	55 — 70	6	70 — 85	6	85 — 100	6	<p style="text-align: center;">1</p> <p style="text-align: center;">$\frac{1}{2}$</p> <p style="text-align: center;">3</p>
Class-interval	Frequency (f_i)																													
1 — 4	6																													
4 — 7	30																													
7 — 10	40																													
10 — 13	16																													
13 — 16	4																													
16 — 19	4																													
Class-interval	Frequency (f_i)																													
10 — 25	2																													
25 — 40	3																													
40 — 55	7																													
55 — 70	6																													
70 — 85	6																													
85 — 100	6																													

Qn. Nos.	Value Points			Marks allotted
	<i>Class-interval</i>	<i>Frequency</i>	<i>Cumulative frequency</i>	
	1 — 4	6	6	
	4 — 7	30	36	
	7 — 10	40	76	1/2
	10 — 13	16	92	
	13 — 16	4	96	
	16 — 19	4	100	
	$\frac{n}{2} = \frac{100}{2} = 50$			
	Lower limit of median class	$l = 7$		
	C.F. of class preceding median class	$c.f. = 36$		1
	Frequency of median class	$f = 40$		
	Class size	$h = 3$		
	Median = $l + \left[\frac{\frac{n}{2} - c.f.}{f} \right] \times h$			1/2
	$= 7 + \left[\frac{50 - 36}{40} \right] \times 3$			1/2
	$= 7 + \left[\frac{14}{40} \right] \times 3$			
	$= 7 + \frac{21}{20}$			
	$= 7 + 1.05$			
	Median = 8.05			1/2
	OR			
	Lower limit	$l = 40$		
	Frequency of modal class	$f_1 = 7$		
	Frequency of preceding modal class	$f_0 = 3$		

Qn. Nos.	Value Points	Marks allotted																	
43.	Succeeding modal class $f_2 = 6$																		
	Class size $h = 15$	1																	
	Mode = $l + \left[\frac{f_1 - f_0}{2f_1 - f_0 - f_2} \right] \times h$	$\frac{1}{2}$																	
	= $40 + \left[\frac{7 - 3}{14 - 6 - 3} \right] \times 15$	$\frac{1}{2}$																	
	= $40 + \left[\frac{4}{5} \right] \times 15$																		
	= $40 + \frac{4}{5} \times 15$	$\frac{1}{2}$																	
	= $40 + 12$																		
	Mode = 52	$\frac{1}{2}$																	
	During the medical check-up of 35 students of a class, their weights were recorded as follows. Draw a less than type of ogive for the given data :	3																	
	<table border="1" data-bbox="568 1267 1139 1877"> <thead> <tr> <th data-bbox="568 1267 852 1375"><i>Weight (in kg)</i></th> <th data-bbox="852 1267 1139 1375"><i>Number of students</i></th> </tr> </thead> <tbody> <tr> <td data-bbox="568 1375 852 1438">Less than 38</td> <td data-bbox="852 1375 1139 1438">0</td> </tr> <tr> <td data-bbox="568 1438 852 1500">Less than 40</td> <td data-bbox="852 1438 1139 1500">3</td> </tr> <tr> <td data-bbox="568 1500 852 1563">Less than 42</td> <td data-bbox="852 1500 1139 1563">5</td> </tr> <tr> <td data-bbox="568 1563 852 1626">Less than 44</td> <td data-bbox="852 1563 1139 1626">9</td> </tr> <tr> <td data-bbox="568 1626 852 1688">Less than 46</td> <td data-bbox="852 1626 1139 1688">14</td> </tr> <tr> <td data-bbox="568 1688 852 1751">Less than 48</td> <td data-bbox="852 1688 1139 1751">28</td> </tr> <tr> <td data-bbox="568 1751 852 1814">Less than 50</td> <td data-bbox="852 1751 1139 1814">32</td> </tr> <tr> <td data-bbox="568 1814 852 1877">Less than 52</td> <td data-bbox="852 1814 1139 1877">35</td> </tr> </tbody> </table>	<i>Weight (in kg)</i>	<i>Number of students</i>	Less than 38	0	Less than 40	3	Less than 42	5	Less than 44	9	Less than 46	14	Less than 48	28	Less than 50	32	Less than 52	35
<i>Weight (in kg)</i>	<i>Number of students</i>																		
Less than 38	0																		
Less than 40	3																		
Less than 42	5																		
Less than 44	9																		
Less than 46	14																		
Less than 48	28																		
Less than 50	32																		
Less than 52	35																		
Ans. :																			

Qn. Nos.	Value Points	Marks allotted
----------	--------------	----------------



x and y axis scale —	1/2
Plotting points —	1 1/2
Drawing graph —	1

3

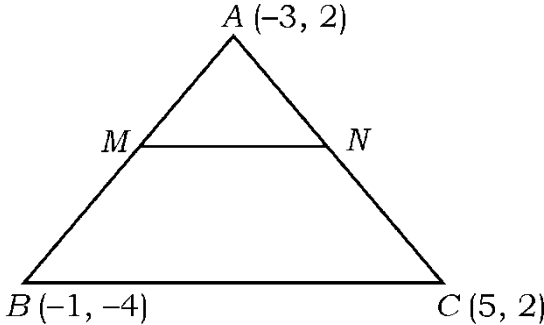
Note : Scale, x-axis, y-axis can be changed.

44. The seventh term of an Arithmetic progression is four times its second term and twelfth term is 2 more than three times of its fourth term. Find the progression. 3

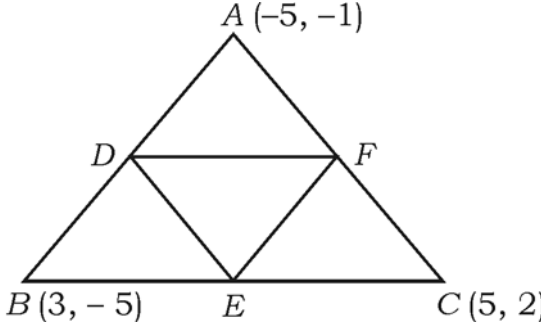
OR

Qn. Nos.	Value Points	Marks allotted
	<p>A line segment is divided into four parts forming an Arithmetic progression. The sum of the lengths of 3rd and 4th parts is three times the sum of the lengths of first two. If the length of fourth part is 14 cm, find the total length of the line segment.</p> <p>Ans. :</p> $\left. \begin{aligned} a_7 = T_7 &= 4(T_2) a_2 \\ a + 6d &= 4(a + d) \\ a + 6d &= 4a + 4d \\ 6d - 4d &= 4a - a \end{aligned} \right\}$ $2d = 3a \quad \dots (i)$ $a_{12} = T_{12} = 3T_4 (a_4) + 2$ $a + 11d = 3(a + 3d) + 2$ $a + 11d = 3a + 9d + 2$ $11d - 9d = 3a - a + 2$ $2d = 2a + 2 \quad \dots (ii)$ <p>substituting (i) in (ii)</p> $3a = 2a + 2$ $3a - 2a = 2$ $a = 2$ $2d = 3a$ $2d = 3 \times 2$ $2d = 6$ $d = \frac{6}{2}$ $d = 3$	<p>$\frac{1}{2}$</p> <p>$\frac{1}{2}$</p> <p>$\frac{1}{2}$</p> <p>$\frac{1}{2}$</p>

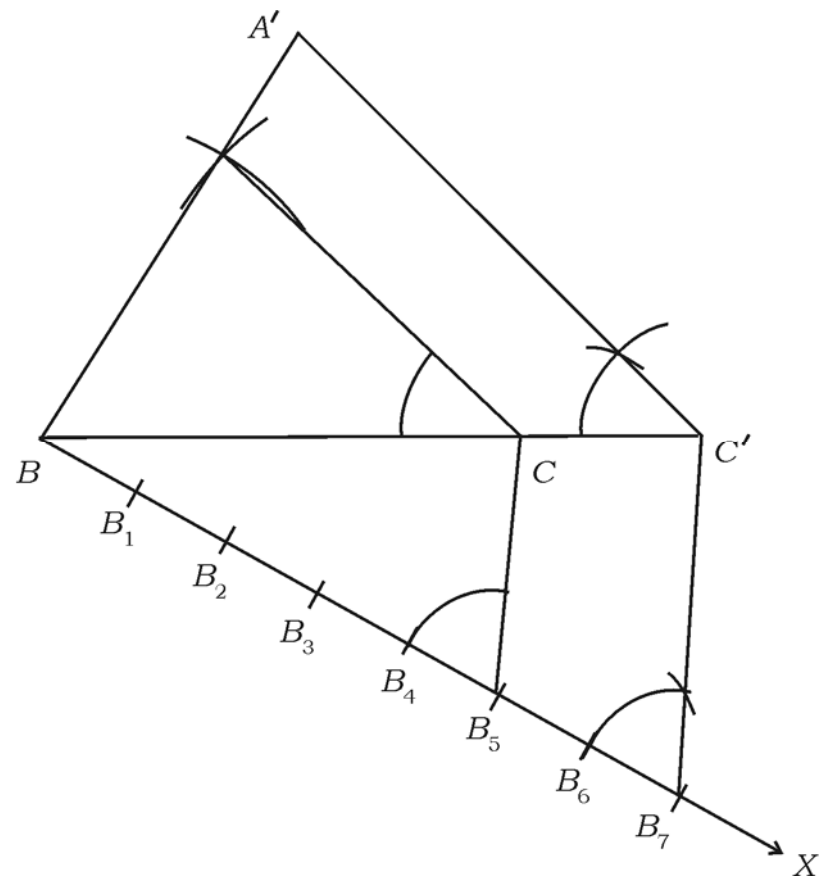
Qn. Nos.	Value Points	Marks allotted
	<p>∴ The required sequence</p> $a, \quad a + d, \quad a + 2d$ $2, \quad 2 + 3, \quad 2 + 2 \times 3$ <p>The required sequence 2, 5, 8</p> <p style="text-align: center;">OR</p> <p>Let the four parts of the line segment be</p> $a - 3d, \quad a - d, \quad a + d, \quad a + 3d$ <p>According to the data</p> $(a + d + a + 3d) = 3(a - 3d + a - d)$ $2a + 4d = 3(2a - 4d)$ $2(a + 2d) = 3 \times 2(a - 2d)$ $a + 2d = 3a - 6d$ $2d + 6d = 3a - a$ $2a = 8d$ $a = \frac{8d}{2}$ $a = 4d$ $a + 3d = 14$ $4d + 3d = 14$ $7d = 14$ $d = \frac{14}{7}$ $d = 2$ $a = 4d$ $a = 4 \times 2$ $a = 8$	<p>1/2</p> <p>3</p> <p>1/2</p> <p>1/2</p> <p>1/2</p> <p>1/2</p> <p>1/2</p> <p>1/2</p> <p>1/2</p> <p>1/2</p> <p>1/2</p> <p>1/2</p> <p>1/2</p>

Qn. Nos.	Value Points	Marks allotted
45.	<p>∴ Length of the line segment =</p> $= a - 3d + a - d + a + d + a + 3d$ $= 4a$ $= 4 \times 8 = 32 \text{ cm.}$ <p>The vertices of a ΔABC are $A(-3, 2)$, $B(-1, -4)$ and $C(5, 2)$. If M and N are the mid-points of AB and AC respectively, show that $2MN = BC$.</p> <p style="text-align: center;">OR</p> <p>The vertices of a ΔABC are $A(-5, -1)$, $B(3, -5)$, $C(5, 2)$. Show that the area of the ΔABC is four times the area of the triangle formed by joining the mid-points of the sides of the triangle ABC.</p> <p>Ans. :</p> <div style="text-align: center;">  </div> <p>Co-ordinates of $M = \left(\frac{x_1 + x_2}{2}, \frac{y_1 + y_2}{2} \right)$</p> $= \left(\frac{-1 - 3}{2}, \frac{-4 + 2}{2} \right)$ <p>Co-ordinates of $M = (-2, -1)$</p> <p>Co-ordinates of $N = \left(\frac{5 - 3}{2}, \frac{2 + 2}{2} \right)$</p> $= \left(\frac{2}{2}, \frac{4}{2} \right)$ <p>Co-ordinates of $N = (1, 2)$</p> <p>Length of $MN = \sqrt{(x_2 - x_1)^2 + (y_2 - y_1)^2}$</p>	<p style="text-align: right;">1/2</p> <p style="text-align: right;">3</p> <p style="text-align: right;">3</p> <p style="text-align: right;">1</p> <p style="text-align: right;">1/2</p>

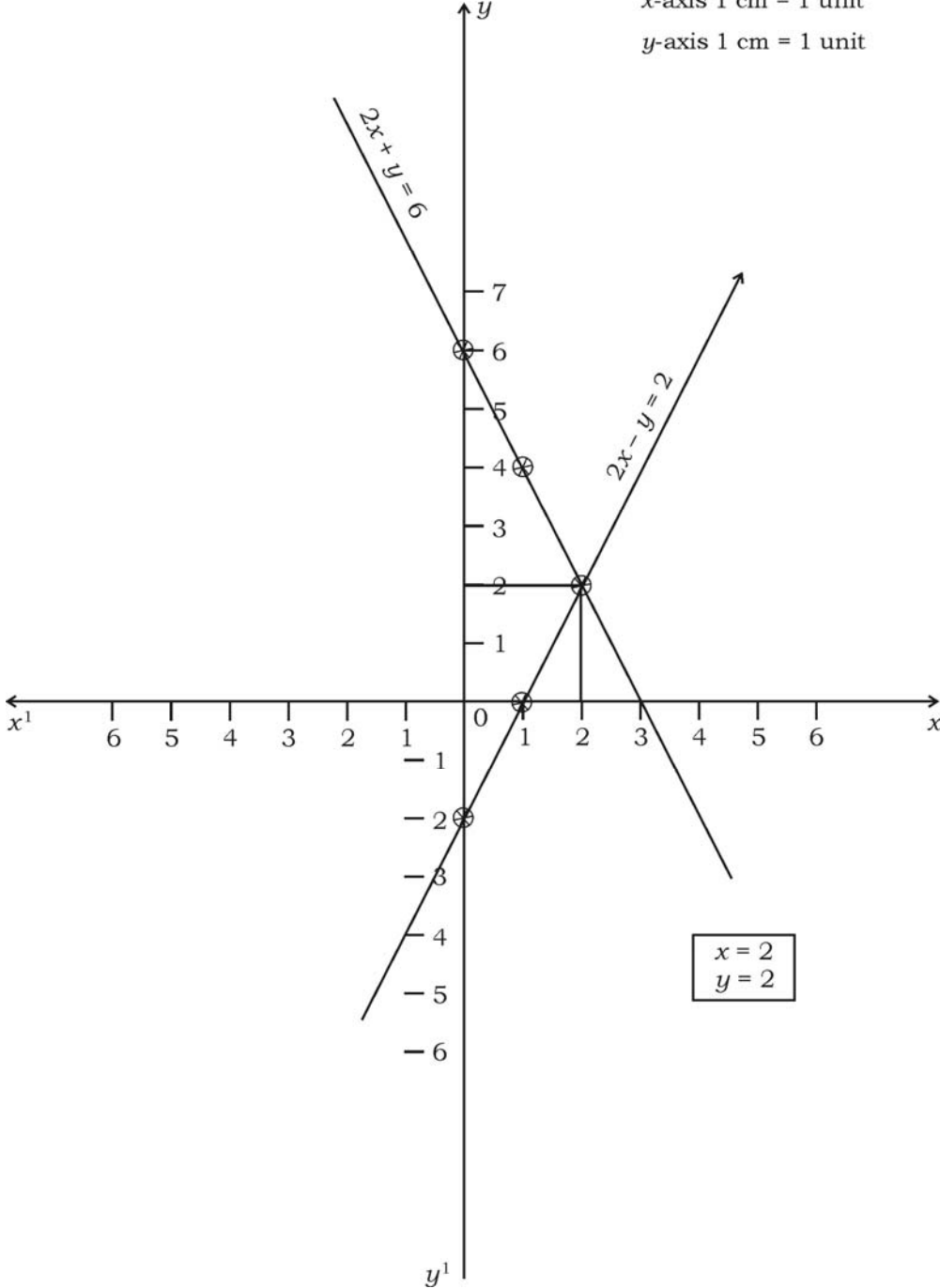
Qn. Nos.	Value Points	Marks allotted
	$= \sqrt{(1+2)^2 + (2+1)^2}$ $= \sqrt{3^2 + 3^2}$ $= \sqrt{9+9} = \sqrt{18}$ $= \sqrt{9 \times 2} = 3\sqrt{2}$ $MN = 3\sqrt{2}$	1/2
	<p>Length of $BC = \sqrt{(x_2 - x_1)^2 + (y_2 - y_1)^2}$</p> $= \sqrt{(5+1)^2 + (2+4)^2}$ $= \sqrt{6^2 + 6^2}$ $= \sqrt{36+36}$ $= \sqrt{72}$ $= \sqrt{36 \times 2}$ $BC = 6\sqrt{2}$	1/2
	$2MN = 2 \times 3\sqrt{2}$ $= 6\sqrt{2}$	
	$\therefore 2MN = BC$	1/2
	OR	
		3

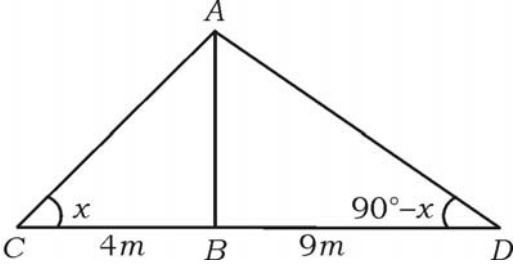
Qn. Nos.	Value Points	Marks allotted
	<div style="text-align: center;">  <p style="text-align: center;"> $A(-5, -1)$ $B(3, -5)$ E $C(5, 2)$ </p> </div> <p> $(x_1, y_1) = (-5, -1), (x_2, y_2) = (3, -5), (x_3, y_3) = (5, 2)$ </p> <p>Area of triangle $ABC =$</p> $= \frac{1}{2} [x_1(y_2 - y_3) + x_2(y_3 - y_1) + x_3(y_1 - y_2)]$ $= \frac{1}{2} [-5(-5 - 2) + 3(2 + 1) + 5(-1 + 5)] \quad \frac{1}{2}$ $= \frac{1}{2} [5 \times (-7) + 3 \times 3 + 5 \times 4]$ $= \frac{1}{2} [35 + 9 + 20]$ $= \frac{1}{2} \times 64 \quad \frac{1}{2}$ <p>Area of $\Delta ABC = 32$ sq.units</p> <p>Co-ordinates of $D = \left(\frac{x_1 + x_2}{2}, \frac{y_1 + y_2}{2} \right)$</p> $= \left(\frac{-5 + 3}{2}, \frac{-1 - 5}{2} \right)$ $= \left(\frac{-2}{2}, \frac{-6}{2} \right)$ <p>Co-ordinates of $D = (-1, -3)$</p>	

Qn. Nos.	Value Points	Marks allotted
	<p>Co-ordinates of $E = \left(\frac{3+5}{2}, \frac{-5+2}{2} \right)$</p> $= \left(\frac{8}{2}, \frac{-3}{2} \right)$ <p>Co-ordinates of $E = \left(4, \frac{-3}{2} \right)$</p> <p>Co-ordinates of $F = \left(\frac{-5+5}{2}, \frac{-1+2}{2} \right)$</p> $= \left(\frac{0}{2}, \frac{1}{2} \right)$ <p>Co-ordinates of $F = \left(0, \frac{1}{2} \right)$</p> <p>$(x_1, y_1) = (-1, -3) (x_2, y_2) = \left(4, -\frac{3}{2} \right) (x_3, y_3) = \left(0, \frac{1}{2} \right)$</p> <p>Area of $\Delta DEF =$</p> $= \frac{1}{2} \left[-1 \left(\frac{-3}{2} - \frac{1}{2} \right) + 4 \left(\frac{1}{2} + 3 \right) + 0 \left(-3 + \frac{3}{2} \right) \right]$ $= \frac{1}{2} \left[-1 \times (-2) + 4 \times \frac{7}{2} + 0 \right]$ $= \frac{1}{2} [2 + 14]$ $= \frac{1}{2} \times 16$ <p>$\Delta DEF = 8$ sq. units</p> <p>\therefore Area of $\Delta ABC = 4 \times$ area of ΔDEF</p> $32 = 4 \times 8$ $32 = 32$ <p><i>Note : Any alternate method can be given marks.</i></p>	<p>1</p> <p>$\frac{1}{2}$</p> <p>$\frac{1}{2}$</p> <p>3</p>

Qn. Nos.	Value Points	Marks allotted
46.	<p>Construct a triangle with sides 5 cm, 6 cm and 7 cm and then construct another triangle whose sides are $\frac{7}{5}$ of the corresponding sides of the first triangle.</p> <p>Ans. :</p>  <p>Constructing given triangle 1</p> <p>Drawing acute angle line and dividing into 7 parts $\frac{1}{2}$</p> <p>Drawing parallel lines (one pair) $\frac{1}{2}$</p> <p>Drawing parallel line (another pair) $\frac{1}{2}$</p> <p>Triangle $A'BC'$ $\frac{1}{2}$</p>	3

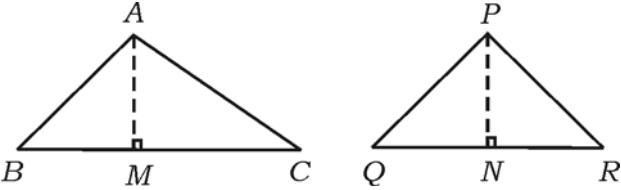
Qn. Nos.	Value Points	Marks allotted																
V. 47.	<p data-bbox="284 360 1313 472">Find the solution of the following pairs of linear equation by the graphical method :</p> $2x + y = 6$ $2x - y = 2$ <p data-bbox="284 698 368 734">Ans. :</p> $2x + y = 6$ $y = 6 - 2x$ <table border="1" data-bbox="384 902 863 1014"> <tr> <td>x</td> <td>0</td> <td>1</td> <td>2</td> </tr> <tr> <td>y</td> <td>6</td> <td>4</td> <td>2</td> </tr> </table> $2x - y = 2$ $y = 2x - 2$ <table border="1" data-bbox="384 1182 863 1294"> <tr> <td>x</td> <td>0</td> <td>1</td> <td>2</td> </tr> <tr> <td>y</td> <td>-2</td> <td>0</td> <td>2</td> </tr> </table> <p data-bbox="368 1323 1302 1359">Tables — 2</p> <p data-bbox="368 1375 1302 1411">Drawing or Plotting 2 straight lines — 1</p> <p data-bbox="368 1426 1302 1462">Identifying Intersecting straight line points and answer — 1</p> <p data-bbox="284 1491 1002 1527">Note : For each line any <i>two</i> points may be taken.</p>	x	0	1	2	y	6	4	2	x	0	1	2	y	-2	0	2	4
x	0	1	2															
y	6	4	2															
x	0	1	2															
y	-2	0	2															

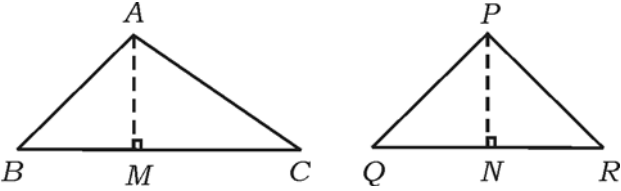
Qn. Nos.	Value Points	Marks allotted
48.	<p data-bbox="973 313 1220 380">x-axis 1 cm = 1 unit y-axis 1 cm = 1 unit</p>  <p data-bbox="183 1713 1316 1859">48. The angles of elevation of the top of a tower from two points at a distance of 4 m and 9 m from the base of the tower and in the same straight line with it are complementary. Find the height of the tower.</p> <p data-bbox="279 1926 375 1960">Ans. :</p>	4

Qn. Nos.	Value Points	Marks allotted
		1/2
	<p>Let AB be tower</p> $\angle ACB = x^\circ$ <p>$\therefore \angle ADB = 90^\circ - x$</p>	1/2
	<p>In $\triangle ABC$</p> $\tan x = \frac{AB}{BC}$ $\tan x = \frac{AB}{4} \quad \dots (i)$	1/2
	<p>In $\triangle ADB$</p> $\tan (90^\circ - x) = \frac{AB}{9}$ $\cot x = \frac{AB}{9} \quad \dots (ii)$	1/2
	<p>(i) \times (ii)</p> $\tan x \times \cot x = \frac{AB}{4} \times \frac{AB}{9}$ $\tan x \times \frac{1}{\tan x} = \frac{AB^2}{36}$ $1 = \frac{AB^2}{36}$ $AB^2 = 36$ $AB = \pm \sqrt{36} \quad AB = \pm 6$	1 1/2
	<p>\therefore Height of the tower $AB = 6$ m.</p> <p><i>Note :</i> C and D can be taken on the same side of AB also.</p> <p><i>Alternate method :</i></p> $\cot x = \frac{AB}{9} \quad \frac{1}{\tan x} = \frac{AB}{9} \quad \frac{1}{\frac{AB}{4}} = \frac{AB}{9}$ $\frac{4}{AB} = \frac{AB}{9} \quad AB^2 = 36 \quad AB = \pm 6$ <p>$AB = 6$ m.</p>	1/2
		4

Qn. Nos.	Value Points	Marks allotted
49.	<p>The bottom of a right cylindrical shaped vessel made from metallic sheet is closed by a cone shaped vessel as shown in the figure. The radius of the circular base of the cylinder and radius of the circular base of the cone each is equal to 7 cm. If the height of the cylinder is 20 cm and height of cone is 3 cm, calculate the cost of milk to fill completely this vessel at the rate of Rs. 20 per litre.</p>	4
OR		
<p>A hemispherical vessel of radius 14 cm is fully filled with sand. This sand is poured on a level ground. The heap of sand forms a cone shape of height 7 cm. Calculate the area of ground occupied by the circular base of the heap of the sand.</p>		
Ans. :		
<p>Volume of the vessel is equal to</p> <p>Volume of the cylinder – Volume of cone 1/2</p> <p>Volume of the cylinder = $\pi r^2 h$ 1/2</p> $= \frac{22}{7} \times 7^2 \times 20$ <p>Volume of the cylinder = 3080 cm^3 1/2</p>		

Qn. Nos.	Value Points	Marks allotted				
	$\text{Volume of the cone} = \frac{1}{3} \pi r^2 h$ $= \frac{1}{3} \times \frac{22}{7} \times 7^2 \times 3$	1/2				
	$\text{Volume of the cone} = 154 \text{ cm}^3$	1/2				
	$\text{Volume of vessel} = \text{Volume of cylinder} - \text{volume of cone}$ $= 3080 - 154$ $= 2926 \text{ cm}^3$ $= \frac{2926}{1000} = 2.926 \text{ litres.}$	1/2 1/2				
	$\therefore \text{Cost of milk to fill this vessel at the rate of Rs. 20 per litre}$ $= 2.926 \times 20$ $= 58.520$ $= \text{Rs. } 58.520$	1/2				
	OR					
	$\text{Volume of the hemisphere} = \frac{2}{3} \pi r^3$	1/2				
	$\text{Volume of the cone} = \frac{1}{3} \pi r^2 h$	1/2				
	<table style="width: 100%; border: none;"> <tr> <td style="text-align: center; width: 50%;"><u>Hemisphere</u></td> <td style="text-align: center; width: 50%;"><u>Cone</u></td> </tr> <tr> <td style="text-align: center;">$r = 14 \text{ cm}$</td> <td style="text-align: center;">$h = 7 \text{ cm.}$</td> </tr> </table>	<u>Hemisphere</u>	<u>Cone</u>	$r = 14 \text{ cm}$	$h = 7 \text{ cm.}$	
<u>Hemisphere</u>	<u>Cone</u>					
$r = 14 \text{ cm}$	$h = 7 \text{ cm.}$					
	$\text{Volume of hemisphere} = \text{Volume of cone}$ $\frac{2}{3} \pi r^3 = \frac{1}{3} \pi r^2 h$ $2 \times (14)^3 = r^2 \times 7$ $r^2 = \frac{2 \times (14)^3}{7}$ $= \frac{2 \times 14 \times 14 \times 14}{7}$ $r^2 = 196 \times 4$ $r^2 = 784$	1/2 1				

Qn. Nos.	Value Points	Marks allotted
	$r = \sqrt{784}$ $r = 28 \text{ cm}$ <p>∴ The area occupied by the circular base of the heap of the sand on the ground</p> $= \pi r^2$ $= \frac{22}{7} \times (28)^2$ $= \frac{22}{7} \times 28 \times 28$ $= 2464 \text{ cm}^2$	<p>1/2</p> <p>1/2</p> <p>1/2</p> <p>4</p>
50.	<p>Prove that “the ratio of the areas of two similar triangles is equal to the square of the ratio of their corresponding sides”.</p> <p>Ans. :</p> <div style="text-align: center;">  </div> <p>Data : $\Delta ABC \sim \Delta PQR$</p> <p>To prove : $\frac{\text{Area of } \Delta ABC}{\text{Area of } \Delta PQR} = \frac{BC^2}{QR^2}$</p> <p>Construction : Draw $AM \perp BC$ and $PN \perp QR$</p> <p>Proof : In ΔAMB and ΔPQN</p> $\angle AMB = \angle PNQ \quad (\text{Data})$ $\angle AMB = \angle PNQ = 90^\circ \quad (\text{Construction})$ $\Delta AMB \sim \Delta PQN$ <p>∴ $\frac{AM}{PN} = \frac{AB}{PQ}$ A.A criteria</p> <p>But $\frac{BC}{QR} = \frac{AB}{PQ}$ Data</p> <p>∴ $\frac{AB}{PQ} = \frac{BC}{QR}$</p>	<p>4</p> <p>1/2</p> <p>1/2</p> <p>1/2</p> <p>1/2</p> <p>1/2</p>

Qn. Nos.	Value Points	Marks allotted
	$\frac{\text{Area of } \triangle ABC}{\text{Area of } \triangle PQR} = \frac{\frac{1}{2} \times BC \times AM}{\frac{1}{2} \times QR \times PN}$ $= \frac{BC}{QR} \times \frac{AM}{PN}$ $= \frac{BC}{QR} \times \frac{BC}{QR}, \left[\frac{AM}{PN} = \frac{BC}{QR} \right]$ $= \frac{BC^2}{QR^2}$ <p>$\therefore \frac{\text{Area of } \triangle ABC}{\text{Area of } \triangle PQR} = \frac{BC^2}{QR^2}$</p> <p><i>Alternate method :</i></p> <div style="display: flex; justify-content: space-around; align-items: center;">  </div> <p><i>Data :</i> We are given two triangles ABC and PQR such that $\triangle ABC \sim \triangle PQR$</p> <p>We need to prove that</p> $\frac{\text{ar} (ABC)}{\text{ar} (PQR)} = \left(\frac{AB}{PQ} \right)^2 = \left(\frac{BC}{QR} \right)^2 = \left(\frac{CA}{RP} \right)^2$ <p>For finding areas of two triangles Draw altitudes AM and PN of the triangles</p> <p>Now $\frac{\text{ar} (ABC)}{\text{ar} (PQR)} = \frac{\frac{1}{2} BC \times AM}{\frac{1}{2} QR \times PN}$ $= \frac{BC}{QR} \times \frac{AM}{PN} \quad \dots (i)$</p> <p>Now in $\triangle ABM$ and $\triangle PQN$</p>	<p>$\frac{1}{2}$</p> <p>$\frac{1}{2}$</p> <p>4</p> <p>$\frac{1}{2}$</p> <p>$\frac{1}{2}$</p> <p>$\frac{1}{2}$</p> <p>$\frac{1}{2}$</p>

Qn. Nos.	Value Points	Marks allotted
	$\angle B = \angle Q \quad (\text{As } \triangle ABC \sim \triangle PQR)$ $\angle M = \angle N \quad (\text{each is of } 90^\circ)$ $\triangle ABM \sim \triangle PQN \quad (\text{A. A. criterion})$ <p>Therefore $\frac{AM}{PN} = \frac{AB}{PQ} \quad \dots \text{ (ii)}$</p> <p>Also $\triangle ABC \sim \triangle PQR \quad (\text{given})$</p> $\frac{AB}{PQ} = \frac{BC}{QR} = \frac{CA}{RP} \quad \dots \text{ (iii)}$ <p>Therefore $\frac{\text{ar} (ABC)}{\text{ar} (PQR)} = \frac{AB}{PQ} \times \frac{AM}{PN}$</p> <p>From (i) and (iii)</p> $= \frac{AB}{PQ} \times \frac{AB}{PQ} \quad (\text{from (i) and (iii)})$ $= \left(\frac{AB}{PQ} \right)^2$ <p>Now using (iii) we get</p> $\frac{\text{ar} (ABC)}{\text{ar} (PQR)} = \left(\frac{AB}{PQ} \right)^2 = \left(\frac{BC}{QR} \right)^2 = \left(\frac{CA}{RP} \right)^2$	<p>$\frac{1}{2}$</p> <p>$\frac{1}{2}$</p> <p>$\frac{1}{2}$</p>