



കെ.എസ്.ടി.എ.

വിദ്യാഭ്യാസ സമഗ്ര വിദ്യാഭ്യാസ പരിപാടി

LSS MODEL EXAMINATION FEBRUARY - 2019

എൽ.എസ്സ്.എസ്സ്. മാതൃകാ പരീക്ഷ ഫെബ്രുവരി - 2019

(Paper II) (Part A)

EVS

REGISTER No.

In Figure

In Words

Maximum Score : 20

- ◆ Write the answer to the questions in the space provided
- ◆ Questions 1 to 12 are included in the EVS Section
- ◆ Answer all the questions

1. Read the names of creatures given below 2 score

Deer, salamander, Frog, Fish Elephant, Star Fish, Nuta, Goat, Prawn

a) Complete the table as per common feature of the creature

A	B	C
.....	Lives in water

b) What are the adaption feature of fish and frog 2 score

Creature	Adaption feature
Fish	
Frog	

c) Vertebrate animals that lives both in water and land are known as 1 score

Answer:

2. Mymoonath took two bottles and cut the bottom part of it. She removed the cork of the first and they placed a ballon on its mouth and a toy whistle (a whistle which makes sound when the toy is pressed) on the second bottle's mouth. There two bottle were innerred in bucket of water as the broke in a downward position.

a) Balloon 1 score

What happened	Reason

Whistle 1 score

What happened	Reason

b) In what conclusion you have reached from this experiment. 1 score

Answer:

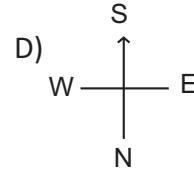
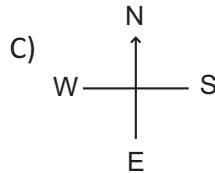
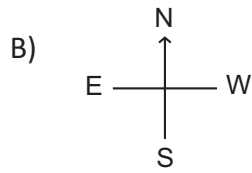
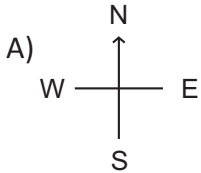
c) Prepare a note for the experiment 2 score

3. Find out the mass media communication from the list given below 1 score

- A) Telephone B) Television C) Fax D) Vakitoki

Answer:

4. A map is hang on the wall. Find out the sign which shows correct direction. 1 score



Answer:

5. What is the correct statement about the planets

- A) Self shining B) Revolves around the satellites
C) Revolves around the sun in a fixed path c) Revolves around the moon 1 score

Answer:

6. What is the statement which is not related to bird

- A) help to seed distribution B) help to pest control
C) Control the climate D) Sustain plant diversion 1 score

Answer:

7. Find out the incorrect pair

- A) Arunachal Pradesh - Ittanagar
B) Tamilnadu - Chennai
C) Gujarat - Porbandar
D) Kerala - Trivandrum 1 score

Answer :

8. We feel the flavour of flower and opening cent bottle at the distance. Explain the feature of air 1 score

Answer:

9. Ancient times which bird is used to send messages. 1 score

Answer:

10. The day which the point of moon without sun light is come front of earth 1 score

Answer:

11. Find out the name of person using following indicators 1 score

- 1) Freedom fighter
- 2) He declared 'Freedom is my birthdate'
- 3) known as 'Lokamanya'

Answer:

12. A Kerala art which used to criticise the social based habbits through commody 1 score

Answer:



കെ.എസ്.ടി.എ.

വിദ്യാഭ്യാസ സമഗ്ര വിദ്യാഭ്യാസ പരിപാടി

LSS MODEL EXAMINATION FEBRUARY - 2019

(Paper II) - Part B

Mathematics

ആകെ സ്കോർ - 20

- ◆ Write the answer to the questions in the space provided
- ◆ Questions 13 to 24 are included in the General Knowledge Section
- ◆ Answer all the questions

13. In Anupama Book stall Dictionary have a special discount you will get the dictionary of Rs. 950/- at the rate of Rs. 700/-. And also you can buy it by paying two equal instalments of Rs. 375 or three equal instalments of Rs. 275/-. 25 customers paid Rs. 700/- 40 customers paid 375/- in two instalments and 15 paid 275/- in three installments


a) Total Amount to collected by the Bookstall 3 score

Answer :

b) If all are bought the Dictionary at the rate of Rs. 700/- Find total difference in prize. 2 score

Answer:

14. To making fence Wall to vegetable garden of Sachin's School
Ladies finger garden in rectangle shape. Spinach garden is square in shape



a) Expense for making inter fence is Rs. 20/-. Find out total expense for making five line fence around two gardens.

Answer:

b) Find out the amount of labour charge for Ladies finger garden

Answer:

c) Find out the labour charge and fancying charge of spinach garden

Answer:

15. Write 48 in Roman Digit

Answer :

16. Following is a part of Calendar. Write the date in the column where question marks

	15	16	17		
				?	

Answer:

17. Write the sum of biggest four digit number and smallest four digit number

Answer:

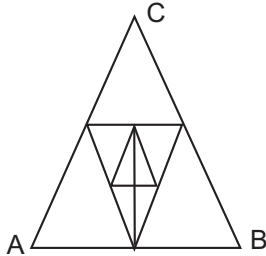
18. Find out the total time of train which started from Kasargod at 15:15 (to reached Trivandrum) at 03:55

Answer:

19. A rectangle of 8 cm length have perimeter of a square of 6 cm side. Find out the other side of rectangle.

Answer:

20. How many triangles in the figure



Answer:

21. I am a four digit number. If my product add with me you will get a biggest four digit no.

- A) 2222 B) 3333 C) 4444 D) 9999

Answer:

22. 2013 February 1st is Friday. How many Friday in February 2013

- A) 4 B) 5 C) 3 D) 2

Answer :

23. Find out the number which is divisible by 8 and 2 between 65 to 75

- A) 66 B) 74 C) 72 D) 68

Answer :

24. Look at the numbers in lines

1st Line - 1, 2, 3, 4, 5

2nd Line - 6, 7, 8, 9, 10

3rd Line - 11, 12, 13, 14, 15

Find out the last number of 10th line ?

A) 55 B) 50 C) 60 D) 101

Answer: