

Numbers from Twenty-one to Fifty



0119CH08

Fill in the blanks.

18

Write the number.

Draw the bundles and ones.

TEN ONES

TEN ONES

1 4

14

TEN ONES

TEN ONES

1 5

15

TEN ONES

TEN ONES

0

TENS ONES

TENS ONES

2 0

20

TEN ONES

TEN ONES

0

TENS ONES


TENS ONES

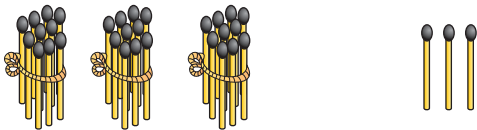
2 2


22

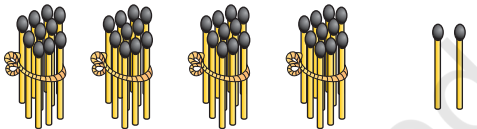



Write the number

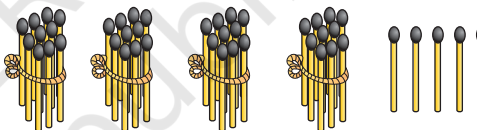

 TENS ONES
 2 5 25

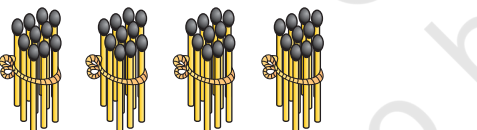

 TENS ONES
 3 3 33



 TENS ONES
 2 3

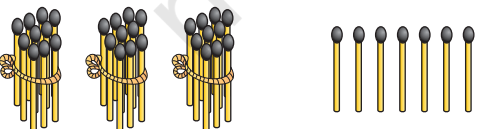

 TENS ONES
 4 2

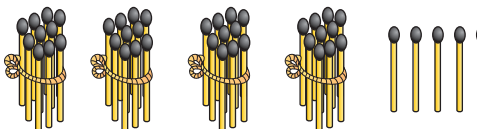

 TENS ONES


 TENS ONES


 TENS ONES


 TENS ONES


 TENS ONES


 TENS ONES





Numbers from 21 to 40


Fill in the blanks.


21


2 TENS 1 ONE


31


3 TENS 1 ONE


22

2 TENS 2 ONES




3 TENS 2 ONES


23

2 TENS 3 ONES




3 TENS 3 ONES



2 TENS 4 ONES




3 TENS 4 ONES




2 TENS 5 ONES




3 TENS 5 ONES




2 TENS 6 ONES


36


3 TENS 6 ONES


27

2 TENS 7 ONES




3 TENS 7 ONES


28

2 TENS 8 ONES


38


3 TENS 8 ONES


29


2 TENS 9 ONES


39

3 TENS 9 ONES


30

2 TENS 1 TEN

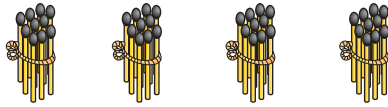

40

3 TENS 1 TEN



Numbers from 41 to 50

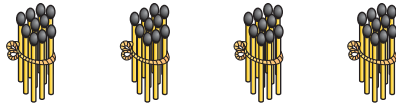
Fill in the blanks.



41

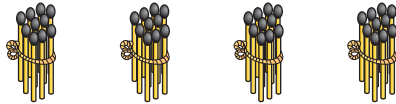
4 TENS

1 ONE



4 TENS

2 ONES



43

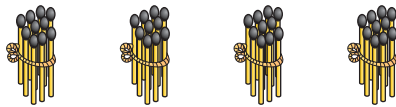
4 TENS

3 ONES



4 TENS

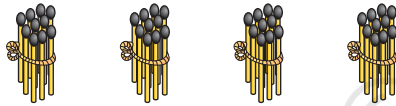
4 ONES



45

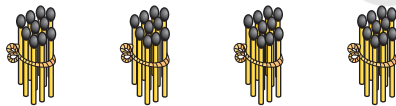
4 TENS

5 ONES



4 TENS

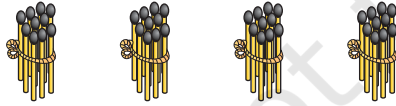
6 ONES



47

4 TENS

7 ONES



48

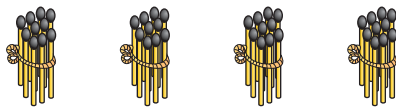
4 TENS

8 ONES



4 TENS

9 ONES



50

4 TENS

1 Ten





Write the missing numbers

1	2	3	4	5	6	7	8	9	10
11		13			16				
	22					27			
							38		
		43						49	

