



Online Class Supporting Materials

3

Malappuram Educational District

Class : X Social Science II

Unit 03 : Human Resource Development in India



VICTERS CLASSES



[CLICK HERE FOR EPISODE 10](#)



[CLICK HERE FOR EPISODE 11](#)

01. Choose correct term from the bracket and match column A with column B .

(Population growth rate, Death rate, Migration, Age structure, Birth rate)


A	B
?	Population growth indicated in terms of percentage
?	The settlement of people of a region in another region
?	The number of live births per 1000
?	The number of deaths per 1000
?	Classification of population into different age groups and presenting the ratio of each group in the population
Population growth	Increase in the number of people in an area within a specific period of time.

02. Analyse the following :

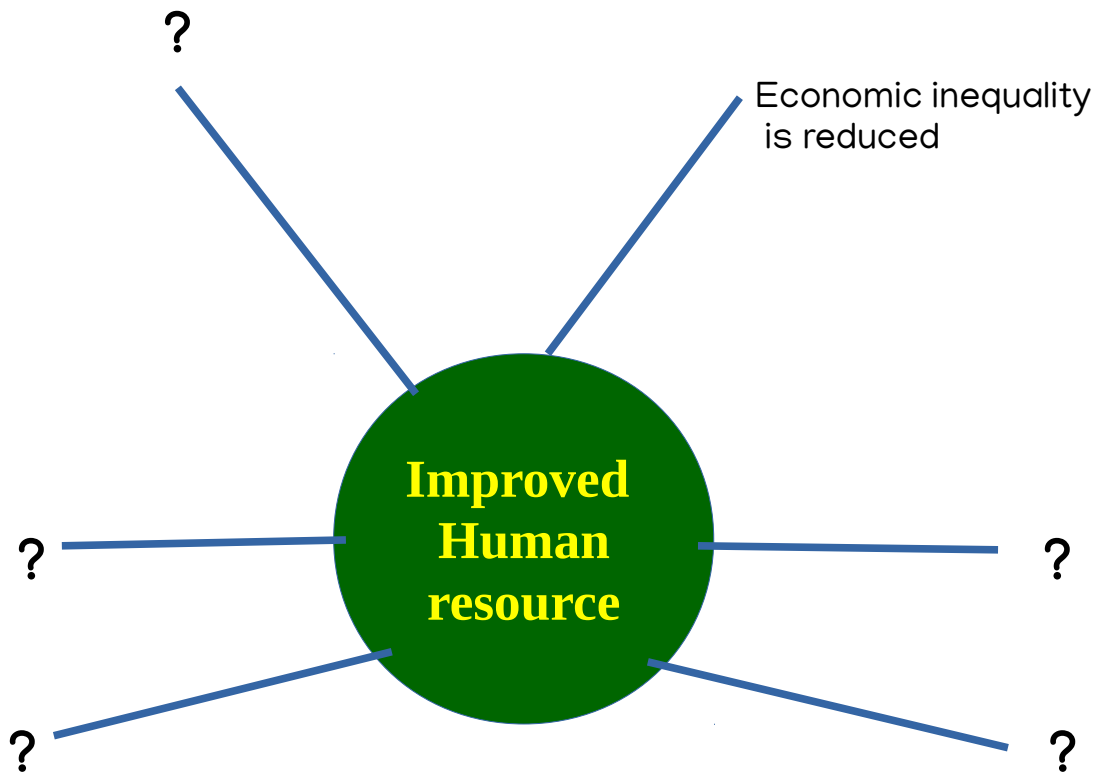
(a) Labour force participation rate

(b) Dependency ratio

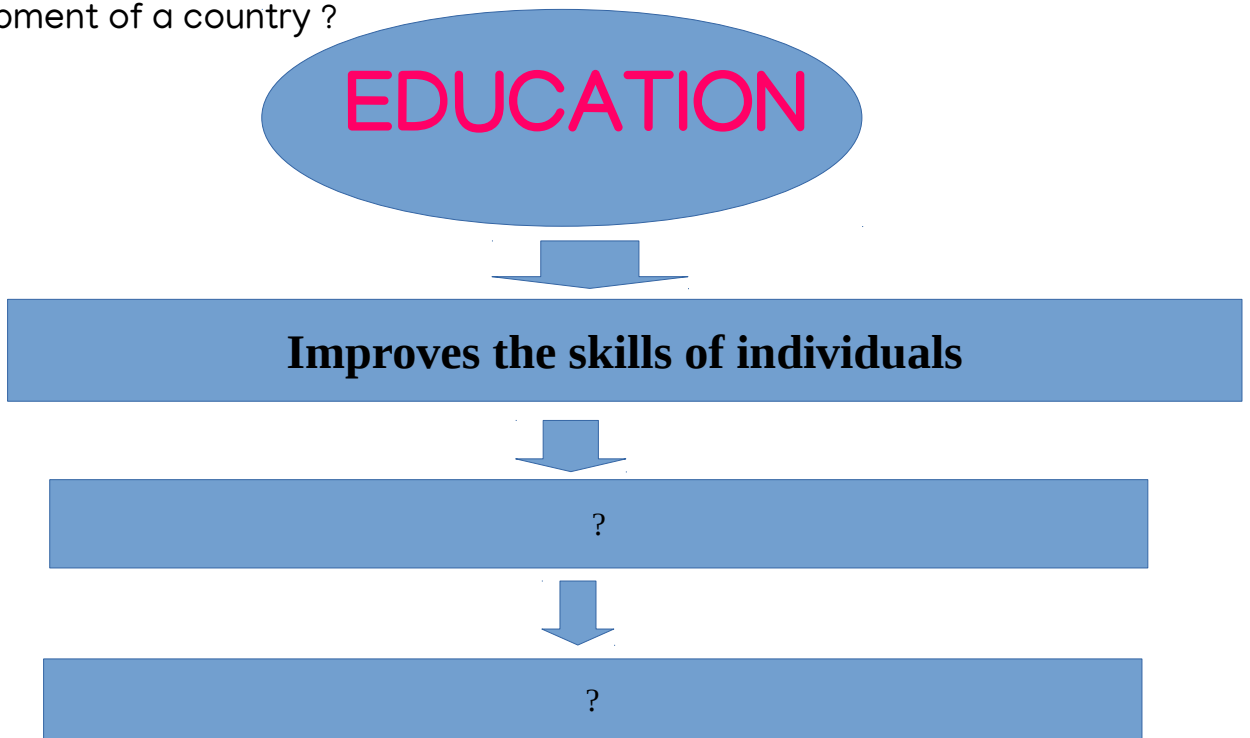
03. Identify the qualitative factors that improve the labour potential ?



04. Complete the Word Wheel.



05. Complete the flow chart that shows how education leads to development of a country ?



06. Government of India implemented various Projects for the development education and skills. Some of them are given below. Write the goals of each projects.

Projects	Goals
ICDS	?
Samagra Shiksha Abhiyan (SSA)	?
RUSA	?
National Skill Development and Monetary Reward Scheme	?

07. What is the change in total population in the two contexts: (a) Birth rate increases (b) Birth rate decreases.

08. What is the importance of Right To Education Act (RTE Act) of 2009 ?

09. One of the problems that still exists and needs to be solved in the education sector of India is given below. Write any two others.

a. Certain sections drop out from schools without completing primary education..

b. -----?

c. -----?