



Online Class Supporting Materials

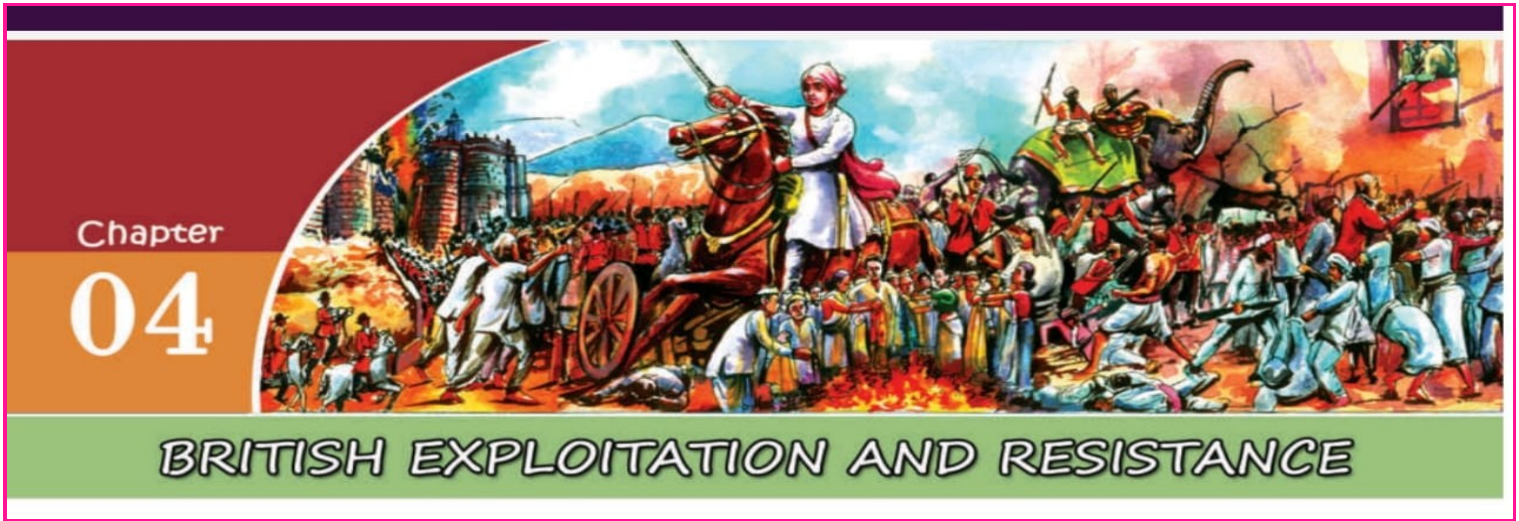
6

MALAPPURAM EDUCATIONAL DISTRICT

CLASS:X

SOCIAL SCIENCE - I

UNIT :4



victers class

[click here](#)

[click here](#)

[click here](#)

[click here](#)

CLASS -1

2

3

4

1. What was the name of the revenue system implemented by the British in the regions of Bengal ,Bihar and Orissa ?

(Ryotwari system ,Permanent land revenue settlement, Mahalwari system)

2. Which was the commission appointed by the British government to study recurring peasant revolts in Malabar ?

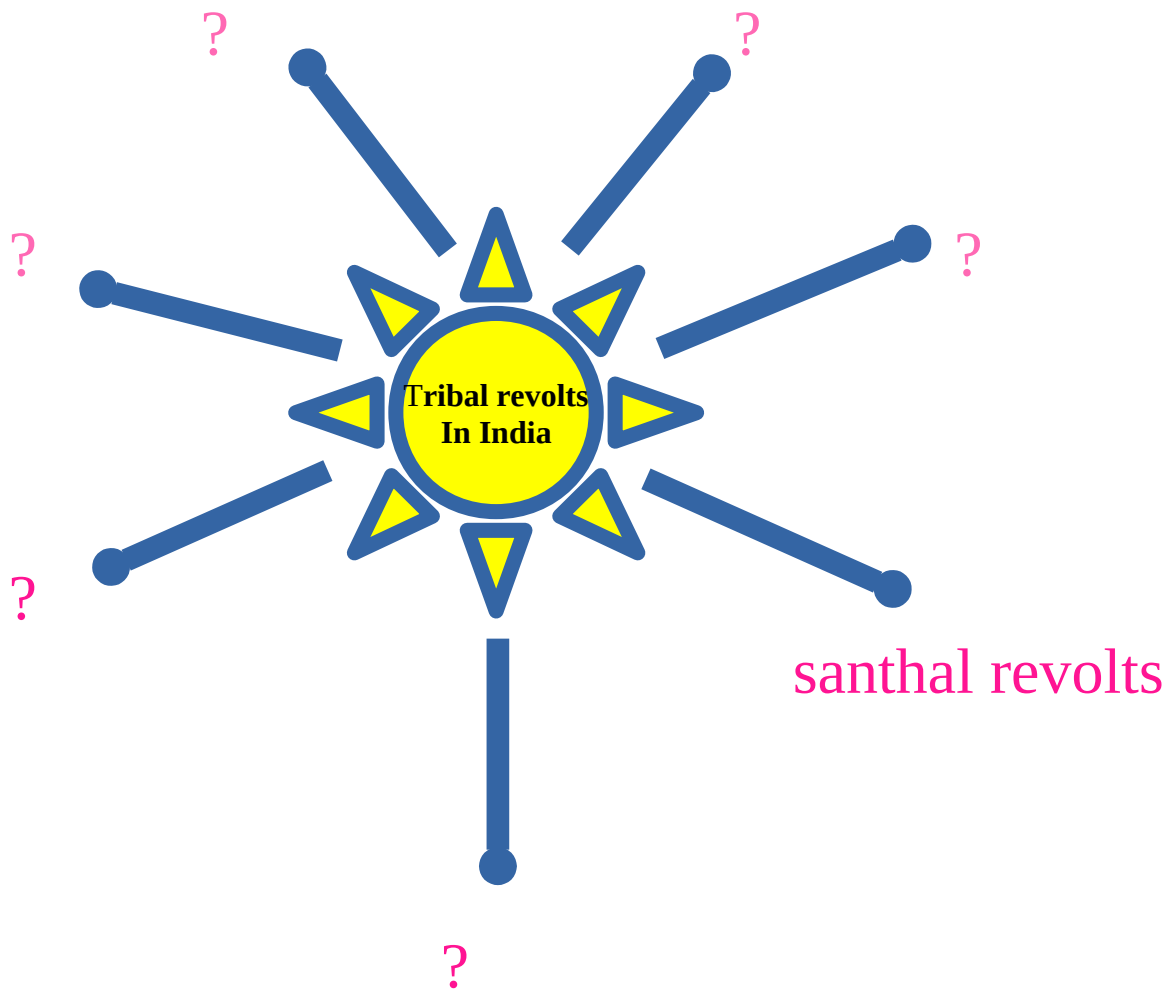
3. Complete the table given below

Land Revenue system	Regions of implementation	Collections of tax
Permanent land revenue settlement	?	?
?	South indian regions	?
?	?	Village headman

4. How did the Mahalwari System differ from Ryotwari system ?

5. Analyse the features of Permanent land revenue settlement ?

6. Complete the sun diagram



7. Analyse the factors that led to the miseries of Indigo farmers in India ?

* invention of artificial colours

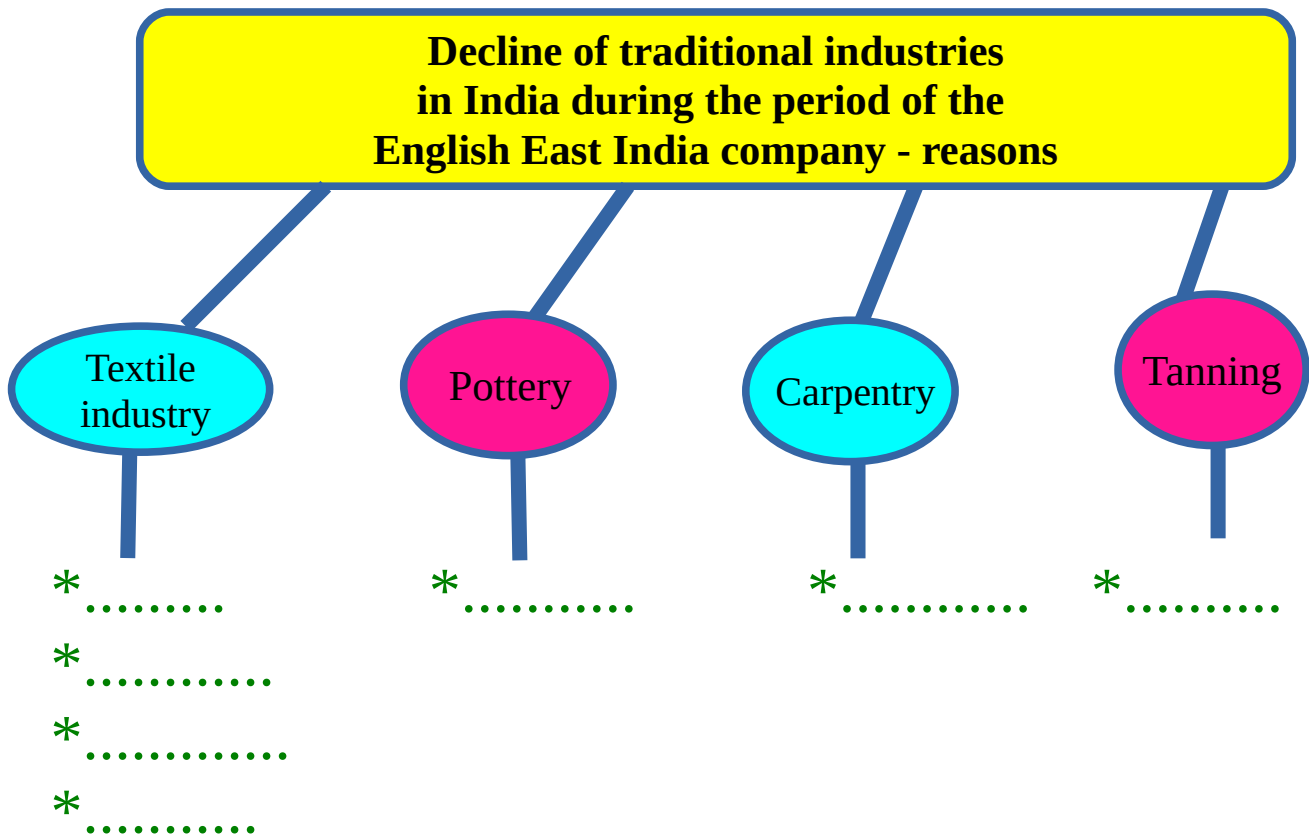
*

*

*



8. Complete the flowchart below



9. Choose the correct answer -

1885 1757 1812 1857

?

Battle of Plassey

?

Kurichya Revolt

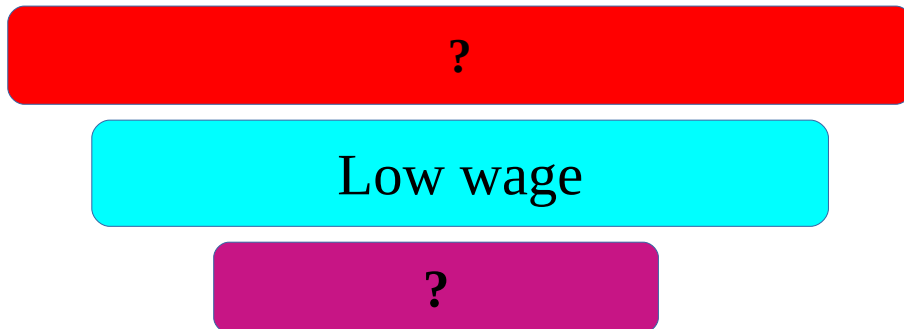
?

First war of Indian independence

?

Indian National Congress

10. List out the problems faced by the labours in the Modern Industries started by the British -

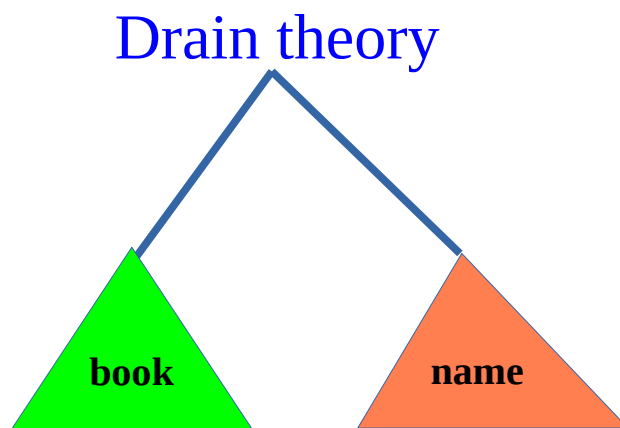


11. Complete the following table related to the First war of Indian Independence 1857 -

Important centres	Leaders
Delhi
.....	Rani Lakshmi Bai
Lucknow
Kanpur
.....	Maulavi Ahmmadullah

12. What are the major causes and impacts of the First war of Indian Independence 1857-

13. Who formulated the Drain theory ? Identify the work in which it is included ?



14. Write the causes of the peasant revolts in Malabar ?

15. ‘ The use of Swadeshi goods and boycott of foreign goods rejuvenated Indian industry’ - substantiate .

A **?**

B **?**

C **?**

Prepared by

Mohammed kutty Marathamkodan
HST: SS
KKM HSS
Cheekode
Mbl:9446487014

Prajitha kunnath
HST: SS
MMET HSS
Melmuri
Mbl:9188790306