

19/11/2020
THURSDAY










SOCIAL SCIENCE II

STD - X

class - 33

Assignment

1) Locate the geographic features of Fig. 4.9 using 6-figure and 4-figure representations. (page no. 59).

Symbol	6-figure	4-figure
 Fork	813348	8134
 Temple	847346	8434
 Tubewell	836343	8334
 Settlement	855349	8534
 well	838352	8335
 Pond	822356	8235
 Graveyard	852355	8535
 church	846363	8436
 Lighthouse	853376	8537