


Qn. 28


Write down the characteristics of the image.

- Position of the image : Between F and $2F$
Nature of the image : Real, Inverted
Size of the image : Diminished
Object at $2F$



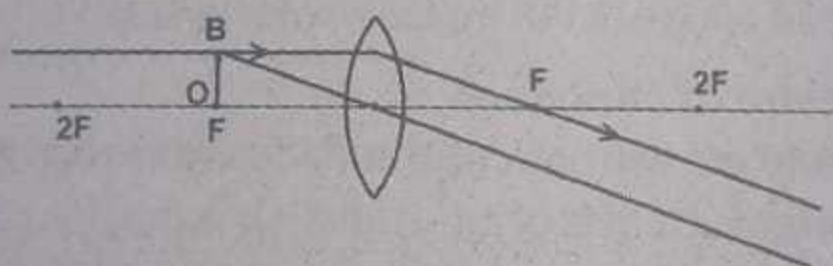
- Position of the image : At $2F$
Nature of the image : Real, Inverted
Size of the image : Same size of the object

Object between F and $2F$



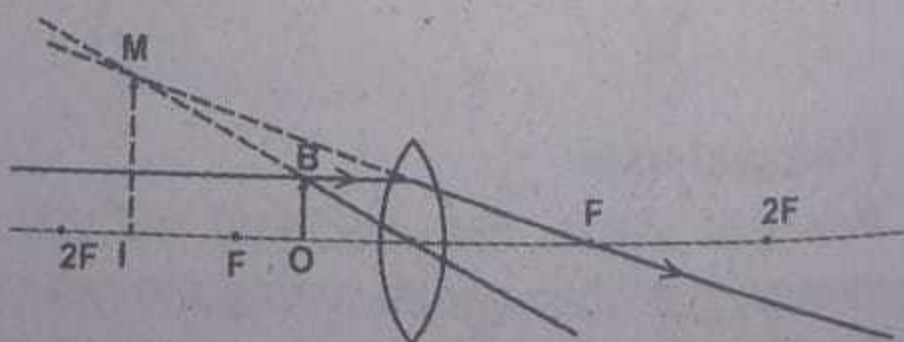
- Position of the image : Beyond $2F$
Nature of the image : Real, inverted
Size of the image : Magnified

Object at F



- Position of the image : Infinity
Nature of the image : Real
Size of the image : Inverted, Magnified

Object between F and Lens



- Position of the image : At the same side of the object
Nature of the image : Virtual, erect
Size of the image : Magnified