



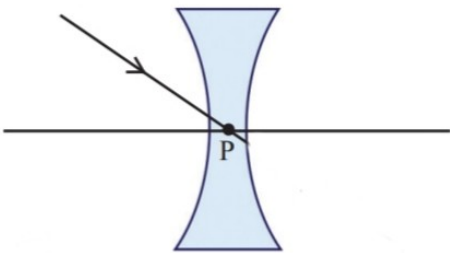
Silent Bells



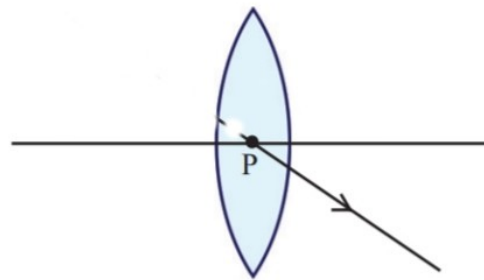
ഫസ്റ്റ്ബെൽ - അനുബന്ധ പഠനസഹായകസാമഗ്രി

STANDARD 10	SUBJECT : PHYSICS	MEDIUM : ENGLISH	DATE : 30.12.2020
CLASS 44	TOPIC : IMAGE FORMATION IN LENSES	WORKSHEET NO. : 5.6	CLASS LINK https://youtu.be/XlvveTkU4C4

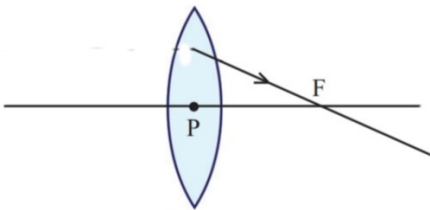
1. Complete the ray diagrams given below and write proper rules used for it ?



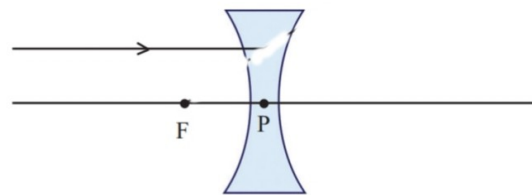
(a)



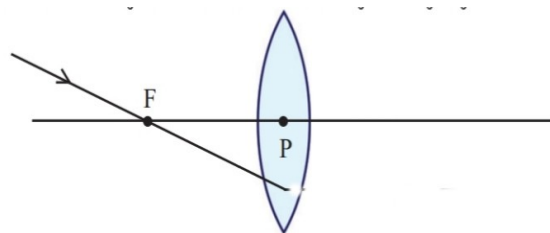
(b)



(c)

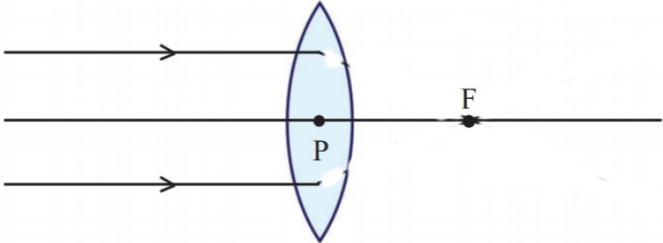


(d)

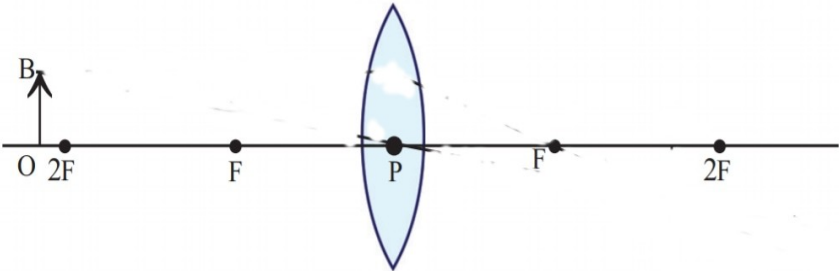


(e)

2. Draw the image formation diagram of the following, and write the features of the image formed ?



(a)



(b)