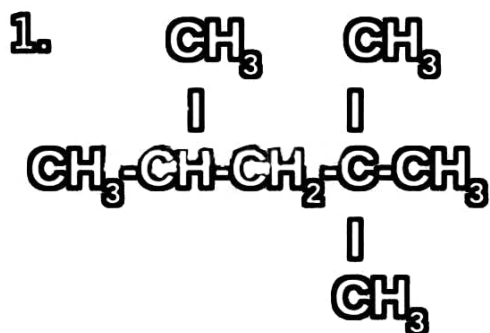
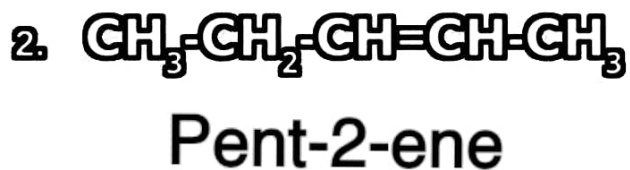


1. Write down the IUPAC names of the following compounds. (താഴെ തന്നിരിക്കുന്ന സംയുക്തങ്ങളുടെ IUPAC നാമം എഴുതുക)



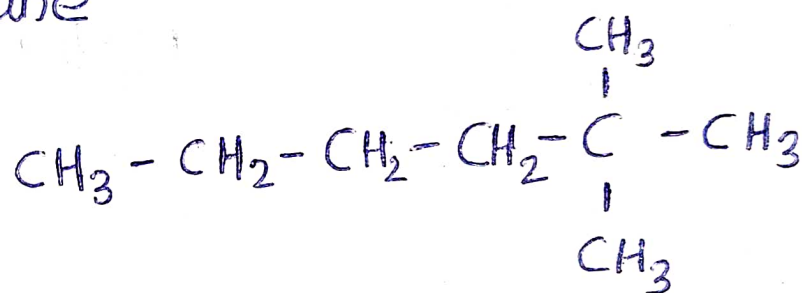
2,2,4 - Trimethylpentane



2. Write the structural formula of the given compounds.

i) 2,2-Dimethylhexane

Ans)



ii) Hex-3-yne

