

YOU SEE

## You See's Qs?

### SSLC Social Science

#### Dream Model 2021 Questions...

##### Instructions

- 20 minutes is given as cool off time. Use this time to read questions and plan your answers
- Attempt the questions according to the instructions.
- Keep in mind the score and time while answering the questions.
- The maximum score for questions 1 to 42 will be 80

Cool off time **20 minutes**

Max: Score **80**

Time **2.30 hours**

---

#### **Question 1- a to l – 1 score each**

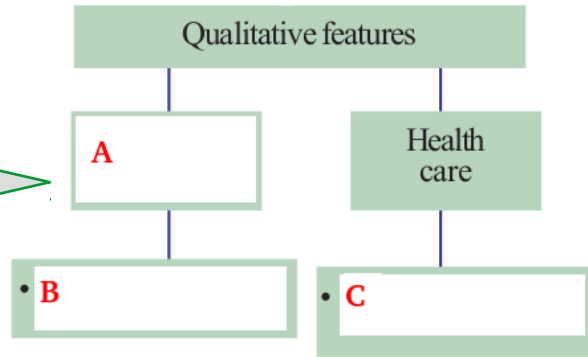
1-

- a. Joe Biden is the 46<sup>th</sup> president of the United States of America, who was first?  
A- George Washington B- James Madison C- Thomas Jefferson D- Benjamin Franklin
- b. When did Indian National Congress declare the ultimate aim Poorna Swaraj  
A- 1942 B- 1930 C- 1920 D 1929
- c. Diu was under the control of .....
- A- France B- Britain C- Portugal D- Germany
- d- The highest peak of Himalayas in India.  
A- Godwin Austin B- Kanchenjunga C- Nandadevi D Anamudi
- e. Recall the face of poorest and weakest whom you have seen ask yourself if the step you complete is going to be of any use to him. ....Whose words are these?  
A- Gandhiji B- APJ Abdul Kalam C- Abul Kalam Azad D- Gorbachev
- f. Tista is the tributary of .....river  
A- Indus B- Ganga C- Luni D- Brahmaputra
- g. What was the slogan of thousands of women, when they marched from Paris to the Palace of Versailles in October, 1789?  
A- Give us bread B- Individual vote C- liberty D- No taxation
- h- Who was the Keralite, in-charge of Jhansi regiment.  
A- Akkamma Cherian B- Annie Mascarene C- Lekshmi D- Kuttimalu Amma
- i- According to Census of India 2011 Female Literacy rate of India was.....  
A- 65.46 B- 82.14 C 74.04 D- 68.56
- j- Which act compels "elementary education for all"  
A- Malabar Tenants' Act B- RTE Act C- Tenancy Act D- Census Act
- k. On 21 June reaches vertically over the .....
- A- Equator B- Tropic of Capricorn C- Tropic of Cancer D- Arctic Circle
- l. Which instrument that provides three dimensional views from stereo pair  
A- Barometer B- Anemometer C- Stereoscope D- Thermometer

YOU SEE

#### **Questions 2 to 25 – 3 score each**

2. What are the facts associated with rotation?



3. Complete the flowchart
4. Write the 3 tributaries of Indus river
5. Which were the 3 states resented to join Indian Union
6. Examine some factors that caused Quit India Movement
7. Write the time of longitude in the box when the GMT is 12 pm

1° W	1° E	82.5° E
------	------	---------

8. Nation provides the necessary facilities for its people to develop their skills. Write other three levels of human resource development.
9. Distinguish between Summer solstice and Winter Solstice
10. Write a short note on Trans Himalayas.
11. Identify the year in which India and China signed the Panchasheel principles. Name the leaders who signed the Panchasheel principles.
12. Give a brief description about the role of Subhash Chandra Bose in Indian national movement.
13. Explain the terms - Literacy rate, Life expectancy and Human resource
14. Write the three names of research institutions for the development of science and technology.
15. Which party split into the Mensheviks and the Bolsheviks? Write the leaders of Bolsheviks
16. Who was the the chairman of Indian National Congress held in 1929? Write its declaration and resolution.
17. Write a brief description about the Chouri Choura incident.
18. Write the names of French Suzerainties' region in India.
19. Differentiate UPSC and PSC
20. Define bureaucracy and states its purpose?
21. What are the proposals made by social reformers to reform Indian society?
22. Describe the Evolution theory of the origin of the state and explain its significance.
23. Explain how Fascism in Italy became threats to world peace?
24. Answer the following questions related to the atmospheric pressure.
  - i) Name the instrument ued for measuring atmospheric pressure
  - ii) Mention the unit for representing atmospheric pressure
  - iii) What is the average atmospheric pressure?
25. What are the limitations of Aerial Photography?





YOU SEE

**Questions 26 to 38 – 4 score each**

26. Match the items in column A with appropriate items from column B

A	B
SSA	To increase the access to higher education
ICDS	To the teacher training institutes like DIET
RUSA	To provide healthcare for pregnant women
RMSA	To ensure quality and equity

27. Arrange the following in chronological order  
 Khilafat Movement  
 Quit India Movement  
 Peasant struggle in Kheda  
 Civil Disobedience Movement
- 28- Write the recommendations of the National Policy on Education 1986
29. Write a note on the human life in the lap of the Himalayas
30. What is meant by E- Governance? What are its advantages?
31. Find out the relationship between the parallelism of the Earth's axis and the apparent movement of the Sun.
32. Write the major vegetation and soils in peninsular plateau
33. What are the features of bureaucracy?
34. What are the qualitative factors that improve the labour potential?
35. Mark and label the following geo-information in the outline **map** of India provided ( See Last page )  
 (A) Satpura ranges (B) Krishna river (C) Chotanagpur Plateau (D) Himadri mountain range.
36. Explain why the sepoys and kings fought against the British during the first war of independence , 1857?
37. Identify the geographical features represented by the given map symbols

	Symbols
a)	
b)	
c)	
d)	

YOU SEE

38. What are the reasons for increasing public debt in India?

**Questions 39 to 42 – 6 score each**

39. Explain the factors led to the French revolution
- 40 Arrange the seasons in the order of their occurrences. Describe the changes in the apparent position of the sun during these seasons. What is equinox?

Seasons	Apparent position of the sun

41. Analyse the causes and results of First World War

42. Describe the followings incidents

I- Vaikom Guruvayur

II- Guruvayur Guruvayur

III- 'Nivarthana Prakshobham' (Abstention movement).

