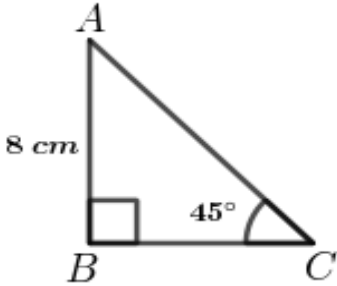
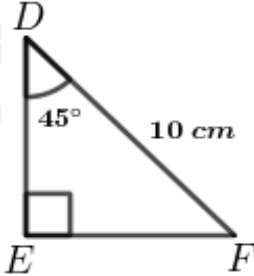
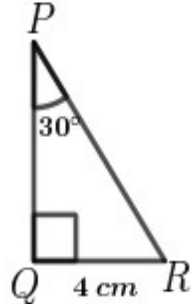
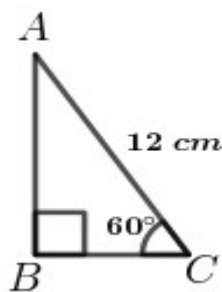
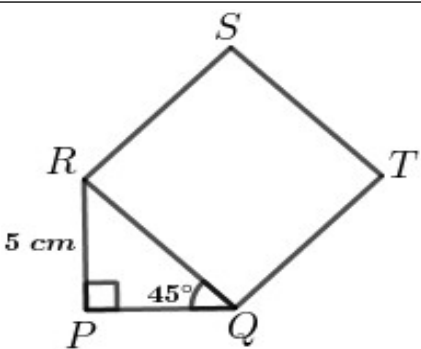


WANDOOR GANITHAM - S S L C LAST BELL 2021

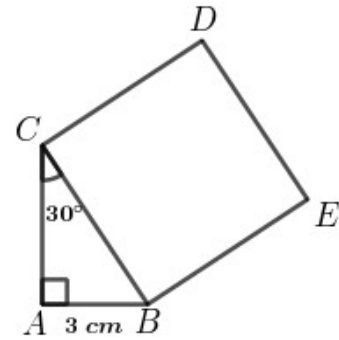
5410E

FOCUS AREA – TRIGNOMETRY

No			Score
1	<p>In the figure $\angle B = 90^\circ, \angle C = 45^\circ, AB = 8 \text{ cm}$</p> <p>a) What is the measure of $\angle A$?</p> <p>b) What is the length of BC ?</p> <p>c) What is the perimeter of the triangle ABC ?</p>		4
2	<p>In the figure $\angle E = 90^\circ, \angle D = 45^\circ, DF = 10 \text{ cm}$</p> <p>a) What is the measure of $\angle F$?</p> <p>b) What is the length of EF ?</p> <p>c) What is the area of the triangle DEF ?</p>		4
3	<p>In the figure $\angle Q = 90^\circ, \angle P = 30^\circ, QR = 4 \text{ cm}$</p> <p>a) What is the measure of $\angle R$?</p> <p>b) What is the length of PR ?</p> <p>c) What is the perimeter of the triangle PQR ?</p>		4
4	<p>In the figure $\angle B = 90^\circ, \angle C = 60^\circ, AC = 12 \text{ cm}$</p> <p>a) What is the measure of $\angle A$?</p> <p>b) What is the length of BC ?</p> <p>c) What is the area of the triangle ABC ?</p>		4
5	<p>In the figure $\angle P = 90^\circ, \angle PQR = 45^\circ, PR = 5 \text{ cm}$</p> <p>a) What is the measure of $\angle PRQ$?</p> <p>b) What is the length of PQ ?</p> <p>c) What is the perimeter of the square $QRST$?</p>		4

6 In the figure $\angle A = 90^\circ$, $\angle ACB = 30^\circ$, $AB = 3\text{ cm}$

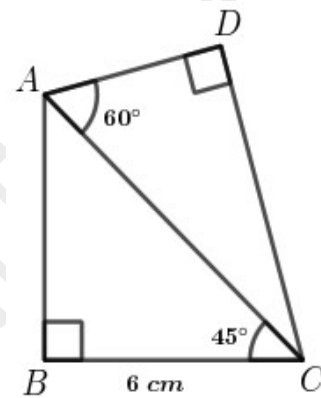
- What is the measure of $\angle ABC$?
- What is the length of AC ?
- What is the area of the square $BCDE$?



4

7 In the figure
 $BC = 6\text{ cm}$, $\angle B = \angle D = 90^\circ$, $\angle ACB = 45^\circ$, $\angle CAD = 60^\circ$

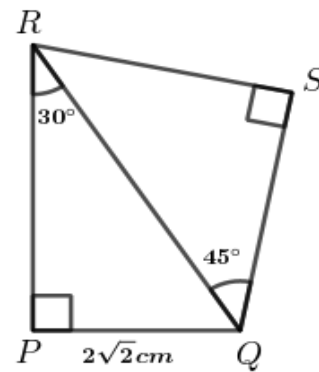
- What is the measure of $\angle BAC$?
- What is the length of AC ?
- What is the area of the triangle ABC ?
- What is the perimeter of the quadrilateral $ABCD$?



5

8 In the figure
 $PQ = 2\sqrt{2}\text{ cm}$, $\angle P = \angle S = 90^\circ$, $\angle RQS = 45^\circ$, $\angle PRQ = 30^\circ$

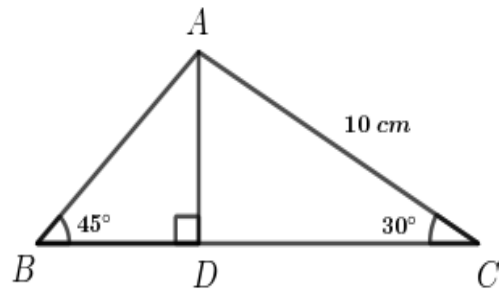
- What is the measure of $\angle PQR$?
- What is the length of QR ?
- What is the area of the triangle PQR ?
- What is the perimeter of the quadrilateral $PQSR$?



5

9 In the figure $AC = 10\text{ cm}$, $\angle B = 45^\circ$, $\angle C = 30^\circ$. AD is perpendicular to BC

- What is the measure of $\angle BAC$?
- What is the length of AD ?
- What is the perimeter of the triangle ABC ?
- What is the ratio of the length of the sides if the ratio of angles of a triangle is



5

2:3:7 ?

10 In the figure $SR = 4\sqrt{3} \text{ cm}$, $\angle Q = 60^\circ$, $\angle R = 45^\circ$

PS is perpendicular to QR.

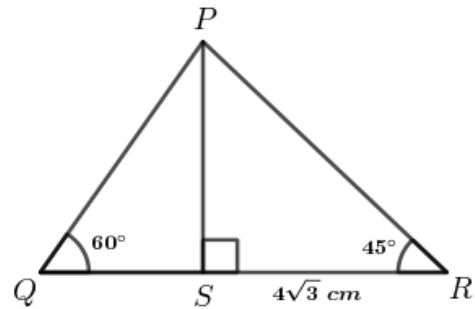
a) What is the measure of $\angle QPR$?

b) What is the length of PS ?

c) What is the perimeter of the triangle PQR ?

d) What is the ratio of the length of the sides if the ratio of angles of a triangle is

3:4:5 ?



5

11 In the figure $AB = 12 \text{ cm}$, $\angle B = \angle C = 30^\circ$. AD is perpendicular to BC.

a) What is the measure of $\angle BAD$?

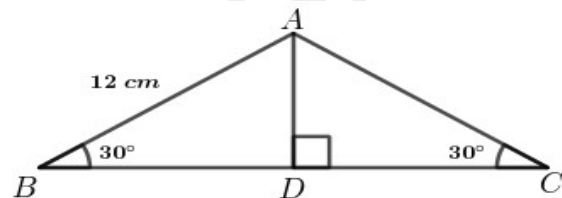
b) What is the length of AD ?

c) What is the perimeter of the triangle

ABC ?

d) What is the ratio of the length of the sides if the ratio of angles of a triangle is

1:1:4 ?



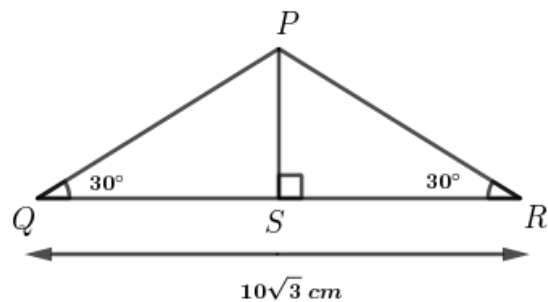
5

12 In the figure $QR = 10\sqrt{3} \text{ cm}$, $\angle Q = \angle R = 30^\circ$. PS is perpendicular to QR.

a) What is the measure of $\angle QPS$?

b) What is the length of QS ?

c) What is the ratio of the sides of the triangle PQR ?

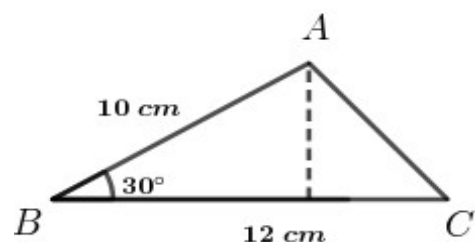


5

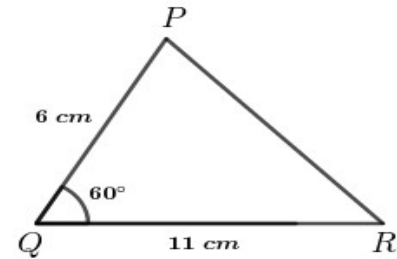
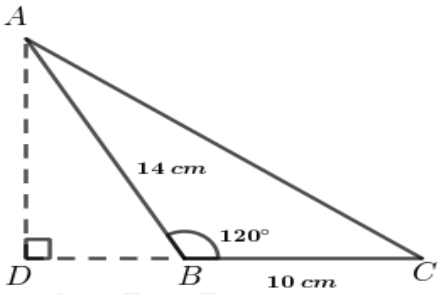
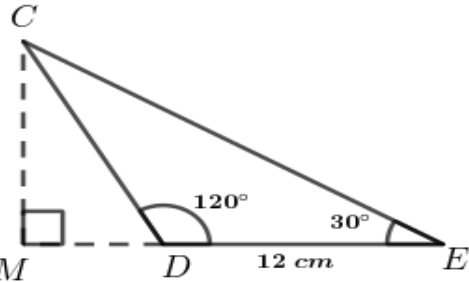
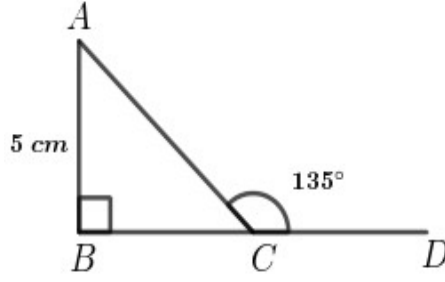
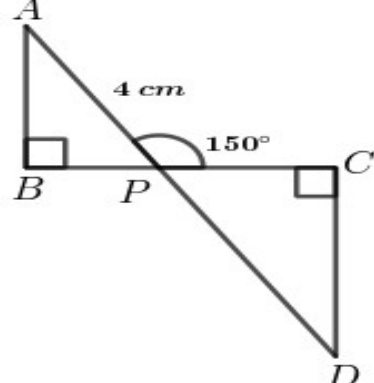
13 In the figure $\angle B = 30^\circ$, $AB = 10 \text{ cm}$, $BC = 12 \text{ cm}$

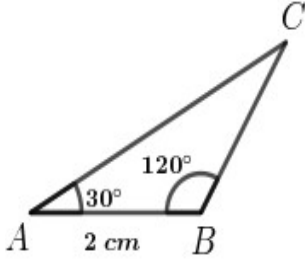
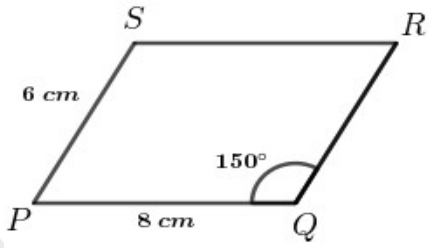
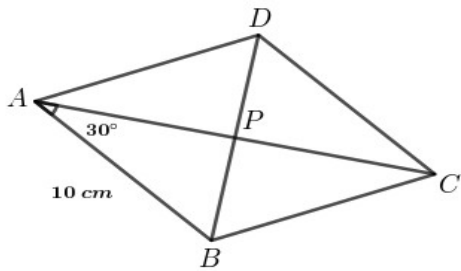
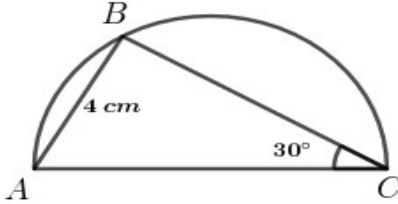
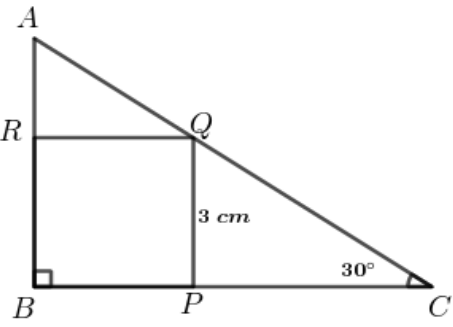
a) What is the perpendicular distance from A to BC ?

b) What is the perimeter of the triangle ABC ?



2

<p>14 In the figure $\angle Q = 60^\circ, PQ = 6 \text{ cm}, QR = 11 \text{ cm}$</p> <p>a) What is the perpendicular distance from P to QR ?</p> <p>b) What is the perimeter of the triangle PQR ?</p>		<p>2</p>
<p>15 In the figure $\angle ABC = 120^\circ, \angle D = 90^\circ, AB = 14 \text{ cm}, BC = 10 \text{ cm}$</p> <p>a) What is the measure of $\angle ABD$?</p> <p>b) What is the length of AD ?</p> <p>c) What is the area of the triangle ABC ?</p>		<p>3</p>
<p>16 In the figure $\angle CDE = 120^\circ, \angle E = 30^\circ, DE = 12 \text{ cm}$</p> <p>a) What is the measure of $\angle DCE$?</p> <p>b) What is the length of CD ?</p> <p>c) What is the measure of $\angle CDM$?</p> <p>d) What is the length of CM ?</p> <p>e) What is the perimeter of the triangle CDE ?</p>		<p>5</p>
<p>17 In the figure $\angle B = 90^\circ, \angle ACD = 135^\circ, AB = 5 \text{ cm}$</p> <p>a) What is the measure of $\angle ACB$?</p> <p>b) What is the length of BC ?</p> <p>c) What is the perimeter of the triangle ABC ?</p>		<p>4</p>
<p>18 In the figure $\angle B = 90^\circ, \angle C = 90^\circ, AP = 4 \text{ cm}, AD = 10 \text{ cm}$</p> <p>a) What is the length of DP ?</p> <p>b) What is the measure of $\angle APB$?</p> <p>c) What is the perimeter of the triangle ABP ?</p> <p>d) What is the area of the triangle DPC ?</p>		<p>5</p>

<p>19 In the figure $\angle B=120^\circ, \angle A=30^\circ, AB=2\text{ cm}$</p> <p>a) What is the measure of $\angle C$?</p> <p>b) What is the length of BC ?</p> <p>c) What is the perpendicular distance from C to AB ?</p> <p>d) What is the area of the triangle ?</p>	 <p style="text-align: right;">5</p>
<p>20 In the parallelogram $PQRS$, $\angle Q=150^\circ, PQ=8\text{ cm}, PS=6\text{ cm}$</p> <p>a) What is the measure of $\angle P$?</p> <p>b) What is the perpendicular distance from S to PQ ?</p> <p>c) What is the area of the parallelogram ?</p>	 <p style="text-align: right;">3</p>
<p>21 In the figure diagonals of the rhombus $ABCD$ intersect at P.</p> <p>$AB=10\text{ cm}$, $\angle BAP=30^\circ$</p> <p>a) What is the measure of $\angle APB$?</p> <p>b) What is the length of PA ?</p> <p>c) What is the length of the diagonal AC ?</p> <p>d) What is the area of the rhombus ?</p>	 <p style="text-align: right;">5</p>
<p>22 In the figure AC is the diameter of the semicircle. $\angle C=30^\circ, AB=4\text{ cm}$</p> <p>a) What is the measure of $\angle ABC$?</p> <p>b) What is the radius of the semicircle ?</p> <p>c) What is the perimeter of the triangle ABC ?</p>	 <p style="text-align: right;">4</p>
<p>23 In the figure $BPQR$ is a square. $PQ=3\text{ cm}, \angle C=30^\circ$</p> <p>a) What is the measure of $\angle A$?</p> <p>b) What are the lengths of CQ and AR ?</p> <p>c) What is the perimeter of the triangle ABC ?</p>	 <p style="text-align: right;">5</p>

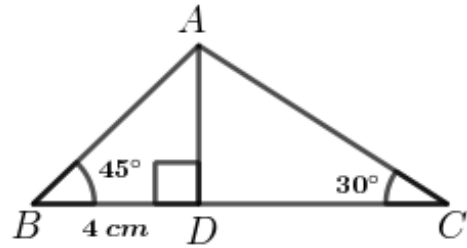
24 In the figure $\angle B = 45^\circ$, $\angle D = 90^\circ$, $\angle C = 30^\circ$, $BD = 4\text{ cm}$

a) What is the length of AD ?

b) What is the length of CD ?

c) What is the measure of $\angle BAC$?

d) What is the ratio of the length of the sides if the ratio of angles of a triangle is 30° , 45° and 105° ?



5

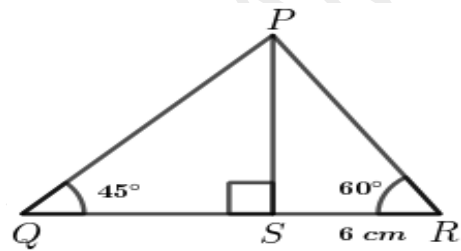
25 In the figure $\angle Q = 45^\circ$, $\angle S = 90^\circ$, $\angle R = 30^\circ$, $SR = 6\text{ cm}$

a) What is the length of PS ?

b) What is the length of QS ?

c) What is the measure of $\angle QPR$?

d) What is the ratio of the length of the sides if the ratio of angles of a triangle is 45° , 60° , 75° ?



5

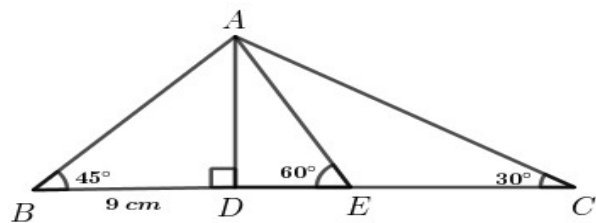
26 In the figure $\angle ABD = 45^\circ$, $\angle ADB = 90^\circ$, $\angle AED = 60^\circ$, $\angle ACE = 30^\circ$

a) What is the length of AD ?

b) What is the length of CD ?

c) What is the length of CE ?

d) What is the perimeter of the triangle ADC ?



5

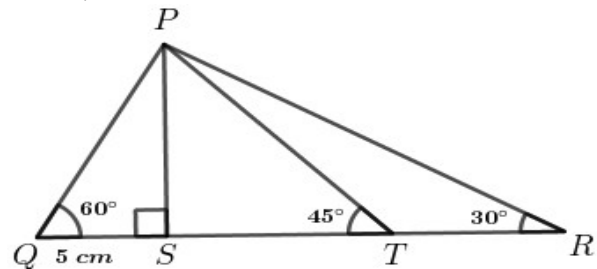
27 In the $\angle PQS = 60^\circ$, $\angle PSQ = 90^\circ$, $\angle PTS = 45^\circ$, $\angle PRT = 30^\circ$

a) What is the length of PS ?

b) What is the length of SR ?

c) What is the length of TR ?

d) What is the perimeter of the triangle PSR ?



5

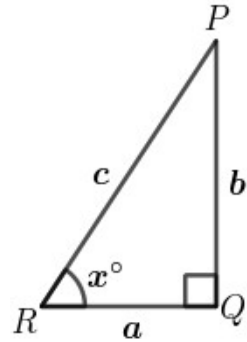
28 In the triangle PQR , $\angle Q=90^\circ, \angle R=x^\circ$. a, b, c are the midpoints of the sides QR, PQ, PR .

a) Which among the following is $\tan x^\circ$?

$$\left(\frac{b}{c}, \frac{a}{c}, \frac{b}{a}, \frac{a}{b} \right)$$

b) Similarly write $\sin x^\circ$ and $\cos x^\circ$ from this triangle ?

c) Prove that $\frac{\sin x^\circ}{\cos x^\circ} = \tan x^\circ$?



4

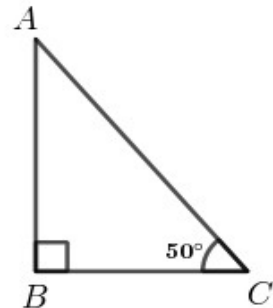
29 In triangle ABC , $\angle B=90^\circ, \angle C=50^\circ$.

a) What is the measure of $\angle A$?

b) Which among the following is $\tan 50^\circ$?

$$\left(\frac{AB}{AC}, \frac{BC}{AC}, \frac{BC}{AB}, \frac{AB}{BC} \right)$$

c) Prove that $\tan 50^\circ \times \tan 40^\circ = 1$?

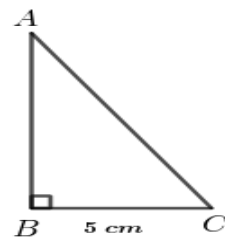


4

30 In the triangle ABC , $\angle B=90^\circ, BC=5\text{ cm}, \sin A = \frac{5}{13}$

a) What is the length of AC ?

b) Compute $\tan A$?

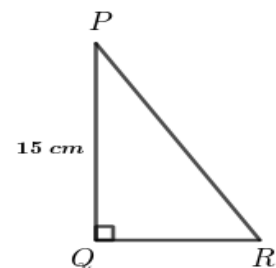


3

31 In the triangle PQR , $\angle Q=90^\circ, PQ=15\text{ cm}, \tan P = \frac{8}{15}$

a) What is the length of QR ?

b) Compute $\sin P$ and $\cos P$?



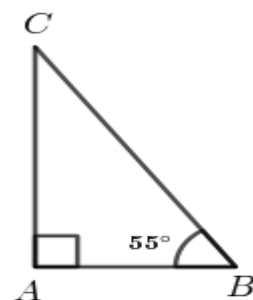
4

32 In the triangle ABC , $\angle A=90^\circ, \angle B=55^\circ$.

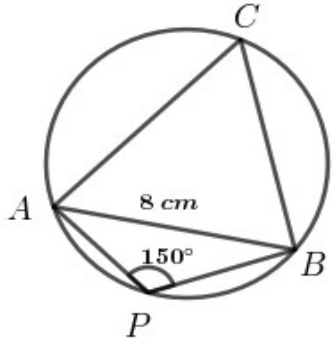
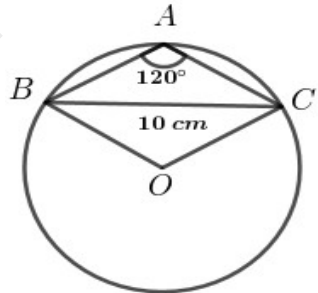
a) What is the measure of $\angle C$?

b) Which among the following is $\sin 55^\circ$?

$$\left(\frac{AB}{BC}, \frac{AC}{BC}, \frac{AC}{AB}, \frac{AB}{AC} \right)$$



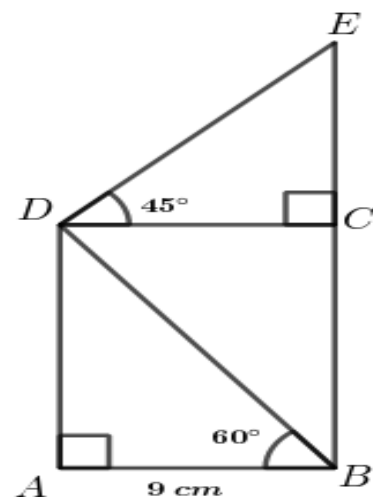
4

	<p>c) Similarly write $\cos 35^\circ$ from this triangle ?</p> <p>d) If an angle of a right triangle is x°, what is the relation between $\sin x^\circ$ and $\cos(90-x)^\circ$?</p>	
33	<p>In the figure, $AB=8\text{ cm}$, $\angle APB=150^\circ$. C is a point on the alternate arc of the arc APB.</p> <p>a) What is the measure of $\angle ACB$?</p> <p>b) What is the diameter of the circumcircle of the triangle ABC ?</p>	 <p style="text-align: right;">3</p>
34	<p>In the figure, $\angle BAC=120^\circ$, $BC=10\text{ cm}$. O is the centre of the circle.</p> <p>a) What is the angle made by the arc BAC on its alternate arc ?</p> <p>b) What is the measure of $\angle BOC$?</p> <p>c) What is the radius of the circle ?</p>	 <p style="text-align: right;">3</p>
35	<p>When sun is an elevation of 60°, the length of the shadow of a tree is 15 meters.</p> <p>a) Draw a rough figure based on the given details ?</p> <p>b) What is the height of the tree ?</p> <p>c) What will be the length of the shadow if sun is an elevation of 30° ?</p>	3
36	<p>A man standing 100 metres away from a building sees its top at an elevation of 45°.</p> <p>a) Draw a rough figure based on the given details ?</p> <p>b) Compute the height of the building ?</p>	2
37	<p>A man standing away from a hill sees its top at an elevation of 60°. The height of the hill is $300\sqrt{3}$ metres.</p>	

	<p>a) Draw a rough figure based on the given details ?</p> <p>b) Compute the distance between the man and the hill ?</p>	2
38	<p>Two children stand on either side of a flag post of height 50 meters . First child sees the top of the flag post at an elevation of 45° and the second child sees it at an elevation of 30°</p> <p>a) Draw a rough figure based on the given details?</p> <p>b) What is the distance between the flag post and the first child ?</p> <p>c) What is the distance between the flag post and the second child ?</p>	4
39	<p>A man standing on the bottom of a building sees the top of a tower at an elevation of 45° and sees it from the top of the building at an elevation of 30° .</p> <p>The tower is 66 metres away from the building .</p> <p>a) Draw a rough figure based on the given details ?</p> <p>b) What is the height of the tower ?</p> <p>c) What is the height of the building ?</p>	4
40	<p>A man standing on the bottom of a hill sees the top of a mountain at an elevation of 60° and sees it from the top of the hill at an elevation of 45° .</p> <p>The mountain is 500 metres away from the hill .</p> <p>a) Draw a rough figure based on the given details ?</p> <p>b) What is the height of the mountain ?</p> <p>c) What is the height of the hill ?</p>	4
41	<p>A man standing away from the bottom of a tower sees its top at an elevation of 60° . Standing back by 50 metres , he sees it an elevation of 30° .</p> <p>a) Draw a rough figure based on the given details ?</p> <p>b) What is the height of the tower ?</p>	4

42	<p>A man standing away from the bottom of a flag post sees its top at an elevation of 30° . Moving 20 metres towards the flag post , he sees its top at an elevation of 60° .</p> <p>a) Draw a rough figure based on the given details ?</p> <p>b) What is the height of the flag post ?</p>	4
43	<p>A boy standing 300 meters away from the bottom of a hill sees its top at an elevation of 30° . Moving few metres towards the hill , he sees it an elevation of 60° .</p> <p>a) Draw a rough figure based on the given details?</p> <p>b) What is the height of the hill ?</p> <p>c) How far does the boy move towards the hill ?</p>	4
44	<p>A boy standing 600 meters away from the bottom of a mountain sees its top at an elevation of 60° . Standing back by few metres , he sees it an elevation of 30°</p> <p>a) Draw a rough figure based on the given details?</p> <p>b) What is the height of the mountain ?</p> <p>c) How far does the boy move backward ?</p>	4
45	<p>Raju and Geetha stand on either side of a tower . Raju sees the top of the building at an elevation 30° and Geetha sees it an elevation of 45° . After moving 80 metres towards the tower , Raju sees its top at an elevation 60°</p> <p>a) Draw a rough figure based on the given details ?</p> <p>b) What is the height of the tower ?</p> <p>c) What is the distance between the tower and Geetha ?</p>	4
46	<p>A man standing on the top of a tower sees a car 40 m away from the foot of the tower at a depression of 60° .</p> <p>a) Draw a rough figure based on the given details ?</p>	

	b)What is the height of the tower ?	2
47	<p>A man standing on the top of a building sees the top of a tower at a depression of 30° and its base at a depression of 60° .The distance between the building and the tower is 90 metres .</p> <p>a) Draw a rough figure based on the given details ?</p> <p>b) What is the height of the building ?</p> <p>c) What is the height of the tower ?</p>	4
48	<p>A man standing on the top of a building sees the top of a tower at an elevation of 30° and its base at a depression of 45° from . The height of the building is 75 metres.</p> <p>a) Draw a rough figure based on the given details ?</p> <p>b) What is the distance between the building and the tower ?</p> <p>c) What is the height of the tower ?</p>	4
49	<p>A man standing on the top of a building sees the top of a hill at an elevation of 45° and its base at a depression of 60° .</p> <p>The height of the building is $50\sqrt{3}$ metres .</p> <p>a) Draw a rough figure based on the given details ?</p> <p>b) What is the distance between the hill and the building ?</p> <p>c) What is the height of the hill ?</p>	4
50	<p>In the figure ABCD is a rectangle . $AB = 9$ cm</p> <p>$\angle ABD = 60^\circ$, $\angle CDE = 45^\circ$.</p> <p>a) What is the measure of $\angle ADB$?</p> <p>b) What are the lengths of BD and DE ?</p> <p>c) What is the measure of $\angle BDE$?</p> <p>d) What is the ratio of the length of the sides if the ratio of angles of a triangle is 30° , 45° and 105° ?</p>	5



51 In the figure ABCD is a rectangle . AD = 5 cm

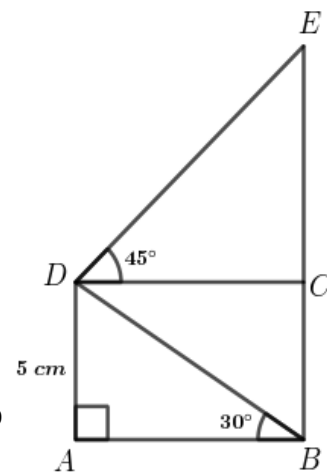
$\angle ABD = 30^\circ$, $\angle CDE = 45^\circ$.

a) What is the measure of $\angle ADB$?

b) What are the lengths of BD and DE ?

c) What is the measure of $\angle BDE$?

d) What is the ratio of the length of the sides if the ratio of angles of a triangle is 45° , 60° and 75° ?



5