

ഉള്ളിലം

SSLC SELF EVALUATION MATERIAL- 2020-21(2)
TIRUR EDUCATIONAL DISTRICT HEADMASTER FORUM
SOCIAL SCIENCE (SET 1)

Time: 45 Minutes

STANDARD - X

Total Score:20

Instructions

- 10 Minutes cool off time.
- This time can be used to read questions, choose favourites and plan answers.
- Read and understand the instructions for each question and write the answer.
- Score and time should be considered when writing the answer.
- The maximum score for question 1 to 11 will be 20.

1) Questions a to d carry 1score each.

a) Which is the tallest peak in India?

(i. Mount Everest, ii. Mount K₂,iii. Anamudi peak.)

b) The southernmost major port of India.

(i. Kochi, ii. Kandla, iii. Tuticorin.)

c) Which bank is known as the Banker's Bank?

(i. Reserve bank of India, ii. State bank of India,iii. Canara bank)

d) Who formed the Forward bloc political party?

(i. Gandhiji, ii. C R Das, iii. Subhash Chandra Bose.)

Questions 2 to 7 carry 3 score each.

2) What are the features of the eastern coastal plain of India.

3) What are the major recommendations of the national education policy of 1986.

4) What are the major types of soils found in the Peninsular Plateau? Specify their features.

5) Explain the importance of "Vaikom sathyagraha".

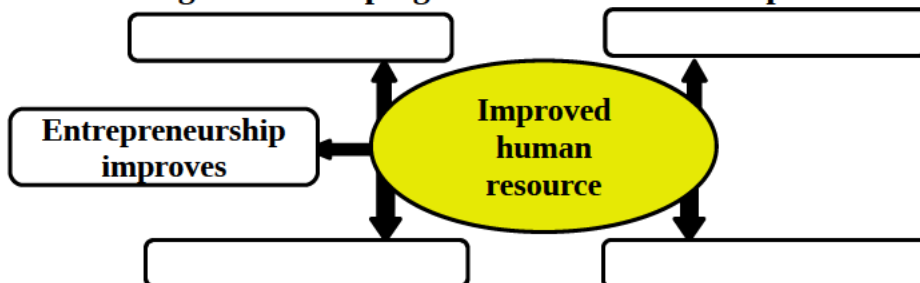
6) Explain how healthy persons can participate in the progress of a country.

7) Boycotting election was one of the feature of Non-co-operation movement. List out the other features.

Questions 8 to 10 carry 4 score each.

8) Explain the role played by Sardar Vallabhai Patel and V.P Menon in the integration of princely states into the Indian union.

9) The advantages in developing human resource. Complete the word web.



10) Mark and label the following Geo information in the outline map of India.

a) Patkai Bum b) Karakoram c) Godavari d) Malwa plateau

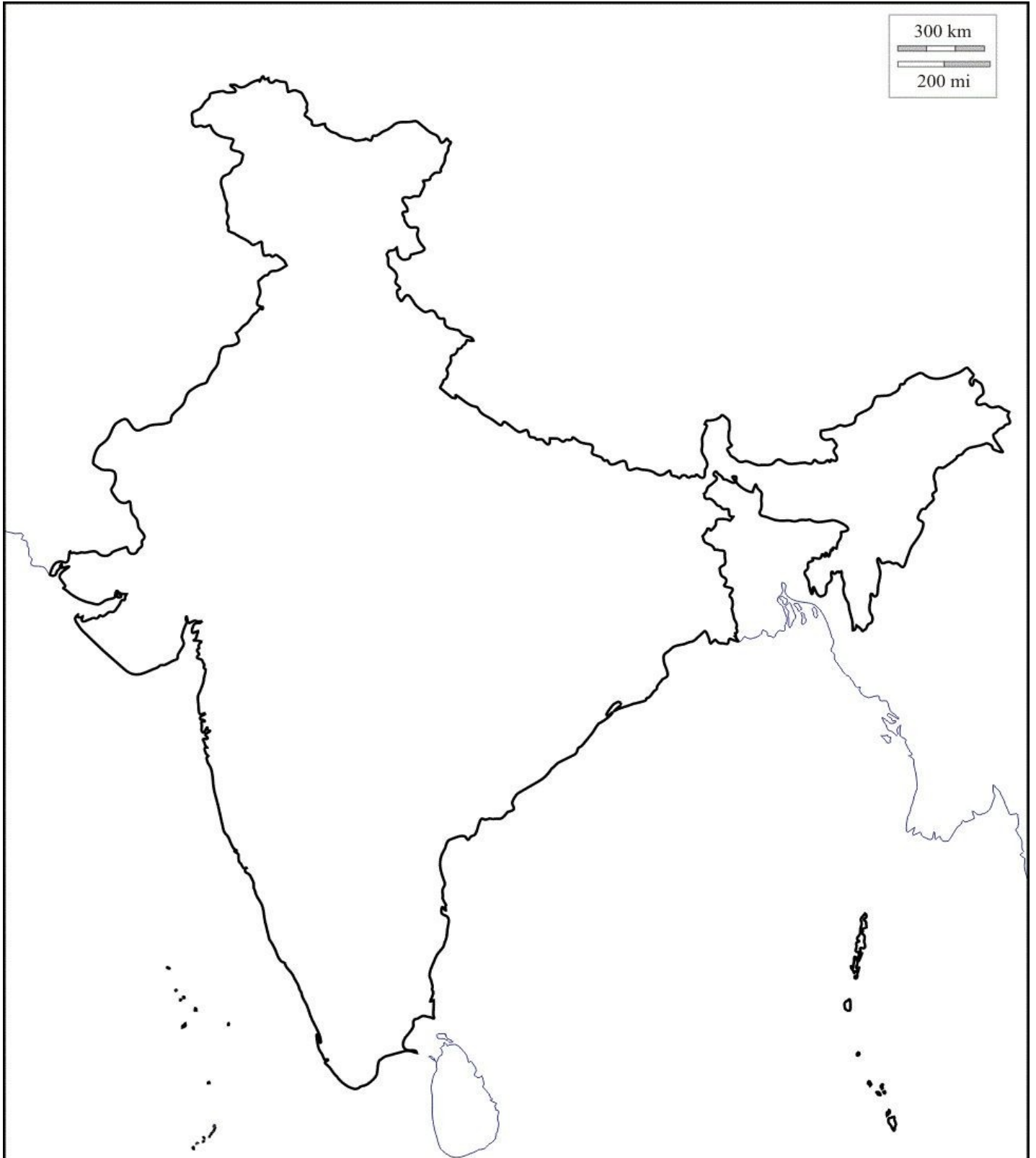
OR

a) Vindhya ranges b) Chhatta Nagpur Plateau c) Kachchh Peninsula d) River Indus

Question No 11 carry 6 score

11) Evaluate Gandhi's role in the Indian independence movement on the basis of the following hints.

- ◆ **Non- co-operation movement**
- ◆ **Civil disobedience**
- ◆ **Quit India movement**



SSLC SELF EVALUATION MATERIAL- 2020-21 (2)
TIRUR EDUCATIONAL DISTRICT HEADMASTER FORUM
SOCIAL SCIENCE (SET 2)

Time: 45 Minutes
Total Score:20

STANDARD - X

Instructions

- 10 Minutes cool off time.
- This time can be used to read questions, choose favourites and plan answers.
- Read and understand the instructions for each question and write the answer.
- Score and time should be considered when writing the answer.
- The maximum score for question 1 to 11 will be 20.

1) Questions a to d carry 1 score each.


- a) Which statement is correct about Himalayan rivers?
(i. Smaller catchment area, ii. Intensity of erosion is less, iii. Create gorges.)
- b) The Indian city known as "Cottonopolis"
(i. Chennai, ii. Kolkata, iii. Mumbai.)
- c) Who led the Dharasana Salt Satyagraha?
(i. Subhash Chandra Bose, ii. Sarojini Naidu, iii. Aruna Asaf Ali.)
- d) Name the bank which aims at "co-operation, self-help, mutual assistance".
(i. Co-operative banks, ii. Commercial banks, iii. Development banks.)

Question 2 to 7 carry 3 score each

- 2) Explain the importance of the Northern mountain region.
- 3) List out the achievements of independent India in the field of science?
- 4) Make a short note on the life of the people in the coastal plains?
- 5) Who led the Khilafat movement in India? Explain the circumstance that led Gandhiji to support the Khilafat Movement.
- 6) What are the qualitative factors that improve the labour potential ?
- 7) Ensuring law and order is one of the duties of the government . Write the other duties.

Questions 8 to 10 carry 4 score each.

- 8) What are the main principles of India's foreign policy?
- 9) How education helps in the development of a country. Complete the flowchart.



- 10) Mark and label the following Geo information in the outline map of India.
a) River Kaveri, b) Mount K₂, c) Mizo hills, d) Satpura ranges.

OR

- a) Aravalli ranges, b) River Tapti, c) Naga hills, d) River Mahanadi.

Question no 11 carry 6 score

- 11) Evaluate the role of Subhash Chandra Bose in Indian freedom struggle.



300 km
200 mi

