

Danish Sir's Practice Papers

SSLC MCQ PRACTICE PAPER (July – 2021 Exam)

Sub: Maths, Science, Social (40 Marks Each)

Code no. 2106-27

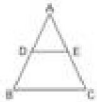


Time: 2 Hour

Total Marks: 120

MATHEMATICS

1. In the figure $AB=12\text{cms}$, $AD=7\text{cms}$, $AC=18\text{cms}$ and $DE \parallel BC$ then the length of AE is



- (a) 10.5cms (b) 7.5cms
(c) 11.5cms (d) 12.5cms

2. The pair of linear equation $2x+ 3y - 9 =0$ and $4x+6y - 18 = 0$ represents two lines which are

- (a) Interesting lines (b) Parallel lines
(c) Perpendicular to each other (d) Coinciding lines

3. If $A=2\pi r^2$, then the value of r is

- (a) $\frac{\pm\sqrt{2\pi}}{A}$ (b) $\frac{\pm\sqrt{A}}{2\pi}$
(c) $\frac{\pm\sqrt{2A}}{\pi}$ (d) $\frac{\pm\sqrt{\pi}}{2A}$

4. The ratio in which (4,5) divides the join of (2,3) and (7,8) is

- (a) 7 : 2 (b) -8 : 3
(c) 3 : 2 (d) 2 : 3

5. For the following distribution.

Marks less than	10	20	30	40	50	60
no. of students	3	12	27	57	75	80

The modal class is :

- (a) 10-20 (b) 20-30
(c) 30-40 (d) 50-60

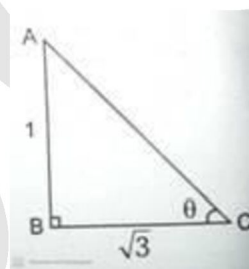
6. A solid has been melted and recast in to a wire ,which of following remains the same

- (a) length (b) Height
(c) radius (d) Volume

7. $9\sec^2 A -9\tan^2 A =$

- (a) 1 (b) 9
(c) 8 (d) 0

8. In the figure, the angle of elevation θ is



- (a) 30° (b) 45°
(c) 90° (d) 60°

9. In an A.P. if $S_5=35$ and $S_4=22$, then the 5th term is

- (a) 10 (b) 13
(c) 22 (d) 35

10. $\sec A$ is same as

- (a) $\sin A$ (b) $\frac{1}{\cos A}$
(c) $\cos A$ (d) $\frac{1}{\sin A}$

11. If sum of three terms of A.P. is 21 then the middle term is

- (a) 3 (b) 7
(c) 11 (d) 10

12. If one root of $px^2+qx+r=0$ is reciprocal of the other root then

- (a) $p=q$ (b) $q=r$
(c) $p=r$ (d) $p=q=r$



CRESCENT ITI (GOVT.AIDED)

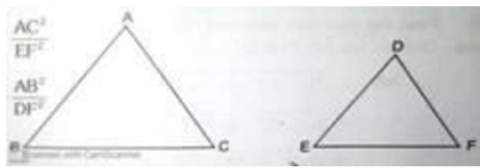
Fees Rs. 2,400/- only for Govt. Quota Seats

5, Near Metro Pillar 58, Ilyasnagar, Sarakki Gate, Kanakapura Main Road, Bangalore-560 078.
Jigani Link Road, Near SFO, KIADB, Bommasandra, 4th Phase, Bangalore-560 099.

Ph: 92424 84476
94482 26652



13. In this figure $\triangle ABC \sim \triangle DEF$. Then which one of the following ratios is correct?



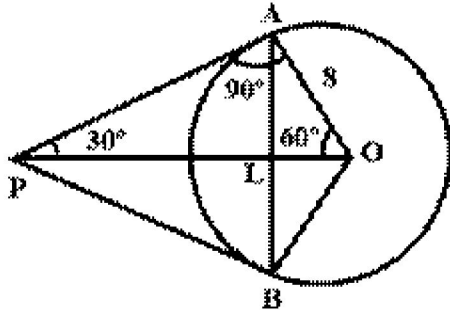
- s
- (a) $\frac{\triangle ABC}{\triangle DEF} = \frac{AB^2}{EF^2}$
- (b) $\frac{\triangle ABC}{\triangle DEF} = \frac{AC^2}{EF^2}$
- (c) $\frac{\triangle ABC}{\triangle DEF} = \frac{BC^2}{EF^2}$
- (d) $\frac{\triangle ABC}{\triangle DEF} = \frac{AB^2}{DF^2}$
14. If $x=a, y=b$ is the solution of the equations $x-y=2$ and $x+y=4$, then the values of a and b are respectively.
- (a) 3 and 5 (b) 5 and 3
- (c) 3 and 1 (d) -1 and -3
15. Find the value of $\sin 30^\circ + \cos 60^\circ$
- (a) 2 (b) 4
- (c) 1 (d) 3
16. In $S = \frac{1}{2} at^2$ if $S=72, a=4$ then the value of 't' is
- (a) 8 (b) 6
- (c) 5 (d) 7
17. The remainders obtained when a number is divided by 5 are
- (a) 0,1,2,3,4,5 (b) 0,1,2,3,4,
- (c) 0,1,2,3, (d) 0,1,2,3,
18. The ratio of volume of a cone and a cylinder of equal diameter and equal height is
- (a) 3:1 (b) 1:3
- (c) 1:2 (d) 2:1
19. Sum of first 'a' terms of an AP is 'n', then the common difference is
- (a) 3 (b) 4
- (c) 2 (d) -3

20. When the angle of elevation of sun is 30° the length of the shadow cast by 50 m high building is
- (a) $50/\sqrt{3} m$ (b) $50\sqrt{3} m$
- (c) $25\sqrt{3} m$ (d) $300\sqrt{3} m$
21. If the roots of the equation $12x^2 + mx + 5 = 0$ are in the ratio 3:2, m equals
- (a) $\frac{1}{12}$ (b) $\frac{5}{12}$
- (c) $5\sqrt{10}$ (d) $\frac{5}{12}\sqrt{10}$
22. The value of $\cos 48^\circ - \sin 42^\circ$ is
- (a) 0 (b) $\frac{1}{4}$
- (c) $\frac{1}{2}$ (d) 1
23. The maximum value of $\cos \theta$ could be
- (a) $2/\sqrt{3}$ (b) $\sqrt{3}/2$
- (c) (1,2) (d) $\sqrt{2}$
24. The mean and median of a data are 14 and 15 respectively. The value of mode is
- (a) 16 (b) 17
- (c) 13 (d) 18
25. If the first term and the common differences of an A.P. are 6 and 5 respectively, find its 3rd term.
- (a) 12 (b) 22
- (c) 36 (d) 16
26. The pair of equations $2x+y=5, 3x+2y=8$ has
- (a) Unique solution (b) Two solutions
- (c) No solutions (d) Infinitely many solutions
27. Which one of the following is correct?
-
- (a) $A C^2 - A B^2 = B C^2$ (b) $A B^2 - B C^2 = A C^2$
- (c) $A C^2 + A B^2 = B C^2$ (d) $AB+BC=AC$

28. If $l^2 = r^2 + h^2$ then the value of 'r' is equal to

- (a) $R = l^2 - h^2$ (b) $r^2 = \sqrt{l^2 + h^2}$
 (c) $r^2 = \sqrt{l^2 - h^2}$ (d) $R = l-h$

29. In the adjoining figure if $\angle A = 90^\circ$, then $\angle AOP$ is

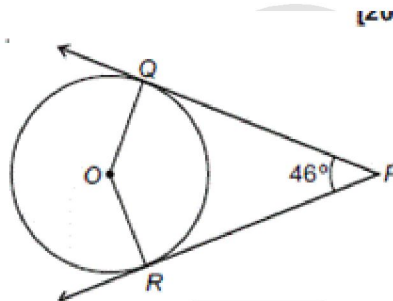


- (a) 90° (b) 180°
 (c) 60° (d) 30°

30. In figure, PQ and PR two tangents to a circle

QPR with centre O. If $\angle QOR = 46^\circ$,

[2014



- (a) 67° (b) 134°
 (c) 44° (d) 46°

31. If the lines drawn to the linear equations of the type $a_1x + b_1y + c_1 = 0$ and $a_2x + b_2y + c_2 = 0$ are coincident on each other, correct relation among the following is

- (a) $\frac{a_1}{a_2} = \frac{b_1}{b_2} = \frac{c_1}{c_2}$ (b) $\frac{a_1}{a_2} \neq \frac{b_1}{b_2} \neq \frac{c_1}{c_2}$
 (c) $\frac{a_1}{a_2} = \frac{b_1}{b_2} \neq \frac{c_1}{c_2}$ (d) $\frac{a_1}{a_2} \neq \frac{b_1}{b_2} = \frac{c_1}{c_2}$

32. If the angle between two radii of a circle is 140° , then the angle between the tangents at the ends of the radii is :

- (a) 90° (b) 50°
 (c) 70° (d) 60°

33. The ratio of the length of a pole and its shadows is $1 : \sqrt{3}$. The angle of elevation of the sun is :

- (a) 90° (b) 60°
 (c) 30° (d) 45°

34. The number of solutions of the pair of linear equations $x+2y-8=0$ and $2x+4y=16$ have

- (a) 0 (b) 1
 (c) Infinitely many (d) None

35. The distance between origin and the point $P(x_1, y_1)$ is

- (a) $\sqrt{x_1^2 + y_1^2}$ (b) $\sqrt{x_1^2 - y_1^2}$
 (c) $\sqrt{x_1^2 / y_1^2}$ (d) $\sqrt{x_1^2 + y_1^2}$

36. The empirical relationship between the three measures of central tendency is,

- (a) $3 \text{ median} = \text{mode} + 2 \text{ mean}$ (b) $\text{median} = 4 \text{ mean}$
 (c) $3 \text{ median} = \text{mode} - 2 \text{ mean}$ (d) $\text{mean} = 2 \text{ median} + 3 \text{ mode}$

37. The co ordinates of a point on x- axis which lies on the perpendicular bisector of the line segment joining the points (7,6) and (-3,4) are

- (a) (0, 2) (b) (3, 0)
 (c) (0, 3) (d) (2, 0)

38. The distance between the point (4, 3) and the Origin is

- (a) 7 Units (b) 25 Units
 (c) 5 Units (d) 6 Units

39. The formula used to find the curved surface area of a cone of radius (r), height (h) and slant height (l) is

- (a) $CSA = \pi r l$ (b) $CSA = 2\pi(r + l)$
 (c) $CSA = 2\pi(r + h)$ (d) $CSA = \frac{\pi r^2 h}{4}$

40. If a pole of height 6 m casts a shadow $2\sqrt{3} \text{ m}$ long on the ground, then the sun's elevation is :

- (a) 30° (b) 60°
 (c) 45° (d) 90°

SCIENCE



b-fet CRESCENT ITI (GOVT.AIDED)

Fees Rs. 2,400/- only for Govt. Quota Seats

★ # 5, Near Metro Pillar 58, Ilyasnagar, Sarakki Gate, Kanakapura Main Road, Bangalore-560 078.
 ★ Jigani Link Road, Near SFO, KIADB, Bommasandra, 4th Phase, Bangalore-560 099.

**Ph: 92424 84476
 94482 26652**



1. In a locality, hard water, required for an experiment, is not available. However, the following salts are available in the school laboratory

- | | |
|------------------------|----------------------|
| (a) Sodium sulphate | (b) Calcium sulphate |
| (c) Magnesium chloride | (d) Calcium chloride |
| Sodium chloride | Potassium sulphate |

2. Which of the following statements about the Modern Periodic Table is correct:

- | | |
|---|---|
| (a) It has 18 horizontal rows known as Periods. | (b) It has 7 vertical columns known as Periods. |
| (c) It has 18 vertical columns known as Groups. | (d) It has 7 horizontal rows known as Groups. |

3. Emasculation process in plants involves

- | | |
|---|---|
| (a) removal of anthers of flowers well before maturity of gynoecium of flowers. | (b) removal of gynoecium of flowers well before the maturity of anthers of flowers. |
| (c) removal of anther and gynoecium of flowers simultaneously before the maturity of flowers. | (d) neither of these. |

4. An element common to all acids is

- | | |
|--------------|--------------|
| (a) Oxygen | (b) Hydrogen |
| (c) Nitrogen | (d) Carbon |

5. An example of abiotic component is

- | | |
|--------------------|-------------|
| (a) Plants | (b) soil |
| (c) microorganisms | (d) animals |

6. Which one of the following is renewable resource?

- | | |
|-----------------|----------------|
| (a) Wildlife | (b) Coal |
| (c) Natural gas | (d) Petroleum. |

7. A student sitting on the last bench in the class cannot read the writing on the blackboard clearly but he can read the book lying on his desk clearly Which of the following statement in

about the student

- | | |
|---|---|
| (a) the near point of his eyes has receded away | (b) the near point of his eyes has come closer to him |
| (c) The far point of his eyes has receded away | (d) The far point of his eyes has come closer to him |

8. We can see the sun before the actual sunrise by about :

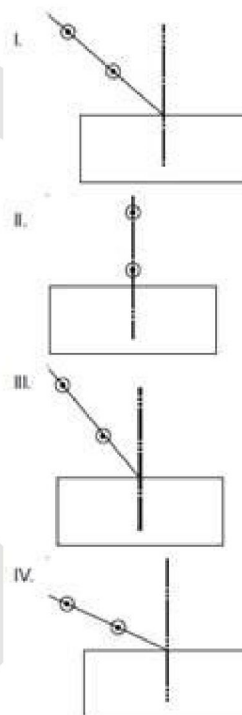
- | | |
|---------------|----------------|
| (a) 5 minutes | (b) 2 minutes |
| (c) 2 hours | (d) 20 minutes |

9. The following gas is released when metals reacts with an acid

- | | |
|---------------------|---------------------|
| (a) CO ₂ | (b) H ₂ |
| (c) CO | (d) CH ₄ |

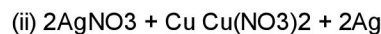
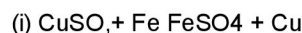
10. Select from the following the best set-up for

tracing the path of a ray of light through a rectangular glass slab: [2013]



- | | |
|---------|--------|
| (a) I | (b) II |
| (c) III | (d) IV |

11. Observe the following chemical equations and identify the correct statement.



- | | |
|---|---|
| (a) (a) Copper is more reactive than Iron and Silver. | (b) (b) Iron is less reactive than Copper and Silver. |
| (c) (c) Copper is more reactive than Silver but less than Iron. | (d) (d) Silver is more reactive than Copper and Iron. |

12. Which of the following is not a part of the female reproductive system in human beings

- (a) Ovary (b) Uterus
(c) Vas deferens (d) Fallopian tube

13. A red brown gas is released on heating lead nitrate. It is an example of

- (a) Combination reaction (b) Oxidation reaction
(c) Decomposition Reaction (d) Reduction reaction

14. The main fuel used in thermal power stations

- (a) Radioactive material (b) coal
(c) petroleum (d) natural gas

15. A student obtained a sharp image of the grills of a window on a screen using a concave mirror.

His teacher remarked that for getting better results a well lit distance object (preferably the Sun) should be focused on the screen. What should be done for this purpose?

[2012, 2013

- (a) Move the screen and the mirror towards the object
(b) Move the screen and the mirror away from the object
(c) Move the screen slightly away from the mirror
(d) Move the mirror slightly towards the screen

16. Which of the following will give displacement reactions?

- (a) NaCl solution and copper metal
(b) MgCl₂ solution and aluminium metal
(c) FeSO₄ solution and silver metal
(d) AgNO₃ solution and copper metal.

17. The pH of the gastric juices released during

- (a) a) less than 7 (b) is b) more than 7
(c) digestion c)equal to 7 (d) d) equal to 0

18. The abbreviation IUCN stands for

- (a) International Union for Conservation of Nitrogen. (b) International Union for Conservation of Nature.
(c) International Union for Conservation of Nature and Natural Resources. (d) International Union for Cryopreservation of Natural Resources.

19. Which of the following substance will not give carbon dioxide on treatment with dilute acid ?

- (a) a) Marble (b) b) Limestone
(c) c) Baking soda (d) d) Lime

20. Which of the plants shows positively geotropic movement?

- (a) Leaf (b) root
(c) stem (d) flower

21. Which of the following provides satisfactory explanation of biogenetic law ?

- (a) Homologous organs (b) Similarity among early embryos of vertebrates.
(c) Vestigial organs (d) Analogous organs.

22. The refractive index of water with respect to air is 4/3. The refractive index of air with respect

to water will be:

- (a) 1.75 (b) 0.50
(c) 0.75 (d) 0.25

23. Refraction of light in the eye occurs at

- (a) The lens only (b) The cornea only
(c) Both the cornea and the lens (d) The pupil

24. Electricity from the ocean can be generated based on utilizing.

- (a) Kinetic energy of the waves but not stored thermal energy. (b) Stored thermal energy but not kinetic energy of the wind.
(c) Kinetic energy of the waves as well as stored thermal energy. (d) Neither kinetic energy of the waves nor stored thermal energy.

25. The PH value of mouth is

- (a) 5.0 (b) 5.5
(c) 5.3 (d) 5.1



b-fet CRESCENT ITI (GOVT.AIDED) Fees Rs. 2,400/- only for Govt. Quota Seats

★ # 5, Near Metro Pillar 58, Ilyasnagar, Sarakki Gate, Kanakapura Main Road, Bangalore-560 078.
★ Jigani Link Road, Near SFO, KIADB, Bommasandra, 4th Phase, Bangalore-560 099.

**Ph: 92424 84476
94482 26652**



Skill India
कौशल भारत - कुशल भारत

26. On moving from left to right in a period in the periodic table, the size of the atom.
- (a) Increases (b) Decreases
(c) Does not change appreciably (d) First decreases and then increases.
27. If one hydrogen atom of propane is replaced by a ketone group, than the molecular formula of the compound obtained is
- (a) C_4H_8O (b) C_3H_8O
(c) C_3H_6O (d) $C_4H_{10}O$
28. The correct statement related to digestion in small intestine is
- (a) Acidic food is made alkaline by bile juice (b) Food is made acidic by hydrochloric acid
(c) Starch is digested due to the action of amylase (d) Protein is digested due to the action of pepsin
29. Which of the following lenses would you prefer to use while reading small letters found in a dictionary?
- (a) A convex lens of focal length 15cm (b) A concave lens of focal length 50cm
(c) A convex lens of focal length 5 cm (d) A convex lens of focal length 5cm
30. Nutrients are translocated in plants through -
- (a) Xylem tracheids (b) Phloem sieve tubes
(c) Xylem vessels (d) Phloem companion cells.
31. The size of the pupil is controlled by which of these?
- (a) Retina (b) Ciliary muscles
(c) iris (d) cornea
32. Spinal cord originate from
- (a) Cerebrum (b) Medulla
(c) Pons (d) Cerebellum
33. Observe the following table
- | | |
|---|-----------------|
| Reverse the direction of electric current | i) Galvanometer |
| Safety device | ii) Commentator |
| Detects the presence of electric current | iii) Fuse |
- The correct arrangement is
- (a) a-iii, b-I, c-ii (b) a-ii, b-I, c-iii
(c) a-ii, b-iii, c-i (d) a-iii, b-ii, c-i
34. Part of the flower that develops into fruit and part of the seed that develop into root respectively are
- (a) Ovary and plumule (b) Plumule and radicle
(c) Ovary and radicle (d) Ovary and ovule
35. In emergency situation, blood pressure is controlled by
- (a) Adrenaline (b) Prolactin
(c) Thyroxine (d) Gonadotrophins.
36. Which of the following statements is incorrect regarding magnetic field lines?.
- (a) The direction of magnetic field at a point is taken to be the direction in which the north pole magnetic compass needle points (b) Magnetic field lines are closed curves.
(c) If magnetic field lines are parallel and equidistant, they represent zero field strength. (d) Relative strength of magnetic field is shown by the degree of closeness of the field lines.
37. The group of organisms that reproduce through fission only is
- (a) Amoeba, Hydra, spirogyra (b) Leishmania, Ameoba, yeast
(c) Ameoba, Plasmodium, Planaria (d) Plasmodium, Ameoba, leishmania
38. Which of the following is not a plant hormone
- (a) Auxin (b) Gibberins
(c) Thyroxin (d) Cytokinins
39. The part of box-type solar cooker which is responsible for producing greenhouse effect is :
- (a) plane mirror reflector (b) black coating inside the box
(c) glass sheet cover (d) utensils placed in the cooker box
40. The direction of the force on a current - carrying wire placed in a magnetic field depend
- (a) the direction of the current but not on the direction of the field (b) the direction of the field but not on the direction of the current
(c) the direction of the current as well as the direction of the field (d) neither the direction of the current nor the direction of the field.

SOCIAL STUDIES

1. India and china signed Panchaheela principles in
- (a) 1962 (b) 1971
(c) 1948 (d) 1954



b-fet CRESCENT ITI (GOVT.AIDED)

Fees Rs. 2,400/- only for Govt. Quota Seats

★ # 5, Near Metro Pillar 58, Ilyasnagar, Sarakki Gate, Kanakapura Main Road, Bangalore-560 078.
★ Jigani Link Road, Near SFO, KIADB, Bommasandra, 4th Phase, Bangalore-560 099.

**Ph: 92424 84476
94482 26652**



Skill India
कौशल भारत - कुशल भारत

2. Jawahar Lal Nehru outlined Indian foreign policy on
 (a) September 7 , 1946 (b) September 7, 1948
 (c) December 25, 1946 (d) December 25,1948
3. The soil known as deposited soil is
 (a) Black (b) Red
 (c) Alluvial (d) Laterite
4. The help line provided to prevent child marriage is
 (a) 1912 (b) 1098
 (c) 1800 (d) 1909
5. An example for direct tax is.
 (a) /value added tax (b) Central exercise duty
 (c) Stamp duty (d) Service tax
6. A person has bought a car of worth Rs.15 lakhs is now facing some problems in it, but the car company is not responding to him. To which agency can the person complain?
 (a) District Consumer Forum (b) The State Consumer Commission
 (c) The National Consumer Commission (d) Inter-State Consumer Forum
7. As per suggestion of swami Vivekananda , Chamaraja Wodeyar Xstarted schools for
 (a) Touchables (b) Brahmins
 (c) Christians (d) Untouchables
8. Bhakra-Nangal project constructed across the river
 (a) sutluj (b) krishna
 (c) kaveri (d) Kosi
9. The Indian textiles could not be sold in England due to
 (a) Heavy tariffs (b) Lack of transportation
 (c) Heavy export (d) Poor quality
10. The highest peak in the eastern ghats is
 (a) Anamudi (b) K²
 (c) Guru shikhar (d) Armakonda
11. The article gave permission to the establishment of minority educational institution .
 (a) Article 21A (b) Article17
 (c) Article29 (d) Article30
12. India and china established the BRICS in
 (a) 2015 (b) 2016
 (c) 1985 (d) 1963
13. The upper Krishna project is constructed across the river
 (a) kaveri (b) Krishna
 (c) kosi (d) Mahanadi
14. The summer rainfall in Kerala is called as
 (a) Kalabaisakhi (b) Mango showers
 (c) Coffee blossoms (d) Andhis
15. The word wagh means
 (a) Lion (b) Tiger
 (c) Brave (d) Courage
16. The famous declaration 'back to Vedas ' is given by
 (a) Dayananda saraswathi (b) Raja ram mohan roy
 (c) M. G.Ranade (d) Athmarama panduranga
17. Scrub forests and grassland are found in annual rainfall is .
 (a) 10-50cm (b) 100-200cm
 (c) 60-100cm (d) 200-250cm
18. The largest producer of rice in India is
 (a) Andhra Pradesh (b) Punjab
 (c) West Bengal (d) Karnataka
19. India belongs to
 (a) Underdeveloped country (b) Developed country
 (c) Developing country (d) Backward country
20. The sikh people signed a humiliating Lahore agreement in _____
 (a) 1818 (b) 1846
 (c) 1848 (d) 1857
21. The women and child development department started to provide
 (a) Shelter (b) Health
 (c) Education (d) Food
22. Maratha paper was published by _____.
 (a) Jawaharlal Nehru (b) Rasbihari Bose
 (c) Balangadhar Tilak (d) V.D.Savarkar
23. India gets annual rainfall during rainy season is
 (a) 10% (b) 2%
 (c) 75% (d) 13%



b-fet CRESCENT ITI (GOVT.AIDED)

Fees Rs. 2,400/- only for Govt. Quota Seats

★ # 5, Near Metro Pillar 58, Ilyasnagar, Sarakki Gate, Kanakapura Main Road, Bangalore-560 078.
 ★ Jigani Link Road, Near SFO, KIADB, Bommasandra, 4th Phase, Bangalore-560 099.

**Ph: 92424 84476
94482 26652**



24. Nana sahib's commander was
(a) Man singh **(b) Wajid ali**
(c) Taty a tope **(d) Nana phadnavis**
25. The Legislation comprising of four rights such as Citizen safety, Information, Appeal and remedy was adopted by.
(a) UK President **(b) Indian President**
(c) US President **(d) Indian Prime Minister**
26. The following government given 50% reservation in local body elections to women
(a) Andhra pradesh **(b) Orissa**
(c) Sikkim **(d) Kamataka**
27. The director of Balaji Tele films
(a) Azim **(b) Ekta Kapoor**
(a) Premji
(c) Narayan Murthy **(d) Naresh Goyal**
28. Quantitative Credit control Measure the following is the
(a) Change in lending margins **(b) Bank rate policy**
(c) Moral suassion **(d) Direct action**
29. The First World War came to an end with the treaty of
(a) Versailles **(b) Paris**
(c) Geneva **(d) Tashkent**
30. The labour achieves social control through class, status and stratification is
(a) Child Labour **(b) Economic Labour**
(c) Social Labour **(d) Division of Labour**
31. Protection of children from Sexual Offences Act is brought into effect on
(a) June 19, 2012 **(b) July 19, 2016**
(c) July 31, 1948 **(d) June 19, 2016**
32. 6- 14 years children should get free and compulsory education and the article .
(a) 24 **(b) 40**
(c) 30 **(d) 21A**
33. The first modern paper mill set up in 19332 at _____
34. Chipko movement took place in the year _____.
35. A fuel substance of plant origin is _____
36. The World Health Organist ion was founded in the year _____
37. United Nation Organization was founded on _____.
38. The first world war ended in _____.
39. In India _____ occur very after in hilly states.
40. Bengaluru International Air port is called _____



b-fet CRESCENT ITI (GOVT.AIDED)

Fees Rs. 2,400/- only for Govt. Quota Seats

★ # 5, Near Metro Pillar 58, Ilyasnagar, Sarakki Gate, Kanakapura Main Road, Bangalore-560 078.
 ★ Jigani Link Road, Near SFO, KIADB, Bommasandra, 4th Phase, Bangalore-560 099.

Ph: 92424 84476
94482 26652



Skill India
 कौशल भारत - कुशल भारत