

**KSEEB**

**FOR 2021 EXAM**

**SOCIAL SCIENCE**

**CLASS 10**

**MAP**

**BASED**

**MCQ's**

**(MULTIPLE CHOICE QUESTIONS)**

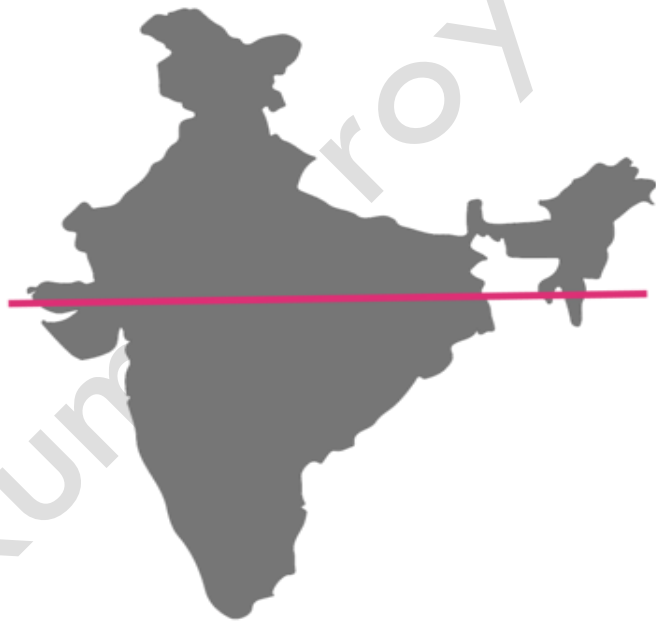
**As Per New Pattern by the KSEEB**

I. Four alternatives are given for each of the following questions / incomplete statements.

Only one of them is correct or most appropriate. Choose the correct alternative and write the complete answer along with its letter of alphabet.

1. Name the latitude which passes through the middle of India

- a) Tropic of cancer
- b) Tropic of Capricorn**
- c) Arctic circle
- d)  $82\frac{1}{2}$ ' degree latitude



2. Observe the India map and identify line which passes through it.

- a) Tropic of cancer
- b) Tropic of Capricorn
- c) Antarctic circle
- d)  $82\frac{1}{2}$  degree east longitude**



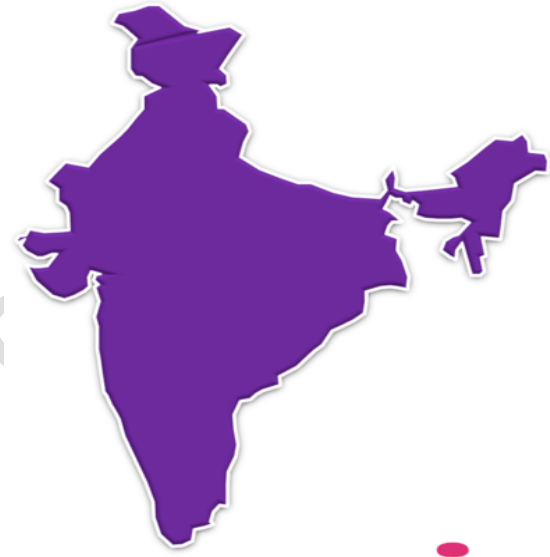
3. Identify the marked place in India map

- a) Indira Point
- b) K2
- c) Indiracol**
- d) Kangra



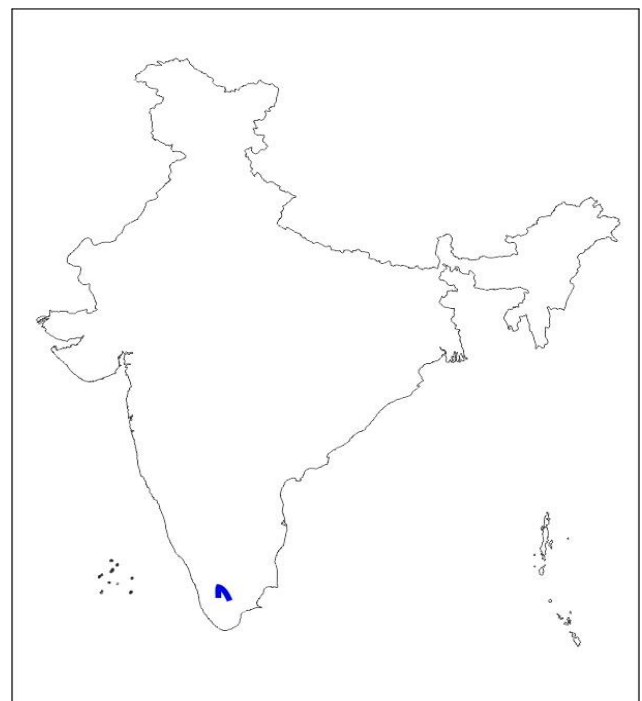
4. Name the place marked in the map

- a) Indiracol
- b) Port Blair
- c) Lakshadweep
- d) Indira Point**



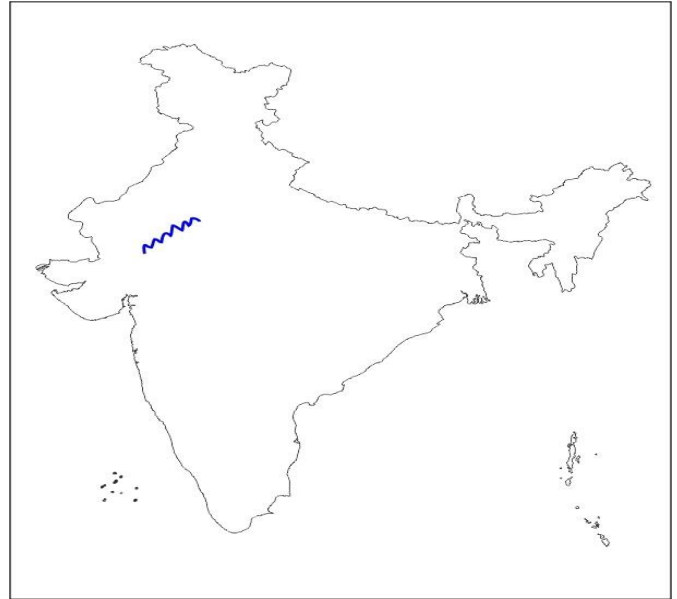
5. The Place marked in this Indian map is.

- a) Annaimudi**
- b) Chennai
- c) Madurai
- d) Bangalore



6. The ranges marked in this Indian map is.

- a) Vindhya Ranges
- b) Aravali Ranges**
- c) Satpura Ranges
- d) Western Ghats



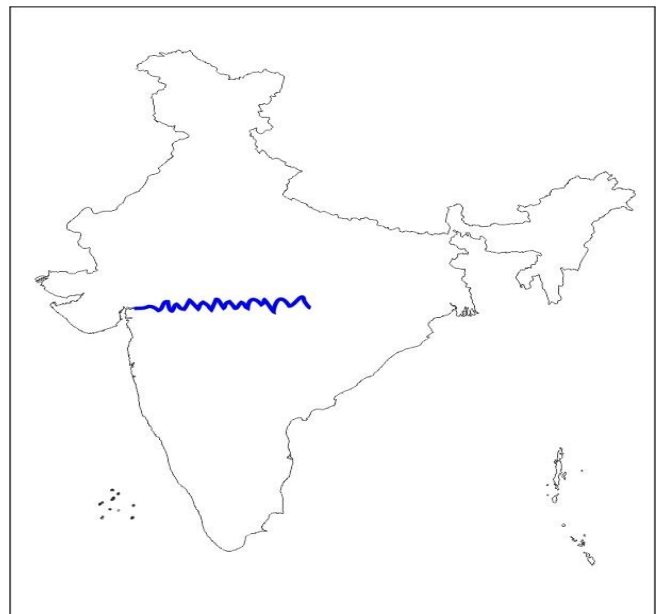
7. The place marked in this Indian map is.

- a) Western ghats
- b) Himalaya
- c) Aravali ranges
- d) Satpura Ranges**



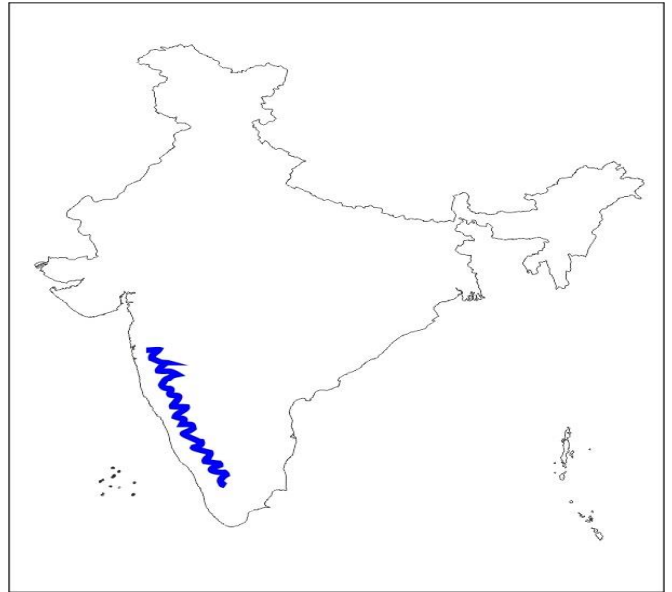
8. The ranges marked in this Indian map is.

- a) Vindhya Ranges**
- b) Aravali Ranges
- c) Satpura Ranges
- d) Western Ghats



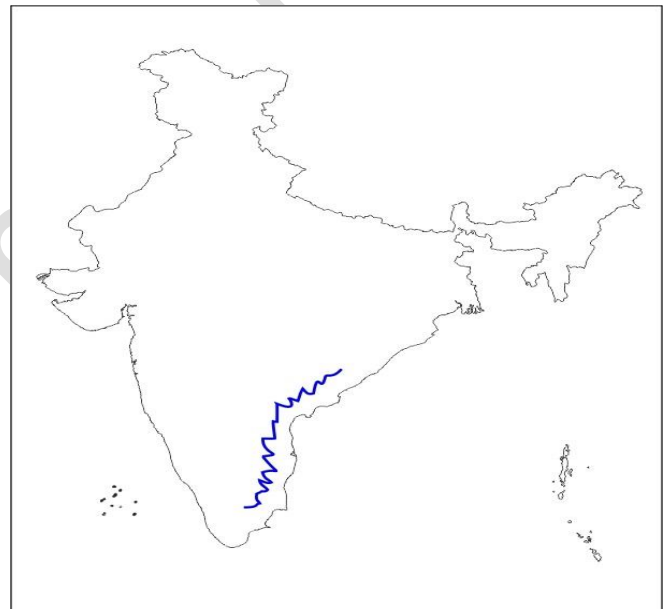
9. The ranges marked in this Indian map is.

- a) Vindhya Ranges
- b) Eastern Ghats
- c) Satpura Ranges
- d) Western Ghats**



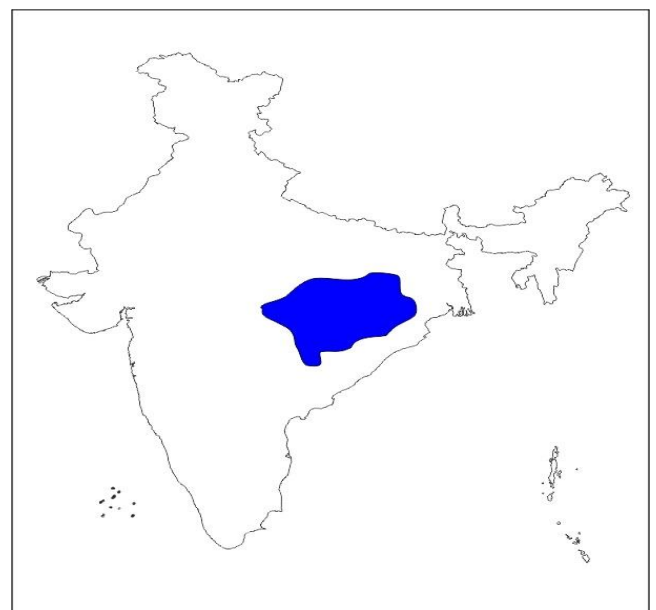
10. The ranges marked in this Indian map is.

- a) Vindhya Ranges
- b) Eastern Ghats**
- c) Satpura Ranges
- d) Western Ghats



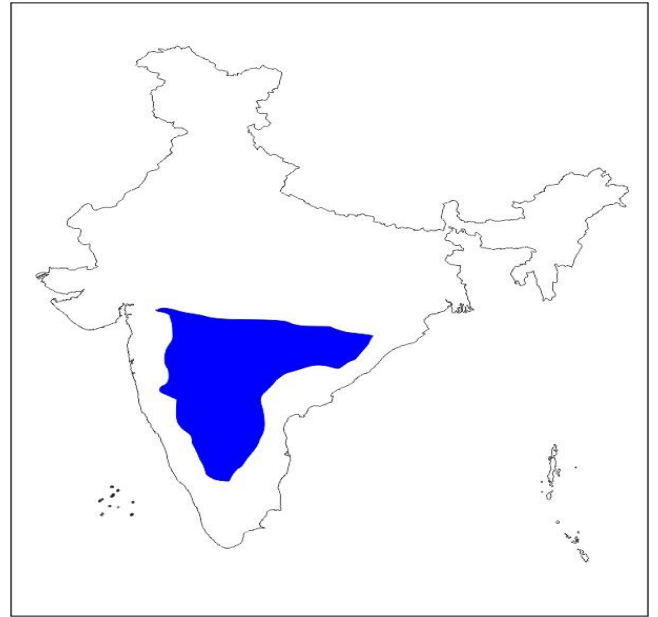
11. Tick the right place marked in Indian Map.

- a) Chotanagpur plateau**
- b) Malva plateau
- c) Deccan plateau
- d) middle plateau



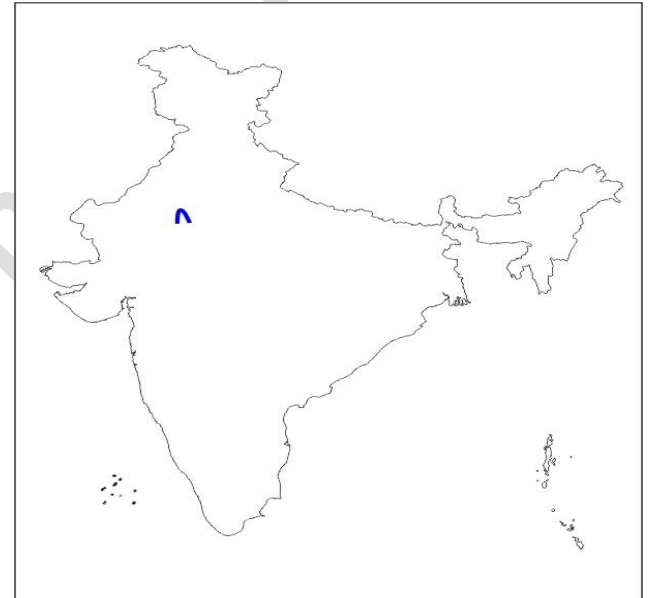
12. Tick the right place marked in Indian Map.

- a) Chotanagpur plateau
- b) Malva plateau
- c) **Deccan plateau**
- d) middle plateau



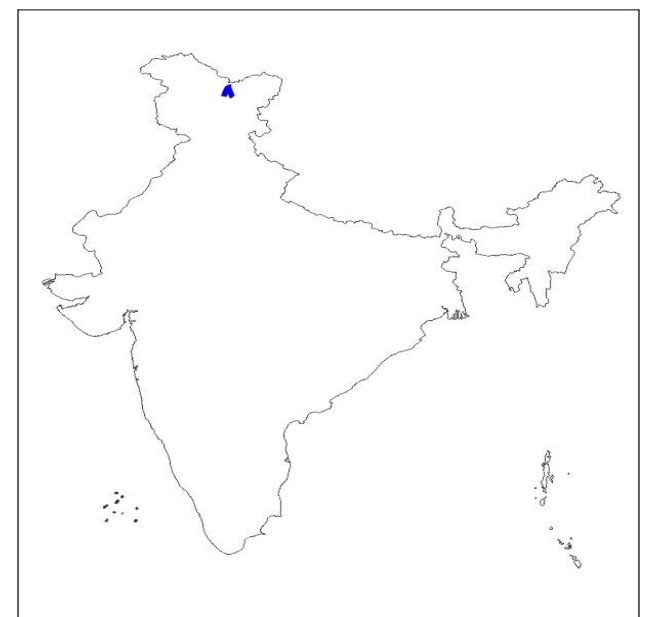
13. The right place marked in Indian Map is.

- a) Dhavalagiri
- b) Mount Everest
- c) **Gurushikara**
- d) K2



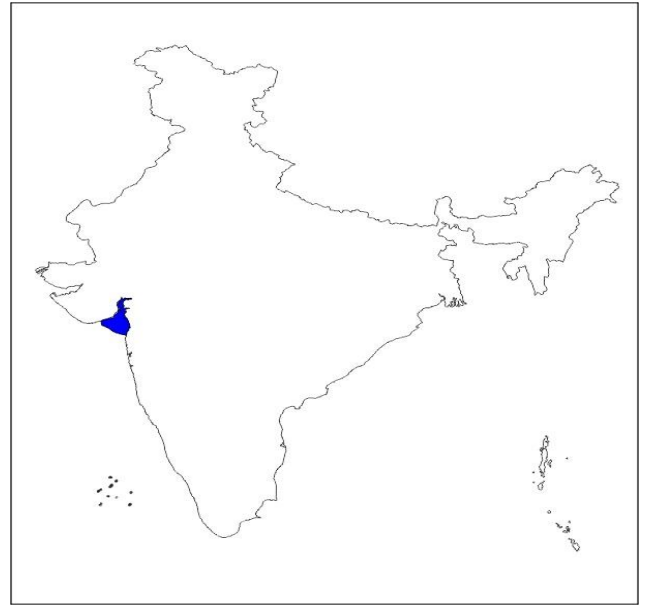
14. The right place marked in Indian Map is.

- a) Dhavalagiri
- b) Mount Everest
- c) Gurushikara
- d) **K2**



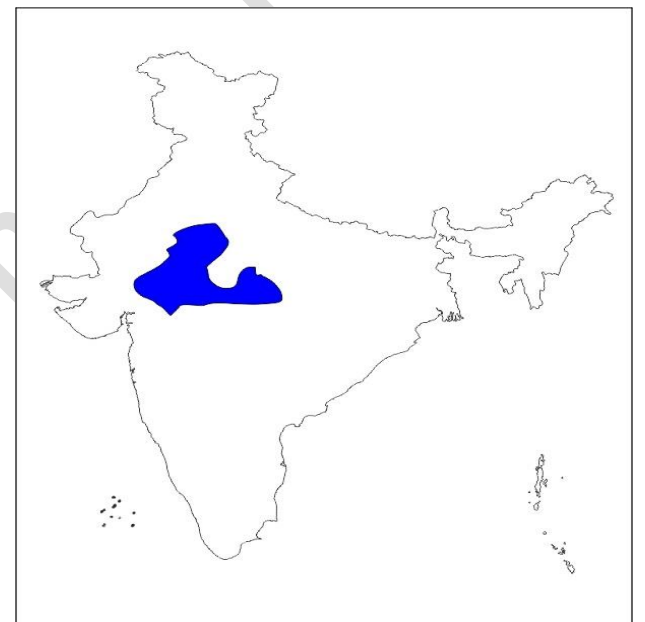
15. The right place marked in Indian Map is.

- a) Gulf of Mannar
- b) Gulf of Kuch
- c) Palk Strait
- d) Gulf of Khambhat**



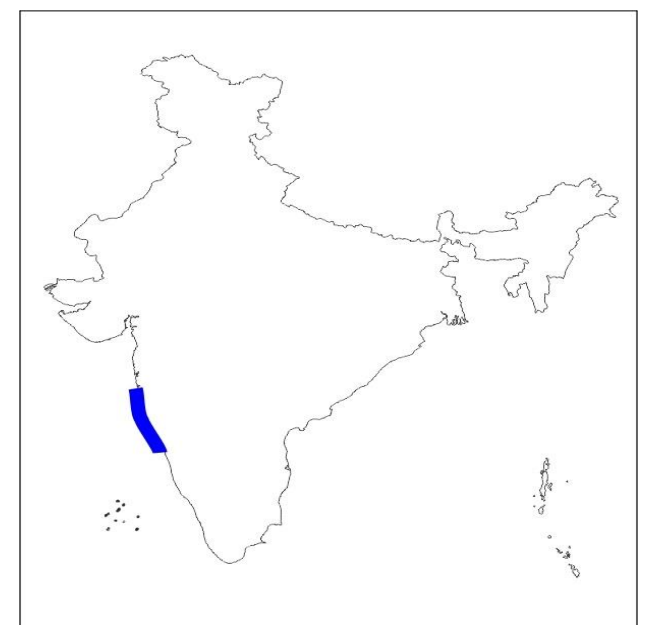
16. Tick the right place marked in Indian Map.

- a) Chotanagpur plateau
- b) Malva plateau**
- c) Deccan plateau
- d) middle plateau



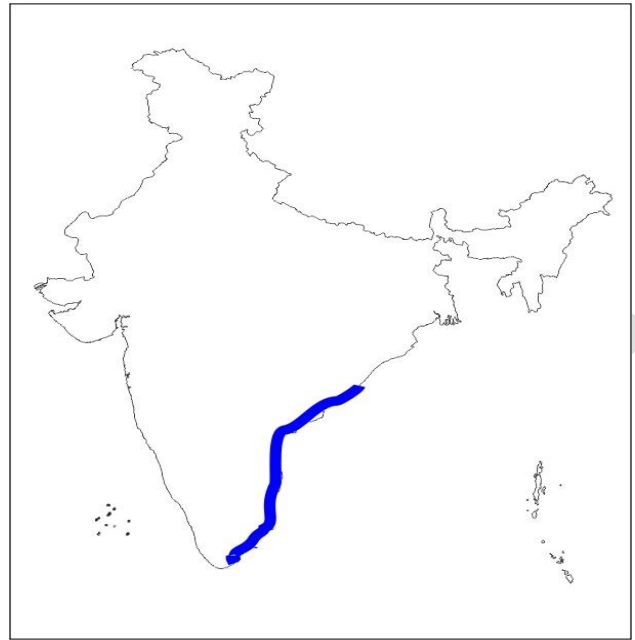
17. Tick the right place marked in Indian Map.

- a) Konkan Coast**
- b) Malbar Coast
- c) Canara Coast
- d) Coromandel Coast



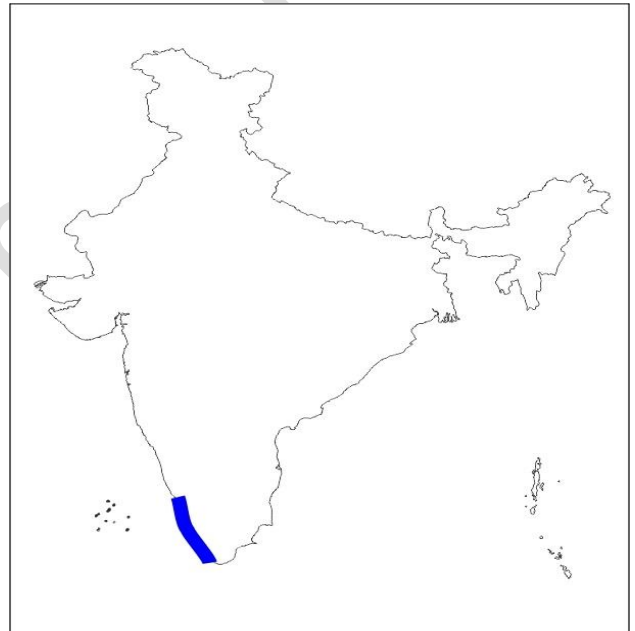
18. Tick the right place marked in Indian Map.

- a) Konkan Coast
- b) Malbar Coast
- c) Circar Coast
- d) Coromandel Coast**



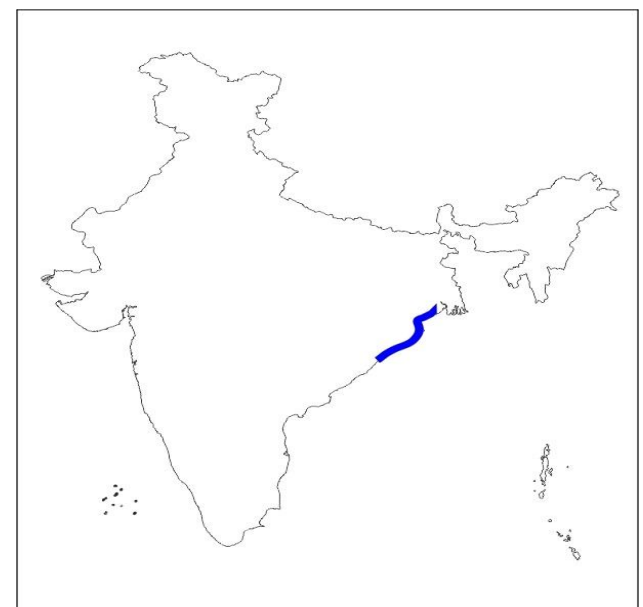
19. Tick the right place marked in Indian Map.

- a) Konkan Coast
- b) Malbar Coast**
- c) Circar Coast
- d) Coromandel Coast



20. Tick the right place marked in Indian Map.

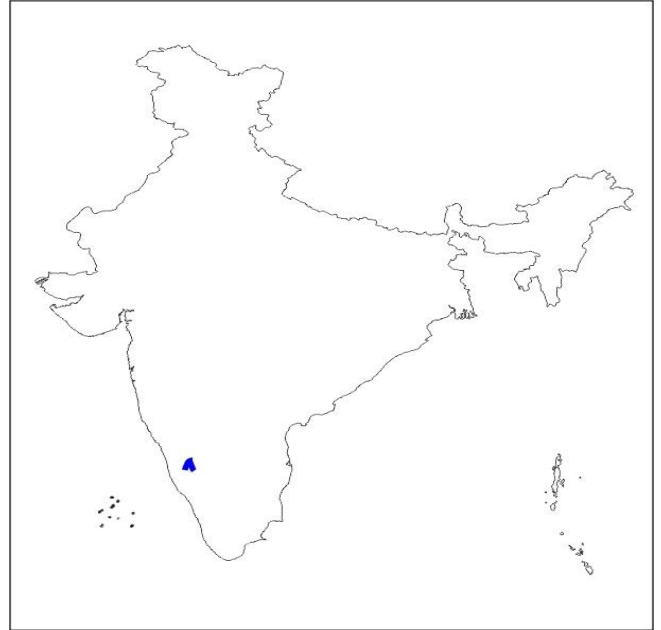
- a) Konkan Coast
- b) Malbar Coast
- c) Northern Circar/ Utkal Coast**
- d) Coromandel Coast





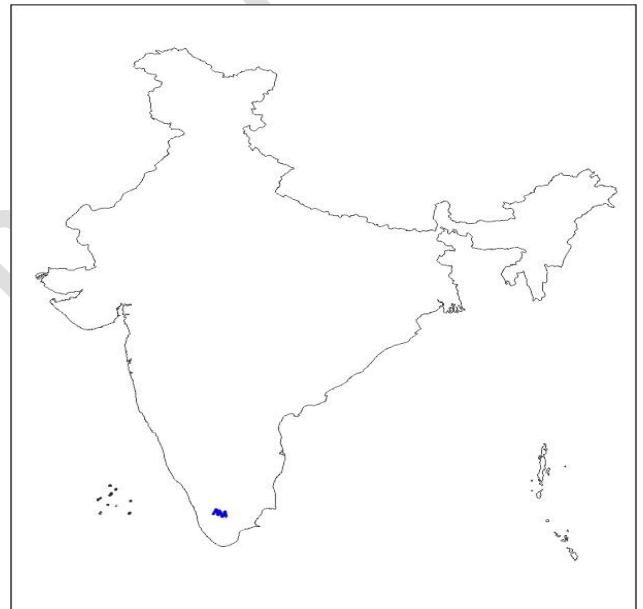
21. The right place marked in Indian Map is.

- a) **Mullayyanagiri**
- b) Murmakonda
- c) Neelagiri
- d) Annaimudi



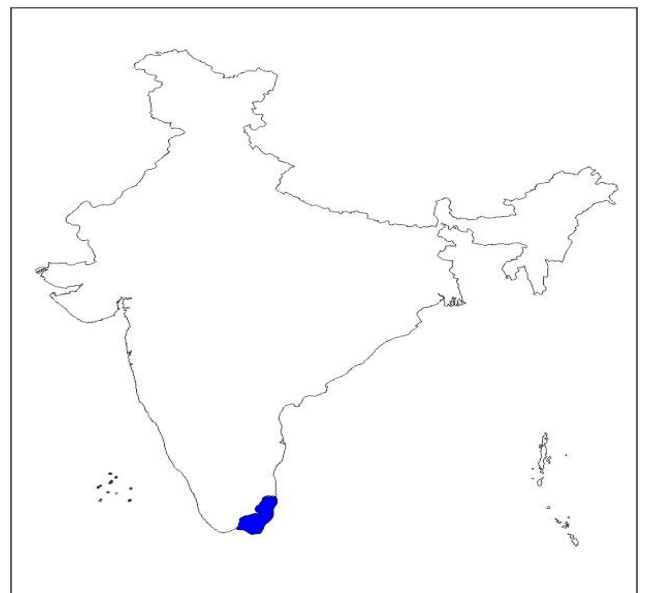
22. The right place marked in Indian Map is.

- a) Mullayyanagiri
- b) Murmakonda
- c) **Neelagiri**
- d) Annaimudi



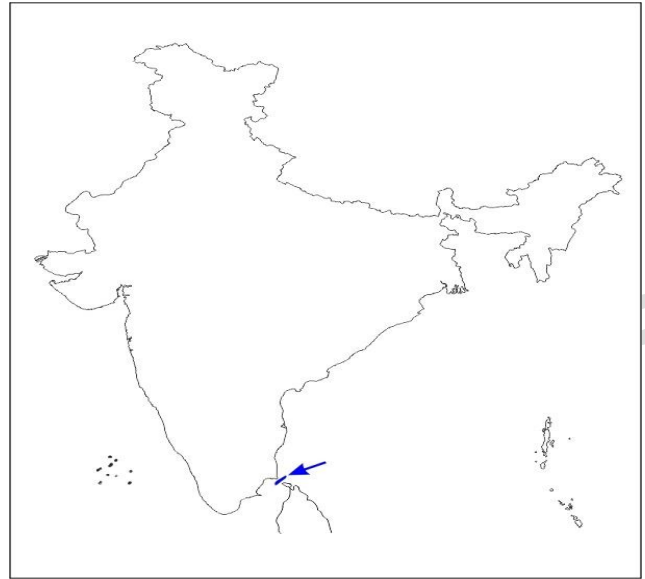
23. The right place marked in Indian Map is.

- a) **Gulf of Mannar**
- b) Gulf of Kuch
- c) Palk Strait
- d) Gulf of Khambhat



24. The right place marked in Indian Map is.

- a) Gulf of Mannar
- b) Gulf of Kuch
- c) Palk Strait**
- d) Gulf of Khambhat



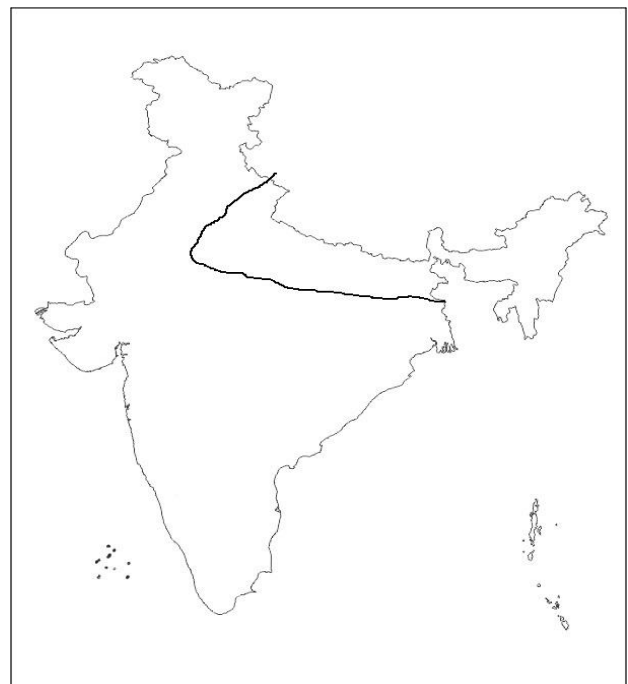
25. The River marked in this Indian map is.

- a) Brahmaputra**
- b) Ganga
- c) Kosi
- d) Mahanadi



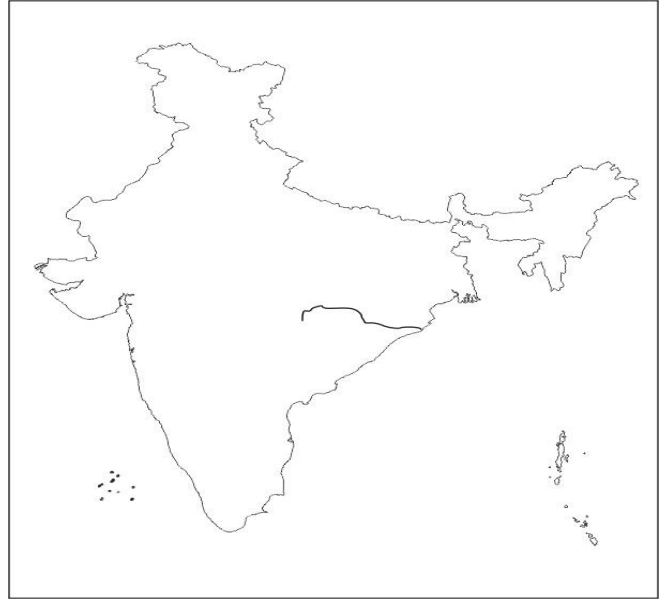
26. The River marked in this Indian map is.

- a) Brahmaputra
- b) Ganga**
- c) Kosi
- d) Mahanadi



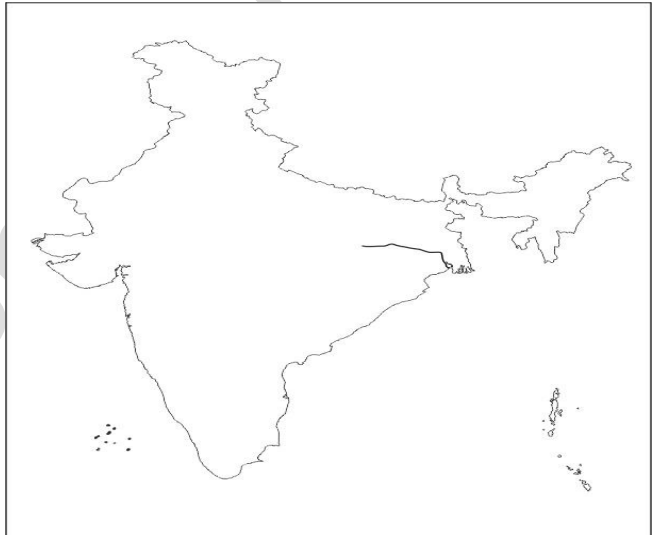
27. The River marked in this Indian map is.

- a) Brahmaputra
- b) Ganga
- c) Kosi
- d) Mahanadi**



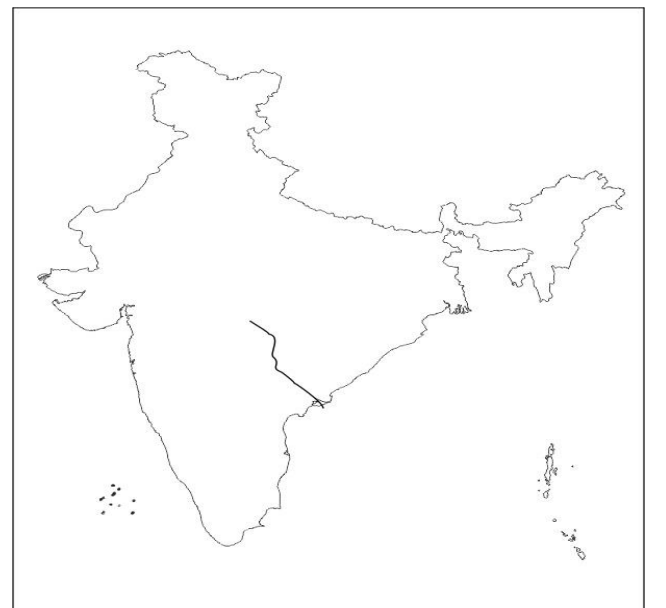
28. The River marked in this Indian map is.

- a) Damodar**
- b) Brahmaputra
- c) Mahanadi
- d) Krishna



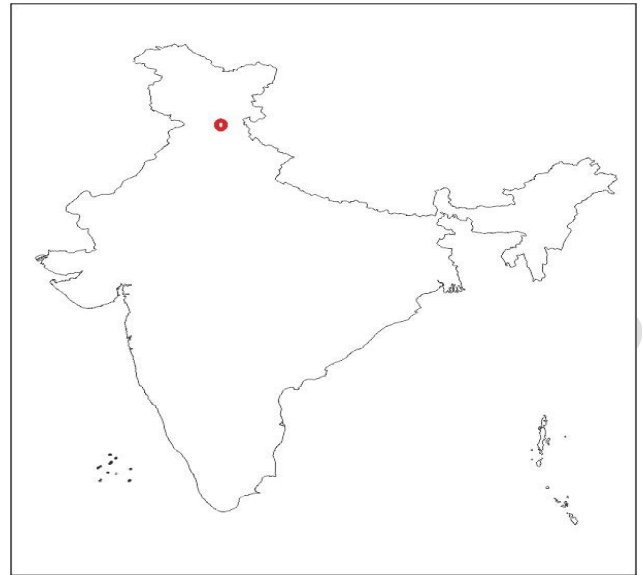
29. The River marked in this Indian map is.

- a) Damodar
- b) Godavari**
- c) Mahanadi
- d) Krishna



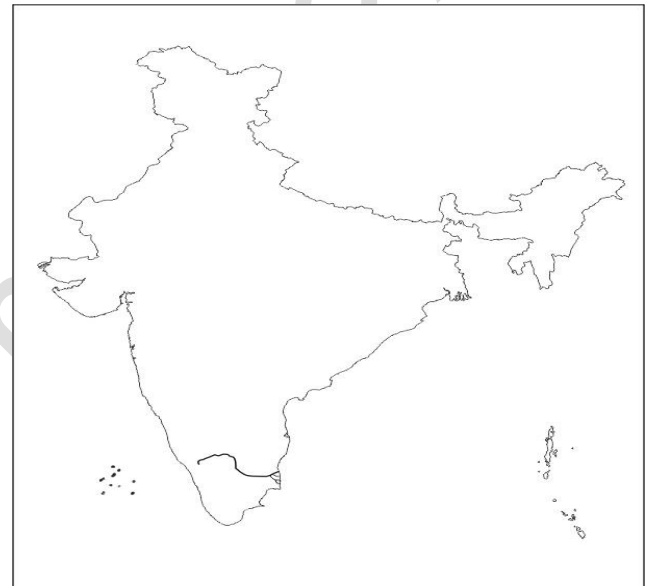
30. The place marked in this Indian map.

- a) **Govindasagara**
- b) Godavari
- c) Pampasagara
- d) Nagarjunasagara



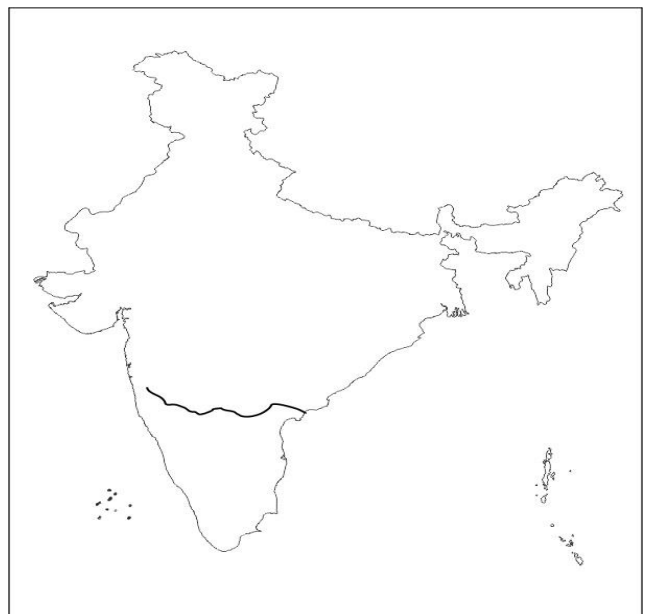
31. The River marked in this Indian map is.

- a) **Cauvery**
- b) Krishna
- c) Narmada
- d) Godavari



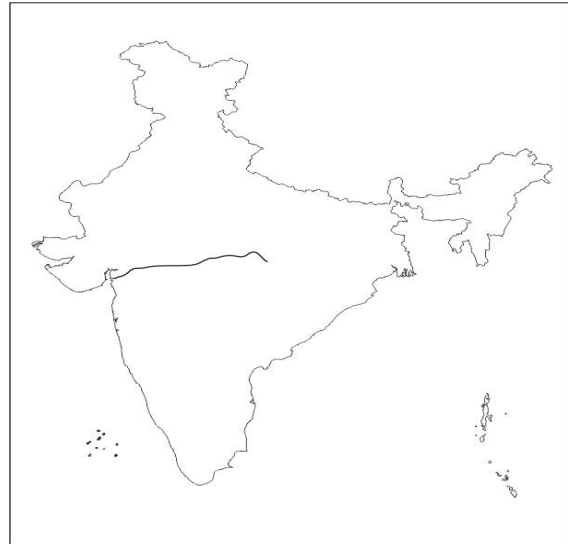
32. The River marked in this Indian map is.

- a) Cauvery
- b) **Krishna**
- c) Narmada
- d) Godavari



33. The River marked in this Indian map is.

- a) Cauvery
- b) Krishna
- c) Narmada**
- d) Godavari



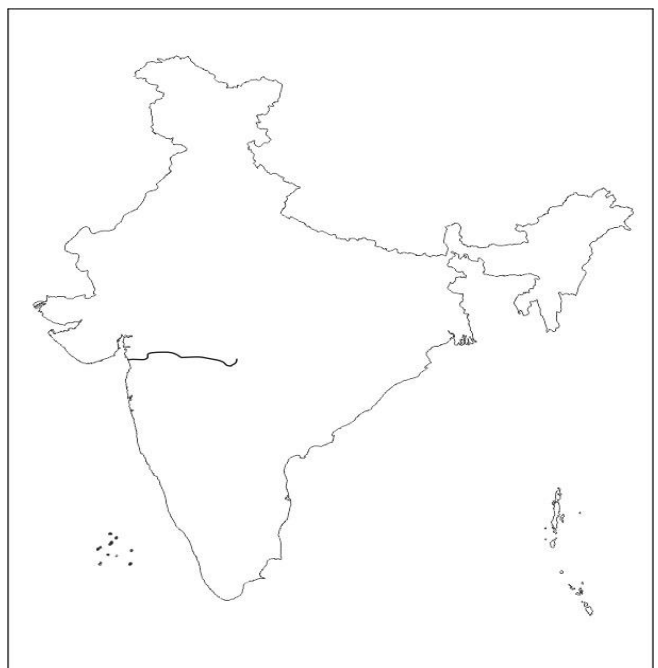
34. The place marked in this Indian map.

- a) Govindasagara
- b) Godavari
- c) Pampasagara**
- d) Nagarjunasagara



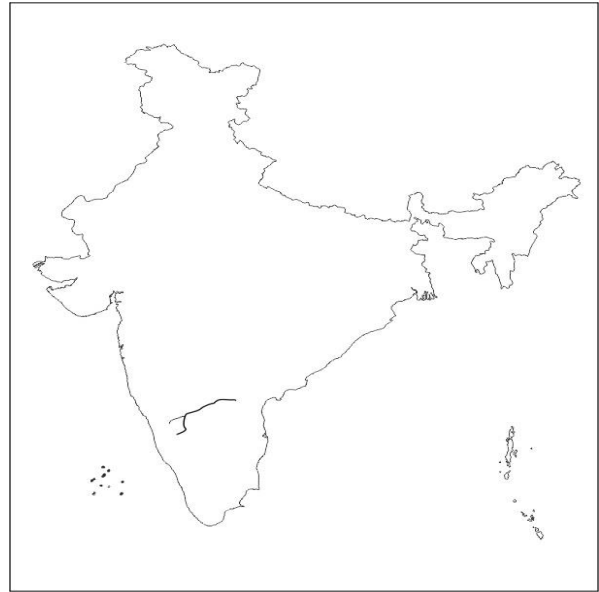
35. The River marked in this Indian map is.

- a) Cauvery
- b) Tapati/ Tapi**
- c) Tungabhadra
- d) Godavari



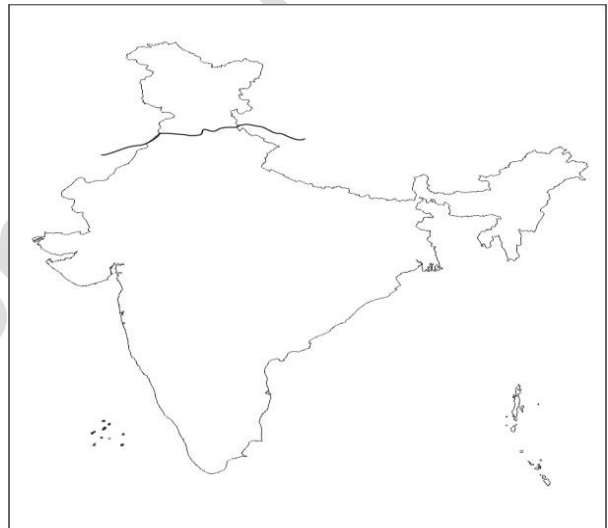
36. The River marked in this Indian map is.

- a) Cauvery
- b) Tapi
- c) **Tungabhadra**
- d) Godavari



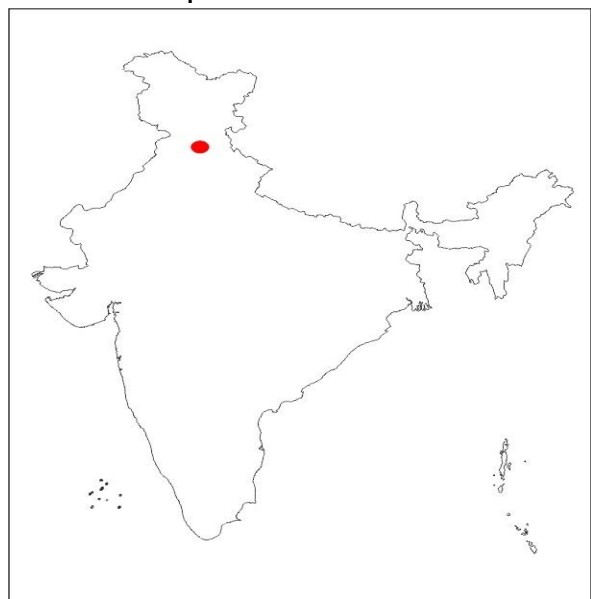
37. The River marked in this Indian map is.

- a) **Sutlej**
- b) Sindhu
- c) Ganga
- d) Yamuna



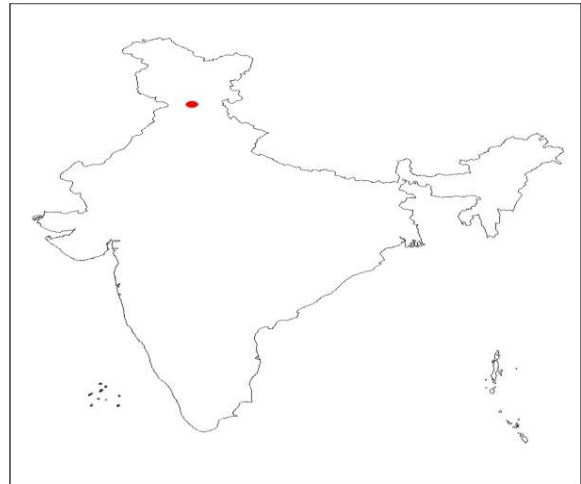
38. The 'Multi River Valley Project' marked in this Indian map is.

- a) **Bhakra Nangal**
- b) Kosi
- c) Hirakud
- d) Narmada



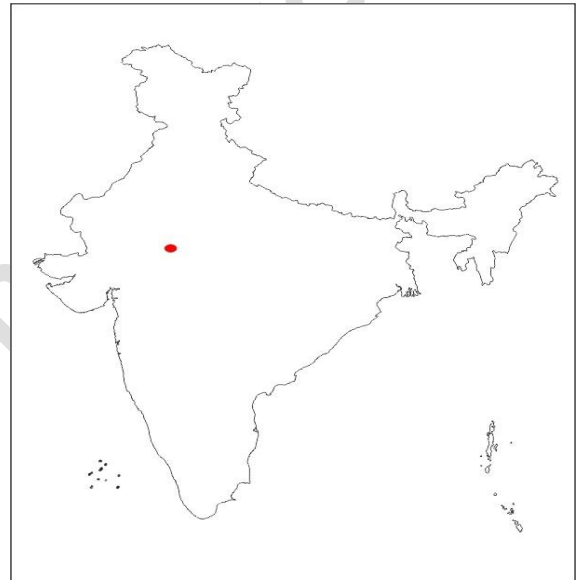
39. The 'Multi River Valley Project' marked in this Indian map is.

- a) **Bias**
- b) Chambal
- c) Kosi
- d) Hirakud



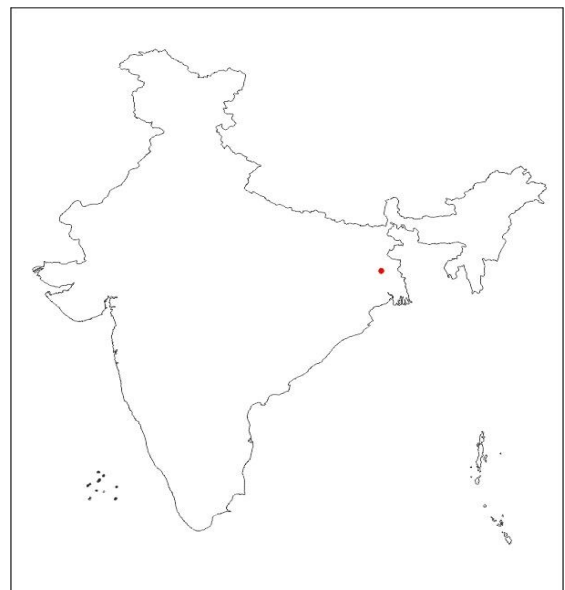
40. The 'Multi River Valley Project' marked in this Indian map is.

- a) Bias
- b) **Chambal**
- c) Kosi
- d) Hirakud



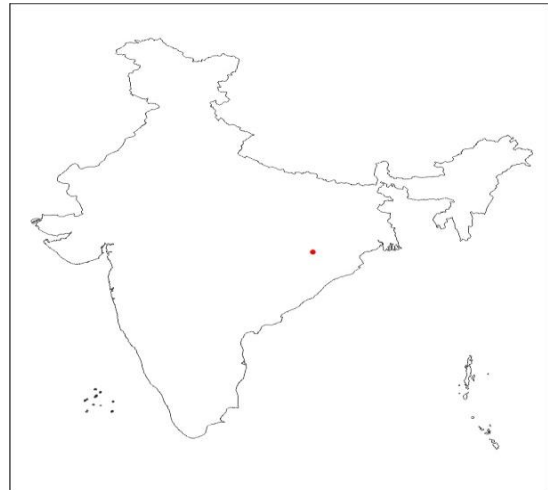
41. The 'Multi River Valley Project' marked in this Indian map is.

- a) **Damodar valley**
- b) Chambal
- c) Kosi
- d) Hirakud



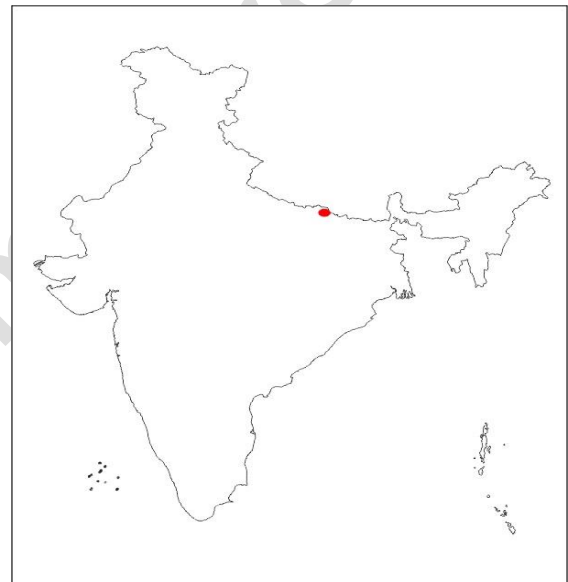
42. The 'Multi River Valley Project' marked in this Indian map is.

- a) Damodar valley
- b) Chambal
- c) Kosi
- d) Hirakud**



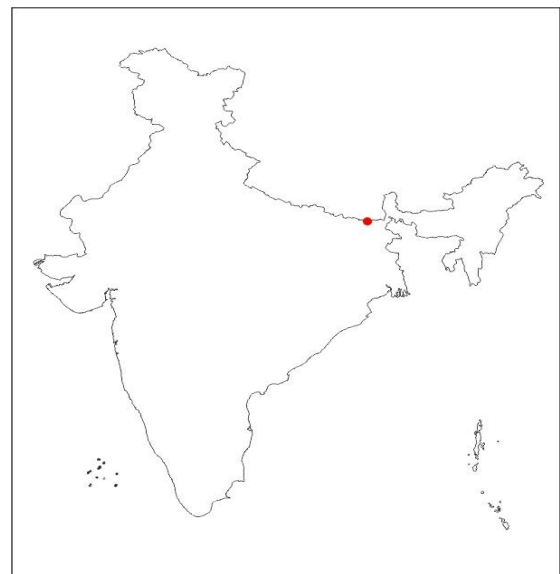
43. The 'Multi River Valley Project' marked in this Indian map is.

- a) Damodar valley
- b) Chambal
- c) Gandak**
- d) Hirakud



44. The 'Multi River Valley Project' marked in this Indian map is.

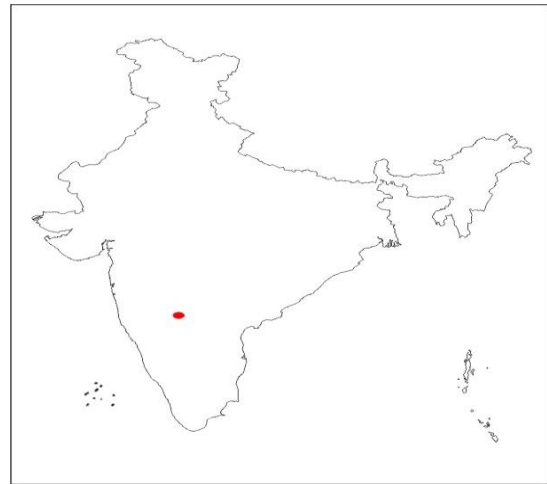
- a) Damodar valley
- b) Chambal
- c) Kosi**
- d) Hirakud





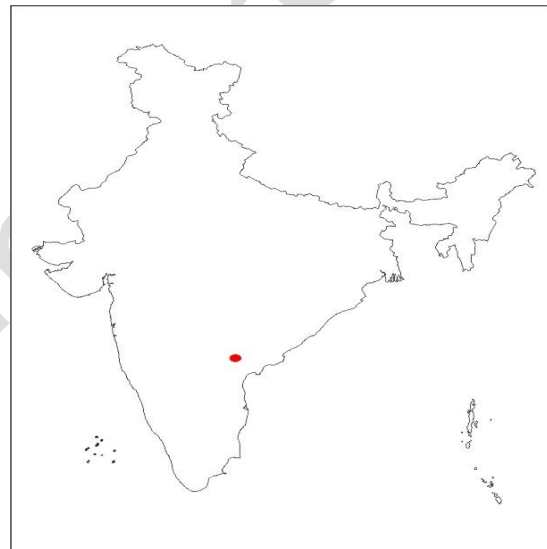
45. The 'Multi River Valley Project' marked in this Indian map is.

- a) Damodar valley
- b) Nagarjuna
- c) **Krishna Meldande (UKP)**
- d) Hirakud



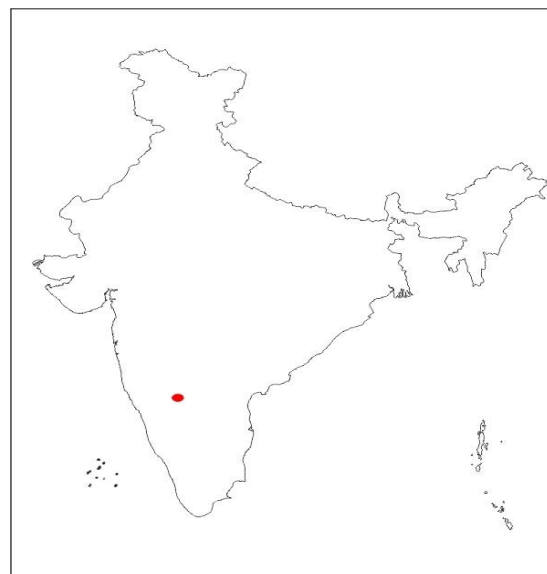
46. The 'Multi River Valley Project' marked in this Indian map is.

- a) Damodar valley
- b) **Nagarjuna**
- c) Krishna Meldande (UKP)
- d) Tungabadra



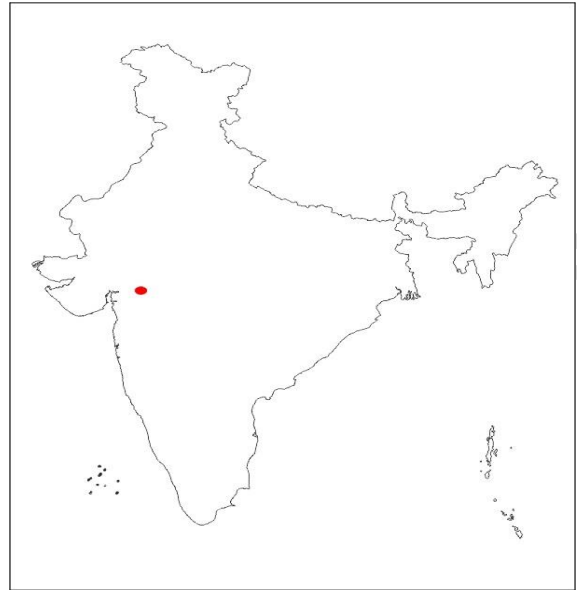
47. The 'Multi River Valley Project' marked in this Indian map is.

- a) Damodar valley
- b) Nagarjuna
- c) Krishna Meldande (UKP)
- d) **Tungabadra**



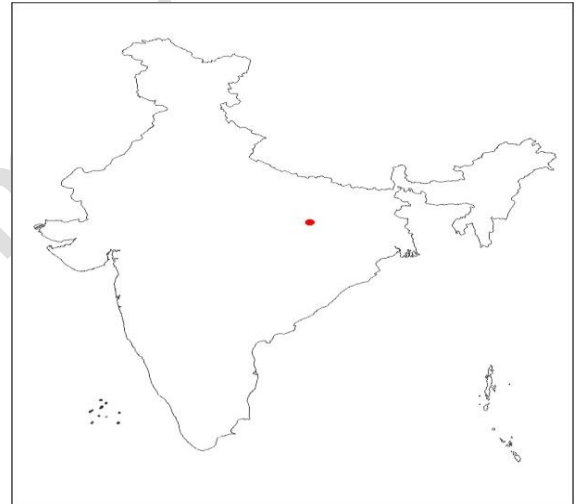
48. The 'Multi River Valley Project' marked in this Indian map is.

- a) Bhakra Nangal
- b) Narmada**
- c) Tungabhadra
- d) Krishna



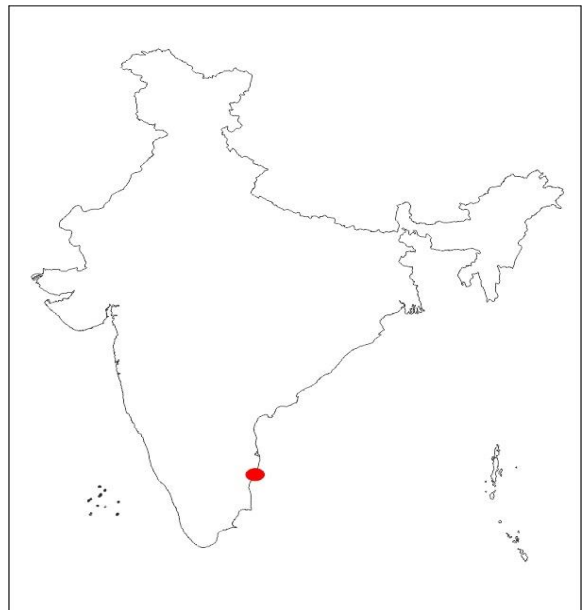
49. The 'Multi River Valley Project' marked in this Indian map is.

- a) Damodar valley
- b) Chambal
- c) Gandak
- d) Rihand**



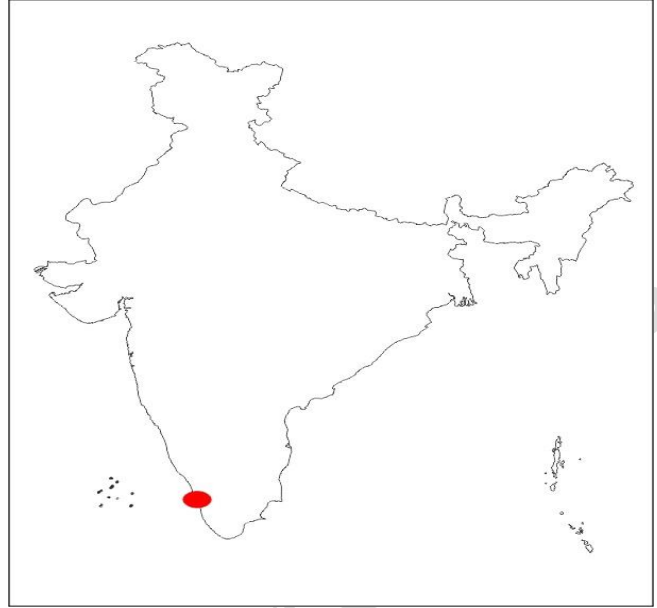
50. Name the port which marked in Indian map.

- a) Chennai**
- b) Kolkatta
- c) Vishakhapatanam
- d) Kochi



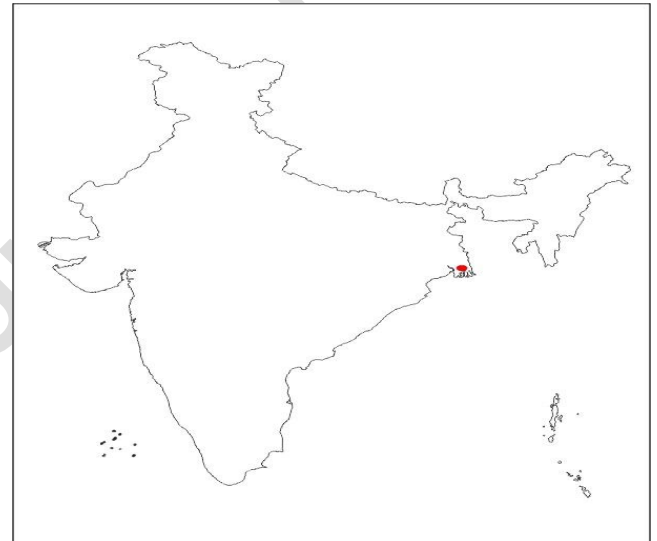
51. Name the port which marked in Indian map.

- a) Chennai
- b) Kolkatta
- c) Vishakhapatnam
- d) Kochi**



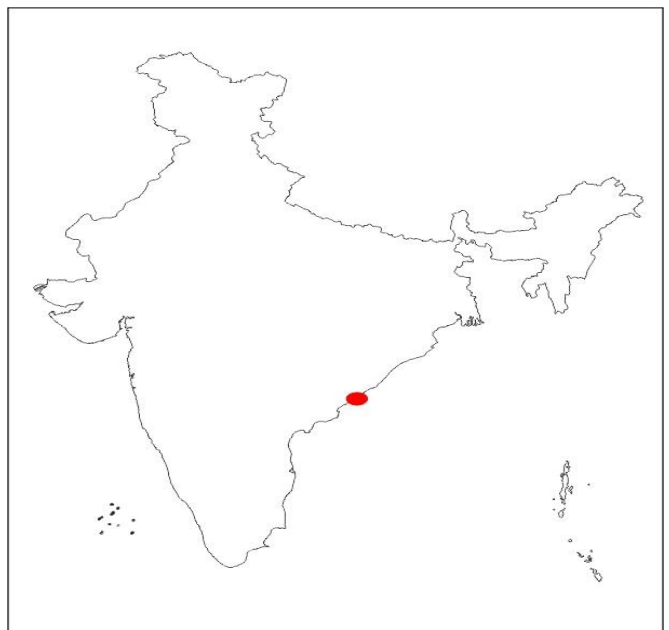
52. Name the port which marked in Indian map.

- a) Chennai
- b) Kolkata**
- c) Vishakhapatnam
- d) Kochi



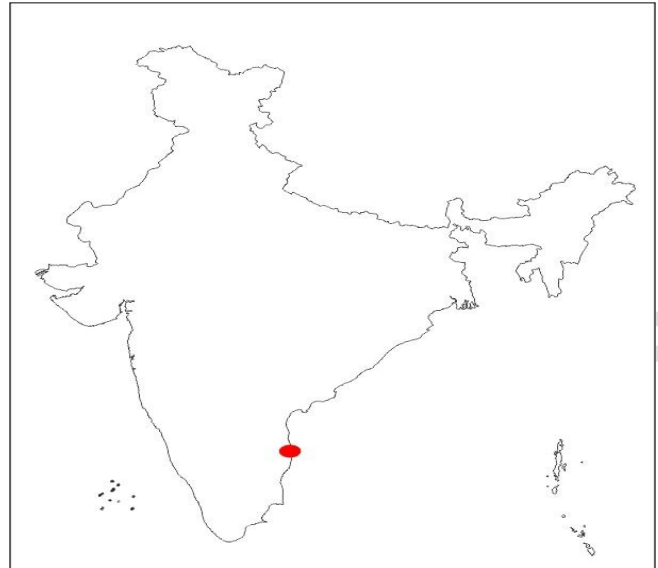
53. Name the port which marked in Indian map.

- a) Chennai
- b) Kolkata
- c) Vishakhapatnam**
- d) Kochi



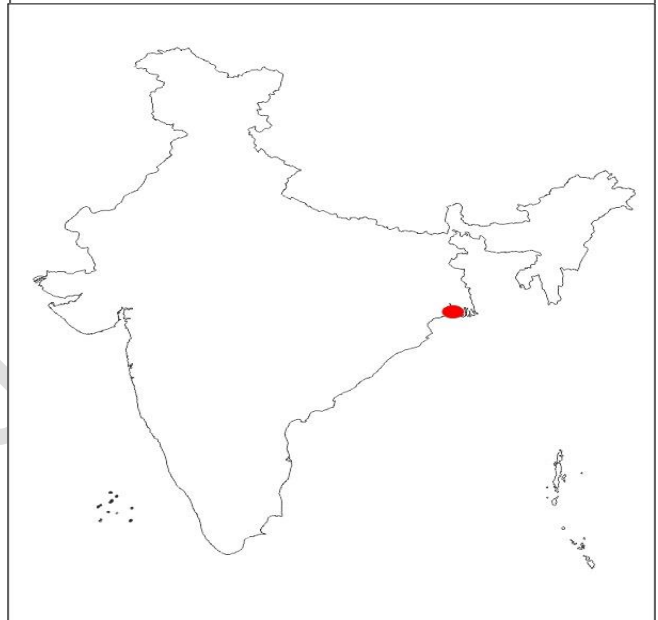
54. Name the port which marked in Indian map.

- a) **Ennore**
- b) Kolkata
- c) Haldia
- d) Mangalore



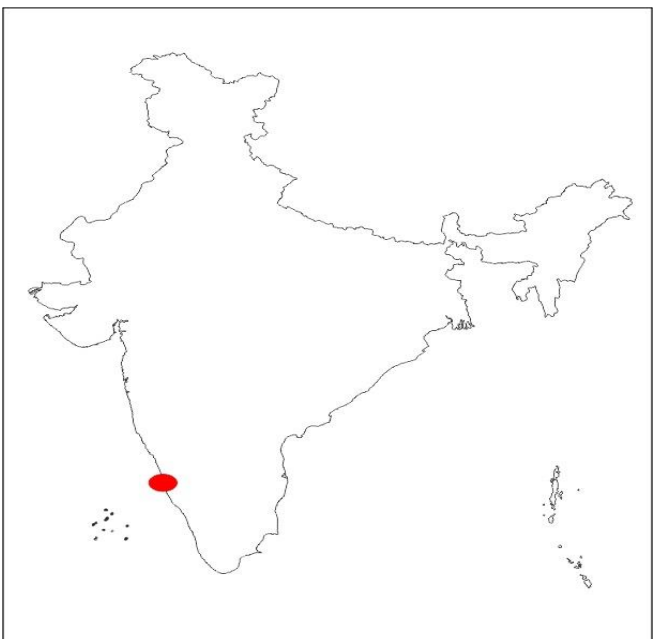
55. Name the port which marked in Indian map.

- a) Ennore
- b) Kolkata
- c) **Haldia**
- d) Mangalore



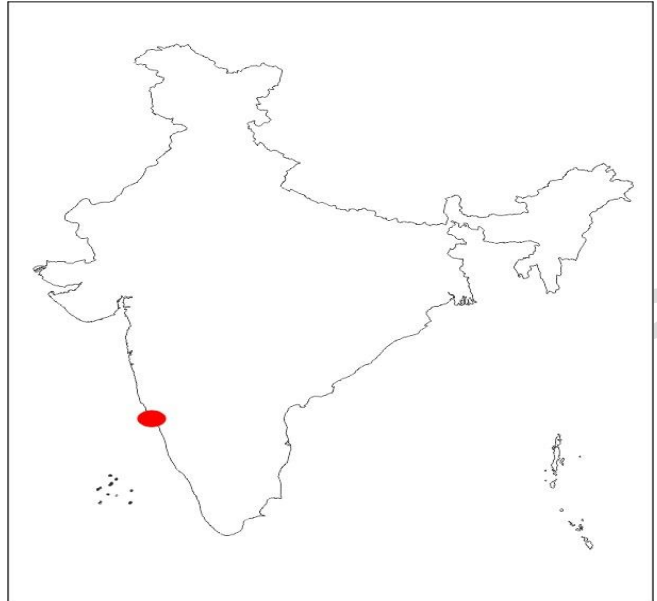
56. Name the port which marked in Indian map.

- a) Ennore
- b) Mumbai
- c) Kochi
- d) **Mangalore**



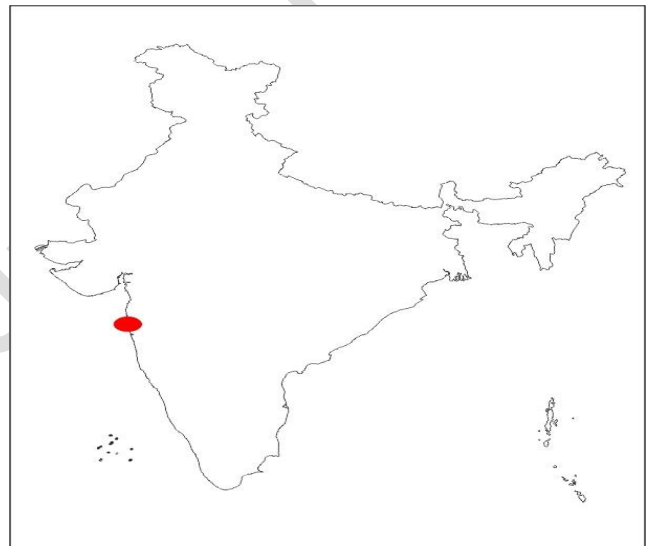
57. Name the port which marked in Indian map.

- a) **MarmaGoa**
- b) Mumbai
- c) Kochi
- d) Navsheva



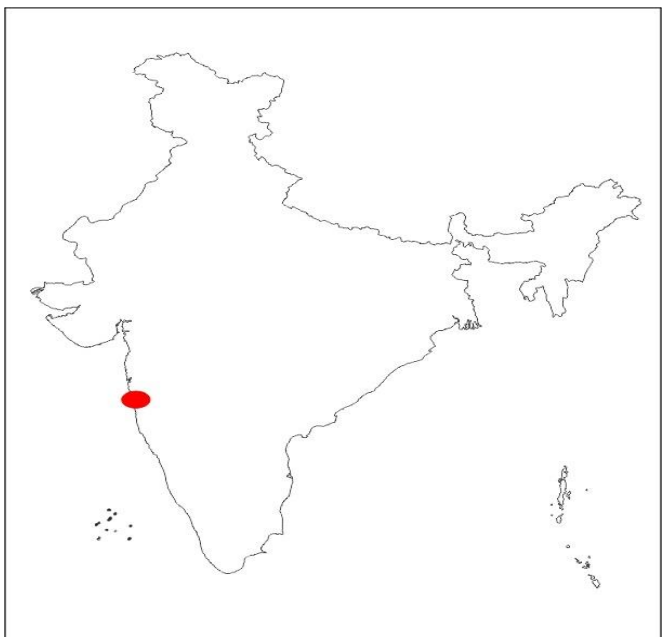
58. Name the port which marked in Indian map.

- a) MarmaGoa
- b) **Mumbai**
- c) Kochi
- d) Mangalore



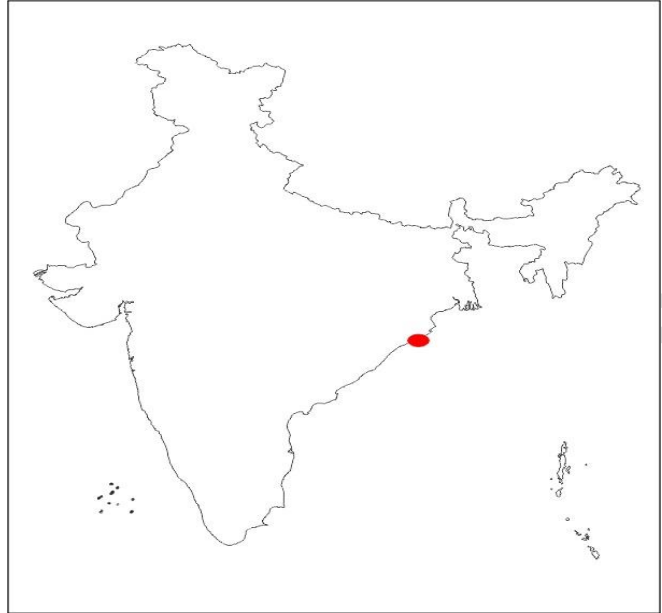
59. Name the port which marked in Indian map.

- a) MarmaGoa
- b) **Navsheva**
- c) Kochi
- d) Mangalore



60. Name the port which marked in Indian map.

- a) Kolkata
- b) Paradeep**
- c) Vishakpatnam
- d) Chennai



61. Name the port which marked in Indian map.

- a) Tuticorin/ Tutukudi**
- b) Paradeep
- c) Vishakpatnam
- d) Chennai

