

SECOND TERM EVALUATION 2019-20
Environmental Science

Class : 4

Time : 2 Hours

Name of the Student : _____	No.	Activity	Grade
Name of the School : _____	1.	Bird Watch	
Division: _____	2.	Art Forms	
Signature of the Parent: _____	3.	Let's Find Out	
Signature of the Teacher: _____	4.	The Crescent	
	5.	Art and Music	
	6.	My Kerala	
	Overall Grade		

Instructions

1. Use the first 15 minutes for reading questions.
2. Attempt any five activities out of the six given.
3. Write the answers for all sub questions of the selected activity.

Activity 1 - Bird Watch

A bird watching camp was conducted in Chinnu's school. They saw many different birds. Some of the birds they found in the school surroundings are given below.

A) Write the names of the birds.









B) Write the names and physical features of any two birds and complete the table.

Name of the bird	Physical features	Advantages
Eagle	Curved beak Sharp nails	To snatch its prey and to tear it

C) Which is a migratory bird. Put a (✓) mark.

Crow Golden Oriole Eagle Parrot

Activity 2 - Art Forms

Descriptions on the art forms of Kerala are included in Chinnu's school magazine. The pictures of art forms in the magazine are given below.

A) Look at the pictures and write their names.









B) Who drew this beautiful picture? Put a (✓) mark.



Ramavarma Raja

M.V. Devan

Raja Ravi Varma

Madanan

Look at the pictures given below.


C) Write a description on any one of the art forms.



A large empty rectangular box provided for writing a description of the art forms shown in the images above.

Activity 3 - Let's Find out

Look at the materials given below.



A) Write an experiment note which you can do using these materials.

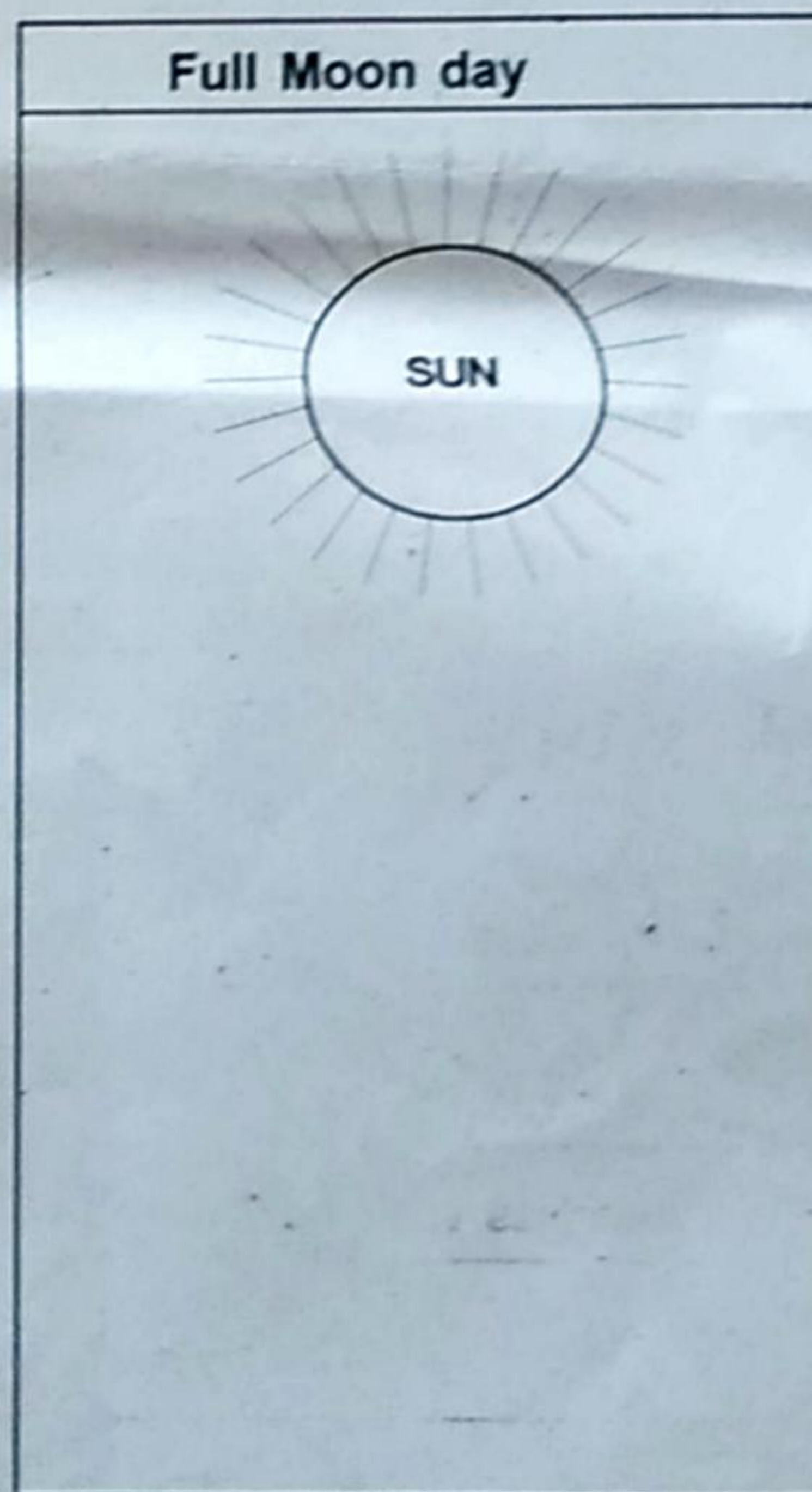

A large, empty rectangular box with rounded corners, intended for writing an experiment note.

B) The table below is related to states of matter. Complete the table.

Objects	Definite shape (Yes / No)	Weight (Yes / No)	Space to exist (Needed / Not needed)	State
Stone	Yes	Yes	Needed	Solid
Oil				
Vapour		Yes		Gas

Activity 4 - The Crescent

A) Draw the Moon and the Earth and show New Moon day and Full Moon day.



Read the statements given below.

B) Tick (✓) the correct statements.

- In a New Moon day, the moon is not at all seen.
- Planets are heavenly bodies that shine in the sky.
- In a Full Moon day, the illuminated part of the Moon is fully visible.
- The spinning of the Earth on its own axis is called revolution.

C) Tick (✓) the satellite of the Earth.

Sun

Moon

Jupiter

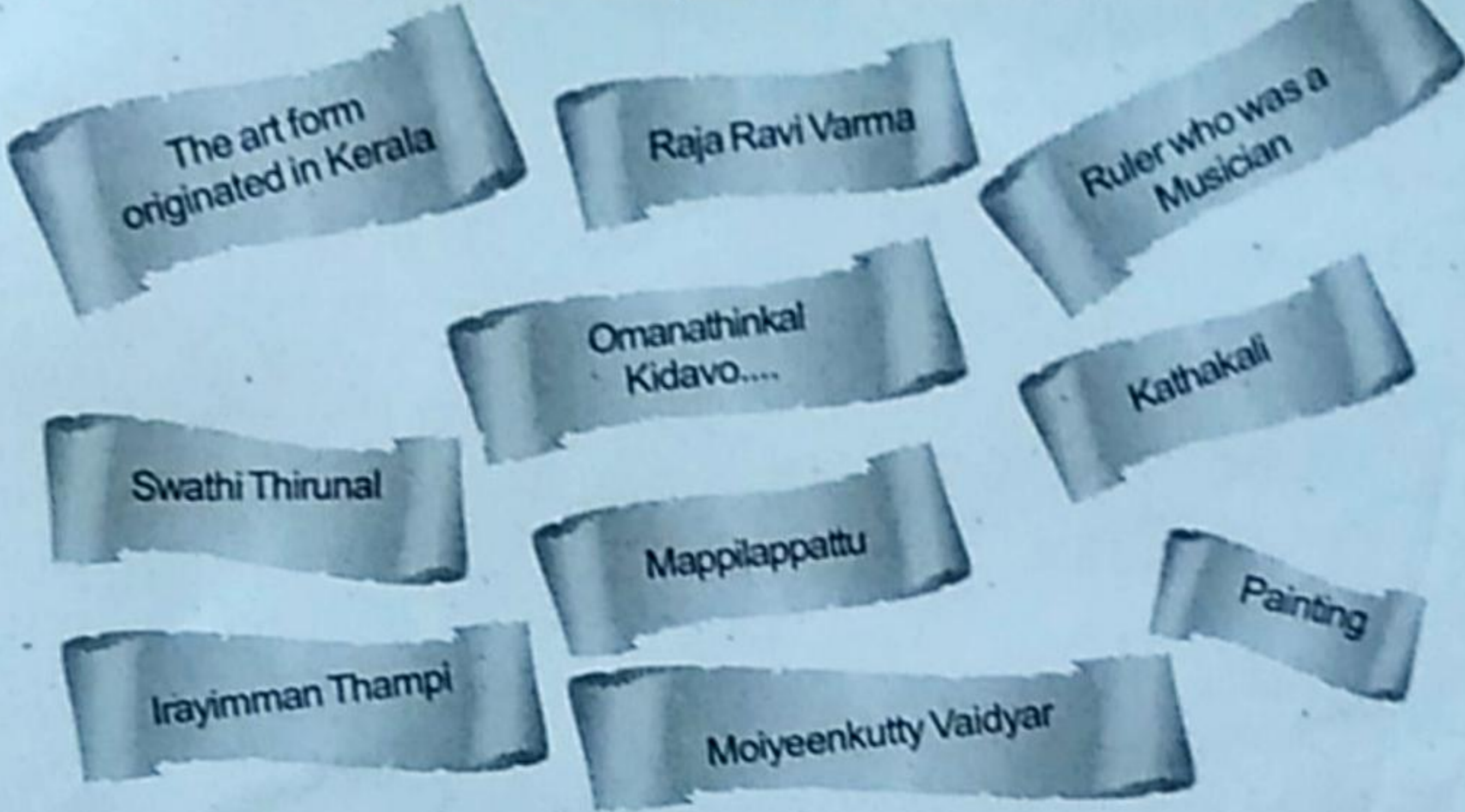
Mars

Activity 5 - Art and Music



A) Look at the picture. Write the name of art form as the heading and note down its features.

B) Read the following and complete the columns suitably.



The art form originated in Kerala	Kathakali

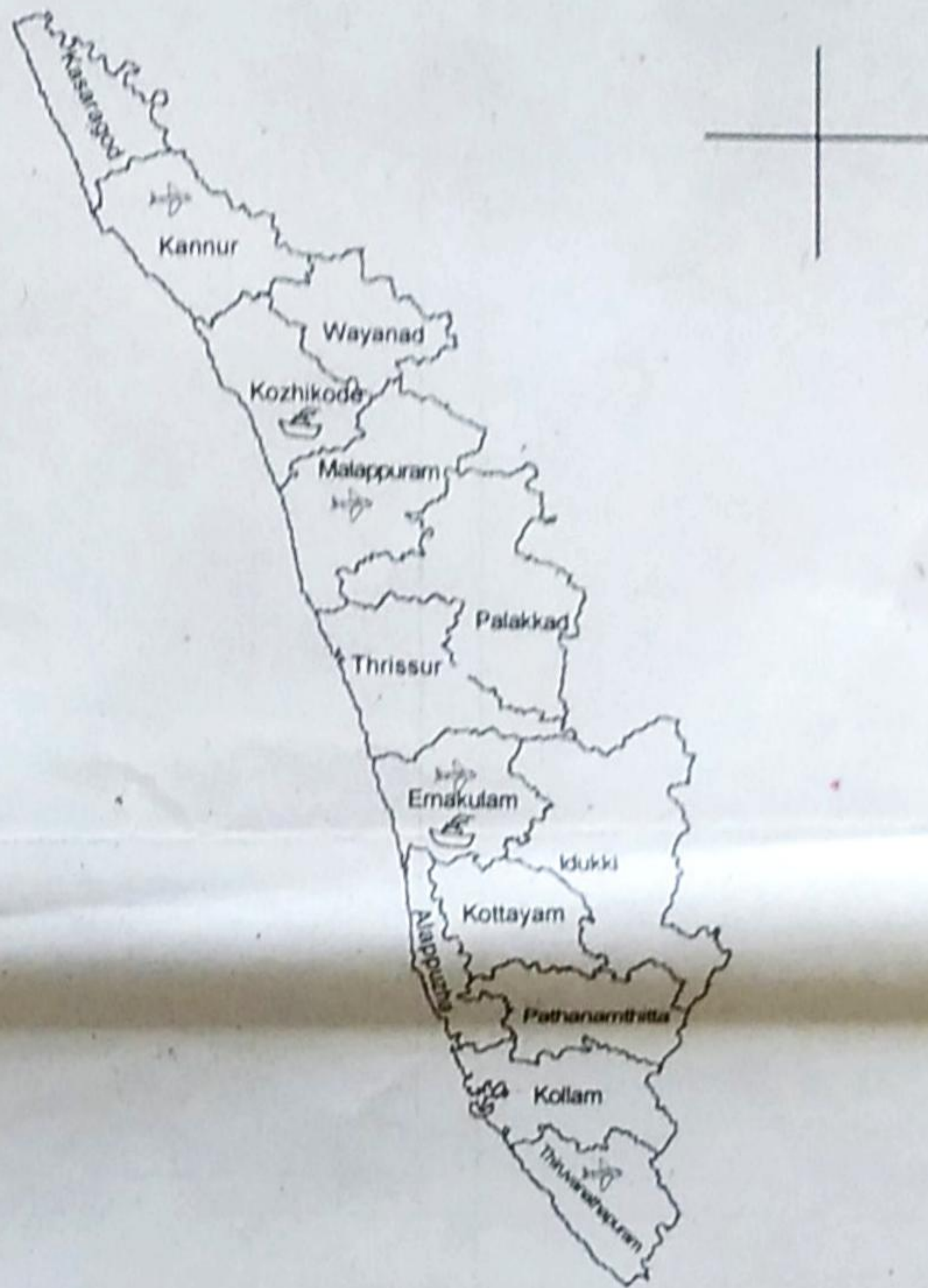
C) Put a tick (✓) on the king of arts.

- Thullal
- Kathaprasangam
- Kathakali
- Mohiniyattam

Activity 6 - My Kerala

Look at the map of Kerala.

A) Write the directions.



Look at the symbols on the map and answer the following questions.

B) Identify your district and colour it.

C) Name two districts with Airports.

--	--

D) Two districts with Harbours.

--	--