

रोल नं.
Roll No.

--	--	--	--	--	--	--	--

परीक्षार्थी QP कोड को OMR उत्तर-पत्रक के मुख-पृष्ठ पर अवश्य लिखें।

Candidates must write / fill the QP Code in the space allotted on OMR Sheet.

नोट / NOTE :

- (i) कृपया जाँच कर लें कि इस प्रश्न-पत्र में मुद्रित पृष्ठ 32 हैं।
Please check that this question paper contains 32 printed pages.
- (ii) कृपया जाँच कर लें कि इस प्रश्न-पत्र में 60 बहुविकल्पीय प्रश्न (MCQs) हैं।
Please check that this question paper contains 60 multiple choice questions (MCQs.)
- (iii) प्रश्न-पत्र में दाहिने हाथ की ओर दिए गए QP कोड नम्बर को छात्र OMR शीट में उपयुक्त स्थान पर लिखें।
QP Code given on the right hand side of the question paper should be written on the appropriate place of the OMR Sheet by the candidates.
- (iv) परीक्षा शुरू होने के वास्तविक समय से पहले इस प्रश्न-पत्र को पढ़ने के लिए 20 मिनट का अतिरिक्त समय आवंटित किया गया है।
20 minute additional time has been allotted to read this question paper prior to actual time of commencement of examination.

विज्ञान (सैद्धान्तिक)

Science (Theory)

सत्र - I / Term - I

निर्धारित समय : 90 मिनट

Time allowed : 90 minutes

अधिकतम अंक : 40

Maximum Marks : 40

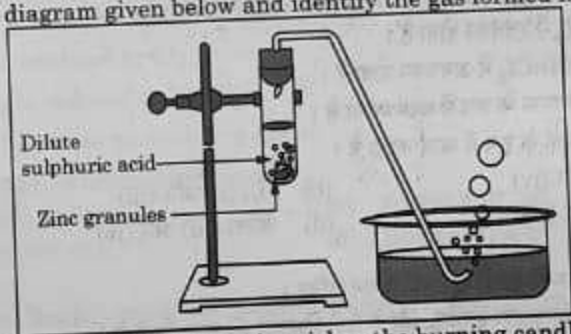
General instructions :
Read the following instructions very carefully and strictly follow them :

- (i) This question paper contains 60 questions out of which 50 questions are to be attempted. All questions carry equal marks.
- (ii) The question paper consists three Sections - Section A, B and C.
- (iii) Section - A consists of 24 questions. Attempt any 20 questions from Q. No. 1 to 24.
- (iv) Section - B also consists of 24 questions. Attempt any 20 questions from Q. No. 25 to 48.
- (v) Section - C consists of three Case Studies containing 12 questions and 4 questions in each case. Attempt any 10 from Q. No. 49 to 60.
- (vi) There is only one correct option for every Multiple Choice Question (MCQ). Marks will not be awarded for answering more than one option.
- (vii) There is no negative marking.

SECTION - A

Section-A consists of 24 questions (Q. No. 1 to 24). Attempt any 20 questions from this section. The first attempted 20 questions would be evaluated.

1. A student took Sodium Sulphate solution in a test tube and added Barium Chloride solution to it. He observed that an insoluble substance has formed. The colour and molecular formula of the insoluble substance is :
(a) Grey, Ba_2SO_4 (b) Yellow, $Ba(SO_4)_2$
(c) White, $BaSO_4$ (d) Pink, $BaSO_4$
2. Which of the following oxide(s) is/are soluble in water to form alkalies ?
(i) Na_2O (ii) SO_2 (iii) K_2O (iv) NO_2
(a) (i) and (iii) (b) (i) only
(c) (ii) and (iv) (d) (iii) only
3. Study the diagram given below and identify the gas formed in the reaction.



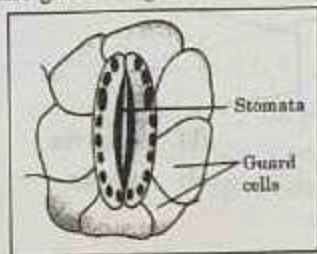
- (a) Carbon di-oxide which extinguishes the burning candle.
- (b) Oxygen due to which the candle burns more brightly.
- (c) Sulphur dioxide which produces a suffocating smell.
- (d) Hydrogen which while burning produces a popping sound.

12. In living organisms during respiration which of the following products are not formed if oxygen is not available ?
- (a) Carbon dioxide + Water (b) Carbon dioxide + Alcohol
(c) Lactic acid + Alcohol (d) Carbon dioxide + Lactic Acid
13. The correct statements with reference to single celled organisms are
- (i) Complex substances are not broken down into simpler substances.
(ii) Simple diffusion is sufficient to meet the requirement of exchange of gases.
(iii) Specialised tissues perform different functions in the organism.
(iv) Entire surface of the organism is in contact with the environment for taking in food.
- (a) (i) and (iii) (b) (ii) and (iii)
(c) (ii) and (iv) (d) (i) and (iv)
14. Which one among the following is not removed as a waste product from the body of a plant ?
- (a) Resins and Gums (b) Urea
(c) Dry Leaves (d) Excess Water
15. Which of the following statements are correct in reference to the role of A (shown in the given diagram) during a breathing cycle in human beings ?

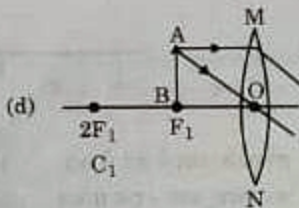
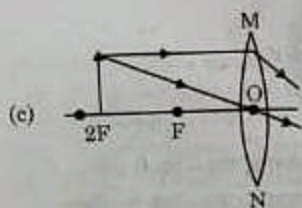
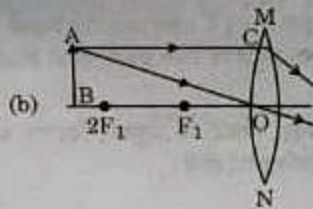
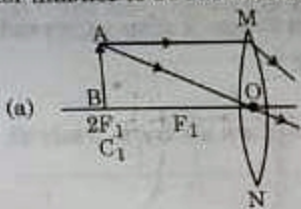


- (i) It helps to decrease the residual volume of air in lungs.
(ii) It flattens as we inhale.
(iii) It gets raised as we inhale.
(iv) It helps the chest cavity to become larger.
- (a) (ii) and (iv) (b) (iii) and (iv)
(c) (i) and (ii) (d) (i), (ii) and (iv)

16. Which one of the following conditions is true for the state of stomata of a green leaf shown in the given diagram ?



- (a) Large amount of water flows into the guard cells.
 (b) Gaseous exchange is occurring in large amount.
 (c) Large amount of water flows out from the guard cells.
 (d) Large amount of sugar collects in the guard cells.
17. In which of the following is a concave mirror used ?
- (a) A solar cooker
 (b) A rear view mirror in vehicles
 (c) A safety mirror in shopping malls
 (d) In viewing full size image of distant tall buildings.
18. A student wants to obtain magnified image of an object AB as on a screen. Which one of the following arrangements shows the correct position of AB for him/her to be successful ?



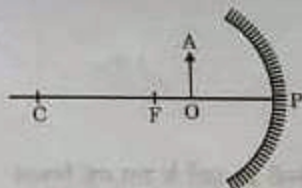
19. The following diagram shows the use of an optical device to perform an experiment of light. As per the arrangement shown, the optical device is likely to be a;



- (a) Concave mirror
(b) Concave lens
(c) Convex mirror
(d) Convex lens
20. A ray of light starting from air passes through medium A of refractive index 1.50, enters medium B of refractive index 1.33 and finally enters medium C of refractive index 2.42. If this ray emerges out in air from C, then for which of the following pairs of media the bending of light is least ?
- (a) air-A
(b) A-B
(c) B-C
(d) C-air

21. Which of the following statements is not true for scattering of light ?
- (a) Colour of the scattered light depends on the size of particles of the atmosphere.
(b) Red light is least scattered in the atmosphere.
(c) Scattering of light takes place as various colours of white light travel with different speed in air.
(d) The fine particles in the atmospheric air scatter the blue light more strongly than red. So the scattered blue light enters our eyes.

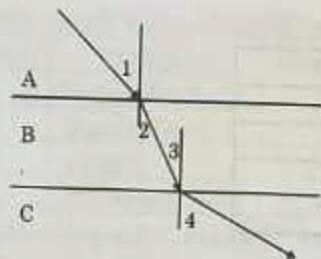
22.



For the diagram shown, according to the new Cartesian sign convention the magnification of the image formed will have the following specifications :

- (a) Sign - Positive, Value - Less than 1
(b) Sign - Positive, Value - More than 1
(c) Sign - Negative, Value - Less than 1
(d) Sign - Negative, Value - More than 1

23.



A ray of light is incident as shown. If A, B and C are three different transparent media, then which among the following options is true for the given diagram ?

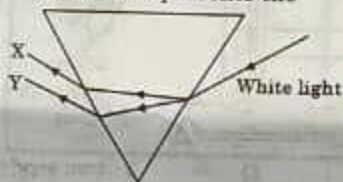
(a) $\angle 1 > \angle 4$

(b) $\angle 1 < \angle 2$

(c) $\angle 3 = \angle 2$

(d) $\angle 3 > \angle 4$

24. In the diagram given below, X and Y are the end colours of the spectrum of white light. The colour of 'Y' represents the


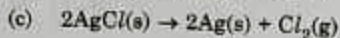
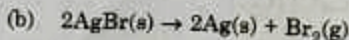
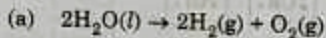


- (a) Colour of sky as seen from earth during the day.
 (b) Colour of the sky as seen from the moon.
 (c) Colour used to paint the danger signals.
 (d) Colour of sun at the time of noon

SECTION - B

Section-B consists of 24 questions (Q. No. 25 to 48). Attempt any 20 questions from this section. The first attempted 20 questions would be evaluated.

25. Which one of the following reactions is categorised as thermal decomposition reaction ?

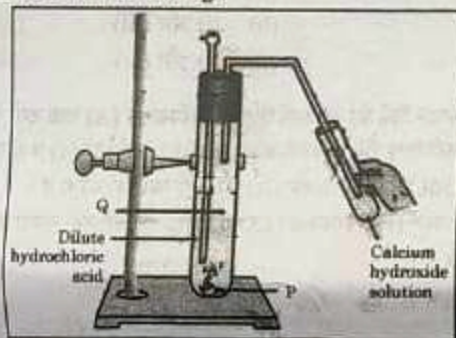


26. Consider the pH value of the following acidic samples :

S. No.	Sample	pH Value
1.	Lemon Juice	2.2
2.	Gastric Juice	1.2
3.	Vinegar	3.76
4.	Dil. Acetic acid	3.0

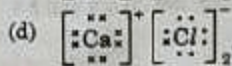

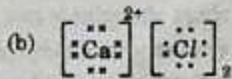
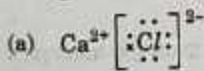
The decreasing order of their H^+ ion concentration is

- (a) $3 > 4 > 1 > 2$ (b) $2 > 1 > 3 > 4$
 (c) $2 > 1 > 4 > 3$ (d) $3 > 4 > 2 > 1$
27. Study the experimental set up shown in given figure and choose the correct option from the following :



P	Q	Change observed in calcium hydroxide solution
(a) K_2CO_3	Cl_2 gas	No change
(b) $KHCO_3$	CO_2 gas	No change
(c) $KHCO_3$	H_2 gas	Turns milky
(d) K_2CO_3	CO_2 gas	Turns milky

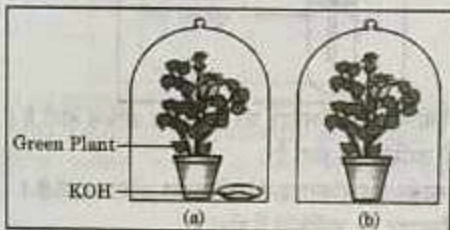
28. Which one of the following structures correctly depicts the compound $CaCl_2$?



35. **Assertion (A)** : Hydrochloric acid helps in the digestion of food in the stomach.

Reason (R) : Hydrochloric acid creates an acidic medium to activate protein digesting enzymes.

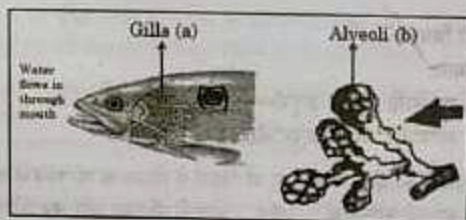
36. A student was asked to write a stepwise procedure to demonstrate that carbon dioxide is necessary for photosynthesis. He wrote the following steps. The wrongly worded step is -



- Both potted plants are kept in dark room for at least three days.
- Bottom of the bell jars is sealed to make them air tight.
- Both potted plants are kept in sunlight after the starch test.
- A leaf from both the plants is taken to test the presence of starch.

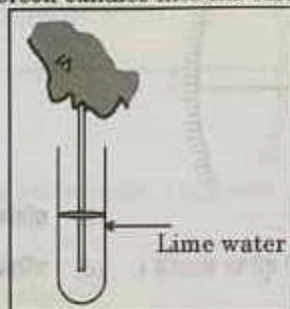
37. Respiratory structures of two different animals-a fish and a human being are as shown.

Observe (a) and (b) and select one characteristic that holds true for both of them.



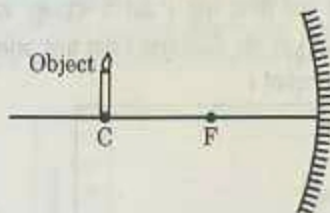
- Both are placed internally in the body of animal.
- Both have thin and moist surface for gaseous exchange.
- Both are poorly supplied with blood vessels to conserve energy.
- In both the blood returns to the heart after being oxygenated.

38. Observe the diagram of an activity given below. What does it help to conclude, when the person exhales into the test-tube ?



- (a) Percentage of carbon dioxide is more in inhaled air.
(b) Fermentation occurs in the presence of oxygen.
(c) Percentage of carbon dioxide is more in the exhaled air.
(d) Fermentation occurs in the presence of carbon dioxide.
39. If a lens can converge the sun rays at a point 20 cm. away from its optical centre, the power of this lens is -
(a) + 2D (b) - 2D (c) + 5D (d) - 5D
40. The radius of curvature of a converging mirror is 30 cm. At what distance from the mirror should an object be placed so as to obtain a virtual image ?
(a) Infinity (b) 30 cm
(c) Between 15 cm and 30 cm (d) Between 0 cm and 15 cm
41. The length of small intestine in a deer is more as compared to the length of small intestine of a tiger. The reason for this is -
(a) Mode of intake of food.
(b) Type of food consumed.
(c) Presence or absence of villi in intestines.
(d) Presence or absence of digestive enzymes.
42. Identify the two components of Phloem tissue that help in transportation of food in plants.
(a) Phloem parenchyma & sieve tubes
(b) Sieve tubes & companion cells
(c) Phloem parenchyma & companion cells
(d) Phloem fibres and sieve tubes
43. A converging lens forms a three times magnified image of an object, which can be take on a screen. If the focal length of the lens is 30 cm, then the distance of the object from the lens is
(a) - 55 cm (b) - 50 cm (c) - 45 cm (d) - 40 cm

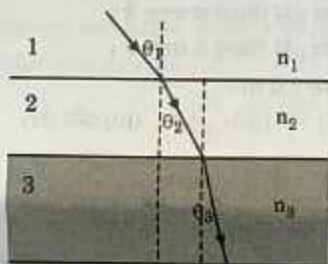
44.



Which of the following statements is not true in reference to the diagram shown above ?

- (a) Image formed is real.
 (b) Image formed is enlarged.
 (c) Image is formed at a distance equal to double the focal length.
 (d) Image formed is inverted.

45.



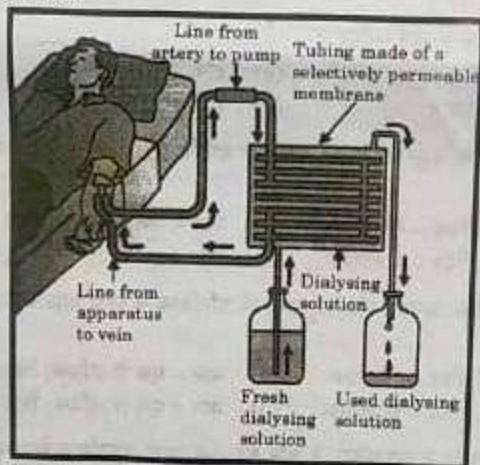
In the diagram shown above n_1 , n_2 and n_3 are refractive indices of the media 1, 2 and 3 respectively. Which one of the following is true in this case ?

- (a) $n_1 = n_2$ (b) $n_1 > n_2$ (c) $n_2 > n_3$ (d) $n_3 > n_1$
46. The refractive index of medium A is 1.5 and that of medium B is 1.33. If the speed of light in air is 3×10^8 m/s, what is the speed of light in medium A and B respectively ?
- (a) 2×10^8 m/s and 1.33×10^8 m/s (b) 1.33×10^8 m/s and 2×10^8 m/s
 (c) 2.25×10^8 m/s and 2×10^8 m/s (d) 2×10^8 m/s and 2.25×10^8 m/s
47. An object of height 4 cm is kept at a distance of 30 cm from the pole of a diverging mirror. If the focal length of the mirror is 10 cm, the height of the image formed is
- (a) +3.0 cm (b) +2.5 cm (c) +1.0 cm (d) +0.75 cm

49. Out of the given metals, the one which needs to be stored under Kerosene is
 (a) P (b) R (c) S (d) Q
50. Out of the given metals, the metal Q is
 (a) Iron (b) Zinc (c) Potassium (d) Magnesium
51. Metal which forms amphoteric oxides is
 (a) P (b) Q (c) R (d) S
52. The increasing order of the reactivity of the four metals is;
 (a) $P < Q < R < S$ (b) $S < R < Q < P$
 (c) $S < P < Q < R$ (d) $P < R < Q < S$

Case-II :

The figure shown below represents a common type of dialysis called as Haemodialysis. It removes waste products from the blood. Such as excess salts, and urea which are insufficiently removed by the kidney in patients with kidney failure. During the procedure, the patient's blood is cleaned by filtration through a series of semi-permeable membranes before being returned to the blood of the patient. On the basis of this, answer the following questions :



53. The haemodialyzer has semi-permeable lining of tubes which help to :
 (a) To maintain osmotic pressure of blood.
 (b) To filter nitrogenous wastes from the dialysing solution.
 (c) In passing the waste products in the dialysing solution.
 (d) To pump purified blood back into the body of the patient.

54. Which one of the following is not a function of Artificial Kidney ?
 (a) To remove nitrogenous wastes from the blood.
 (b) To remove excess fluids from the blood.
 (c) To reabsorb essential nutrients from the blood.
 (d) To filter and purify the blood.
55. The 'used dialysing' solution is rich in;
 (a) Urea and excess salts (b) Blood cells
 (c) Lymph (d) Proteins
56. Which part of the nephron in human kidney, serves the function of reabsorption of certain substances ?
 (a) Glomerulus (b) Bowmans Capsule
 (c) Tubules (d) Collecting duct

Case-III :

A compound microscope is an instrument which consists of two lenses L_1 and L_2 . The lens L_1 called objective, forms a real, inverted and magnified image of the given object. This serves as the object for the second lens L_2 ; the eye piece. The eye piece functions like a simple microscope or magnifier. It produces the final image, which is inverted with respect to the original object, enlarged and virtual.

57. What types of lenses must be L_1 and L_2 ?
 (a) Both concave (b) Both convex
 (c) L_1 - concave and L_2 - convex (d) L_1 - convex and L_2 - concave
58. What is the value and sign of magnification (according to the new Cartesian sign convention) of the image formed by L_1 ?
 (a) Value = Less than 1 and Sign = Positive
 (b) Value = More than 1 and Sign = Positive
 (c) Value = Less than 1 and Sign = Negative
 (d) Value = More than 1 and Sign = Negative
59. What is the value and sign of (according to new Cartesian sign convention) magnification of the image formed by L_2 ?
 (a) Value = Less than 1 and Sign = Positive
 (b) Value = More than 1 and Sign = Positive
 (c) Value = Less than 1 and Sign = Negative
 (d) Value = More than 1 and Sign = Negative
60. If power of the eyepiece (L_2) is 5 diopters and it forms an image at a distance of 80 cm from its optical centre, at what distance should the object be ?
 (a) 12 cm (b) 16 cm (c) 18 cm (d) 20 cm