

First Term Evaluation 2017-18

Mathematics

Standard : 3

Time : 2 hrs

Name of Student	Sl. No.	Activities	Grade
Name of School	1	Collection of Books	
Division	2	Cost of umbrella	
Signature of Parent	3	Fill the boxes	
Signature of Class Teacher	4	School sports meet	
	5	Let's make shapes	
	6	Class library	
	Overall Grade		

Six activities are given. Answer any five

Activity 1 - Collection of Books

- Mangalamkundu UP School has collected books as a part of the celebration of 'Vayana Varaghosham'. They arranged the collected books as shown below.

Item	Number
Story	264
Poem	321
Travellogue	102
Science	230
Child Literature	145



- a. Which item has more number of books?
 How many?
- b. Which item has less number of books?
 How many?
- c. Re-arrange the number of different items of books from the smallest to the largest. Write them in the boxes given below.

- d. Story books in the school were numbered from 200 to 285. Find the number of story books.

Activity 2 - Cost of umbrella

Lakshmi bought an umbrella. She gave Rs.500 to the shop. The shop keeper gave her back 3 hundred rupee notes, 7 ten rupee notes and 5 one rupee coins.

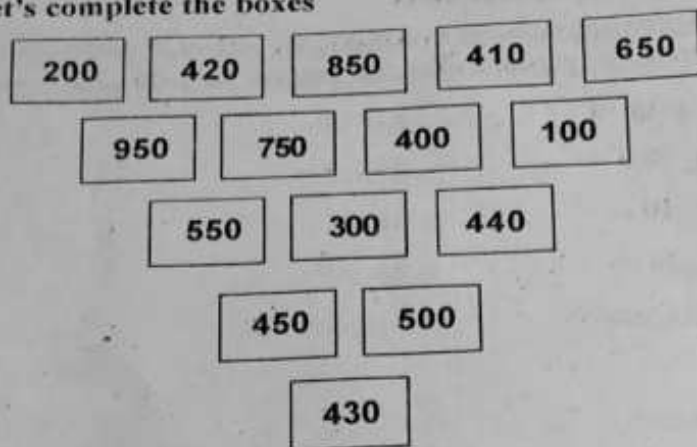
- a) How much rupees did Lakshmi get back?

- b) What is the cost of an Umbrella?

- c) From the balance amount, Lakshmi changed 2 hundred rupee notes to 50 rupee notes. How many 50 rupee notes did she get?

- d) If Lakshmi got 20 rupee notes, how many number of 20 rupees notes will she get for the 2 hundred rupee notes?

Activity 3 - Let's complete the boxes



Complete the pattern given below using the numbers given above.

- a)

410

430


- b)

950

850

- c)

d) Complete the empty boxes



Activity 4 - School sports meet

During the sports meet in Athikkavu school, 5 athletes participated in Junior boys long jump. Each of them jumped the following distance.

- | | | | |
|----|----------|---|--------|
| 1. | Ajmal | - | 514 cm |
| 2. | Reji | - | 298 cm |
| 3. | Binu | - | 487 cm |
| 4. | Shaji | - | 367 cm |
| 5. | Prajeesh | - | 339 cm |

Places they got

a) 1. First place :

2. Second place :

3. Who jumped the :
least distance?

b) How much more did the first place winner jump than the second place winner?


c) Arrange the distances in the boxes from the biggest to the smallest ?

<input type="text"/>	<input type="text"/>	<input type="text"/>	<input type="text"/>	<input type="text"/>
----------------------	----------------------	----------------------	----------------------	----------------------

Activity 5 - Let's make shapes

- a) How many circles are there in the figure?

- b) Colour the rectangles.



- c) Draw a figure you like using circles, triangles and rectangles.

Activity 6 - Class Library

GLP School Maloor received donation for class room library. The amount received by Standard III and IV are given below.

- a) Can you identify and write the number of notes and coins received by each classes?

Class	Amount received	Number of notes and coins		
III. A	376	<input type="text"/> 100 Rs.	<input type="text"/> 10 Rs.	<input type="text" value="6"/> 1 Rs. coins
III. B	290	<input type="text"/> 100 Rs.	<input type="text"/> 10 Rs.	
IV. A	508	<input type="text"/> 50 Rs.	<input type="text" value="1"/> 5 Rs.	<input type="text"/> 1 Rs. coins
IV. B	525	<input type="text"/> 100 Rs.	<input type="text"/> 1 Rs. coins	

- b) Which is the highest amount received?

- c) Write the highest amount in words?