

This Question Paper contains 4 Printed Pages + 1 Map.

1121

22E (A)

SUMMATIVE ASSESSMENT-I (2018-19)

SOCIAL STUDIES, Paper-II

(English Version)

Parts A and B

Time : 2.45 Hours]

[Maximum Marks : 40

Instructions :

1. *15 Minutes are allotted for reading the question paper (Part A & B) in addition to 2.30 hours for writing the answers.*
2. *Part-A answers should be written in a separate answer book. And Part-B answer should be written in Part-B Question paper itself.*
3. *There are three Sections in Part-A.*
4. *Answer all the questions.*
5. *Every answer should be visible and legible.*
6. *There is internal choice in Section – III.*
7. *Part-A & B should be given at the beginning of the exam.*

PART – A

Time : 2 Hours

Maximum : 30 Marks

SECTION-I

4×1=4

- NOTE :**
1. Answer **all** the questions.
 2. Each question carries **ONE** mark.

1. Write any two consequences of economic depression.
2. What is militarism ?
3. "UN is a kind of world government based on four principles." What are the four principles ?
4. Write two slogans against wars.

SECTION-II

5×2=10

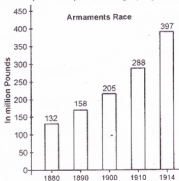
- NOTE :**
1. Answer **all** the questions.
 2. Each question carries **TWO** marks.

5. How did the British implement "Divide and rule" policy in India ?
6. What are the environmental problems faced by the independent Nigeria ?

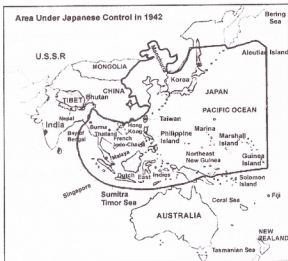
22E(A)

P.T.O.

7. Explain the role of education in the national movement by taking Vietnam as an example.
8. Write your analysis on the graph given below.



9.



Observe the Map and answer the questions given below :

- (1) Name any two countries which were not under the control of Japan.
- (2) Dutch East Indies was the former name of which country ?

SECTION-III

4×4=16

- NOTE : 1. Answer all the questions.
2. Each question carries **FOUR** marks.

10. (A) What were the policies implemented by the Nazis in Germany before the World War II ?

OR

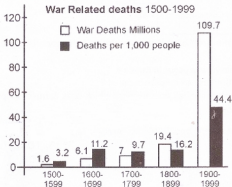
- (B) How were the Land reforms implemented in China ?

11. (A) "The 20th century was a period of great expectations, experiments and dangerous developments." – Justify.

OR

- (B) "Integration of various princely states in newly independent India was a challenging task." – Comment.

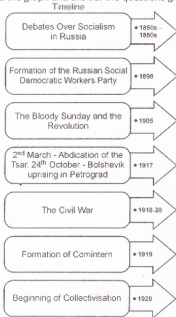
12. (A) Observe the graph and answer the questions given below :



- (i) What does the above graph explain ?
(ii) In which period, war related deaths were more ?
(iii) In which century, "deaths per 1000 people" were low ?
(iv) Give two suggestions to prevent wars ?

OR

- (B) Observe the graph and answer the questions given below :



- (i) Which was the first country that established the socialist government in the world ?
- (ii) Why did the civil war occur in Russia ?
- (iii) What were the Russian emperors called ?
- (iv) Name the international organisation which was formed to promote socialist ideology.
13. Locate the following on the outline map of the world

Group – A

- Italy
- China
- Indonesia
- United States of America

OR**Group – B**

- A French colony in Asia
- The country with the tribe Yoruba
- The country which faced the atom bomb attack for the first time
- The country in which industrial revolution first occurred

This Question Paper contains 4 Printed Pages.

1122

22E (B)

SUMMATIVE ASSESSMENT-I (2018-19)

SOCIAL STUDIES, Paper-II

(English Version)

Parts A and B

Time : 2½ Hours]

[Maximum Marks : 40

Academic Standard	AS 1					AS 2	AS 3	AS 4			AS 5	AS 6			Total	Grade		
Marks Allotted	16					4	6	4			6	4			40			
Question Numbers	1	2	5	10	14-29	11	8	12	3	6	30-31	9	13	4	7	32-33	33	
Marks Obtained																		
Total																		

Name of the Student : Roll No. :

PART - B

Time : 30 Minutes

Maximum : 10 Marks

Instructions :

1. Answer all the questions in Part-B. Attach Part-B to the answer sheet of Part-A.
2. Each question has 4 options A, B, C and D. Write the capital letter indicating the answer in the given brackets.
3. Marks will not be awarded in case of any overwriting.

SECTION - IV

20 × ½ = 10

- NOTE :**
1. Answer all questions.
 2. Each question carries ½ mark.

22E(B)

14. Which among the following were not in the same block in World War II ? []
- (A) Germany - Japan (B) Britain - France
(C) USSR - USA (D) USA - Japan
15. Which of the following statements is/are correct with reference to Tsarist Russia ? []
- (i) It was spread over two continents.
(ii) It had the third largest population in the world.
- (A) (i) only (B) (ii) only
(C) Both (i) and (ii) (D) None of the two
16. The country that could escape the impact of Great Depression was : []
- (A) Germany (B) USA
(C) USSR (D) Vietnam
17. "It all seemed like the work of the Genii in the Arabian Nights. Only a decade ago, they were as illiterate, helpless and hungry as our own masses." – Who commented like this about Moscow after Russian Revolution ? []
- (A) Jawaharlal Nehru (B) M.N. Roy
(C) Rabindranath Tagore (D) Ambedkar
18. Which of the following measures was NOT suggested by J.M. Keynes in order to get rid of economic depression ? []
- (A) State should invest funds
(B) State should generate employment
(C) State should own all the factories
(D) State should play a crucial role in keeping the economy going
19. The country that was ruled by Manchu dynasty was : []
- (A) China (B) Britain
(C) Turkey (D) Austria
20. Which of the following principles means regulation of industries and implementation of land reforms ? []
- (A) San (B) Min
(C) Chui (D) Jing

21. The Guomindang's social base was in []
(A) Urban areas (B) Rural areas
(C) Tribal areas (D) All over the country.
22. At the time of World War II, the Prime Minister of Britain was []
(A) Roosevelt (B) Woodrow Wilson
(C) Churchill (D) Lincoln
23. After the failure of Cripps Mission, Gandhiji launched []
(A) Vande Mataram Movement (B) Salt Satyagraha
(C) Quit India Movement (D) Non-Cooperation Movement
24. Which of the following countries checked the Nazi forces with the decisive victory in Stalingrad ? []
(A) Britain (B) Russia
(C) France (D) USA
25. The country which occupied Vietnam as part of its imperial drive to control South-East Asia was []
(A) China (B) Japan
(C) North Korea (D) France
26. Which of the following was not a feature of "The New Deal" ? []
(A) Relief of the victims of depression (B) Reform of financial institutions
(C) Recovery of economy (D) Rapid industrialisation
27. Which of the following was not promised by Hitler in Germany ? []
(A) A strong nation
(B) Undoing the injustice of the Versailles Treaty
(C) Equality to all
(D) Employment for all
28. After isolating France, German Chancellor Bismark entered into a secret alliance with []
(A) Britain and Russia (B) Austria and Russia
(C) Japan and Britain (D) Austria and Italy

29. Which among the following nations was/were the members of the League of Nations at the time of its formation ? []
- (A) Germany (B) Russia
(C) USA (D) None of the above
30. The share of harvest demanded by the Tebhaga Movement was : []
- (A) 1/3 (B) 1/2
(C) 2/3 (D) 1/4
31. Pakistan celebrates its independence day on []
- (A) August 13th (B) August 14th
(C) August 15th (D) August 16th
32. The reforms / reform advocated by the May Fourth movement revolutionaries in China : []
- (A) Use of simple language and script (B) Abolishing the practice of foot-binding
(C) Equality in marriage (D) All of the above
33. "Sare Jahan Se Achha Hindustan Hamara" was written by []
- (A) Mohammad Iqbal (B) Choudhary Rehmat Ali
(C) Tagore (D) Bankim Chandra Chatterjee
-