

This Question Paper contains 4 Printed Pages + 1 Map.

**1107**

**21E (A)**

**SUMMATIVE ASSESSMENT – I (2018-19)**

**SOCIAL STUDIES, Paper-I**

*(English Version)*

**Parts A and B**

**Time : 2 Hours 45 Minutes]**

**[Maximum Marks : 40**

**Instructions :**

1. *15 Minutes are allotted for reading the question paper (Part A & B) in addition to 2.30 hours for writing the answers.*
2. *Part-A answers should be written in a separate answer book.*
3. *There are three Sections in Part-A.*
4. *Answer all the questions.*
5. *Every answer should be visible and legible.*
6. *There is internal choice in Section – III.*
7. *Part-A & B should be given at the beginning of the exam.*

**PART – A**

**Time : 2 Hours**

**Maximum : 30 Marks**

**SECTION-I**

**4×1=4**

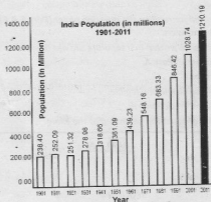
- Answer all the following questions.
  - Each question carries one mark.
1. What is special about 'Indira Point' with reference to the location of India ?
  2. Mention the three principal river systems to which the Himalayan Rivers belong.
  3. In which sector does the disguised unemployment found predominantly in India today ? Why ?
  4. Suggest two activities that can be taken up so that the ground water can be restored.

**21E(A)**

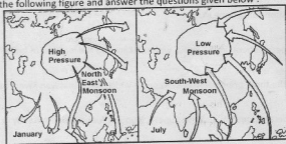
**P.T.O.**

- Answer all the following questions.
- Each question carries **two** marks.

5. People often talk of population growth in alarmed tones. Why ?
6. List out the reasons why the people have been migrating from your area.
7. Suggest some measures to reduce global warming.
8. Write your observations about the population growth in India, from the graph given below :



9. Observe the following figure and answer the questions given below :



- (1) What is the relation between atmospheric pressure and winds ?
- (2) Which monsoon winds are mainly responsible for the bulk of Indian rainfall ?

## SECTION-III

- Answer all the following questions.
- Each question carries four marks.

10. (A) How is unorganised sector different from organised sector ? Explain.

OR

(B) Explain the expansion of agriculture and emergence of towns.


11. (A) 'Urbanisation results in environmental stress' – Do you agree with this statement ? Support your answer.

OR

(B) Developed countries want developing countries to cut down on burning coal and other activities that add greenhouse gases to the atmosphere. – Is this justified ? Explain your opinion.

12. (A) Observe the graph given below and answer the following questions :

**Sectoral Shares of Employment**



- (1) What does this graph explain about ?
- (2) Which sector is the largest employer in India ?
- (3) In which sector do most of the people want to be employed today ?
- (4) Which sector offers the least employment ?

OR

- (B) Study the paragraph given below and answer the following questions :

"A new kind of settlement is occurring in many countries, including India. These settlements are centred around large airports. Hence the name aerropolis."

- (1) What is called a settlement ?
  - (2) What is located at the centre of an aerropolis ?
  - (3) What facilities are provided in an aerropolis ?
  - (4) Give two examples of aerropolises in India.
13. (A) Locate the following on the outline map of India :
- (1) Largest populated city in India.
  - (2) The state with the highest density of population.
  - (3) The largest peninsular river.
  - (4) The strait which separates Sri Lanka from India.

OR

- (B) Locate the following on the outline map of India :
- (1) Peak Anaimudi
  - (2) River Narmada
  - (3) Himachal Pradesh
  - (4) Amaravathi

This Question Paper contains 4 Printed Pages.

**1108**

**21E (B)**

**SUMMATIVE ASSESSMENT-I (2018-19)**

**SOCIAL STUDIES, Paper-I**

*(English Version)*

Parts A and B

Time : 2 hrs. 45 min]

[Maximum Marks : 40

Academic Standard	AS-1					AS-2		AS-3			AS-4			AS-5		AS-6		Total	Grade	
Marks Allotted	16					4		6			4			6		4		40		
Question Numbers	1	2	5	10	14-29	11	8	12	3	6	30-31	9	13	4	7	32-33				
Marks Obtained																				
Total																				

Name of the Student : \_\_\_\_\_ Roll No. \_\_\_\_\_

**PART - B**

Time : 30 Minutes

Maximum : 10 Marks

- Instructions :** (1) Answer all the questions in Part-B. Attach Part-B with answer sheet of Part-A.  
(2) Each question has 4 options A, B, C and D. Write the capital letter indicating the answer in the given brackets.  
(3) Marks will not be awarded in case of over-writing.

**SECTION - IV**

**20 × ½ = 10**

- Note :** (1) Answer all the questions.  
(2) Each question carries ½ mark.

14. According to 2013 HDI, the country which has a better rank than India is { }
- (A) Sri Lanka (B) Pakistan  
(C) Myanmar (D) Nepal

**21E (B)**

**P.T.O.**

15. Find the incorrect pair. [ ]
- (A) Jammu hills – Jammu region  
(B) Mishmi hills – Arunachal Pradesh  
(C) Purvanchal – Meghalaya  
(D) Cachar – Assom
16. Production of a commodity, mostly through the natural process is an activity in \_\_\_\_\_ sector. [ ]
- (A) Primary (B) Secondary  
(C) Tertiary (D) Information Technology
17. Which of the following statements is not correct ? [ ]
- (1) Development for one will be the development for all the others.  
(2) Averages are useful for comparison but they hide disparities among the people.  
(A) Only (1) (B) Only (2)  
(C) Both (1) and (2) (D) None of the above
18. G.D.P. is the total value of all \_\_\_\_\_ produced in a year. [ ]
- (A) goods and services  
(B) final goods and services  
(C) intermediate goods and services  
(D) intermediate and final goods
19. Consider the following statements : [ ]
- (1) The Thar Desert is located on the leeward side of Aravalis.  
(2) Luni is the only river in the Thar Desert.  
Which of the above statements is/are true ?
- (A) Only (1) (B) Only (2)  
(C) Both (1) and (2) (D) None of the two
20. The soils which are formed due to volcanic activity are : [ ]
- (A) Red soils (B) Black soils  
(C) Laterite soils (D) Alluvial soils

21. "It is known as the Tsangpo in Tibet. It rises from Chemayungdung glacier of the Kailas range near Manasa Sarovar." To which of the following rivers does 'it' refer to here ? [ ]
- (A) The Indus (B) The Ganga  
(C) The Brahmaputra (D) The Sutlej
22. Match the following : [ ]
- (a) Godavari [ ] (i) Triambak  
(b) Krishna [ ] (ii) Amarkantak  
(c) Tapti [ ] (iii) Mahabaleswar  
(iv) Multai
- (A) (a) - (i), (b) - (iii), (c) - (iv) (B) (a) - (i), (b) - (ii), (c) - (iii)  
(C) (a) - (i), (b) - (ii), (c) - (iv) (D) (a) - (ii), (b) - (i), (c) - (iii)
23. Western disturbances come from : [ ]
- (A) Red Sea (B) Arabian Sea  
(C) Mediterranean Sea (D) Baltic Sea
24. The monsoon forms in the tropical area approximately between : [ ]
- (A) 20° N and 20° S latitudes (B) 30° N and 30° S latitudes  
(C) 40° N and 40° S latitudes (D) 50° N and 50° S latitudes
25. Which of the following cities receives more rainfall in winter than in summer ? [ ]
- (A) Kolkata (B) Trivandrum  
(C) Chennai (D) Bengaluru
26. The population size changes due to : [ ]
- (A) Births (B) Deaths  
(C) Migrations (D) All of the above

**21E (B)**

4

27. Which of the following is NOT a mega city ? [ ]  
(A) Mumbai (B) Chennai  
(C) Delhi (D) Kolkata
28. Heathrow airport is located in : [ ]  
(A) U.K. (B) U.A.E.  
(C) U.S.A. (D) Egypt
29. According to the census of India, 'Last usual place of residence' means the place where the person had stayed continuously for a period of : [ ]  
(A) 2 months or more (B) 4 months or more  
(C) 6 months or more (D) 8 months or more
30. Which of the following has become the main source of water for domestic use over the past few decades ? [ ]  
(A) Rain water (B) Ground water  
(C) River water (D) Purified water
31. During the last five decades, the largest increase in urban population is due to : [ ]  
(A) Natural increase (B) Declaration of rural areas as urban areas  
(C) Migration of people (D) Expansion of urban areas
32. Low sex-ratio indicates : [ ]  
(A) Increase of population growth rate  
(B) Decrease of population growth rate  
(C) Hidden form of discrimination towards women  
(D) Increase of fertility rate
33. The rainfall caused by which of the following is boon to wheat crop in Rabi season in northern India ? [ ]  
(A) Trade winds (B) Loo  
(C) Western disturbances (D) Jet streams