

## SUMMATIVE ASSESSMENT - I - 2016

## SOCIAL STUDIES

(English Version)

PART - A &amp; B

VIII Class]

(Max.Marks: 80)

[ Time: 2.45 Hrs.

Marks : 60]

Part - A

**Instructions :**

1. 15 minutes are allotted to read the question paper and 2.30 Hrs. for writing answering.
2. Part - A must be answered in a separate answer sheet.
3. Students can take along the Part - A Question paper with them.
4. Map and Part - B (bit paper) should be tied to the answer sheet and handover to the invigilator.

**Section - I****Note: 1) Answer the following four questions.****2) Each question carries 2 marks.**

4x2=8

1. Write the differences in heating up of land and oceans ?
2. What should people do if officers won't agree with peoples desires ?
3. Write a short note on appreciating the life style of Eskimos ?
4. Draw the outline map of Andhra Pradesh and locate Amaravathi.


**Section - II****Note: 1) Answer the following five questions.****2) Each question carries 4 marks.**

5x4=20

5. Prepare a few questions to know about different types of maps.
6. Write the reasons for Simla being cool than New Delhi.
7. Write the role of Gandhiji in Quit India Movement.

**[ Turn Over...**

8. Appreciate the role of leaders during freedom struggle.

9. 

Observe the above scale and answer the following questions.

1) Which temperature is higher  $-4^{\circ}\text{C}$  and  $-6^{\circ}\text{C}$ .

2) Water becomes solid at which temperature ?

### Section - III

Note: 1) Answer the following four questions.

2) Each question carries 8 marks. 4x8=32

10. (A) Read the paragraph and answer the question.

Some of the Harmful rays of sun like the UV rays don't reach the ground and this has made life possible on the earth. Some amount of solar rays are also absorbed or reflected away by clouds and smoke or dust in the atmosphere.

**Question:-** What will happen if the atmosphere gets more polluted with smoke and dust. (OR)

(B) Read the paragraph and answer the question.

Communalism believes in the promotion of the interest of a particular religious community and not the general interests of all. It also believes that the state and government should be run keeping in mind the interest of that particular religious group. This is in contrast to nationalism which believes that the nation is above individual communities and represents the interest of all people including those who may not have any religion at all. This view is also called "Secular" as it holds that the government should neither interfere in the affairs of religion nor allow any religion to interfere with the government. It should treat all religions equally without favouring any one religion.

**Question:-** Interpretate on Secularism and Communalism.

[ Contd...3

11. (A) Answer the following questions by understanding the given table.

Moderates phase 1885-1905	Extremists phase 1905-1920	Gandhian Eraly phase 1920-1947
Gopala Krishna Gokhale, Mahadeva Govinda Ranade, W.C. Banerjee, R.C. Datta, Surendra Nath Banerjee	Balagangadhar Tilak, Lala Lajapat Rai, Bipin Chandra Pal, Aravind Ghosh	1920 - Non-co-operation moment 1922 - Chowri Chowra Incident 1930 - Salt Satyagraham 1942 - Quit India movement

1. Who gave the famous slogan "Swaraj is my birth right and I shall have it"?
2. Write any two sentences about chowri chowra incident
3. Write leaders of Moderates phase?
4. Gandhiji gave the slogan "Do or Die" in which movement?

(OR)

State	Population Density	State	Population Density	State	Population Density
Andhra Pradesh	308	Jammu & Kashmir	56	Nagaland	119
Arunachal Pradesh	17	Jharkhand	414	Orissa	269
Assam	397	Karnataka	319	Punjab	550
Bihar	1102	Kerala	859	Rajasthan	201
Chattisgarh	189	Madhya Pradesh	236	Sikkim	86
Goa	394	Maharashtra	365	Tamilnadu	555
Gujarat	308	Manipur	122	Telangana	310
Haryana	573	Meghalaya	132	Tripura	350
Himachal Pradesh	123	Mizoram	52	Uttarakhand	189
				Uttar Pradesh	828
				West Bengal	1030

[ Turn Over...

1. What is meant by population density ?
  2. Name the states having population density less than 250.
  3. Name the states having population density more than 1000.
  4. Write any two reasons for having less population density in Arunachal Pradesh.
12. (A) Compare the condition of tenant farmers before freedom and farmers of today. What differences and similarities do you find ?

(OR)

- (B) How does Global warming effect people present in polar regions.
13. (A) Mark the following places in the given India Map.

1) Mumbai

2) Kolkata

3) Simla

4) Hyderabad

(OR)

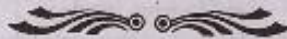
- (B) Mark the following places in the given India Map.

1) Ganjam

2) Awadh

3) Lucknow

4) Chennai



Regd. No. : **51-A**Marks : **SUMMATIVE ASSESSMENT - I - 2016 - 2017****SOCIAL STUDIES****(English Version)****Part - B****VIII Class]****(Marks : 20)**

Name of the Student : ..... Roll No:.....

Academic Standard	A.S-I	A.S-II	A.S- III	A.S - IV	A.S-V	A.S- VI	Total
Question Numbers	1,2,5,6,7 Part-B 14-29,	10	9,11	12	4,13 Part-B 32 &33,	3,8 Part-B 30 &31	33
Max, Marks Allotted	32	8	12	8	12	8	80
Marks obtained							
Grade							

**Instructions : 1. Choose the correct answer and write its letter in the brackets.****2. Each question carries 1 mark.****20x1=20**

14. Earliest maps were made on clay tablets by ----- [    ]

A) Babilonians

B) Greeks

C) Sumerians

D) Romans

15. Which colour indicates mountains in maps [    ]

A) Darkblue

B) Darkblack

C) Darkgrey

D) Darkgreen

16. Who was the famous women participated in Salt Satya Graha along with Gandhiji [    ]

A) Durgabaideshmukh

B) Sarojini Naidu

C) Aruna Asafa Ali

D) Madam Kama

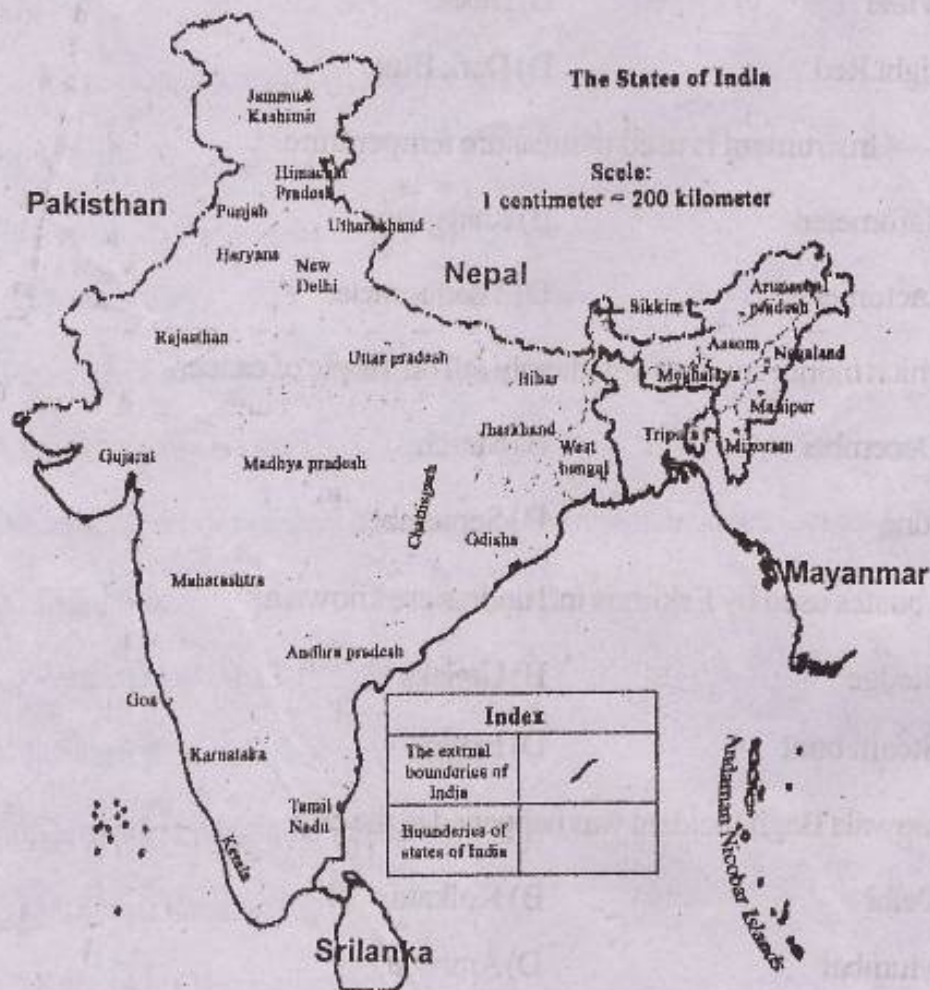
**[ Turn Over...**

17. "Bengal Partition" was done in the year. [ ]  
A) 1920      B) 1905      C) 1922      D) 1930
18. Which region has recorded highest temperature in the World. [ ]  
A) Vostak      B) Agegia  
C) Death valley      D) Alasca
19. Water boils at ----- temperature. [ ]  
A) 80°C      B) 90°C      C) 100°C      D) 0°C
20. Which Governor General introduced permanent land settlement [ ]  
A) Dulhousie      B) Wellesely  
C) Warren Hastings      D) Cornvallis
21. Who started "Krishna News paper" [ ]  
A) Tanguturi Prakasam Panthulu  
B) Mutnuru Krishna Rao  
C) Kandukuri Veeresalingam Panthulu  
D) Madapati Hanumantha Rao
22. Who given the slogan "Chalo Delhi" ? [ ]  
A) Bhagat Singh      B) Alluri Sita Rama Raju  
C) Subhash Chandra Bose      D) Mahatma Gandhi
23. Indian National Congress stated Purna swaraj was their aim at which conference. [ ]  
A) Karachi      B) Delhi  
C) Lahore      D) Lucknow

24. Boundaries are represented with this colour in maps. [     ]  
A) White                                      B) Black  
C) Light Red                                      D) Dark Blue
25. ----- Instrument is used to measure temperature. [     ]  
A) Barometer                                      B) Rain guage  
C) Lactometer                                      D) Thermometer
26. In which month sun rays will directly fall on Tropic of cancer. [     ]  
A) December                                      B) March  
C) June    D) September
27. The boates used by Eskimos in Tundras are known as [     ]  
A) Sledge    B) Umiaks  
C) Steam boat                                      D) Inufick
28. Jallianwala Bagh Incident was happened in the city. [     ]  
A) Delhi    B) Kolkata  
C) Mumbai    D) Amritsar
29. Time period of second world war. [     ]  
A) 1914-1918                                      B) 1906-1908  
C) 1939-1945                                      D) 1926-1930
30. Who is responsible for establishing dam across Godavari River. [     ]  
A) P.V. Rao    B) Arthur Cotton  
C) M. Visweswarayya                                      D) C.R. Reddy
31. Eskimos play ----- game for their entertainment. [     ]  
A) Kabaddi    B) Wrestling    C) Chess    D) Bowling

**[ Turn Over...**

Observe the given below map and answer the 32 & 33 questions:



32. Which state do not have coastal area [     ]
- A) Andhra Pradesh                      B) West Bengal
- C) Goa                                      D) Madhya Pradesh
33. Which country have boundary with India ? [     ]
- A) Indonesia                              B) Mangolia
- C) Maynmar                                D) Iraq

