

SUMMATIVE ASSESSMENT - I - 2016 - 2017
SOCIAL STUDIES
(English Version)
PART - A & B

VI Class]

(Max.Marks: 80)

Time: 2.45 Hrs.

Marks : 60]

Part - A

Instructions :

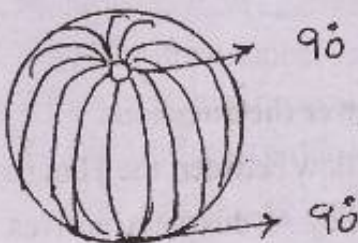
1. 15 minutes are allotted to read the question paper and 2.30 Hrs. for writing answering.
2. Part - A must be answered in a separate answer sheet.
3. Students can take along the Part - A Question paper with them.
4. Map and Part - B (bit paper) should be tied to the answer sheet and handover to the invigilator.

Section - I**Note:** 1) Answer all the questions.

2) Each question carries 2 marks.

4x2=8

1. Compare the tools used by the Earliest people with those of modern types.

2.  90° 90° N Latitude is called -----
 90° S latitude is called -----

3. How do you appreciate thanking the killed animal by the Earliest people and worshipping the harvest by the farmers now-a-days.
4. The Early people stored grains, is it surprised you. Why?

[Turn Over...

SECTION - II

Note: 1) Answer all the questions.

2) Each question carries 4 marks.

5x4=20

5. What are the uses of Latitudes and Longitudes ?
6. Why is the actual distance on the ground to be reduced on the Map ?
7. How are the people of handicrafts helped by the Government?
8. Read the given table and answer the questions.

Sl.No	Continent	Significance
1	Asia	Biggest Continent
2	Africa	Second biggest continent
3	Europe	Second smallest continent
4	Antarctica	Covered with Ice

1. India located in which continent.
2. Which continent covered with Ice in Southern Hemisphere.
9. What is the reason for having high population density in Delta regions.

Section - III

Note: 1) Answer all the questions.

2) Each question carries 8 marks.

4x8=32

10. (A) Read the following paragraph and answer the questions.

As the Ganga and Yamuna Rivers flow between the Himalayas and the Deccan plateau, this plain is called the Gangetic valley. As this plain receives very high rainfall, it is very fertile. These rivers bring silt from the Himalayas and flow through out the years. Initially the people of different types settled down to practice agriculture in convenient parts of the Valley. These tribes were called 'JANA' in sanskrit and the place where they settled was called 'JANAPADA'.

Why Indo-Gangetic plains are suitable for Establishing kingdoms ?

(OR)

[Contd...3

(B) Read the following paragraph and answer the questions.

The discovery of fire by the early people brought about great changes in their lives. Probably they made fire by striking two stones. Fire enabled them to eat roasted meat. This was the beginning of the cooked food. They also used fire to keep off wild animals and to light the caves. Wood was often heated on fire to harden it for fire.

Interpretate Human Evolution after discovery of fire.

11. (A) Find out how the crafts persons are taxed by the government today. Was it the same in the times of mahajanapads?

(OR)

(B) Is it good decision to cultivate same crops by all the farmers in your village. Write your opinion.

12. (A) Read the table and answer the questions.

Sl.No	Land form	Features
1	Mountains	very little flat land
2	Plateau	Landscape is uneven with ups and downs
3	Plains	level lands with very gentle slopes
4	Delta	Fertile

Questions:-

1. Name the highest land form
2. Name the important deltas in Andhra Pradesh
3. Which land form occupies major part of Rayalaseema.
4. Which is the most fertile land form

(OR)

(B) Read the table and answer the questions.

Sl.No	Hills	Districts
1	Seshachalam	Chittoor
2	Paapikondalu	East, West Godavari
3	Nallamalai Ranges	Kumool
4	Velikonda	Prakasam

[Turn Over...

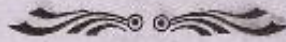
1. Name the hills which have largest forests in Andhra Pradesh
2. In which districts Velikonda is located
3. Name the hills where Tirumala Tirupati is located.
4. Which hills extend in Godavari districts.

13. Mark the following places in the given Andhra Pradesh Map.

- (A)
- 1) River Krishna
 - 2) Seshachalam Hills
 - 3) Kurnool district
 - 4) New capital of Andhra Pradesh

(OR)

- (B)
- 1) District having Penamakuru village
 - 2) River Godavari
 - 3) Bay of Bengal
 - 4) Visakhapatnam



Regd. No. :

44-A

Marks :

SUMMATIVE ASSESSMENT - I - 2016 - 2017

SOCIAL STUDIES

(English Version)

PART - B

VI Class]

(Marks : 20)

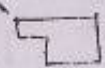
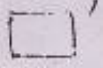
[Time: ½ Hr.

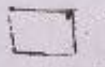
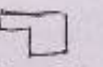
Name of the Student : Roll No:.....

Academic Standard	A.S-I	A.S-II	A.S- III	A.S- IV	A.S-V	A.S- VI	Total
Question Numbers	1,5,6,9 Part-B 14-29, 31&33	10	8,12	11	2,13 Part-B 30 &31,	3,4,7	33
Max, Marks Allotted	32	8	12	8	12	8	80
Marks obtained							
Grade							

Instructions : 1. Choose the correct answer and write its letter in the brackets.

2. Each question carries 1 mark. 20x1=20

14.   symbol represents []

-  
- A) Soil road B) Bridge
- C) Living place D) Police station

15. Latitudes and longitudes are []

- A) Real B) Imaginary
- C) accurate D) Natural





16. The corner between east and north is called ----- []

- A) South West B) North East
- C) North West D) South East

17. Magnetic compass always represents ----- direction. []

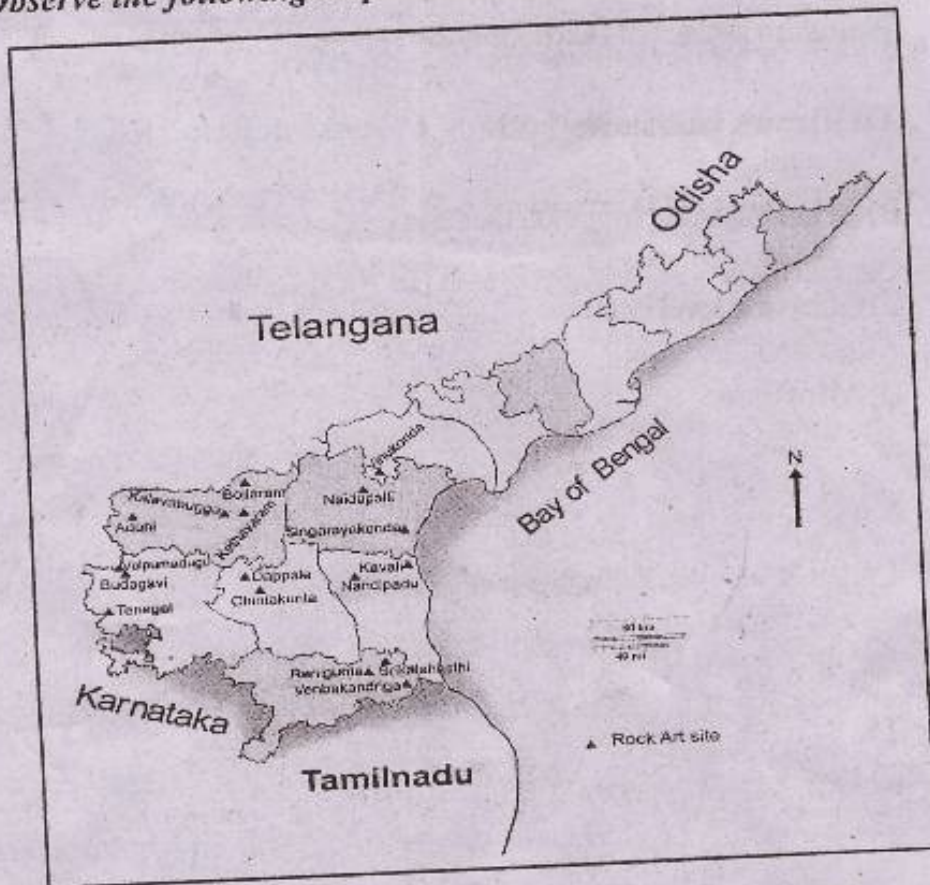
- A) East B) South C) North D) West

[Turn Over...

18. 0° Longitude is called ----- []
 A) Equator
 B) Tropic of cancer
 C) International standard Meridian
 D) Greenwich line
19. Which project constructed across Krishna River []
 A) Polavaram B) Gandhi Sagar
 C) Nagarjuna Sagar D) Sriram Sagar
20. 180° East, west longitude is called ----- []
 A) International line
 B) International week line
 C) International month line
 D) International date line
21. Longest latitude is ----- []
 A) 0° latitude B) $23\frac{1}{2}^{\circ}$ N latitude
 C) $66\frac{1}{2}^{\circ}$ S latitude D) 90° N latitude
22. How many land forms are there? []
 A) 3 B) 4 C) 5 D) 6
23. Deltas are in the shape of ----- []
 A)  B)  C)  D) 
24. The scientist who studied about tribal people living in North Eastern states. []
 A) Darwin B) Mekanjee
 C) Furer Haimendorf D) Karl Marx

- 25. Tribes mostly live in ----- []
A) Mountains B) Hills C) Forests D) Plains
- 26. Ghana Empire that is North of Magadha kingdom is --- []
A) Vajji B) Khamboja
C) Matsya D) Asmaka
- 27. Who was not a ruler of Magadha []
A) Akbar B) Ajatasatru
C) Bimbisara D) Mahapadmananda
- 28. "Bhrtukas" means ----- []
A) Rich men B) Poor men
C) Work men D) Wise men
- 29. How much tax collected by kings during Mahajanapadas? []
A) $\frac{1}{4}$ B) $\frac{1}{5}$ C) $\frac{1}{6}$ D) $\frac{1}{3}$

Observe the following map and answer the question 30 & 31



[Turn Over...

30. Identify the district where Srikalahasthi rock Art site located []
- A) Vijayanagaram B) Krishna
C) Chittoor D) Kurnool
31. Which Rock Art Site is not located in Kurnool district []
- A) Singarayakonda B) Kethavaram
C) Kalavabugga D) Bollaram
32. Birth place of Krishna River is ----- []
- A) Mahabaleswaram B) Nasik
C) Kailasa sikharam D) Gangothri
33. 'Plains are houses of fields' because ----- []
- A) Of having high fertility lands
B) Of having better irrigation facilities
C) Of having level lands
D) All of these

