

SUMMATIVE ASSESSMENT - I - 2016 - 2017

SOCIAL STUDIES

(English Version)

PART - A & B

VI Class]

(Max.Marks: 80)

[Time: 2:45 Hrs.

Marks : 60

Part - A

Instructions :

1. 15 minutes are allotted to read the question paper and 2.30 Hrs. for writing answering.
2. Part - A must be answered in a separate answer sheet.
3. Students can take along the Part - A Question paper with them.
4. Map and Part - B (bit paper) should be tied to the answer sheet and handover to the invigilator.

Section - I**Note:** 1) Answer all the questions.

2) Each question carries 2 marks.

4X2=8

1. What kind of changes are taking place in Penamakuru village ?
2. Why do you think the earliest people did not wear cotton and woollen clothes ?
3. If the 'panch' did injustice what alternatives tribes have ?
4. 1) What are the two main longitudes ?
2) What is the other name of Greenwich line ?

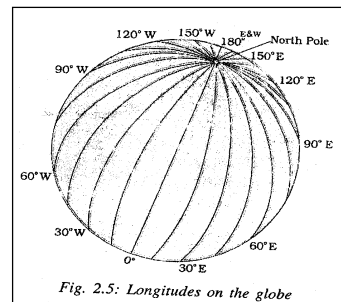


Fig. 2.5: Longitudes on the globe

Section - II**Note:** 1) Answer all the questions.

2) Each question carries 4 marks.

5X4=20

5. List three ways in which the present lives of farmers and herders are different from that of the Neolithic people ?

SET - II

6. Write a story about a slave of Jahapati who travelled from the village to city of Pataliputra with his master ?
7. What are the uses of sketch map ?
8. What do you mean by Gana ? How were they different from the kingdoms ruled by kings ?
9. Prepare a list of domesticated animals and agricultural products of earliest people and write a few lines about each of them ?

Section - III

Note: 1) Answer all the questions. There is internal choice for each question.

2) Each question carries 8 marks.

4x8=32

10. Can you point out the difference between the way villages are managed today and in the time of Mahajanapadas ?

(OR)

Why do plains like the Krishna delta have a very dense settlement ?

11. The early people drew pictures of animals and hunting scenes on the walls of many caves and rock shelters. Different colour stones were ground and mixed with animal fat. Pictures were then painted on rocks with bamboo brushes. Perhaps drawing pictures like these had some religious importance for them.

Read the above para and comment on it.

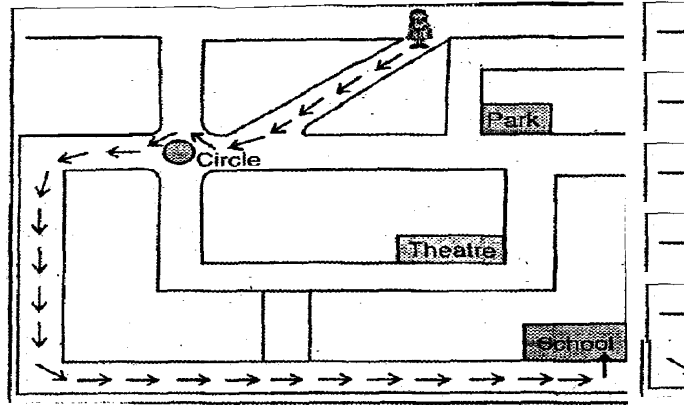
(OR)

In most of the villages there were craft persons like blacksmiths who made tools necessary for agriculture (like ploughshares, sickles, axes, arrows etc), potters who made pots for cooking and storing grains ; carpenters who made carts, ploughs, furniture etc., and weavers who wove cloth for the villagers. Probably the grihapatis gave them grains in return for their products. These products were necessary for agriculture, but the grihapatis may not have had the time or skill to make them.

Read the above para and comment on it.

SET - II

12. Observe the following picture and answer the given questions.



- Questions:**
1. How can Ramani go to her school ?
 2. In which direction of the circle is the theatre ?
 3. In which direction of the park is the circle ?
 4. In which direction of the school is the park ?

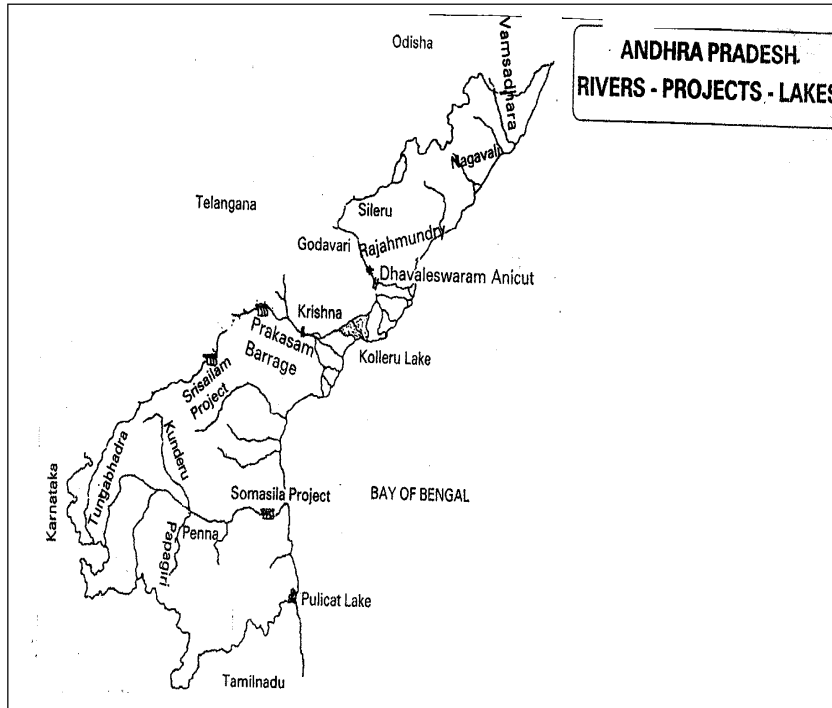
(OR)

Archaeologists believe that around five thousand years ago, hunters of these areas began to rear cattle. The cattle were pegged in special places where a lot of cow dung was accumulated and dried. They were probably set fire on festival days causing the ashmounds. Such ashmounds are found in Kurnool, Mahaboobnagar and Ananthapuram Districts. Along with cow dung ash, neolithic stone axes, stone blades and rudimentary hand made pots were also found. After a few thousand years many of these people also started cultivating crops and settling down in villages.

Read above the para and answer the questions.

1. How many years ago hunters began to rear cattle ?
2. How do they set up fire on festival days ?
3. In which districts do we find ashmounds ?
4. Along with cow dung ash Archaeologists have also found ?

13. Observe the following map and answer the questions.



- Questions:**
1. Name the two main cities from where the two deltas begin ?
 2. Find out the names of atleast two rivers that join the Krishna ?
 3. There are two dams on the river Krishna, find out their location ?
 4. There is dam on the Godavari river. Find out.

(OR)

Locate the following in the World map.

- | | | |
|---------------------|-----------------|-----------|
| 1. Pacific Ocean | 2. India | 3. Africa |
| 4. The Indian Ocean | 5. Australia | 6. Europe |
| 7. Asia | 8. Arctic Ocean | |



SUMMATIVE ASSESSMENT - I - 2016 - 2017**SOCIAL STUDIES****(English Version)****PART - B****VI Class]****(Marks : 20)****Name of the Student : Roll No:.....**

| Academic Standard | A.S-I | A.S-II | A.S- III | A.S - IV | A.S-V | A.S- VI | Total |
|---------------------|-------|--------|----------|----------|-------|---------|-------|
| Question Numbers | | | | | | | 33 |
| Max, Marks Allotted | 32 | 8 | 12 | 8 | 16 | 4 | 80 |
| Marks obtained | | | | | | | |
| Grade | | | | | | | |

Instructions : 1. Choose the correct answer and write its letter in the brackets.**2. Each question carries 1 mark.****20x1=20**

14. Columbus stopped at the ----- Island near America. []
A) Caribbean B) Phillippines C) Andaman D) Java
15. Prakasam barrage was constructed in the year. []
A) 1845 B) 1850 C) 1851 D) 1853
16. Humpedoxen found in ----- cave. []
A) Eddulavalagundu B) Ajanta
C) Rock D) Nandipadu
17. The village Headman drive their authority from the village ----- []
A) God B) Panch C) Women D) Patla
18. Modern Districts of Patna and Gaya were in ----- []
A) Magadha B) Kosala C) Vajji D) Malla

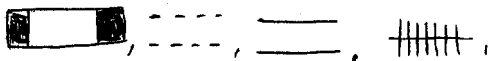
SET - II

19. The common symbols which will be used in the maps are called []
A) Land marks B) Coventional symbols
C) Pictures D) Directions
20. The crop extensively grown in Krishna District. []
A) Wheat B) Red gram C) Paddy D) Chillies
21. Jana is a word from. []
A) Greek B) Persian C) Urdu D) Sanskrit
22. In Andhra Pradesh, we have these tribes. []
A) Chenchus B) Kondareddys
C) Gonds, Koyas D) All
23. The lands with very Gentle slopes are called ---- []
A) Plateau B) Plain C) Hills D) Peaks
24. The other name of Kuru was ----- []
A) Puru B) Avanthi C) Kanipili D) Odissa
25. Seshachalam Hills are in this Districts. []
A) Y.S.R. Kadapa B) Kurnool
C) Ananthapur D) Chittoor
26. ----- Continent is covered with ice. []
A) Arctic B) Antarctic C) Europe D) Asia
27. Belum caves are in ----- District. []
A) Kurnool B) Prakasam C) Guntur D) Nellore
28. ----- Represent the gond society as a whole. []
A) Panch B) Patla C) Tribe D) None

SET - II

29. 180° East / West longitude is also called as []

- A) Equator
- B) International date line
- C) Greenwich line
- D) Indian standard time

30.  The correct order of these symbols. []

- A) Pucca Road, Metre gauge Railway, Kutcha road, Broad gauge Railway
- B) Broad gauge Railway, kutcha road, pucca road, meter gauge Railway
- C) Broad gauge railway, kutcha road, meter gauge Railway, pucca road
- D) Kutcha road, pucca road, Broad gauge Railway, meter gauge Railway

31. Who is this Anthropologist []

- A) Furer Haimendorf
- B) Sarat Chandra Roy
- C) M.N. Srinivas
- D) Panchananmitra



32. The Tribals worshipped. []

- A) Plants and animals
- B) The gods
- C) The Universal intelligence
- D) Self

33. Who implemented 'Swacha Bharat' in India. []

- A) Venkayyanaidu
- B) Nara Chandra Badu Naidu
- C) K. Chandrasekhar Rao
- D) Narendra Modi



