

**SARVA SHIKSHA A BHIYAN - ANDHRAPRADESH
SUMMATIVE ASSESSMENT - I - 2016 - 2017
3rd Class - ENGLISH**

Name of the Student :

Time : 2 ½ Hrs.

Roll Number :

Marks : 50

	Oral		Written				Total
Academic Standards	Listening & Responding	Reading Comprehension	Convention of writing	Vocabulary	Grammar	Creative expression	
Task No	I	II	III	IV	V	VI	
Marks Allotted	5	5	5	10	5	20	50
Marks Obtained							
Grade							

I. Listening & Responding :- Marks should be allotted on the basis of class room interaction with the students 5

II. Reading Comprehension :- Read the following passage and answer the following questions. 5

Mohan was a tailor. He had a wife and two small children. He lived in a village. He had his tailoring shop in a town. He went daily to the town by train.

- Mohan was a _____ ()
a) Barber b) Tailor c) Teacher
- He lived in a _____ ()
a) Town b) City c) Village
- Mohan had _____ ()
a) a wife and two small children b) Two wives and a children
c) Two wives and two children
- Mohan had his tailoring shop in a _____ ()
a) City b) Village c) Town
- He went daily to the town by _____ ()
a) Bus b) Train c) Cycle

[Turn Over

III. **Convention of writing :-** Rewrite the following lines, using Capital Letters and punctuation marks wherever necessary. $2\frac{1}{2} \times 2 = 5$

- 6) Ram said to his friend will you come to the ground and play cricket with us.

- 7) Syam replied i will not come now. i will come in the evening.

IV. **Vocabulary :-** 8) Write the opposite words for the following words.

$1 \times 5 = 5$

WORD	OPPOSITE
------	----------

Rich	_____
------	-------

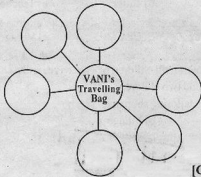
Young	_____
-------	-------

Healthy	_____
---------	-------

Happy	_____
-------	-------

Able	_____
------	-------

- 9) Write the names of things that VANI took with her when she was travelling to her Grand father. $1 \times 5 = 5$



[Cont on 3rd page ...

Grammar :-

- 10) Observe the following pictures and fill in the blanks with suitable words given below. 1 x 5 = 5

Eg:- The cat is passing through the hole.



a) The cat is _____ the table.




b) The boy is riding his bicycle _____ the road



c) The Aeroplane is flying _____ the clouds.



d) The cat is running _____ the pipe



e) The cat is _____ the cot.




[Turn Over

VI Creative expression : (20 Marks)

- 11) Draw the picture of a 'RAT' and write about it.
- $2\frac{1}{2} \times 2 = 5$

a) It's name is _____

b) It's colour is _____



- 12) Write the names of some vehicles.

 $1 \times 5 = 5$

a) _____

b) _____

c) _____

d) _____

e) _____

- 13) You met your old friend after a long time. What would be the conversation between you and your friend.

"Your name is : Tej/ your friend name is Raj".

 $1 \times 5 = 5$

Tej :- Hai, Raj.

Raj :- Hai, Tej.

Tej :- How are you?

Raj :- _____

Tej :- How is your parents?

Raj :- _____

Tej :- Which class are you studying now?

Raj :- _____

- 14) Rail Raja describes himself as follows.

 $1 \times 5 = 5$

I am a train. I have an engine. I have many wheels. I have many bogies. I carry people and their things to their places.

Now imagine you are another vehicle. Write about yourself.

