

TOTAL PAGES :10

KENDRIYA VIDYALAYA AFS, BAGDOGRA

PERIODIC TEST -1, 2019-20

SUBJECT: EVS **CLASS:** IV

TIME: 90 MINUTES **MAX. MARKS:** 50

INSTRUCTIONS:

1. All questions are compulsory.
2. Write the answer in the space provided in the booklet itself.

NAME: _____ SEC: _____ ROLL NO: _____

INVIGILATOR'S SIGN: _____ MARKS OBTAINED: _____

EXAMINER'S SIGN: _____

OBSERVATION





Q1. Observe the pictures and write :


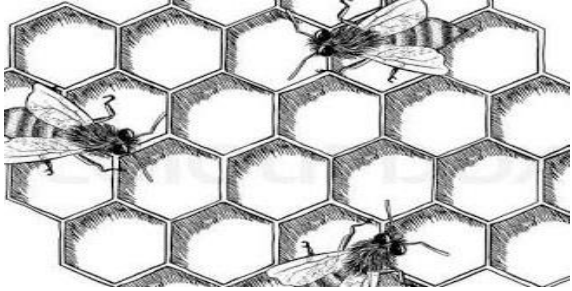


a)




© Can Stock Photo - csp36435080

1M

b)	 <hr data-bbox="981 481 1396 486"/>	1M
c)	 <hr data-bbox="1045 817 1428 822"/>	1M
d)	 <hr data-bbox="909 1321 1364 1326"/>	1M
e)	 <hr data-bbox="981 1848 1340 1852"/>	1M

<p>f)</p>	 <p>_____</p>	<p>1M</p>
<p>g)</p>	 <p>_____</p>	<p>1M</p>
<p>h)</p>	 <p>_____</p>	<p>1M</p>
<p>i)</p>	 <p>_____</p>	<p>1M</p> <p>1 M</p>

<p>j</p>	 <p>_____</p>	<p>1M</p>
<p>Q 2.</p>	<p>Write two sentences about the kejadi tree ?</p> <p>_____</p> <p>_____</p> <p>_____</p>	<p>2 M</p>
<p>Q 3</p>	<p>Write the uses of honey?</p> <p>_____</p> <p>_____</p> <p>_____</p>	<p>2 M</p>
<p><u>IDENTIFICATION</u></p>		<p>25M</p>
<p>Q 1.</p> <p>a</p> <p>b</p> <p>c</p> <p>d</p>	<p>Choose the correct answer to fill in the blanks.</p> <p>_____people can sit easily in a trolley.(five/ fifteen)</p> <p>_____has ears on top of his head (Rabbit/ cow)</p> <p>_____elephants live in a herd.(10-14 females and babys/12-15 females and males)</p> <p>Group of lion is called _____(pride/ swarm)</p>	<p>1M</p> <p>1 M</p> <p>1M</p> <p>1M</p>

Q 2.	Write two lines about about Jugad . ? _____ _____ _____	2M
Q 3.	Write any four animals which are given berth to babies ? _____ _____ _____	2 M
Q 4. Ans	Define these people:- a) Coolie- _____ _____ b) Ticket vendor- _____ _____	2 M
Q 5. Ans	Which material are used to make a cement bridge? _____ _____ _____	2 M
Q 6.	Write the full form of "TTE" and "PNR"	2 M

	<u>DISCOVERY OF FACTS</u>	
Q1	Write true or false :	
a	Anita lived in a Bochaha village. _____(True/False)	1M
b	In kerala people speak in telegu _____(True / False).	1M
c	Mudgaon is in Goa _____(True / False)	1M
d	Honey bees lay their eggs October to November. _____(True/False)	1M
Q 2	OBSERVE THE FOLLOWING TICKET AND FIND OUT THE FOLLOWING DETAILS FROM IT:- .	
Ans		2 M

शुभ यात्रा **HAPPY JOURNEY**

1 पी एन आर नं. PNR NO.	2 गाड़ी नं. TRAIN NO.	तिथि DATE	कि.मी. K.M	वयस्क ADULT	बच्चे CHILD	टिकट नं. TICKET NO.
245-1212158	12926	26-10-2013	448	2	0	374284437

RESERVATION SLIP (INVALID WITHOUT ORIGINAL PRS-MAS)

4 वाता अमृतसर जं. नयी दिल्ली AMRITSAR JN NEW DELHI	परिचम एक्सप्रेस तक आरक्षित / RESV. UP TO 478
--	---

कोच COACH	सीट/बर्थ SEAT/BERTH	लिंग SEX	आयु AGE	यात्रा प्राधिकार T.AUTHORITY	रिवायत CONC	आ.शु. R.FEE	श.प्र. S.CH.	सु.प्र. SF.CH	वाउचर रू. VOUCH. Rs.	कु. नकद रू. T.CASH Rs.
5 A2	19 LB	M	21	SEC 996332		100	4			110
A2	20 LB	M	22	SEC 996332						

7 110
 Rs. ONE ONE ZERO ONLY
 VALID WITH ORIGINAL ID

8 PASCHIM EXPRESS BRD AMRITSAR JN **9** SCH DEP 26-10 08:10 ARR 26-10 16:25

478 14-09-2013 16:58 SBCK 5 VIA JUC -UMB -FNP

जननी शिशु सुरक्षा कार्यक्रम
Janani Shishu Suraksha Karyakram

Developed by IEC Division
 Ministry of Health & Family Welfare,
 Government of India

निःशुल्क सुविधायें
 गर्भवती माता एवं नवजात शिशु (30 दिन की उम्र तक) के लिए
Free Services For Pregnant Mother & Newborn Baby (Upto 30 Days)
 (अधिक जानकारी के लिए पीछे देखिए)

- A. TRAIN NO. _____
- B. PNR NO. _____
- C. DATE OF DEPARTURE: _____
- D. DESTINATION: _____

Q 2
Ans

TWO REASONS WHY NUMBER OF TIGERS ARE GOING DOWN IN INDIA.

2 M

Q 3	Write two sentences about the group of elephants ? <hr/> <hr/> <hr/> <hr/>	2 M
Q 5 A b c d e	Show the following places on map Kerala Assam Gujarat Goa Tamilnadu	5 M

