

KENDRIYA VIDYALAYA AFS, BAGDOGRA
PERIODIC TEST, 2018-19

SUBJECT:	EVS		CLASS:	V
TIME:	90 MIN.		MAX. MARKS:	50

INSTRUCTIONS:


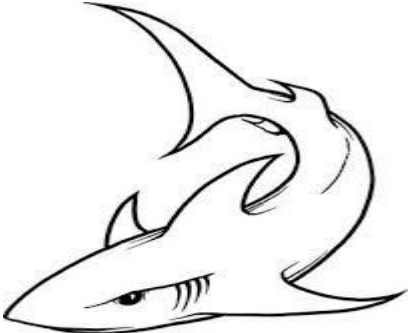
- 1. All questions are compulsory.**
- 2. Write the answer in the space provided in the booklet itself.**




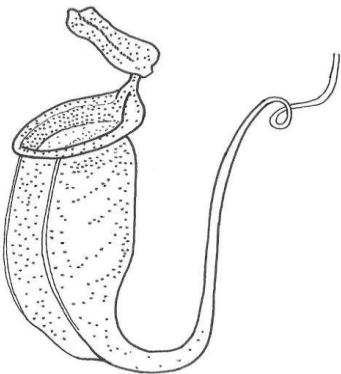

NAME: _____ SEC: _____ ROLL NO: _____

INVIGILATOR'S SIGN: _____ MARKS OBTAINED: _____

EXAMINER'S SIGN: _____

OBSERVATION

1.	Observe the pictures and answer the following questions:	
a)	What is the name of the animal seen in the picture? _____ 	1M
b)	Name the animal. _____ 	1M

<p>c)</p>	<p>What do you see in this picture?</p> <p>_____</p>		<p>1M</p>
<p>d)</p>	<p>What these people are called?</p> <p>_____</p>		<p>1M</p>
<p>e)</p>	<p>What do you see in this picture?</p> <p>_____</p>		<p>1M</p>
<p>f)</p>	<p>Which plant is this?</p> <p>_____</p>		<p>1M</p>
<p>g)</p>	<p>What is given to the girl for instant energy?</p> <p>_____</p>		<p>1M</p>

3.	<p>Write the name of any two preservation methods. Write the name of any one thing preserved using these methods.</p> <hr/> <hr/> <hr/>	2 M
4.	<p>In what ways do human beings make use of the special sense of smell of dogs?</p> <hr/> <hr/> <hr/> <hr/> <hr/> <hr/>	2M
5.	<p>Like snake charmers, which other people depend on animals for their livelihood? Write any four.</p> <hr/> <hr/>	2M
6.	<p>What do you mean by balanced diet?</p> <hr/> <hr/> <hr/>	2M
7.	<p>What do you mean by endangered animals? Write name of any one endangered animal.</p> <hr/> <hr/> <hr/>	2M

8. Look at the water bill and answer the questions.

दिल्ली जल बोर्ड दिल्ली सरकार		जल से ही जीवन, स्वास्थ्य, विकास। पाणी 100% उपभोग, 0% बिकल्प		बिल की तारीख	24/01/2009 - 29/07/2009
पानी का बिल				बिल नम्बर	153460
मुहताब की अधिम तिथि				02/09/2009	19/09/2009
SHRI SATYAPRAKASH 5183, BALBEER NAGAR SHAHDARA DELHI					
घर	उप क्षेत्र कोड	सब अकाउंट नम्बर	बिल नम्बर	सब प्रकार की बिल	
5/NE-1	A-5	30638	2/2009	DOMESTIC-A	150 (A) ⁰⁰
बिल नम्बर	से बिल (K No.)				
227/	1121247147				
बिल नम्बर	बिल नम्बर	बिल नम्बर	बिल नम्बर	बिल नम्बर	बिल नम्बर
1766	29/07/2009	O. K.	15	6	
1616	29/01/2009	O. K.			
150	READING				
अकाउंट नम्बर - यह नम्बर हर बिल पर बिल की तारीख का पुरानत बिल के बिल से - (i) 5% अकाउंट नम्बर (ii) हर बिल के अकाउंट नम्बर बिल के बिल से					बिल नम्बर (+) (+) बिल नम्बर (-) (-)
अधिकतम मूल्य / महीना					618.00
					31.00
					649.00
बिल नम्बर (कृपया ध्यान दें) 08/04/2009					जल से जीवन है पूरा पूरा कोन्सी है इसे बचाए। (दिल्ली जल बोर्ड) दिल्ली (दिल्ली) भारत

a From which office has this bill come?



b In whose name is the bill?

c What is the total amount of the bill?

d Write the address on which the bill is dispatched?

e What is the last date for bill payment?

DISCOVERY OF FACTS

Q 1 Ans	Name two things that are needed to make Mamidi tandra. _____	1M								
Q 2 Ans	Write name of any two animals that are used to carry load. _____	1M								
Q 3 Ans	What is there inside a seed? _____	1 M								
Q 4 Ans	Name any two seeds that are used as spices. _____	1 M								
Q 5	Observe the picture and write for how many hours a day that animal sleeps. <div style="display: flex; justify-content: space-around; align-items: center;"> <div style="text-align: center;">  Cow _____ </div> <div style="text-align: center;">  Python _____ </div> </div>	1M								
Q 6	What is serum? _____ _____	1 M								
Q 7 Ans	Given below are some food items and some simple methods by which these could be kept fresh for 1-2 days. Match the correct pairs: <table border="1" style="width: 100%; border-collapse: collapse;"> <thead> <tr> <th style="width: 50%; text-align: center;">Food items</th> <th style="width: 50%; text-align: center;">Methods</th> </tr> </thead> <tbody> <tr> <td>Milk</td> <td>Put in a bowl and keep the bowl in a container with some water</td> </tr> <tr> <td>Onion</td> <td>Wrap in a damp cloth</td> </tr> <tr> <td>Cooked Rice</td> <td>Keep it in a dry open place.</td> </tr> </tbody> </table>	Food items	Methods	Milk	Put in a bowl and keep the bowl in a container with some water	Onion	Wrap in a damp cloth	Cooked Rice	Keep it in a dry open place.	2 M
Food items	Methods									
Milk	Put in a bowl and keep the bowl in a container with some water									
Onion	Wrap in a damp cloth									
Cooked Rice	Keep it in a dry open place.									

	<table border="1"><tr><td>Green Coriander (Dhania)</td><td>Boil it.</td></tr></table>	Green Coriander (Dhania)	Boil it.	
Green Coriander (Dhania)	Boil it.			
Q 8	Make a list of the different ways by which seeds are spread. Write any four. _____ _____	2 M		
Q 9 Ans	In which season do food gets spoiled quickly and why? _____ _____ _____	2 M		

Q 10

Show the following places on map

5M

a Madhya Pradesh

b Andhra Pradesh

c State in which Ranthambore national park is situated

d Gujrat

e State in which Kaziranga national park is situated

